

Principles of Microeconomics

Principles of Microeconomics

Emma Hutchinson and OpenStax

Maxwell Nicholson, Ben Lukenchuk, Timothy Taylor

NOVA SCOTIA COMMUNITY COLLEGE
NOVA SCOTIA CANADA



Principles of Microeconomics Copyright © 2017 by University of Victoria and OpenStax is licensed under a Creative Commons Attribution 4.0 International License, except where otherwise noted.

Unless otherwise noted, *Principles of Microeconomics* is © 2016 by OpenStax and is licensed under a Creative Commons Attribution 4.0 International License, except for the following changes and additions, which are © 2017 by the University of Victoria and are licensed under a Creative Commons Attribution 4.0 International License.

You are free to use or modify (adapt) any of this material providing the terms of the Creative Commons licenses are adhered to.

The following changes have been made to this book:

- Development of 8 course-specific topics in length
- Over 200 multiple choice questions integrated into the textbook
- Added Examples throughout the book
- Added 8 Case studies that include around 10 questions each with worked solutions. These cases focus on a specific news story, such as Brexit, De Beers, SulphurDioxide cap and trade programs and more. (These can be used separately from the book easily)
- Over 200 figures that can be edited through Pages' software

Under this license, any user of this textbook or the textbook contents herein must provide proper attribution as follows:

- **The original OpenStax textbook can be downloaded for free at <http://cnx.org/contents/69619d2b-68f0-44b0-b074-a9b2bf90b2c6@11.330>**
- **This University of Victoria adaptation can be accessed online and downloaded for free at <https://pressbooks.bccampus.ca/uvicecon103/>**

Contents

Topic 1: Introductory Concepts and Models

Introduction to Microeconomics	2
1.1 What Is Economics, and Why Is It Important?	4
1.2 Opportunity Costs & Sunk Costs	10
1.3 Marginal Analysis	21
Case Study - Beer or Cancer?	25
Solutions: Case Study - Beer or Cancer?	28
Topic 1 Multiple Choice Questions	32
Topic 1 Solutions	36
Topic 1 References	37

Topic 2: Specialization and Trade

Introduction to Specialization & Trade	39
2.2 Production Possibility Frontier	42
2.3 Trade	51
Case Study - Brexit	63
Solutions: Case Study - Brexit	68
Topic 2 Multiple Choice Questions	74
Topic 2 Solutions	81
Topic 2 References	82

Topic 3: Supply, Demand, and Equilibrium

Introduction to Supply and Demand	84
3.1 The Competitive Market Model	88
3.2 Building Demand and Consumer Surplus	90
3.3 Other Determinants of Demand	103
3.4 Building Supply and Producer Surplus	118
3.5 Other Determinants of Supply	130
3.6 Equilibrium and Market Surplus	139
Case Study - The Housing Market	164
Solutions: Case Study - The Housing Market	171

Topic 3 Multiple Choice Questions	176
Topic 3 Solutions	203
Topic 3 References	207
 Topic 4 Part 1: Elasticity	
4.1 Calculating Elasticity	209
4.2 Elasticity and Revenue	221
4.3 Relative Elasticity	229
 Topic 6: Consumer Theory	
Introduction to Consumer Choices	239
6.1 The Budget Line	243
6.2 The Indifference Curve	252
6.3 Understanding Consumer Theory	261
6.4 Building Demand	276
Case Study - The Liberal Gas Tax	278
Solutions: Case Study - The Liberal Gas Tax	282
Topic 6 Solutions	290
Topic 6 References	291
 Topic 5: Externalities	
Introduction to Environmental Protection and Negative Externalities	293
5.1 Externalities	296
5.2 Indirectly Correcting Externalities	308
5.3 Directly Targeting Pollution	313
Case Study - Sulphur Dioxide	326
Solutions: Case Study - Sulphur Dioxide	330
Topic 5 Solutions	338
Topic 5 References	340
 Topic 4 Part 2: Applications of Supply and Demand	
4.4 Introduction to Government Policy	342
4.5 Price Controls	344
4.6 Quantity Controls	356
4.7 Taxes and Subsidies	360

4.8 Elasticity and Policy	376
Maxwell Nicholson	
4.9 Tariffs	383
Case Study - Automation in Fast Food	393
Solutions: Case Study - Automation in Fast Food	399
Topic 4 Multiple Choice Questions	407
Topic 4 Solutions	427
Topic 4 References	430
 Topic 7: Producer Theory	
Introduction to Cost and Industry Structure	432
7.1 Building Producer Theory	436
7.2 Understanding Producer Theory	449
7.3 Producer Theory in the Long Run	460
7.4 The Structure of Costs in the Long Run	470
Solution: Case Study - Oil Markets	479
Topic 7 Solutions	485
Topic 7 References	487
 Topic 8: Imperfect Competition	
Introduction to Imperfect Competition	489
8.1 Monopoly	493
8.2 Fixing Monopoly	505
8.3 Why Monopolies Persist	510
8.4 Monopolistic Competition	516
Case Study - Diamond's Demise	530
Solutions: Diamond's Demise	536
Topic 8 Solutions	543
Topic 8 References	544
 Appendix C: Versioning History	545

Topic 1: Introductory Concepts and Models

Introduction to Microeconomics

Topic 1: Introductory Concepts & Models

Learning Objectives

In this Topic, you will learn about:

- What Is Economics, and Why Is It Important?
- Microeconomics and Macroeconomics
- How Economists Use Theories and Models to Understand Economic Issues
- Scarcity and Trade-offs
- Opportunity and Sunk Costs
- Marginal Analysis



Figure 1. Do You Use Facebook? Economics is greatly impacted by how well information travels through society. Today, social media giants like Twitter, Facebook, and Instagram are major forces on the information super highway. (Credit: Johan Larsson/Flickr)

Decisions ... Decisions in the Social Media Age

To post or not to post? Every day we are faced with a myriad of decisions, from what to have for breakfast, to which route to take to class, to the more complex—“Should I double major and add possibly another semester of study to my education?” Our response to these choices depends on the information we have available at any given moment, information economists call “imperfect” because we rarely have all the data we need to make perfect decisions. Despite the lack of perfect information, we still make hundreds of decisions a day.

And now, we have another avenue to gather information—social media. Outlets like Facebook and Twitter are altering the process by which we make choices, how we spend our time, which movies we see, which products we buy, and more. How many of you chose a university without checking out its Facebook page or Twitter stream first for information and feedback?

As you will see in this course, what happens in economics is affected by how well and how fast information is disseminated through a society, such as how quickly information travels through Facebook. “Economists love nothing better than when deep and liquid markets operate under conditions of perfect information,” says Jessica Irvine, National Economics Editor for News Corp Australia.

This leads us to the topic of this chapter, an introduction to the world of making decisions, processing information, and understanding behavior in markets—the world of economics.

What is economics and why should you spend your time learning it? After all, there are other disciplines you could be studying, and other ways you could be spending your time. As the topic feature just mentioned, making choices is at the heart of what economists study, and your decision to take this course is as much as economic decision as anything else.

It is important to distinguish **microeconomics** from **macroeconomics**. Whereas macro studies how the aggregate economy behaves, with reference to inflation, price levels, rate of growth, national income, unemployment and more, micro focuses on individual decisions.

Economics is probably not what you think. It is not primarily about money or finance. It is not primarily about business. It is not mathematics. What is it then? It is both a subject area and a way of viewing the world.

1.1 What Is Economics, and Why Is It Important?

Learning Objectives

By the end of this section, you will be able to:

- Discuss the importance of studying economics
- Explain the relationship between production and division of labor
- Evaluate the significance of scarcity

At its core, Economics is the study of how humans make decisions in the face of scarcity. These can be individual decisions, family decisions, business decisions or societal decisions. If you look around carefully, you will see that scarcity is a fact of life. **Scarcity** means that human wants for goods, services and resources exceed what is available. Resources, such as labor, tools, land, and raw materials are necessary to produce the goods and services we want but they exist in limited supply. Of course, the ultimate scarce resource is time – everyone, rich or poor, has just 24 hours in the day to try to acquire the goods they want. At any point in time, there is only a finite amount of resources available.

Think about it this way: In 2016, the labor force in Canada contained 19.4 million workers, according to Statistics Canada. The total area of the Canada is 9.99 million square kilometres. These are large numbers for such crucial resources, however, they are limited. Because these resources are limited, so are the numbers of goods and services we produce with them. Combine this with the fact that human wants seem to be virtually infinite, and you can see why scarcity is a problem.



Figure 1. *Scarcity of Resources.* Homeless people are a stark reminder that scarcity of resources is real. (Credit: “daveynin”/Flickr Creative Commons)

If you still do not believe that scarcity is a problem, consider the following: Does everyone need food to eat? Does everyone need a decent place to live? Does everyone have access to healthcare? In every country in the world, there are people who are hungry, homeless, and in need of healthcare, just to focus on a few critical goods and services. Why is this the case? It is because of scarcity. Let’s delve into the concept of scarcity a little deeper, because it is crucial to understanding economics.

The Problem of Scarcity

Think about all the things you consume: food, shelter, clothing, transportation, healthcare, and entertainment. How do you acquire those items? You do not produce them yourself. You buy them. How do you afford the things you buy? You work for a wage. Or if you do not, someone else does on your behalf. Yet most of us never have enough to buy all the things we want. This is because of scarcity. So how do we solve the problem of scarcity?

Every society, at every level, must make choices about how to use its resources. Families must decide whether to spend their money on a new car or a vacation. Towns must choose whether to put more of the budget into police and fire protection or into the school system. Nations must decide whether to devote more funds to national defence or to protecting the environment. In most cases, there just isn’t enough money in the budget to do everything. So why do we not each just produce all of the things we consume? The simple answer is most of us do not know how, but that is not the main reason. Think back to pioneer days, when individuals knew how to do many more practical tasks than we do today, from building their homes, to growing crops, to hunting for food, or repairing their equipment. Most of us do not know how to do all—or any—of those things. It is not because we could not learn. Rather, we do not have to. The reason why is something called *the division and specialization of labor*, a production innovation first put forth by **Adam Smith** in his book, *The Wealth of Nations* (See Figure 2).




Figure 2. Adam Smith. Adam Smith introduced the idea of dividing labor into discrete tasks. (Credit: Wikimedia Commons)

The Division of and Specialization of Labour

The formal study of economics began when Adam Smith (1723–1790) published his famous book *The Wealth of Nations* in 1776. Many authors had written on economics in the centuries before Smith, but he was the first to address the subject in a comprehensive way. In the first chapter, Smith introduces the **division of labor**, which means that the way a good or service is produced is divided into a number of tasks that are performed by different workers, instead of all the tasks being done by the same person.

To illustrate the division of labour, Smith counted how many tasks went into making a pin: drawing out a piece of wire, cutting it to the right length, straightening it, putting a head on one end and a point on the other, and packaging pins for sale, to name just a few. Smith counted 18 distinct tasks that were often done by different people—all for a pin!

Modern businesses divide tasks as well. Even a relatively simple business like a restaurant divides up the task of serving meals into a range of jobs like top chef, sous chefs, kitchen help, servers to wait on the tables, a greeter at the door, janitors to clean up, and a business manager to handle paychecks and bills—not to mention the economic connections a restaurant has with suppliers of food, furniture, kitchen equipment, and the building where it is located. A complex business like a large manufacturing factory, such as the shoe factory shown in Figure 3 can have hundreds of job classifications.



Figure 3. *Division of Labor.* Workers on an assembly line are an example of the divisions of labor. (Credit: Nina Hale/Flickr Creative Commons)

Why the Division of Labour Increases Production

When the tasks involved with producing a good or service are divided and subdivided, workers and businesses can produce a greater quantity of output. In his observations of pin factories, Smith observed that one worker alone might make 20 pins in a day, but that a small business of 10 workers (some of whom would need to do two or three of the 18 tasks involved with pin-making), could make 48,000 pins in a day. How can a group of workers, each specializing in certain tasks, produce so much more than the same number of workers who try to produce the entire good or service by themselves? Smith offered three reasons.

First, **specialization** in a particular small job allows workers to focus on the parts of the production process where they have an advantage. (In later topics, we will develop this idea by discussing **comparative advantage**.) People have different skills, talents, and interests, so they will be better at some jobs than at others. The particular advantages may be based on educational choices, which are in turn shaped by interests and talents. Only those with medical degrees qualify to become doctors, for instance. For some goods, specialization will be affected by geography—it is easier to be a wheat farmer in Saskatchewan than in British Columbia, but easier to run a tourist hotel in BC than in Saskatchewan. If you live in or near a big city, it is easier to attract enough customers to operate a successful dry cleaning business or movie theater than if you live in a sparsely populated rural area. Whatever the reason, if people specialize in the production of what they do best, they will be more productive than if they produce a combination of things, some of which they are good at and some of which they are not.

Second, workers who specialize in certain tasks often learn to produce more quickly and with higher quality. This pattern holds true for many workers, including assembly line labourers who build cars, stylists who cut hair, and doctors who perform heart surgery. In fact, specialized workers often know their jobs well enough to suggest innovative ways to do their work faster and better.

Third, specialization allows businesses to take advantage of **economies of scale**, which means that for many goods, as the level of production increases, the average cost of producing each individual unit

declines. For example, if a factory produces only 100 cars per year, each car will be quite expensive to make on average. However, if a factory produces 50,000 cars each year, then it can set up an assembly line with huge machines and workers performing specialized tasks, and the average cost of production per car will be lower. The ultimate result of workers who can focus on their preferences and talents, learn to do their specialized jobs better, and work in larger organizations is that society as a whole can produce and consume far more than if each person tried to produce all of their own goods and services. The division and specialization of labor has been a force against the problem of scarcity.

Trade and Markets

However, specialization only makes sense if workers can use the pay they receive for doing their jobs to purchase the other goods and services that they need. In short, specialization requires trade.

You do not have to know anything about electronics or sound systems to play music—you just buy a phone, download the music and listen. You do not have to know anything about artificial fibers or the construction of sewing machines to wear a jacket—you just buy the jacket and wear it. You do not need to know anything about internal combustion engines to operate a car—you just get in and drive. Instead of trying to acquire all the knowledge and skills involved in producing all of the goods and services that you wish to consume, the market allows you to learn a specialized set of skills and then use the pay you receive to buy the goods and services you need or want. This is how our modern society has evolved into a strong economy.

Why Study Economics?

Now that we have an overview of what economics studies, let's quickly discuss why you are right to study it. Economics is not primarily a collection of facts to be memorized, though there are plenty of important concepts to be learned. Instead, economics is better thought of as a collection of questions to be answered or puzzles to be worked out. Most important, economics provides the tools to work out those puzzles. If you have yet to be bitten by the economics "bug," here are some other reasons why you should study economics:

- Virtually every major problem facing the world today, from global warming, to world poverty, to the conflicts in Syria, Afghanistan, and Somalia, has an economic dimension. If you are going to be part of solving those problems, you need to be able to understand them. Economics is crucial.
- It is hard to overstate the importance of economics to good citizenship. You need to be able to vote intelligently on budgets, regulations, and laws in general.
- A basic understanding of economics makes you a well-rounded thinker. When you read articles about economic issues, you will understand and be able to evaluate the writer's argument. When you hear classmates, co-workers, or political candidates talking about economics, you will be able to distinguish between common sense and nonsense. You will find new ways of thinking about current events and about personal and business decisions, as well as current events and politics.

The study of economics does not dictate the answers, but it can illuminate the different choices.

Summary

Economics seeks to understand and address the problem of scarcity, which is when human wants for goods and services exceed the available supply. A modern economy displays a division of labor, in which people earn income by specializing in what they produce and then use that income to purchase the products they need or want. The division of labor allows individuals and firms to specialize and to produce more for several reasons: a) It allows the agents to focus on areas of advantage due to natural factors and skill levels; b) It encourages the agents to learn and invent; c) It allows agents to take advantage of economies of scale. Division and specialization of labor only work when individuals can purchase what they do not produce in markets. Learning about economics helps you understand the major problems facing the world today, prepares you to be a good citizen, and helps you become a well-rounded thinker.

Glossary

Division of Labour

the way in which the work required to produce a good or service is divided into tasks performed by different workers

Economics

the study of how humans make choices under conditions of scarcity

Economies of Scale

when the average cost of producing each individual unit declines as total output increases

Scarcity

when human wants for goods and services exceed the available supply

Specialization

when workers or firms focus on particular tasks for which they are well-suited within the overall production process

1.2 Opportunity Costs & Sunk Costs


Learning Objectives

By the end of this section, you will be able to:

- Understand the three step process for making binary decisions
- Calculate the opportunity cost of an action
- Understand how sunk costs influence our decision making

Economics looks at how rational individuals make decisions. An important part of being a rational decision maker is considering opportunity costs. In our introductory section we identified the concept of scarcity. Normally we are quite good at considering scarcity when it comes to resources and money. What we are less good at considering is scarcity of time.

Consider the following image that shows the number of weeks an average human lives. Sometimes it kind of feels like our lives are made up of a countless number of weeks. But there they are—fully countable—staring you in the face. This isn't meant to scare you, but rather to emphasize that a rational consumer doesn't ignore time, but incorporates it into the analysis of any decision they make.



So how do you ‘spend’ your time? In economics, we want to place a value on each different opportunity we have so we can compare them.

What if your friends were to ask you if you want to go out to the club? How much do you value it? As economists, we want to measure the happiness you will get from this experience by finding your maximum **willingness to pay**. Let’s say that for a 5 hour night at the club, the MOST you are willing to pay is \$100. Seem high? If you have gone clubbing, this is likely close to what you paid for it.

Suppose the costs of going clubbing are \$50 (\$15 cover, \$20 for drinks and \$15 for a ride home). With that analysis it seems like you should go, but so far we have only considered the **explicit costs** of the experience. An explicit cost represents a clear direct payment of cash (whether actual cash or from debit, credit, etc). But what about our time? We must consider time as another cost of the action.

How do we measure time? Simple – what else could we be doing with that time? Assume you also work as a server at the campus pub, where you get paid \$15 an hour (including tips). This makes it easy to put a dollar amount on your time. For 5 hours of clubbing, you are forgoing the opportunity to earn \$75 ($\15×5). This is your **implicit cost** for clubbing, or the cost that has been incurred but does not result in a direct payment.

It is important to note that the implicit costs are the benefit of the next best option. There are an infinite number of things we could be doing with our time, from watching a movie to studying economics, but for implicit costs we only consider the next best. If we took them all into account our costs would be infinite.

Consider the two options side by side.

	Clubbing	Working
Willingness to Pay/Total Benefit	<div>- \$100</div>	<div>- \$75</div>
Explicit Costs	<div>\$50</div>	<div>\$0</div>
Total 'Happiness'	<div>\$50</div>	<div>\$75</div>

Table 1.2a

This shows us something interesting. Even though we are willing to pay \$100 to go out clubbing, our 'happiness' from working is greater. A rational consumer would chose to work. The \$75 we could be earning from working is equal to our implicit costs of going out since, rather than going clubbing, we could be making money for the 5 hours. To truly consider costs we must always consider our **opportunity costs** which include the implicit and explicit costs of an action.

↓
We have decided to choose this option
(even though it is irrational)

	Clubbing	Working
Willingness to Pay/Total Benefit	\$100	\$75
Explicit Costs	\$50	\$0
Total 'Happiness'	\$50	\$75

Opportunity Costs = \$125

Table 1.2b

In this example if you were to go clubbing opportunity costs are:

Explicit Costs (cover, drinks and ride home) : \$50

Implicit Costs (forgone income from 5 hours) : \$75

Opportunity Costs : \$125

Should you go clubbing? You are only willing to pay \$100, and your opportunity costs are \$125 so no!

Does this mean you should never go out? Not at all. You just may be surprised that your willingness to pay may be well over \$100.

How to measure 'Happiness'

In our previous analysis we refer to the concept of "Total Happiness." The problem is, happiness is not an easy value to measure. Daniel Bernoulli, an economist, first introduced the concept of **utility** as a means of measuring happiness. Classical economists will often assume that utilities can be measured as a hard number. In reality, it is much harder to measure the happiness a consumer receives from a good. Often, we will use the measurement of how much a consumer is *willing to pay*, but even this information can be difficult to assess. For the remainder of Topic 1, we will refer to happiness as something that can be measured, recognizing that this is rarely as easy as it will appear here.

Scarcity

This consideration of opportunity cost is rooted in an understanding that all resources are scarce. The first image paints a compelling picture of the scarcity of time, and our financial resources are also scarce. Being a rational decision maker means considering the scarcity of all resources associated with an action. As decision makers, we have to make **trade-offs** on what we do with finite resources.

This leads us to a fairly simple conclusion. We should do something if the benefits outweigh the costs. The key insight is that the *costs* we are referring to are *opportunity costs*, which consider the next best alternative use of our resources.

Making Decisions

We have now looked at how to analyze two options, but how do we make the decision? We can lay the process out in three steps:

1. Find your willingness to pay (or wage you would earn) from the option you are considering and the next best alternative
2. Subtract the explicit costs from each option to find your happiness
3. Choose the option with that makes you happier

If we want to change this into the process for a binary decision (yes or no):

1. Add up all the benefits of an action
2. Subtract all costs explicit and implicit
3. If $\text{benefits} > \text{costs}$, this is the right choice

It is important to note that not all decisions are binary.

Sunk Costs

Just as it is important to understand the costs that should be considered in decision making, it is important to understand what costs should not. Consider the two options you may have when you wake up – do you work out or sleep in? Have you ever convinced yourself to get out of bed by reminding yourself that you paid \$60 for your monthly gym membership? Well, you fell victim to a common logical fallacy.

A **sunk cost** is a cost that no matter what is unrecoverable. As such it should have no impact on future decision making. This may sound strange, but consider the your two options using the analysis learned above for making decisions.

This option provides more happiness



	Work-out	Sleep-In
Willingness to Pay/Total Benefit	\$20	\$30
Explicit Costs	\$0	\$0
Total 'Happiness'	\$20	\$30

Following our steps we find the maximum willingness to pay for each option, subtract the explicit costs, and compare the happiness from each. It does not matter that we spend \$60 on a gym membership because no matter what we do we can't get that money back. With this willingness to pay reflected in the table, the better option is to Sleep-In, with an opportunity cost of \$20.

Notice that the \$60 is not included as an explicit costs because it is not an additional cost we have to incur as a result of working out. Since we have already paid the \$60, it is no longer something we consider.

Why Buy a Gym Membership?



(Credit: "Scott Webb"/Unsplash Creative Commons)

Why would one ever buy a gym membership? Well in this case, it might be a bad idea. The 'willingness to pay' represents how badly someone might want to go to the gym. If you knew that every morning you would wake up and value sleeping more than working out, then a gym pass might not be for you.

If that was the case you would need to find a way to increase your willingness to go to the gym, for example, if you committed to a work out plan with a friend, the social cost of sleeping in may be high, incentivizing you to get out of bed.

The important lesson here is to be mindful of your future motivation when you are incurring a sunk cost.

Sunk Costs & Business

Sunk costs aren't exclusive to gym memberships, in fact, the sunk cost fallacy is common in big business and government. Ever heard the expression "we've invested too much in this project to back out now?" Even if you have not, it sounds fairly logical – unfortunately it is not.

Consider a mining company that has invested \$5 million in the infrastructure of a mine. After new information, they learn of another, richer mine site that they can mine for \$4 million, with projected revenues of \$8 million. The current mine site will cost \$1 million to extract the remaining resources (\$4 million projected revenue). What should the company do?

Sunk Costs



	Continue Mining	Mine in New Site
Investment in Project to Date	\$5 million	-
Projected Revenues	\$4 million	\$8 million
Explicit Costs	\$1 million	\$4 million
Total Profits	\$3 million	\$4 million

As shown the total profits from the new site are higher, so despite the fact they have invested \$5 million in the old site, they should abandon it and mine the new. The conclusion:

Sunk costs are irrelevant for decision making.

Want to know how you can avoid the sunk cost fallacy in your decision making? [Read more here.](#)

Glossary

Explicit Costs

the direct cost of an action, usually involves a cash transaction or a physical transfer of resources.

Implicit Costs

the indirect cost of an action, includes the cost of forgoing the next best option

Opportunity Cost

all costs associated with an action, both explicit and implicit

Sunk Costs

costs that have been paid that cannot be recovered

Trade-Offs

a sacrifice of resources (time, money etc.) to achieve a certain benefit

Willingness to Pay

the maximum amount of resources a consumer is willing to lose to achieve a certain benefit

Exercises 1.2

1. Which of the following statements about opportunity cost is TRUE?

- I. Opportunity cost is equal to implicit costs plus explicit costs.
 - II. Opportunity cost only measures direct monetary costs.
 - III. Opportunity cost accounts for alternative uses of resources such as time and money.
- a) I, II and III.
 - b) I
 - c) III only.
 - d) I and III only.

2. Which of the following statements about opportunity costs is TRUE?

- I. The opportunity cost of a given action is equal to the value foregone of all feasible alternative actions.
 - II. Opportunity costs only measure direct out of pocket expenditures.
 - III. To calculate accurately the opportunity cost of an action we need to first identify the next best alternative to that action.
- a) III only.
 - b) I and III only.
 - c) II only.
 - d) None of the statements is true.

3. Suppose that you are deciding between seeing a movie and going to a concert on a particular Saturday evening. You are willing to pay \$20 to see the movie and the movie ticket costs \$5. You are willing to pay \$80 for the concert and the concert ticket costs \$50. The opportunity cost of going to the movie is:

- a) \$5.
- b) \$30.
- c) \$35.
- d) \$65.

4. Suppose that you are willing to pay \$20 to see a movie on Saturday night. A ticket costs \$10, and the next-best alternative use of your time would be to go to dinner with a friend. The cost of the dinner is \$20 and you value the experience of having dinner with your friend at \$60. The opportunity cost of seeing the movie is equal to:

- a) \$50.
- b) \$30.
- c) \$20.
- d) \$10.

5. Suppose that you are willing to pay \$50 to see a movie on Saturday night. A ticket costs \$15, and the next-best alternative use of your time would be to go to a concert which costs \$80 and you value at \$100. The opportunity cost of seeing the movie is equal to:

- a) \$15.
- b) \$20.
- c) \$35.
- d) \$70.

6. Suppose you play a round of golf costing \$75. The golf takes four hours to play. If you were not playing golf you could be working and earning \$40 per hour. The opportunity cost of your golf game is:

- a) \$75.
- b) \$235.
- c) \$155.
- d) \$160.

7. Suppose you have bought and paid for a ticket to see Lady Gaga in concert. You were willing to pay up to \$200 for this ticket, but it only cost you \$110. On the day of the concert, a friend offers you a free ticket to the opera instead. Assuming that it is impossible to resell the Lady Gaga ticket, what is the minimum value you would have to place on a night at the opera, in order for you to choose the opera over Lady Gaga?

- a) \$200.
- b) \$110.
- c) \$90.
- d) \$0.

8. Suppose that you are willing to pay \$350 to see Leonard Cohen play at the Save-On-Foods Arena. Tickets cost \$100, and the next-best alternative use of your time would be to work in paid employment earning \$50 over the evening. The opportunity cost of seeing Leonard Cohen is equal to:

- a) \$50.
- b) \$100.
- c) \$150.
- d) \$200.

9. I am considering loaning my brother \$10,000 for one year. He has agreed to pay 10% interest on the loan. If I don't loan my brother the \$10,000, it will stay in my bank account for the year, where it will earn 2% interest. What is the opportunity cost to me of the loan to my brother?

- a) \$200.
- b) \$800.

- c) \$1,000.
- d) \$1,200.

10. In January, in an attempt to commit to getting fit, I signed a year-long, binding contract at a local gym, agreeing to pay \$40 per month in membership fees. I also spent \$300 on extremely stylish gym clothes. This morning, I was trying to decide whether or not to actually go to the gym. Which of the following was relevant to this decision?

- a) The \$40 that I paid the gym this month.
- b) The \$300 I spent on gym clothes.
- c) The fact that I also had to write a 103 midterm exam today.
- d) All of the above were relevant.

11. Suppose you have bought and paid for a ticket to see Kanye in concert. You were willing to pay up to \$350 for this ticket, but it only cost you \$100. On the day of the concert, a friend offers you a free ticket to Lady Gaga instead. You can resell your Kanye ticket for \$80. What do your sunk costs equal?

- a) \$0.
- b) \$20.
- c) \$80.
- d) \$100.

12. Which of the following statements about sunk costs is FALSE?

- I. Sunk costs are those that cannot be recovered, no matter what future action is taken.
- II. Because sunk costs cannot be recovered, they are irrelevant for future decision-making.
- III. The presence of sunk costs can affect future decision-making, if they are large enough.

- a) II and III only.
- b) II only.
- c) III only.
- d) I and III only.

13. As a member of UVic's University Club, I pay \$30 per month in membership fees. In a typical month I spend about \$50 on beer at the Club. Every month I also have the option of attending a meeting of the whiskey club (open only to Club members), at a cost per meeting of \$15, payable at the beginning of each meeting. Given this, what do my monthly SUNK COSTS equal?

- a) \$15.
- b) \$30.
- c) \$45.
- d) \$95.

1.3 Marginal Analysis

Learning Objectives

By the end of this section, you will be able to:

- Use marginal analysis to determine the right quantity of an action
- Calculate marginal net benefit of an additional unit of activity

“Economics is the painful elaboration of the obvious” – Anonymous.

That quote might seem quite relevant when the biggest conclusion of our last section was that you should do something if the benefits outweigh the costs. While sometimes economics can seem obvious, it is important to first understand how a rational consumer should behave before seeing how we fail to meet that standard.

Marginal Analysis

In the last section we showed how to make a binary decision, but not all decisions fit that category. Many are ‘how much’ decisions. For example, if you have decided to go clubbing, how many drinks do you buy? This is a decision where we use **marginal analysis**. Marginal analysis is the process of breaking down a decision into a series of ‘yes or no’ decisions. More formally, it is an examination of the additional benefits of an activity compared to the additional costs incurred by that same activity.

To make a decision using marginal analysis, we need to know the willingness to pay for each level of the activity. As mentioned, this is also known as the **marginal benefit** from an action.

To decide how many drinks to buy, you have to make a series of yes or no decisions on whether to buy an additional drink. In Table 1.3a the marginal benefit is diminishing. This means that you are willing to pay more for the 1st drink than the next. Your friends are all drinking, so you are likely willing to pay quite a lot for your 1st drink. By the 4th, you may feel as though you do not need another.

So how many drinks will you buy if the cost is \$7? To make this decision, we must use marginal analysis for each level. This means comparing our marginal benefit with **marginal cost** of an additional unit of activity. In this case marginal cost is just equal to \$7.

	Marginal Benefit (WTP)	Marginal Cost = \$7
1st Drink	\$20	
2nd Drink	\$12	
3rd Drink	\$6	
4th Drink	\$2	

For the 1st Drink: $MB = \$20 > MC = \7 , you should buy the drink.

For the 2nd Drink: $MB = \$12 > MC = \7 , you should buy the drink.

For the 3rd Drink: $MB = \$6 < MC = \7 , you should not buy the drink.

With this simple process we can easily see that you will buy 2 drinks, unless there is a price change.

Net Benefit

What is our net benefit from the actions, or how much ‘happiness’ have we gained? To calculate, all we have to do is add up our benefits and subtract our costs.

$$\text{Total Benefit} = \$20 + \$12 = \$32$$

$$\text{Total Cost} = \$7 + \$7 = \$14$$

$$\text{Net Benefit} = \$32 - \$14 = \underline{\$18}$$

It is important to recognize that our act of marginal analysis has maximized this benefit. Consider what would happen if we purchased 3 drinks.

$$\text{Total Benefit} = \$20 + \$12 + \$6 = \$38$$

$$\text{Total Cost} = \$7 + \$7 + \$7 = \$21$$

$$\text{Net Benefit} = \$38 - \$21 = \underline{\$17}$$

Note that although total benefit is more than it was previously, net benefit is lower. Looking closer we can see that net benefit fell because our total costs rose ($\$14 \rightarrow \21) by more than our total benefits ($\$32 \rightarrow \38). As a quick rule:

When total benefits rise more than total costs, then the action is logical.

When total costs rise more than total benefits, then the action is illogical.

This is why we look at the **marginal net benefit** of a decision, rather than the total. It is as though all the previous actions are ‘sunk’. We can calculate the marginal net benefit of a decision by subtracting marginal cost from marginal benefit. Marginal net benefit of the first drink is \$13 ($\$20 - \7), the 2nd is \$5 ($\$12 - \7), and the third is -\$1 ($\$6 - \7). As long as the marginal net benefit is positive, we should increase our activity!

Summary

Marginal analysis is an essential concept for everything we learn in economics, because it lies at the core of why we make decisions. We have just scratched the surface of it now, but will go more in depth in Topic 3. For now, we will turn our attention to a slightly different topic – trade.

Glossary

Marginal Analysis *The examination of the additional benefits of an activity compared to the additional costs incurred by that same activity*

Marginal Benefit

The additional satisfaction one gains from an additional unit of an activity

Marginal Cost

The additional costs from an additional unit of an activity

Marginal Net Benefit

The difference between the marginal benefits and marginal costs of an action

Exercises 1.3

- According to marginal analysis, optimal decision-making involves:
 - Taking actions whenever the marginal benefit is positive.
 - Taking actions only if the marginal cost is zero.
 - Taking actions whenever the marginal benefit exceeds the marginal cost.
 - All of the above.
- Jane’s marginal benefit per day from drinking coke is given in the table below. This shows that she values the first coke she drinks at \$1.20, the second at \$1.15, and so on.
If the price of coke is \$1.00, the optimal number of cokes that Jane should drink is:

Marginal benefit	Cokes
\$1.20	1
\$1.15	2
\$0.95	3
\$0.60	4

- a) 1.
- b) 2.
- c) 3.
- d) 4.

Case Study - Beer or Cancer?

Note that the Economics 103 Case Studies are meant to supplement the course material by giving you experience applying Economic concepts to real world examples. While they are beyond the level you will be tested on, they are useful for students who want a stronger grasp of the concepts and their applications.



Credit: University of Victoria

Interesting things have been happening in the chemistry labs of UVic. Professor Fraser Hof and Philips Brewery chemist Euan Thomson have been collaborating to revolutionize the craft brewing process.

The project was inspired by a very different invention from Hof's lab—the only one of its kind. “We created a tool for profiling the proteins in cancer cells,” said Hof. “And I realized that it could also be used to profile the proteins in brewer's yeast.”



Read more about the beer chemistry collaboration.

In Topic 1 we talked about the opportunity costs of an action. Let's explore how opportunity costs might impact decisions on what to research.

Assume that the government provides \$50,000/year for the department to conduct cancer research, and the costs of operating the research lab is \$30,000. Philips offers \$70,000/year to do beer research, but researching beer would increase costs by \$5,000.

- 1. What is the opportunity cost of conducting cancer research? Break this into implicit and explicit costs.**
- 2. What option will the department choose? What are the opportunity costs of this choice?**
- 3. What is the total economic profits from this choice?**
- 4. If the cancer lab was offered \$30,000 to shut down what would be the opportunity cost?**
- 5. What is the minimum amount the government would have to provide for the department to conduct cancer research?**
- 6. Why must the government pay the lab more money for the same work as before? What does this show us about how opportunities effect compensation?**

Academic pursuits often have high private opportunity costs – its why professors are so well paid. If they're paid too little, the brightest PhDs will turn to industry instead of academia and universities will suffer. In order to attract experts from industry, the university needs to have the resources to compensate them.



Read more about professor compensation.

Consider an Economics prof who could be making \$80,000 in the private sector, and a Business prof that could be making \$100,000. Assume the individuals value the added prestige and benefits from being a prof at \$20,000.

7. All else equal, how much will you have to pay each professor to entice them to teach?

In this case study we have shown how microeconomic concepts of opportunity costs can be used to understand current events and practical examples. Do you have an example you think would make a good case study? Contact economics103@uvic.ca to propose your story.

Solutions: Case Study - Beer or Cancer?

1. What is the opportunity cost of conducting cancer research? Break this into implicit and explicit costs.

We are given the information that the government provides \$50,000/year for the department to conduct cancer research, and the costs of operating the research lab is \$30,000. Philips offers \$70,000/year to do beer research, but researching beer would increase costs by \$5,000.

The best way to find our cost breakdown is to put this information into a table, where we can make a side by side comparison of the two options. In the cancer research column, we have a total revenue of \$50,000 from government funding, minus explicit operating costs of \$30,000. This leaves us with accounting profits of \$20,000.

Likewise, in the beer research column, we have total revenue of \$70,000 from Philips, minus \$30,000 + \$5,000, or \$35,000 in explicit operating costs. This leaves us with accounting profits of \$35,000.

↓ Looking from the perspective of this option.

	Cancer Research	Beer Research
Total Revenue	\$50,000	\$70,000
Explicit Costs	\$30,000	\$35,000
Accounting Profits	\$20,000	+\$35,000

Opportunity Costs = \$65,000

Since we are looking at the opportunity costs of cancer research, we don't have to worry yet about which option the department will choose. Since we know opportunity cost is explicit + implicit costs, all we need is the implicit cost of the next best option. In this case, when we conduct cancer research we forgo \$35,000 of profits. This means:

Explicit Costs (lab operating costs): \$30,000


Implicit Costs (forgone profits from Philips): \$35,000

Opportunity Costs (Implicit + Explicit): \$65,000

2. What option will the department choose? What are the opportunity costs of this choice?

Since we have already calculated the accounting profits and know that Cancer research gives \$20,000 of profits, whereas beer provides \$35,000, we know that the department will choose beer research.

Department will choose beer research
because accounting profits are higher



	Cancer Research	Beer Research
Total Revenue	\$50,000	\$70,000
Explicit Costs	\$30,000	\$35,000
Accounting Profits	\$20,000	\$35,000

Opportunity Costs = \$55,000

Note: In the original image, red circles highlight the \$20,000 and \$35,000 values in the Accounting Profits row, with a red plus sign between them. A red arrow points from the \$35,000 value to the Opportunity Costs text below.

Finding opportunity costs is the same process as before, except now our explicit costs are the operating costs of the beer lab, and our implicit costs are the forgone profits from cancer research.

Explicit Costs (lab operating costs): \$35,000

Implicit Costs (forgone profits from Cancer research): \$20,000

Opportunity Costs (Implicit + Explicit): \$55,000

3. What is the total economic profits from this choice?

Economic profits are the difference between total revenue and all the costs of an action, implicit and explicit. With a total revenue of \$70,000 from Philips, our economic profits are equal to \$70,000 minus our previously calculated opportunity costs. Since $\$70,000 - \$55,000 = \$15,000$, our economic profits from beer research are \$15,000.

4. If the cancer lab was offered \$30,000 to shut down what would be the opportunity cost?

If the department was offered \$30,000 to shut down, this just creates another option. Remember that opportunity cost includes the implicit costs of the next best alternative. This means we must determine whether it is better for the lab to shut down, or to work with Philips.

↓
Looking from the perspective of this option.

	Cancer Research	Beer Research	Shut Down
Total Revenue	\$50,000	\$70,000	\$30,000
Explicit Costs	\$30,000	\$35,000	\$0
Accounting Profits	\$20,000	\$35,000	\$30,000

Opportunity Costs = \$65,000

We know that the accounting profits from a partnership with Philips are equal to \$35,000. Since shutting down has no explicit costs, the accounting profits are only \$30,000. This means that partnering with Philips is still our next best alternative. Opportunity costs will therefore be the same as in question 1 and equal to \$65,000.

5. What is the minimum amount the government would have to provide for the department to conduct cancer research?

If the government wants the department to continue to conduct cancer research, they have to pay them enough so that the accounting profits of either types of research are the same. Working backwards, we know that beer research provides \$35,000 in accounting profits. This means that

Total Revenue from Cancer Research – \$30,000 must equal \$35,000 to ensure that the department is indifferent. To cover the explicit (\$30,000) and implicit (\$35,000) costs of cancer research, the government would have to pay \$65,000 (an additional \$15,000 to the original \$50,000).

6. Why must the government pay the lab more money for the same work as before? What does this show us about how opportunities effect compensation?

The answer to question 5 gives us an interesting insight about how opportunity costs can affect compensation. Whereas before the department may have been content accepting \$50,000 in funding, now, knowing they can earn more elsewhere, will require more. This can result in funding being increased with no change to the actual quality of work.

7. All else equal, how much will you have to pay each professor to entice them to teach?

With the information given, we are told that an Economics prof could be making \$80,000 in the private sector, and a business prof that could be making \$100,000. Like in question 5, we know that to entice

them to academia, the accounting profits must be equal. We also know that academia comes with an added prestige factor of \$20,000. Putting the economist in our table:

	Academia	Private Sector
Total Benefits	\$20,000 + C	\$80,000
Explicit Costs	x	x
Accounting Profits	\$20,000 + C - x	\$80,000 - x

Notice that explicit costs are denoted by 'x' to represent that, while we don't know how much they are, they are assumed to be the same. This cost would represent the cost of living associated with either job.

We know that for the economist to be indifferent, accounting profits must be equal. This means that

$$\$20,000 + C - x = \$80,000 - x$$

Solving for C we find $C = \$60,000$. This means that the economist would need to be paid \$60,000 to join academia.

Doing the same process for the business prof, we would find they would have to be paid \$80,000 to join academia. This can help explain why profs from different departments can have very different compensation. Ultimately, it depends on the job prospects they would have outside of the academic sphere.

Topic 1 Multiple Choice Questions

All the following questions are from previous exams for Economics 103. They are duplicates of the questions found in the Topic sub-sections.

Exercises 1.2

1. Which of the following statements about opportunity cost is TRUE?

- I. Opportunity cost is equal to implicit costs plus explicit costs.
- II. Opportunity cost only measures direct monetary costs.
- III. Opportunity cost accounts for alternative uses of resources such as time and money.

- a) I, II and III.
- b) I
- c) III only.
- d) I and III only.

2. Which of the following statements about opportunity costs is TRUE?

- I. The opportunity cost of a given action is equal to the value foregone of all feasible alternative actions.
- II. Opportunity costs only measure direct out of pocket expenditures.
- III. To calculate accurately the opportunity cost of an action we need to first identify the next best alternative to that action.

- a) III only.
- b) I and III only.
- c) II only.
- d) None of the statements is true.

3. Suppose that you deciding between seeing a movie and going to a concert on a particular Saturday evening. You are willing to pay \$20 to see the movie and the movie ticket costs \$5. You are willing to pay \$80 for the concert and the concert ticket costs \$50. The opportunity cost of going to the movie is:

- a) \$5.
- b) \$30.

- c) \$35.
- d) \$65.

4. Suppose that you are willing to pay \$20 to see a movie on Saturday night. A ticket costs \$10, and the next-best alternative use of your time would be to go to dinner with a friend. The cost of the dinner is \$20 and you value the experience of having dinner with your friend at \$60. The opportunity cost of seeing the movie is equal to:

- a) \$50.
- b) \$30.
- c) \$20.
- d) \$10.

5. Suppose that you are willing to pay \$50 to see a movie on Saturday night. A ticket costs \$15, and the next-best alternative use of your time would be to go to a concert which costs \$80 and you value at \$100. The opportunity cost of seeing the movie is equal to:

- a) \$15.
- b) \$20.
- c) \$35.
- d) \$70.

6. Suppose you play a round of golf costing \$75. The golf takes four hours to play. If you were not playing golf you could be working and earning \$40 per hour. The opportunity cost of your golf game is:

- a) \$75.
- b) \$235.
- c) \$155.
- d) \$160.

7. Suppose you have bought and paid for a ticket to see Lady Gaga in concert. You were willing to pay up to \$200 for this ticket, but it only cost you \$110. On the day of the concert, a friend offers you a free ticket to the opera instead. Assuming that it is impossible to resell the Lady Gaga ticket, what is the minimum value you would have to place on a night at the opera, in order for you to choose the opera over Lady Gaga?

- a) \$200.
- b) \$110.
- c) \$90.
- d) \$0.

8. Suppose that you are willing to pay \$350 to see Leonard Cohen play at the Save-On-Foods Arena. Tickets cost \$100, and the next-best alternative use of your time would be to work in paid employment earning \$50 over the evening. The opportunity cost of seeing Leonard Cohen is equal to:

- a) \$50.
- b) \$100.
- c) \$150.
- d) \$200.

9. I am considering loaning my brother \$10,000 for one year. He has agreed to pay 10% interest on the loan. If I don't loan my brother the \$10,000, it will stay in my bank account for the year, where it will earn 2% interest. What is the opportunity cost to me of the loan to my brother?

- a) \$200.
- b) \$800.
- c) \$1,000.
- d) \$1,200.

10. In January, in an attempt to commit to getting fit, I signed a year-long, binding contract at a local gym, agreeing to pay \$40 per month in membership fees. I also spent \$300 on extremely stylish gym clothes. This morning, I was trying to decide whether or not to actually go to the gym. Which of the following was relevant to this decision?

- a) The \$40 that I paid the gym this month.
- b) The \$300 I spent on gym clothes.
- c) The fact that I also had to write a 103 midterm exam today.
- d) All of the above were relevant.

11. Suppose you have bought and paid for a ticket to see Kanye in concert. You were willing to pay up to \$350 for this ticket, but it only cost you \$100. On the day of the concert, a friend offers you a free ticket to Lady Gaga instead. You can resell your Kanye ticket for \$80. What do your sunk costs equal?

- a) \$0.
- b) \$20.
- c) \$80.
- d) \$100.

12. Which of the following statements about sunk costs is FALSE?

- I. Sunk costs are those that cannot be recovered, no matter what future action is taken.
- II. Because sunk costs cannot be recovered, they are irrelevant for future decision-making.
- III. The presence of sunk costs can affect future decision-making, if they are large enough.

- a) II and III only.
- b) II only.
- c) III only.
- d) I and III only.

13. As a member of UVic's University Club, I pay \$30 per month in membership fees. In a typical month I spend about \$50 on beer at the Club. Every month I also have the option of attending a meeting of the whiskey club (open only to Club members), at a cost per meeting of \$15, payable at the beginning of each meeting. Given this, what do my monthly SUNK COSTS equal?

- a) \$15.
- b) \$30.
- c) \$45.
- d) \$95.

Exercises 1.3

1. According to marginal analysis, optimal decision-making involves:

- a) Taking actions whenever the marginal benefit is positive.
- b) Taking actions only if the marginal cost is zero.
- c) Taking actions whenever the marginal benefit exceeds the marginal cost.
- d) All of the above.

2. Jane's marginal benefit per day from drinking coke is given in the table below. This shows that she values the first coke she drinks at \$1.20, the second at \$1.15, and so on.

If the price of coke is \$1.00, the optimal number of cokes that Jane should drink is:

Marginal benefit	Cokes
\$1.20	1
\$1.15	2
\$0.95	3
\$0.60	4

- a) 1.
- b) 2.
- c) 3.
- d) 4.

Topic 1 Solutions

Solutions to Exercises 1.2

1. **D**
2. **A**
3. **C**
4. **A**
5. **C**
6. **B**
7. **A**
8. **C**
9. **A**
10. **C**
11. **B**
12. **C**
13. **B**

Solutions to Exercises 1.3

1. **C**
2. **B**

Topic 1 References

Dehaas, Josh. Macleans. “Professors pay ranked highest to lowest.” May 4, 2012. <http://www.macleans.ca/education/uniandcollege/professor-pay-ranked-from-highest-to-lowest/>

Jeevanandam, Vimala. The Ring. “Buzz builds over beer chemistry collaboration.” November 3, 2016. <https://www.uvic.ca/ring/news/research/2016+brewery-yeast-hof+ring>

Investopedia. “Utility.” <http://www.investopedia.com/terms/u/utility.asp>

Smith, Adam. *The Wealth of Nations*. March 9, 1776.

Statistics Canada. “Labour Force Characteristics.” 2016. <http://www.statcan.gc.ca/tables-tableaux/sum-som/l01/cst01/econ10-eng.htm>

Urban, Tim. Wait But Why. “Your Life in Weeks.” May 7, 2014. <http://waitbutwhy.com/2014/05/life-weeks.html>

Topic 2: Specialization and Trade

Introduction to Specialization & Trade

Topic Objectives

Topic 2: Specialization & Trade

In this topic, you will learn about:

- Economic Efficiency
- Opportunity Cost and how it influences decisions
- The Production Possibility Frontier
- Absolute and Comparative advantages

The topic will help you develop the following skills:

- Develop a sense of the normative approach used in economics
- Practice simple model building
- Understanding the benefits from trade



Figure 1. Apple or Samsung iPhone? Though the iPhone is widely recognized as an Apple product, 26% of the phone's parts are supplied by rival phone-maker, Samsung. In international trade, there are often "conflicts" like this as each party specializes on what it does best. (Credit: modification of work by Yutaka Tsutano Creative Commons)

Just Whose iPhone Is It?

The iPhone is a global product. Apple neither manufactures iPhone components nor assembles them. Actually, Foxconn Corporation, a Taiwanese company, assembles iPhones at its factory in Shenzhen, China. In addition, Samsung supplies about 26% of the parts that make up the iPhone. In short, oddly enough, Samsung is both Apple's biggest supplier and main competitor. Why do these two firms work together to produce the iPhone? To understand the economic logic behind trade, one must accept that the exchange of goods and services is done in a mutually beneficial manner. Samsung is one of the world's largest electronics parts suppliers. Samsung can make high profits focusing on making the phone's parts, while Apple concentrates on its strength—designing elegant, easy-to-use products. If each group focuses on what it does best, both parties benefit from trade.



[Click to Learn More](#)

We live in a global marketplace. The food in your kitchen might include fresh fruit from Chile, cheese from France, and bottled water from Scotland. Your wireless phone may have been manufactured in Taiwan or Korea. Your clothes are possibly designed in Italy and manufactured in China. As a worker, if your job involves farming, machinery, airplanes, cars, or scientific instruments, the odds are high that a hearty proportion of your company's sales—and hence the money that pays your salary—comes from export sales. We are all linked by international trade, which has grown dramatically in the last few decades and plays an increasingly important role in the global economy.

Recall that **Macroeconomics** is the study of how the aggregate economy behaves. Though trade can often be a **Marco** issue (examining exchange rates, interest rates, trade agreements etc.), it is fundamentally rooted in Microeconomics. **Resource allocation** is the decisions individuals, businesses, and governments make with scarce resources. In the example above, both Taiwan and China decide what amounts of phones and microchips they would each like to produce. Though this interplay between micro- and macroeconomics is complicated, there are fundamentally three resources allocation questions at the core of microeconomics:

1. What goods and services should a society produce, given its scarce resources?
2. How should the production of these goods and services take place?
3. Who should consume these goods and services?

These questions are all **normative**, meaning they are subjective and value-based as opposed to **positive**, fact-based questions. We need normative criteria to evaluate these questions – an idea that will be developed later in this chapter.

In this topic, we will focus on answering the second question “how should the production of these goods and services take place,” as we evaluate how countries can gain from trade and allocate resources most efficiently.

2.2 Production Possibility Frontier

Learning Objectives

By the end of this section, you will be able to:

- Understand how economic models work to simplify complex problems
- Define opportunity cost and apply it to daily situations
- Understand how to graph and analyze a PPF
- Explain how preferences influence our production decisions



The fires in Fort McMurray were a natural disaster that could not have been anticipated. The devastation severely impacted the economy of Alberta, not to mention the lives of many of its habitats. Although there are many unpredictable aspects to our world, economics develops a simplified framework to make analysis despite these unknowns. (Credit: DarrenRD/ Wikimedia Commons/ CC-BY-SA-4.0)

Think of all the different variables that can impact trade. A country's interest rate influences the flow of financial capital; its exchange rate encourages or discourages the purchase of goods and services. The weather can impact the production of goods, and politics can create tension between countries. Many of these examples are macro issues that will impact our micro analysis. How can we navigate such complex economic issues to make normative judgments? The answer is economic models.

An economic model is a simplified framework that is designed to illustrate complex processes. Oftentimes in introductory Microeconomics, these models seem oversimplified because they hold certain variables constant. While one should remain aware of this, these models are still useful. Holding some information constant can help us understand a concept without being overwhelmed by a vast number of influencing factors. Economic

models are the building blocks of most modern economic theory. By understanding these models, we can develop a mindset to understand the economic world.

Model of Production

An economic model is only useful when we understand its underlying assumptions. For this model, imagine the following scenario:

You are stranded on a tropical island alone. On this island, there are only two foods: pineapples and crabs. In other words, you face a trade-off: any time you spend harvesting pineapples is time that cannot be spent looking for crabs. You are forced to make a decision on how to allocate the scarce resource of time.

While this is an extreme example, it is reflective of a common problem in production. Since there are only a certain number of hours in the day, time is a scarce resource. This scarcity limits the amount of total production.

Figure 2.2a displays a table showing several different combinations of goods that can be harvested in a given week. The table is very logical – if you spend all your time catching crabs, you will have no pineapples.

Notice that you can produce either all crabs, all pineapples, or a mix of the two.

Assume you choose to only catch crabs. How many would have to be given up in order to obtain ten pineapples? In this example, only one. This is an important concept; even though our scarce resource is time, we can measure the cost of a good, in this case, pineapples, in terms of the foregone good, in this case crabs.

This concept is called the **Marginal Opportunity Cost** of an action. In this case, since you have to give up one crab to produce 10 pineapples, the marginal opportunity cost for one pineapple is 1/10 of a crab.

Output per Week (You)	
Pineapples	Crabs
0	21
+10	-1
10	20
+10	-2
20	18
+10	-4
30	14
40	8
50	0

Figure 2.2a



If you were stranded on an island with only pineapples and crabs, how much of each would you produce? Would this change depending on how difficult each one was to harvest? (Credit: Pablo Garcia Saldaña/Unsplash)

Notice how the marginal cost changes as you harvest more pineapples. To produce the next ten pineapples, it costs two crabs, and the next ten costs four. This continues until there are no more crabs to give up. While marginal opportunity cost is not always increasing, it is intuitive to think that the more pineapples you pick, the harder they will be to find, and therefore the more time you will have to give up to harvest 10 more.

Applications



Opportunity Cost At University

The concept of “Opportunity Cost” is not just applicable when you are stranded on an island; in fact, we face opportunity costs every day. Consider the opportunity cost of reading this textbook. Perhaps for the hour you spend reading, you could have made \$11 working at a restaurant, scrolled through Facebook, or spent time with friends. By continuing to read, you are forfeiting the opportunity of doing **one** of those things. One common fallacy when evaluating opportunity costs is considering all the different ways you could be spending your time. Remember, since you can only be in one place at a time, only the next best option is relevant in your decision making. In our simplified example, we limited our discussion to only two options so this fallacy did not interfere.

Production Possibility Frontier

While much useful analysis can be conducted with a chart, it is often useful to represent our models graphically. A **Production Possibility Frontier (PPF)** is the graphical representation of Figure 2.2a. It represents the maximum combination of goods that can be produced given available resources and technology. Each point represents one of the combinations from Figure 2.2a. In our example, while we would love to produce 50 pineapples and 50 crabs, this is out of our realm of possible production. In other words, it is not a point on our PPF.

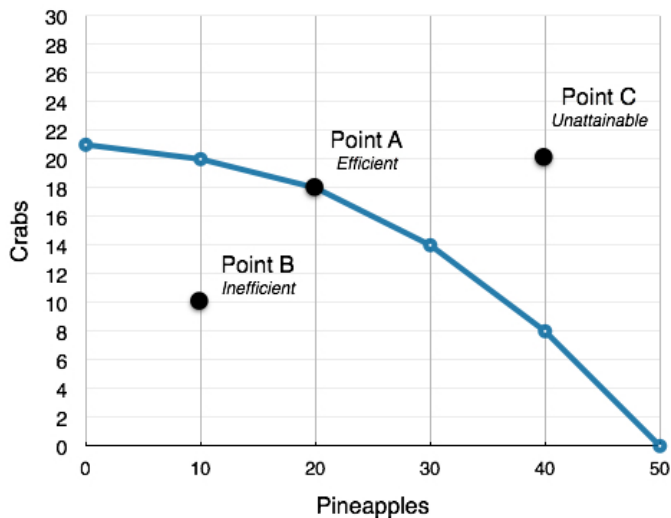


Figure 2.2b

Using our terminology from before, each point along our PPF (i.e. Point A) is **efficient** (in a one-person world) since there is no way to get more pineapples without giving up some crabs and vice-versa. There are no Pareto Improvements in the current situation.

If we are inside the PPF (i.e. Point B), we are not fully using our resources. In this case, we can produce more pineapples without having to give up any more crabs. This point is **inefficient**.

Points outside the PPF (i.e. Point C), while preferable, are **unattainable** given constraints in resources and time.

Using our analysis of Marginal Opportunity Cost (MC) from before, we see that the Slope (absolute value) of the PPF is the Marginal Cost of the good on the horizontal axis. Recall that slope is calculated using rise over run. By calculating the slope from (20,18) to (30,14), we see the MC is 4/10 of a crab for one pineapple (or 4 crabs for 10 pineapples as represented in our chart). As we move down the PPF, the slope and MC increase.

Given our scarce resources and time, we can efficiently produce any point along the PPF. Now, we face the same problem as before. How do we determine which bundle to choose? Is it better to produce 50 pineapples and 0 crabs, 21 crabs and 0 pineapples, or a mix of the two? This depends entirely on **preferences**. Perhaps you are allergic to crabs and they provide you no value, or maybe you have a desired ratio of crabs to pineapples. Since the bundles along the PPF are all efficient, we cannot pass judgment on which is best.

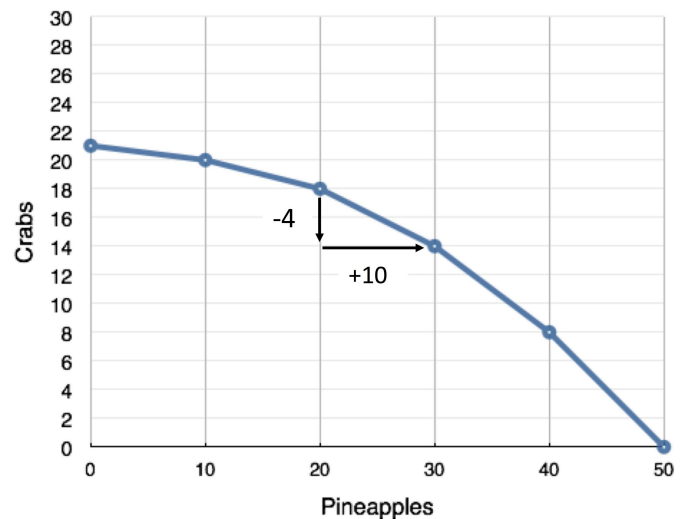


Figure 2.2c

Applications

The Island Example – Brexit



Former British Prime Minister David Cameron defending the ‘stay’ side of the Brexit debate. (Credit: World Economic Forum/ Flickr/ CC-BY-SA-2.0)

While our discussion so far has referred to a deserted island scenario, the same concepts are easily relatable to a country’s production. On a much larger scale, countries face trade-offs in production. The island situation can be likened to a country with a policy of **autarky** – a state of economic independence or self-sufficiency. The United Kingdom’s decision to leave the European Union (commonly known as Brexit) metaphorically makes it more of an island. The country will have to face more trade-offs with the goods it can produce. As we will see in the next section, trade can reduce these trade-offs and allow countries to reach points outside their PPF.



[Click to Learn More](#)

Shifting a PPF

As we will see in Topic 2.3, trade allows countries, individuals, or firms to reach points outside their PPF. In addition to trade, there are some other factors that shift a country's PPF, allowing an change in attainable output. These factors include:

- **A Shift in Technology** – If you were to invent a computer system that showed the location of crabs and pineapples on the island, you would be able to produce more of both goods, shifting the PPF outward.
- **More Education or Training** – If you were to become more skilled at harvesting pineapples or crabs, your attainable output would increase, shifting the PPF outward.
- **Natural Disaster** – If disaster strikes, and pineapples or crabs become less plentiful, your attainable output would decrease, shifting the PPF inward.

These are not the only factors that could shift the PPF, but they are the most common. What is important to recognize is that a PPF represents what is attainable, and that is subject to change.

Glossary

Autarky

A state of economic independence or self-sufficiency.

Economic Model

A simplified framework that is designed to illustrate complex processes.

Marginal Opportunity Cost

A solution that is ethically or legally just and fair, but may not be wholly satisfactory to any or all the involved parties.

Preferences

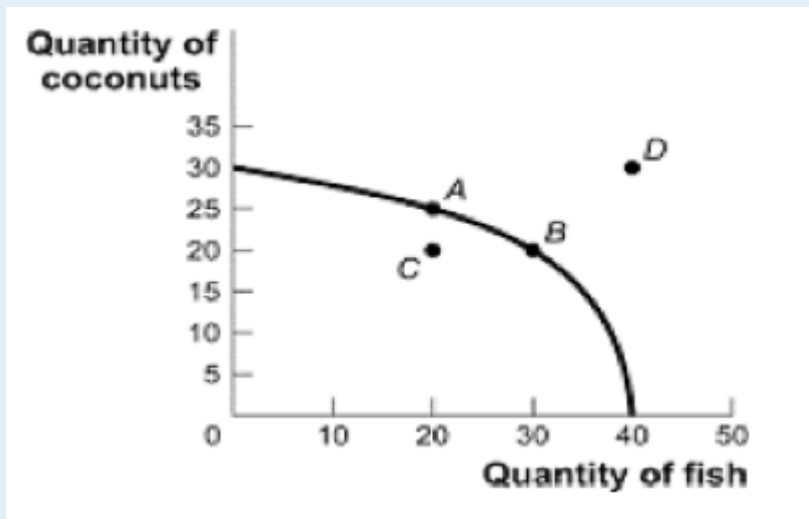
The ordering of alternatives based on their relative utility, a process which results in an optimal choice.

Production Possibilities Frontier (PPF)

A diagram that shows the productively efficient combinations of two products that an economy can produce given the resources it has available.

Exercises 2.2

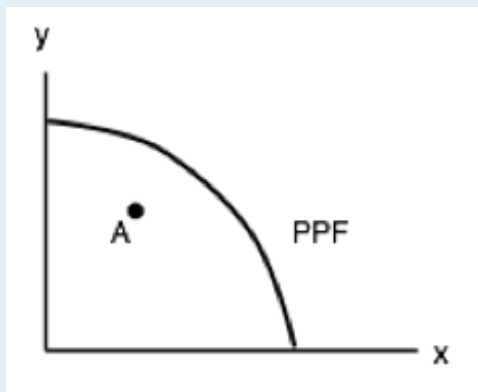
1. Consider the PPF diagram below.



Given the PPF illustrated, what is the opportunity cost of moving from B to A?

- a) 5 coconuts.
- b) 10 fish.
- c) 5/10 fish
- d) 10/5 coconuts.

The following TWO questions refer the diagram below, which illustrates the PPF for a producer of two goods, x and y.



2. Which of the following statements is TRUE?

- I. The marginal cost of producing x is higher at high levels of x than it is at low levels of x.
- II. The marginal cost of producing y is higher at high levels of y than it is at low levels of y.
- III. The marginal cost of producing both x and y is constant in the level of production.

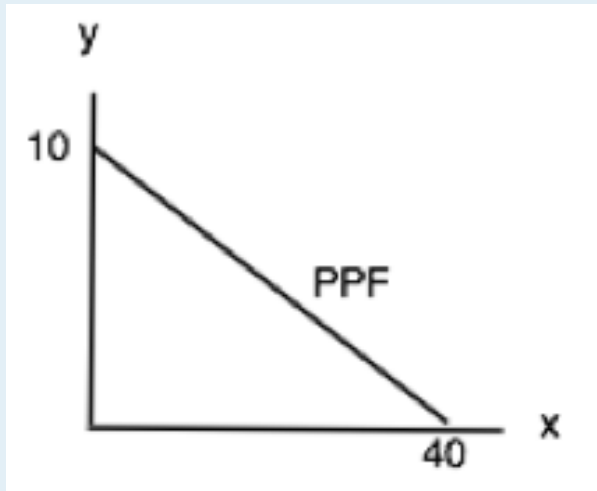
- a) I only.
- b) II only.
- c) III only.
- d) I and II only.

3. If this economy is operating at point A, which of the following statements is TRUE?

- I. The opportunity cost of producing more x is zero.
- II. The opportunity cost of producing more y is zero.
- III. Point A is inefficient.

- a) III only.
- b) I and II only.
- c) I and III only.
- d) I, II, and III.

The following TWO questions refer to the PPF diagram below.



4. What is the MARGINAL cost of producing good y?

- a) 1/4 of a unit of x.
- b) 1/4 of a unit of y.
- c) 4 units of x.
- d) 4 units of y.

5. What is the cost of producing FOUR units of good y?

- a) 16 units of x.
- b) 4 units of x.
- c) 1/4 of a unit of x.
- d) 40 units of x.

6. Consider a PPF drawn with x on the horizontal axis and y on the vertical axis. Which of the following concepts can be used to explain why this production possibility frontier could be flat at relatively lows levels of x and steep at relatively high levels of x?

- a) Increasing marginal costs.
- b) Scarcity
- c) Sunk costs.
- d) Trade

7. Which of the following concepts can be used to explain why production possibility frontiers slope downwards.

- a) Scarcity
- b) Sunk costs.
- c) Trade
- d) Increasing marginal costs.

2.3 Trade

Learning Objectives

By the end of this section, you will be able to:

- Explain the gains of trade created when a country specializes
- Define absolute advantage, comparative advantage
- Understand how to find comparative and absolute advantage from looking at a PPF



*In 1817, David Ricardo, a businessman, economist, and member of the British Parliament, wrote a treatise called *On the Principles of Political Economy and Taxation*. In this treatise, Ricardo argued that specialization and free trade benefit all trading partners, even those that may be relatively inefficient. To see what he meant, we must be able to distinguish between absolute and comparative advantage. (Credit: Wikimedia/ Public Domain)*

The American statesman Benjamin Franklin (1706–1790) once wrote: “No nation was ever ruined by trade.” Many economists would express their attitudes toward international trade in an even more positive manner.

The evidence that international trade confers overall benefits on economies is very strong. Trade has accompanied economic growth in Canada and around the world. Many economies that have shown the most rapid growth in the last few decades—for example, Japan, South Korea, China, and India—have done so by dramatically orienting their economies toward international trade. To understand the benefits of trade, or why we trade in the first place, we need to understand the concepts of comparative and absolute advantage.

Production Possibilities with Trade

In the previous section, we stated that points outside the PPF were not possible given our constraints. With trade, these constraints can change. Continuing the example from Chapter 2.2, suppose another person, Jamie, becomes stranded on the island with you. You could choose to avoid him and live your own separate lives, or you could work together to improve each other’s well-being. It turns out Jamie has different skills than you – he is better at producing both crabs and pineapples. (See Figure 2.3a)

Output per Week (You)	
Pineapples	Crabs
0	21
10	20
20	18
30	14
40	8
50	0

Output per Week (Jamie)	
Pineapples	Crabs
0	32
10	31
20	29
30	25
40	18
50	10
60	0

Figure 2.3a

In this case, where one person or group is better at producing both goods, we say they have an **Absolute Advantage** in the production of the good. In this example, Jamie has the absolute advantage in the production of both goods. This means Jamie's entire PPF lies outside of yours. (See Figure 2.3b)

Why would Jamie want to trade with you if he is better at producing both goods? We mentioned before that preferences determine where you would produce. For this example, assume that you want to produce and consume the following:

Without Trade

You: 20 pineapples and 18 crabs

Jamie: 50 pineapples and 10 crabs.

Between the two of you, you are producing 70 pineapples and 28 crabs. Is this efficient? Recall that a situation is efficient if there are no available Pareto Improvements. If we can get more pineapples and crabs without having to give anything up, then the situation is inefficient.

By simply changing both yours and Jamie's production points, we see that this is inefficient. If you were to produce 30 pineapples and 14 crabs while Jamie was to produce 40 pineapples and 18 crabs, the aggregate production would be 70 pineapples and 32 crabs – four more crabs than before! It is now clear that the previous situation was inefficient. You can trade 10 of your pineapples for 6 crabs, which leaves the following allotment of resources:

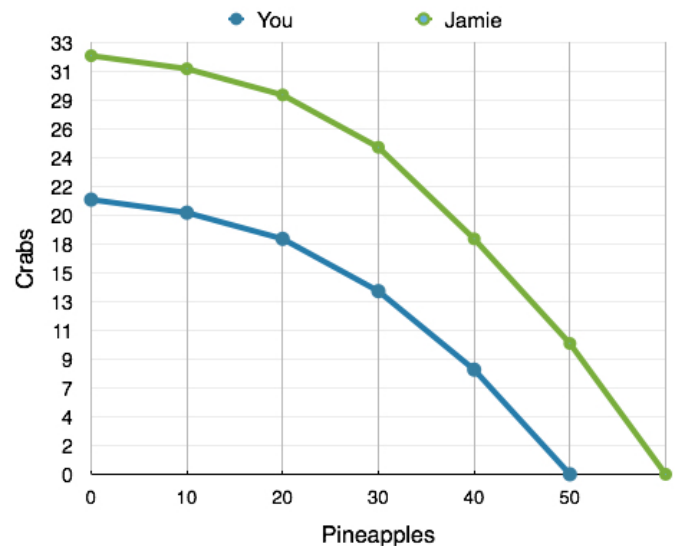


Figure 2.3b

With Trade

You: 20 pineapples and 20 crabs

Jamie: 50 pineapples and 12 crabs

Each of you walks away with two more crabs than before. This is what we mean when we talk about **gains from trade**. Both you and Jamie are now able to produce at a point outside your PPF's. To understand where these extra crabs come from, we must first explore the concept of comparative advantage.

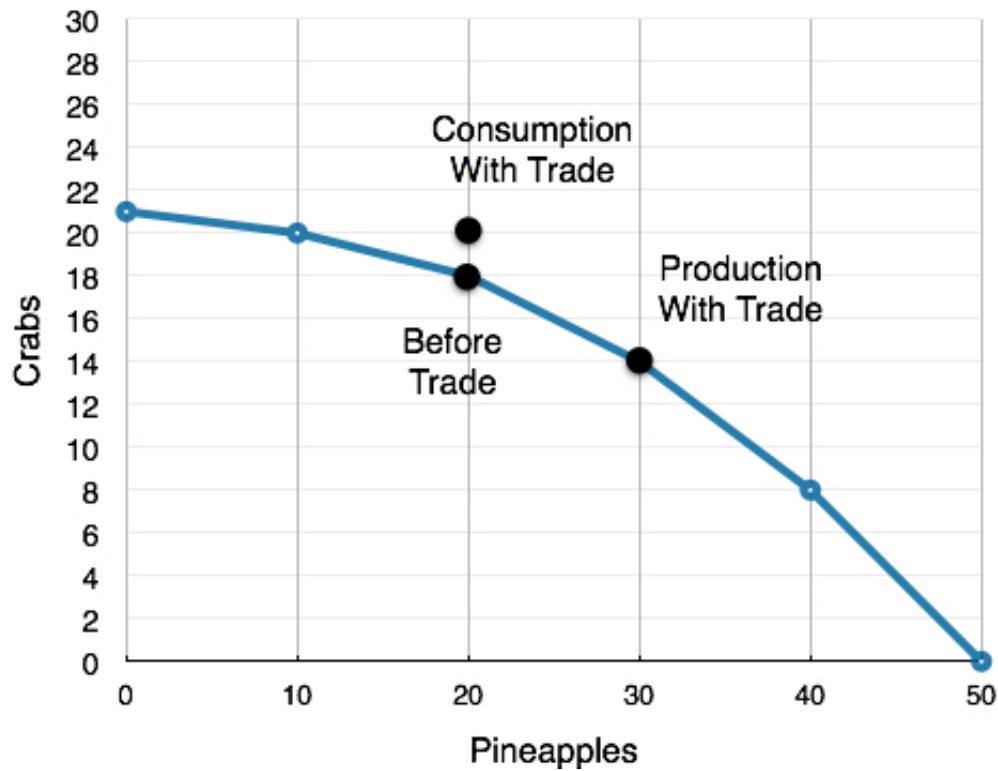


Figure 2.3c

Application

It's All About Oil

A country has an absolute advantage in producing if it uses fewer resources to produce. Absolute advantage can be the result of a country's natural endowment. For example, extracting oil in Saudi Arabia and other Middle Eastern countries is essentially just a matter of drilling a hole. Producing oil in countries like the United States can require considerable exploration and costly technologies for drilling and extraction. This case of absolute advantage has been a key contributing factor towards much of the chaos in the Middle East. The United States and other countries will go to great extents to defend their oil interests, and will sometimes meddle in other country's affairs in devastating ways.



(Credit: Chad Teer/
Wikimedia/ CC-BY-2.0)

Comparative Advantage

Let's look further into these gains from trade.

When you increase your production of pineapples from 20 to 30, you have to give up 4 crabs. This means your marginal cost is 0.4 crabs for 1 pineapple.

When Jamie decreased his production of pineapples from 50 to 40, he gained 8 crabs. This means his marginal cost was 0.8 crabs for 1 pineapple.

The gains from trade arise from this difference in marginal cost. Since it is more expensive for Jamie to produce pineapples (MC of 0.8 versus your MC of 0.4) he should produce fewer pineapples and more crabs. The economic agent with the lower marginal cost of producing a good has the **comparative advantage** in producing that good. In this case, you have the comparative advantage in producing pineapples, and Jamie has the comparative advantage in producing crabs. This **specialization** in production results in gains from trade, as each person or country can focus on what it can produce at the lowest cost.

Note that even though Jamie had the absolute advantage in both goods, his marginal cost of producing crabs was still higher, since marginal cost is based on a trade-off between the two goods. We can liken this example to a trade between Canada and a developing country. Canada may be better at producing both computers and textiles (the absolute advantage) but the advantages we have in producing computers are far greater. Any hour we have to give up to produce textiles comes at a much higher cost to us than it would to a developing country, giving us the comparative advantage at producing computers, and the developing country the advantage at producing textiles. The island example is no different. Even though Jamie is better at producing pineapples, what Jamie is really an expert at is producing crabs, so having to give up time spent catching crabs comes at a high cost.

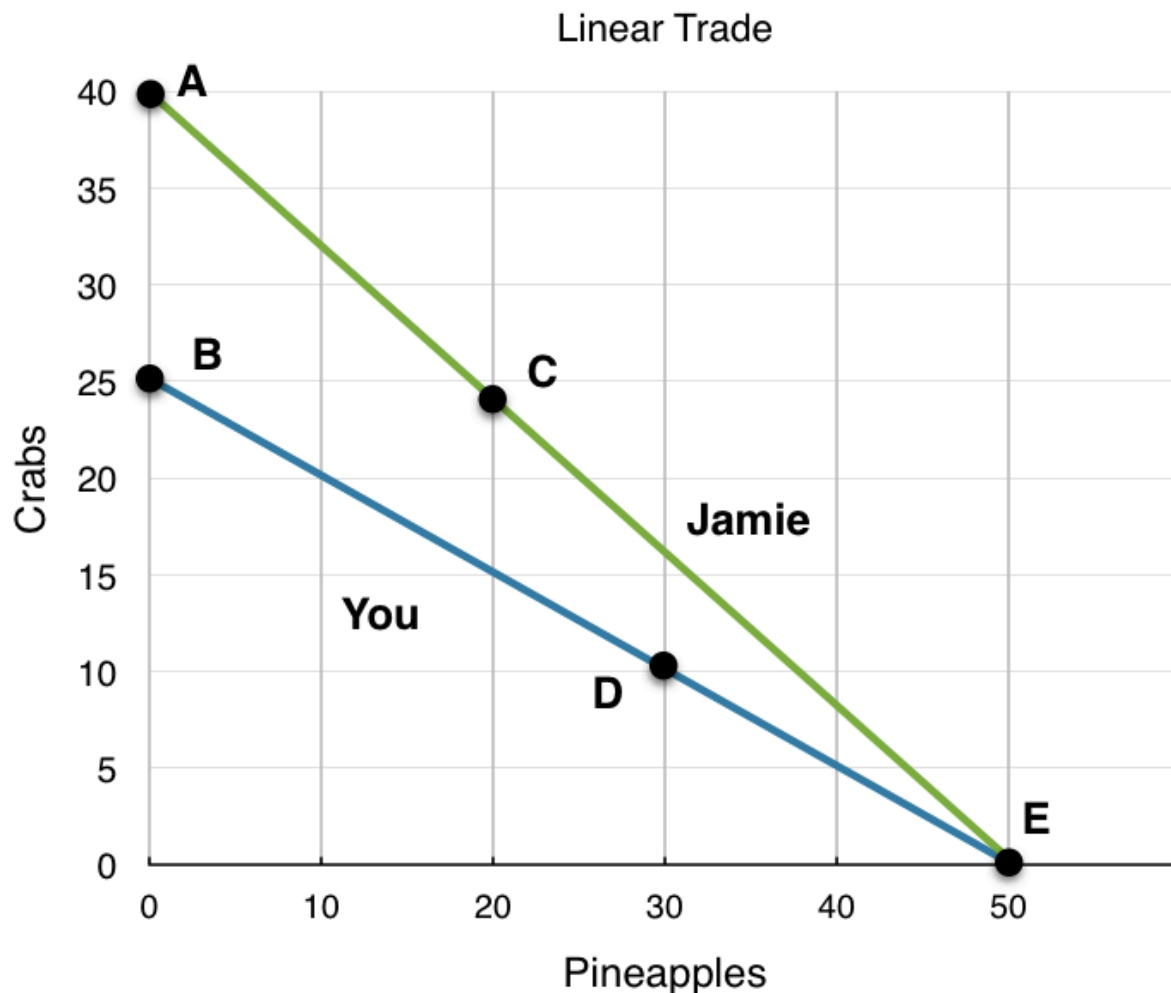
In this example, marginal costs are changing. This means that depending on where individuals produce, they may have a different comparative advantage. Recall that marginal cost is the slope of the PPF, so as each individual produces more pineapples, the pineapples become more expensive to produce. This

is known as the **law of diminishing returns** which states that as additional increments of resources are added to producing a good or service, the marginal benefit from those additional increments will decline. This example has introduced a lot of different concepts – moving forward, our examples will be simpler, and linear.

Linear PPF's

Most of the examples will deal with linear PPF's. This makes problems considerably easier, since in the case of a linear PPF (in which the marginal cost will be constant), one individual will always have the comparative advantage in one good. This means that comparative advantage is the same at any point on the PPF, and can be easily calculated.

We have changed Jamie and your skill set to be linear in Figure 2.3d.



Now we can use our tools of efficiency and trade to determine if certain points are efficient. In Figure 2.3d various points have been shown to reflect possible points of production for you (blue) and Jamie (green). Remember, we have no information about preferences. The first step is to find who has the comparative advantage for which good. For a linear PPF, this just means finding the slope.

Jamie

Jamie's PPF has the slope of 40/50 or 0.8 Crabs for 1 Pineapple.

This means his opportunity costs are:

0.8 Crabs for 1 Pineapple.

1.25 Pineapples for 1 Crab (the inverse of the slope)

You

Your PPF has the slope of 25/50 or 0.5 Crabs for 1 Pineapple.

This means your opportunity costs are:

0.5 Crabs for 1 Pineapple.

2 Pineapples for 1 Crab

Who Has the Comparative Advantage

Comparing the opportunity costs, it costs Jamie **0.8 Crabs** to produce 1 Pineapple, whereas it costs you only **0.5 Crabs**. This means:

You have the comparative advantage in producing Pineapples.

Remember that the 0.8 and 0.5 crabs represent the cost of pineapples in terms of crabs. It is similar to saying "It costs Jamie \$0.80 to buy a Pineapple, it costs you \$0.50, who should buy it?" In a PPF, cost is denoted in terms of the other good, not dollars.

Furthermore, it costs Jamie only **1.25 Pineapples** to produce 1 Crab, whereas it costs you **2 Pineapples**. This means:

Jamie has the comparative advantage in producing Crabs.

This is true for every point on our PPF. Now we will examine each of the points using this information.

Jamie Produces @ Point E, You Produce @ Point B

In this combination, Jamie produces only Pineapples and you produce only Crabs. This situation is clearly inefficient since each player is producing a good the other can produce for less. By changing production and trading goods, both parties stand to benefit.

Jamie Produces @ Point C, You Produce @ Point D

Recognizing that the last combination was inefficient, Jamie begins producing more Crabs and you begin producing more Pineapples. Although this seems to adhere to the comparative advantage, each of you are still producing goods that the other can produce for less. Jamie is still producing 20 Pineapples, and you are still producing 10 Crabs. As we saw before, if you both specialize in what you are comparably good at, then there will be even more gains from trade. This means that the situation is inefficient.

Jamie Produces @ Point A, You Produce @ Point E

Realizing the previous points were inefficient, Jamie produces only Pineapples and you produce only Crabs. In this situation both players are producing only the good they have the comparative advantage in. This situation is certainly efficient, as there are no production changes that can be made that result in more than 40 Crabs, and 50 Pineapples.

Jamie Produces @ Point A, You Produce @ Point D

What if we want 50 Crabs? Is there no way to produce this efficiently? There is. Point A/Point E is not the only efficient point possible. This is because of preferences. If in total, you and Jamie prefer only 40 Crabs, then Point A/ Point E would be the efficient point where you would produce, but if you and Jamie desire 50 Crabs, that would not be the preferred combination. If you desire 50 Crabs, then the person who has the comparative advantage in Crabs (in this case Jamie) should produce all 50 Crabs, or produce as many Crabs as possible. In this case, Jamie can only produce 40, which leaves the remaining 10 to be produced by you. Although Jamie could produce these 10 Crabs more efficiently, he is constrained by his production ability. This means that Point A/Point D is also an efficient combination of goods, since there is no way to acquire 50 Crabs which results in more than 30 Pineapples being produced.

Jamie Produces @ Point A, You Produce @ Point B

It should logically follow that this combination is also efficient. Even though you have the comparative advantage at producing Pineapples, if the Pineapples are poisonous and no one wants any, both you and Jamie will produce only Crabs! There is no other way to produce 65 Crabs where you will have any Pineapples left.

To simplify the analysis above you can use the following rule for linear PPF's

If at least one player is maximizing their comparative advantage, then the situation is efficient

This simple rule occurs since any combination where both players produce a mix of goods is a combination where players stand to gain from more specialization and trade. These gains only end when at least one player has exhausted the gains from specialization, and is producing only the good they are comparatively better at.

Summary

In summary, the PPF is a model we can use to represent the production of one or more parties. Trade allows parties to consume at points outside their PPF when they maximize comparative advantage. The party with the lower opportunity cost will have the comparative advantage in the production of a good. Even though a party might have the absolute advantage in the production of both goods, since comparative advantage is based on opportunity costs, other parties can still retain comparative advantage. Parties can achieve gains from trade by specializing in the good they are comparably good at, to the extent that consumers want that good.

Conclusion

In Topic 2, we have explored the production possibility model in depth, looking at a simplified version of trade and deepening our understanding of opportunity costs. Now, we can take our knowledge of basic economic modelling and our comprehension of costs and examine one of the most important of microeconomics: supply and demand.

Glossary

Absolute Advantage

when one country can use fewer resources to produce a good compared to another country; when a country is more productive compared to another country

Comparative Advantage

when a country can produce a good at a lower cost in terms of other goods; or, when a country has a lower opportunity cost of production

Gains from Trade

a country that can consume more than it can produce as a result of specialization and trade

Law of Diminishing Returns

as additional increments of resources are added to producing a good or service, the marginal benefit from those additional increments will decline

Specialization

a method of production where one party focuses on the production of a limited group of products or services

Exercises 2.3

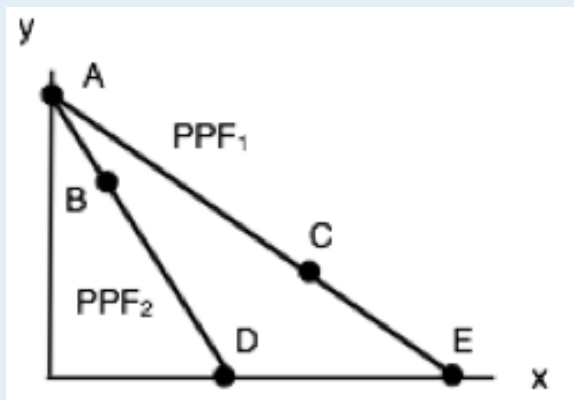
1. The following question refers to the table below, which shows the maximum number of goods X and Y that producers A and B can produce in one day.

	X	Y
Producer A	20	20
Producer B	15	15

Which of the following statements is TRUE?

- a) Producer A has the comparative advantage in producing X.
- b) Producer A has the comparative advantage in producing Y.
- c) Producer B has the absolute advantage in producing X and Y.
- d) No producer has the comparative advantage in producing either X or Y.

2. Consider the PPF diagram drawn below, for two countries that are free to trade with one another.

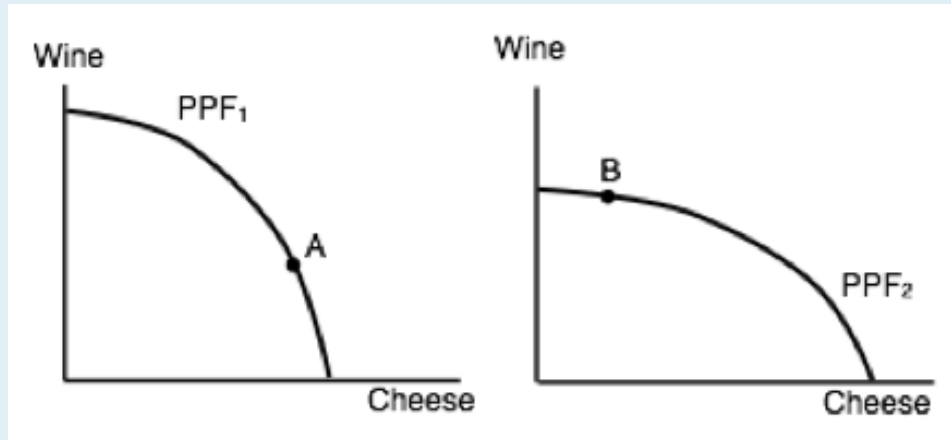


Which of the following production combinations is/are **INEFFICIENT**?

- I. Country 1 produces at point C and country 2 produces at point D.
- II. Country 1 produces at point E and country 2 produces point at B.
- III. Country 1 produces at point E and country 2 produces at point A.

- a) II only.
- b) I only.
- c) I and II only.
- d) I, II and III.

3. The diagram below illustrates the PPFs for two countries that produce wine and cheese. With no trade, country 1 produces at point A on its PPF and country 2 produces at point B.



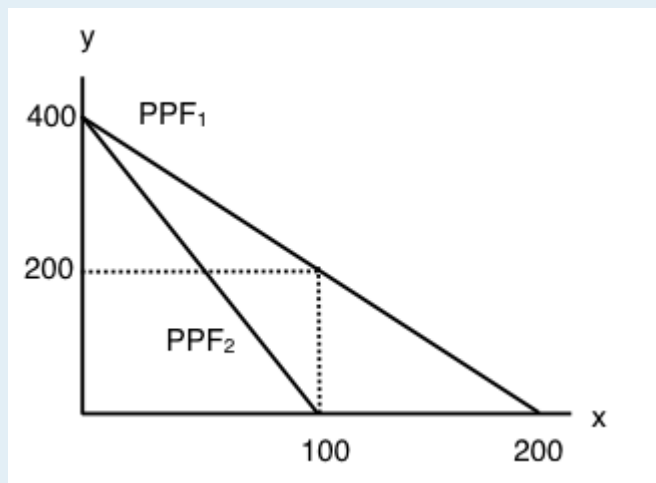
Assume that the two countries now begin to trade with one another. Which of the following will **NOT** occur (relative to the case with no trade).

- a) Country 1 will produce less cheese.
- b) Country 2 will export wine.
- c) Country 1 will import cheese.
- d) Country 2 will produce more cheese.

4. Which of the following statements about production and trade is FALSE?

- I. If a country has an absolute advantage in producing a good, then it also has the comparative advantage in the production of that good.
 - II. Rich countries will generally have the comparative advantage in the production of all goods.
 - III. If a country has the absolute advantage in the production of a good, then this country will be made better off by specializing in the production of that good.
- a) I only.
 b) I and II only.
 c) I, II and III.
 d) III only.

The following THREE questions refer to the diagram below, which illustrates the PPFs for two countries who are free to trade.



5. What is the marginal opportunity cost (MC) of producing good x in each country?

- a) 2 units of good y in country 1 and 4 units of good y in country 2.
- b) $1/2$ a unit of good y in country 1 and $1/4$ of a unit of good y in country 2.
- c) 2 units of good y in country 1 and $1/4$ of a unit of good y in country 2.
- d) $1/2$ a unit of good y in country 1 and 4 units of good y in country 2.

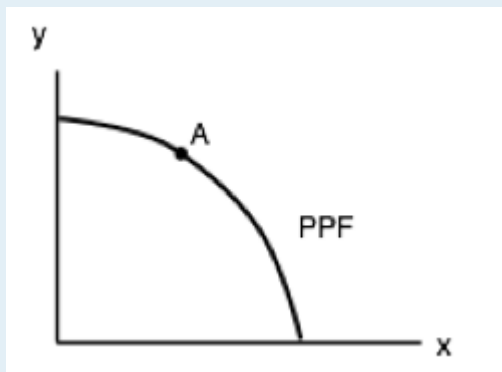
6. What is the marginal opportunity cost (MC) of producing good y in each country?

- a) 2 units of good x in country 1 and 4 units of good x in country 2.
- b) $1/2$ a unit of good x in country 1 and $1/4$ of a unit of good x in country 2.
- c) 2 units of good x in country 1 and $1/4$ of a unit of good x in country 2.
- d) $1/2$ a unit of good x in country 1 and 4 units of good x in country 2.

7. Suppose that aggregate production of x across the two countries is equal to 100 (that is, country one's production of x plus country two's production of x equals 100 units). If these 100 units of x are being produced efficiently, then aggregate production of y will equal:

- a) 200 units of y .
- b) 400 units of y .
- c) 600 units of y .
- d) 800 units of y .

8. The diagram below illustrates the identical PPFs of two countries.



Initially, there is no trade allowed between the two countries, and each country produces at point A. If trade is opened up, which of the following will occur?

- I. Country 1 will export coal to country 2.
 - II. Country 2 will produce more clothing.
 - III. Country 1 will produce less coal.
- a) I and II only.
 - b) III only.
 - c) II and III only.
 - d) None of the above.

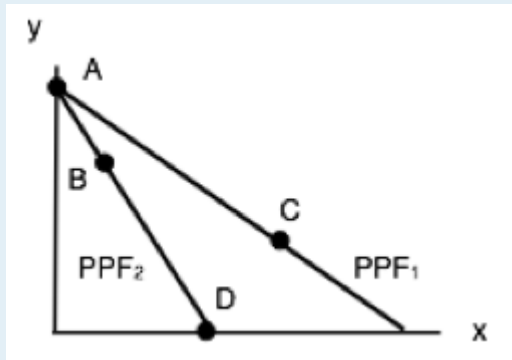
9. The table below shows the maximum amounts of coffee and salmon that Brazil and British Colombia can produce if they just produce one good.

	Coffee	Salmon
Brazil	40	20
British Columbia	10	15

Assuming constant marginal costs:

- a) Brazil has a comparative advantage in coffee production
- b) In Brazil, the marginal cost of salmon production is 2 units of coffee.
- c) In BC, the marginal cost of coffee production is $1\frac{1}{2}$ units of salmon.
- d) All of the above are correct.

10. The diagram below illustrates the PPFs for two countries that produce two goods. The two countries are free to trade with one another.



Which of the following production combinations are efficient?

- a) Country 1 is at point C; country 2 is at point D.
- b) Country 1 is at point A; country 2 is at point B.
- c) Country 1 is at point C; country 2 is at point A.
- d) All of the above are efficient.

Case Study - Brexit

Note that the Economics 103 Case Studies are meant to supplement the course material by giving you experience applying Economic concepts to real world examples. While they are beyond the level you will be tested on, they are useful for students who want a stronger grasp of the concepts and their applications.



UKIP Leader Nigel Farage MEP was a strong proponent of the 'leave side' in Britain's referendum to stay or leave the EU. (Credit: Gage Skidmore/ Flickr/ CC BY-SA 2.0)

Some have said that June 23rd, 2016 will go down as Britain's independence day, but many others have been less positive about Britain's decision to leave the European Union. Financial markets, facing new found uncertainty, plunged. The pound fell hard against the dollar to a 30-year low of \$1.32. This decision has caused ripples in the world economy, noticeably in Europe where Britain provided strong consumption for European goods. The Brexit vote caused uncertainty in many of the world's markets. If Britain, long a champion of free trade, can vote to revoke a regional trade deal, how much faith can businesses worldwide put in other international economic agreements?



Read more about Brexit's impact on the world economy.

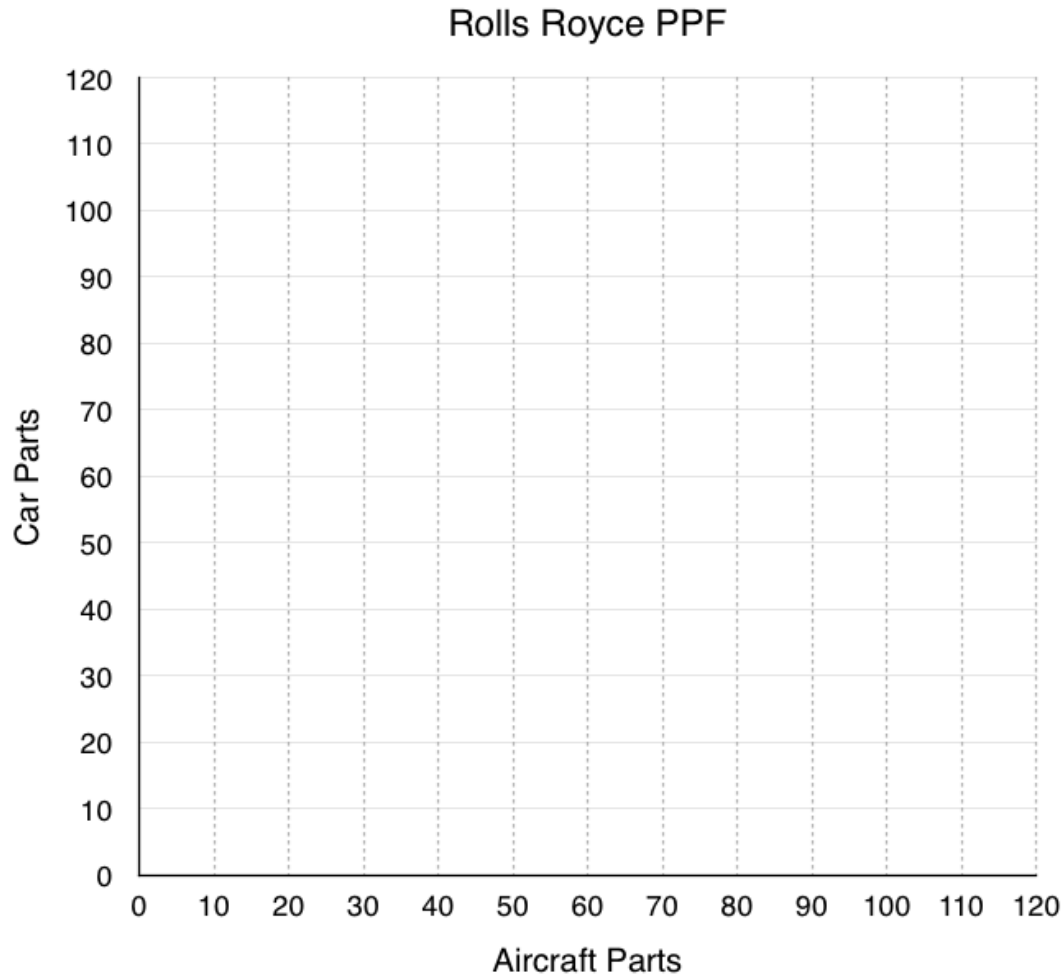
In Topic 2 we talked about competitive advantage and the gains from trade. To illustrate some of the effects of Brexit consider Rolls Royce, designer, distributor, and manufacturer of power systems for aviation and former owner of car brands like Bentley. Rolls Royce sold Bentley (now owned by Volkswagen) in 1971, let's assume they want to re-enter the market with 'Rolls Royce' branded vehicles.

Assume Rolls Royce can produce two things, aircraft parts, which they sell to firms like Airbus, Boeing etc. Or car parts, which they can use to manufacture cars.



In 1971, Rolls Royce sold rights to Bentley following financial problems stemming from the costs of developing the RB211 jet engine. (Credit: Rachel Patterson/ Flickr/ CC BY-NC-ND 2.0)

1. Rolls Royce can produce either 50 car parts, 100 aircraft parts, or a combination of both. Represent car parts on the y-axis and aircraft parts on the x-axis. Draw Rolls Royce PPF on the diagram below. Assume the PPF is linear.

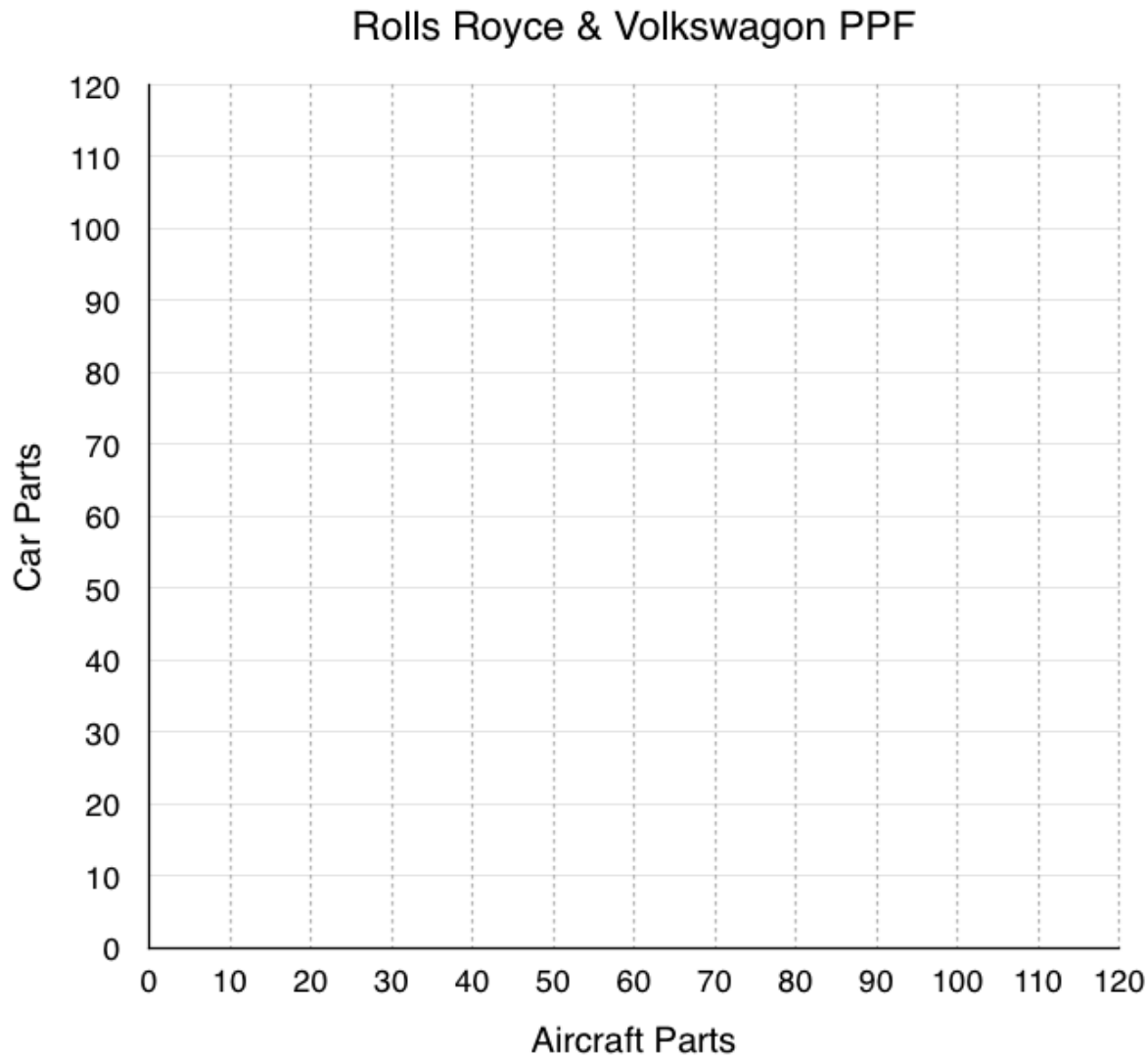


2. For Rolls Royce, what is the marginal opportunity cost of 1 aircraft part? 1 car part?

3. If Rolls Royce needs to produce 40 aircraft parts, how many car parts can they make?

After exploring the market, Rolls Royce finds that Volkswagen is also producing both car parts and aircraft parts and may be open to trade. Rolls Royce wants to consider the benefits of trading with this firm.

4. Volkswagen can produce either 120 car parts, 40 aircraft parts, or a combination or both. Represent cars parts on the y-axis and aircraft parts on the x-axis. Draw Volkswagen's PPF on the diagram below, and redraw Rolls Royce's PPF from question 1. Assume both PPFs are linear.



5. For Volkswagen, what is the marginal opportunity cost of 1 aircraft part? 1 car part?
6. Who has the absolute advantage in the production of aircraft parts? Car parts?
7. Who has the comparative advantage in the production of aircraft parts? Car parts? Why?
8. Assume each firm needs 20 aircraft parts and cannot trade. How many car parts is each able to produce after making 20 aircraft parts? What is the total amount of car parts produced?
9. If the market is opened up to trade, represent the efficient production of 40 aircraft parts on the PPF. What is the total number of car parts produced now?

Vehicles and aircraft are two of Britain's largest exports, together making up 17.7% of the total. Although final assembly of many cars occurs in Britain, the supply chains often span the globe. Bumpers for some Bentley Bentaygas, for example, are made in Europe but then sent to Crewe for inspection before going to Germany for specialist painting. After that, they return to the UK for final assembly. Brexit would mean imposing tariffs (taxes on imports) on much of this supply chain, making it more

expensive for Rolls Royce if they wanted to trade with Volkswagon. We will talk more about tariffs and how they are affect the market in Topic 4, assume for now that Brexit completely restricts trade.



Read more about Brexit's effect on the UK car industry.

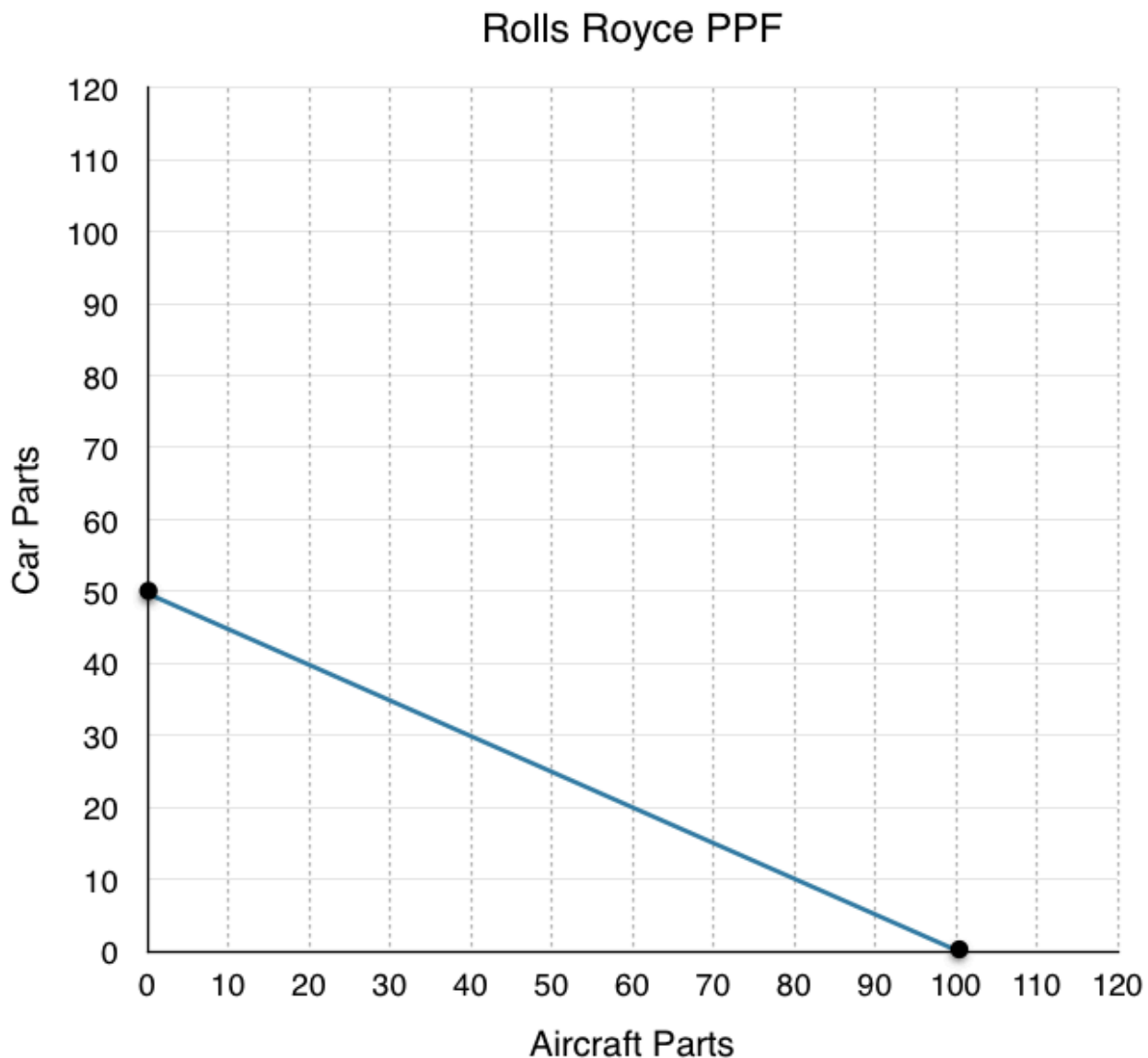
10. Explain why Brexit makes both companies worse off with reference to question 8 and 9.

In this case study we have shown how microeconomic concepts of production possibilities can be used to understand current events in the news. Do you have a story you think would make a good case study? Contact economics103@uvic.ca to propose your story.

Solutions: Case Study - Brexit

1. Rolls Royce can produce either 50 car parts, 100 aircraft parts, or a combination of both. Represent cars parts on the y-axis and aircraft parts on the x-axis. Draw Rolls Royce PPF on the diagram below. Assume the PPF is linear.

The best way to draw a PPF is to find how many of each good the firm can produce if they produce that good only. In this case we are told Rolls Royce can either produce 50 car parts, 100 aircraft parts, or a mix. This means we know the point (0, 50) and (100, 0) are on our PPF. Simply label these points and connect them to find Rolls Royce's PPF.



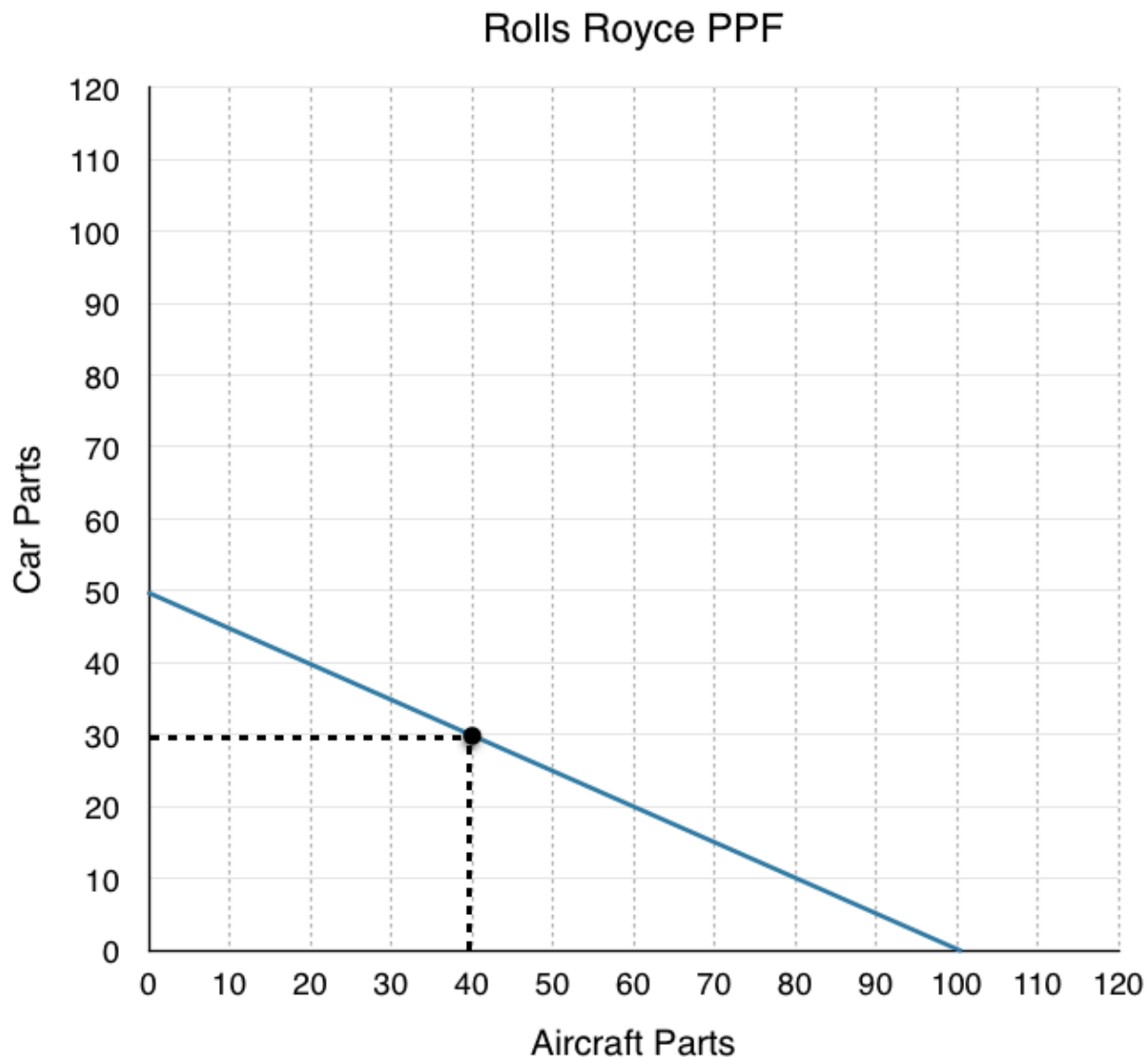
2. For Rolls Royce, what is the marginal opportunity cost of 1 aircraft part? 1 car part?

Remember that the marginal opportunity cost of the good on the x-axis, in this case aircraft parts, is simply the slope of the PPF. Taking the slope we find that we must trade *50 car parts* for every *100 aircraft parts*, this means that the marginal opportunity cost of one aircraft part is **0.5 car parts**.

The marginal opportunity cost of the good on the y-axis, in this case car parts, is equal to the inverse of the slope. This means we must trade *100 aircraft parts* for every *50 car parts*. The marginal opportunity cost of one car part is **2 aircraft parts**.

3. If Rolls Royce needs to produce 40 aircraft parts, how many car parts can they make?

Since there is no opportunities for trade, this is a relatively simple problem. All you have to do is draw a line up from 40 aircraft parts, and see how many car parts Rolls Royce can make with the remaining resources.

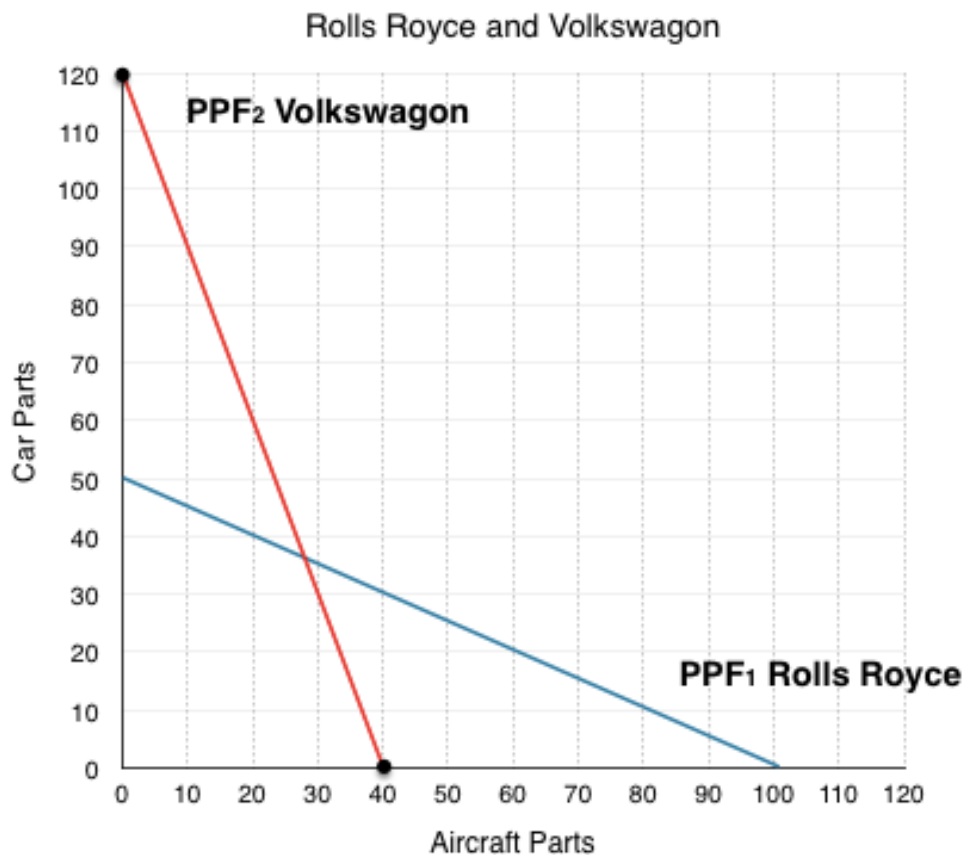


Looking at the diagram you can see that when Rolls Royce produces 40 aircraft parts, they can produce 30 car parts.

Rolls Royce can produce a maximum of 100 aircraft parts, and for every 10 they give up they can make 5 car parts. If they are only producing 40 aircraft parts they have given up 60. The trade off in the production of 60 aircraft parts allows them to produce 30 car parts.

4. Volkswagen can produce either 120 car parts, 40 aircraft parts, or a combination of both. Represent cars parts on the y-axis and aircraft parts on the x-axis. Draw Volkswagen's PPF on the diagram below, and redraw Rolls Royce's PPF from question 1. Assume both PPFs are linear.

Again, the best way to draw a PPF is to find how many of each good the firm can produce if they produce that good only. Based on the information we are given, we know the points (0, 120) and (40, 0) are on Volkswagen's PPF. Simply label these points and connect them to find Volkswagen's PPF.



5. For Volkswagen, what is the marginal opportunity cost of 1 aircraft part? 1 car part?

Taking the slope of Volkswagen's PPF, we find that we must trade *120 car parts* for every *40 aircraft parts*, this means that the marginal opportunity cost of one aircraft part is **3 car parts** for 1 aircraft part.

The marginal opportunity cost of the good on the y-axis, in this case car parts, is equal to the inverse of the slope. This means we must trade *40 aircraft parts* for every *120 car parts*. The marginal opportunity cost of one aircraft part is **0.33 aircraft parts** for 1 car part.

6. Who has the absolute advantage in the production of aircraft parts? Car parts?

The firm that can produce the greater number of each good has the absolute advantage in that goods production. Since Rolls Royce can produce 100 aircraft and Volkswagon only 40, **Rolls Royce has the absolute advantage in aircraft parts**. Since Volkswagon can produce 120 car parts and Rolls Royce only 50, **Volkswagon has the absolute advantage in car parts**.

7. Who has the comparative advantage in the production of aircraft parts? Car parts? Why?

Representing the marginal opportunity costs of each company on a table we can produce the following:

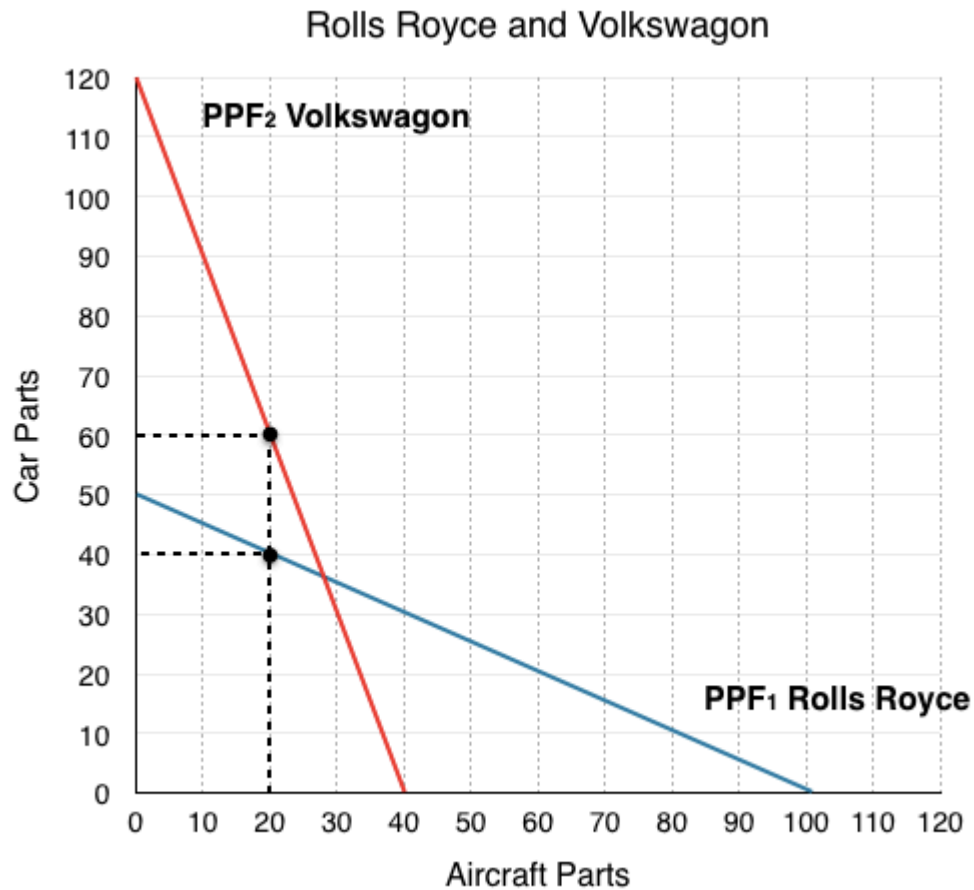
	Rolls Royce	Volkswagon
MOC for Aircraft Parts	0.5 car part for 1 aircraft part	3 car parts for 1 aircraft part
MOC for Car Parts	2 aircraft parts for 1 car part	0.33 aircraft parts for 1 car part

Recall that the firm with the lower opportunity cost has the comparative in the production of the good. In this case Rolls Royce only has to give up 0.5 car parts for 1 aircraft part, whereas Volkswagon has to give up 3! This means **Rolls Royce has the comparative advantage in aircraft parts**. Volkswagon only has to give up 0.33 aircraft parts for 1 car part, whereas Roll Royce has to give up 2. This means **Volkswagon has the comparative advantage in car parts**.

This means that when possible, Rolls Royce should specialize in the production of aircraft parts, since they have lower opportunity cost of producing them.

**Note that in this example each firm has both the competitive and absolute advantage in their good, but this need not be the case. One firm could have the absolute advantage at both goods, but there would still be mutually beneficial trades available.*

8. Assume each firm needs 20 aircraft parts and cannot trade. How many car parts is each able to produce? What is the total amount of car parts?



If the firms cannot trade with each other then this exercise is identical to Question 3, just with two firms. All we have to do is draw a line up from 20 aircraft parts, and see how many car parts each can produce.

As shown in the diagram above, Rolls Royce can produce 40 car parts, and Volkswagen can produce 60 car parts for a total of 100.

9. If the market is opened up to trade, represent the efficient production of 40 aircraft parts on the PPF. What is the total number of car parts produced?

If the market is open to trade and we need 40 aircraft parts, they won't be produced as they were in Question 8. When we are told how much of a specific good we want, the firm with the comparative advantage in that good will produce as much of that good as they can (up to the total). In this case Rolls Royce has the comparative advantage in aircraft parts so they will produce all 40. Notice that when Rolls Royce produces 40 aircraft parts, they are still producing 30 car parts – that is fine. We can not say that Rolls Royce should produce more than 40 because if we only want 40 aircraft parts, there is no reason to produce more (no one will buy them, there is no use for them, etc.). The remaining resources should be used to produce car parts.

If Rolls Royce is producing 40 aircraft parts, they are also producing 30 car parts. Since we do not need anymore aircraft parts, Volkswagen can focus on what they are comparatively better at and produce 120

car parts. This is the most efficient way for the firms to produce 40 aircraft parts and results in a total of 150 car parts (120 car parts from Volkswagon + 30 car parts from Roll Royce).

Note that this follows the rule in Topic 2.3 where we stated that if at least one player is maximizing their comparative advantage, then the situation is efficient (in this case Volkswagon is maximizing).

10. Explain why Brexit makes both companies worse off with reference to question 8 and 9.

Comparing the total number of parts with and without trade we see that the total number of goods are:

Without Trade: 40 Aircraft Parts, 100 Car Parts

With Trade: 40 Aircraft Parts, 150 Car Parts

Trade results in a Pareto improvement as the total number of car parts increases. This means that Brexit results in both companies having less car parts, which means less revenue.

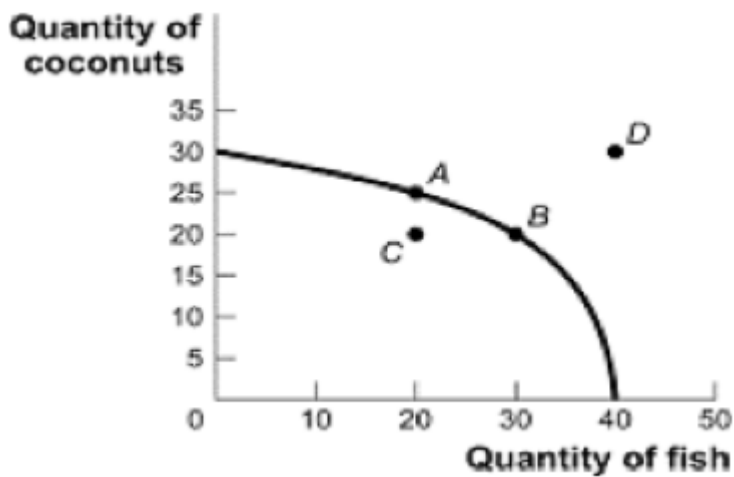
Policy restricting trade has made it so neither company can focus on what they are comparatively good at. If Rolls Royce wants to produce cars, they have to produce the car parts themselves at higher costs. This is why we say there are 'gains from trade' as whether you were the British company or the German company, both parties stand to benefit.

Topic 2 Multiple Choice Questions

All the following questions are from previous exams for Economics 103. They are duplicates of the questions found in the Topic sub-sections.

Exercises 2.2

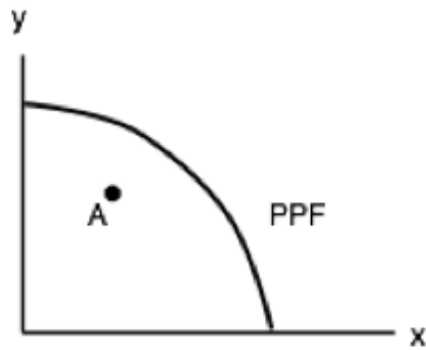
1. Consider the PPF diagram below.



Given the PPF illustrated, what is the opportunity cost of moving from B to A?

- a) 5 coconuts.
- b) 10 fish.
- c) 5/10 fish
- d) 10/5 coconuts.

The following TWO questions refer the diagram below, which illustrates the PPF for a producer of two goods, x and y.



2. Which of the following statements is TRUE?

- I. The marginal cost of producing x is higher at high levels of x than it is at low levels of x .
- II. The marginal cost of producing y is higher at high levels of y than it is at low levels of y .
- III. The marginal cost of producing both x and y is constant in the level of production.

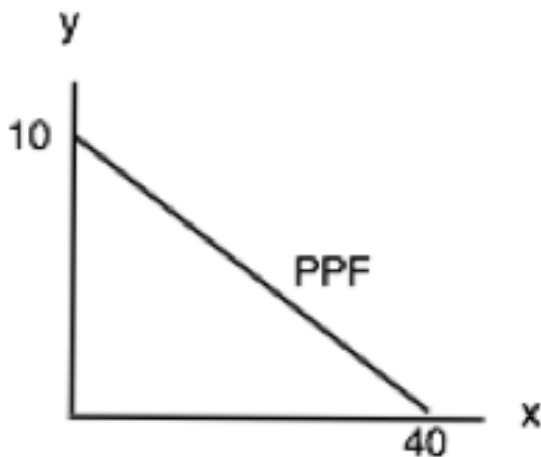
- a) I only.
- b) II only.
- c) III only.
- d) I and II only.

3. If this economy is operating at point A , which of the following statements is TRUE?

- I. The opportunity cost of producing more x is zero.
- II. The opportunity cost of producing more y is zero.
- III. Point A is inefficient.

- a) III only.
- b) I and II only.
- c) I and III only.
- d) I, II, and III.

The following TWO questions refer to the PPF diagram below.



4. What is the MARGINAL cost of producing good **y**?

- a) 1/4 of a unit of **x**.
- b) 1/4 of a unit of **y**.
- c) 4 units of **x**.
- d) 4 units of **y**.

5. What is the cost of producing FOUR units of good **y**?

- a) 16 units of **x**.
- b) 4 units of **x**.
- c) 1/4 of a unit of **x**.
- d) 40 units of **x**.

6. Consider a PPF drawn with **x** on the horizontal axis and **y** on the vertical axis. Which of the following concepts can be used to explain why this production possibility frontier could be flat at relatively low levels of **x** and steep at relatively high levels of **x**?

- a) Increasing marginal costs.
- b) Scarcity
- c) Sunk costs.
- d) Trade

7. Which of the following concepts can be used to explain why production possibility frontiers slope downwards.

- a) Scarcity
- b) Sunk costs.
- c) Trade
- d) Increasing marginal costs.

Exercises 2.3

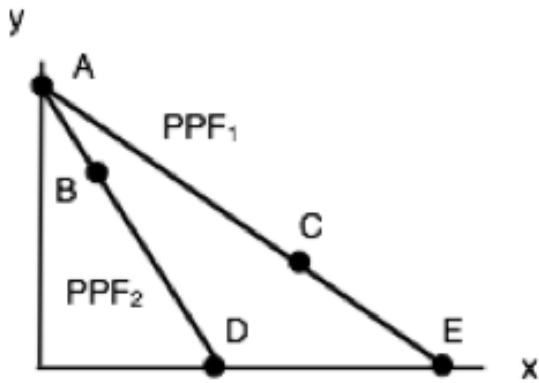
1. The following question refers to the table below, which shows the maximum number of goods **X** and **Y** that producers **A** and **B** can produce in one day.

	X	Y
Producer A	20	20
Producer B	15	15

Which of the following statements is TRUE?

- a) Producer A has the comparative advantage in producing X.
- b) Producer A has the comparative advantage in producing Y.
- c) Producer B has the absolute advantage in producing X and Y.
- d) No producer has the comparative advantage in producing either X or Y.

2. Consider the PPF diagram drawn below, for two countries that are free to trade with one another.

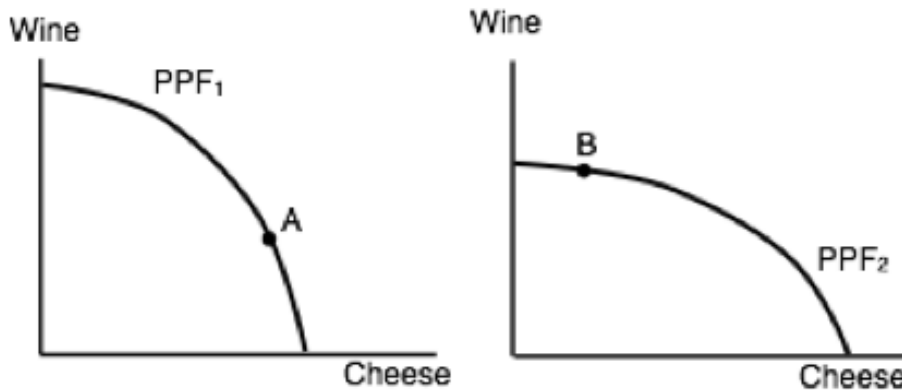


Which of the following production combinations is/are **INEFFICIENT**?

- I. Country 1 produces at point C and country 2 produces at point D.
- II. Country 1 produces at point E and country 2 produces point at B.
- III. Country 1 produces at point E and country 2 produces at point A.

- a) II only.
- b) I only.
- c) I and II only.
- d) I, II and III.

3. The diagram below illustrates the PPFs for two countries that produce wine and cheese. With no trade, country 1 produces at point A on its PPF and country 2 produces at point B.



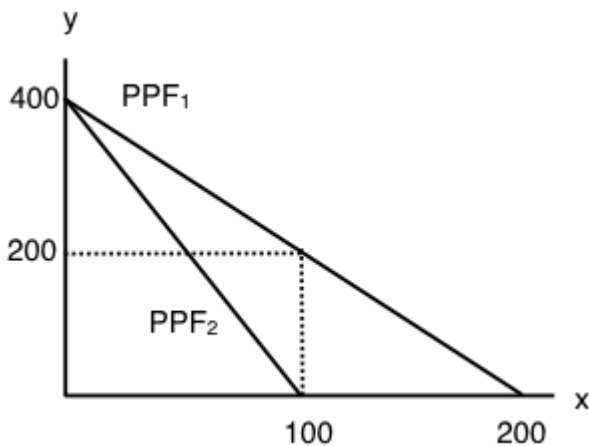
Assume that the two countries now begin to trade with one another. Which of the following will **NOT** occur (relative to the case with no trade).

- a) Country 1 will produce less cheese.
- b) Country 2 will export wine.
- c) Country 1 will import cheese.
- d) Country 2 will produce more cheese.

4. Which of the following statements about production and trade is FALSE?

- I. If a country has an absolute advantage in producing a good, then it also has the comparative advantage in the production of that good.
 - II. Rich countries will generally have the comparative advantage in the production of all goods.
 - III. If a country has the absolute advantage in the production of a good, then this country will be made better off by specializing in the production of that good.
- a) I only.
 b) I and II only.
 c) I, II and III.
 d) III only.

The following THREE questions refer to the diagram below, which illustrates the PPFs for two countries who are free to trade.



5. What is the marginal opportunity cost (MC) of producing good x in each country?

- a) 2 units of good y in country 1 and 4 units of good y in country 2.
- b) 1/2 a unit of good y in country 1 and 1/4 of a unit of good y in country 2.
- c) 2 units of good y in country 1 and 1/4 of a unit of good y in country 2.
- d) 1/2 a unit of good y in country 1 and 4 units of good y in country 2.

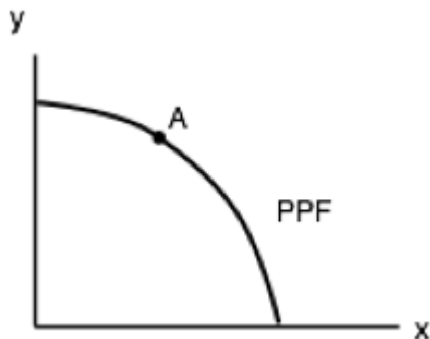
6. What is the marginal opportunity cost (MC) of producing good y in each country?

- a) 2 units of good x in country 1 and 4 units of good x in country 2.
- b) $1/2$ a unit of good x in country 1 and $1/4$ of a unit of good x in country 2.
- c) 2 units of good x in country 1 and $1/4$ of a unit of good x in country 2.
- d) $1/2$ a unit of good x in country 1 and 4 units of good x in country 2.

7. Suppose that aggregate production of x across the two countries is equal to 100 (that is, country one's production of x plus country two's production of x equals 100 units). If these 100 units of x are being produced efficiently, then aggregate production of y will equal:

- a) 200 units of y .
- b) 400 units of y .
- c) 600 units of y .
- d) 800 units of y .

8. The diagram below illustrates the identical PPFs of two countries.



Initially, there is no trade allowed between the two countries, and each country produces at point A. If trade is opened up, which of the following will occur?

- I. Country 1 will export coal to country 2.
- II. Country 2 will produce more clothing.
- III. Country 1 will produce less coal.

- a) I and II only.
- b) III only.
- c) II and III only.
- d) None of the above.

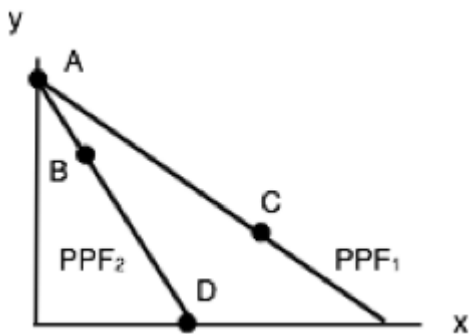
9. The table below shows the maximum amounts of coffee and salmon that Brazil and British Colombia can produce if they just produce one good.

	Coffee	Salmon
Brazil	40	20
British Columbia	10	15

Assuming constant marginal costs:

- a) Brazil has a comparative advantage in coffee production
- b) In Brazil, the marginal cost of salmon production is 2 units of coffee.
- c) In BC, the marginal cost of coffee production is $1\frac{1}{2}$ units of salmon.
- d) All of the above are correct.

10. The diagram below illustrates the PPFs for two countries that produce two goods. The two countries are free to trade with one another.



Which of the following production combinations are efficient?

- a) Country 1 is at point C; country 2 is at point D.
- b) Country 1 is at point A; country 2 is at point B.
- c) Country 1 is at point C; country 2 is at point A.
- d) All of the above are efficient.

Topic 2 Solutions

Solutions to Exercises 2.2

1. **B**
2. **D**
3. **D**
4. **C**
5. **A**
6. **A**
7. **A**

Solutions to Exercises 2.3

1. **D**
2. **B**
3. **B**
4. **C**
5. **A**
6. **B**
7. **C**
8. **D**
9. **D**
10. **C**

Topic 2 References

Campbell, Peter. Financial Times. “UK car industry fears effects of Brexit tariffs on supply chain.” October 16, 2016. <https://www.ft.com/content/c397f174-9205-11e6-a72e-b428cb934b78>

The Economist. “Slicing an Apple.” August 10, 2011. <http://www.economist.com/blogs/dailychart/2011/08/apple-and-samsungs-symbiotic-relationship>

The Economist. “Unfavourable Trade Winds.” May 26, 2016. <http://www.economist.com/news/britain/21695544-it-would-be-hard-britain-negotiate-good-trade-deals-post-brex-it-unfavourable-trade-winds>

Encyclopaedia Britannica. “David Ricardo.” March 1, 2016. <https://www.britannica.com/biography/Vilfredo-Pareto>

Encyclopaedia Britannica. “Vilfredo Pareto.” January 23, 2014. <https://www.britannica.com/biography/Vilfredo-Pareto>

Krugman, Paul R. *Pop Internationalism*. The MIT Press, Cambridge. 1996.

Krugman, Paul R. “What Do Undergrads Need to Know about Trade?” *American Economic Review* 83, no. 2. 1993. 23-26.

Ricardo, David. “On the Principles of Political Economy and Taxation.” *Library of Economics and Liberty*. <http://www.econlib.org/library/Ricardo/ricP.html>.

Rolls-Royce. “Rolls-Royce history timeline.” <https://www.rolls-royce.com/about/our-story/rolls-royce-history-timeline.aspx>

Workman, Daniel. World’s Top Exports. “United Kingdom’s Top 10 Exports.” April 20, 2017. <http://www.worldstopexports.com/united-kingdoms-top-exports/>

Topic 3: Supply, Demand, and Equilibrium

Introduction to Supply and Demand

Topic Objectives

Topic 3: Supply, Demand & Equilibrium

In this topic, you will learn about:

- Assumptions of the competitive market model: all agents are price takers, homogeneous products.
- Demand & supply: determinants of demand & supply, demand & supply curves, consumer and producer surplus, divisibility, the “laws” of demand and supply, movements along versus shifts of demand and supply curves.
- Normal & inferior goods, complements & substitutes, individual demand and supply v market demand and supply
- Equilibrium prices and quantities, price as a mechanism for equilibration.

In Chapter Two we looked at comparative advantage, and how a country could gain from trade by specializing in the production of goods for which they had the lower opportunity cost. Contrasting this with reality we will notice a number of things. Firstly, transactions are conducted and denominated in dollars, not other goods, and typically there will be more than one buyer and one seller interacting in the market. This is a typical competitive market, which is a market form we will explore in depth in this topic.



Figure 1. Farmer's Market. Organic vegetables and fruits that are grown and sold within a specific geographical region should, in theory, cost less than conventional produce because the transportation costs are less. That is not, however, usually the case. (Credit: modification of work by Natalie Maynor/Flickr Creative Commons)

Why Can We Not Get Enough of Organic?

Organic food is increasingly popular, not just in the United States, but worldwide. At one time, consumers had to go to specialty stores or farmer's markets to find organic produce. Now it is available in most grocery stores. In short, organic is part of the mainstream.

Ever wonder why organic food costs more than conventional food? Why, say, does an organic Fuji apple cost \$1.99 a pound, while its conventional counterpart costs \$1.49 a pound? The same price relationship is true for just about every organic product on the market. If many organic foods are locally grown, would they not take less time to get to market and therefore be cheaper? What are the forces that keep those prices from coming down? Turns out those forces have a lot to do with demand and supply.

An auction bidder pays thousands of dollars for a dress Whitney Houston wore. A collector spends a small fortune for a few drawings by John Lennon. People usually react to purchases like these in two ways: their jaw drops because they think these are high prices to pay for such goods or they think these are rare, desirable items and the amount paid seems right.



Gasoline prices are effected by demand and supply shocks both locally and globally. (Credit: Philippa McKinlay/ Flickr/ CC BY-NC-ND 2.0)

When economists talk about prices, they are less interested in making judgments than in gaining a practical understanding of what determines prices and why prices change. Consider a price most of us contend with weekly: that of a litre of gas. Some of you may remember the sharp fall in gas prices in 2015, which worsened when sanctions were lifted from Iran in January of 2016. What caused the price of a barrel to fall from almost \$110 to just \$15? To explain these price movements, economists focus on the determinants of what gasoline buyers are willing to pay and what gasoline sellers are willing to accept.

As it turns out, the price of gasoline in June of any given year is nearly always higher than the price in January of that same year; over recent decades, gasoline prices in midsummer have averaged about 10 cents per gallon more than their midwinter low. The likely reason is that people drive more in the summer, and are also willing to pay more for gas – but that does not explain how steeply gas prices fell. Other factors were at work during those six months, such as increased competition between Saudi Arabia and Iran, an oversupply in production from years of heavy investment, and other shocks to the supply and demand of oil.

This chapter introduces the economic model of demand and supply—one of the most powerful models in all of economics. The discussion here begins by examining how demand and supply determine the price and the quantity sold in markets for goods and services, and how changes in demand and supply lead to changes in prices and quantities.



[Click to Learn More About Demand and Supply Shocks to the Price of Oil](#)

3.1 The Competitive Market Model

Learning Objectives

By the end of this section, you will be able to:

- Explain the limitations of the Competitive Market Model
- Understand Product Homogeneity, Buyer Power, & Supplier Power

An Economic Model of Demand and Supply

Recall that an economic model is a simplified framework that is designed to illustrate complex processes. The first model we looked at in Topic 2 was the Production Possibility Frontier, which outlined efficient production under autarky and under trade. We mentioned that although these models can seem oversimplified, holding certain variables constant to analyze the most important ones is an effective way to build a basis of understanding. For demand and supply, we must remain conscious of the model's simplifications to understand its limitations and strengths. The next model we will explore is the **competitive market model**.

Assumptions of the Competitive Market Model

1. Product Homogeneity

Under product homogeneity, all goods offered for sale are identical in the eyes of the economic agent. Say, for example, you go to the farmer's market and consider buying onions. Suppose there are two different farms selling identical onions. In this case, the product is "homogeneous," as you, the consumer, have no preference over which onion to buy and will simply go with whichever is cheaper. Instances of perfect homogeneity are actually quite rare, as firms strive to differentiate themselves from their competitors. Farms may position themselves as more organic, or more local. One onion firm even used Shrek to differentiate its onions, playing off the line "ogres are like onions, we have many layers."

2. No Buyer Power

Under the assumption of buyer power, no single **consumer** has the power to influence the price at which they **purchase** a good. For example, your choice whether or not to buy a Coke is not going to



Shrek used to pitch Vidalia onions
(Credit: truthinadvertising.org)

cause Coca Cola to change its prices, since Coca Cola has many other consumers who would will purchase. If you are buying a car, you likely have some degree of buyer power, since your purchase results in substantial revenue for the car lot. In a perfectly competitive market, consumers have no buyer power.

3. No Supplier Power

Under this assumption, no single **producer** has the power to influence the price at which they **sell** a good. Consider a small manufacturer attempting to negotiate prices with multinational retail corporation Walmart. The manufacturer will likely have to take the price or go somewhere else. Compare that to Apple supplying an Apple Specialist store, in this case Apple has a lot of power and can likely dictate prices to the retailer. In a perfectly competitive market, producers have no supplier power.

Are These Realistic Assumptions?

Some of these assumptions are not too far from reality. In fact, the economic climate in which firms operate ranges from instances like these of perfect competition to monopolies, in which one firm sets its own prices. By first understanding the model on one end of the extreme, we can begin to understand the spectrum.

In 3.2, we will look at potential buyers on the **demand** side.

In 3.3, we will look at potential sellers on the **supply** side.

Then, looking at how they interact, we will determine where the **market equilibrium** lies in 3.4.

Let's first focus on what economists mean by demand.

Summary

The model to examine supply and demand is called the competitive market model. In the competitive market, we assume products are homogeneous, and there is no supplier or buyer power.

3.2 Building Demand and Consumer Surplus

Learning Objectives

By the end of this section, you will be able to:

- Explain quantity demanded, and the law of demand
- Identify a demand curve
- Calculate consumer surplus given a Marginal Benefit curve and price

The Law of Demand

Economists use the term **demand** to refer to the amount of some good or service consumers are willing and able to purchase at each price. Demand is based on needs and wants, and while consumers can differentiate between a need and a want, from an economist's perspective, they are the same thing. Demand is also based on ability to pay. If you cannot pay for it, you have no effective demand. This concept of a consumer's willingness to pay (**WTP**) serves as a starting point for the demand curve. A consumer's **Willingness to Pay** is equal to that consumer's **Marginal Benefit (MB)**. This is useful information if we want to use **Marginal Analysis**.

As we learned in Topic 1, Marginal Analysis or “thinking on the margin” is how consumers decide whether or not to buy an additional unit. It is the process of considering the additional benefits and costs of an activity to make a decision. Therefore, when we say a consumer is willing to pay x dollars for another good, we are stating that the consumer believes they will receive x amount of benefit. As long as the consumer's marginal benefit is greater than their marginal cost, they will purchase the good. Therefore, the maximum amount a consumer is willing to pay is equal to their marginal benefit.

What a buyer pays for a unit of a good or service is called **price**. The total number of units purchased at that price is called the **quantity demanded**. A rise in price of a good or service will almost always decrease the quantity demanded of that good or service. Conversely, a fall in price will increase the quantity demanded. Economists call this inverse relationship between price and quantity demanded the **law of demand**. The law of demand assumes that all other variables that affect demand (to be explained in Topic 4) are held constant.



Filling up your gas tank costs money. How does the price of gas affect the amount you drive? (Credit: Christopher/ Flickr/ CC BY-NC 2.0)

Let's look at these concepts in more detail with an example. Assume that your car holds 50L of gas and that at the average price of gas you would generally use about a tank of gas each month. This amount allows you to comfortably drive to school and back, run errands, and use the car on weekends for trips. As discussed above, this usage will change as price changes.

Demand Schedules and Curves

As a student on a tight budget, the price of gas will have a large influence on the amount you drive. When the price of gasoline goes up, you will look for ways to reduce your driving by combining errands, commuting by carpool or transit, biking and walking more, and driving less on weekends and holidays. So, what would happen if the price of gas was \$3.5/litre? Though you would likely be outraged that prices had risen so high, would you stop driving altogether? Perhaps, but perhaps not. Assuming there are some cases where your marginal benefit for driving is so high that you are willing to pay this high premium, we can estimate that you might use about one tank over the semester. This is about one quarter of the driving you are used to. This shows that for the first 50L of gas you consume, you are willing to pay a high price, in this case \$3.5/L.

Demand Schedule (for one semester of driving)	
MB of first tank	\$3.5
MB of second tank	\$2.4
MB of third tank	\$1.6
MB of fourth tank	\$0.9
MB of fifth tank	\$0.4

Figure 3.2a

If, from the high price of \$3.5, the price falls to \$2.4, you will drive more. At this price you may use 100L of gas, or about two tanks, over the course of a semester. Using this we can make a **demand schedule**, as shown in Figure 3.2a, for a typical student. This illustrates the law of demand. For the first tank of gas you were willing to pay a high price of \$3.5/L, but for the second tank you were only willing to pay \$2.4/L. As price falls, the quantity you demand increases.

This analysis can be continued for the third, fourth, and fifth tanks of gas. To create a more visual representation, we can plot the quantities of gas a student is willing to buy at varying prices on a graph as shown in Figure 3.2b. Once again, we see that as the price falls, quantity demanded increases.

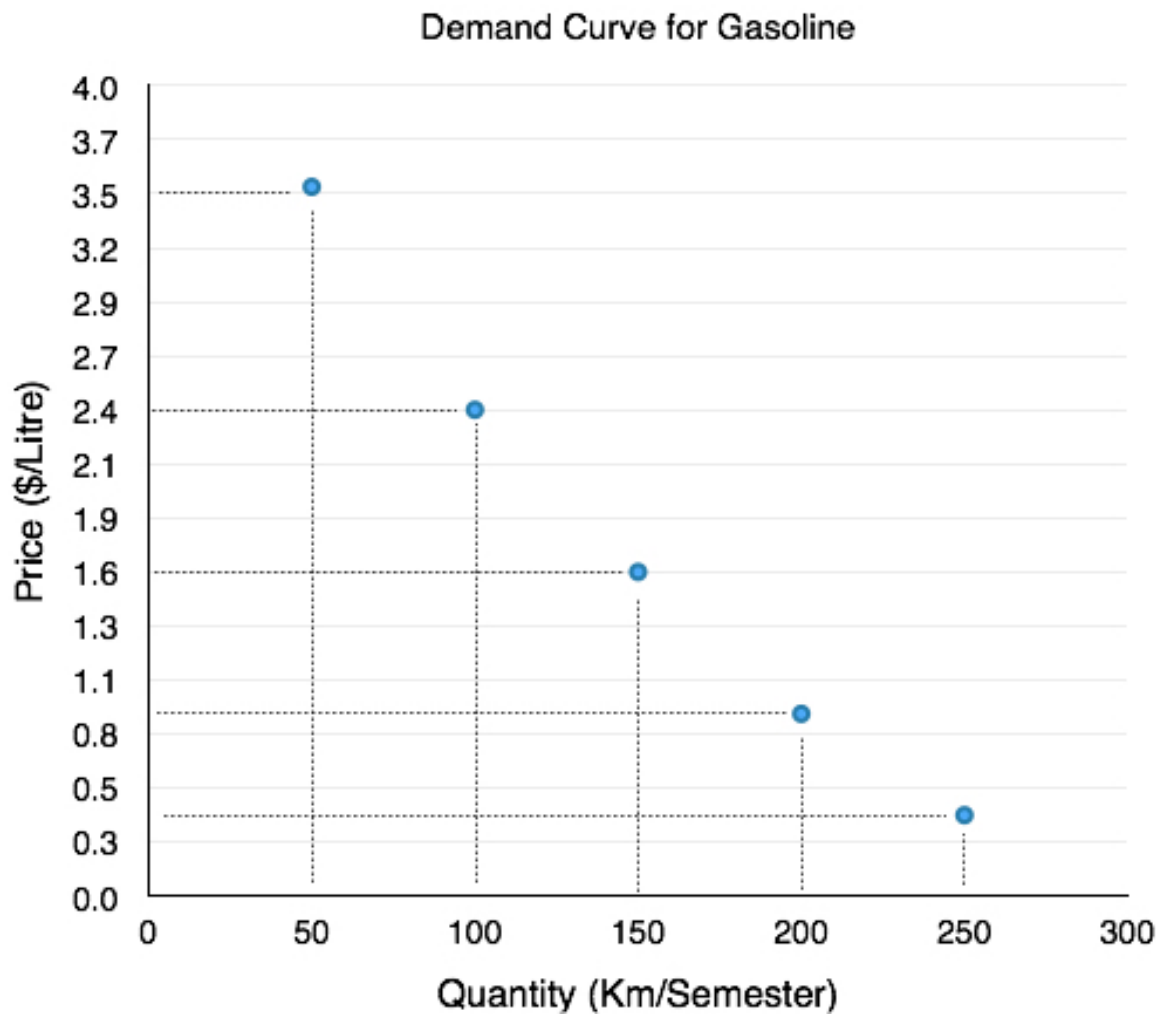


Figure 3.2b

If we join the points together as in Figure 3.2c, we produce a **demand curve** – a graphical representation of our demand schedule. This is the same as a Marginal Benefit Curve, as it shows the consumers marginal benefit at a given quantity.

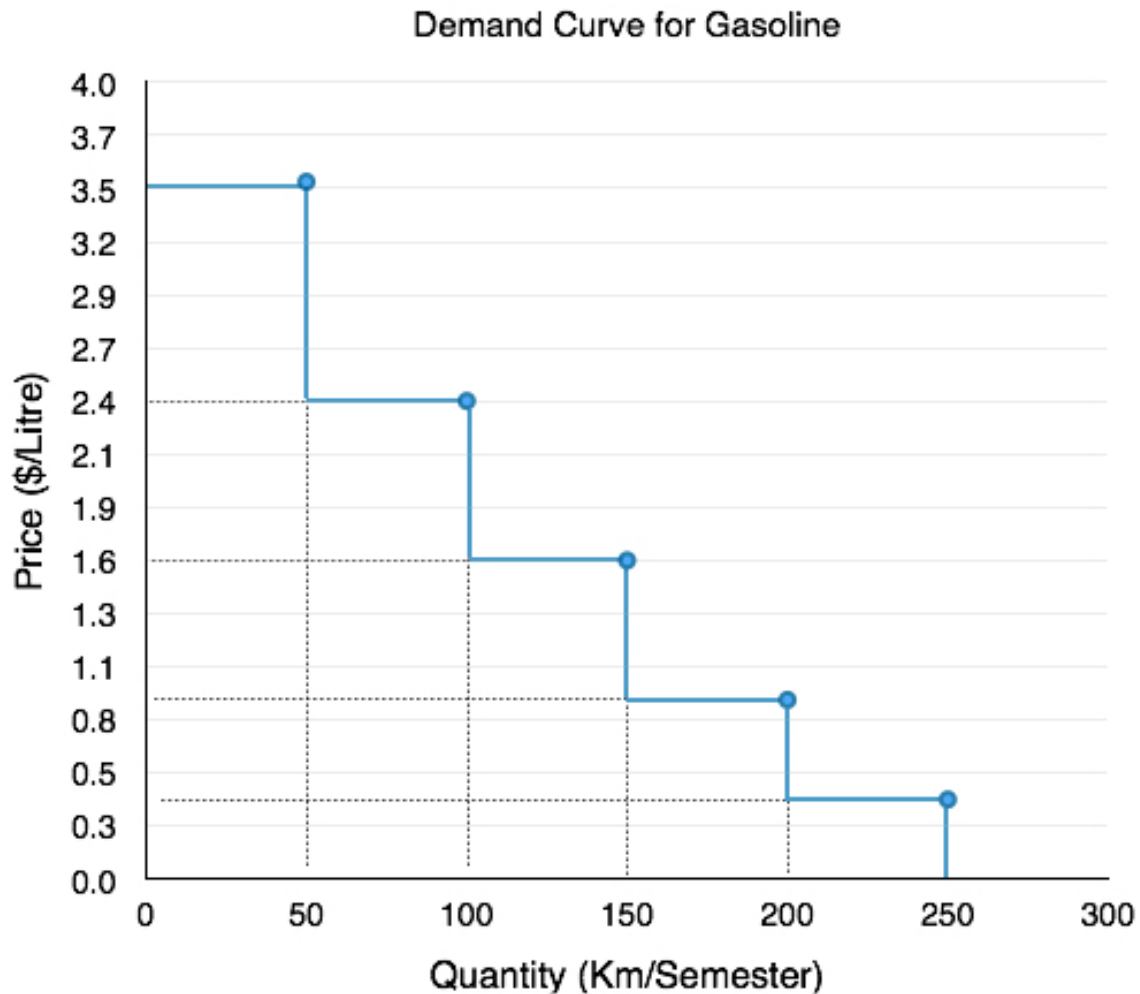


Figure 3.2c

The *Ceteris Paribus* Assumption

In section 3.1, we mentioned that we hold certain variables constant to analyze the ones that are most important. In the case of the **demand curve** (and the supply curve, as we will soon see), we are examining a relationship between two, and only two, variables: quantity on the horizontal axis and price on the vertical axis. The assumption behind a demand or supply curve is that no economic factors other than the product's price are changing. Economists call this assumption ***ceteris paribus***, a Latin phrase meaning “other things being equal.” Any given demand or supply curve is based on the *ceteris paribus* assumption that all else is held equal. If all else is not held equal, then the laws of supply and demand will not necessarily hold.

With the information about our demand curve and with the *ceteris paribus* assumption, we can determine what quantity our student will consume at a given price. So, what if our price is \$0.9? This is fairly close to what you would expect to pay for gas in the current market. Alas, by examining the demand curve in Figure 3.2d, we see what we had discussed earlier. The student will travel about 200 km per semester, using about a tank of gas each month. We determine this by looking at where price is equal to the student's marginal benefit, or where the price line intersects the demand curve.

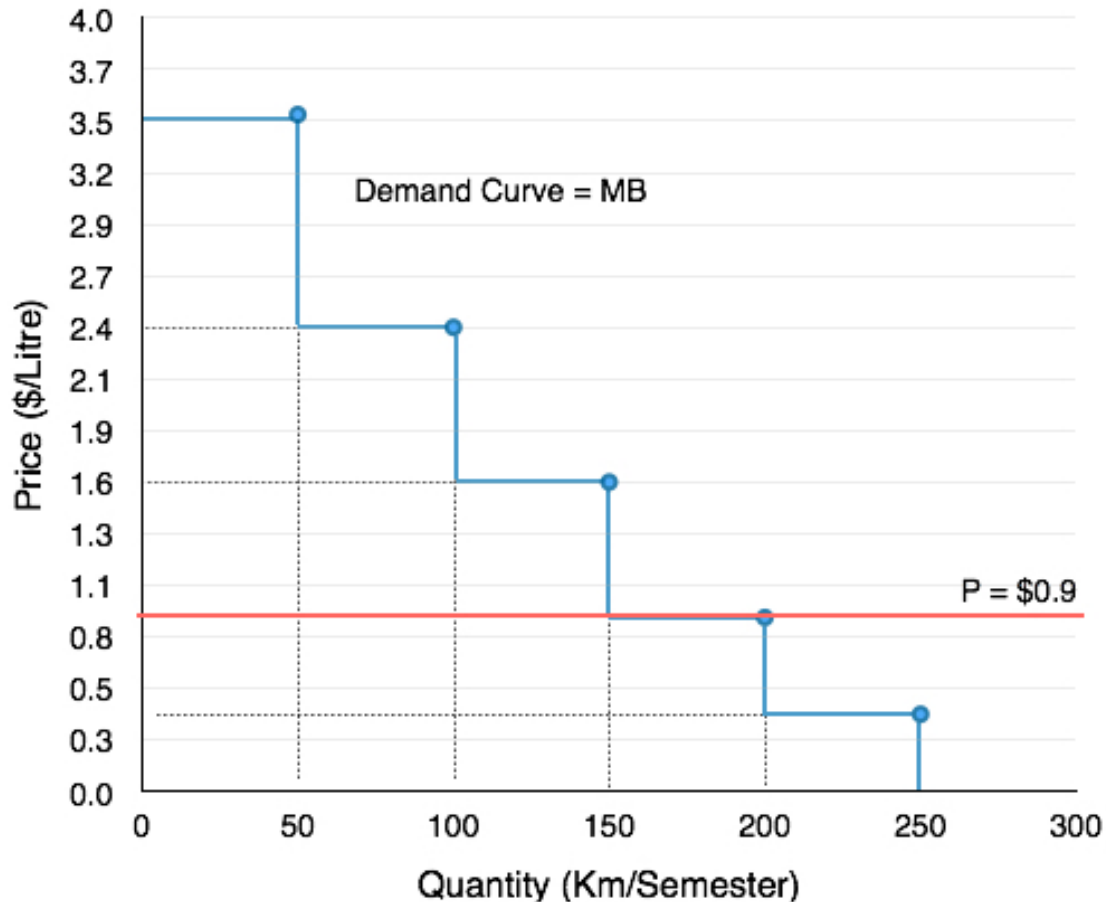


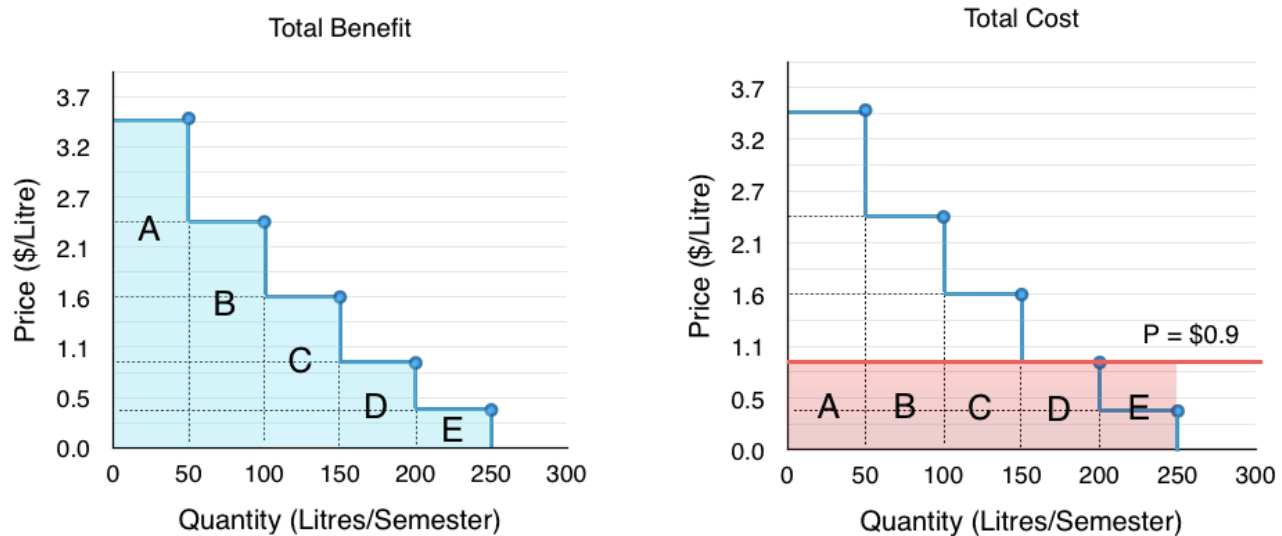
Figure 3.2d

In Topic 1, we determined that a consumer will purchase something as long as $MB > MC$. Since the price of gas is constant in this example, the student's marginal cost is constant as well. Why does the student not consume 50L of gas? At 50L, the student's MB is \$3.5, which is greater than the MC of \$0.9. Likewise, the MB at 100 and 150L is also greater. At 200L, the MB is equal to the marginal cost of \$0.9, so the student will purchase 200L. Any more and MB will fall below MC, meaning the cost of the action outweighs the benefits.

Consumer Surplus

Notice that for the first 150L of gas purchased, the student's MB is greater than his MC. In Topic 1, we discussed that this difference is equal to the marginal net benefit. By examining the marginal net benefit at each level of consumption, we can measure a consumer's total net benefit from their purchase, or their **consumer surplus**. Consumer surplus is the difference between the consumer's willingness to pay and the amount they actually pay for a given quantity, or the total benefits minus the total costs of consumption.

Looking at Figure 3.2e, we can see that the benefit from each 50L increase is diminishing. For the first 50L, where our marginal benefit from consumption is \$3.5/L, our total benefit is equal to area A, or \$175, whereas our next 50L only give us an additional benefit of area B, or \$120. Regardless, these 50L still increase our total benefit from \$175 to \$295. Our total cost from the first 50L is \$0.9/L or \$45



Notice that for the first 150L of gas purchased, the student's MB is greater than his MC. In Topic 1, we discussed that this difference is equal to the student's marginal net benefit. By examining the marginal net benefit at each level of consumption, we can measure a consumer's total net benefit from their purchase, or their **consumer surplus**. Consumer surplus is the difference between the consumer's willingness to pay and the amount they actually pay for a given quantity, or the total benefits minus the total costs of consumption.

We can break down how this corresponds to consumer surplus with marginal analysis. For the first 50 units of production, with total benefit of \$175 and total cost of \$45, our consumer surplus is equal to \$130. We continue this analysis in Figure 3.6f. As long as our MB is greater than our MC, consumer surplus will continue to increase.

Quantity Purchased	Corresponding Area	Total Benefit	Total Cost	Consumer Surplus
50	A	\$175	\$45	\$130
100	A+B	\$295	\$90	\$205
150	A+B+C	\$375	\$135	\$240
200	A+B+C+D	\$420	\$180	\$240
250	A+B+C+D+E	\$440	\$225	\$215

Figure 3.6f

Take special note of total benefits and total costs at the consumption level of 250. Recall that we determined the optimal level of production was when $MB = MC$. With our price of \$0.9, this occurred when quantity demanded was equal to 200L. Students often get confused when looking at the table above and point out that at 250L, total benefits are greater than total costs, and reason that the consumer should continue to consume beyond 200L, but remember, it is not the **total** benefits and costs that matter in marginal analysis. For example, if you were willing to pay \$1 for a Coke but it costs \$3, it doesn't matter how many Cokes you purchased previously, or the benefit or costs of those former Cokes. All that matters are the costs and benefits for the next unit of consumption. This is the heart of marginal analysis.

Bringing the marginal analysis together, we can look holistically at consumer surplus. Recall that consumer surplus is just the difference between the consumers willingness to pay (the blue line) and the cost to the consumer (the red line). By calculating this area (shown shaded in green in Figure 3.2g) we can easily find consumer surplus without having to look separately at Total Benefits and Total Costs.

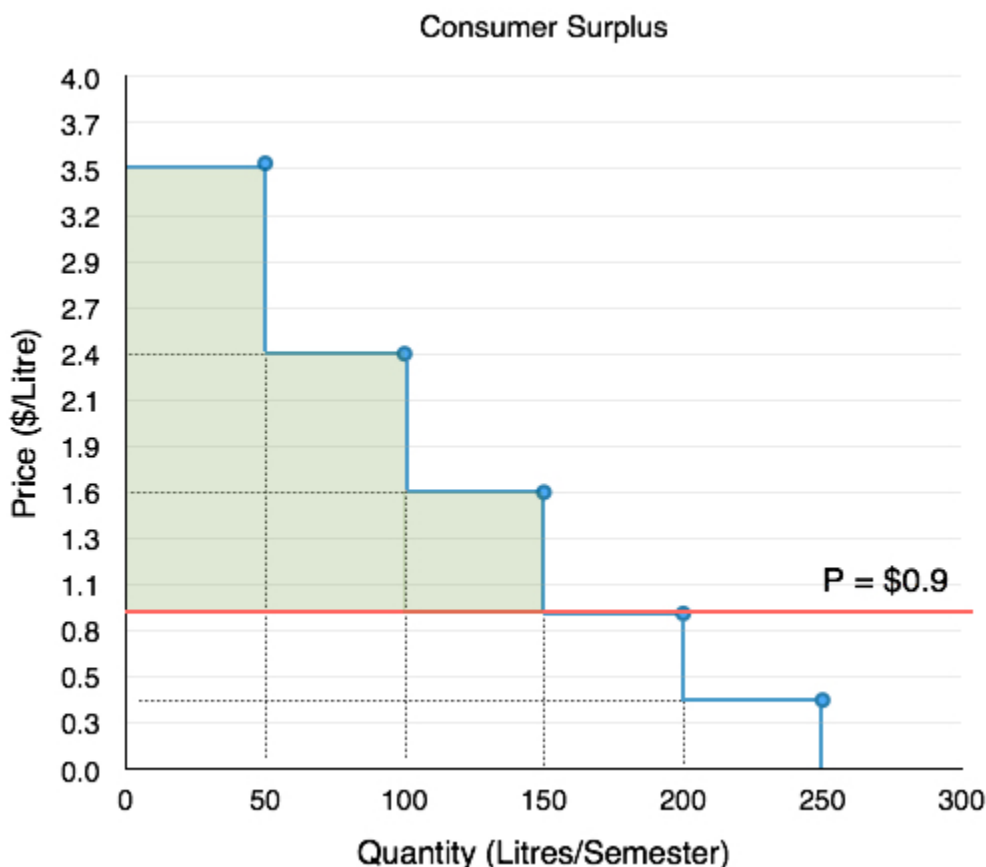


Figure 3.2g

Consumer Surplus with Changing Prices

We have now examined the consumer surplus when price is \$0.9/L, but what if our price changes? Suppose that price suddenly rises to \$2.4/L. By the law of demand, we have established that this increase in price will cause a decrease in quantity demanded, but it is also important to explore how consumer surplus changes. Consumer surplus can be used to analyze changes in consumer well-being as market conditions change, making it a useful tool to analyze how society is impacted.

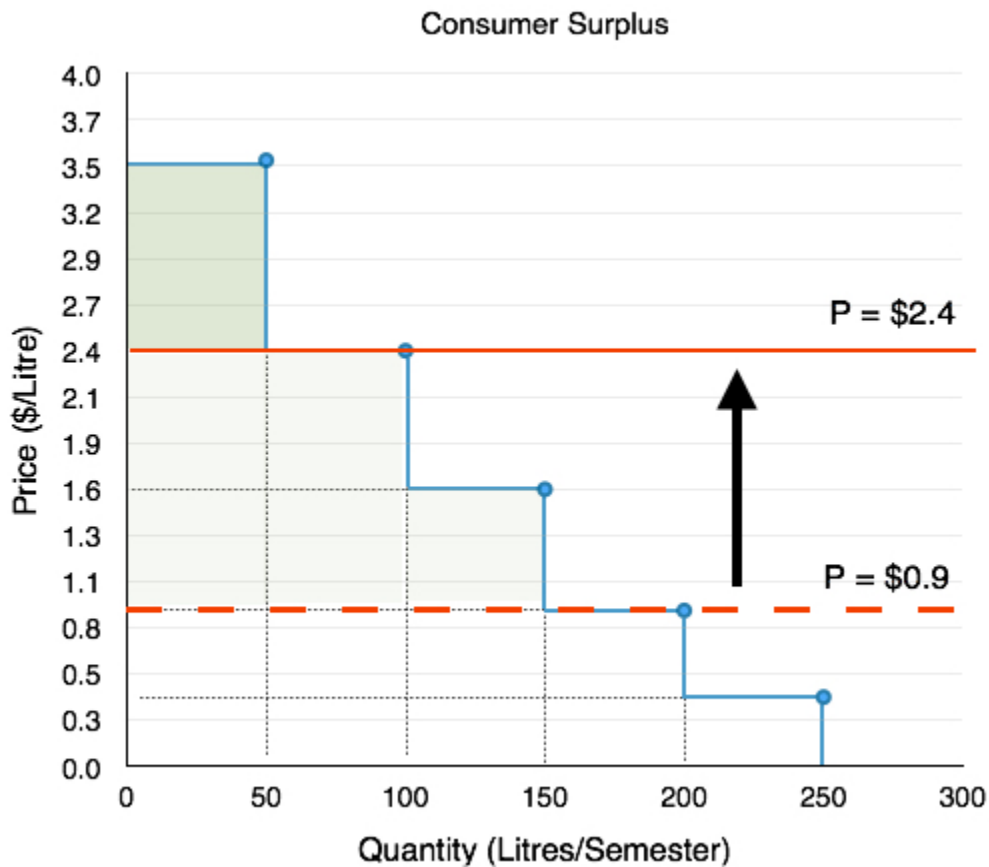


Figure 3.2h

In Figure 3.2h, we see that consumer surplus decreases from \$240 to \$55. This fall is caused by two factors. First, the student is buying less gas. As discussed before, when price is \$2.4/L, the student will combine errands, etc. to decrease the amount they drive. Second, the gas they continue to buy (100L) is now more expensive than before. We can summarize these two changes easily. When prices increase, consumer surplus decreases because:

1. **The quantity** that the consumer consumes decreases.
2. **The price** of the goods the consumer continues to buy increases.

Completing the Demand Curve

The last component of the demand curve to discuss is the **divisibility of goods**. In our example above, how would quantity demanded change if price increased from \$0.9/L to \$1.0/L? In our example, it falls from 200L demanded to 150L demanded! What about a price increase from \$0.9/L to \$1.6/L? Again our quantity demanded falls from 200L to 150L. Does this mean the price increase from \$1.0/L to \$1.6/L means nothing? This problem is due to the fact that we only examined five possible points on our curve. In reality, the demand curve has an infinite number of relationships between price and quantity

If we were to plot the quantity demanded for every possible price of gasoline, we find a smoothed-out curve like the one shown in Figure 3.2i. When we do this, we find the quantity demanded for \$1.0/L of gas is different than the quantity demanded for \$0.99/L of gas. In reality, the average consumer may not

change his or her consumption of gas in response to such a minor price change, and may have a demand curve that looks more like the staircases presented earlier, but when you bring together the millions of Canadian gas purchasers with varying willingness to pay, different reactions to prices changes, etc. the divisibility of goods becomes more plausible.

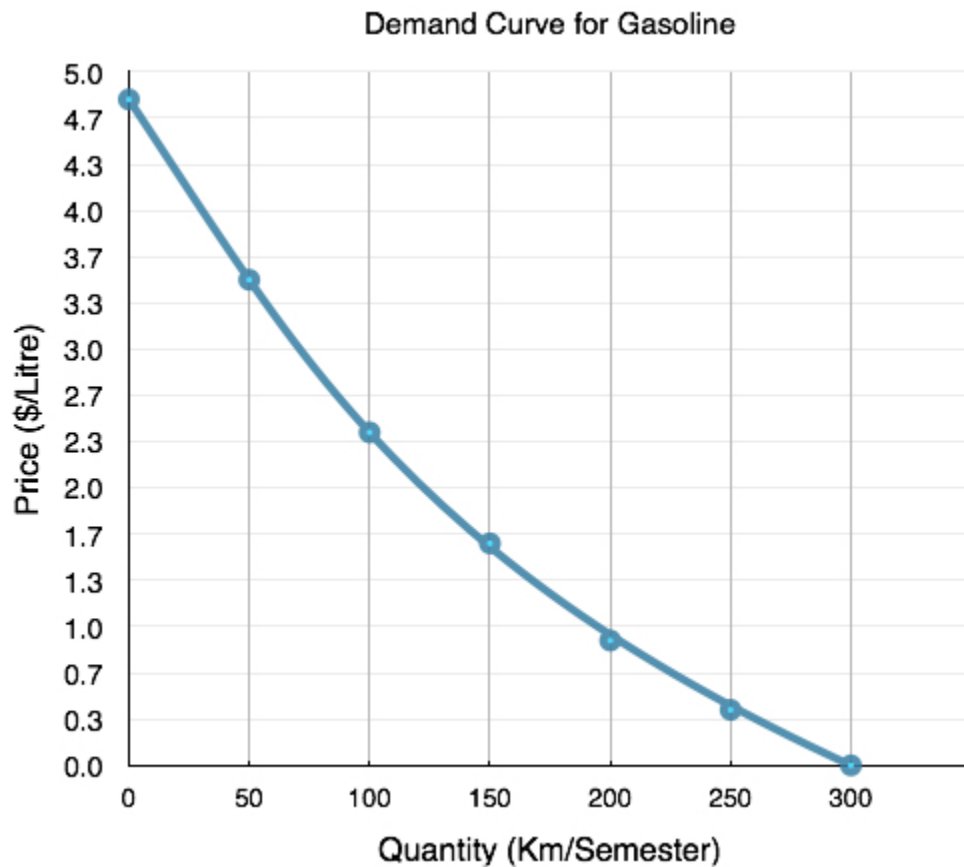


Figure 3.2i

Summary

In this section, we examined the market from the eyes of the consumer and introduced consumer surplus to explain how a consumer reacts to price changes. In section 3.4, we will examine the market from the eyes of the producer and introduce the concept of producer surplus. With a strong understanding of consumer and producer surplus, we can examine the impact that changes in the market have on society. Before we get there, we must examine the other determinants of demand that can impact our demand curve.

Glossary

Ceteris Paribus

all else equal

Consumer Surplus

the difference between a consumer's willingness to pay, and the price they actually pay

Demand Curve

a graphic representation of the relationship between price and quantity demanded of a certain good or service, with quantity on the horizontal axis and the price on the vertical axis

Demand Schedule

a table that shows a range of prices for a certain good or service and the quantity demanded at each price

Demand

the relationship between price and the quantity demanded of a certain good or service

Law of Demand

the common relationship that a higher price leads to a lower quantity demanded of a certain good or service and a lower price leads to a higher quantity demanded, while all other variables are held constant

Marginal Benefit (MB)

the additional satisfaction or utility that a person receives from consuming an additional unit of a good or service, equal to WTP

Marginal Analysis

an examination of the additional benefits of an activity compared to the additional costs incurred by that same activity, used as a decision-making tool

Price

what a buyer pays for a unit of the specific good or service

Quantity Demanded

the total number of units of a good or service consumers are willing to purchase at a given price

Willingness to Pay (WTP)

the largest sum of money an individual is willing to give up to receive a product or service

Exercises 3.2

1. A buyer has purchased three units of good X. The marginal benefit of the fourth unit of X exceeds the marginal cost of the fourth unit of good X. Which of the following reasons explains why the buyer should purchase the fourth unit?

- I. The marginal net benefit of the fourth unit is positive.
- II. Buying the fourth unit will increase total benefits by more than total costs.
- III. Buying the fourth unit will increase total benefits and decrease total costs.

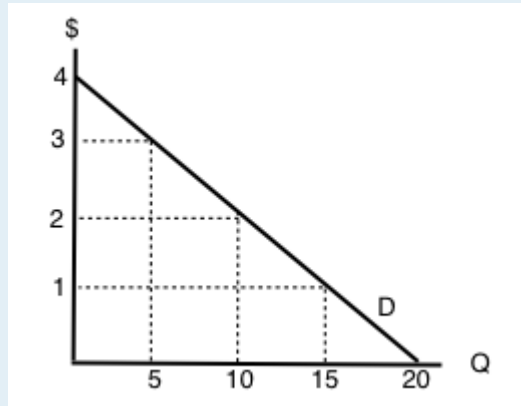
- a) I only
- b) I and II only
- c) II only
- d) I, II, III

2. According to marginal analysis, optimal decision-making involves:

- a) Taking actions whenever the marginal benefit is positive.
- b) Taking actions only if the marginal cost is zero.

- c) Taking actions whenever the marginal benefit exceeds the marginal cost.
- d) All of the above.

The following TWO questions refer to an individual's demand curve diagram, illustrated below.



3. If the price of this good is \$1 per unit, what will be the quantity demanded?
 - a) 5.
 - b) 10.
 - c) 15.
 - d) 20.

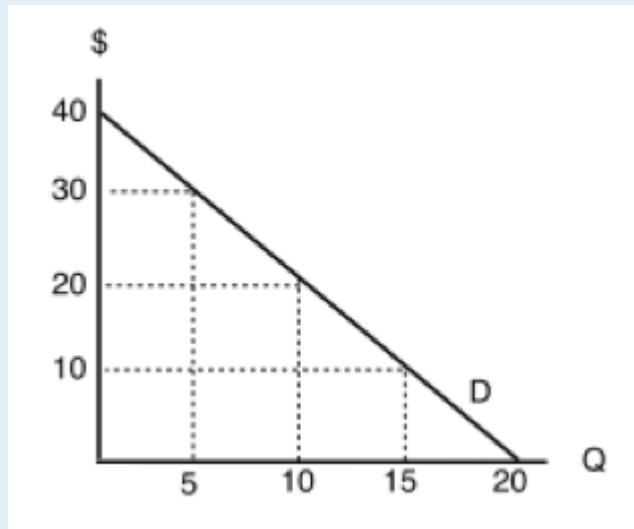
4. What are the TOTAL benefits to this individual if she consumes 10 units of the good?
 - a) \$5.
 - b) \$10.
 - c) \$20.
 - d) \$30.

5. The demand curve for a good is derived from the:
 - a) Marginal cost of the good.
 - b) Marginal benefit of the good.
 - c) Marginal benefits of the good minus marginal costs of the good.
 - d) Production Possibilities Frontier

6. Which of the following statements about demand curves is TRUE?
 - I. The "Law of Demand" holds if a consumer's marginal benefit is lower at higher quantities consumed than it is at lower quantities consumed.
 - II. If the consumer's marginal benefit is the same no matter what quantity is consumed, then her demand curve will be vertical.
 - III. All else equal, the marginal benefit of consuming a normal good will be higher for richer consumers than for poorer consumers.
 - a) III only.
 - b) I and II only.

- c) I and III only.
- d) I only.

The following FOUR questions refer to the diagram below, which illustrates a consumer's demand curve for a good.



7. If the price of this good is \$30, what quantity will be demanded?

- a) 5 units.
- b) 10 units.
- c) 15 units.
- d) 20 units.

8. If the price of this good is \$20, what quantity will be demanded?

- a) 5 units.
- b) 10 units.
- c) 15 units.
- d) 20 units.

9. If the price of this good is \$20, what will consumer surplus equal?

- a) \$100.
- b) \$200.
- c) \$300
- d) \$400.

10. If the price of this good falls from \$30 to \$20, but the consumer is prohibited from buying more than 5 units of the good, by how much will consumer surplus increase?

- a) \$100.
- b) \$75.
- c) \$50
- d) \$25.

3.3 Other Determinants of Demand

Learning Objectives

By the end of this section, you will be able to:

- Understand the difference between demand and quantity demanded
- Know the four main determinants of demand
- Explain demand shifts from both horizontal and vertical perspectives
- Create an aggregate demand curve given individual curves



(Credit: Olenka Kotyk/Unsplash)

A Better Bus System

In section 3.2, we explored how the price of gasoline affected quantity demanded, but what about other factors that affect our choices? In May 2016, New York's Metropolitan Transit Authority introduced high-tech buses equipped with Wi-Fi and USB ports to charge phones and other devices. These improvements encourage people to substitute away from cars, decreasing the demand for gasoline regardless of price. As we will see in this section, there are many determinants of demand. The four we will explore in detail are:

1. Income
2. Prices of Related Goods
3. Tastes and Preferences

4. Expectations

As you will see, changes in these factors affect the interaction of price and quantity on every point of our demand curve, resulting in a shift of the entire curve. First, let's clear up some terminology.

Is demand the same as quantity demanded?

In economic terminology, demand is not the same as quantity demanded. When economists talk about demand, they mean the relationship between a range of prices and the quantities demanded at those prices, as illustrated by a demand curve or demand schedule. When economists talk about quantity demanded, they mean only a certain point on the demand curve, or one quantity on the demand schedule. In other words, a change in quantity demanded is very different than a change in demand.

A **change in demand** refers to a **shift** in the demand curve that affects the whole diagram and the interactions between price and quantity.

A **change in quantity demanded** refers to a **movement along** the demand curve, exploring different points along the same curve.

We examined changes in quantity demanded in Topic 3.2. In this section, we discuss changes in demand.

1. Income

The first determinant of demand we will explore is income. If you were to land a job with a top salary tomorrow, how would that affect your demand for different items? Perhaps you would exchange your old Honda Accord for a Porsche, or go on a shopping spree at a high-end clothing store. Though having more money means you can buy more goods, there are some goods that you may actually buy less of. In introductory microeconomics, we classify goods into two types: **inferior goods** and **normal goods**. For inferior goods, as your income *rises* your demand *falls*. For normal goods, as income *rises* your demand *rises*.

Consider Kraft Dinner and steak. On a student budget, Kraft Dinner or similar low-cost items can be a dietary necessity, but as your income increases, you will likely eat less of these low-quality foods. This makes Kraft Dinner an **inferior good**. On the other hand, as your income increases, you will likely consume more steak and other fine dining foods, making them **normal goods**. Note that what we consider to be inferior or normal is relative. A millionaire food connoisseur may regard a food you view as a delicacy as an inferior good that they would only eat if they couldn't afford such a luxurious lifestyle. Regardless, income is still an important factor in our decision making and it is useful to make generalizations about how the market responds when incomes change.



(Credit: Above: Mike Mozart/ Flickr/ CC BY 2.0, Below: Benjamin Horn/ Flickr/ CC BY 2.0)

So what effect does income have on the demand curve? Assume we have an increase in income for our consumers of gasoline. With more money you may be less conscious about the amount of gas you use – perhaps you will finally buy an expensive parking pass and drive more. Assuming that gasoline is a normal good, this is going to result in an increase in demand. In Figures 3.3a and 3.3b, we depict two different ways to view this shift.

Vertical Shift – Figure 3.3a

The first way to look at a demand shift is to examine how a consumer's willingness to pay (WTP) changes. With your original income, you were willing to pay \$0.9/L to use 100L of gas per semester (note this is simplified from the example in 3.2 to be linear). When income triples, it is estimated we are willing to pay \$3.3/L. Recall that demand is determined by preferences and ability to pay, so for a normal good WTP will increase as income rises. Notice that this increase is uniform at any point along the demand curve. Whereas you were WTP only \$1.7/L for 50 units, you are now WTP \$4.1/L. All across the demand curve, our willingness to pay has increased by \$2.4/L.

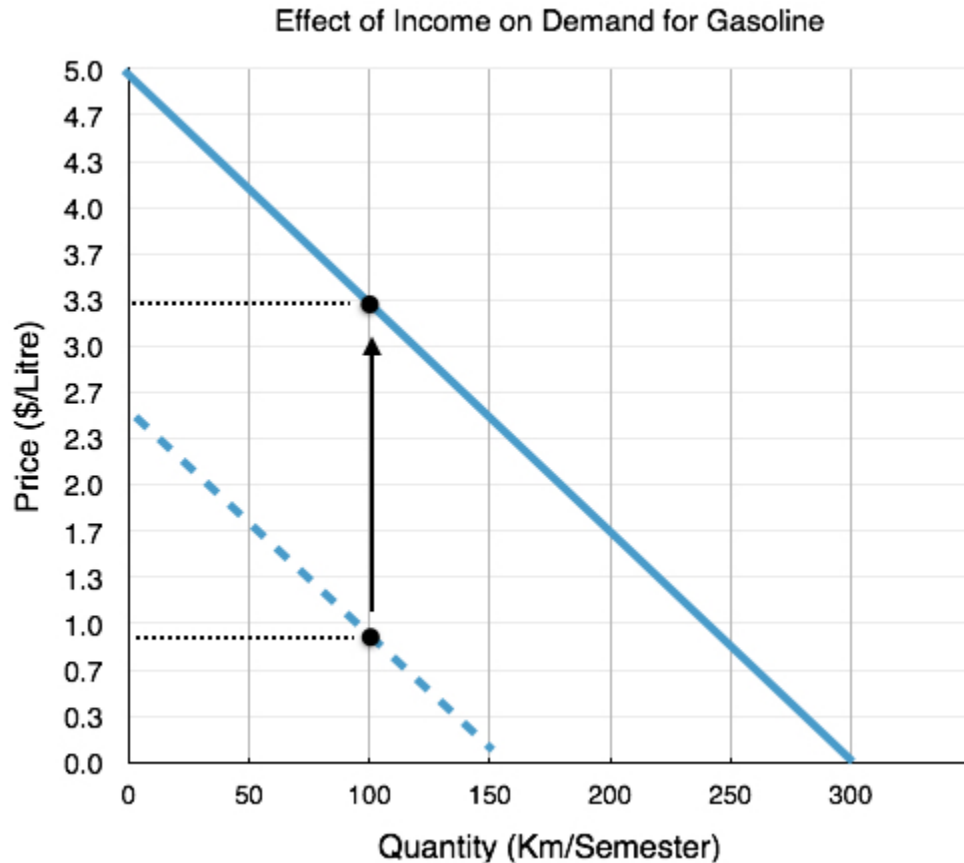


Figure 3.3a

Horizontal Shift – Figure 3.3b

The second way to view a demand shift is to look at how a consumer's quantity demanded changes at each point along the curve. At a price of \$0.9/L, the student initially has a quantity demanded of 100L. After income increase this has risen to 250L. This way of viewing the demand shift is why we call the change a shift in 'demand' instead of quantity demanded as the quantity demanded at every point along the curve has changed.

Where the individual actually chooses to consume depends on the supply curve. In 3.2, we examined a demand curve with a constant price. As we will see when we examine the supply curve, shifts often affect both the final price and quantity in the market.

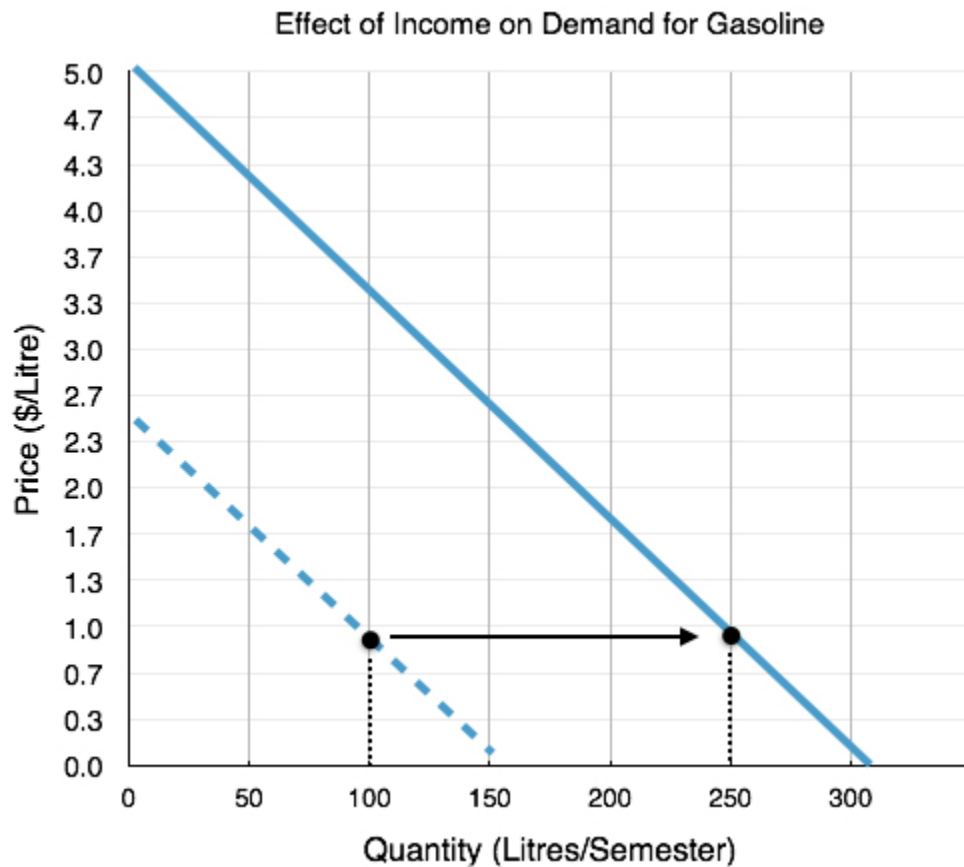


Figure 3.3b

The following table summarizes the different effects income changes can have on our demand curve. Note that the best way to learn these concepts is to think of examples and practice shifting the demand curve. You can refer to the table to ensure you are on the right track!

	Normal Good	Inferior Good
Increase in Income	Increased Demand	Decreased Demand
Decrease in Income	Decreased Demand	Increased Demand

Figure 3.3c

2. Price of Related Goods

So far, we have only looked at one good in isolation. In reality, there are many goods in the marketplace that interact with each other in unique ways. Some goods seem to pair nicely, whereas others compete. These interactions have specific classifications in economics. With reference to the good we are analyzing in our demand curve:

Complement goods are goods that a consumer likes to consume **with** a given good. For example, peanut butter and jelly. Demand for complements is positively correlated with the other goods price. If jelly increases in price, we will purchase less peanut butter.

Substitute goods are goods that a consumer could consume **instead of** a given good. For example, peanut butter and almond butter. Demand for substitutes is negatively correlated with the other goods price. If almond butter increases in price, we will purchase more peanut butter.

Like income, the impact of market price fluctuations on our demand curve depends on whether the two goods are substitutes or complements. The following table summarizes how our demand for a given good can be impacted by price fluctuations of other goods.

	Complement	Substitute
Increase in Price	Decreased Demand	Increased Demand
Decrease in Price	Increased Demand	Decreased Demand

Figure 3.3d

Taking Advantage of Complements



(Credit: dbgg1979/ Flickr/ CC BY 2.0)

Businesses are well-versed in the knowledge of complements and substitutes, and often use consumer behavior to their advantage. Consider common displays of complementary products, such as a display of marshmallows, chocolate, and graham crackers, each a component of the summer-beloved S'more. A business may put graham crackers on sale, but not the chocolate. If the graham crackers were displayed alone on sale, the quantity demanded of the good would rise, according to the law of demand. By displaying the goods together, this business is reminding consumers that graham crackers are a complement to chocolate. This will make consumers also more likely to purchase chocolate, even though price has not changed.

3. Tastes and Preferences

Our tastes and preferences change over time. In our gasoline example, assume you start dating someone who drives an electric car and constantly reminds you of the impact your gasoline consumption has on the environment. You will likely begin to follow some of their habits and purchase less gasoline. Marketing departments constantly try to influence your preferences, and sometimes even create them. That's because the more you prefer a product, the more you will demand it!

4. Expectations

The last determinant of demand we will explore is perhaps the most nuanced. It is that the expectation of the future price of a good can affect how much consumers will demand it today. For example, if you are a frequent shopper at Hudson's Bay, you will be aware of the company's regular sales. With sales so frequent, you may be reluctant to purchase any non-discounted item. Since the actual date of the sale is unknown, this is a motivator to wait, decreasing demand today. To really emphasize this point, consider Steam, a digital distribution platform developed by Valve Corporation that sells PC video games online and provides a platform for users to interact. Steam has performed well, with its sales constituting 50%–70% of the US\$4 billion market for downloaded PC games. If you are a Steam user, you understand the role of expectations play when purchasing games. Since Steam holds regular holiday-themed sales where they blow out a large portion of their catalog with discounts as high as 80% off there is always the expectation that you can buy the game for a lower price later. This is an even stronger motivator as consumers know exactly when to look for the sales. This will decrease demand for the game when there are no promotions.

If you expect the good to become **more expensive**, your present **demand will increase**.

If you expect the good to become **less expensive** your present **demand will decrease**.

How soon you expect prices to change will affect the power of expectations. We all know the new iPhone is going to be cheaper six months down the road than when it first comes out, but there are certain benefits to having the product when it first hits the shelves. Firms work hard to create a perceived obsolescence in order to sell goods when they are new. For example, if you fear clothes may go out of style, you are influenced to purchase them immediately rather than wait for sales.

Market Demand

So far, while we have hinted at the market as a whole, the majority of our analysis has looked at one consumer and their demand curve. In reality, we know the market is made up of many consumers, each with individual preferences and willingness to pay. To illustrate market demand (also known as aggregate demand), we can start with two demand curves. In Figure 3.3e below, two individual demand curves for gasoline are illustrated in green and blue. These demand curves could be different for a number of reasons, consumer B could have higher income, could enjoy driving more, or any other determinant of demand that would make his willingness to pay higher. Notice first that the slopes of the demand curves are the same, and while this need not be the case, it makes analysis simple.

To find the aggregate demand line, you simply pick two prices on the individual demand curves and add up the quantity demanded from each consumer. For example, at the price of \$1.3/litre, consumer A has quantity demanded of 100 litres/semester, whereas consumer B has quantity demanded of 200 litres/semester. In aggregate consumer A + consumer B have quantity demanded of 300 litres/semester – this gives us point C on the graph of aggregate demand. Likewise at the price of \$3.7/litre, consumer A has quantity demanded of 50 litres/semester, whereas consumer B has quantity demanded of 150 litres/semester resulting in 200 litres of aggregate demand (50+150).

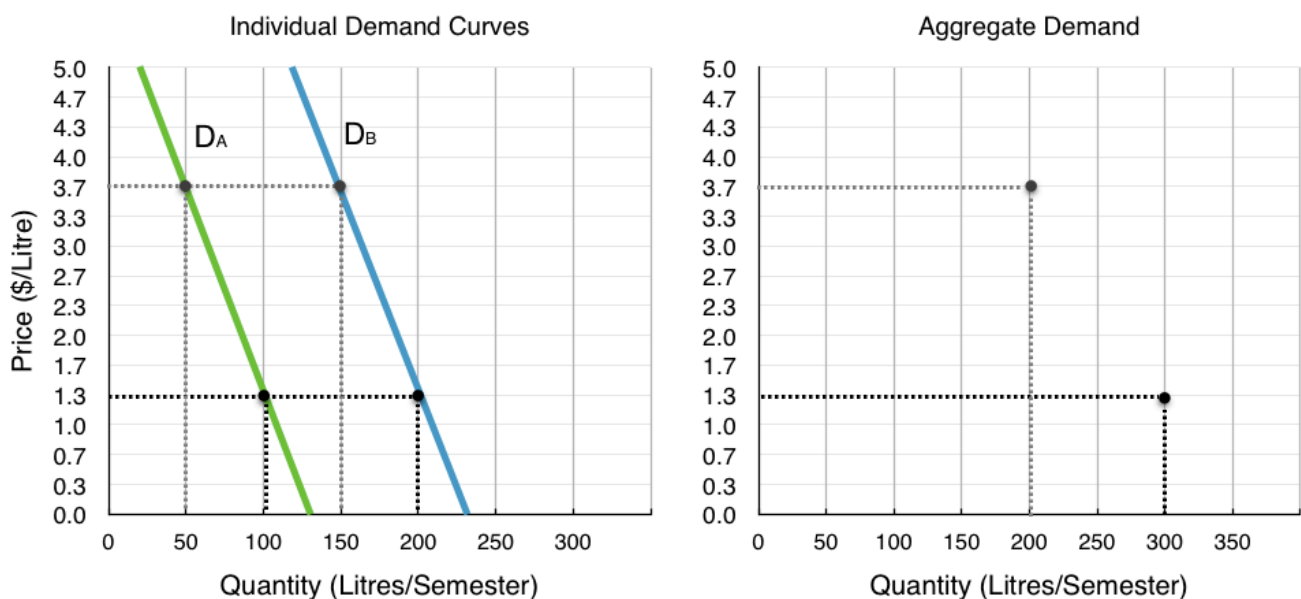
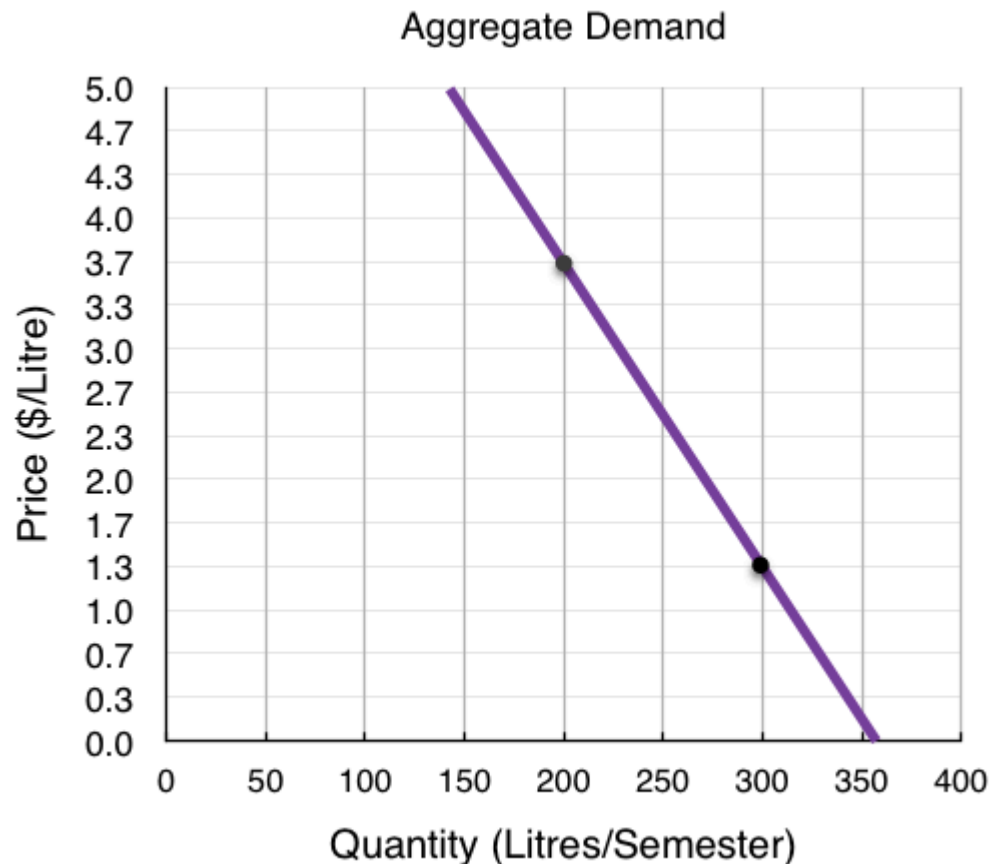


Figure 3.3e

Now you have two points on the market demand curve, with this, you can connect the two points to give the whole curve.



Note that market demand behaves in the same way as individual demand: it is shifted by external forces like income, prices of related goods, preferences, and expectations. When examining demand from now on, we will, for the most part, be analyzing market demand to determine equilibrium.

Summary

We now know that a demand curve is constructed by considering a consumers willingness to pay and different quantities, and the aggregate demand curve is the sum of all consumers demand curves. While price changes influence our quantity demanded, shocks such as changes in income, price changes of related goods, changes in tastes, and expectations can shift our demand, resulting in a different willingness to pay at every level. Now that we understand demand, we can turn to supply and its determinants.

Glossary

Complements

goods that are often used together so that consumption of one good tends to enhance

consumption of the other

Inferior Good

a good in which the quantity demanded falls as income rises, and in which quantity demanded rises and income falls

Market Demand

The aggregate of the demands of all potential customers (market participants) for a specific product over a specific period in a specific market.

Normal Good

a good in which the quantity demanded rises as income rises, and in which quantity demanded falls as income falls

Shift in Demand

when a change in some economic factor (other than price) causes a different quantity to be demanded at every price

Substitute

a good that can replace another to some extent, so that greater consumption of one good can mean less of the other

Exercises 3.3

1. Which of the following statements about demand curves is TRUE?

- a) If price falls and quantity demanded increases, this is represented by a movement along a given demand curve.
- b) If price falls and quantity demanded increases, this is represented by a shift of the demand curve.
- c) If price falls and quantity demanded increases, this can be represented by either a movement along a given demand curve, or a shift of the demand curve.
- d) None of the above are true.

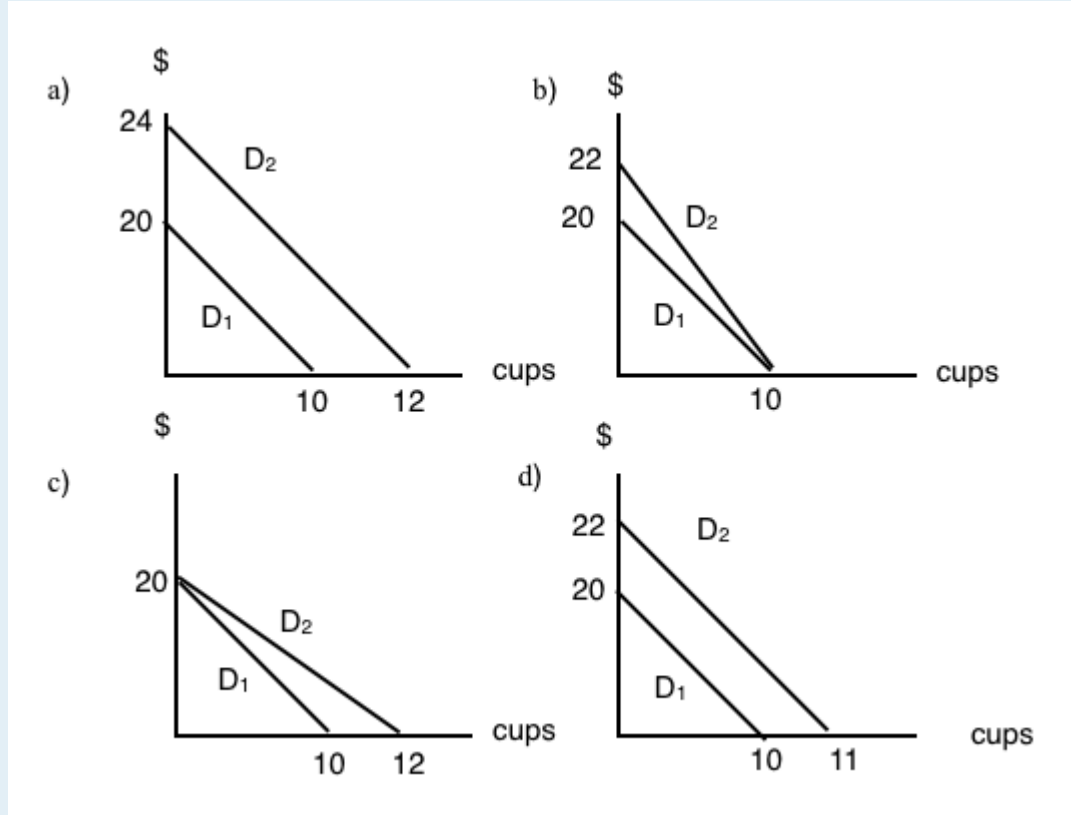
2. Which of the following is NOT a determinant of the demand for good X?

- a) The income of consumers who buy good X.
- b) The cost of labor used to produce good X.
- c) The price of good Y, a complement to X.
- d) The number of buyers of good X.

3. Which of the following will result in a DECREASE in demand (i.e., a leftward shift of the demand curve)?

- a) An increase in income, if the good is normal.
- b) A decrease in the price of a complement to the good.
- c) An increase in the price of a substitute for the good.
- d) None of the above.

4. Suppose that my daily marginal benefit from drinking coffee increases by \$2 per cup. Which of the following represents the effect of this on my coffee demand curve?



5. Which of the following is NOT a determinant of the demand for good X?

- a) The cost of labor used to produce good X.
- b) The price of good X.
- c) The income of consumers who buy good X.
- d) The price of good Y, which is a substitute for good X.

6. Which of the following IS a determinant of the demand for good X?

- a) The income of consumers who buy good X.
- b) The cost of labor used to produce good X.
- c) The supply of good X.
- d) The number of sellers of good X.

7. A decrease in quantity demanded is, graphically, represented by:

- a) A leftward shift in the demand curve.
- b) A rightward shift in the demand curve.
- c) A movement up and to the left along a demand curve.
- d) A movement down and to the right along a demand curve.

8. Suppose goods X and Y are substitutes. Which of the following is TRUE?

- a) An increase in the price of X will result in a decrease in the equilibrium price of Y.
- b) An decrease in the price of X will result in an increase in the equilibrium quantity of Y.
- c) An increase in the price of X will result in an increase in the equilibrium quantity of Y.
- d) More than one of the above is true.

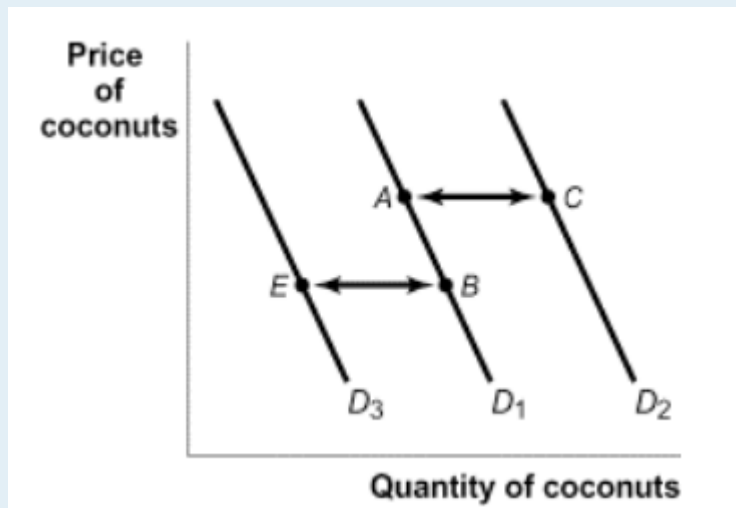
9. If cookies are a normal good and incomes increase, we would expect:

- a) An increase in equilibrium price and a decrease in equilibrium quantity.
- b) A decrease in equilibrium price and an increase in equilibrium quantity.
- c) A decrease in equilibrium price and equilibrium quantity.
- d) An increase in equilibrium price and equilibrium quantity.

10. A decrease in demand is, graphically, represented by:

- a) A leftward shift in the demand curve.
- b) A rightward shift in the demand curve.
- c) A movement up and to the left along a demand curve.
- d) A movement down and to the right along a demand curve.

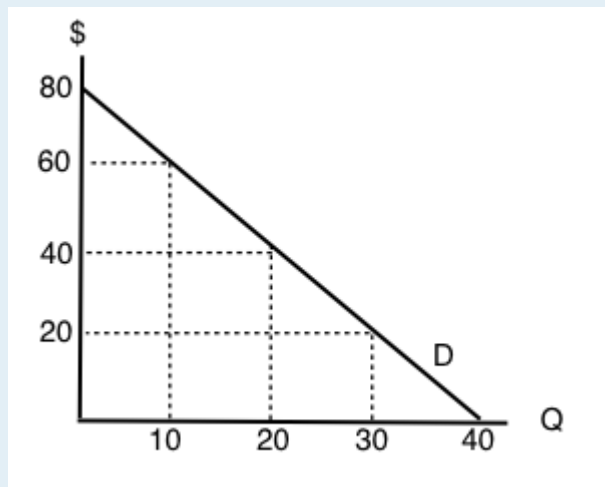
11. The diagram below illustrates 3 possible demand curves for coconuts.



Suppose that coconuts and pineapples are substitutes. If the price of pineapples increases, which of the following movements will represent the effect of this in the market for coconuts?

- a) A to C.
- b) A to B.
- c) B to A.
- d) B to E.

The following TWO questions refer to the diagram below.



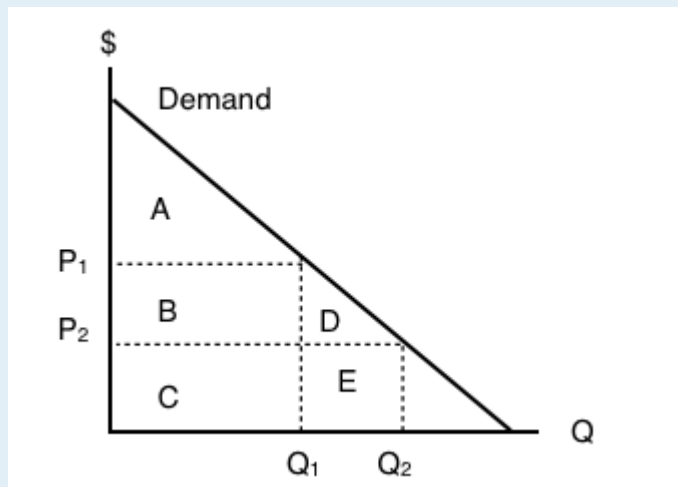
12. If the price of this good is \$20, what will be the quantity demanded?

- a) 10.
- b) 20.
- c) 30.
- d) 40.

13. If the price of this good is \$60, what will consumer surplus equal?

- a) \$50.
- b) \$100.
- c) \$150.
- d) \$200.

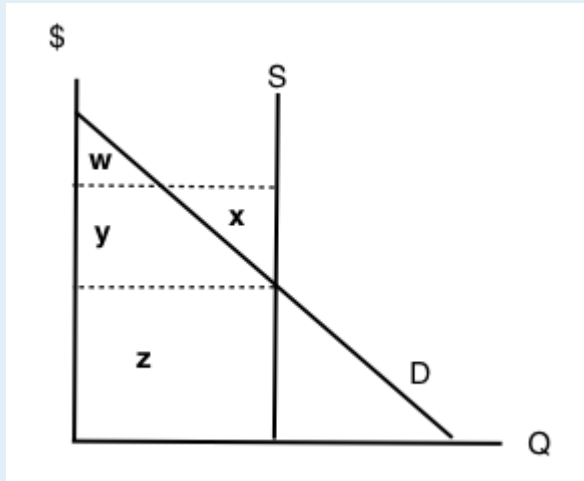
14. The following question refers to the diagram below, which illustrates an individual's demand curve for a good.



If the price of this good falls from P_1 to P_2 , then consumer surplus will _____ by areas _____.

- a) increase; B+D.
- b) decrease; B+D.
- c) increase; A+B+D.
- d) decrease; A.

15. Consider the diagram below.



At the equilibrium in this market, which area represents CONSUMER surplus?

- a) There is no consumer surplus.
- b) Area **w**.
- c) Area **x + y**.
- d) Area **w + y**.

16. Which of the following CANNOT result in a shift of the demand curve for a good?

- a) A change in consumers' incomes.
- b) A change in the price of the good.
- c) A change in the price of a complement to the good.
- d) All of the above will shift the demand curve.

17. Suppose the price of good X increases. If X and Y are substitutes, then, in the market for good Y, we would expect:

- a) An increase in both the equilibrium price and quantity.
- b) A decrease in the equilibrium price and an increase in the equilibrium quantity.
- c) An increase in the equilibrium price and a decrease in the equilibrium quantity.
- d) A decrease in both the equilibrium price and quantity.

18. If coffee and milk are complements, then which of the following will occur if the price of coffee increases?

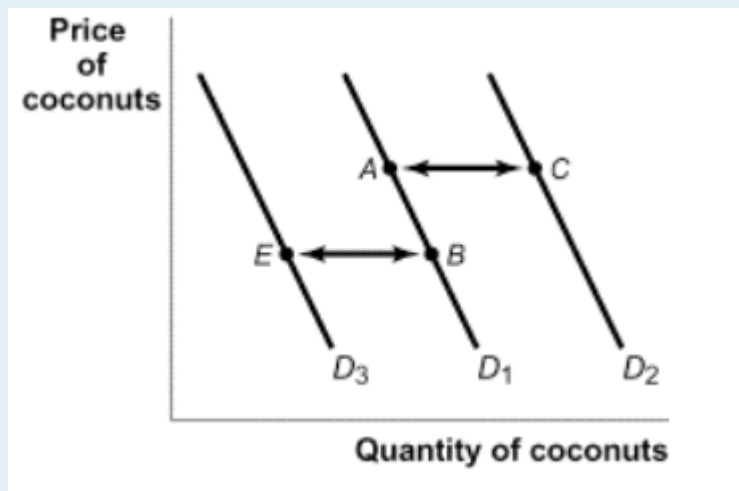
- a) The quantity of coffee demanded will increase.
- b) The quantity of coffee supplied will decrease.

- c) The demand for milk will increase.
- d) The demand for milk will decrease.

19. Consumer surplus is equal to:

- a) Revenue received for a good minus that good's cost of production.
- b) The amount of money a consumer is willing to pay for a good.
- c) The opportunity cost of a good.
- d) None of the above.

20. The diagram below illustrates 3 possible demand curves for coconuts.



Suppose that (i) coconuts are an inferior good and (ii) consumer incomes decrease. Which of the following movements could represent the effect of this in the market for coconuts?

- a) A to C.
- b) B to A.
- c) C to A.
- d) B to E.

3.4 Building Supply and Producer Surplus

Learning Objectives

By the end of this section, you will be able to:

- Explain quantity supplied, and the law of supply
- Understand how implicit and explicit costs are used to build a supply curve
- Calculate producer surplus given a marginal cost curve and price
- Explain the divisibility of goods



(Credit: Alaythia Cakes)

Now that we have examined demand and its determinants, let's look at supply. For the most part, the analysis is similar. Let's start with an example.

The Cupcake Business

When the store “Cupcakes” came to Vancouver in 2002, the cupcake industry was very different than it is today. The start-up was the only one in town and had the ability to set the price as it saw fit. Over 10 years later, the industry has changed. It is now common to see multiple cupcake shops in each city. New York even has a **cupcake ATM** where customers can buy cupcakes after the store closes. To understand the supply side of the market, let’s look at a cupcake business that operated in a far more competitive market model than the ones mentioned above – Alaythia Cakes. Alaythia Cakes, a small-town business that primarily sold its products at a weekly farmer’s market, was looking to bring its products to the provincial stage with distribution in grocery stores. Compared to the overall market, Alaythia Cakes was a small player, and when negotiating with brands like Save on Foods, Thrifty Foods, and Costco, it found that it had little to no power in negotiating price, since the grocery chains had access to many other cupcakes suppliers (no supplier power).

Opportunity Cost in the Real World

In Topic 2, we looked at the production possibilities of a person on an island, denominating costs in the marginal opportunity cost of an action. Let’s take that island example and apply it to a firm. While Alaythia Cakes was looking to expand, its production possibilities are limited by the owner and the capacity of the staff. The business can choose to produce and sell cookies, cupcakes, or a mix of both. Assume that:

Output per Hour	
Cupcakes	Cookies
0	60
5	56
10	48
15	36
20	20
25	0

For the first 5 cupcakes, the MC = 0.8 cookies (4 cookies/5 cupcakes)

For the second 5 cupcakes, the MC = 1.6 cookies (8 cookies/5 cupcakes)

For the third 5 cupcakes, the MC = 2.4 cookies (12 cookies/5 cupcakes)

Figure 3.4a

With this information, we can derive the supply curve, but first we need to denominate the marginal cost in the correct medium of exchange – dollars. Let’s assume the current market price for cookies is \$0.50 per cookie. Then, for the first 5 cupcakes, implicit costs are $\$0.50 \times 0.8 = \0.4 . All we are doing is changing the way we describe cost from ‘cookie terms’ to ‘dollar terms.’ Is this all our costs? Recall in Topic 1 that the opportunity costs of an action include all implicit and explicit costs. In this case, an explicit cost would include the actual cost of flour, eggs, etc. Let’s assume that the explicit costs of a cupcake are \$0.5. This means:

MC of 1st 5 cupcakes = \$0.5 (explicit) + \$0.4 (implicit) = **\$0.9**

MC of 2nd 5 cupcakes = \$0.5 (explicit) + \$0.8* (implicit) = **\$1.3**

MC of 3rd 5 cupcakes = \$0.5 (explicit) + \$1.2* (implicit) = **\$1.7**

*the implicit costs were calculated by multiplying the implicit costs denominated in cookies by \$0.5.

The Supply Curve

To create the supply curve, we need to graphically represent our information. Using price on the y-axis, and quantity on the x-axis, we can plot the marginal cost points to produce Figure 3.4b.

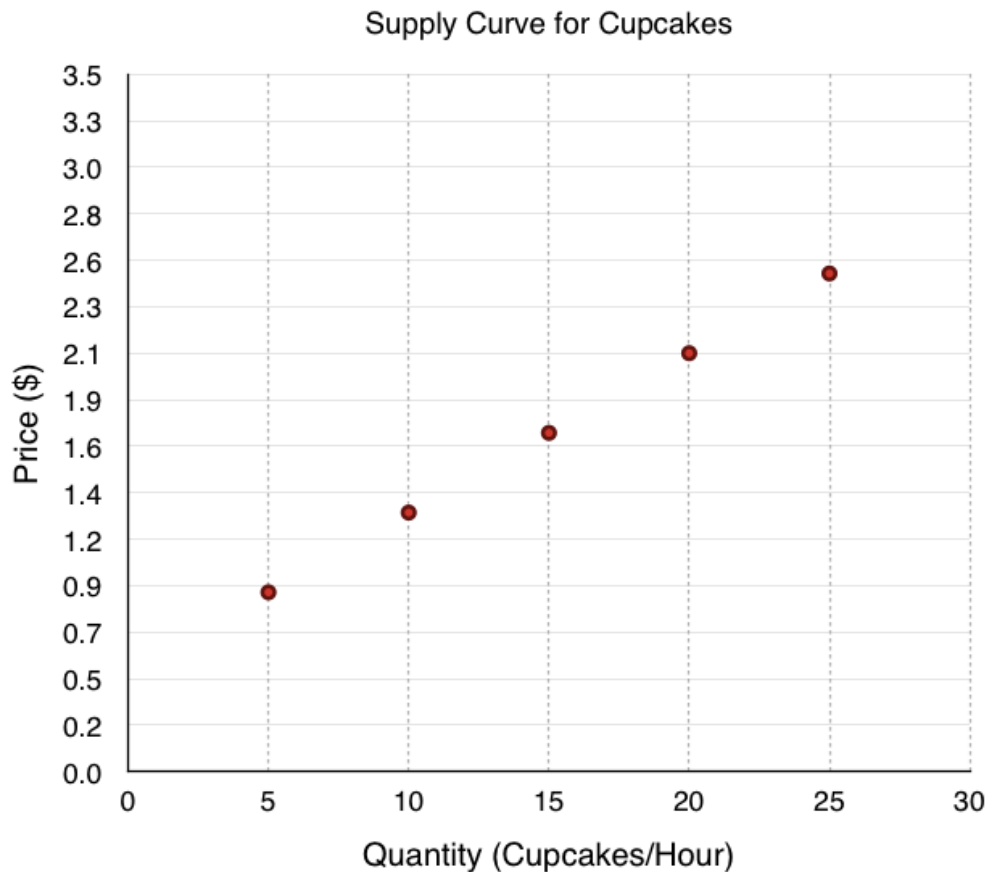


Figure 3.4b

As with demand, we simply join the points in stair-step fashion to create our curve as shown in Figure 3.4c. We can now use our supply curve to examine how our quantity supplied interacts with price, and how this will affect producer surplus.

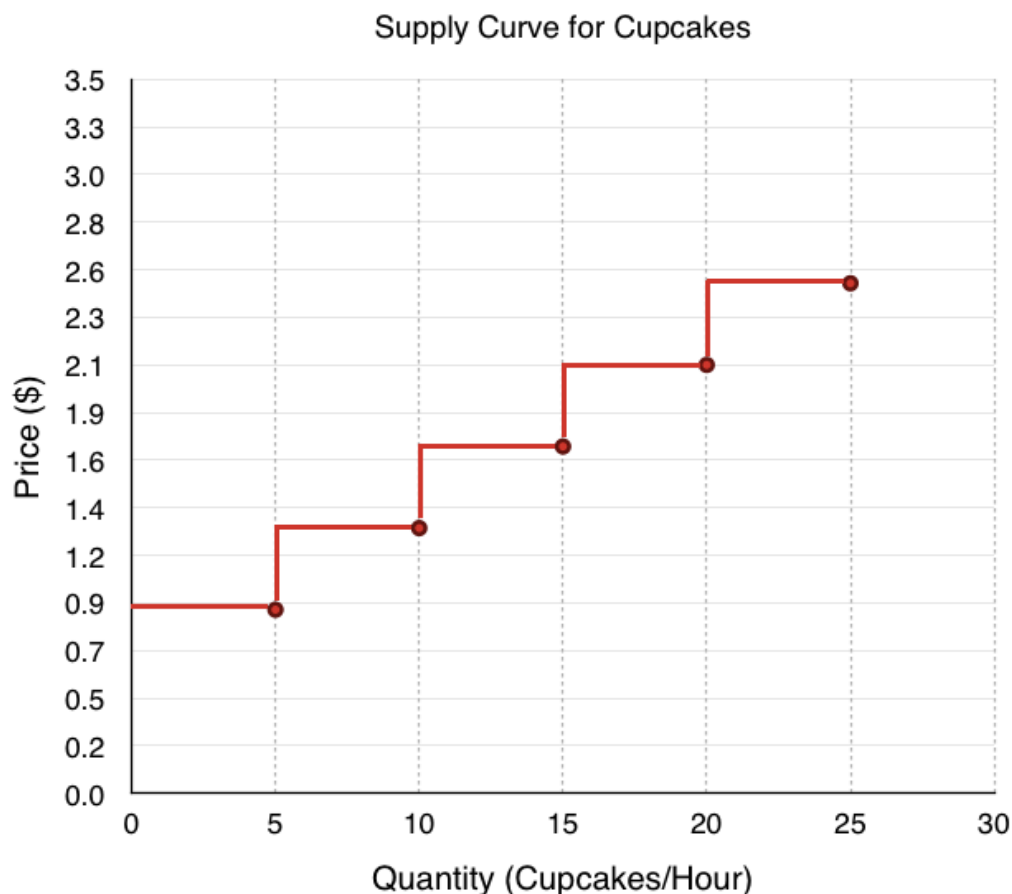


Figure 3.4c

Now, let's use these tools to determine quantity supplied. Suppose after meeting with the managers of Save-On-Foods, Thrifty Foods, etc. the manager of Alaythia Cakes has determined the best price they can get for the cupcakes is \$2.3. By looking at where price intersects the supply curve, we can determine what quantity of cupcakes Alaythia Cakes will supply. Looking at Figure 3.4d, the MC of units 15 to 20 is \$2.1, which is less than the price, but the MC of units 20 to 25 is \$2.5, which is greater than price. Therefore, Alaythia Cakes will produce 20 cupcakes when the market price is \$2.3.

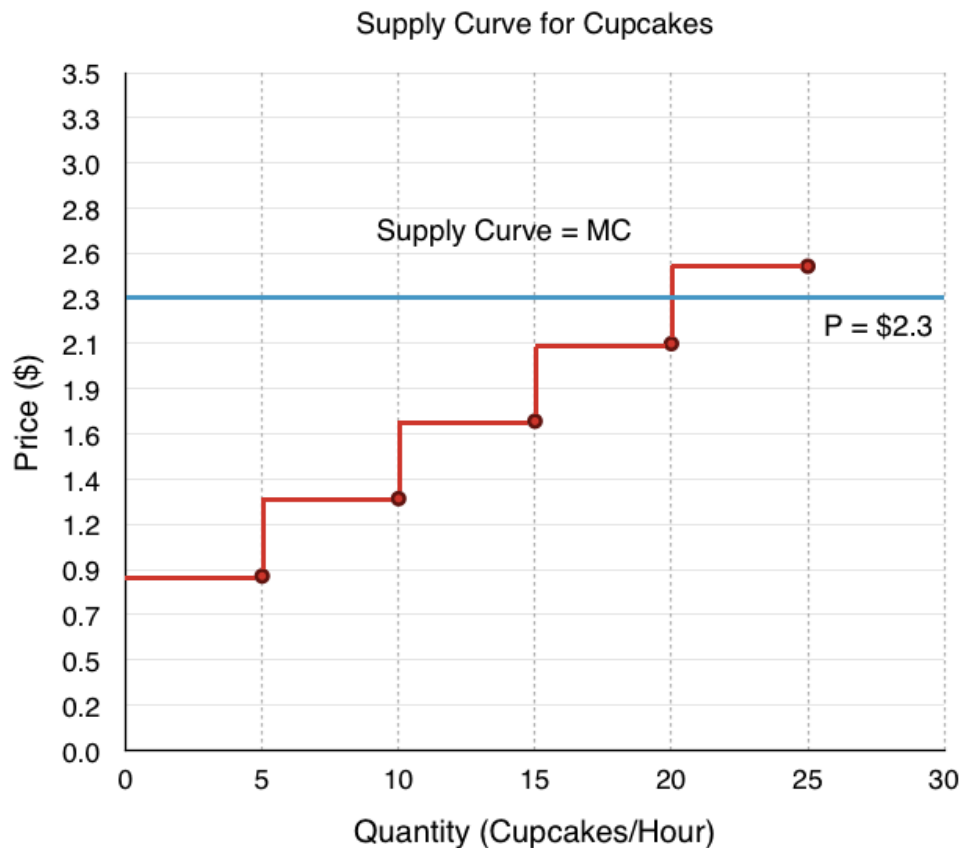


Figure 3.4d

Producer Surplus

Just like consumer surplus, it is important to examine a producer's net benefit from a certain action. Whereas consumer surplus is the difference between what the consumer is willing to pay and the price they pay, **producer surplus** is the difference between what the producer is paid (revenue), and the variable cost of production. Our variable costs are represented by our implicit and explicit costs.

How does producer surplus differ from profit?

As we will explore later in the course, there is a key distinction between **economic profit** and the classic profit calculated in accounting. **Economic profit** is a firm's total revenue minus its total costs, including variable, fixed and opportunity costs. **Accounting profit**, on the other hand, does not include opportunity costs. (In our example, this means implicit costs would be ignored, and we would only look at the \$0.5 constant cost per unit).

The main difference between producer surplus and economic profit is **fixed costs**, the costs of production that don't vary when the quantity is changed (i.e. rent, equipment purchase). Economic profit subtracts fixed costs, whereas producer surplus does not. We will explore fixed costs in depth soon.

To break down producer surplus, let's look at the total revenue and total variable costs of producing 20 cupcakes.

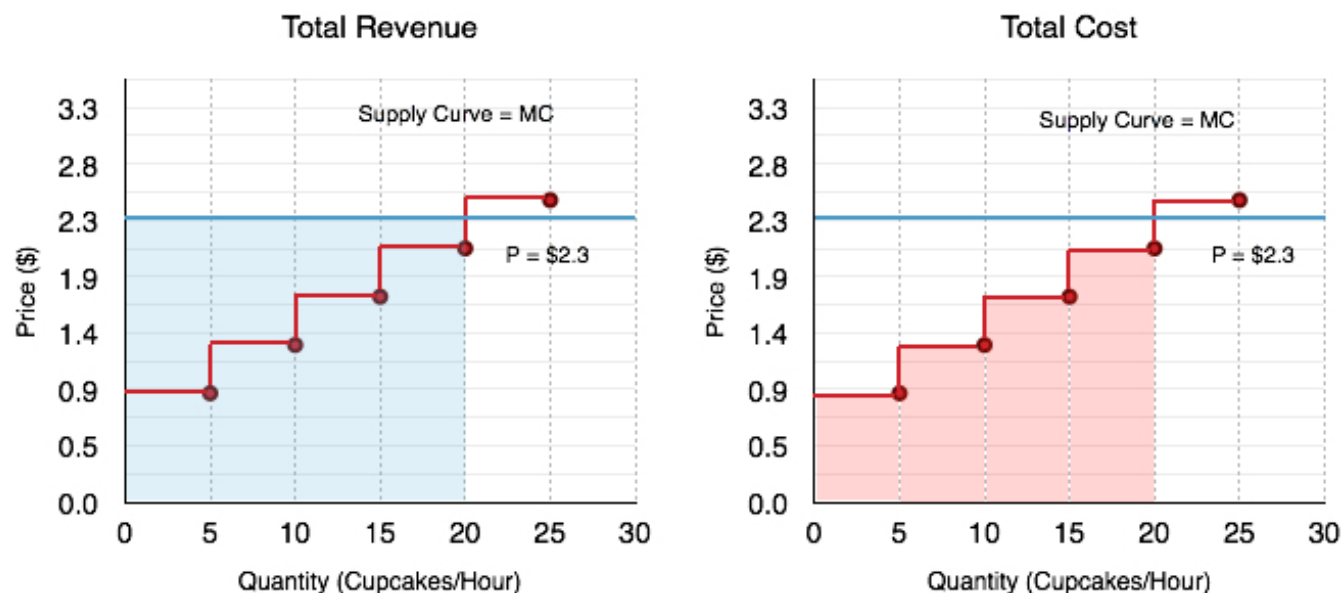


Figure 3.4e

Total Revenue

If the market price of a cupcake is \$2.3 and we are producing 20 cupcakes, what is our total revenue? The problem is simple. If you are making \$2.3 for every cupcake, and you sell 20, your total revenue will be **\$46**. On the graph, this always corresponds to a rectangle bounded by the price and the quantity supplied (the blue shaded region).

Total Variable Cost

To find total variable cost we need to add the MC at each level, calculating the area under the supply curve (the red shaded region). The calculation of cost for Figure 3.4e is:

Marginal cost of the 1st 5 cupcakes = $\$0.9 \times 5 \text{ cupcakes} = \4.5

Marginal cost of the 2nd 5 cupcakes = $\$1.3 \times 5 \text{ cupcakes} = \6.5

Marginal cost of the 3rd 5 cupcakes = $\$1.7 \times 5 \text{ cupcakes} = \8.5

Marginal cost of the 4th 5 cupcakes = $\$2.1 \times 5 \text{ cupcakes} = \mathbf{\$10.5}$

Total variable costs ($\$4.5 + \$6.5 + \$8.5 + \10.5) = **$\$30$**

Producer Surplus

Bringing all this information together we can calculate producer surplus. Since Total Revenue – Total Variable Costs = Producer Surplus (PS), our PS is equal to $\$46 - \$30 = \mathbf{\$16}$. This corresponds to the area between the price producers receive, and their costs, shown in green in Figure 3.4f.

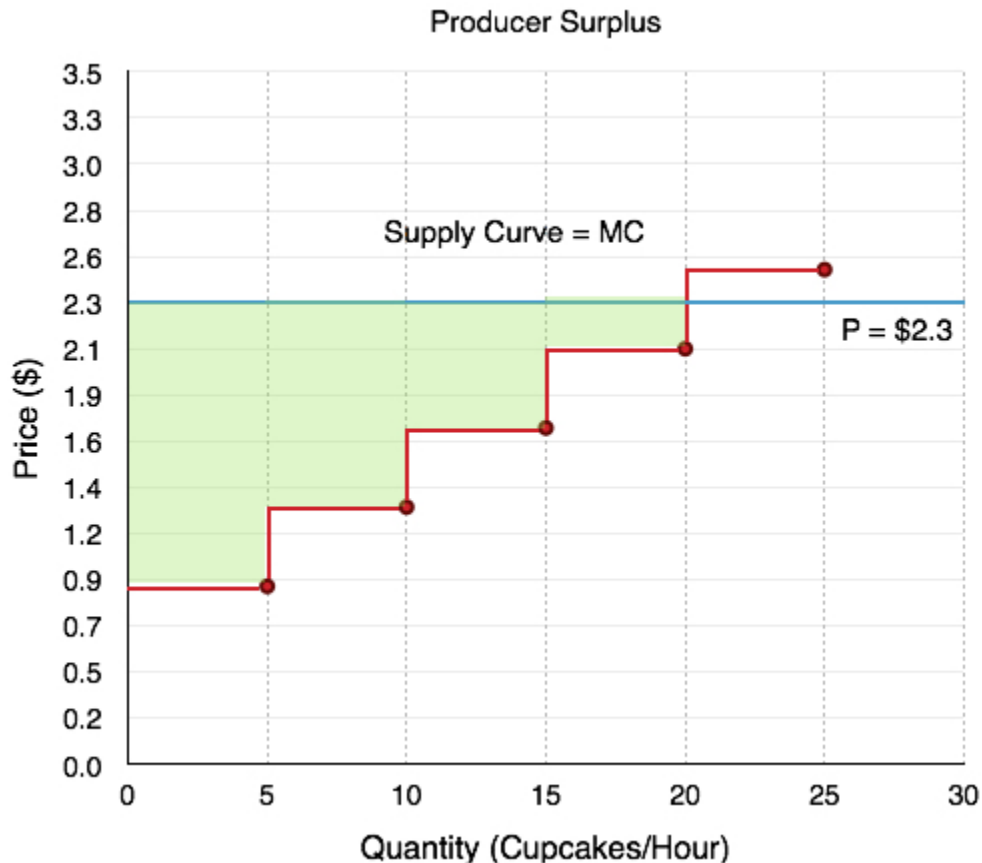


Figure 3.4f

Producer Surplus with Changing Prices

Determining producer surplus with changing prices closely mirrors that of consumer surplus during changing prices, but in order to get comfortable with the terminology, we will analyze the effects separately.

Suppose the manager of Alaythia Cakes had been happily selling cupcakes to the grocery stores at \$2.3, but one morning, all the grocery stores told him that the best price they could give him was now \$1.4/cupcake. According to the law of supply, we know this decrease in price will cause a decrease in quantity supplied, but how does our producer surplus change? Calculating the change in the green area in Figure 3.4g, we see that producer surplus falls from \$16 to \$3. This change is due to two factors. Firstly, at the lower price, the business can no longer sustain production of 20 units as $MC > P$, so it decreases the quantity supplied to 10 units. This causes the firm to lose the \$4 of producer surplus it was receiving

from selling units 10-20. Second, the firm is now receiving a lower price for the units it continues to produce, a total of \$0.9 fewer dollars on 10 units, resulting in the other \$9 decrease in producer surplus.

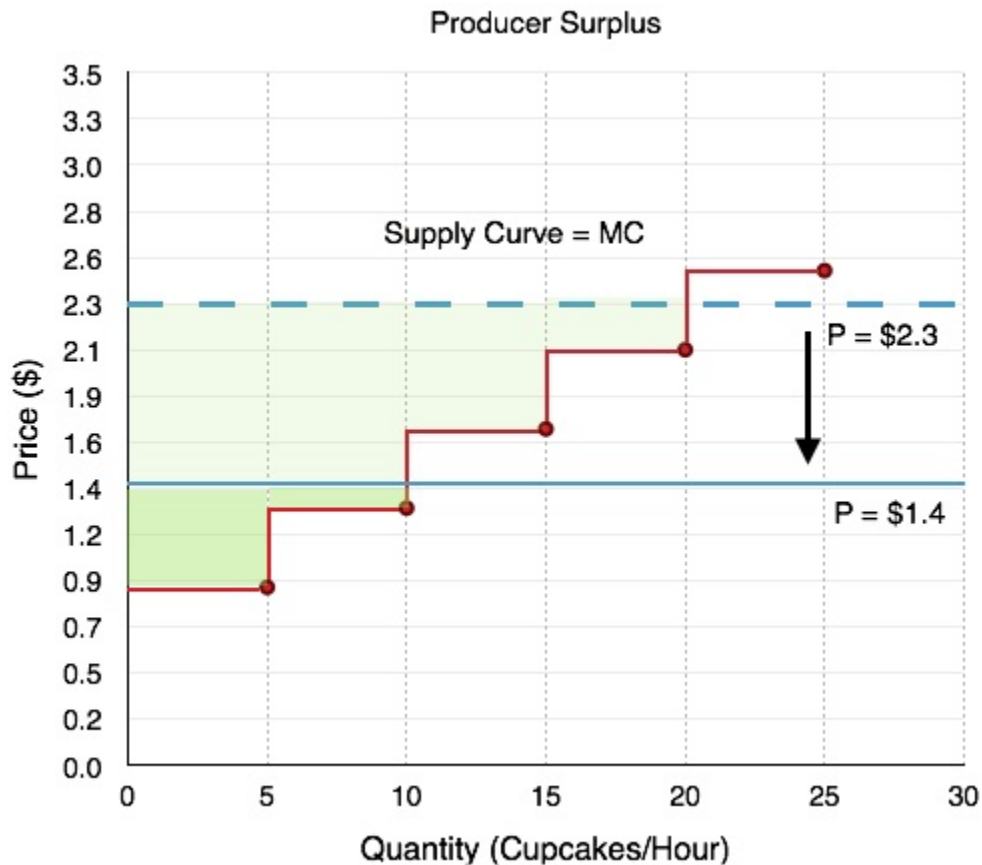


Figure 3.4g

In short, when there is a fall in price, producer surplus decreases for two reasons:

1. **The quantity** produced decreases
2. **The price** the producer receives for the remaining goods decreases

Completing the Supply Curve

The last step we have in the derivation of supply is recognizing that there is divisibility of goods. In the stair-step example, we are implicitly assuming that we can only trade cupcakes and cookies in 5 cupcake increments. Of course, this is not actually the case. The more divisibility we introduce, the more our supply curve smooths out until it is a straight line.

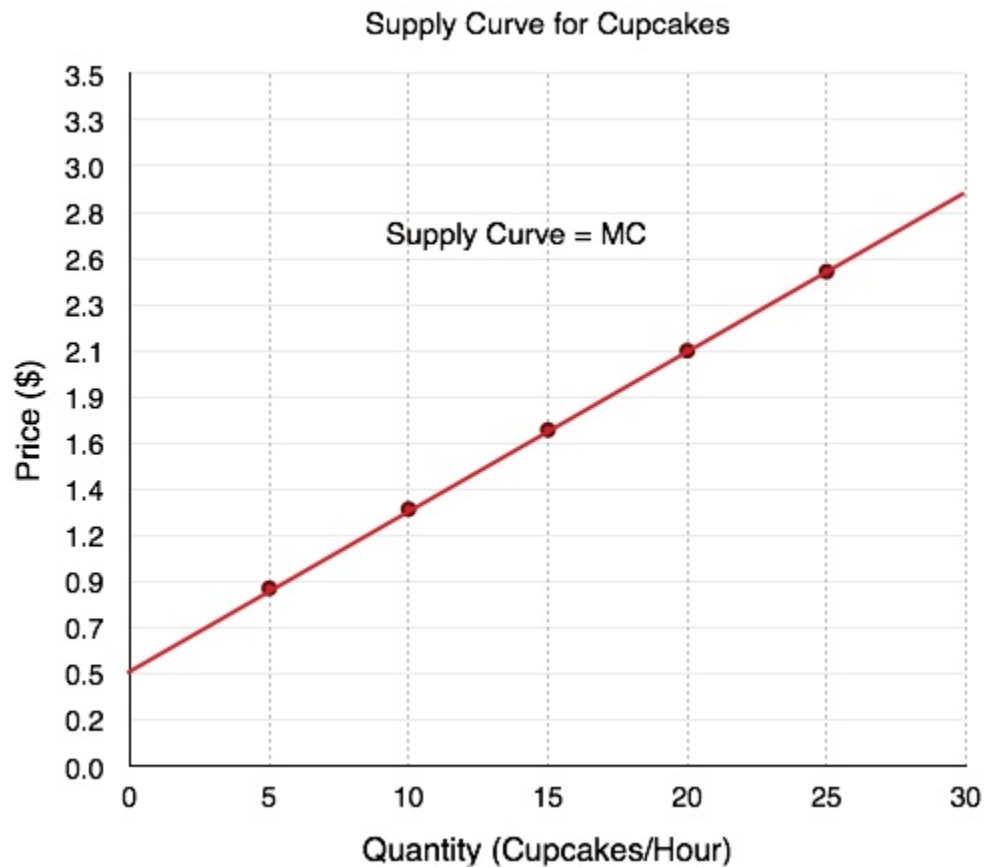


Figure 3.4h

In our analysis of the interaction between supply and demand (equilibrium), we will continue to use smoothed out supply and demand curves. Not only are these curves based on more realistic assumptions, they also lead to greater versatility for mathematical analysis.

Summary

In this section, we examined the market from the eyes of the producer and introduced producer surplus to explain how a firm reacts to price changes. We showed that a change in producer surplus is due to a change in quantity and a change in price, and learned that most supply curves are smoothed out by the divisibility of goods. Before we look at the equilibrium, let us finish the supply picture by looking at some other determinants of supply.

Glossary

Excess Supply

at the existing price, quantity supplied exceeds the quantity demanded; also called a surplus

Law of Supply

the common relationship that a higher price leads to a greater quantity supplied and a lower price leads to a lower quantity supplied, while all other variables are held constant

Marginal Cost

the additional cost that a firm incurs for producing an additional unit of a good or service.

Producer Surplus

the difference between a producers costs, and the price they are paid

Quantity Supplied

the total number of units of a good or service producers are willing to sell at a given price

Supply Curve

a line that shows the relationship between price and quantity supplied on a graph, with quantity supplied on the horizontal axis and price on the vertical axis

Supply Schedule

a table that shows a range of prices for a good or service and the quantity supplied at each price

Supply

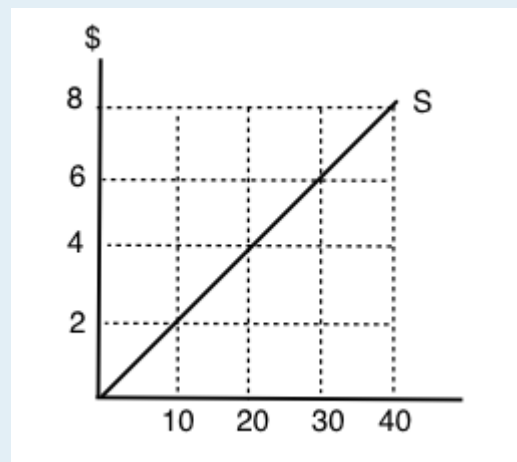
the relationship between price and the quantity supplied of a certain good or service

Exercises 3.4

1. An individual producer's supply curve for a good is derived from:

- a) The preferences of consumers of that good.
- b) The income of consumers of that good.
- c) The marginal cost of producing that good.
- d) All of the above.

The following TWO questions refer to the supply curve diagram below.



2. If price is \$8 per unit, quantity supplied will equal:

- a) 10.
- b) 20.
- c) 30.
- d) 40.

3. If quantity supplied increases from 10 to 20 units, the producer's total costs will increase by:

- a) \$20.
- b) \$30.
- c) \$40.
- d) \$80.

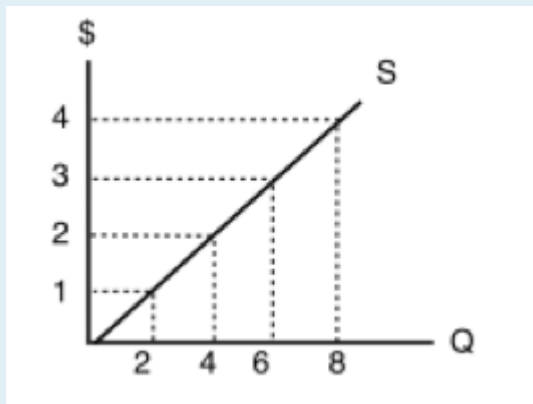
4. Which of the following statements about supply curves is TRUE?

- a) The "law of supply" states that as price rises, quantity supplied also rises.
- b) If the marginal cost of producing a good is higher at high levels of output than at low levels of output, then the supply curve for that good is upward sloping.
- c) Both a) and b) are true.
- d) Neither a) nor b) are true.

5. When deciding how much of a particular good to produce, a producer should:

- a) Keep producing more units until the total benefits equal the total costs.
- b) Always produce an additional unit if price is greater than marginal cost.
- c) Never produce an additional unit if its marginal cost is higher than the marginal cost of previously produced units.
- d) Always produce at additional unit if price is greater than zero.

The following TWO questions refer to the diagram below, which illustrates a supply curve.



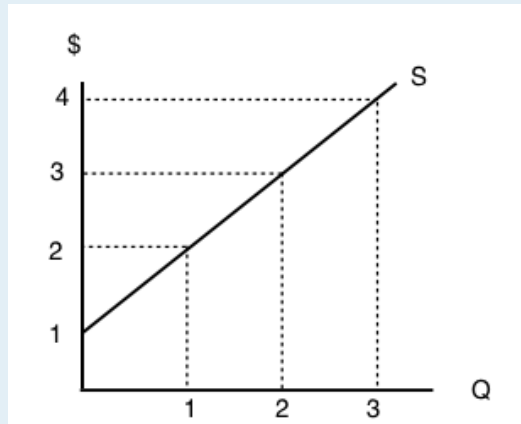
6. In order for quantity supplied to equal 6 units, the price per unit must be:

- a) \$1.
- b) \$2.
- c) \$3.
- d) \$4.

7. If the price of this good is \$4 per unit, then what does producer surplus equal?

- a) \$32.
- b) \$24.
- c) \$16.
- d) \$12.

8. The diagram below illustrates a supply curve.



If the price of this good is \$2 per unit, then what will be the quantity supplied?

- a) 0.
- b) 1.
- c) 2.
- d) 3.

9. Sarah is selling her used truck. The minimum amount she needs to be paid for the truck is \$5,000. She advertises the truck on usedvictoria.com for \$8,000, and eventually sells the truck for \$6,000. Her producer surplus is equal to _____.

- a) \$1,000.
- b) \$2,000.
- c) \$3,000.
- d) \$6,000.

3.5 Other Determinants of Supply

Learning Objectives

By the end of this section, you will be able to:

- Understand the difference between supply and quantity supplied
- Know the four main determinants of supply
- Explain supply shifts from both horizontal and vertical perspectives
- Know the difference between explicit and opportunity costs



(Credit: EZ Frost)

It's as Easy as Cake

In section 3.4 we looked at the impact of price on the supply curve, but there are many other factors that affect a company's decision to produce. For example, new innovations are always coming out to make cake decorating and baking easier, whether it is machines like the one shown above, or faster and

better mixers. These inventions save time and energy at different levels of production. External forces like these impact our supply curve. The four supply shocks we will examine in detail include:

1. Input Prices
2. Technology
3. Expectations
4. Number of Producers

Whereas changes in price change quantity supplied, these factors shift supply. This is distinctly different from changes in quantity supplied as these shocks affect the price-quantity interaction at every point on our curve.

Is supply the same as quantity supplied?

As with demand and quantity demanded, supply is not the same as quantity supplied. When economists talk about supply, they mean the relationship between a range of prices and the distinct quantities supplied, as illustrated by a supply curve. When economists talk about quantity supplied, they mean only a certain point on the supply curve. Like demand, this means a change in quantity supplied is very different than a change in supply.

A change in supply refers to a **shift** in the supply curve, affecting the whole diagram and every interaction between price and quantity

A change in quantity supplied refers to a **movement along** the supply curve, exploring different points on the same curve.

We examined changes in quantity supplied in Topic 3.4. In this section, we discuss changes in supply.

Input Prices

Perhaps the most obvious shock to the supply curve is the cost of inputs. Also known as ‘Factors of Production’, these are the combination of labor, materials, and machinery used to produce goods and services. Our cupcake supply curve was based on the assumption of specific implicit and explicit costs which are prone to change. Any changes to these costs will affect our marginal costs at every point.

Changes in Explicit Costs

Changes in explicit costs are the easiest to conceptualize. We determined that the explicit cost of our cupcake supplies was around \$0.50 each. What if icing sugar, an input to cupcakes, becomes more expensive? This will raise our marginal costs at all points of production, causing an upward shift in our supply curve.

Changes in Opportunity Costs

Opportunity cost is more of an abstract concept to think about in terms of input prices. Essentially, if cookies become more profitable to produce, our supply model considers the higher opportunity cost as an increase in our cost of making cupcakes. Suppose the market price for cookies increases from the original \$0.50 to \$1.00. Now, our MC will be as follows:

MC of 1st 5 cupcakes = \$0.5 (explicit) + \$0.8 (implicit) = **\$1.3** (increased from \$0.9)

MC of 2nd 5 cupcakes = \$0.5 (explicit) + \$1.6 (implicit) = **\$2.1** (increased from \$1.3)

MC of 3rd 5 cupcakes = \$0.5 (explicit) + \$2.4 (implicit) = **\$2.9** (increased from \$1.7)

Notice this increase in marginal cost occurs at **all levels**, meaning the change will shift the entire supply, changing the quantity supplied at every point.

*For an interesting exercise, think about how a price change to an input for **both** cookies and cupcakes would affect production. On one hand, explicit costs would be higher, but opportunity costs would be lower as cookies would be less profitable. Note from now on, we will generally talk about input costs as increasing or decreasing (rather than looking at explicit and implicit costs) to simplify our analysis.

How does the supply curve actually change? In our discussion of demand, we explained that you could view a demand shift as vertical, as consumers' willingness to pay changes at every quantity demanded; or as horizontal, as the amount consumers buy changes at every price level. There is a similar process for supply.

Vertical Shift – Figure 3.5a

The first way to view a shift in supply is as a vertical shift. Recall that supply represents the producer's MC at each point of production. Assuming that in the original supply curve our MC of producing 15 units is \$1.60, if costs increase by a dollar, we will see the marginal cost increase to \$2.60. Since input prices increase by a dollar regardless of our production level, the entire curve will shift up by \$1.00.

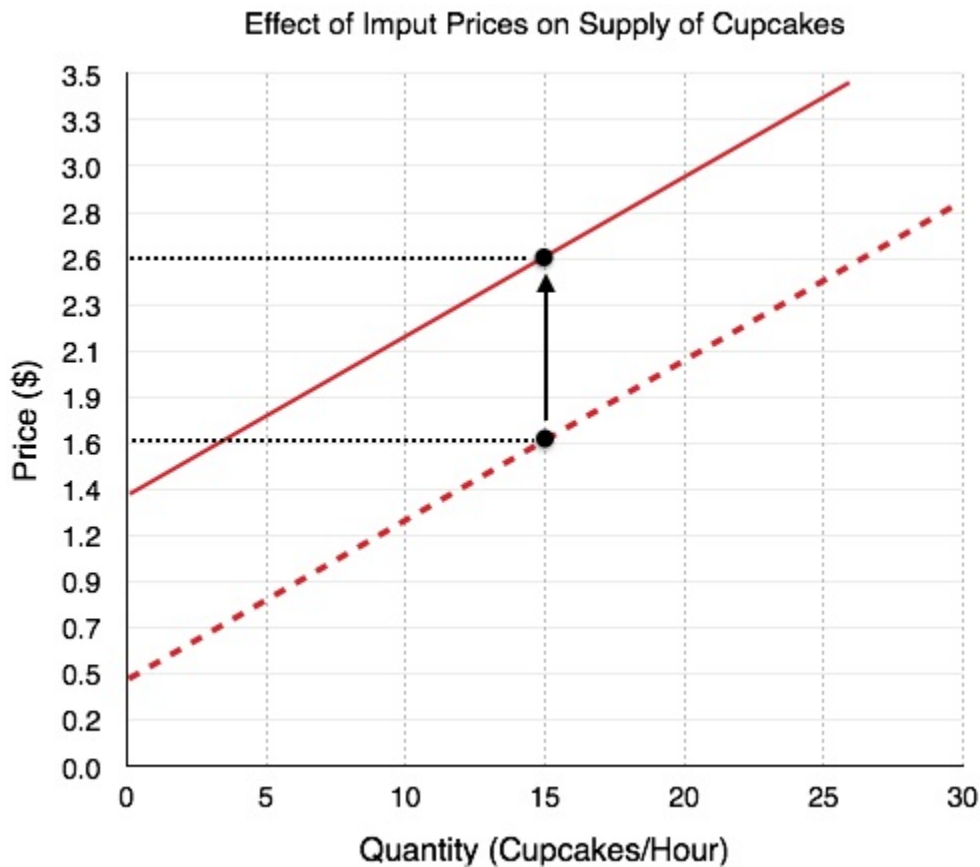


Figure 3.5a

Horizontal Shift – Figure 3.5b

The next way to view a supply shift is slightly less intuitive. In Figure 3.5b, when the price of cupcakes is \$1.80, our quantity supplied is equal to five cupcakes. Consider how this will change with a \$1.00 decrease in input prices. Originally, we produced 5 cupcakes because our price was equal to marginal costs at that level. When our costs fall, our price is still \$1.80, but our costs are \$0.90. Since $P > MC$, it is efficient to produce more than 5 units. Using marginal analysis, we find it is efficient to produce 17 units at this price.

Whereas before, it was only viable to produce 5 units at the price of \$1.80, we can now produce up to 17 units efficiently. This causes the supply curve to shift right.

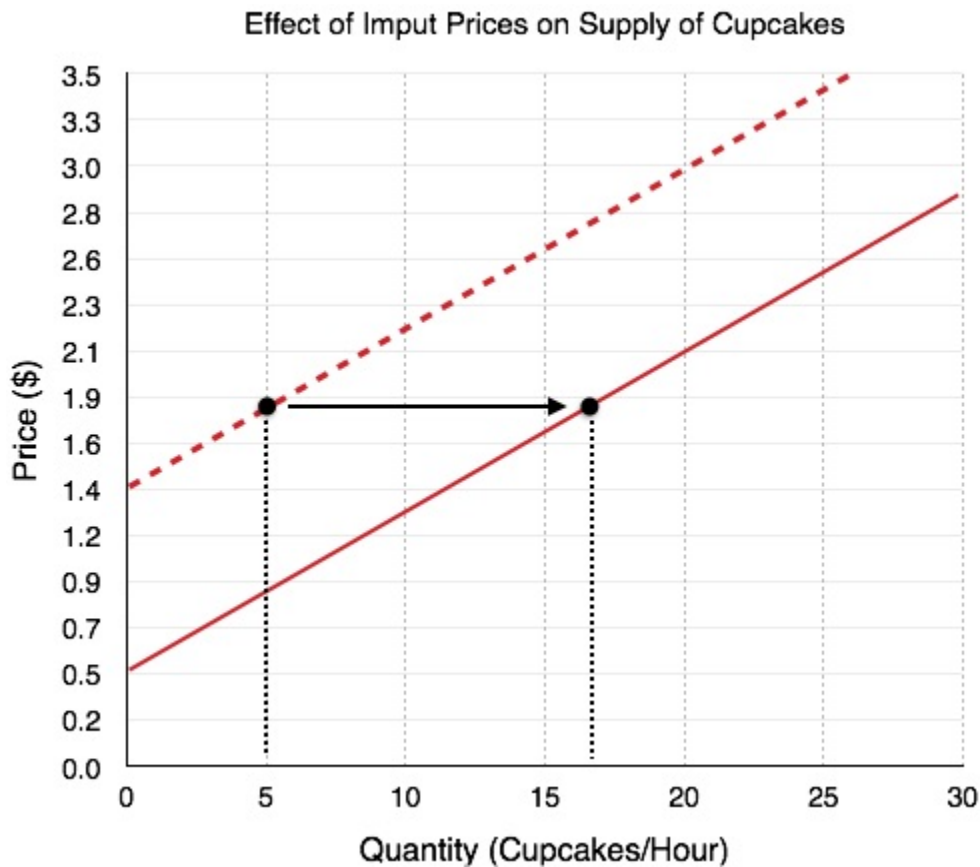


Figure 3.5b

Most shocks will cause a uniform shift as can be explained vertically or horizontally. Technology, expectations, and the number of producers will all shift the supply curve in the same way as depicted.

Technology

As mentioned at the beginning of the section, changes in technology will also shift the supply curve. Why is that the case? Technology changes have a direct impact on the cost of production. If suddenly a new innovation allows you to cut your work time in half, you will cut down your costs of labor. If technology allows you to conserve wasted resources, then your input prices will decrease. These changes will increase supply, shifting the curve to the right. **Technological Decay** is a less common case where technological progress is reversed. What if the city banned the use of a certain cupcake icing machine because the noise was bothering other residents? This would cause you to go back to the less efficient practice of icing by hand, thereby increasing your costs. In summary:

- **Improvements** in technology will lower costs of production and **increase supply**
- **Decay** in technology will increase costs of production and **decrease supply**

Expectations

Like demand, expectations of the supply price affect production decisions. Production decisions are a lot like playing the stock market; if we are producing cupcakes and cookies to sell to the store tomorrow, we

have to produce based on the current, incomplete knowledge we have about those prices. Normally, you will be confident that these prices will stay relatively stable, but if you have reason to believe the prices of cupcakes will drastically rise in the morning, you may devote more of your attention to producing them. Expectations are usually based on some form of evidence or signal and can cause supply shifts quite suddenly. In summary:

- If the firm expects **prices to rise**, supply will **increase**
- If the firm expects **prices to fall**, supply will **decrease**

Number of Producers

The final determinant of supply is the number of producers. So far, we have examined just one firm. Recall in section 3.3 we showed that the competitive market is characterized by many potential buyers, and added up individual demand curves to produce aggregate demand. Likewise, the market is made up of many other producers. By adding all the suppliers together, we get **aggregate supply**. This can affect total supply. If for example, four new firms enter the cupcake market, whereas Alaythia Cakes was producing just 5 cupcakes, now the firms each produce 5 cupcakes for a total of 25 (assuming that the individual supply curves are the same, which need not be the case). In summary:

- When more **firms enter** the market, **supply will increase**
- When **firms leave** the market, **supply will decrease**

Summary

The four supply shocks have been summarized in the table below. Once again, the best way to learn these shifts is not to memorize them, but to practice shifts on the diagram to view their effects.

Supply Shock	Increase in Supply Shift Curve Right (Down)	Decrease in Supply Shifts Curve Left (Up)
Input Prices	Decrease	Increase
Technology	Improvements	Tech Decay
Expectations	Expect price to rise	Expect price to fall
Number of Producers	Increase	Decrease

Figure 3.5c

Glossary

Aggregate Supply

total of all goods and services (including exports and imports) supplied at every price level, within a national economy during a given period. Also called total output

Explicit Costs

direct costs of production such as rent, salaries, wages, or other input costs. Easily recognizable for classification and recording

Factors of Production

the combination of labor, materials, and machinery that is used to produce goods and services; also called inputs

Implicit Costs

the opportunity costs of an action, associated with an actions trade-offs

Shift in Supply

when a change in some economic factor (other than price) causes a different quantity to be supplied at every price

Exercises 3.5

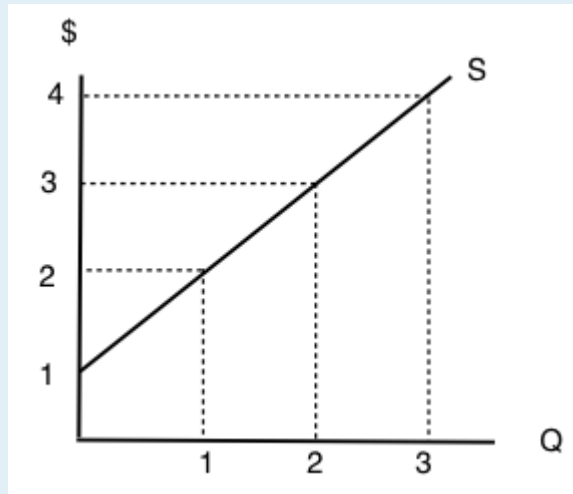
1. Which of the following will NOT shift the market supply curve of good X?

- a) A change in the cost of inputs used to produce good X.
- b) A change in the technology used to produce X.
- c) A change number of sellers of good X.
- d) A change in the price of good X.

2. Which of the following is NOT a determinant of the supply of good X?

- a) The cost of inputs used to produce good X.
- b) The technology used to produce X.
- c) The number of sellers of good X.
- d) All of the above are determinants of the supply of good X.

The following TWO questions refer to the diagram below.



3. At what price will quantity supplied equal 3 units?
- a) \$1.
 - b) \$2.
 - c) \$3.
 - d) \$4.
4. At what price will producer surplus equal \$2?
- a) \$1.
 - b) \$2.
 - c) \$3.
 - d) \$4.
5. A decrease in supply is, graphically, represented by:
- a) A leftward shift in the supply curve.
 - b) A rightward shift in the supply curve.
 - c) A movement up and to the right along a supply curve.
 - d) A movement down and to the left along a supply curve.
6. Which of the following is NOT a determinant of the supply of good X?
- a) The cost of labor used to produce good X.
 - b) The price of good X.
 - c) The income of consumers who buy good X.
 - d) The number of sellers of good X.
7. Which of the following is NOT a determinant of the supply of good X?
- a) The cost of labor used to produce good X.
 - b) Consumer preferences.
 - c) Technology.
 - d) All of the above are determinants of the supply of good X.

8. Martin is selling his viola. The minimum amount he needs to be paid for the viola is \$15,500. He find a buyer for who is willing to pay \$22,400, but this buyer insists that Martin pays for delivery of the viola. The cost of delivery is \$700. Martin's producer surplus from selling his viola is equal to _____.

- a) \$14,800.
- b) \$7,600.
- c) \$6,900.
- d) \$6,200.

9. Which of the following statements about inferior goods is/are FALSE?

- I. Inferior goods are those that we will never buy, no matter how cheap they are.
- II. Inferior goods are those that we buy more of, if we become poorer.
- III. Inferior goods are those that we buy more of, if we become richer.

- a) I only
- b) III only.
- c) I and III only.
- d) I, II, and III.

3.6 Equilibrium and Market Surplus

Learning Objectives

By the end of this section, you will be able to:

- Explain equilibrium, equilibrium price, and equilibrium quantity
- Understand how supply and demand bring markets back to equilibrium
- Analyze the effect of supply and demand shocks to market price and quantity
- Calculate market surplus given supply and demand curves



(Credit: Richard Hsu/ Flickr/ CC BY-ND 2.0)

Who Sets the Price?

Have you ever been to a busy street corner and seen a row of fast food vendors lined up beside each other? Oftentimes, the vendors have little to no branding, so the stands are relatively homogeneous. How do you decide where to buy? Assuming the quality looks about the same, you might go for the cheapest option.

What about the vendors? Knowing that consumers will purchase the cheapest option, they will avoid setting their price above their competitors, and may lower prices to sell more. As long as the price is above their costs there is still an opportunity to undercut the competition. This will cause a race to the bottom until the price is at the equilibrium level.

Who sets the price? With many different firms and consumers, no individual has the power to influence price. But collectively, their actions determine it. This brings us to the core conclusion of this chapter: market price is determined by the interactions between supply and demand.

Equilibrium

Equilibrium is formally defined as a state of rest or balance due to the equal action of opposing forces. In economics, these forces are supply and demand. As we will see, when supply and demand are not in balance, economic forces will work until the balance is restored.

Figure 3.6a shows the competitive market for hot dogs, with aggregate demand in blue and aggregate supply in yellow. As price rises, quantity demand for hot dog falls, and quantity supplied rises. There are two important points on this diagram. First is **equilibrium quantity (Q_E)**. Q_E is where the quantity supplied is equal to the quantity demanded. It is important to recognize this value and the mechanism that leads us there. There is only one price that corresponds with equilibrium quantity, and that is **equilibrium price (P_E)**. The question remains, how do we arrive at equilibrium? Let's first consider what occurs when the price is too high.

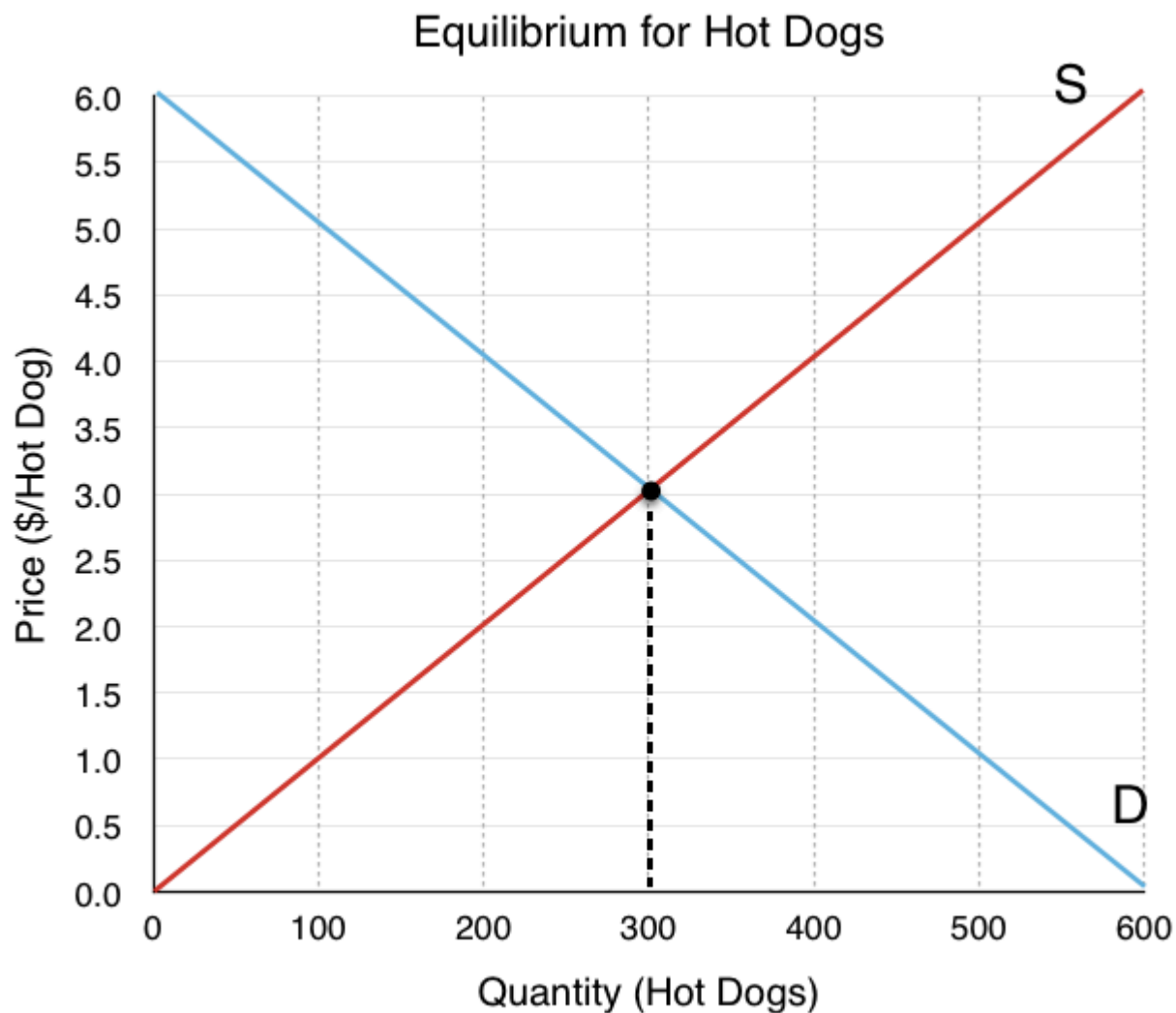


Figure 3.6a

When Price is Higher than Equilibrium

What if the price is above our equilibrium value? How will the equal and opposite forces bring it back to equilibrium? There are a number of reasons why the price may be too high. One common example that we will explore in greater depth in Topic 4 is the price floor. Regardless of the cause, we see in Figure 3.6b that a price above equilibrium will result in quantity supplied being greater than quantity demanded. This excess supply is also known as a **surplus**. There are too many sellers who are enticed by the high price, and not enough buyers. Consider a hot dog vendor, Paul, in this situation. Though Paul would be happy to receive the high price of \$5 from the customers who buy the good, he will find that he will be unable to sell all the hot dogs he cooks, since 500 hotdogs are being made, and only 100 sold. This will result in wasted product, and a surplus of 400 hotdogs in the market. If vendors were forced to stay in this market, the quantity supplied would fall to 100, as vendors would quickly reduce production to what customers are willing to purchase.

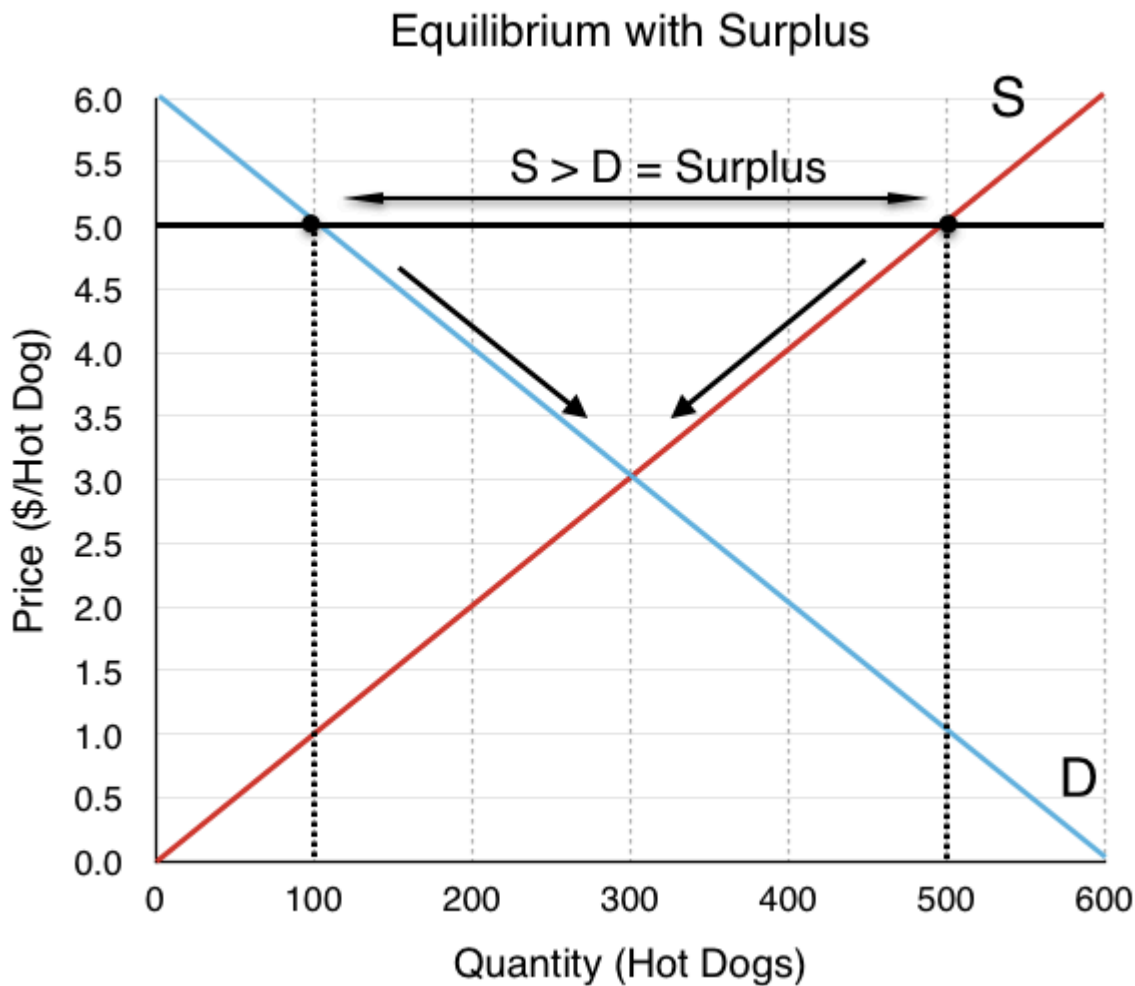


Figure 3.6b

In order to sell all his hot dogs, Paul could start offering the hot dogs for a cheaper price until he is able to sell everything he produces. In this case, every vendor has the incentive to drop their price, since (all else equal) consumers will purchase the product with the lowest price. As price falls, two things occur:

- There is a decrease in quantity supplied (a movement along the supply curve)
- There is an increase in quantity demanded (a movement along the demand curve)

Notice that **both** supply and demand are forces that bring the market back to equilibrium. When price is at equilibrium of \$3, no vendor has the incentive to decrease their price, since this would result in them selling hotdogs at a loss.

When Price is Lower than Equilibrium

What if price is lower than equilibrium? This is depicted in Figure 3.6c with a market price of \$1.0. When price is too low, the quantity demanded is greater than quantity supplied. This excess demand is known as a **shortage**. In this situation, the low price causes an excess of buyers. When we

have a shortage, the consumers who are able to buy the good are happy, but due to the low price, not enough will be produced and not every consumer will get their hands on a hotdog.

Equilibrium with Shortage

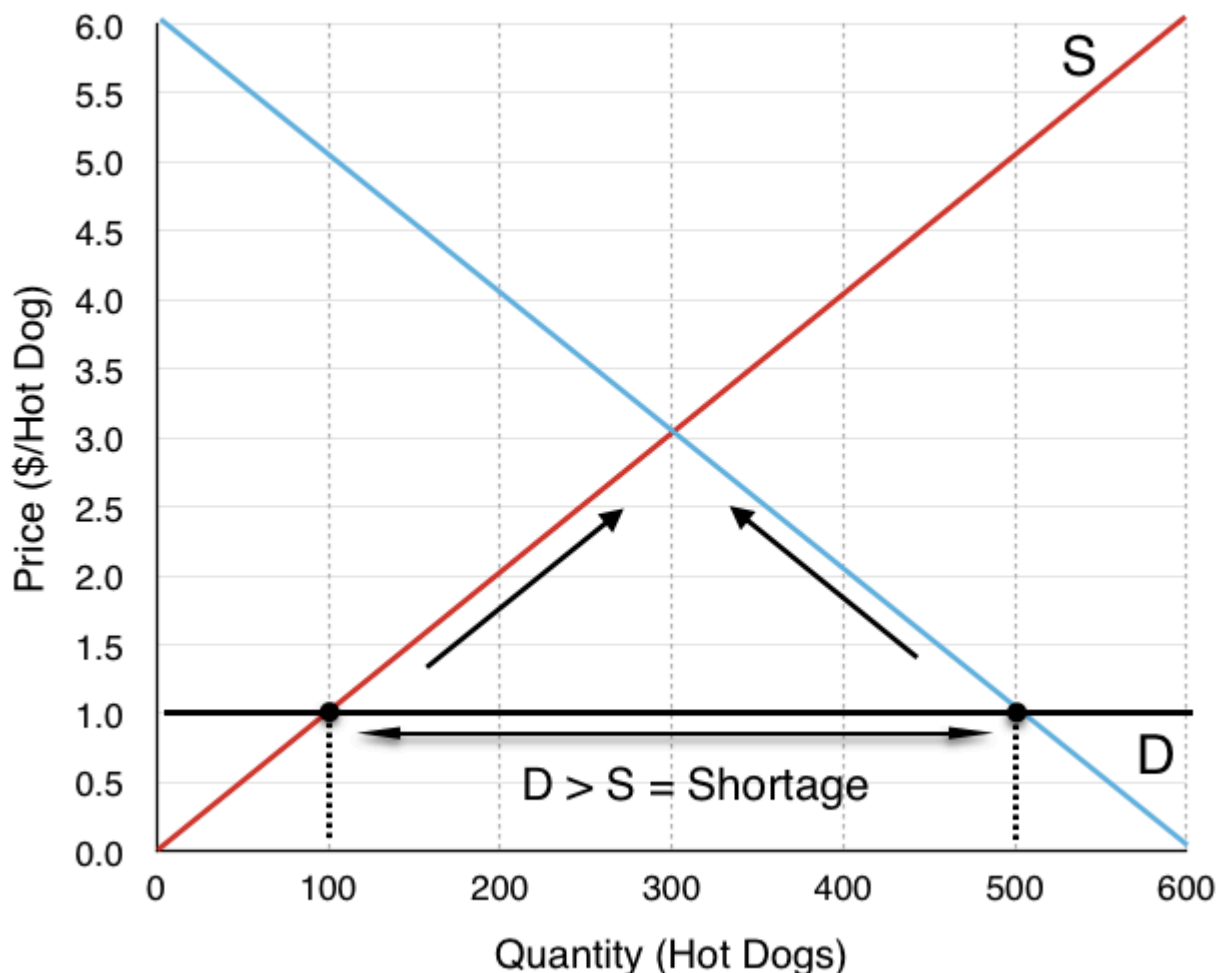


Figure 3.6c

At \$1.0, 500 hot dogs are demanded, but only 100 are being produced. This means there are many consumers who are willing to pay more than the \$1 for a hotdog, but are unable to find one. So, how do the 100 hot dogs get allocated? Perhaps it will be on a first come first serve basis, but frustrated consumers will likely start to offer a higher price to the hot dog stands and outbid other consumers. This will drive price back to the equilibrium level. As a price rises, two things occur:

- There is an increase in quantity supplied (a movement along the supply curve)
- There is a decrease in quantity demanded (a movement along the demand curve)

Again, **both** supply and demand are forces that bring the market back to equilibrium.

External Market Shocks & Equilibrium

In Topic 3.3 and 3.5, we explored the determinants of demand and supply, and examined the impact of different external shocks on the demand and supply curve. How will these shocks affect equilibrium? Suppose the price of a hamburger, a substitute for hot dogs, rises. We learned in Topic 3.3 that when the price of a substitute increases, our demand for hot dogs will increase. In Figure 3.4d below, we see the initial effects of the demand shift. (recall that a demand shift changes the relationship between quantity demanded and quantity supplied at every point!)

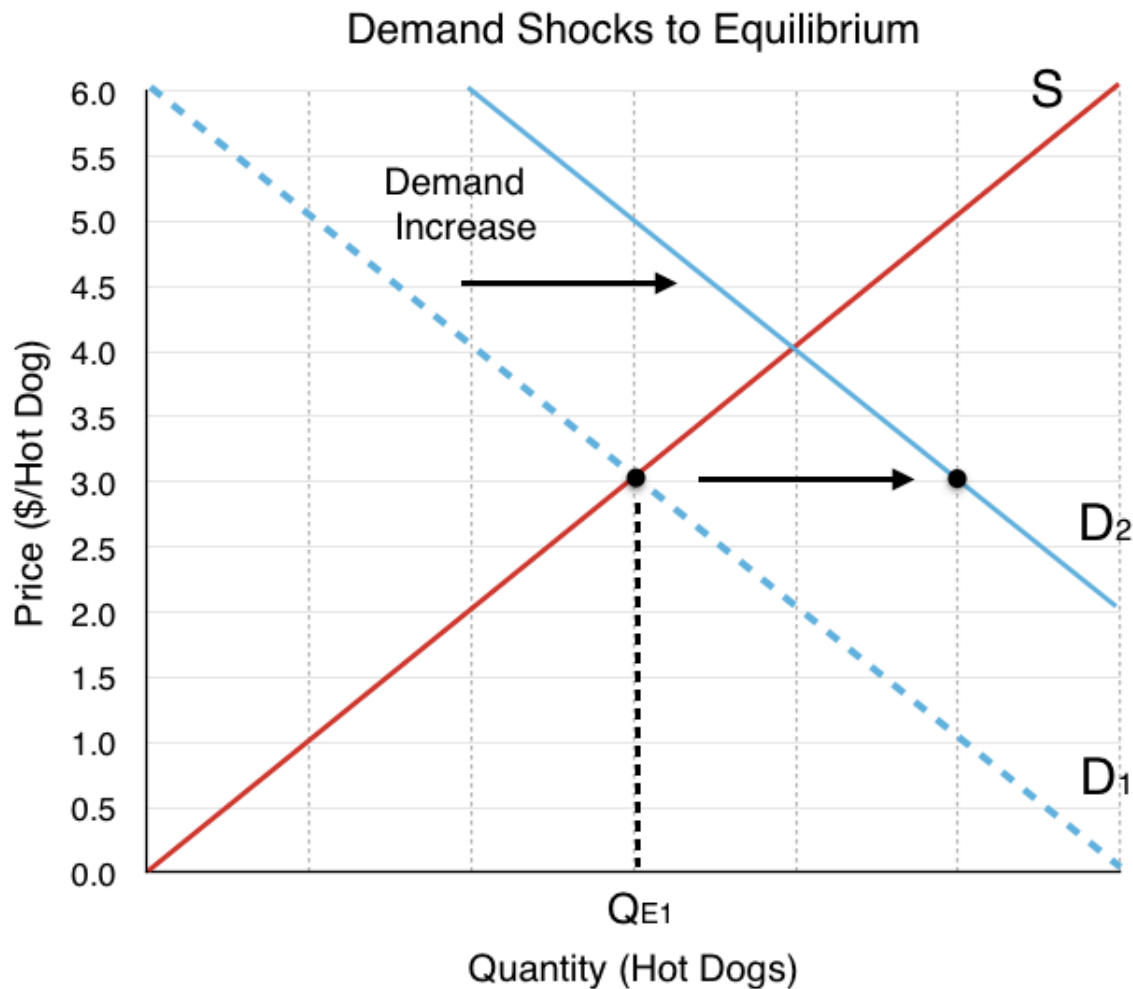


Figure 3.6d

Whereas supply and demand were in equilibrium at Q_{E1} at the initial price of \$3, the demand shift has caused $Q_D > Q_S$. As discussed, this causes a shortage (see left side of Figure 3.6e). Like before, the equal and opposite effects of supply and demand will cause a movement along both the supply and demand curve until we return to our equilibrium at Q_{E2} (right side of Figure 3.6e).

Returning to Equilibrium

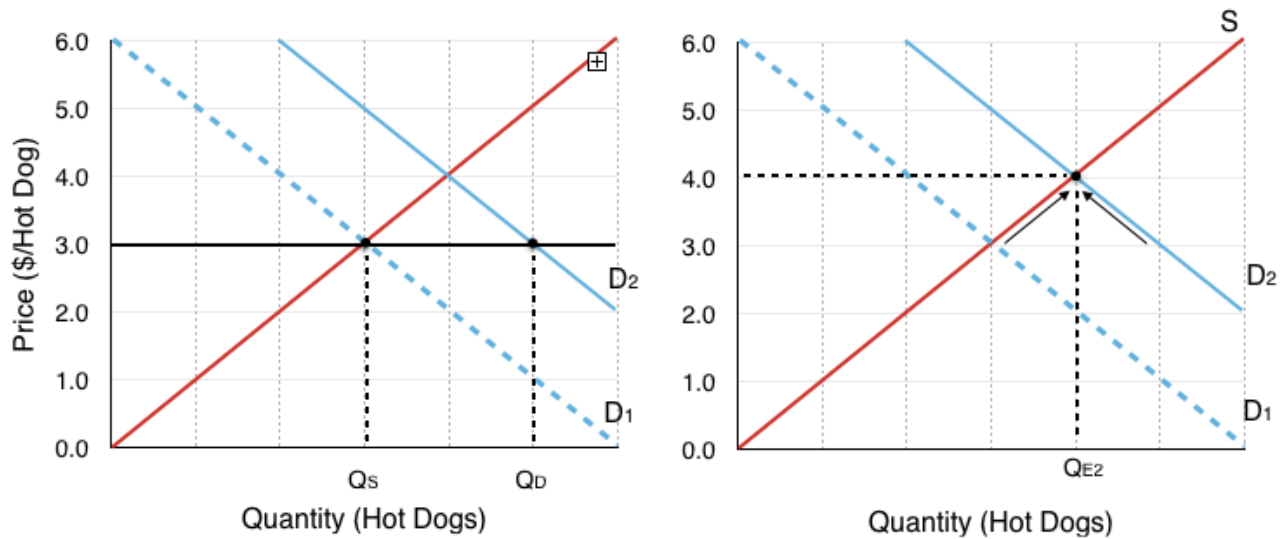


Figure 3.6e

Notice the effects of the demand shift on our overall equilibrium. Both equilibrium price and quantity are now higher. Understanding these final effects is extremely important to understanding the supply and demand model.

What if two curves shift?

We have viewed the separate effects of demand and supply shifts, but what happens if both shift at once? Assume that in addition to an increase in the price of hamburgers, there is a decrease in the number of hot dog stands in the market, causing a decrease in supply. How do these two shocks change our equilibrium? The effects are depicted in Figure 3.6f.

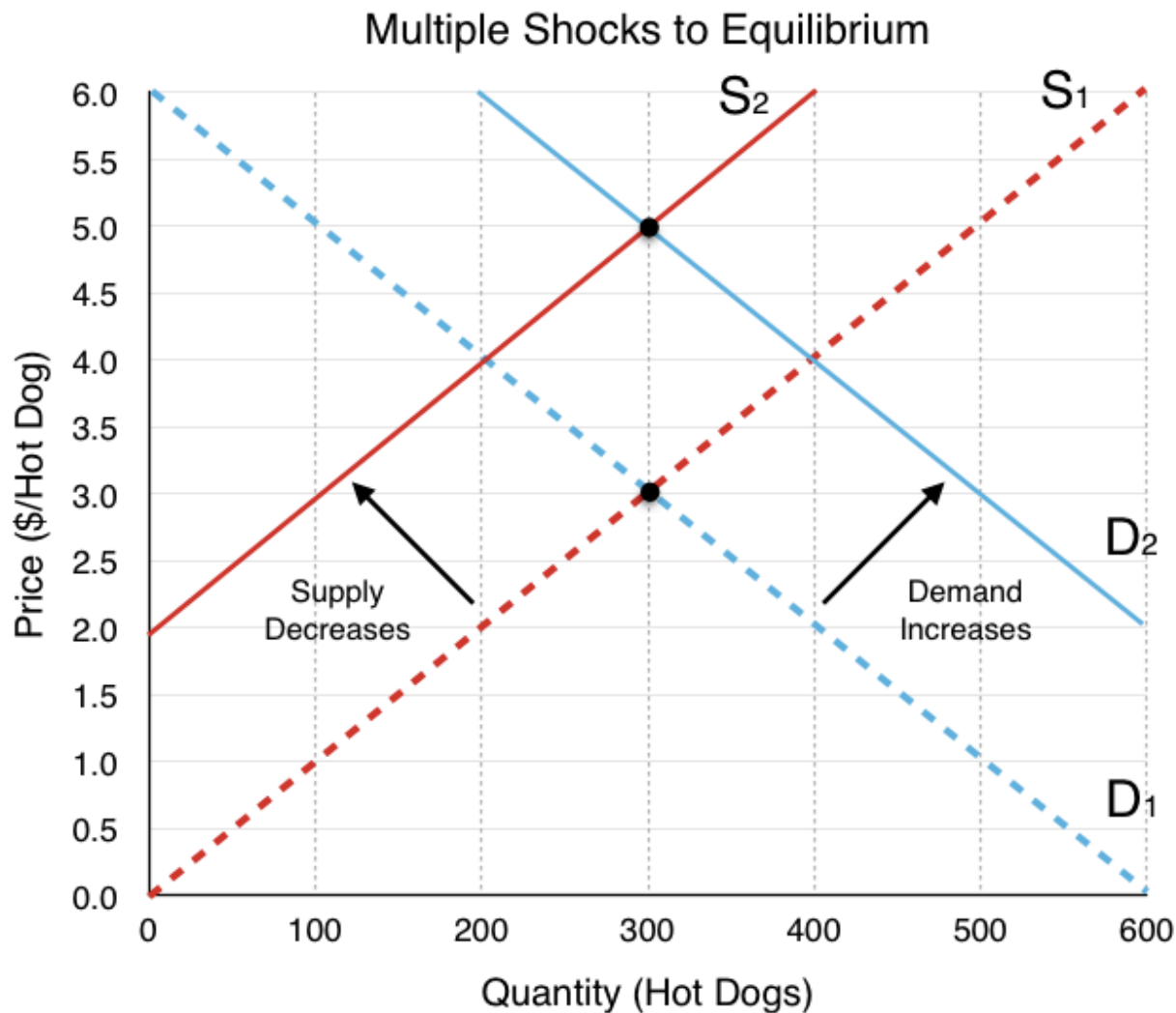


Figure 3.6f

Our two effects, an increase in demand and a decrease in supply, each have their own effects. The increase in demand causes both the price and quantity to increase, whereas the decrease in supply causes the price to increase and quantity to decrease. What does this mean for our equilibrium? Summarizing these effects:

Price: Demand causes **increase**, Supply causes **increase**.

Quantity: Demand causes **increase**, Supply causes **decrease**.

If both the supply and demand shifts are causing the price to rise, our prices will clearly rise; however, the change in quantity is not so simple. If one shift causes quantity to rise and another causes it to fall, what is the overall effect? In Figure 3.6f, there appears to be no change in quantity, but this is because the two shifts are depicted as equal and opposite. In reality, unless we know the magnitude of the curve shifts, we cannot say much about the change in quantity. In other words, the resulting quantity change is inconclusive. Figure 3.6g summarizes the results from different combinations of curve shifts.

	Increase in Demand	Decrease in Demand
Increase in Supply	Price Inconclusive Quantity Rises	Price Falls Quantity Inconclusive
Decrease in Supply	Price Rises Quantity Inconclusive	Price Inconclusive Quantity Falls

Figure 3.6g

Remember, the best way to understand these impacts is through **practice** not memorization.

Market Surplus

In this topic, we have outlined the importance of using consumer surplus and producer surplus to measure net benefits for consumers and producers. Recall **consumer surplus** is the difference between what consumers are willing to pay and what they actually pay, whereas **producer surplus** is the difference between what the producer is paid and the marginal costs of production. Oftentimes, we want to look holistically at the market and calculate **market/private surplus**, a measure of the net benefits accruing to all participants in the market. This includes our consumer surplus, producer surplus, and, as we will explore in Topic 4, government revenue/expenditure.

For our hot dog market, using our market surplus definition of consumer surplus + producer surplus + government, we can see in Figure 3.6g that the market surplus is equal to the green and yellow areas.

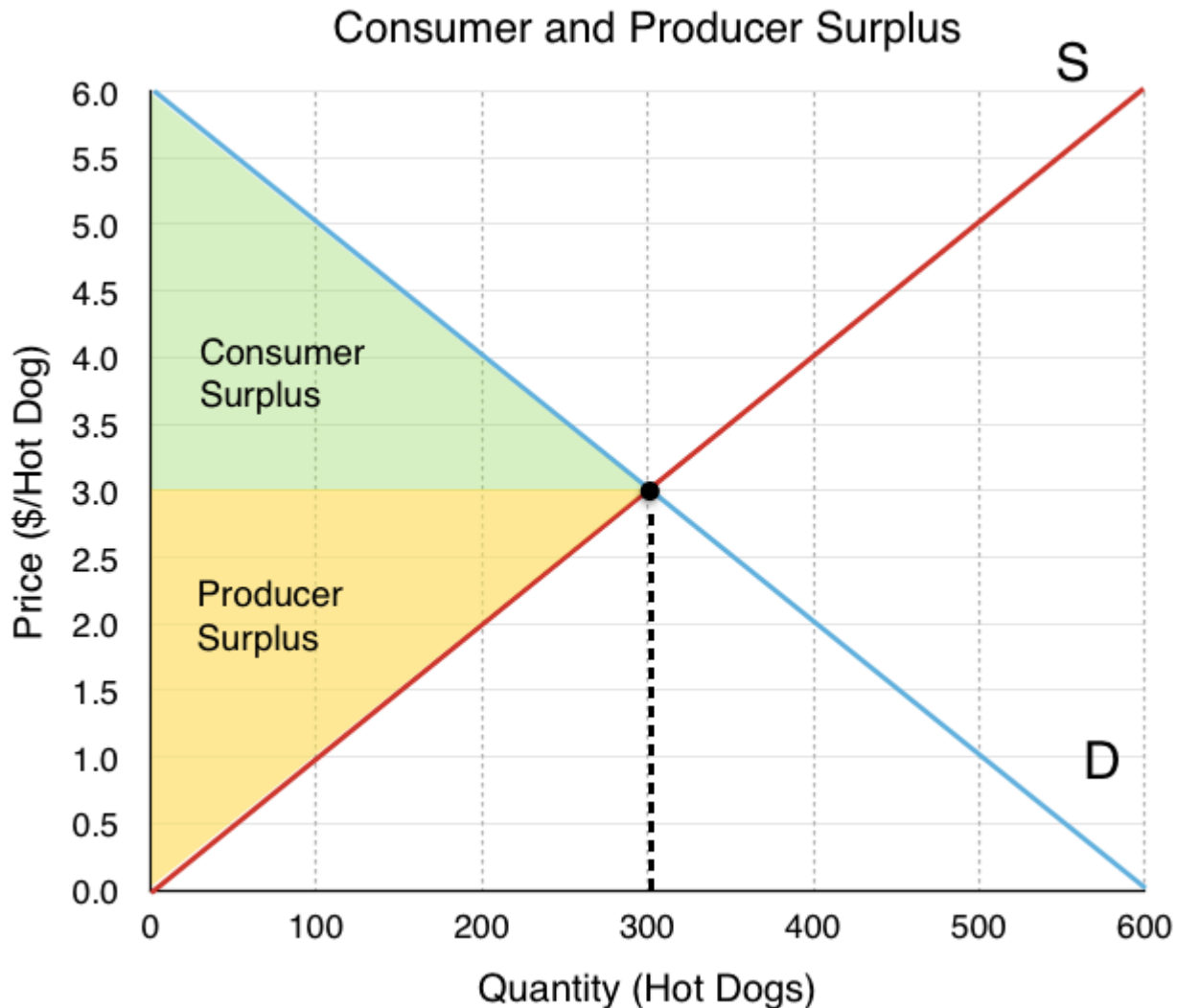


Figure 3.6h

To calculate market surplus, simply find the area of the shaded regions.

The area of a triangle is $(\text{base} \times \text{height})/2$.

Consumer surplus (green) = $(300 \times 3)/2 = \$450$

Producer surplus (yellow) = $(300 \times 3)/2 = \$450$

Market Surplus = $\$450 + \$450 = \$900$

While adding up the surplus of every party is simple with just consumers and producers, it gets more complicated as more players enter the market. In Figure 3.6i, a different process is outlined. Since the demand curve is the marginal benefit curve, it represents the marginal benefits at each quantity level. (We know that this is distributed between consumers and producers) Therefore, the area under our marginal benefit curve represents our total market benefits. Likewise, the supply curve is the marginal

cost curve and represents the marginal costs at each quantity level. The area under the marginal cost curve represents our total market costs.

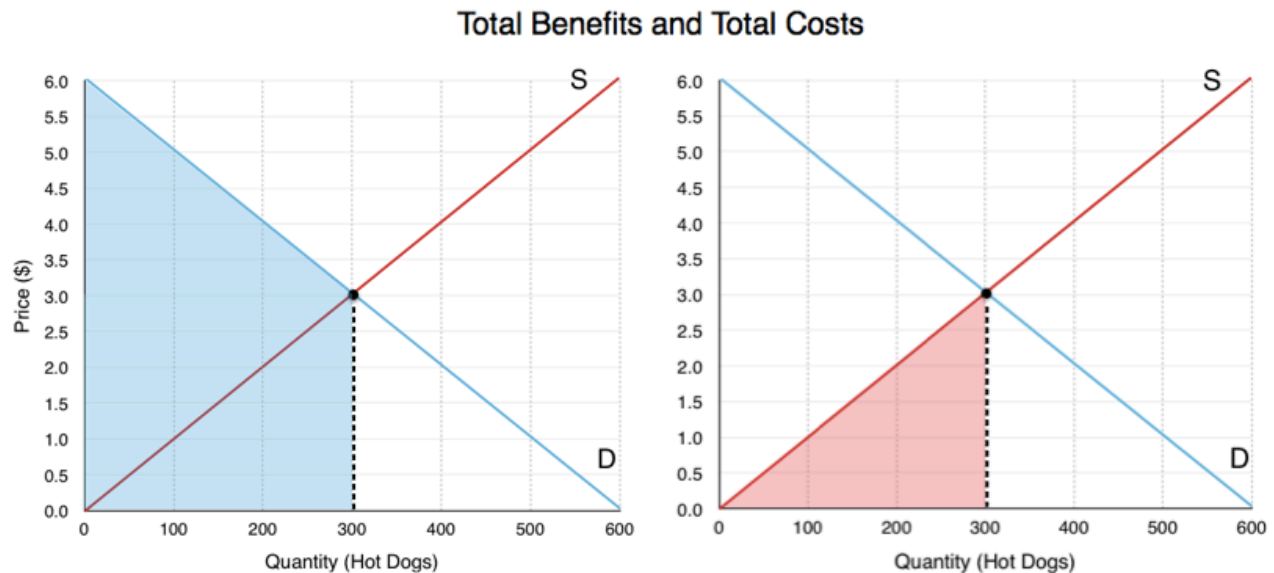


Figure 3.6i

With our total benefits (blue) and our total costs (red), we can easily determine our total market surplus is the green area in Figure 3.6j below. To calculate:

Total Benefits: \$1350

Total benefits correspond to the blue area in Figure 3.6i. This area is made up of a rectangle with dimensions $300 \times \$3$ and a triangle with base 300 and height of \$3. The area is $(300 \times \$3) + (300 \times \$3)/2$.

Total Costs: \$400

Total costs correspond to the red area in Figure 3.6i. This area is made up of a triangle with a base of 300 and height of \$3. The area is $(300 \times \$3)/2$.

Total Market Surplus: \$900

Total market surplus can be calculated as total benefits – total costs. Alternatively, we can calculate the area between our marginal benefit and marginal cost, constrained by quantity. This is the equivalent of finding the difference between the marginal benefits and the marginal costs at each level of production. In Figure 3.6j, this is the green area, with base of \$6 and height of 300.

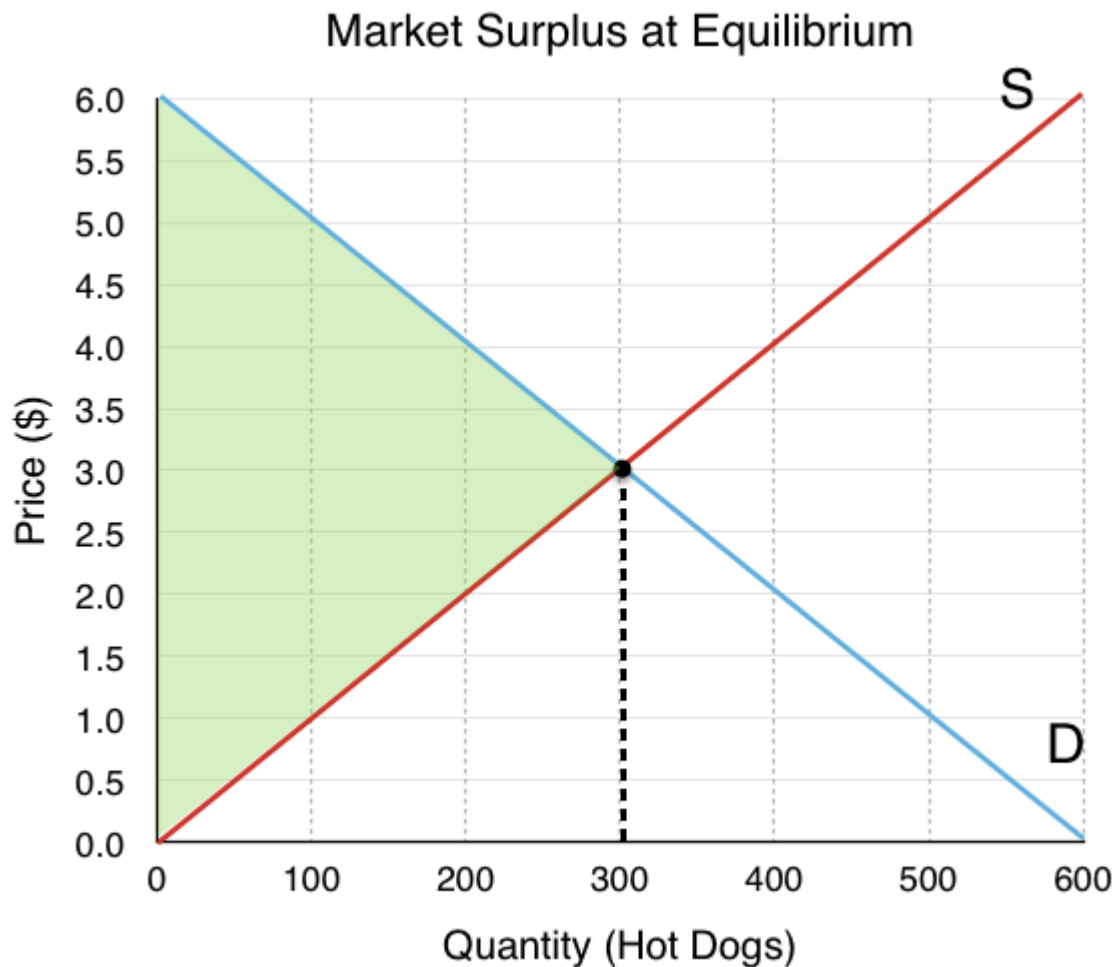


Figure 3.6j

Market Surplus and Efficiency

Market surplus is certainly a useful way to measure the net benefits to players in the market, but it can also be used to measure efficiency. By comparing market surplus in different situations, we can confirm whether an equilibrium is efficient. (Recall efficiency is a situation where we cannot make one person better off without making another worse off.) With this in mind, we can infer that an equilibrium is efficient if it maximizes market surplus.

In Figure 3.6k, we have a market that is producing 200 hot dogs – 100 less than our equilibrium. Is this efficient? Well, if we calculate the green shaded region below, we find that it is \$800, which is \$100 less than before. By simply increasing production back to our original level, we make both consumers and producers better off without making anyone worse off. The difference in green regions from Figure 3.6j and Figure 3.6k is called **Deadweight Loss**, because it is cost to society made by an inefficiency. As a whole, the market could be made better off by increasing quantity.

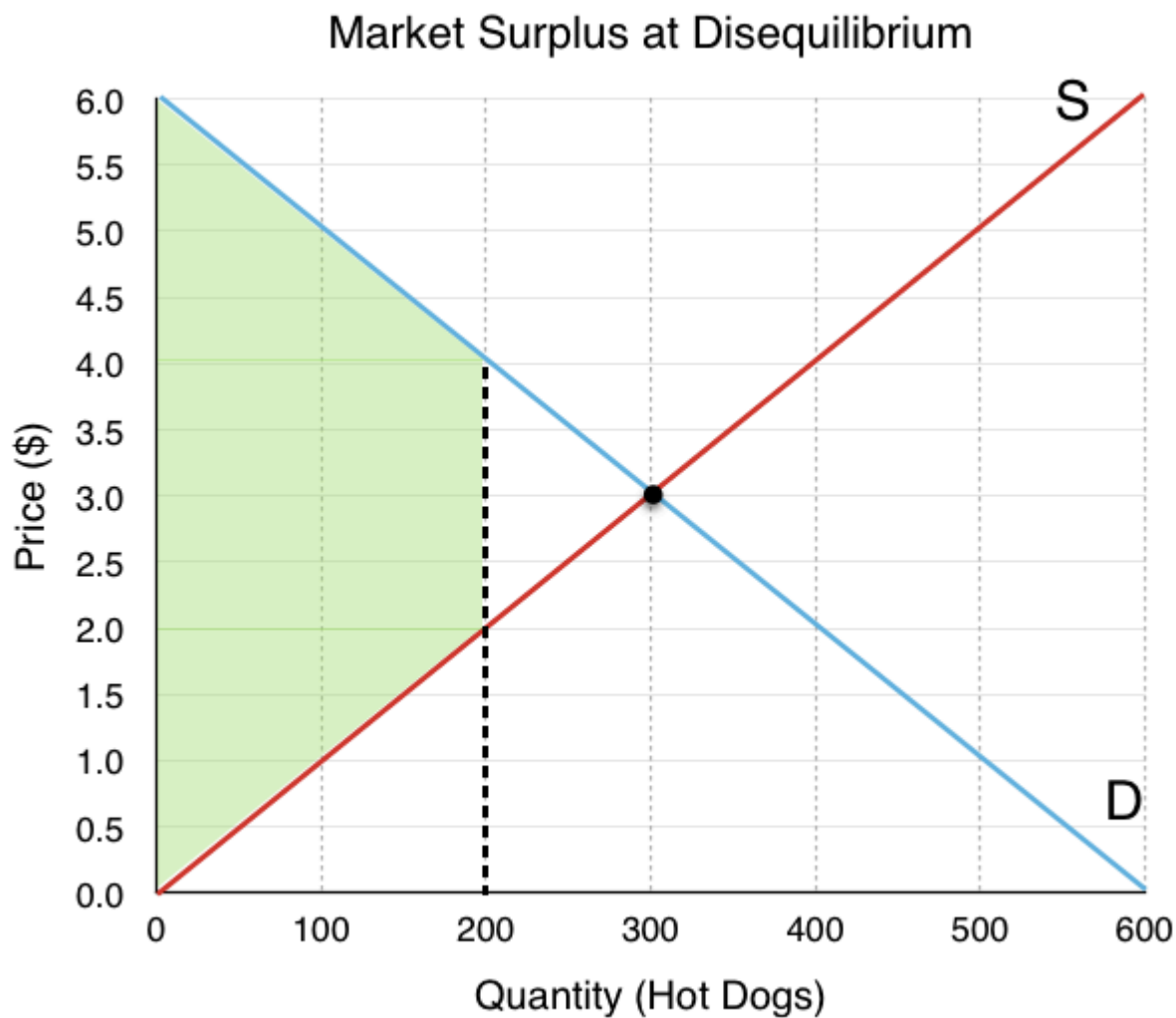


Figure 3.6k

Summary

In this section we completed the construction of our competitive market model, bringing together supply and demand. The equal and opposite forces of supply and demand lead the market to a single equilibrium price and quantity, which is generally self sustaining. Looking at shocks introduced in earlier sections, we saw that external events can change our equilibrium, and combinations of shocks can sometimes lead to ambiguous effects. Using consumer and producer surplus, we developed a criteria for efficiency – market surplus – that can be used to calculate deadweight loss.. Market surplus and deadweight loss will be a key focus of Topic 4, where we look at the impact of government intervention in the market.

Glossary

Deadweight Loss

A cost to society created by a market inefficiency, occurs when quantity is different from equilibrium quantity

Equilibrium Price

the price where quantity demanded is equal to quantity supplied

Equilibrium Quantity

the quantity at which quantity demanded and quantity supplied are equal for a certain price level

Equilibrium

the situation where quantity demanded is equal to the quantity supplied; the combination of price and quantity where there is no economic pressure from surpluses or shortages that would cause price or quantity to change

Excess Demand

at the existing price, the quantity demanded exceeds the quantity supplied; also called a shortage

Excess Supply

at the existing price, quantity supplied exceeds the quantity demanded; also called a surplus

Market Surplus

the total welfare to society, includes producer surplus, consumer surplus, and government expenditure

Shortage

at the existing price, the quantity demanded exceeds the quantity supplied; also called excess demand

Surplus

at the existing price, quantity supplied exceeds the quantity demanded; also called excess supply

Exercises 3.6

1. Suppose that – at a given level of some economic activity – marginal benefit is greater than marginal cost. The economic agent in question (the decision-maker) can increase net benefits by increasing the level of the activity, for which of the following reasons?

- a) Total costs will fall by more than total benefits.
- b) Total benefits will rise by more than total costs.
- c) Neither a) nor b).
- d) Either a) or b).

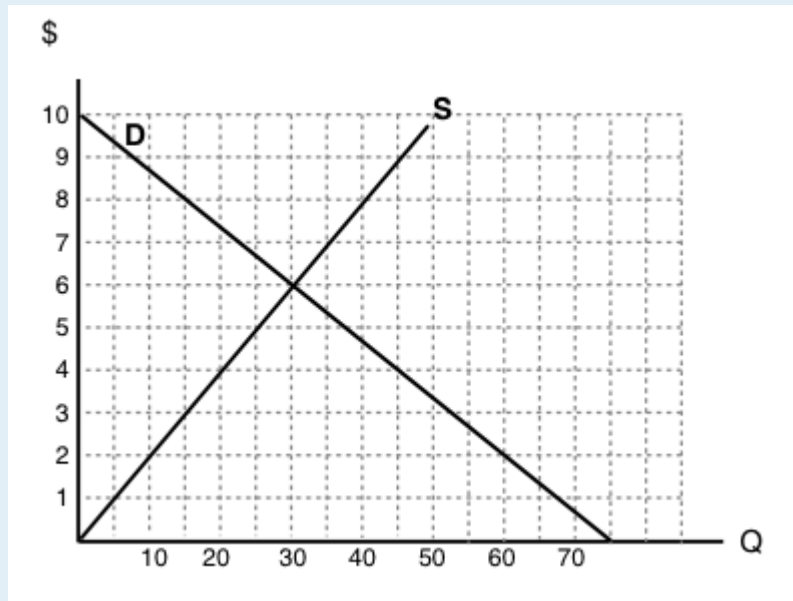
2. Which of the following statements is TRUE?

- a) Consumer surplus is the difference between the minimum amount a consumer is willing to pay, and what he or she actually pays.
- b) Producer surplus is the difference between the amount of money a seller is paid, and the maximum amount

that he or she needs to be paid.

- c) Market surplus is equal to the sum of consumer surplus and producer surplus.
- d) All of the above are true.

The following TWO questions refer to the supply and demand curve diagram below.



3. The equilibrium price in this market is equal to:

- a) \$6 per unit.
- b) \$5 per unit.
- c) \$4 per unit.
- d) \$3 per unit.

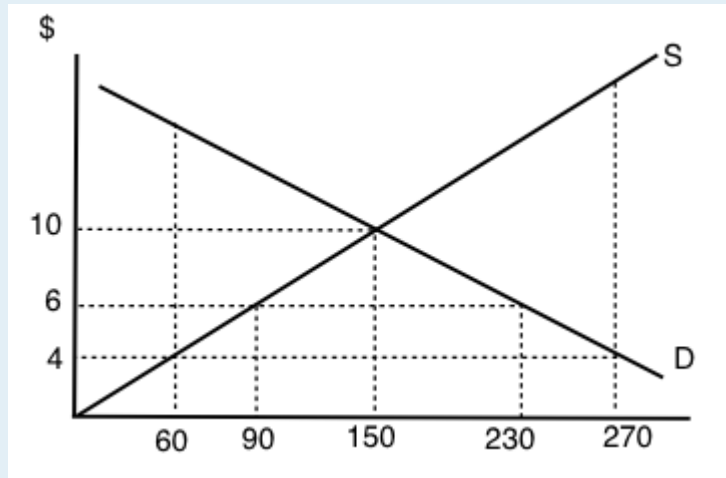
4. At a price of \$8, there is:

- a) Excess demand (a shortage) of 25 units.
- b) Excess demand (a shortage) of 15 units.
- c) Excess supply (a surplus) of 15 units.
- d) Excess supply (a surplus) of 25 units.

5. Which of the following statements about consumer surplus and producer surplus is TRUE?

- a) Consumer surplus is equal to the area under the demand curve.
- b) Producer surplus is equal to the area under the supply curve.
- c) Both producer and consumer surplus are equal to price multiplied by quantity.
- d) None of the above statements is true.

6. Consider the supply and demand curve diagram below.



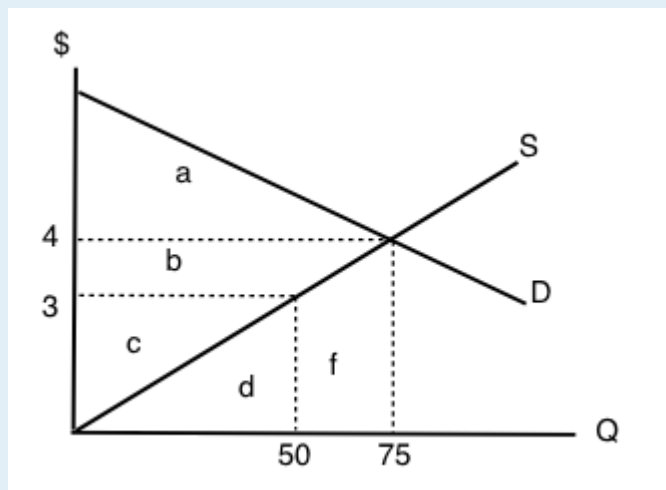
If the price of this good is \$6, then:

- a) There is an excess demand (a shortage) equal to 210 units.
- b) There is an excess demand (a shortage) equal to 140 units.
- c) There is an excess supply (a surplus) equal to 210 units.
- d) There is an excess supply (a surplus) equal to 140 units.

7. When deciding how much of a particular good to purchase, a consumer should:

- a) Keep buying more units until the total benefits equal the total costs.
- b) Always buy at additional unit if its marginal net benefit is positive.
- c) Keep buying more units if marginal cost is greater than marginal benefit.
- d) Always buy at additional unit if its marginal benefit is positive.

8. Refer to the supply and demand diagram below.



At the equilibrium price in this market, consumer surplus is equal to area ____ and producer surplus is equal to area ____

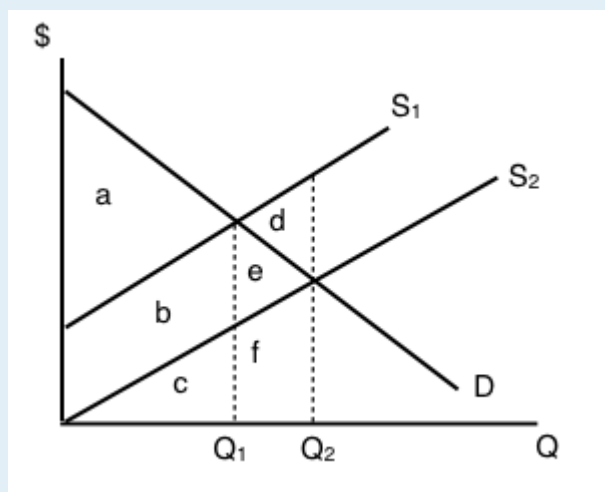
- a) a + b; c.
- b) a; b + c.

- c) $a + b$; $b + c$.
- d) $a + b + c$; $d + f$.

9. Which of the following statements about consumer and producer surplus is TRUE?

- a) Consumer surplus is equal to the maximum amount a consumer is willing to pay for a good, minus what the consumer has to pay for the good.
- b) Producer surplus is equal to the amount received from selling a good, minus the minimum amount the seller needed to receive, in order to be willing to sell the good.
- c) Both a) and b) are true.
- d) Neither a) nor b) are true.

The following TWO questions refer to the supply and demand diagram below.



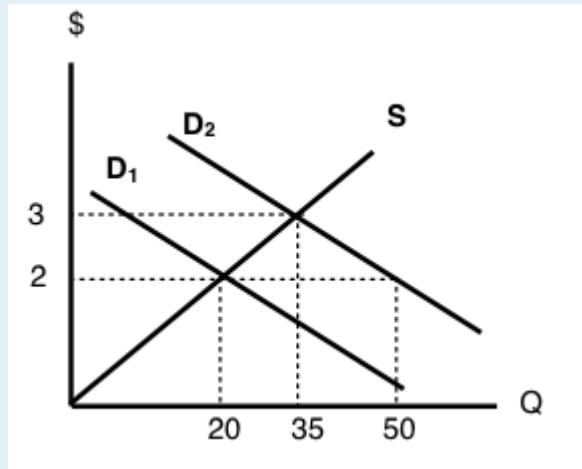
10. Which of the following COULD explain the shift in supply from S_1 to S_2 .

- a) An increase in the cost of producing the good.
- b) A decrease in the number of sellers in the market.
- c) Both a) and b).
- d) Neither a) nor b).

11. If supply is S_2 , which area represents MARKET surplus?

- a) a
- b) $a + b$.
- c) $a + b + e$.
- d) We need to know price in order to determine market surplus.

12. Consider the supply and demand diagram drawn below.



Suppose that demand is initially D_1 , but, following a change in consumer preferences, demand shifts to D_2 . Note that the two demand curves are parallel. Which of the following statements is TRUE?

- a) Demand increases by 30 units.
- b) Quantity demanded increases by 30 units.
- c) Equilibrium quantity increases by 30 units.
- d) More than one of the above statements is true.

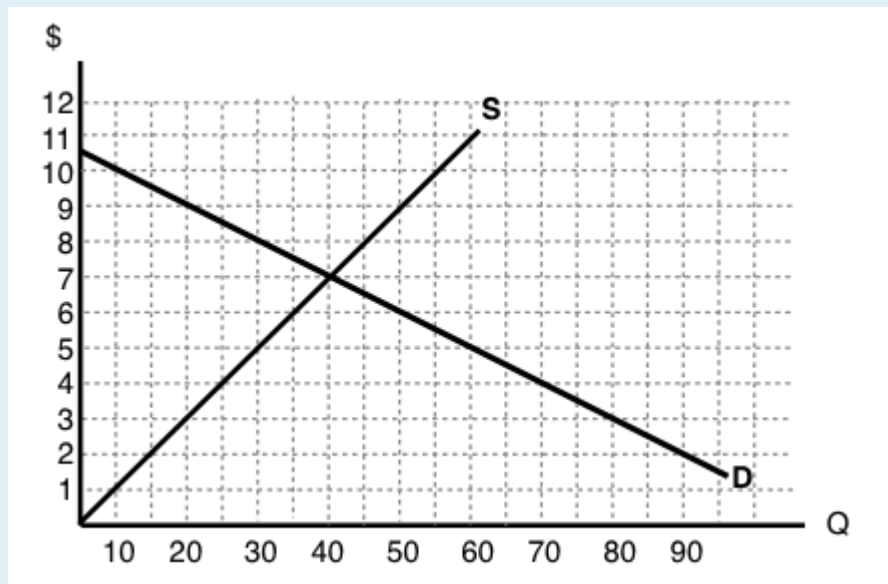
13. Suppose the equilibrium price of good X is \$10 and the equilibrium quantity is 60 units. If the price of good X is \$4:

- a) The quantity demanded will be less than 60 units.
- b) The quantity supplied will be more than 60 units.
- c) There will be an excess demand for good X.
- d) There will be an excess supply of good X.

14. All else equal, a decrease in the marginal cost of producing a good will result in:

- a) A lower equilibrium quantity and a higher equilibrium price.
- b) A lower equilibrium quantity and a lower equilibrium price.
- c) A higher equilibrium quantity and a higher equilibrium price.
- d) A higher equilibrium quantity and a lower equilibrium price.

The following TWO questions refer to the diagram below.



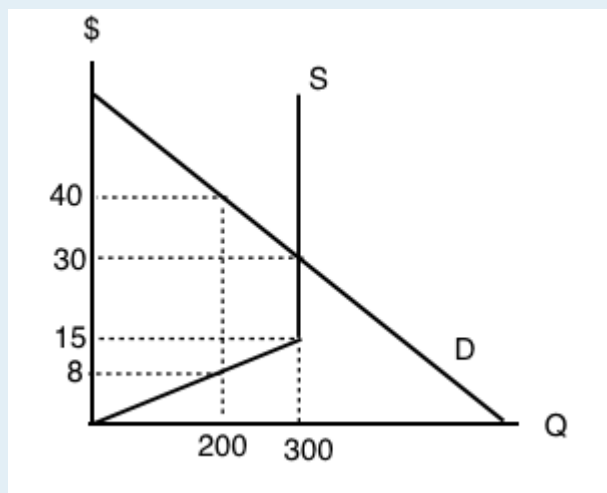
15. The equilibrium price is ____ the equilibrium quantity is ____.

- a) \$5; 30.
- b) \$7; 30.
- c) \$7; 40.
- d) \$8; 40.

16. If the marginal cost of producing this good rises by \$3 at every output level, then the new equilibrium price will be ____.

- a) There is insufficient information to calculate the new equilibrium price
- b) \$3.
- c) \$8.
- d) \$10.

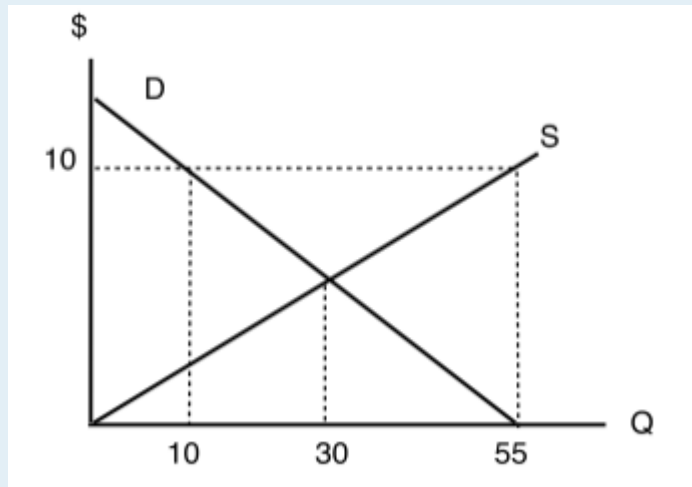
17. Consider the supply and demand diagram drawn below.



What does the equilibrium price equal in this market?

- a) \$8.
- b) \$15.
- c) \$30.
- d) \$45.

18. Refer to the diagram below.



At a price of \$10 per unit:

- a) There is excess demand (a shortage) equal to 45 units.
- b) There is excess supply (a surplus) equal to 45 units.
- c) There is excess demand (a shortage) equal to 20 units.
- d) There is excess supply (a surplus) equal to 20 units.

19. Consider the market for oranges. Suppose that both of the following occur simultaneously: (i) the price of apples (a substitute for oranges) decreases; and (ii) world-wide droughts reduce the harvest of oranges by 30%. Then, in the market for oranges we would expect:

- a) The equilibrium price of oranges could either increase or decrease, but equilibrium quantity will definitely decrease.
- b) The equilibrium quantity of oranges could either increase or decrease, but equilibrium price will definitely decrease.
- c) The equilibrium price of oranges could either increase or decrease, but equilibrium quantity will definitely increase.
- d) The equilibrium quantity of oranges could either increase or decrease, but equilibrium price will definitely increase.

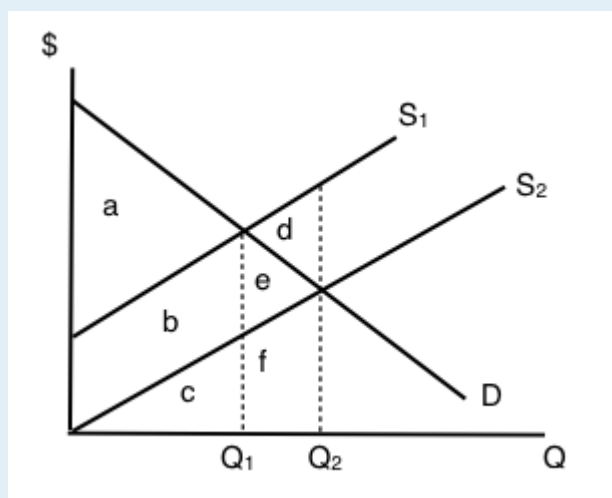
20. Suppose that, following a decrease in the supply of good X, we observe that the price of good Y decreases. If no other curves have shifted, which of the following can we infer?

- a) Good X is an inferior good.
- b) Goods X and Y are complements.
- c) Goods X and Y are substitutes.
- d) None of the above.

21. In recent years there have been a couple of high profile cases of contamination of baby formula produced in China. As a result, many Chinese parents buy baby formula that is produced outside China. Which of the following accurately describes the likely effect of this on baby formula prices?

- a) An increase in the price of baby formula produced in China and a decrease in the price of baby formula produced outside China.
- b) A decrease in the price of baby formula produced in China and an increase in the price of baby formula produced outside China.
- c) A decrease in the price of both baby formula produced in China and baby formula produced outside China.
- d) An increase in the price of both baby formula produced in China and baby formula produced outside China.

22. Refer to the supply and demand diagram below.



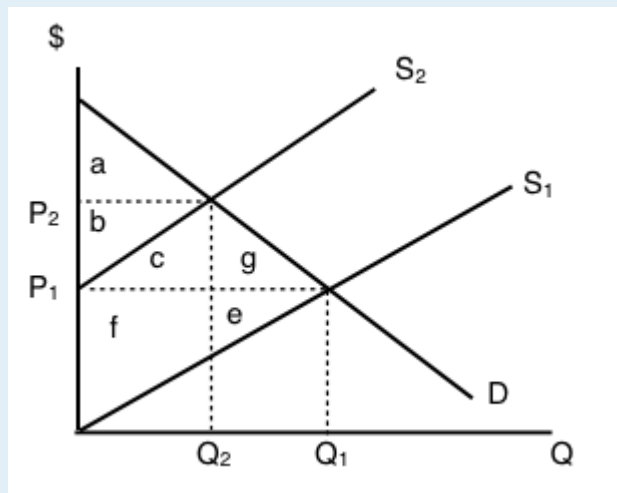
If supply is S_1 , which area represents MARKET surplus?

- a) a
- b) a + b.
- c) a + b + e.
- d) We need to know price in order to determine market surplus.

23. Suppose that in the market for good X (a normal good), the following occur simultaneously: (i) consumer incomes increase and (ii) the price of oil (an input to the production of X) increases. Which of the following statements is TRUE?

- a) The equilibrium price of X could either increase or decrease, but equilibrium quantity will definitely decrease.
- b) The equilibrium quantity of X could either increase or decrease, but equilibrium price will definitely decrease.
- c) The equilibrium price of X could either increase or decrease, but equilibrium quantity will definitely increase.
- d) The equilibrium quantity of X could either increase or decrease, but equilibrium price will definitely increase.

24. Consider the supply and demand diagram below.



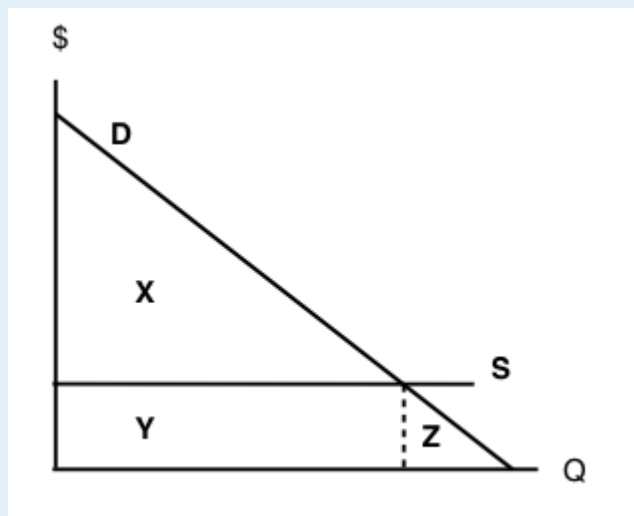
If supply decreases from S₁ to S₂, which area represents the change in PRODUCER surplus?

- a) $b + c - f$.
- b) $a + b + c$.
- c) $b - f - e$.
- d) $c + f + g + e$.

25. A recent news story reported that OPEC is expected to decrease the supply of oil next summer. Summer is traditionally a time of increased demand for oil because of the many families driving and flying to vacation sites. What would be the combined effect of these two activities on the summer market for gasoline?

- a) An increase in the equilibrium price and the quantity.
- b) An increase in the equilibrium price and an unpredictable change in the equilibrium quantity.
- c) An unpredictable change in both the equilibrium price and the quantity.
- d) An unpredictable change in the equilibrium price and a decrease in the equilibrium quantity.

26. Consider the supply and demand curves drawn below.



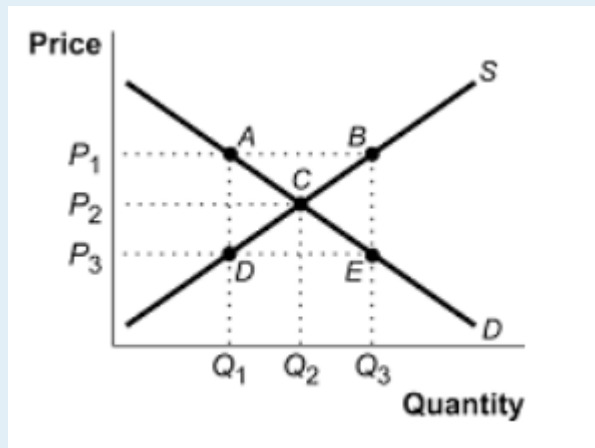
Given the equilibrium quantity, which area represents MARKET SURPLUS?

- a) $X + Y + Z$.
- b) $X + Y$.
- c) X .
- d) There is no market surplus.

27. Which of the following CANNOT result in an increase in price in a competitive market for a normal good?

- a) An increase in income.
- b) A decrease in the price of a complement to this good.
- c) An increase in the price of a substitute for this good.
- d) A decrease in the wages paid to workers who produce this good.

28. Consider the supply and demand curves illustrated below.



Which of the following statements is true?

- a) At a price of P_3 , there is excess demand equal to the distance DE .
- b) At a price of P_3 , there is excess demand equal to the distance BE .
- c) At a price of P_3 , there is excess supply equal to the distance BE .
- d) At a price of P_3 , there is excess supply equal to the distance DE .

29. Which of the following CANNOT result in a decrease in the equilibrium quantity sold of an inferior good?

- a) An increase in the price of a substitute for the good.
- b) An increase in consumer incomes.
- c) An increase in wages paid to workers who produce the good.
- d) An increase in the price of a complement for the good.

30. Which of the following statements is FALSE?

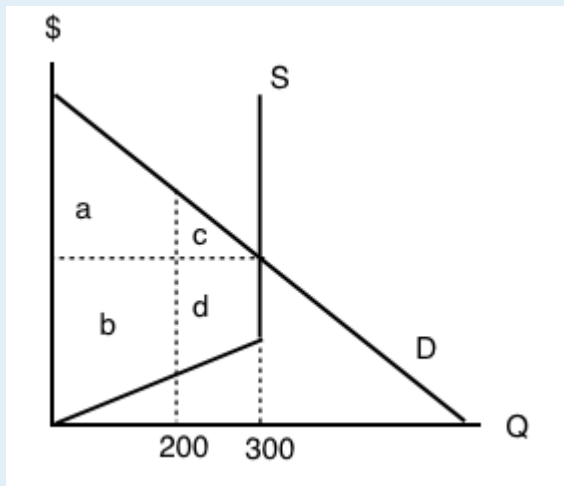
- a) At the competitive equilibrium, market surplus is maximized.
- b) At the competitive equilibrium, the marginal benefit to consumers equals the marginal cost to producers.

- c) At the competitive equilibrium, social surplus is maximized if there are no externalities.
- d) At the competitive equilibrium, it is possible to make at least one person better off without making anyone worse off.

31. A recent Health Canada report argued that there is a strong link between the consumption of steak and heart disease. At the same time, Canadian consumers' incomes rose. If steak is a normal good, what are the combined effects in the market for steak?

- a) An increase in the equilibrium price and the quantity.
- b) An increase in the equilibrium price and an unpredictable change in the equilibrium quantity.
- c) An unpredictable change in both the equilibrium price and the quantity.
- d) An unpredictable change in the equilibrium price and a decrease in the equilibrium quantity.

The next THREE questions refer to the diagram below.



32. Given the equilibrium quantity of 300 units, which areas represent MARKET SURPLUS?

- a) $a+b+c+d$.
- b) $a+b+c$.
- c) $a+c$.
- d) $a+b$.

33. Given the equilibrium quantity of 300 units, which areas represent PRODUCER SURPLUS?

- a) $c+d$.
- b) $a+b$.
- c) $a+c$.
- d) $b+d$.

34. Given the equilibrium quantity of 300 units, which areas represent CONSUMER SURPLUS?

- a) $c+d$.
- b) $a+b$.
- c) $a+c$.
- d) $b+d$.

Case Study - The Housing Market

Note that the Economics 103 Case Studies are meant to supplement the course material by giving you experience applying Economic concepts to real world examples. While they are beyond the level you will be tested on, they are useful for students who want a stronger grasp of the concepts and their applications.

Note that this case study is difficult if you do not print the diagrams, or reproduce them on graph paper. If you are unable to print, we recommend reviewing the solutions to ensure you understand the general lessons presented.



(Credit: Felipe Skroski/ Flickr/ CC BY 2.0)

In 2016 rental vacancy rates dropped to as low as 0.6% in Greater Victoria. When compared to the national average of 3.3% it is clear why many media channels and individuals were calling it a 'housing crisis'. Students were especially hit hard by these low vacancies, with some international students at Camoson college having to return home when they couldn't find a place to stay. Using our competitive

market model, let's examine some of the factors that played into this crisis and policies that could be used to fix it.



Read more about the Victoria Housing crisis.

Below is a representation of the Victoria Housing Market.

1. Label Figure CS3 a. with the Equilibrium price and quantity, and label supply and demand curves as either renters or landlords.



Figure CS3 a.

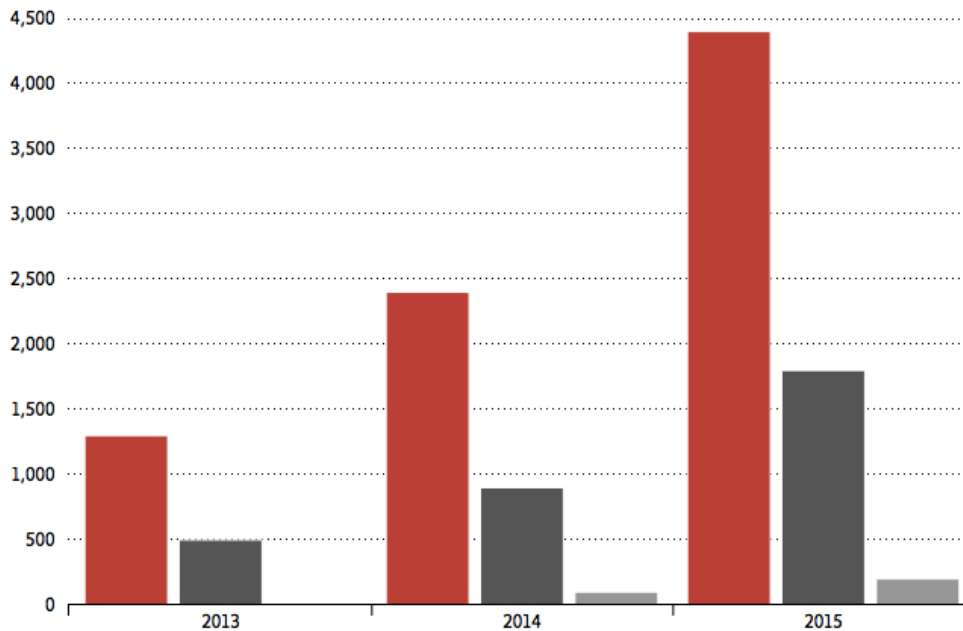
If supply is equal to demand there should be no vacancy, but we know that a 0% vacancy rate would be an extremely difficult market for renters.

2. Explain why a housing market at equilibrium could still have a vacancy rate of 4%.

One factor that has been blamed for the housing crisis is Airbnb. Airbnb describes itself as an online marketplace and hospitality service, enabling people to list or rent short-term lodging including vacation rentals, apartment rentals, homestays, hostel beds, or hotel rooms, with the cost of lodging set by the property owner. City councillors have targeted these short term rentals, saying that many landlords have opted to Airbnb their home, rather than rent out longer term. The growth of Airbnb in Vancouver has been shown below.

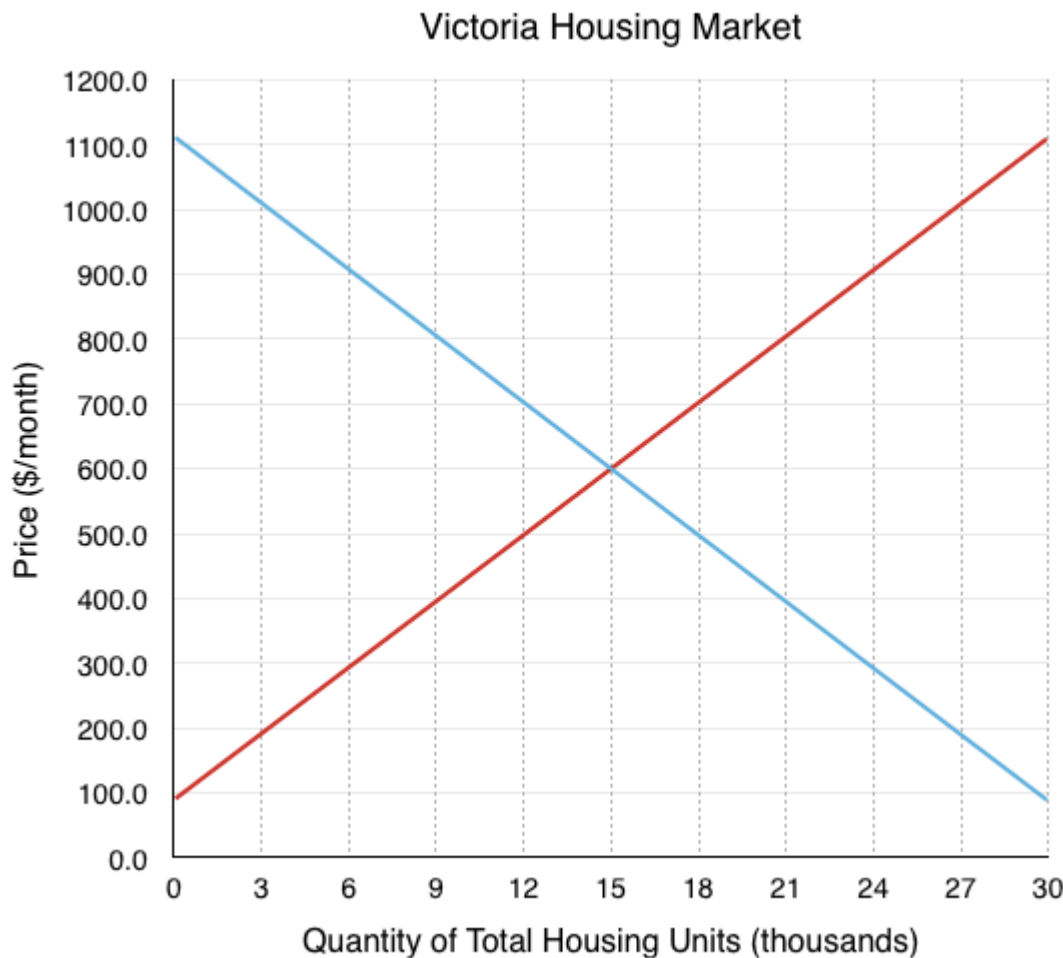
Airbnb growth in Vancouver

● Entire home ● Private room ● Shared room



(Credit: AirBnb)

3. Assume 3000 landlords decide to switch from renting to Airbnb, show the impact of the changes on Figure CS3 b. Label the new equilibrium price and quantity.



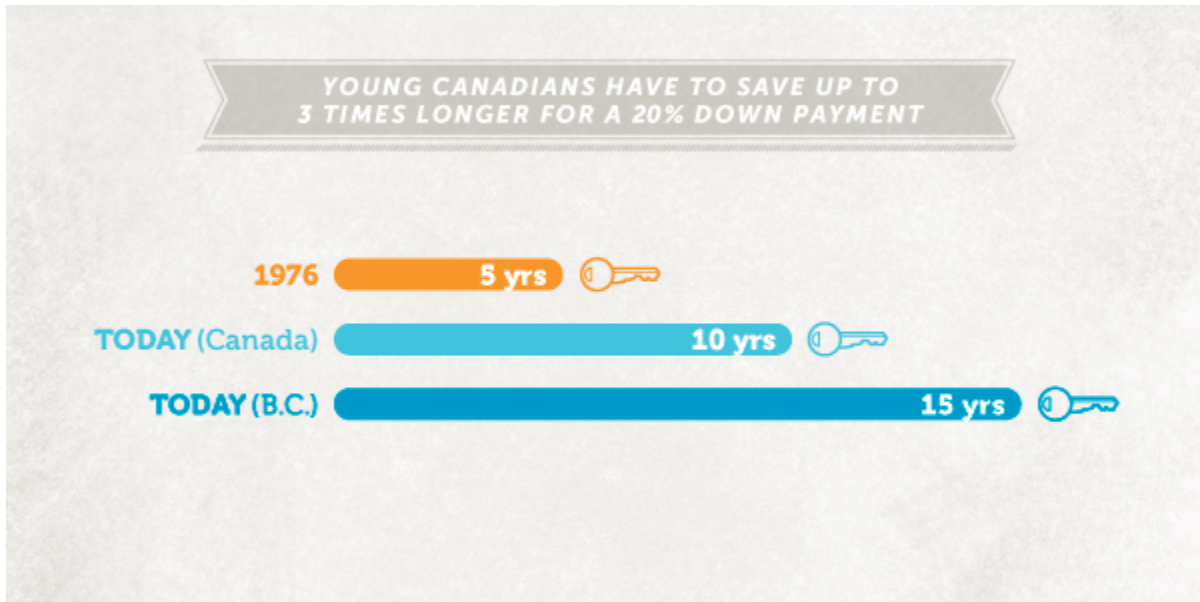
Note that Airbnb has been adamant that short-term rentals have had a negligible impact on the housing market, citing that in Vancouver only 320 hosts rent out their properties often enough to make more money than long-term rentals. That represents only 0.11% of the total housing units. In Victoria, that would mean only 25 units are affected by short-term rentals.

Tom Davidoff, a University of B.C. business professor, said the general public frequently looks at the fact that Airbnb is popular in expensive neighbourhoods and concludes that it is Airbnb that drives up rents there. But, he said, those neighbourhoods were expensive anyway and the impact of Airbnb taking a certain slice of the available stock is minimal.



Read more about Airbnb's supposed impact on the market.

Another factor that has had an impact on the rental market is the inability of many young Canadians to buy homes. Not only have house prices skyrocketed, but more are burdened by student loans out of university. It is estimated that it takes 3 times longer (15 years) to save enough to have a 20% downpayment on a house than it did in 1976. This reduction in Canadians mortgaging a home has caused an increasing amount to enter the market.



(Credit: Generation Squeeze)



Read more about the increasing squeeze on millennials.

4. Assume 9000 new renters enter the market instead of mortgaging homes, show the impact of the changes on Figure CS3 b. Explain the impact of both the shock from Airbnb and the shock from less housing buyers on equilibrium price and quantity. Do the shocks work together or oppose one another?

In the housing market, prices are slow to adjust, landlords cannot simply raise prices immediately under the Residential Tenancy Act. Landlords can only raise prices when negotiating a new contract. This causes many unjustified evictions from landlords as they want to charge the new equilibrium price. In the short-term, prices stay relatively the same causing shortages or surplus.

5. Assume price remains at the original equilibrium , calculate the magnitude of the shortage or surplus of housing that results. Explain the impact this shortage will have the behaviour of landlords.

The British Columbia government unveiled a \$500-million affordable-housing plan targeted at communities that have struggled with a shortage of low-cost housing. Premier Christy Clark announced her government's commitment to fund 68 new projects to help address the crisis



(Credit: Province of British Columbia/ Flickr/ CC BY-NC-ND 2.0)



Read more about the governments response to the housing crisis.

6. Assume the government wants to bring price back to it's original level, if it costs \$50,000 to increase the number of rental units by one, how much will this cost the government?

Groups have criticized the government response, saying that they have ignored many other avenues that could more easily increase the supply of affordable housing.

7. Read the Executive Summary of the Alliance of BC Students White Paper on Student Housing.

Solutions: Case Study - The Housing Market

1. Label Figure CS3 a. with the Equilibrium price and quantity, and label supply and demand curves as either renters or landlords.



Since **Landlords** supply the housing units, they represent the **supply side** of the market, labeled S1.

Since **Renters** demand the housing units, they represent the **demand side** of the market, labeled S2.

The equilibrium E_1 occurs at the intersection of supply and demand, in this case @ $E_{P1} = \$600$, $E_{Q1} = 15,000$ rental units.

2. Explain why a housing market at equilibrium could still have a vacancy rate of 4%.

In a perfect equilibrium, the housing market would have no vacancies. However, one of the requirements of a perfect equilibrium is a instant transmission of information. In the real market, this is not the case.

Because of this, even if there is an equal amount of supply and demand, it is difficult for renters to match up with landlords. This means that when someone leaves the rental market, it takes time before that vacancy is filled. Therefore even when supply = demand there can be a positive vacancy rate in the market. Depending on the speed of information transfer, there will be an equilibrium vacancy rate that represents healthy market conditions – without further information we could assume this rate is around the Canadian average of 3.3%. This means that a vacancy rate of 0.6% would have to represent a shortage of housing from disequilibrium.

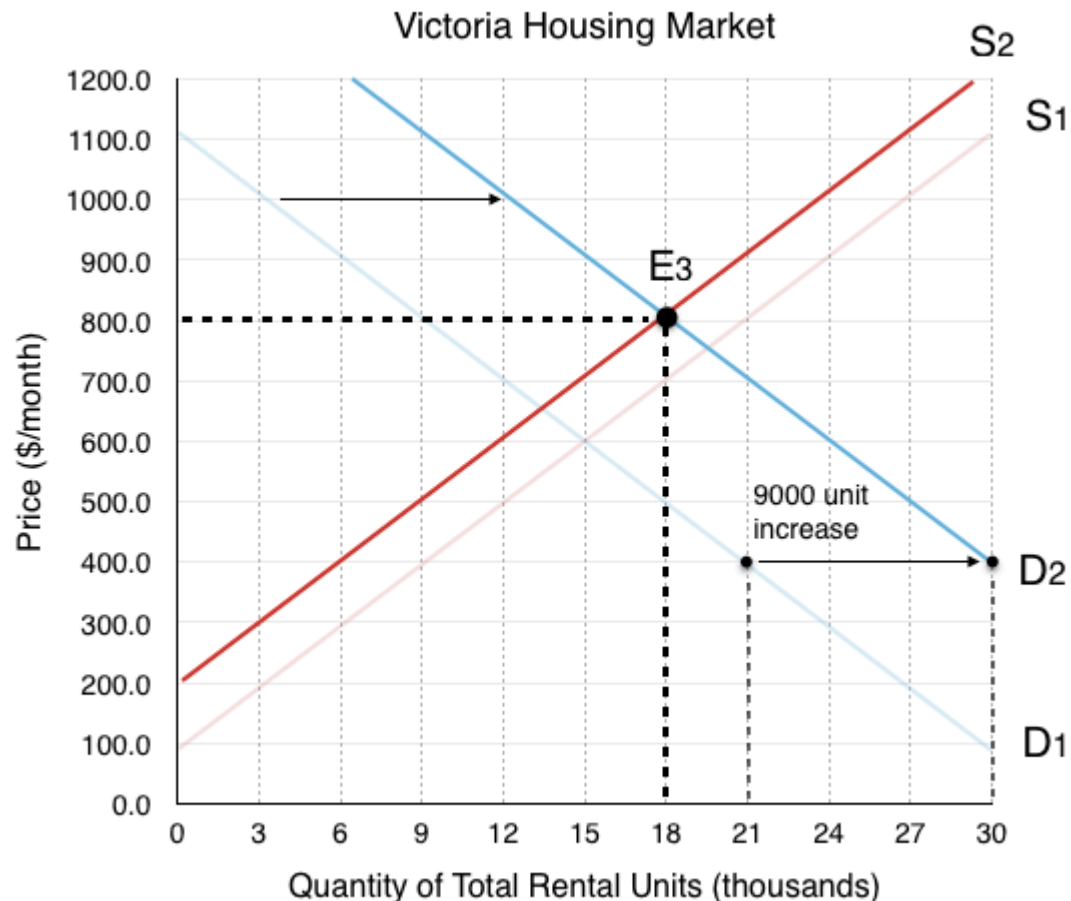
3. Assume 3000 landlords decide to switch from renting to Airbnb, show the impact of the changes on Figure CS3 b. Label the new equilibrium price and quantity.



The decrease in landlords causes a decrease in supply. We can find the exact magnitude of the shift by looking at how much quantity supplied decreases for each price level. In this case, we are told to assume that quantity supplied decreases by 3000 rental units at every price. This causes a shift from S_1 to S_2 .

The new equilibrium E_2 results from the intersection between S_2 and D_1 , in this case @ $E_{p2} = \$650$, $E_{Q2} = 13,000$ rental units.

4. Assume 9000 new renters enter the market instead of mortgaging homes, show the impact of the changes on Figure CS3 b. Explain the impact of both the shock from Airbnb and the shock from less housing buyers on equilibrium price and quantity. Do the shocks work together or oppose one another?



The increase in renters in the market causes an increase in demand. Again, the magnitude of the shift is given to us. We are told that quantity demanded increases by 9000 rental units at every price. this causes demand to shift from D₁ to D₂.

The new equilibrium E₃ results from the intersection between S₂ and D₂, in this case @ **E_{P3} = \$800, E_{Q3} = 18,000 rental units.**

We can see that compared to E_{P1} = \$600, E_{Q1} = 15,000 rental units, E₃ has seen a increase in price and quantity. Breaking down the two effects:

The decrease in supply caused price to rise and quantity to fall.

The increase in demand caused price to rise and quantity to rise.

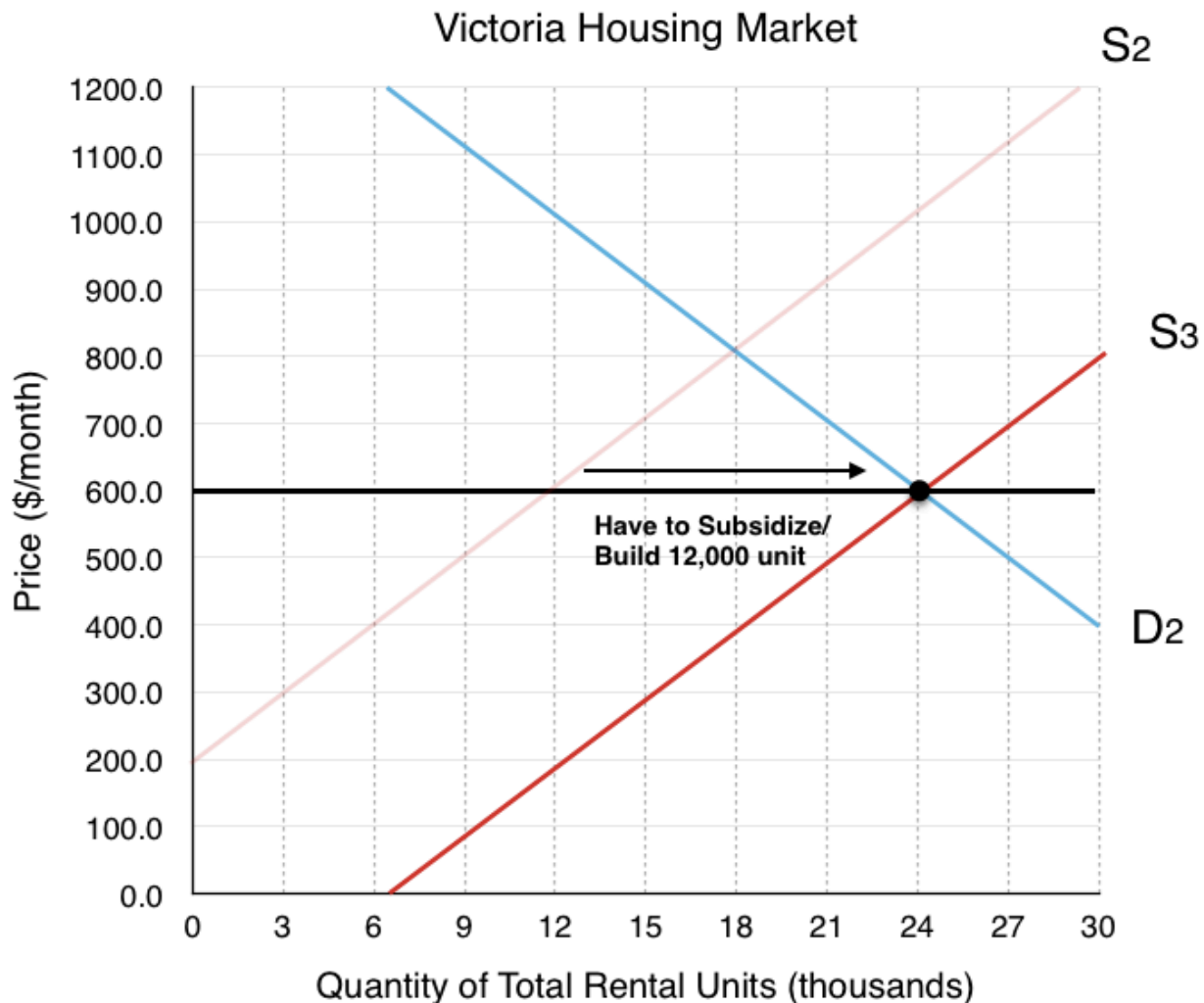
We can see that the effects on price worked together, but the effects on quantity opposed. The end result of an increase in quantity is because the demand shock was greater than the supply shock. In this topic we explained that unless you know which effect is greater, the result of opposing shocks are inconclusive. In this case we can say with certainty that quantity has increased because we know the exact size of the shocks.

5. Assume price remains at the original equilibrium, calculate the magnitude of the shortage or surplus of housing that results. Explain the impact this shortage will have the behaviour of landlords.



If price remains at the original equilibrium E_1 of \$600, Quantity Demanded @ D_2 is 24,000 and Quantity Supplied @ S_2 is 12,000. This means that there will be a 12,000 unit shortage in rental housing (24,000 – 12,000). As mentioned in the case study, this will cause pressure for prices to increase. Since landlords cannot raise prices for existing tenants, they will be incentivized to find ways to evict tenants. For the spots that are up for rent, bidding wars will ensue.

6. Assume the government wants to bring price back to it's original level, if it costs \$50,000 to increase the number of rental units by one, how much will this cost the government?



In order to shift supply from S_2 to a supply curve that intersects with D_2 at an equilibrium price of \$600, the government has to find a way to increase the supply of rental housing by 12,000 units. If it costs \$50,000/unit, this would cost the government \$600 million.

7. Read the Executive Summary of the Alliance of BC Students White Paper on Student Housing. What is the ABCS proposing that could help decrease price in the market? How would this affect supply and/or demand?

The ABCS white paper draws attention to the fact that universities are currently restricted from accruing debt to build more student housing. They recommend that the government remove this restriction, explaining that the increase in housing for students will take them out of the competitive market above. Depending on how you view the market this could be explained as an increase in supply or a decrease of demand. If you consider student housing as a separate market, this effect would decrease demand as it takes student out of the market. If you consider it as the same market, it would increase supply as it increases the amount of housing available.

Topic 3 Multiple Choice Questions

All the following questions are from previous exams for Economics 103. They are duplicates of the questions found in the Topic sub-sections.

Exercises 3.2

1. A buyer has purchased three units of good X. The marginal benefit of the fourth unit of X exceeds the marginal cost of the fourth unit of good X. Which of the following reasons explains why the buyer should purchase the fourth unit?

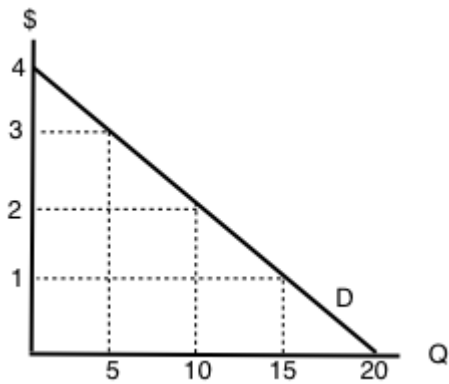
- I. The marginal net benefit of the fourth unit is positive.
- II. Buying the fourth unit will increase total benefits by more than total costs.
- III. Buying the fourth unit will increase total benefits and decrease total costs.

- a) I only
- b) I and II only
- c) II only
- d) I, II, III

2. According to marginal analysis, optimal decision-making involves:

- a) Taking actions whenever the marginal benefit is positive.
- b) Taking actions only if the marginal cost is zero.
- c) Taking actions whenever the marginal benefit exceeds the marginal cost.
- d) All of the above.

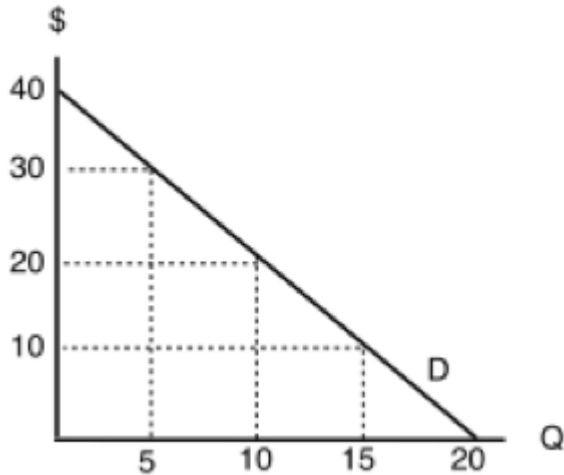
The following TWO questions refer to an individual's demand curve diagram, illustrated below.



3. If the price of this good is \$1 per unit, what will be the quantity demanded?
- 5.
 - 10.
 - 15.
 - 20.
4. What are the TOTAL benefits to this individual if she consumes 10 units of the good?
- \$5.
 - \$10.
 - \$20.
 - \$30.
5. The demand curve for a good is derived from the:
- Marginal cost of the good.
 - Marginal benefit of the good.
 - Marginal benefits of the good minus marginal costs of the good.
 - Production Possibilities Frontier
6. Which of the following statements about demand curves is TRUE?
- The “Law of Demand” holds if a consumer’s marginal benefit is lower at higher quantities consumed than it is at lower quantities consumed.
 - If the consumer’s marginal benefit is the same no matter what quantity is consumed, then her demand curve will be vertical.
 - All else equal, the marginal benefit of consuming a normal good will be higher for richer consumers than for poorer consumers.

- a) III only.
- b) I and II only.
- c) I and III only.
- d) I only.

The following FOUR questions refer to the diagram below, which illustrates a consumer's demand curve for a good.



7. If the price of this good is \$30, what quantity will be demanded?

- a) 5 units.
- b) 10 units.
- c) 15 units.
- d) 20 units.

8. If the price of this good is \$20, what quantity will be demanded?

- a) 5 units.
- b) 10 units.
- c) 15 units.
- d) 20 units.

9. If the price of this good is \$20, what will consumer surplus equal?

- a) \$100.
- b) \$200.
- c) \$300
- d) \$400.

10. If the price of this good falls from \$30 to \$20, but the consumer is prohibited from buying more than 5 units of the good, by how much will consumer surplus increase?

- a) \$100.
- b) \$75.
- c) \$50
- d) \$25.

Exercises 3.3

1. Which of the following statements about demand curves is TRUE?

- a) If price falls and quantity demanded increases, this is represented by a movement along a given demand curve.
- b) If price falls and quantity demanded increases, this is represented by a shift of the demand curve.
- c) If price falls and quantity demanded increases, this can be represented by either a movement along a given demand curve, or a shift of the demand curve.
- d) None of the above are true.

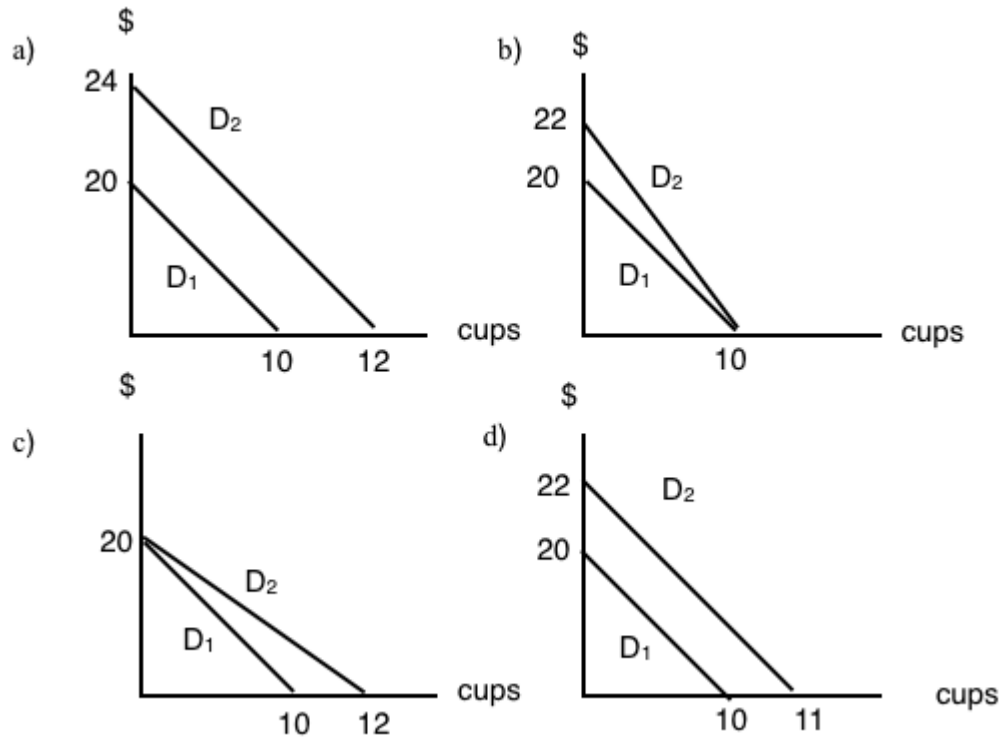
2. Which of the following is NOT a determinant of the demand for good X?

- a) The income of consumers who buy good X.
- b) The cost of labor used to produce good X.
- c) The price of good Y, a complement to X.
- d) The number of buyers of good X.

3. Which of the following will result in a DECREASE in demand (i.e., a leftward shift of the demand curve)?

- a) An increase in income, if the good is normal.
- b) A decrease in the price of a complement to the good.
- c) An increase in the price of a substitute for the good.
- d) None of the above.

4. Suppose that my daily marginal benefit from drinking coffee increases by \$2 per cup. Which of the following represents the effect of this on my coffee demand curve?



5. Which of the following is NOT a determinant of the demand for good X?

- a) The cost of labor used to produce good X.
- b) The price of good X.
- c) The income of consumers who buy good X.
- d) The price of good Y, which is a substitute for good X.

6. Which of the following IS a determinant of the demand for good X?

- a) The income of consumers who buy good X.
- b) The cost of labor used to produce good X.
- c) The supply of good X.
- d) The number of sellers of good X.

7. A decrease in quantity demanded is, graphically, represented by:

- a) A leftward shift in the demand curve.
- b) A rightward shift in the demand curve.
- c) A movement up and to the left along a demand curve.
- d) A movement down and to the right along a demand curve.

8. Suppose goods X and Y are substitutes. Which of the following is TRUE?

- a) An increase in the price of X will result in a decrease in the equilibrium price of Y.
- b) A decrease in the price of X will result in an increase in the equilibrium quantity of Y.
- c) An increase in the price of X will result in an increase in the equilibrium quantity of Y.
- d) More than one of the above is true.

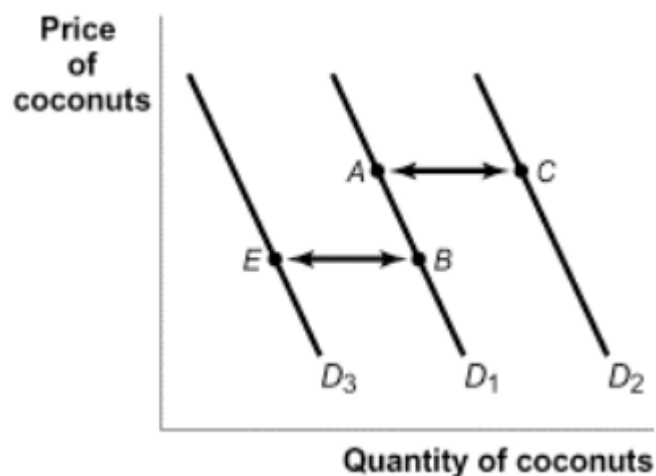
9. If cookies are a normal good and incomes increase, we would expect:

- a) An increase in equilibrium price and a decrease in equilibrium quantity.
- b) A decrease in equilibrium price and an increase in equilibrium quantity.
- c) A decrease in equilibrium price and equilibrium quantity.
- d) An increase in equilibrium price and equilibrium quantity.

10. A decrease in demand is, graphically, represented by:

- a) A leftward shift in the demand curve.
- b) A rightward shift in the demand curve.
- c) A movement up and to the left along a demand curve.
- d) A movement down and to the right along a demand curve.

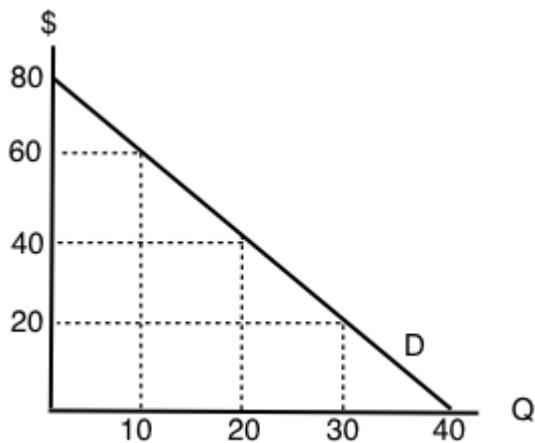
11. The diagram below illustrates 3 possible demand curves for coconuts.



Suppose that coconuts and pineapples are substitutes. If the price of pineapples increases, which of the following movements will represent the effect of this in the market for coconuts?

- a) A to C.
- b) A to B.
- c) B to A.
- d) B to E.

The following TWO questions refer to the diagram below.



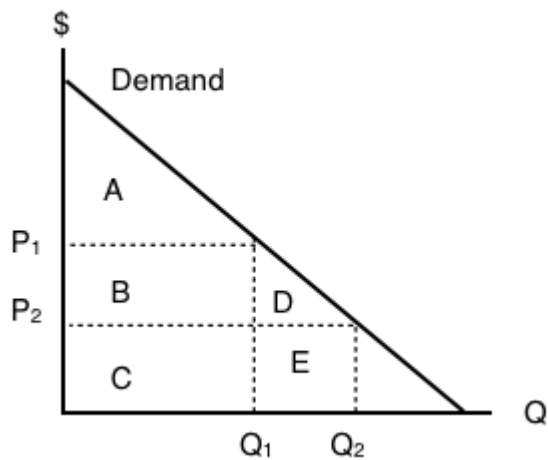
12. If the price of this good is \$20, what will be the quantity demanded?

- a) 10.
- b) 20.
- c) 30.
- d) 40.

13. If the price of this good is \$60, what will consumer surplus equal?

- a) \$50.
- b) \$100.
- c) \$150.
- d) \$200.

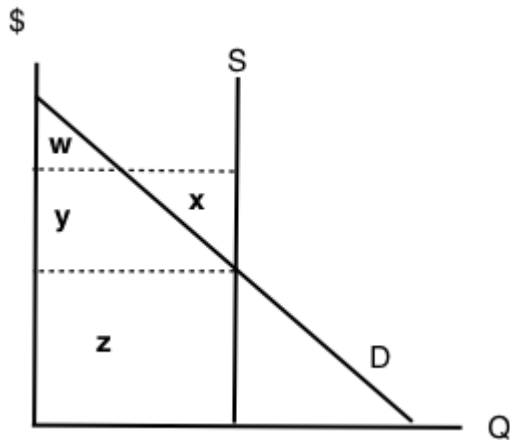
14. The following question refers to the diagram below, which illustrates an individual's demand curve for a good.



If the price of this good falls from P_1 to P_2 , then consumer surplus will _____ by areas _____.

- a) increase; B+D.
- b) decrease; B+D.
- c) increase; A+B+D.
- d) decrease; A.

15. Consider the diagram below.



At the equilibrium in this market, which area represents CONSUMER surplus?

- a) There is no consumer surplus.
- b) Area w .
- c) Area $x + y$.
- d) Area $w + y$.

16. Which of the following CANNOT result in a shift of the demand curve for a good?

- a) A change in consumers' incomes.
- b) A change in the price of the good.
- c) A change in the price of a complement to the good.
- d) All of the above will shift the demand curve.

17. Suppose the price of good X increases. If X and Y are substitutes, then, in the market for good Y, we would expect:

- a) An increase in both the equilibrium price and quantity.
- b) A decrease in the equilibrium price and an increase in the equilibrium quantity.
- c) An increase in the equilibrium price and a decrease in the equilibrium quantity.
- d) A decrease in both the equilibrium price and quantity.

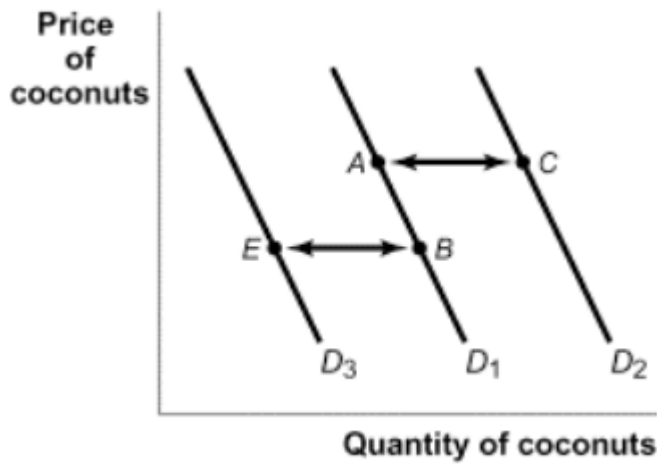
18. If coffee and milk are complements, then which of the following will occur if the price of coffee increases?

- a) The quantity of coffee demanded will increase.
- b) The quantity of coffee supplied will decrease.
- c) The demand for milk will increase.
- d) The demand for milk will decrease.

19. Consumer surplus is equal to:

- a) Revenue received for a good minus that good's cost of production.
- b) The amount of money a consumer is willing to pay for a good.
- c) The opportunity cost of a good.
- d) None of the above.

20. The diagram below illustrates 3 possible demand curves for coconuts.



Suppose that (i) coconuts are an inferior good and (ii) consumer incomes decrease. Which of the following movements could represent the effect of this in the market for coconuts?

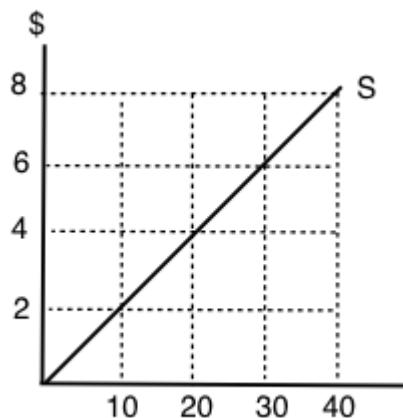
- a) A to C.
- b) B to A.
- c) C to A.
- d) B to E.

Exercises 3.4

1. An individual producer's supply curve for a good is derived from:

- a) The preferences of consumers of that good.
- b) The income of consumers of that good.
- c) The marginal cost of producing that good.
- d) All of the above.

The following TWO questions refer to the supply curve diagram below.



2. If price is \$8 per unit, quantity supplied will equal:

- a) 10.
- b) 20.
- c) 30.
- d) 40.

3. If quantity supplied increases from 10 to 20 units, the producer's total costs will increase by:

- a) \$20.
- b) \$30.
- c) \$40.
- d) \$80.

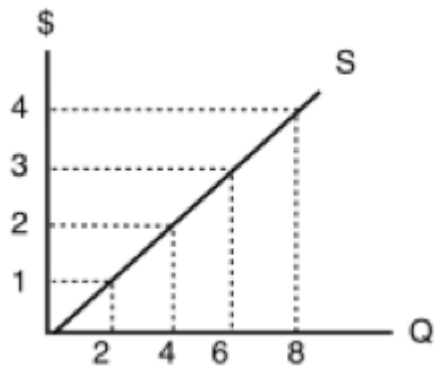
4. Which of the following statements about supply curves is TRUE?

- a) The "law of supply" states that as price rises, quantity supplied also rises.
- b) If the marginal cost of producing a good is higher at high levels of output than at low levels of output, then the supply curve for that good is upward sloping.
- c) Both a) and b) are true.
- d) Neither a) nor b) are true.

5. When deciding how much of a particular good to produce, a producer should:

- a) Keep producing more units until the total benefits equal the total costs.
- b) Always produce an additional unit if price is greater than marginal cost.
- c) Never produce an additional unit if its marginal cost is higher than the marginal cost of previously produced units.
- d) Always produce an additional unit if price is greater than zero.

The following TWO questions refer to the diagram below, which illustrates a supply curve.



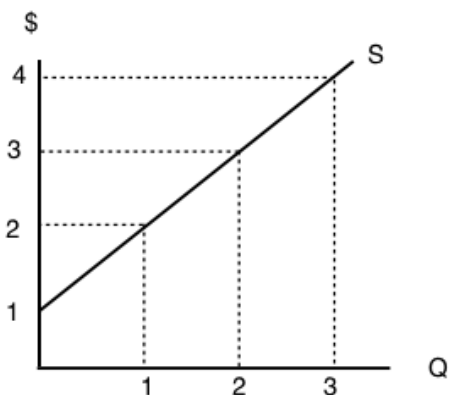
6. In order for quantity supplied to equal 6 units, the price per unit must be:

- a) \$1.
- b) \$2.
- c) \$3.
- d) \$4.

7. If the price of this good is \$4 per unit, then what does producer surplus equal?

- a) \$32.
- b) \$24.
- c) \$16.
- d) \$12.

8. The diagram below illustrates a supply curve.



If the price of this good is \$2 per unit, then what will be the quantity supplied?

- a) 0.
- b) 1.

- c) 2.
- d) 3.

9. Sarah is selling her used truck. The minimum amount she needs to be paid for the truck is \$5,000. She advertises the truck on usedvictoria.com for \$8,000, and eventually sells the truck for \$6,000. Her producer surplus is equal to _____.

- a) \$1,000.
- b) \$2,000.
- c) \$3,000.
- d) \$6,000.

Exercises 3.5

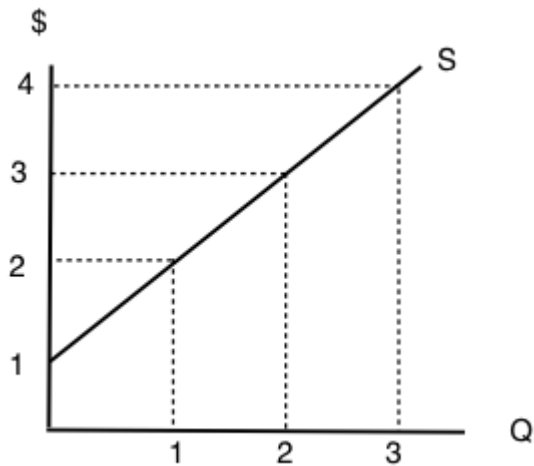
1. Which of the following will NOT shift the market supply curve of good X?

- a) A change in the cost of inputs used to produce good X.
- b) A change in the technology used to produce X.
- c) A change number of sellers of good X.
- d) A change in the price of good X.

2. Which of the following is NOT a determinant of the supply of good X?

- a) The cost of inputs used to produce good X.
- b) The technology used to produce X.
- c) The number of sellers of good X.
- d) All of the above are determinants of the supply of good X.

The following TWO questions refer to the diagram below.



3. At what price will quantity supplied equal 3 units?

- a) \$1.
- b) \$2.
- c) \$3.
- d) \$4.

4. At what price will producer surplus equal \$2?

- a) \$1.
- b) \$2.
- c) \$3.
- d) \$4.

5. A decrease in supply is, graphically, represented by:

- a) A leftward shift in the supply curve.
- b) A rightward shift in the supply curve.
- c) A movement up and to the right along a supply curve.
- d) A movement down and to the left along a supply curve.

6. Which of the following is NOT a determinant of the supply of good X?

- a) The cost of labor used to produce good X.
- b) The price of good X.
- c) The income of consumers who buy good X.
- d) The number of sellers of good X.

7. Which of the following is NOT a determinant of the supply of good X?

- a) The cost of labor used to produce good X.
- b) Consumer preferences.
- c) Technology.
- d) All of the above are determinants of the supply of good X.

8. Martin is selling his viola. The minimum amount he needs to be paid for the viola is \$15,500. He finds a buyer for who is willing to pay \$22,400, but this buyer insists that Martin pays for delivery of the viola. The cost of delivery is \$700. Martin's producer surplus from selling his viola is equal to ____.

- a) \$14,800.
- b) \$7,600.
- c) \$6,900.
- d) \$6,200.

9. Which of the following statements about inferior goods is/are FALSE?

- I. Inferior goods are those that we will never buy, no matter how cheap they are.
- II. Inferior goods are those that we buy more of, if we become poorer.
- III. Inferior goods are those that we buy more of, if we become richer.

- a) I only
- b) III only.
- c) I and III only.
- d) I, II, and III.

Exercises 3.6

1. Suppose that – at a given level of some economic activity – marginal benefit is greater than marginal cost. The economic agent in question (the decision-maker) can increase net benefits by increasing the level of the activity, for which of the following reasons?

- a) Total costs will fall by more than total benefits.
- b) Total benefits will rise by more than total costs.
- c) Neither a) nor b).
- d) Either a) or b).

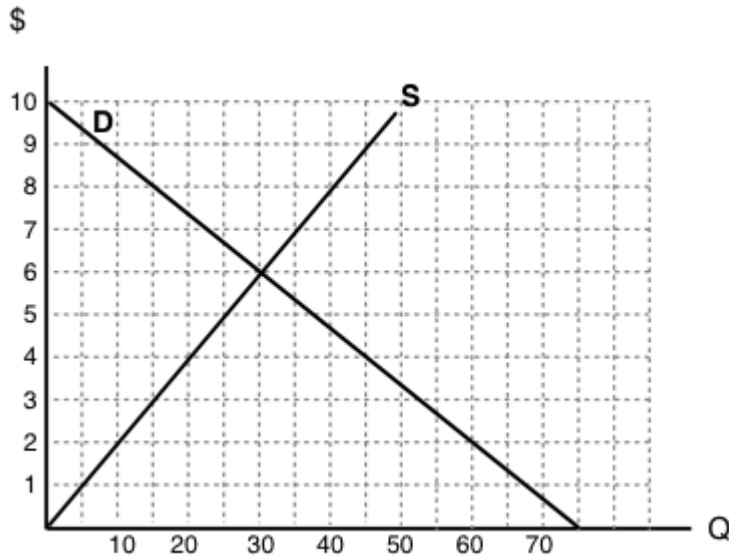
2. Which of the following statements is TRUE?

- a) Consumer surplus is the difference between the minimum amount a consumer is willing to pay, and what he or she actually pays.
- b) Producer surplus is the difference between the amount of money a seller is paid, and the maximum

amount that he or she needs to be paid.

- c) Market surplus is equal to the sum of consumer surplus and producer surplus.
- d) All of the above are true.

The following TWO questions refer to the supply and demand curve diagram below.



3. The equilibrium price in this market is equal to:

- a) \$6 per unit.
- b) \$5 per unit.
- c) \$4 per unit.
- d) \$3 per unit.

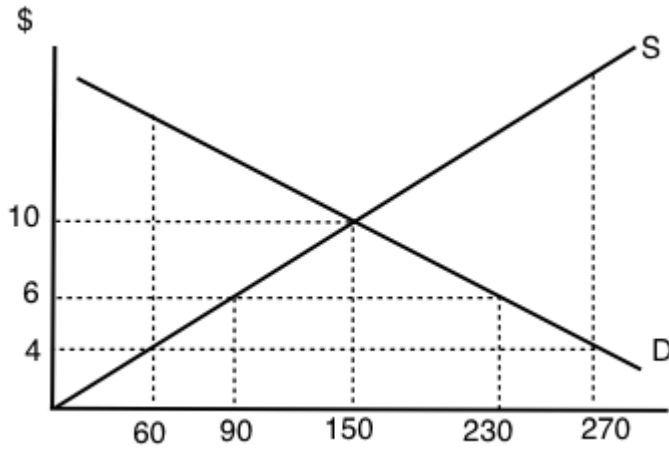
4. At a price of \$8, there is:

- a) Excess demand (a shortage) of 25 units.
- b) Excess demand (a shortage) of 15 units.
- c) Excess supply (a surplus) of 15 units.
- d) Excess supply (a surplus) of 25 units.

5. Which of the following statements about consumer surplus and producer surplus is TRUE?

- a) Consumer surplus is equal to the area under the demand curve.
- b) Producer surplus is equal to the area under the supply curve.
- c) Both producer and consumer surplus are equal to price multiplied by quantity.
- d) None of the above statements is true.

6. Consider the supply and demand curve diagram below.



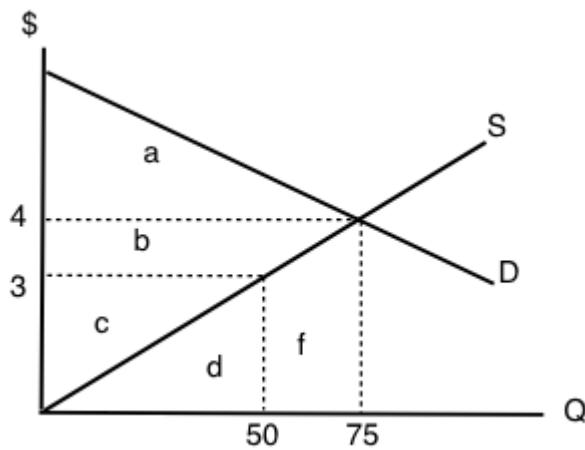
If the price of this good is \$6, then:

- a) There is an excess demand (a shortage) equal to 210 units.
- b) There is an excess demand (a shortage) equal to 140 units.
- c) There is an excess supply (a surplus) equal to 210 units.
- d) There is an excess supply (a surplus) equal to 140 units.

7. When deciding how much of a particular good to purchase, a consumer should:

- a) Keep buying more units until the total benefits equal the total costs.
- b) Always buy at additional unit if its marginal net benefit is positive.
- c) Keep buying more units if marginal cost is greater than marginal benefit.
- d) Always buy at additional unit if its marginal benefit is positive.

8. Refer to the supply and demand diagram below.



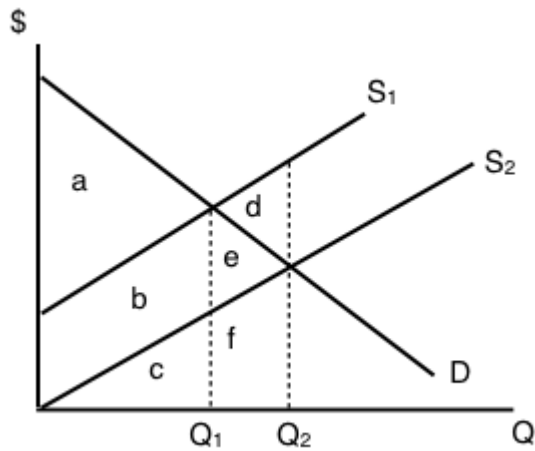
At the equilibrium price in this market, consumer surplus is equal to area ____ and producer surplus is equal to area ____

- a) $a + b$; c .
- b) a ; $b + c$.
- c) $a + b$; $b + c$.
- d) $a + b + c$; $d + f$.

9. Which of the following statements about consumer and producer surplus is TRUE?

- a) Consumer surplus is equal to the maximum amount a consumer is willing to pay for a good, minus what the consumer has to pay for the good.
- b) Producer surplus is equal to the amount received from selling a good, minus the minimum amount the seller needed to receive, in order to be willing to sell the good.
- c) Both a) and b) are true.
- d) Neither a) nor b) are true.

The following TWO questions refer to the supply and demand diagram below.



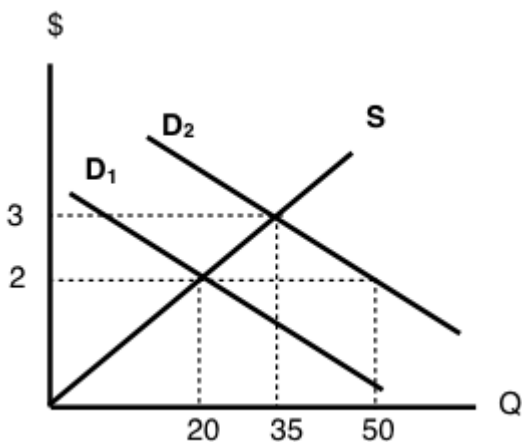
10. Which of the following COULD explain the shift in supply from S_1 to S_2 .

- a) An increase in the cost of producing the good.
- b) A decrease in the number of sellers in the market.
- c) Both a) and b).
- d) Neither a) nor b).

11. If supply is S_2 , which area represents MARKET surplus?

- a) a
- b) a + b.
- c) a + b + e.
- d) We need to know price in order to determine market surplus.

12. Consider the supply and demand diagram drawn below.



Suppose that demand is initially D_1 , but, following a change in consumer preferences, demand shifts to D_2 . Note that the two demand curves are parallel. Which of the following statements is TRUE?

- a) Demand increases by 30 units.
- b) Quantity demanded increases by 30 units.
- c) Equilibrium quantity increases by 30 units.
- d) More than one of the above statements is true.

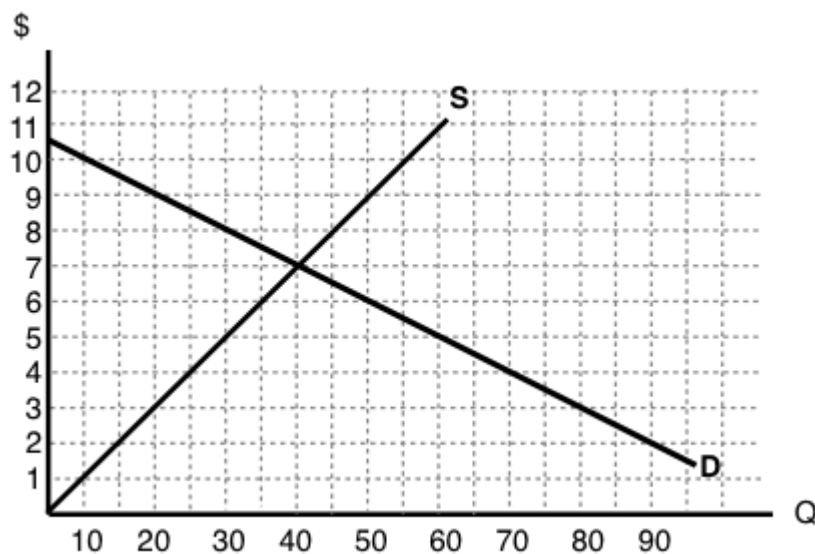
13. Suppose the equilibrium price of good X is \$10 and the equilibrium quantity is 60 units. If the price of good X is \$4:

- a) The quantity demanded will be less than 60 units.
- b) The quantity supplied will be more than 60 units.
- c) There will be an excess demand for good X.
- d) There will be an excess supply of good X.

14. All else equal, a decrease in the marginal cost of producing a good will result in:

- a) A lower equilibrium quantity and a higher equilibrium price.
- b) A lower equilibrium quantity and a lower equilibrium price.
- c) A higher equilibrium quantity and a higher equilibrium price.
- d) A higher equilibrium quantity and a lower equilibrium price.

The following TWO questions refer to the diagram below.



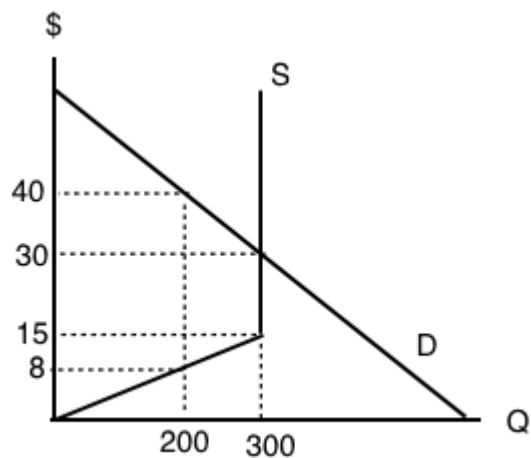
15. The equilibrium price is _____ the equilibrium quantity is _____.

- a) \$5; 30.
- b) \$7; 30.
- c) \$7; 40.
- d) \$8; 40.

16. If the marginal cost of producing this good rises by \$3 at every output level, then the new equilibrium price will be _____.

- a) There is insufficient information to calculate the new equilibrium price
- b) \$3.
- c) \$8.
- d) \$10.

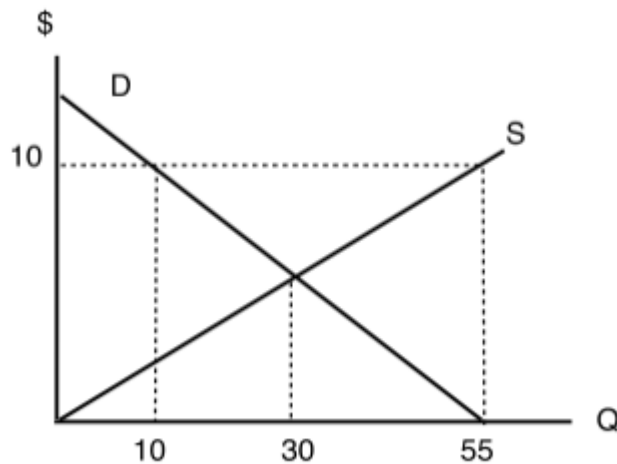
17. Consider the supply and demand diagram drawn below.



What does the equilibrium price equal in this market?

- a) \$8.
- b) \$15.
- c) \$30.
- d) \$45.

18. Refer to the diagram below.



At a price of \$10 per unit:

- a) There is excess demand (a shortage) equal to 45 units.
- b) There is excess supply (a surplus) equal to 45 units.
- c) There is excess demand (a shortage) equal to 20 units.
- d) There is excess supply (a surplus) equal to 20 units.

19. Consider the market for oranges. Suppose that both of the following occur simultaneously: (i) the price of apples (a substitute for oranges) decreases; and (ii) world-wide droughts reduce the harvest of oranges by 30%. Then, in the market for oranges we would expect:

- a) The equilibrium price of oranges could either increase or decrease, but equilibrium quantity will definitely decrease.
- b) The equilibrium quantity of oranges could either increase or decrease, but equilibrium price will definitely decrease.
- c) The equilibrium price of oranges could either increase or decrease, but equilibrium quantity will definitely increase.
- d) The equilibrium quantity of oranges could either increase or decrease, but equilibrium price will definitely increase.

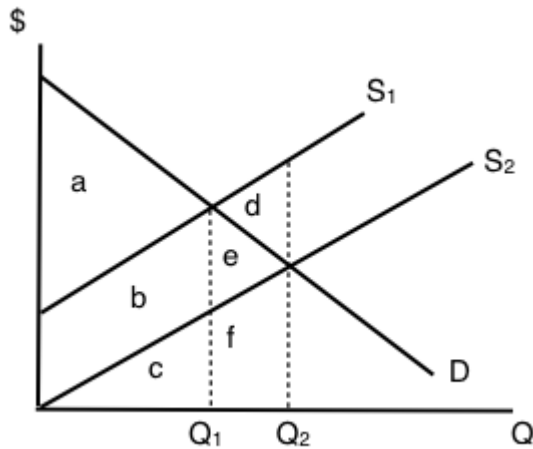
20. Suppose that, following a decrease in the supply of good X, we observe that the price of good Y decreases. If no other curves have shifted, which of the following can we infer?

- a) Good X is an inferior good.
- b) Goods X and Y are complements.
- c) Goods X and Y are substitutes.
- d) None of the above.

21. In recent years there have been a couple of high profile cases of contamination of baby formula produced in China. As a result, many Chinese parents buy baby formula that is produced outside China. Which of the following accurately describes the likely effect of this on baby formula prices?

- a) An increase in the price of baby formula produced in China and a decrease in the price of baby formula produced outside China.
- b) A decrease in the price of baby formula produced in China and an increase in the price of baby formula produced outside China.
- c) A decrease in the price of both baby formula produced in China and baby formula produced outside China.
- d) An increase in the price of both baby formula produced in China and baby formula produced outside China.

22. Refer to the supply and demand diagram below.



If supply is S_1 , which area represents MARKET surplus?

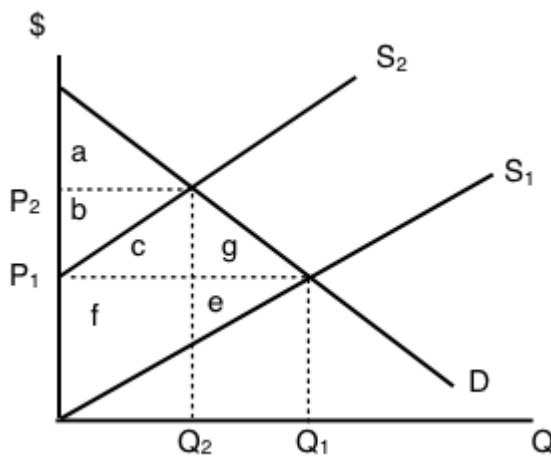
- a) a
- b) a + b.
- c) a + b + e.
- d) We need to know price in order to determine market surplus.

23. Suppose that in the market for good X (a normal good), the following occur simultaneously: (i) consumer incomes increase and (ii) the price of oil (an input to the production of X) increases. Which of the following statements is TRUE?

- a) The equilibrium price of X could either increase or decrease, but equilibrium quantity will definitely decrease.
- b) The equilibrium quantity of X could either increase or decrease, but equilibrium price will definitely decrease.

- c) The equilibrium price of X could either increase or decrease, but equilibrium quantity will definitely increase.
- d) The equilibrium quantity of X could either increase or decrease, but equilibrium price will definitely increase.

24. Consider the supply and demand diagram below.



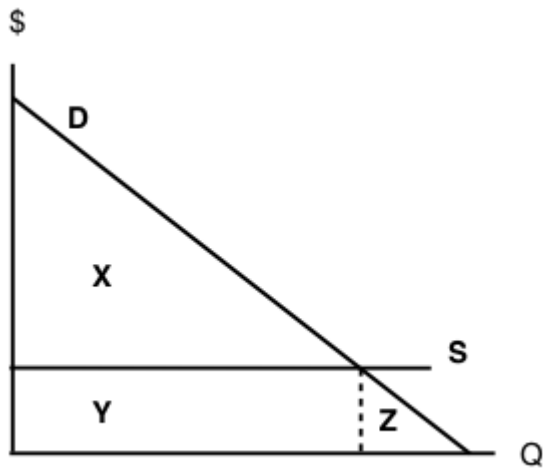
If supply decreases from S_1 to S_2 , which area represents the change in PRODUCER surplus?

- a) $b + c - f$.
- b) $a + b + c$.
- c) $b - f - e$.
- d) $c + f + g + e$.

25. A recent news story reported that OPEC is expected to decrease the supply of oil next summer. Summer is traditionally a time of increased demand for oil because of the many families driving and flying to vacation sites. What would be the combined effect of these two activities on the summer market for gasoline?

- a) An increase in the equilibrium price and the quantity.
- b) An increase in the equilibrium price and an unpredictable change in the equilibrium quantity.
- c) An unpredictable change in both the equilibrium price and the quantity.
- d) An unpredictable change in the equilibrium price and a decrease in the equilibrium quantity.

26. Consider the supply and demand curves drawn below.



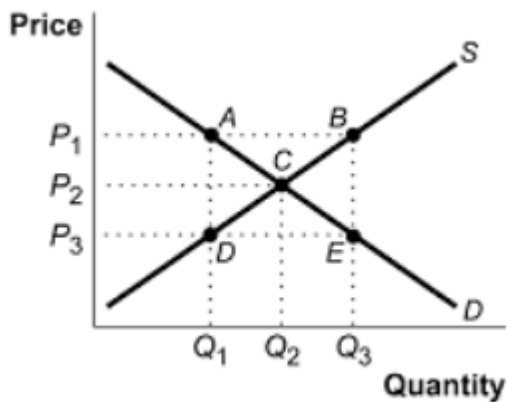
Given the equilibrium quantity, which area represents MARKET SURPLUS?

- a) $X + Y + Z$.
- b) $X + Y$.
- c) X .
- d) There is no market surplus.

27. Which of the following CANNOT result in an increase in price in a competitive market for a normal good?

- a) An increase in income.
- b) A decrease in the price of a complement to this good.
- c) An increase in the price of a substitute for this good.
- d) A decrease in the wages paid to workers who produce this good.

28. Consider the supply and demand curves illustrated below.



Which of the following statements is true?

- a) At a price of P_3 , there is excess demand equal to the distance DE.
- b) At a price of P_3 , there is excess demand equal to the distance BE.
- c) At a price of P_3 , there is excess supply equal to the distance BE.
- d) At a price of P_3 , there is excess supply equal to the distance DE.

29. Which of the following CANNOT result in a decrease in the equilibrium quantity sold of an inferior good?

- a) An increase in the price of a substitute for the good.
- b) An increase in consumer incomes.
- c) An increase in wages paid to workers who produce the good.
- d) An increase in the price of a complement for the good.

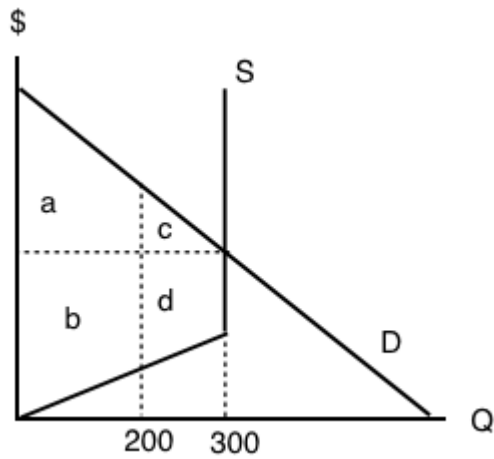
30. Which of the following statements is FALSE?

- a) At the competitive equilibrium, market surplus is maximized.
- b) At the competitive equilibrium, the marginal benefit to consumers equals the marginal cost to producers.
- c) At the competitive equilibrium, social surplus is maximized if there are no externalities.
- d) At the competitive equilibrium, it is possible to make at least one person better off without making anyone worse off.

31. A recent Health Canada report argued that there is a strong link between the consumption of steak and heart disease. At the same time, Canadian consumers' incomes rose. If steak is a normal good, what are the combined effects in the market for steak?

- a) An increase in the equilibrium price and the quantity.
- b) An increase in the equilibrium price and an unpredictable change in the equilibrium quantity.
- c) An unpredictable change in both the equilibrium price and the quantity.
- d) An unpredictable change in the equilibrium price and a decrease in the equilibrium quantity.

The next THREE questions refer to the diagram below.



32. Given the equilibrium quantity of 300 units, which areas represent MARKET SURPLUS?

- a) $a+b+c+d$.
- b) $a+b+c$.
- c) $a+c$.
- d) $a+b$.

33. Given the equilibrium quantity of 300 units, which areas represent PRODUCER SURPLUS?

- a) $c+d$.
- b) $a+b$.
- c) $a+c$.
- d) $b+d$.

34. Given the equilibrium quantity of 300 units, which areas represent CONSUMER SURPLUS?

- a) $c+d$.
- b) $a+b$.
- c) $a+c$.
- d) $b+d$.

Topic 3 Solutions

Solutions to Exercises 3.2

1. **B**
2. **C**
3. **C**
4. **B**
5. **B**
6. **C**
7. **A**
8. **B**
9. **A**
10. **C**

Solutions to Exercises 3.3

1. **A**
2. **B**
3. **D**
4. **D**
5. **A**
6. **A**
7. **C**
8. **C**
9. **D**
10. **A**
11. **A**
12. **C**
13. **B**
14. **A**
15. **D**

- 16. **B**
- 17. **A**
- 18. **D**
- 19. **D**
- 20. **A**

Solutions to Exercises 3.4

- 1. **C**
- 2. **D**
- 3. **B**
- 4. **C**
- 5. **B**
- 6. **C**
- 7. **C**
- 8. **B**
- 9. **A**

Solutions to Exercises 3.5

- 1. **D**
- 2. **D**
- 3. **D**
- 4. **C**
- 5. **A**
- 6. **C**
- 7. **B**
- 8. **D**
- 9. **C**

Solutions to Exercises 3.6

1. **B**
2. **C**
3. **A**
4. **D**
5. **D**
6. **B**
7. **B**
8. **B**
9. **C**
10. **D**
11. **C**
12. **A**
13. **C**
14. **D**
15. **C**
16. **C**
17. **C**
18. **B**
19. **A**
20. **B**
21. **B**
22. **A**
23. **D**
24. **C**
25. **B**
26. **C**
27. **D**
28. **A**
29. **A**
30. **D**
31. **C**
32. **A**
33. **D**

34. **C**

Topic 3 References

Alliance of BC Students. *Where's The Housing White Paper*. 2016. <https://abcstudentsdotca.files.wordpress.com/2016/10/absc-housingwhitepaper.pdf>

Bula, Frances. The Globe and Mail. "AirBnb Not to Blame for Vancouver's Difficult Rental Market, Company Says." September 28, 2016. <http://www.theglobeandmail.com/news/british-columbia/most-airbnb-hosts-make-less-profit-than-those-who-rent-long-term-report/article32095594/>

Bula, Frances and Sully Dhillon. The Globe and Mail. "British Columbia Reveals \$500-million Affordable-Housing Plan." November 22, 2016. <http://www.theglobeandmail.com/news/british-columbia/bc-says-2900-affordable-housing-units-to-be-built-within-two-years/article32983738/>

CBC Radio West. "Grand Forks Teen Baker Runs Successful Company." November 8, 2012. <http://www.cbc.ca/radiowest/2012/11/08/grand-forks-teen-baker-runs-successful-company/index.html>

Chang, Lulu. Digital Trends. "High-tech MTA buses with Wi-Fi are now rolling around New York City." May 19, 2016. <https://www.digitaltrends.com/cars/mta-high-tech-bus/>

Chiang, Oliver. Forbes. "The Master of Online Mayhem." February 9th, 2011. <https://www.forbes.com/forbes/2011/0228/technology-gabe-newell-videogames-valve-online-mayhem.html>

Dyck, Darryl. The Globe and Mail. "Cities Take Aim at AirBnb." July 11, 2016. <http://www.theglobeandmail.com/news/british-columbia/concerns-about-airbnb-impact-on-rentersspread/article30845642/>

Jordan, Miriam and Lauren A. E. Schuker. The Wall Street Journal. "The Onion's Best Friend Is an Ogre." June 28, 2010. <https://www.wsj.com/articles/SB10001424052748704123604575323433042544568>

Lawrence, April. CHEK News. "Bidding Wars Taking Place in 'Vicious' Greater Victoria Rental Market." August 15, 2016. <http://www.cheknews.ca/bidding-wars-greater-victoria-rental-market-207772/>

Shea, Courtney. The Globe and Mail. "Sweet News for Canadian Cupcake Lovers." April 23, 2013. <http://www.theglobeandmail.com/life/food-and-wine/food-trends/sweet-news-for-canadian-cupcake-lovers/article11510344/>

Sprinkles Cupcake ATM. YouTube. March 16, 2012. <https://www.youtube.com/watch?v=mgzxHNq8Bek>

Topic 4 Part 1: Elasticity

4.1 Calculating Elasticity

Learning Objectives

By the end of this section, you will be able to:

- Calculate the price elasticity of demand
- Calculate the price elasticity of supply
- Calculate the income elasticity of demand and the cross-price elasticity of demand
- Apply concepts of price elasticity to real-world situations



(Credit: Melo McC/ Flickr/ CC BY-NC-ND 2.0)

That Will Be How Much?

Imagine going to your favorite coffee shop and having the waiter inform you the pricing has changed. Instead of \$3 for a cup of coffee with cream and sweetener, you will now be charged \$2 for a black coffee, \$1 for creamer, and \$1 for your choice of sweetener. If you want to pay your usual \$3 for a cup of coffee, you must choose between creamer and sweetener. If you want both, you now face an extra charge of \$1. Sound absurd? Well, that is the situation Netflix customers found themselves in 2011 – a 60% price hike to retain the same service.

In early 2011, Netflix consumers paid about \$10 a month for a package consisting of streaming video and DVD rentals. In July 2011, the company announced a packaging change. Customers wishing to retain both streaming video and DVD rental would be charged \$15.98 per month – a price increase of about 60%. In 2014, Netflix also raised its streaming video subscription price from \$7.99 to \$8.99 per month for new U.S. customers. The company also changed its policy of 4K streaming content from \$9.00 to \$12.00 per month that year.

How did customers of the 18-year-old firm react? Did they abandon Netflix? How much will this price change affect the demand for Netflix's products? The answers to those questions will be explored in this chapter with a concept economists call elasticity.



[Click to read the rest of the Netflix story](#)

Anyone who has studied economics knows the law of demand: a higher price will lead to a lower quantity demanded. What you may not know is how much lower the quantity demanded will be.

Similarly, the law of supply shows that a higher price will lead to a higher quantity supplied. The question is: How much higher? This topic will explain how to answer these questions and why they are critically important in the real world.

To find answers to these questions, we need to understand the concept of elasticity. **Elasticity** is an economics concept that measures the responsiveness of one variable to changes in another variable. Suppose you drop two items from a second-floor balcony. The first item is a tennis ball, and the second item is a brick. Which will bounce higher? Obviously, the tennis ball. We would say that the tennis ball has greater elasticity.

But how is this degree of responsiveness seen in our models? Both the demand and supply curve show the relationship between price and quantity, and elasticity can improve our understanding of this relationship.

The **own price elasticity of demand** is the percentage change in the quantity *demanded* of a good or service divided by the percentage change in the price. This shows the responsiveness of the quantity demanded to a change in price.

The **own price elasticity of supply** is the percentage change in quantity *supplied* divided by the percentage change in price. This shows the responsiveness of quantity supplied to a change in price.

Our formula for elasticity, $\frac{\% \Delta \text{Quantity}}{\% \Delta \text{Price}}$, can be used for most elasticity problems, we just use different prices and quantities for different situations.

Why percentages are counter-intuitive

Recall that the simplified formula for percentage change is $\frac{\text{New Value} - \text{Old Value}}{\text{Old Value}}$, also written as $\frac{\Delta \text{Value}}{\text{Old Value}}$.

Suppose there is an increase in quantity demanded from 4 coffees to 6 coffees. Calculating percentage change ($\frac{6 - 4}{4}$) there has been a 50% increase in quantity demanded. Using the same numbers,

consider what happens when quantity demanded decreases from 6 coffees to 4 coffees, ($\frac{4 - 6}{6}$)

this change results in a 33% decrease in quantity demanded.

Right away, this should raise a red flag about calculating the elasticity between at two points, if percentage change is dependant on the direction (A to B or B to A) then how can we ensure a consistent elasticity value?

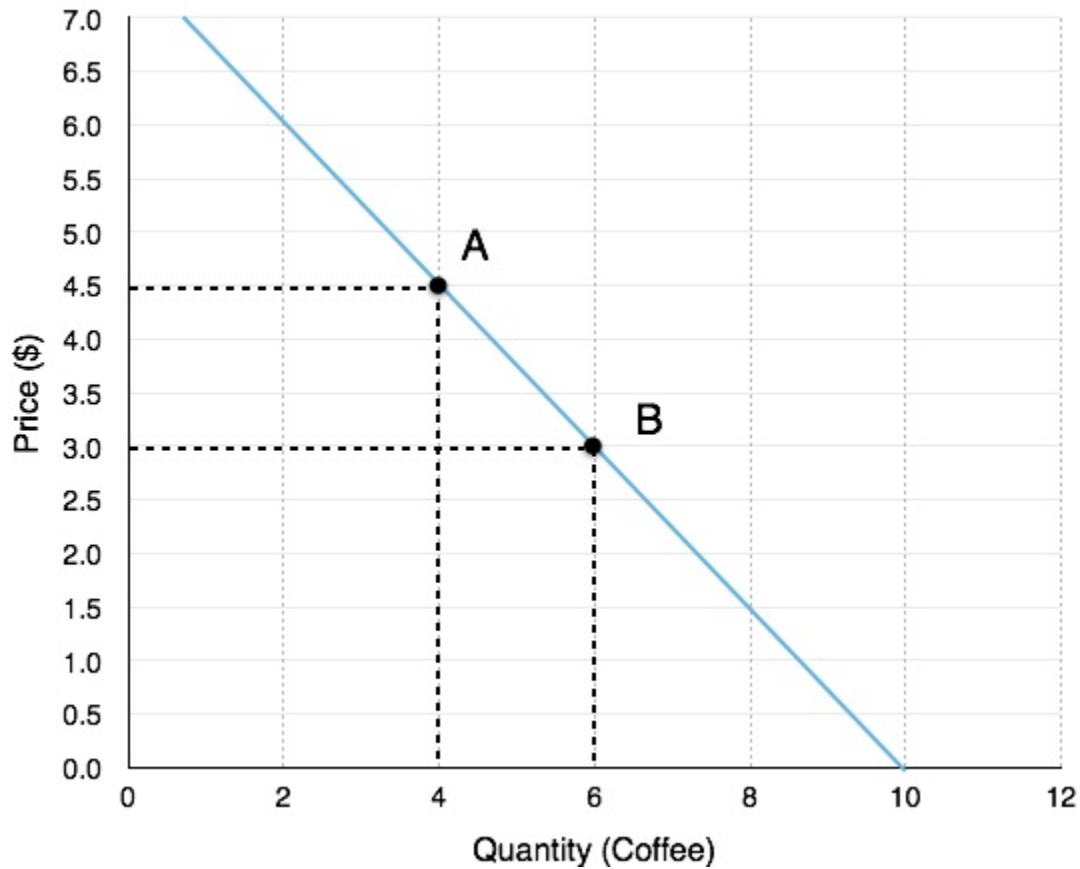


Figure 4.1a

Let's calculate elasticity from both perspectives:

Moving from A to B:

%ΔPrice: The coffee price falls from \$4.50 to \$3.00, meaning the percentage change is

$$\frac{(3.00 - 4.50)}{4.50} = -33\%. \text{ Price has fallen by } 33\%.$$

%ΔQuantity: The quantity of coffee sold increases from 4 to 6, meaning the percentage change is

$$\frac{(6 - 4)}{4} = 50\%. \text{ Quantity has risen by } 50\%$$

$$\text{Elasticity: } \frac{\% \Delta \text{Quantity}}{\% \Delta \text{Price}} = -\frac{50\%}{33\%} = 1.5^*$$

Moving from B to A:

%ΔPrice: The coffee price rises from \$3.00 to \$4.50, meaning the percentage change is $\frac{(4.50 - 3.00)}{3.00} = 50\%$. Price has risen by 50%.

%ΔQuantity:

The quantity of coffee sold falls from 6 to 4, meaning the percentage change is $\frac{(4 - 6)}{6} = -33\%$.

Quantity has fallen by 33%

Elasticity: $\frac{\% \Delta Quantity}{\% \Delta Price} = \frac{33\%}{50\%} = 0.67$

These two calculations give us different numbers. This type of analysis would make elasticity subject to direction which adds unnecessary complication. To avoid this, we will instead rely on averages.

*Note that elasticity is an absolute value, meaning it is not affected by positive or negative values.

Mid-point Method

To calculate elasticity, instead of using simple percentage changes in quantity and price, economists use the average percent change. This is called the mid-point method for elasticity, and is represented in the following equations:

$$\% \text{ change in quantity} = \frac{Q_2 - Q_1}{(Q_2 + Q_1)/2} \times 100$$

$$\% \text{ change in price} = \frac{P_2 - P_1}{(P_2 + P_1)/2} \times 100$$

The advantage of the **mid-point method** is that one obtains the same elasticity between two price points whether there is a price increase or decrease. This is because the denominator is an average rather than the old value.

Using the mid-point method to calculate the elasticity between Point A and Point B:

$$\% \text{ change in quantity} = \frac{6-4}{(6+4)/2} \times 100$$

$$\frac{2}{5} \times 100$$

$$40\%$$

$$\% \text{ change in price} = \frac{3.00-4.50}{(3.00+4.50)/2} \times 100$$

$$\frac{-1.50}{3.75} \times 100$$

$$-40\%$$

$$\text{Price Elasticity of Demand} = \frac{40\%}{40\%}$$

$$1$$

This method gives us a sort of average elasticity of demand over two points on our curve. Notice that our elasticity of 1 falls in-between the elasticities of 0.67 and 1.52 that we calculated in the previous example.

Point-Slope Formula

In Figure 4.1a we were given two points and looked at elasticity as movements along a curve. As we will see in Topic 4.3, it is often useful to view elasticity at a single point. To calculate this, we have to derive a new equation.

$$\frac{\% \Delta \text{Quantity}}{\% \Delta \text{Price}} = \text{Elasticity}$$

Since we know that a percentage change in price can be rewritten as

$$\frac{\Delta \text{Price}}{\text{Price}}$$

and a percentage change in quantity to

$$\frac{\Delta \text{Quantity}}{\text{Quantity}}$$

we can rearrange the original equation as

$$\frac{\frac{\Delta \text{Quantity}}{\text{Quantity}}}{\frac{\Delta \text{Price}}{\text{Price}}}$$

which is the same as saying

$$\frac{\Delta \text{Quantity} \cdot \text{Price}}{\Delta \text{Price} \cdot \text{Quantity}} = \frac{\Delta Q}{\Delta P} \cdot \frac{P}{Q}$$

This gives us our **point-slope formula**. How do we use it to calculate the elasticity at Point A? The P/Q portion of our equation corresponds to the values at the point, which are \$4.5 and 4. The $\Delta Q / \Delta P$ corresponds to the **inverse slope of the curve**. Recall slope is calculated as rise/run.

In Figure 4.1, the slope is $\frac{3 - 4.5}{6 - 4} = 0.75$, which means the inverse is $1/0.75 = 1.33$. Plugging this information into our equation, we get:

$$\frac{\Delta Q}{\Delta P} \cdot \frac{P}{Q}$$

$$1.33 \cdot \frac{4.5}{4} = 1.5$$

This analysis gives us elasticity as a single point. Notice that this gives us the same number as calculating elasticity from Point A to B. This is not a coincidence. When we are calculating from Point A to Point B, we are actually just calculating the elasticity at Point A, since we are using the values on Point A as the denominator for our percentage change. Likewise from Point B to Point A, we are calculating the elasticity at Point B. When we use the mid-point method, we are just taking an average of the two points. This solidifies the fact that there is a different elasticity at every point on our line, a concept that will be important when we discuss revenue.

Not Really So Different

Even though mid-point and Point-Slope appear to be fairly different formulas, mid-point can be rewritten to show how similar the two really are.

$$\frac{\frac{\Delta Q}{(Q_1 + Q_2)/2}}{\frac{\Delta P}{(P_1 + P_2)/2}} = \frac{\frac{\Delta Q}{Q_1 + Q_2}}{\frac{\Delta P}{P_1 + P_2}}$$

Remember that when a fraction is divided by a fraction, you can rearrange it to a fraction multiplied by the inverse of the denominator fraction.

$$= \frac{\Delta Q}{\Delta P} \cdot \frac{(P1 + P2)}{(Q1 + Q2)}$$

Notice that compared to point-slope: $\frac{\Delta Q}{\Delta P} \cdot \frac{P}{Q}$, the only difference is that point-slope is the inverse of the slope multiplied by a single point, whereas mid-point is the inverse of the slope multiplied by multiple points. This reinforces the conclusion that mid-point represents an average.

Other Elasticities

Remember, elasticity is the responsiveness of one variable to changes in another variable. This means it can be applied to more than just the price-quantity relationship of our market model. In Topic 3 we discussed how goods can be inferior/normal or substitutes/complements. We will examine this even further when we introduce consumer theory, but for now we can develop our understanding by applying what we know about elasticities.

Own-price elasticity of supply (ep^S)

Our analysis of elasticity has been centred around demand, but the same principles apply to the supply curve. Whereas elasticity of demand measures responsiveness of quantity demanded to a price change, **own-price elasticity of supply** measures the responsiveness of quantity supplied. The more elastic a firm, the more it can increase production when prices are rising, and decrease its production when prices are falling. Our equation is as follows:

$$\frac{\% \Delta Q \text{ Supplied}}{\% \Delta P}$$

Own-price elasticity of supply can be calculated using mid-point and point-slope formula in the same way as for ep^D .

Cross-price elasticity of demand (ex_P^D)

Whereas the own-price elasticity of demand measures the responsiveness of quantity to a goods own price, **cross-price elasticity of demand** shows us how quantity demand responds to changes in the price of *related* goods. Whereas before we could ignore positives and negatives with elasticities, with cross-price, this matters. Our equation is as follows:

$$\frac{\% \Delta Q \text{ Good A}}{\% \Delta P \text{ Good B}}$$

Consider our discussion of complements and substitutes in Topic 3.3. We defined complements as goods that individuals prefer to consume with another good, and substitutes as goods individuals prefer to consume instead of another good. If the price of a complement rises our demand will fall, if the price of a substitute rises our demand will rise. For cross-price elasticity this means:

A **complement** will have a **negative cross-price elasticity**, since if the % change in price is positive, the % change in quantity will be negative and vice-versa.

A **substitute** will have a **positive cross-price elasticity**, since if the % change in price is positive, the % change in quantity will be positive and vice-versa.

This adds another dimension to our discussion of complements/substitutes. Now we can comment on the strength of the relationship between two goods. For example, a cross-price elasticity of -4 suggests an individual strongly prefers to consume two goods together, compared to a cross-price elasticity of -0.5. This could represent the cross-price elasticity of a consumer for a hot dog, with respect to ketchup and relish. The consumer might strongly prefer to consume hot dogs with ketchup, and loosely prefers relish.

Income elasticity of demand (e_N^D)

In Topic 3 we also explained how goods can be normal or inferior depending on how a consumer responds to a change in income. This responsiveness can also be measured with elasticity by the **income elasticity of demand**. Our equation is as follows:

$$\frac{\% \Delta Q}{\% \Delta Income}$$

As with cross-price elasticity, whether our elasticity is positive or negative provides valuable information about how the consumer views the good:

A **normal good** will have a **positive income elasticity**, since if the % change in income is positive, the % change in quantity will be positive and vice-versa.

A **inferior good** will have a **negative income elasticity**, since if the % change in income is positive, the % change in quantity will be negative and vice-versa.

The value of our elasticity will indicate how responsive a good is to a change in income. A good with an income elasticity of 0.05, while technically a normal good (since demand increases after an increase in income) is not nearly as responsive as one with an income elasticity of demand of 5.

Summary

Elasticity is a measure of responsiveness, calculated by the percentage change in one variable divided by the percentage change in another.

Both mid-point and point-slope formulas are important for calculating elasticity in different situations. Mid-point gives an average of elasticities between two points, whereas point-slope gives the elasticity at a certain point. These can be calculated with the following formulas:

Base Formula

$$\frac{\% \Delta \text{Quantity}}{\% \Delta \text{Price}}$$

Mid-Point Formula

$$\frac{\Delta Q}{\Delta P} \cdot \frac{(P_1 + P_2)}{(Q_1 + Q_2)}$$

Point-Slope Formula

$$\frac{\Delta Q}{\Delta P} \cdot \frac{P}{Q}$$

Since elasticity measures responsiveness, it can also be used to measure the own-price elasticity of supply, the cross-price elasticity of demand, and the income elasticity of demand. These can be calculated with the following formulas:

Own-Price Elasticity of Supply

$$\frac{\% \Delta Q \text{ Supplied}}{\% \Delta P}$$

Cross-Price Elasticity of Demand

$$\frac{\% \Delta Q \text{ Good A}}{\% \Delta P \text{ Good B}}$$

Income Elasticity of Demand

$$\frac{\% \Delta Q}{\% \Delta \text{Income}}$$

Glossary

Cross-price elasticity of demand

the percentage change in the quantity demanded of good A as a result of a percentage change in price of good B

Elasticity

an economics concept that measures responsiveness of one variable to changes in another variable

Income elasticity of demand

the percentage change in quantity demanded of a good or service as a result of a percentage change in income

Own-price elasticity of demand

percentage change in the quantity demanded of a good or service divided the percentage change in price

Mid-point Method

Involves multiplying the inverse of the slope by the values of a single point.

Own-price elasticity of supply

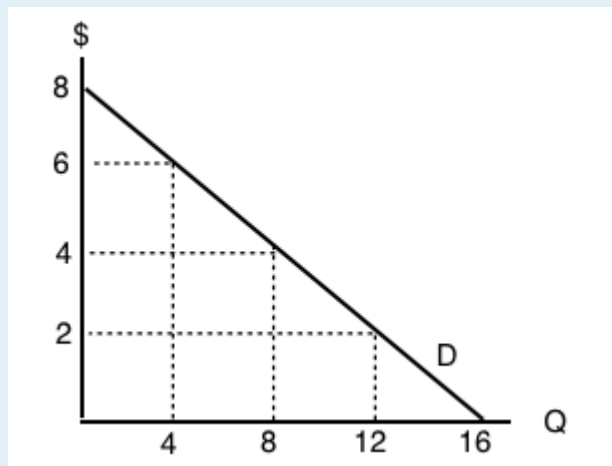
percentage change in the quantity supplied divided by the percentage change in price

Point Slope Method

A method of calculating elasticity between two points. Involves calculating the percentage change of price and quantity with respect to an average of the two points.

Exercises 4.1

1. Use the demand curve diagram below to answer the following question.



What is the own-price elasticity of demand as price increases from \$2 per unit to \$4 per unit? Use the mid-point formula in your calculation.

- a) $1/3$.
- b) $6/10$.
- c) $2/3$.
- d) None of the above.

2. Suppose that a 2% increase in price results in a 6% decrease in quantity demanded. Own-price elasticity of demand is equal to:

- a) $1/3$.
- b) 6.
- c) 2
- d) 3.

3. If own-price elasticity of demand equals 0.3 in absolute value, then what percentage change in price will result in a 6% decrease in quantity demanded?

- a) 3%
- b) 6%
- c) 20%.
- d) 50%.

4. Suppose you are told that the own-price elasticity of supply equal 0.5. Which of the following is the correct interpretation of this number?

- a) A 1% increase in price will result in a 50% increase in quantity supplied.
- b) A 1% increase in price will result in a 5% increase in quantity supplied.
- c) A 1% increase in price will result in a 2% increase in quantity supplied.
- d) A 1% increase in price will result in a 0.5% increase in quantity supplied.

5. Suppose that a 10 increase in price results in a 50 percent decrease in quantity demanded. What does (the absolute value of) own price elasticity of demand equal?

- a) 0.5.
- b) 0.2.
- c) 5.
- d) 10.

6. If goods X and Y are SUBSTITUTES, then which of the following could be the value of the cross price elasticity of demand for good Y?

- a) -1.
- b) -2.
- c) Neither a) nor b).
- d) Both a) and b).

7. If pizza is a normal good, then which of the following could be the value of income elasticity of demand?

- a) 0.2.
- b) 0.8.
- c) 1.4
- d) All of the above.

8. If goods X and Y are COMPLEMENTS, the which of the following could be the value of cross price elasticity of demand?

- a) 0.
- b) 1.
- c) -1.
- d) All of the above could be the value of cross price elasticity of demand.

4.2 Elasticity and Revenue

Learning Objectives

By the end of this section, you will be able to:

- Analyze graphs in order to classify elasticity as constant unitary, infinite, or zero
- Describe the price effect and the quantity effect
- Analyze how price elasticities impact revenue and expenditure

In Topic 4.1, we introduced the concept of elasticity and how to calculate it, but we didn’t explain why it is useful. Recall that **elasticity** measures responsiveness of one variable to changes in another variable. If you owned a coffee shop and wanted to increase your prices, this ‘responsiveness’ is something you need to consider. When you increase prices, you know quantity will fall, but by how much?

Elasticities can be divided into three broad categories: elastic, inelastic, and unitary. An **elastic demand** is one in which the elasticity is greater than one, indicating a high responsiveness to changes in price. Elasticities that are less than one indicate low responsiveness to price changes and correspond to **inelastic demand**. **Unitary elasticities** indicate proportional responsiveness of either demand or supply, as summarized in the following table:

If ...	Then ...	And It Is Called ...
$\% \text{ change in quantity} > \% \text{ change in price}$	$\frac{\% \text{ change in quantity}}{\% \text{ change in price}} > 1$	Elastic
$\% \text{ change in quantity} = \% \text{ change in price}$	$\frac{\% \text{ change in quantity}}{\% \text{ change in price}} = 1$	Unit Elastic
$\% \text{ change in quantity} < \% \text{ change in price}$	$\frac{\% \text{ change in quantity}}{\% \text{ change in price}} < 1$	Inelastic

Elastic, Inelastic, and Unitary: Three Cases of Elasticity

If we were to calculate elasticity at every point on a demand curve, we could divide it into these elastic, unit elastic, and inelastic areas, as shown in Figure 4.2a. This means the impact of a price change will depend on where we are producing. Feel free to calculate the elasticity in any of the regions, you will find that it indeed fits the description.

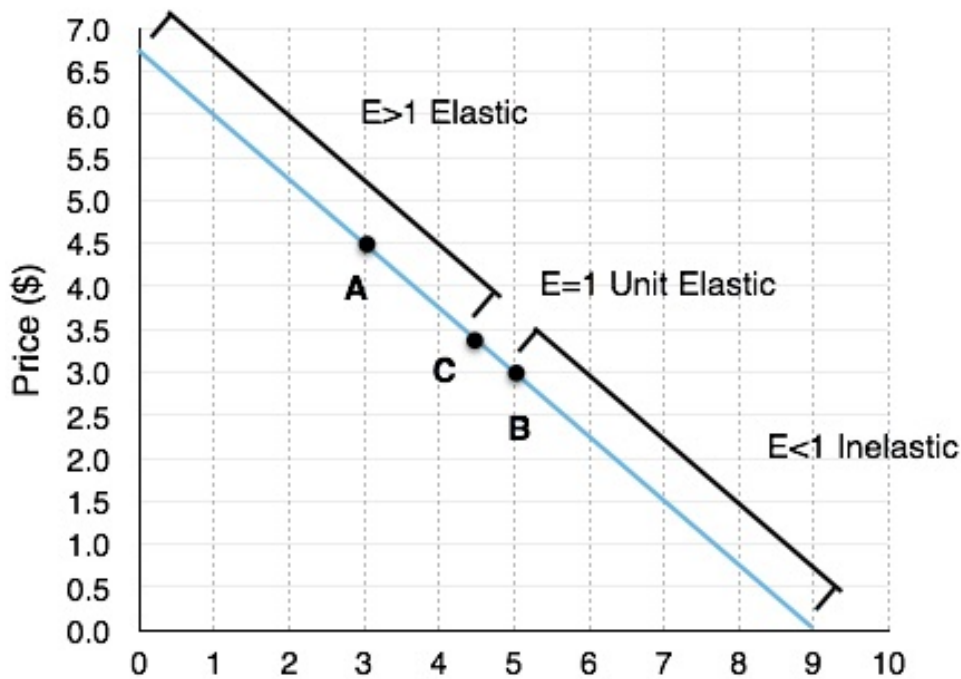


Figure 4.2a

To demonstrate, we have calculated the elasticities at a point in each of the zones:

$$\text{Point A} = \frac{\Delta Q}{\Delta P} \cdot \frac{P}{Q} = \frac{9}{6.75} \cdot \frac{4.5}{3} = 2 = \text{Elastic}$$

$$\text{Point B} = \frac{\Delta Q}{\Delta P} \cdot \frac{P}{Q} = \frac{9}{6.75} \cdot \frac{3}{5} = 0.8 = \text{Inelastic}$$

$$\text{Point C} = \frac{\Delta Q}{\Delta P} \cdot \frac{P}{Q} = \frac{9}{6.75} \cdot \frac{3.375}{4.5} = 1 = \text{Unit Elastic}$$

In reality, the only point we need to find to determine which areas are elastic and inelastic is our point where elasticity is 1, or Point C. This isn't as hard as it may seem. Since our formula is equal to the inverse of our slope multiplied by a point on the graph, it will only equal 1 when our point is equal to the slope of our graph. For a linear graph, this only occurs at the middle point, which is (4.5, 3.325) in this case.

Why is This Useful?



When Starbucks runs a buy one get one free promotion, they effectively lower the price of a drink by 50%. The company sells more drinks, but at a lower price. Elasticity determines whether or not this promotion will be profitable. Of course, promotions are not always intended to be profitable in the short term. Oftentimes, firms will cut prices to increase awareness of their new products, as Starbucks does with its holiday drinks. (Credit: Starbucks)

1. When you increase price, you increase revenue on units sold (**The Price Effect**).
2. When you increase price, you sell fewer units (**The Quantity Effect**).

These two effects work against each-other. To determine which outweighs the other we can look at elasticity:

When our point is **elastic** our $\% \text{ change in quantity} > \% \text{ change in price}$ meaning if we increase price, our quantity effect outweighs the price effect, causing a decrease in revenue.

When our point is **inelastic** our $\% \text{ change in quantity} < \% \text{ change in price}$ meaning if we increase price, our price effect outweighs the quantity effect, causing an increase in revenue.

This information is summarized in Figure 4.2b:

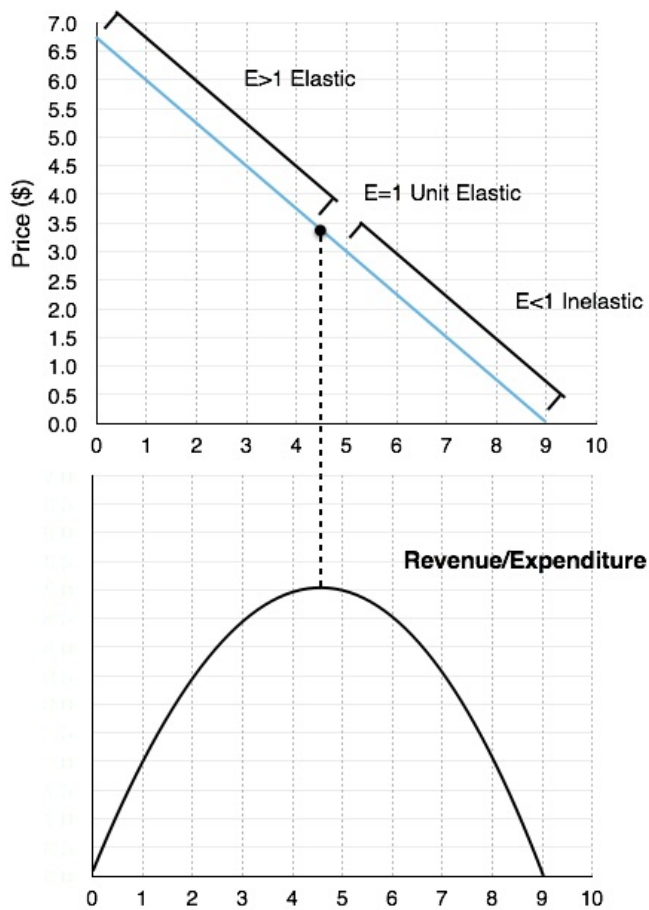


Figure 4.2b

The first thing to note is that revenue is maximized at the point where elasticity is unit elastic. Why? If you are the coffee shop owner, you will notice that there are untapped opportunities when demand is elastic or inelastic.

If elastic: The quantity effect outweighs the price effect, meaning if we decrease prices, the revenue gained from the more units sold will outweigh the revenue lost from the decrease in price.

If inelastic: The price effect outweighs the quantity effect, meaning if we increase prices, the revenue gained from the higher price will outweigh the revenue lost from less units sold.

The effects of price increase and decrease at different points are summarized in Figure 4.2c.

	Increase in Price	Decrease in Price
Price Elastic	Revenue/Expenditure Falls	Revenue/Expenditure Rises
Price Inelastic	Revenue/Expenditure Rises	Revenue/Expenditure Falls

Figure 4.2c

What about Expenditure

You will notice that expenditure is mentioned whenever revenue is. This is because a dollar earned by the coffee shop corresponds to a dollar spent by the consumer. Therefore, if the firm's revenue is rising, then the consumer's expenditure is rising as well. You must understand how to answer questions from both sides.

Summary

Elasticity is used to measure the responsiveness of one variable to another. This responsiveness can be labelled as elastic ($e > 1$), unit elastic ($e = 1$), and inelastic ($e < 1$). We can apply this to the demand curve, with unit elastic corresponding to the middle of the demand curve (x-intercept/2, y-intercept/2). Everything to the left is elastic and everything to the right is inelastic. This information can be used to maximize revenue or expenditure, with the understanding that when elastic, the quantity effect outweighs the price effect, and when inelastic, the price effect outweighs the quantity effect.

Glossary

Elastic

when the elasticity is greater than one, indicating that a 1 percent increase in price will result in a more than 1 percent increase in quantity; this indicates a high responsiveness to price.

Inelastic

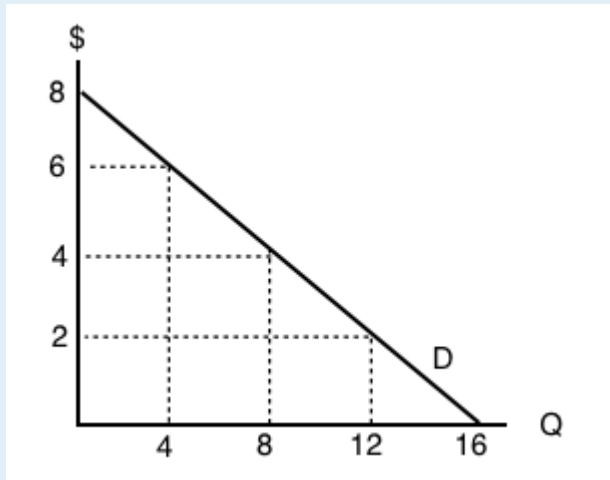
when the elasticity is less than one, indicating that a 1 percent increase in price paid to the firm will result in a less than 1 percent increase in quantity; this indicates a low responsiveness to price.

Unitary elastic

when the calculated elasticity is equal to one indicating that a change in the price of the good or service results in a proportional change in the quantity demanded or supplied

Exercises 4.2

Use the demand curve diagram below to answer the following TWO questions.



1. What is the own-price elasticity of demand as price decreases from \$8 per unit to \$6 per unit? Use the mid-point formula in your calculation.

- a) Infinity.
- b) 7.0
- c) 2.0.
- d) 1.75

2. At what point is demand unit-elastic?

- a) $P = \$6, Q = 12$.
- b) $P = \$4, Q = 8$.
- c) $P = \$2, Q = 12$.
- d) None of the above.

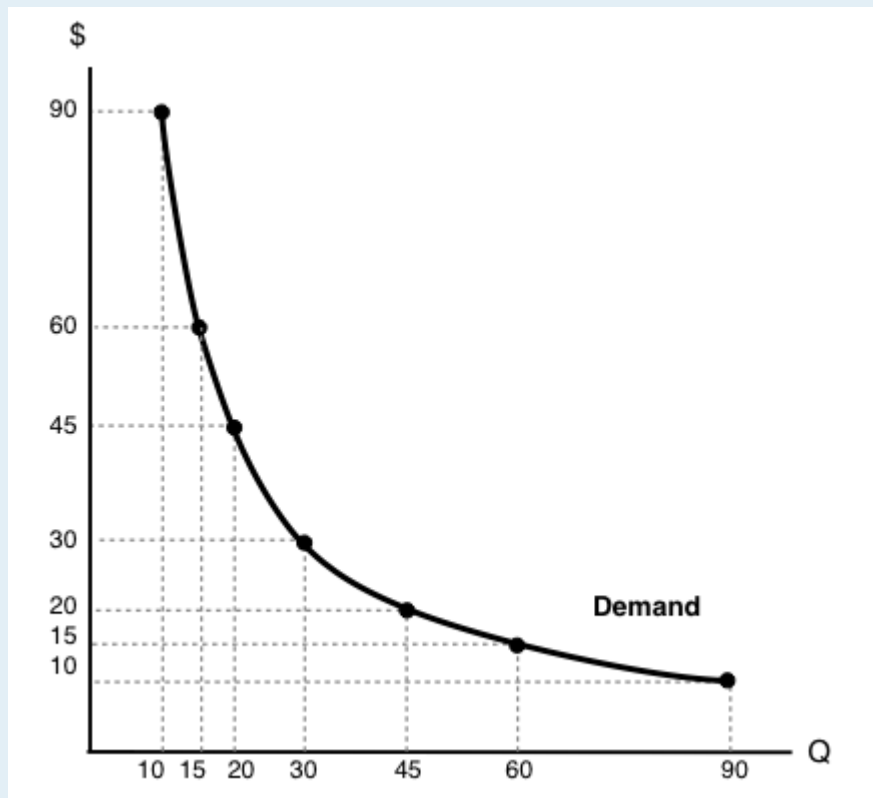
3. Which of the following statements about the relationship between the price elasticity of demand and revenue is TRUE?

- a) If demand is price inelastic, then increasing price will decrease revenue.
- b) If demand is price elastic, then decreasing price will increase revenue.
- c) If demand is perfectly inelastic, then revenue is the same at any price.
- d) Elasticity is constant along a linear demand curve and so too is revenue.

4. Suppose BC Ferries is considering an increase in ferry fares. If doing so results in an increase in revenues raised, which of the following could be the value of the own-price elasticity of demand for ferry rides?

- a) 0.5.
- b) 1.0.
- c) 1.5.
- d) All of the above.

5. Use the demand diagram below to answer this question. Note that $P \times Q$ equals \$900 at every point on this demand curve.



Which of the following statements correctly describes own-price elasticity of demand, for this particular demand curve?

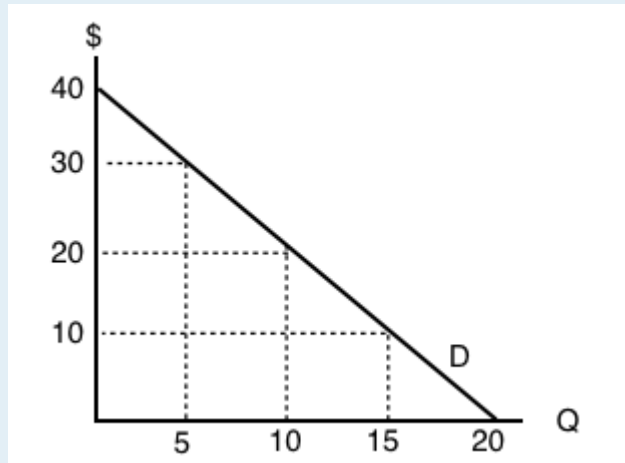
- I. Demand is unit elastic at a price of \$30, and elastic at all prices greater than \$30.
- II. Demand is unit elastic at a price of \$30, and inelastic at all prices less than \$30.
- III. Demand is unit elastic for all prices.

- a) I and II only.
- b) I only.
- c) I, II and III.
- d) III only.

6. Suppose that, if the price of a good falls from \$10 to \$8, total expenditure on the good decreases. Which of the following could be the (absolute) value for the own-price elasticity of demand, in the price range considered?

- a) 1.6.
- b) 2.3.
- c) Both a) and b).
- d) Neither a) or b).

7. Consider the demand curve drawn below.



At which of the following prices and quantities is revenue maximized?


- a) $P = 40$; $Q = 0$.
- b) $P = 30$; $Q = 5$.
- c) $P = 20$; $Q = 10$.
- d) $P = 0$; $Q = 20$.

4.3 Relative Elasticity

Learning Objectives

By the end of this section, you will be able to:

- Differentiate between perfectly elastic and inelastic
- Understand the difference between elasticity on a single curve and relative elasticity
- Explain what variables influence elasticity of supply and demand



(Credit: University of Victoria Students' Society)

Textbook or Burger?

In Topics 4.1 and 4.2, we looked at elasticity on a single demand curve and examined how responsive consumer are to price changes at various levels of production. But what about responsiveness across

firms? Across industries? We know that in certain industries, such as the textbook industry, consumers are less responsive to change than others. How is the quantity demanded for textbooks affected by an increase in price? If the textbook for a course rose from \$100 to \$150, what would you do? Most students will buy the book anyway, since it is a required course material. Publishers are increasingly using different strategies to ensure the market stays inelastic or unresponsive to price change, such as bundling the textbook with mandatory course access codes. Compare this situation with the price of a burger. If the price of a burger rises from \$8 to \$12, you may purchase lunch from a different restaurant or start packing lunch from home. The market for textbooks and burgers are very different. In this section, we will explore the relative elasticity of different markets.

Perfectly Elastic and Perfectly Inelastic

To begin the conversation about relative elasticity, it helps to first look at the extremes.

Perfectly Elastic

Imagine a product where if the price increased, even slightly, you wouldn't buy any of it anymore. Sound familiar? That's because we introduced this concept in Topic 3, as one of the assumptions of a perfectly competitive market. One of the examples we used was identical hot dog stands, side by side, where the only difference was price. If quality is the same, the rational consumer will always purchase the hot dog that is a lower price. From the perspective of the stand, they know that if they increase price even slightly, they will sell 0 units. This means that $E_D = \infty$.

Using point-slope at any point in Figure 4.3a, we can confirm this.

$$\frac{\Delta Q}{\Delta P} \cdot \frac{P}{Q} = ?$$

We know that $\frac{\Delta Q}{\Delta P}$ is equal to the inverse of the slope. In the demand curve in Figure 4.3a, when the $\Delta P > 0$ then ΔQ is equal to ∞ . This means that $\frac{\Delta Q}{\Delta P} = \infty$.

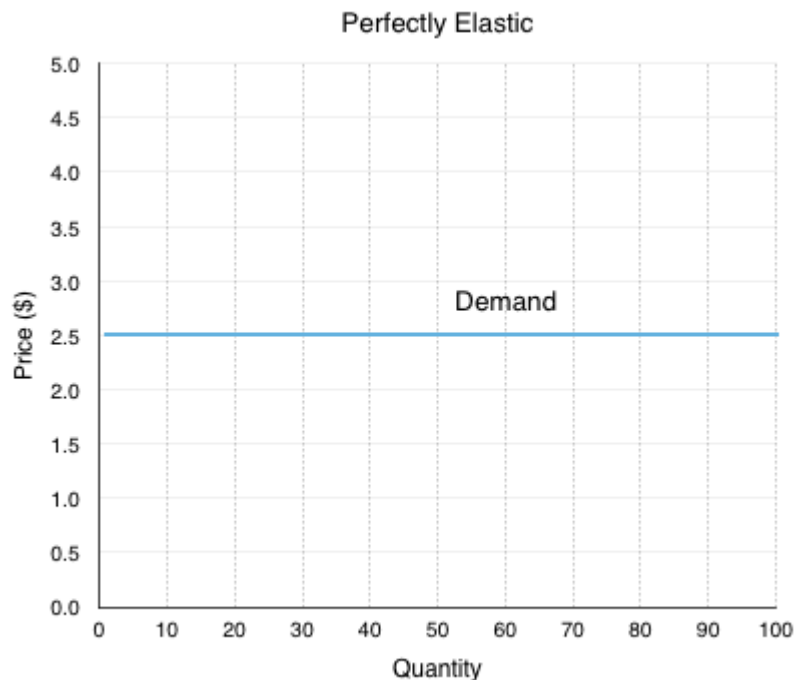


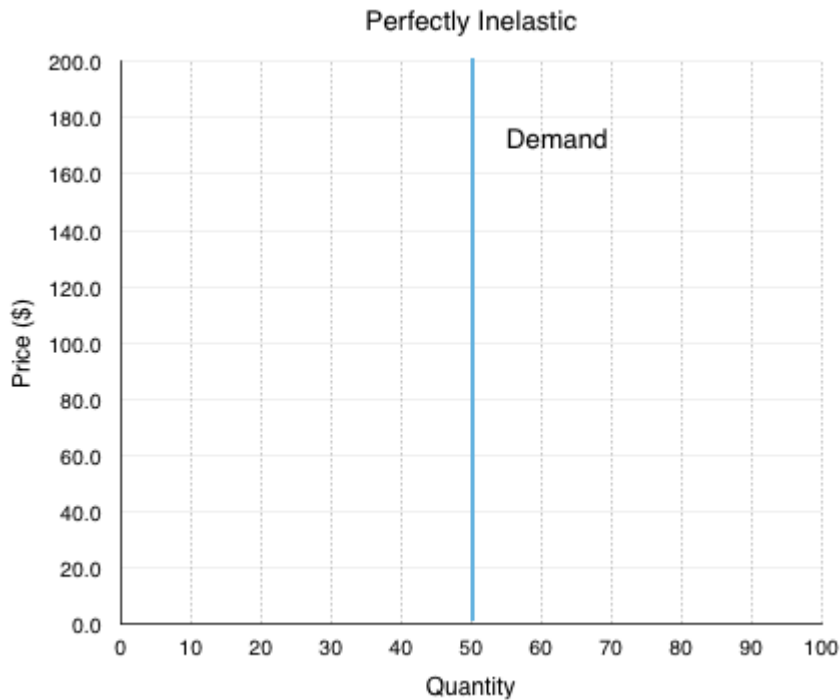
Figure 4.3a

Perfectly Inelastic

At the other end of the spectrum, consider a market where the firm can continue to increase prices with no change in quantity. If you were poisoned and had to buy the antidote, would you be responsive to price change? Probably not. This is an example of a situation where demand is nearly perfectly inelastic. If you increase the price, quantity demanded does not change. This means that $E_D = 0$.

We can confirm this by using point-slope at any point in Figure 4.4a.

In the demand curve in Figure 4.3a, when the $\Delta P > 0$ then ΔQ is equal to 0. This means that $\frac{\Delta Q}{\Delta P} = 0$.

*Figure 4.3b*

Relative Elasticity

The concepts of perfectly elastic and perfectly inelastic lead us into a discussion of relative elasticity. In 4.1 and 4.2, we examined a single demand curve, and looked at the numerical value of elasticity along that demand curve. However, elasticity can also be useful when comparing demand curves. Even though each demand curve has an inelastic, elastic, and unit elastic section, the comparison of the curves can show which markets are relatively more responsive to price changes. This is an important concept to understand for when we look at the impacts of a policy change.

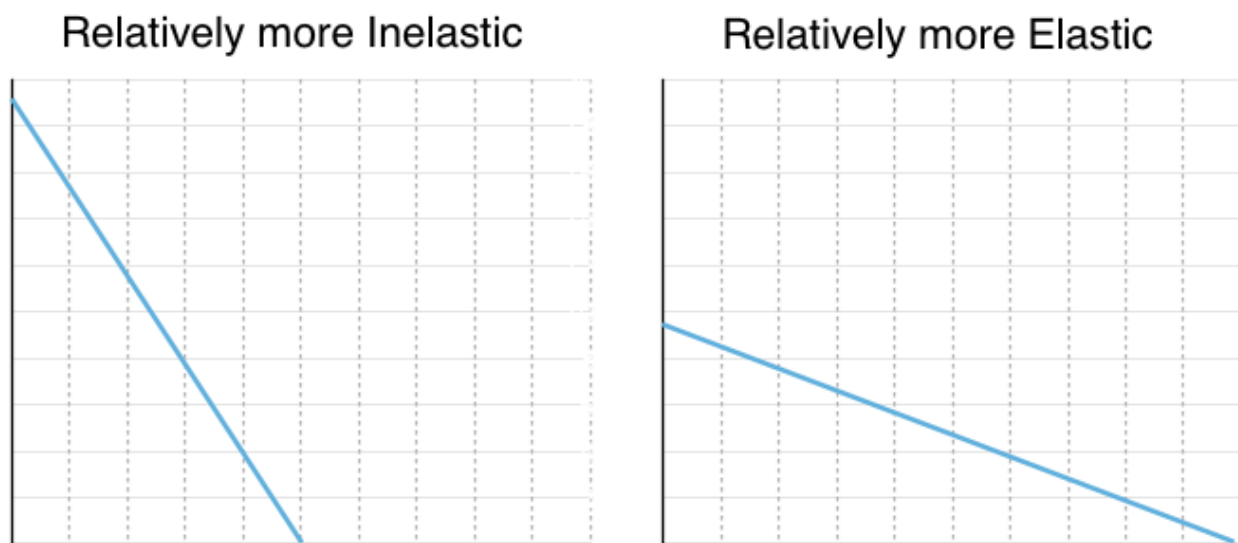
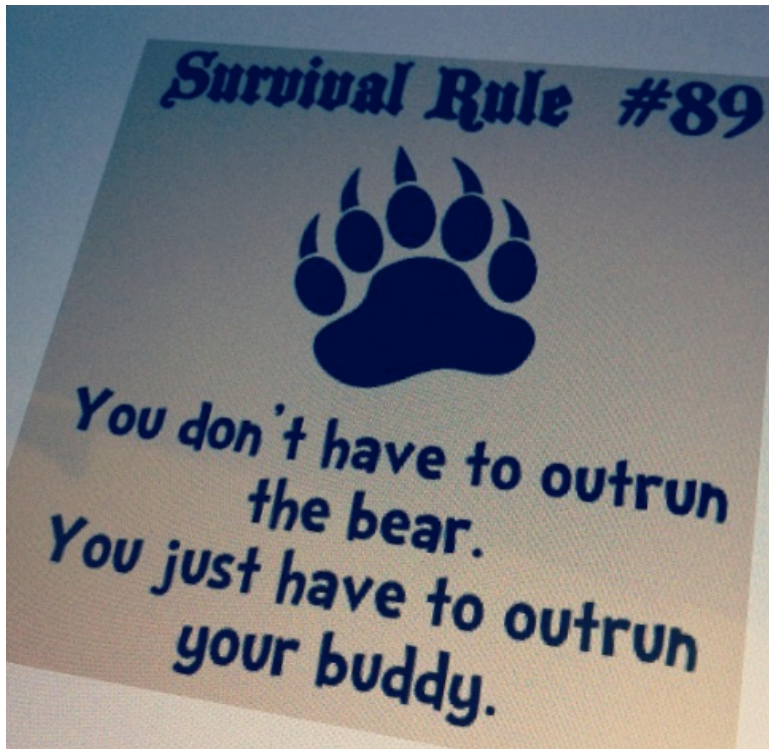


Figure 4.3c

Figure 4.3c illustrates two curves. One is relatively more inelastic and the other is relatively more elastic. The best way to determine which is more elastic or inelastic is to compare each curve to the extremes. The curve more resemblant of perfect elasticity is relatively more elastic, the curve more resemblant of perfect inelasticity is relatively more inelastic. Note this is different than saying one is elastic and the other inelastic! To emphasize this point, read the section “Bears and Elasticity.”

Bears and Elasticity



(Credit: Wapster/ Flickr/ CC BY 2.0)

A bear jumps out of a bush and starts chasing two hikers. They both start running for their lives, but then one of them stops to put on his running shoes.

His friend says, "What are you doing? You can't outrun a bear!"

His friend replies, "I don't have to outrun the bear; I only have to outrun you!"

If both friends are trying to get away from the bear and you learn that one of them is fast, does this information tell you who gets eaten? No! It only matters which one is faster, or fast relative to the other. Relative elasticity is the same. In fact, we cannot pass judgement if one is elastic or inelastic unless we are referencing to another.

The concept of relative elasticity is not based on the calculations in 4.1 and 4.2, as each demand curve has an inelastic, elastic and unit elastic region. Demand curves take the shape of anything between perfectly elastic and perfectly inelastic, and you can only judge relative elasticity in reference to other curves.

What About Supply

The same concepts and principles can be applied to supply. There is fairly significant variation across different industries, with some relatively more elastic than others.

Factors That Influence Relative Elasticity

So what causes this difference in relative elasticity? For the most part, external factors which influence responsiveness.

Demand

1. **Availability of substitutes**

The availability of substitutes is a strong factor in determining the elasticity of a good. If there are many close substitutes, then it is fairly easy for consumers to find a suitable alternative to a good if prices rise.

2. **Necessity of a good**

In addition, the extent to which a good is a necessity or a luxury greatly influences its elasticity. Essentials, such as soap, flour, sugar, etc. are generally purchased in the same quantity regardless of price. On the other hand, consumers are very price conscious when it comes to luxury goods (such as comforts, jewelry, etc.).

3. **Income**

The necessity of a good depends quite heavily on the customer's income. Someone with low income might be more price conscious (elastic) when purchasing a new sofa compared to someone with higher income. Generally the larger percentage of your income a good takes up, the more sensitive you will be to price changes.

Supply

What causes supply to be more or less elastic?

1. **Availability of resources**

If a company's production is dependent on scarce resources, the company is less responsive to changes in price. Even if prices are high and the firm wants to increase production, it won't be able to without the proper inputs.

2. **Technological innovation**

Innovation tends to lead to more efficient production. If a firm benefits from top notch production technology, it will be more able to respond to an increase in price with an increase in production.

3. **Barriers to entry**

If there are few barriers to entry in an industry, an increase in price can cause a large increase in production as new firms quickly enter the market.

Time: The Ever-Constraining Factor

Both the elasticity of supply and demand are impacted by time. For the consumer, how much time they have to make a consumption decision. For the producer, how much time it has to produce the good and build inventory. Regardless of whether we are talking about supply or demand, an increase in time always increases the elasticity of a good by increasing the ability to act and make informed decisions.

Summary

Whereas hard labels such as elastic, unit elastic, and inelastic can be used to describe specific sections of supply and demand curves (based on a calculated value), when comparing two curves everything is relative. Using the knowledge of perfect elasticity and perfect inelasticity, we can compare two curves on the basis of elasticity to determine how responsive the general consumer group, industry, etc. is to price changes. A flatter curve is relatively more elastic than a steeper curve. Availability of substitutes, a goods necessity, and a consumers income all affect the relative elasticity of demand. The availability of resources, technological innovation, and the barriers to entry all affect the relative elasticity of supply. Time affects elasticity of either curve.

Now that we have the tools of supply, demand and elasticity, we will use them to understand how government policy affects the market.

Glossary

Perfectly Elastic

the extremely elastic situation of demand or supply where quantity changes by an infinite amount in response to any change in price; horizontal in appearance

Perfectly Inelastic

the highly inelastic case of demand or supply in which a percentage change in price, no matter how large, results in zero change in the quantity; vertical in appearance

Exercises 4.3

1. Which of the following does NOT affect the magnitude of own-price elasticity of demand?
 - a) The length of the time horizon over which we are looking at the change in consumer behaviour.
 - b) The availability (or lack thereof) of close substitutes for the good in question.
 - c) The amount by which quantity supplied will change as price changes.
 - d) All of the above affect the own-price elasticity of demand.

2. If a demand curve is VERTICAL, then own-price elasticity of demand for this good is equal to:

- a) Infinity.
- b) Zero.
- c) One.
- d) None of the above.

3. If – given consumer preferences – a certain good has many close substitutes available, then:

- a) The demand for that good will be relatively inelastic, compared to goods for which there are few close substitutes.
- b) The supply of that good will be relatively inelastic, compared to goods for which there are few close substitutes.
- c) The demand for that good will be relatively elastic, compared to goods for which there are few close substitutes.
- d) The supply of that good will be relatively elastic, compared to goods for which there are few close substitutes.

4. If – given consumer preferences – a certain good has few close substitutes available, then:

- a) The demand for that good will be relatively inelastic, compared to goods for which there are many close substitutes.
- b) The supply of that good will be relatively inelastic, compared to goods for which there are many close substitutes.
- c) The demand for that good will be relatively elastic, compared to goods for which there are many close substitutes.
- d) The supply of that good will be relatively elastic, compared to goods for which there are many close substitutes.

Topic 6: Consumer Theory

Introduction to Consumer Choices



Figure 1. Investment Choices. Higher education is generally viewed as a good investment, if one can afford it, regardless of the state of the economy. (Credit: modification of work by Jason Bache/Flickr Creative Commons)

“Eeny, Meeny, Miney, Moe”—Making Choices

The Great Recession of 2008–2009 touched families around the globe. In too many countries, workers found themselves out of a job. In developed countries, unemployment compensation provided a safety net, but families still saw a marked decrease in disposable income and had to make tough spending decisions. Of course, non-essential, discretionary spending was the first to go.

Even so, there was one particular category that saw a universal increase in spending world-wide during that time—an 18% uptick in the United States, specifically. You might guess that consumers began eating more meals at home, increasing spending at the grocery store. But the Bureau of Labor Statistics’ Consumer Expenditure Survey, which tracks U.S. food spending over time, showed “real total food spending by U.S. households declined five percent between 2006 and 2009.” So, it was not groceries. Just what product would people around the world demand more of during tough economic times, and more importantly, why? (Find out at chapter’s end.)

That question leads us to this chapter’s topic—analyzing how consumers make choices. For most consumers, using “eeny, meeny, miney, moe” is not how they make decisions; their decision-making processes have been educated far beyond a children’s rhyme.

Topic Objectives

Topic 6: Consumer Theory

In this topic, you will learn about:

- Budget Lines and the price ratio
- Indifference and the marginal rate of substitution
- Optimal consumer choice; changes in choice; substitution and income effects of price changes.

Microeconomics seeks to understand the behavior of individual economic agents, such as individuals and businesses. Economists believe that individuals' decisions, such as which goods and services to buy, can be analyzed as choices made within certain budget constraints. Generally, consumers are trying to get the most for their limited budget. In economic terms, they are trying to maximize total utility, or satisfaction, given their budget constraint.

Everyone has their own personal tastes and preferences. The French say: *à chacun son goût*, or "Each to his own taste." An old Latin saying goes, *De gustibus non est disputandum* or "There's no disputing about taste." If people's decisions are based on their own tastes and personal preferences, however, then how can economists hope to analyze the choices consumers make?

An economic explanation for why people make different choices begins with accepting the proverbial wisdom that tastes are a matter of personal preference. But economists also believe that the choices people make are influenced by their incomes, by the prices of goods and services they consume, and by factors like where they live. This chapter introduces the economic theory of how consumers make choices about what to buy.

The analysis in this chapter will dive deeper into the demand side of our supply and demand model, which will help us develop a deeper understanding of all the impacts of a price change beyond a simple difference in quantity demanded.

Our Demand Model So Far

So far, we have learned the basics of demand. Our demand curve represents the marginal benefit to consumers. When our quantity increases, our marginal benefits fall. Why is that? We talked briefly about consumers preferring a bundle of goods, and referred back to our production possibility frontier where consumers had to make trade-offs relative to other goods. Essentially, marginal benefit reflects:

-how much we like a good *in absolute sense, and*

-how much we like a good *relative to other goods.*

This brings us to the two components of the demand model that we will explore in this chapter:

1. What goods can we afford?

This question will be answered with an analysis of the consumer's budget line, which shows all the combinations of goods consumers can purchase using their full budget.

2. What goods do we like?

This question will be answered with an analysis of the consumer's indifference curve, which shows all the bundles of goods that give the consumer the same amount of happiness, or utility.

By determining where these two curves are tangent to each other, we can determine where a consumer will consume at each price level.

Before we can use these tools, we need to understand all the components, we will start by exploring what goods consumers can afford, given their budget lines.

6.1 The Budget Line

Learning Objectives

By the end of this section, you will be able to:

- Understand budget lines
- Explain price ratios
- Recreate budget lines after prices and income changes

The Budget Line

To understand how households make decisions, economists look at what consumers can afford. To do this, we must chart the consumer's budget constraint. In a budget constraint, the quantity of one good is measured on the horizontal axis and the quantity of the other good is measured on the vertical axis. The budget constraint shows the various combinations of the two goods that the consumer can afford. Consider the situation of José, as shown in Figure 6.1a. José likes to collect T-shirts and movies.

In Figure 6.1a, the number of T-shirts José will buy is on the horizontal axis, while the number of movies he will buy José is on the vertical axis. If José had unlimited income or if goods were free, then he could consume without limit. But José, like all of us, faces a **budget constraint**. José has a total of \$56 to spend. T-shirts cost \$14 and movies cost \$7.

Plotting the budget constraint is a fairly simple process. Each point on the budget line has to exhaust all \$56 of José's budget. The easiest way to find these points is to plot the intercepts and connect the dots. Each intercept represents a case where José spends all of his budget on either T-shirts or movies.

If José spends all his money on movies, which cost \$7, José can buy $\$56/\7 , or 8 of them. This means the y-intercept is the point (0,8). Here, José buys 0 T-shirts and 8 movies.

If José spends all his money on T-shirts, which cost \$14, José can buy only 4 of them ($\$56/\14). This means the x-intercept is the point (4,0). Here, José buys 4 T-shirts and 0 movies.

By connecting these two extremes, you can find every combination that José can afford along his **budget line**. For example, at point R, José buys 2 T-shirts and 4 movies. This costs him:

T-Shirts @ $\$14 \times 2 = \28

Movies @ $\$7 \times 4 = \28

Total = $\$24 + \$28 = \$56$

This point indeed exhausts José's budget.

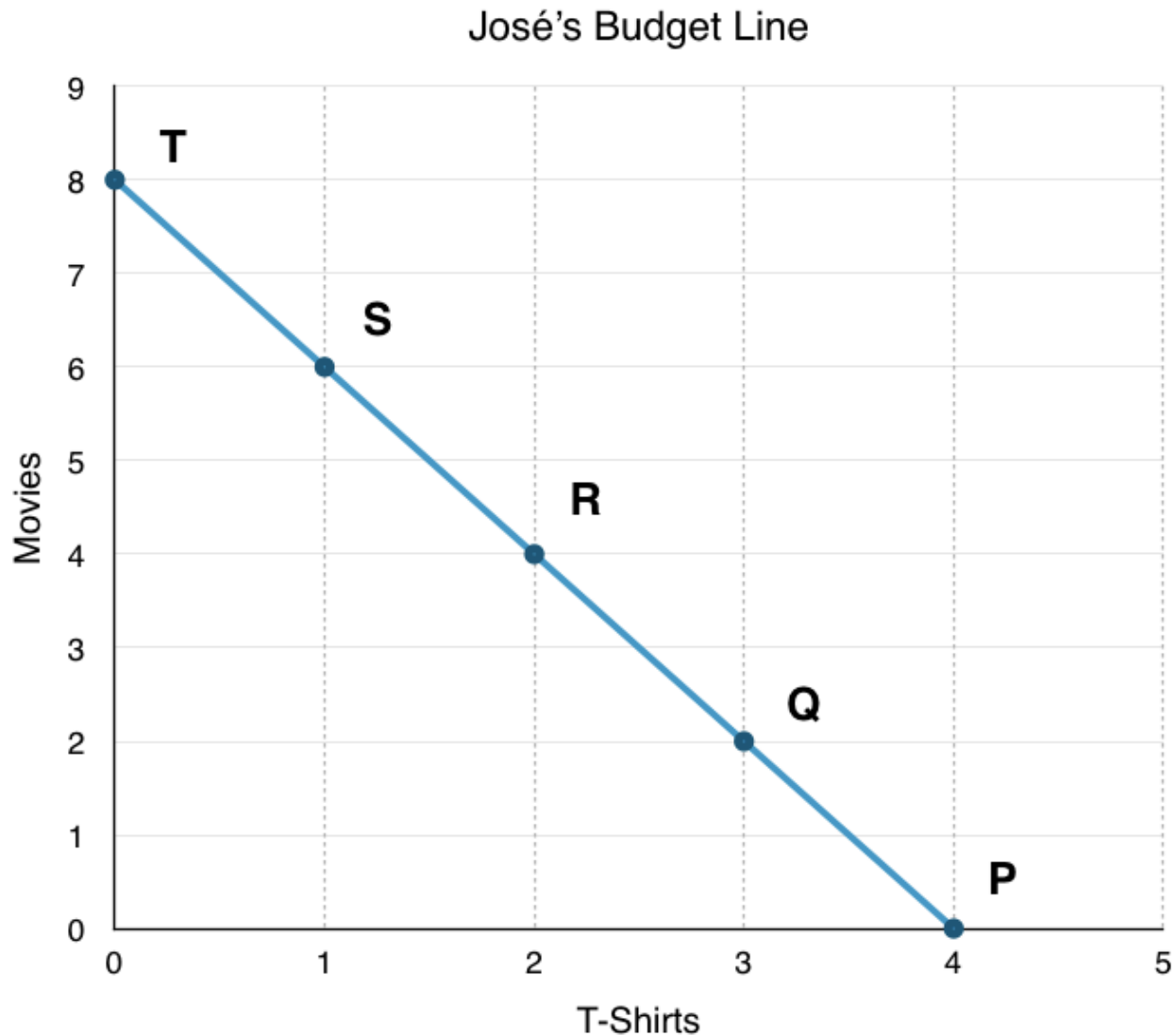


Figure 6.1a

Budget Constraints

We now know that José must purchase at some point along the budget line, depending on his preferences. Note that any point within the budget line is feasible. José can spend less than \$56, but this is not optimal as he can still buy more goods. Since T-shirts and movies are the only two goods, there is no ability in this model for José to save. This means that not spending his full budget is essentially wasted income. On the other hand, any point beyond the budget line is not feasible. If José only has \$56, he cannot spend more than that. Notice that areas in the green zone are not necessarily more optimal than points along the budget line. The optimal point depends on José's preferences, which we will explore when we discuss José's indifference curve.

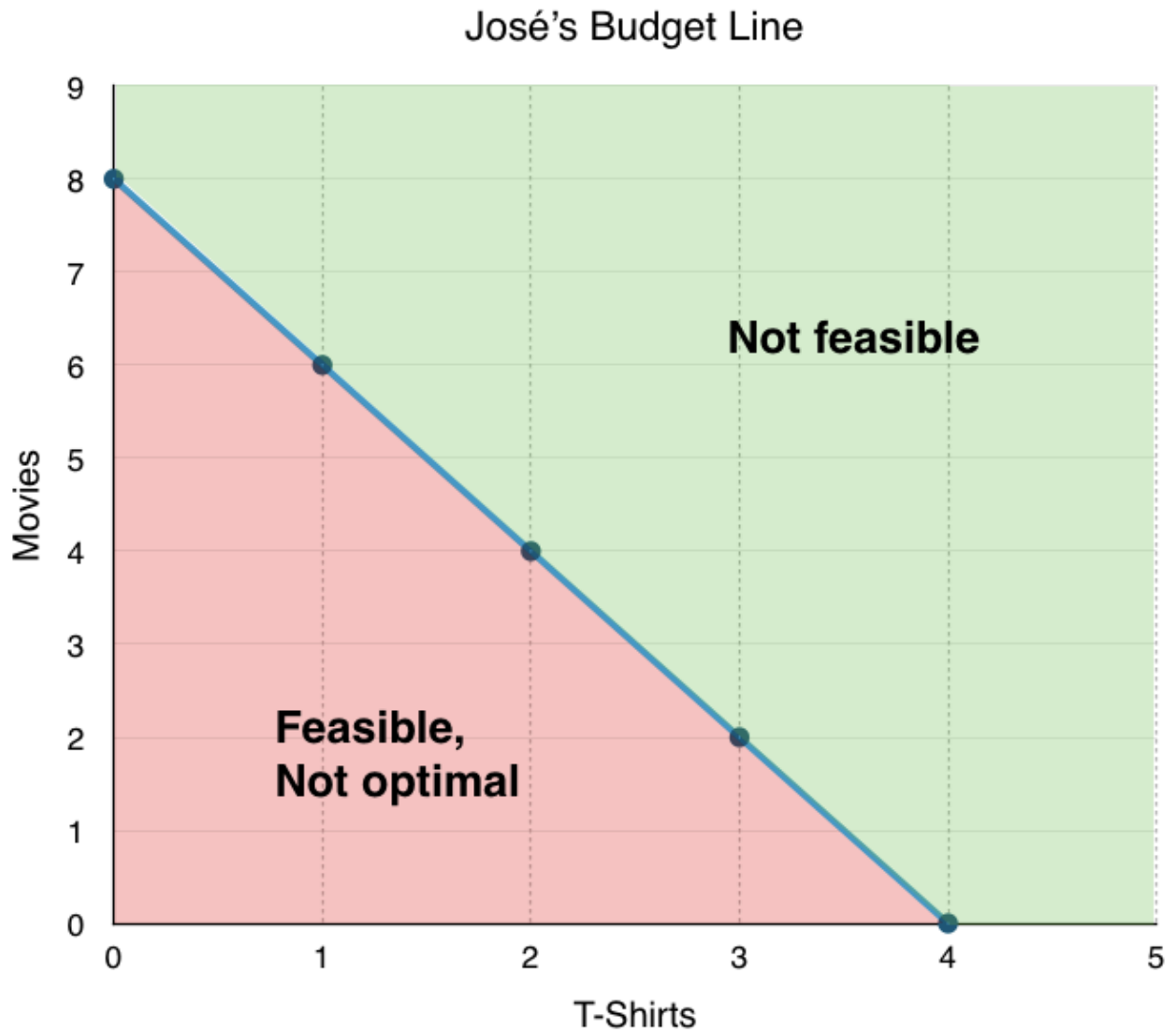


Figure 6.1b

Slope

Though we can easily just connect the X and Y intercepts to find the budget line representing all possible combinations that expend José's entire budget, it is important to discuss what the slope of this line represents. Remember, the slope is the rate of change. In economics, the slope of the graph is often quite important. In this situation, the slope is QY/QX . If we want to represent slope in terms of prices it is equal to Px/PY . This can seem unintuitive at first, as we are used to seeing slope as Y/X ., but the reason this is not true for prices is because the y-axis represents quantity, not price. As we saw above, as price doubles, the quantity the consumer could previously purchase is halved.

If José is making \$56:

When the price of movies is **\$7**, he can buy **8** of them

When the price of movies is **\$14**, he can buy **4** of them

Since price and quantity have this inverse relationship, we can use either P_x/P_Y or Q_Y/Q_X to find the slope. Since price is often the information given, it is important to remember that the slope can be calculated either way.

What Does Slope Mean?

The meaning of the budget line's slope or **price ratio** is the same as the slope of a PPF. (The difference between these two curves is that the PPF shows all the different combinations given time a time/production constraint, whereas a budget line shows different combinations given budget constraint. Otherwise, the two graphs are basically the same). This means the slope of the curve is the relative price of the good on the x-axis in terms of the good on the y-axis. The *price ratio of 2* means that José must give up 2 movies for every T-shirt. Likewise, the *inverse slope of 1/2* means that José must give up 1/2 a T-shirt per movie.

When Income Changes

Because budget and prices are prone to change, José's budget line can shift and pivot. For example, if José's budget drops from \$56 to \$42, the budget line will shift inward, as he is unable to purchase the same number of goods as before.

To plot the new budget line, find the new intercepts:

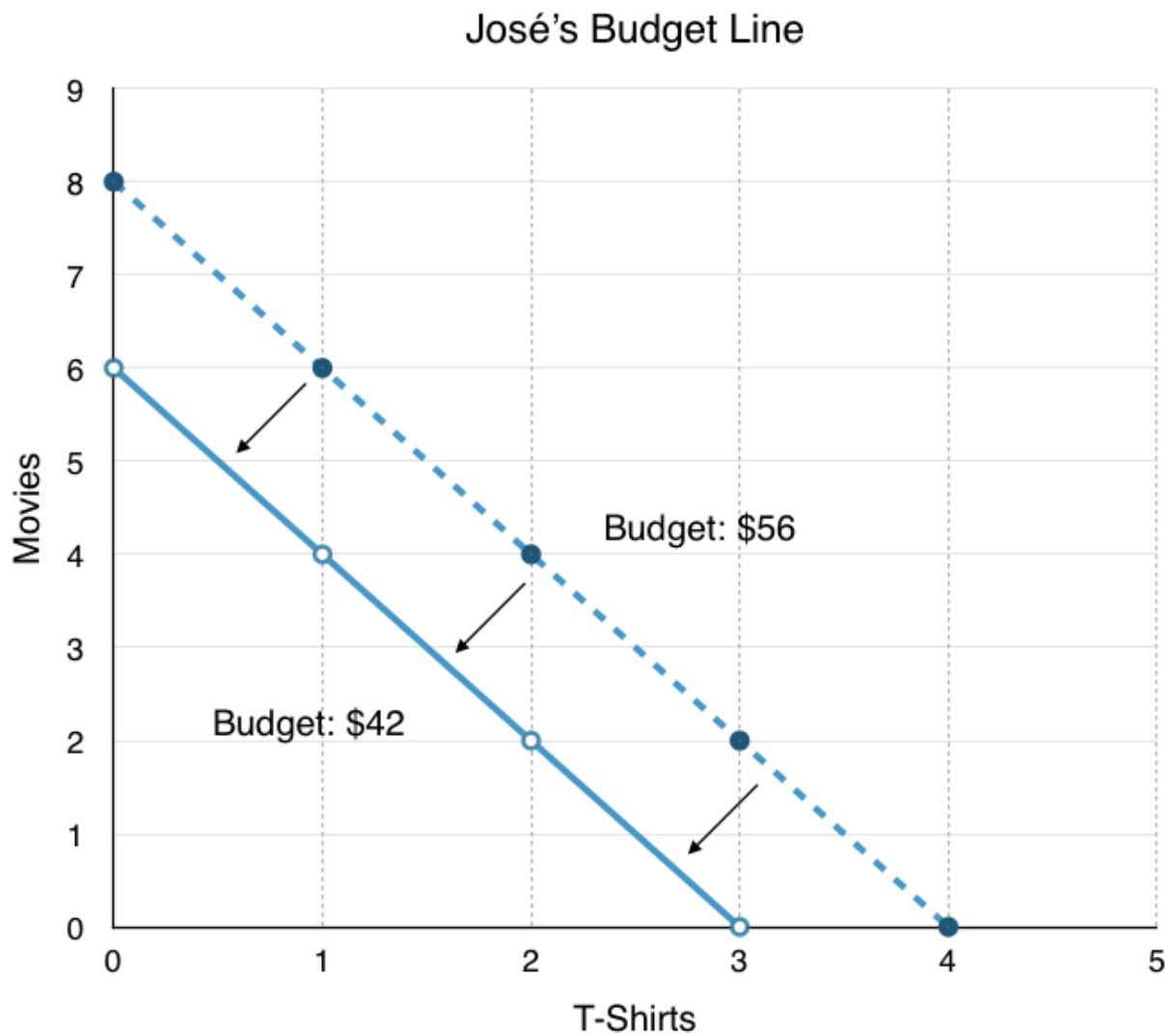
Budget: \$42

Price of movies: \$7

Price of T-shirts: \$14

Maximum number of movies (y-intercept): $\$42/\$7 = \mathbf{6}$

Maximum number of T-shirts (x-intercept): $\$42/\$14 = \mathbf{3}$

**Figure 6.1c**

As a result of the shift, José's budget line has shifted inward, leaving less consumption opportunities available.

When Price Changes

In addition to income changes, sometimes the prices of movies and T-shirts rises and falls. Suppose, from our original budget of \$56, movies double in price from \$7 to \$14. Again, to plot the new graph, simply find the new intercepts:

Budget: \$56

Price of movies: \$14

Price of T-shirts: \$14

Maximum number of movies (y-intercept): $\$56/\$14 = 4$

Maximum number of T-shirts (x-intercept): $\$56/\$14 = 4$

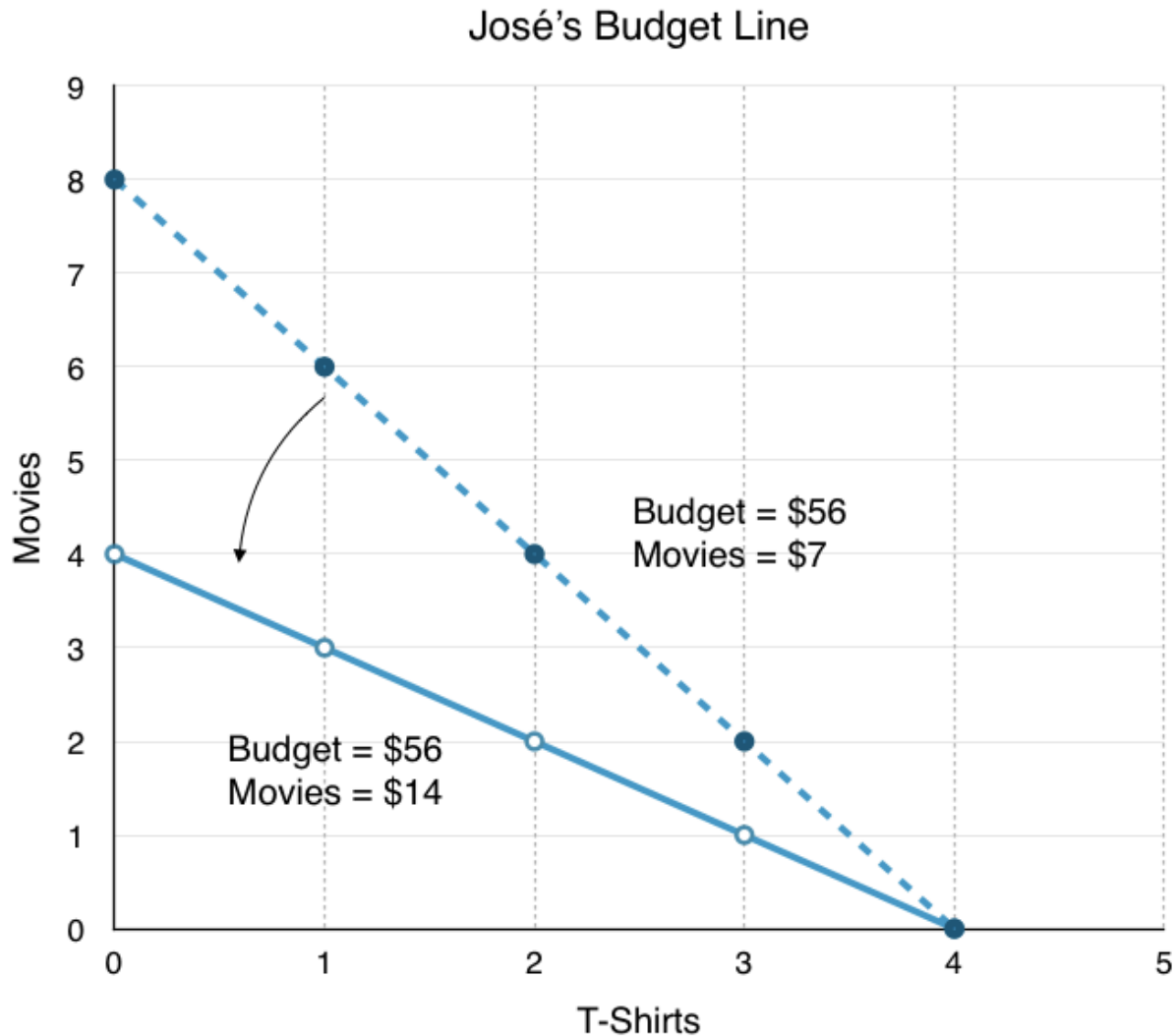


Figure 6.1d

As a result of the pivot, José has fewer consumption opportunities available and the slope of the line changes. This has two effects:

The Size Effect: There are fewer opportunities for consumption (as a result of the price change, the purchasing power of José's dollar has fallen).

The Slope Effect: The relative price of movies is now higher, while the relative price of T-shirts is now lower.

When Price and Income Change

The last type of change is when both price and income change. Suppose the price of movies increases from \$7 to \$12 and José's budget increases to \$63. To plot the new budget line, follow the same steps as before:

Budget: \$63

Price of movies: \$12

Price of T-shirts: \$14

Maximum number of movies (y-intercept): $\$63/\$12 = 5.25$

Maximum number of T-shirts (x-intercept): $\$63/\$14 = 4.50$

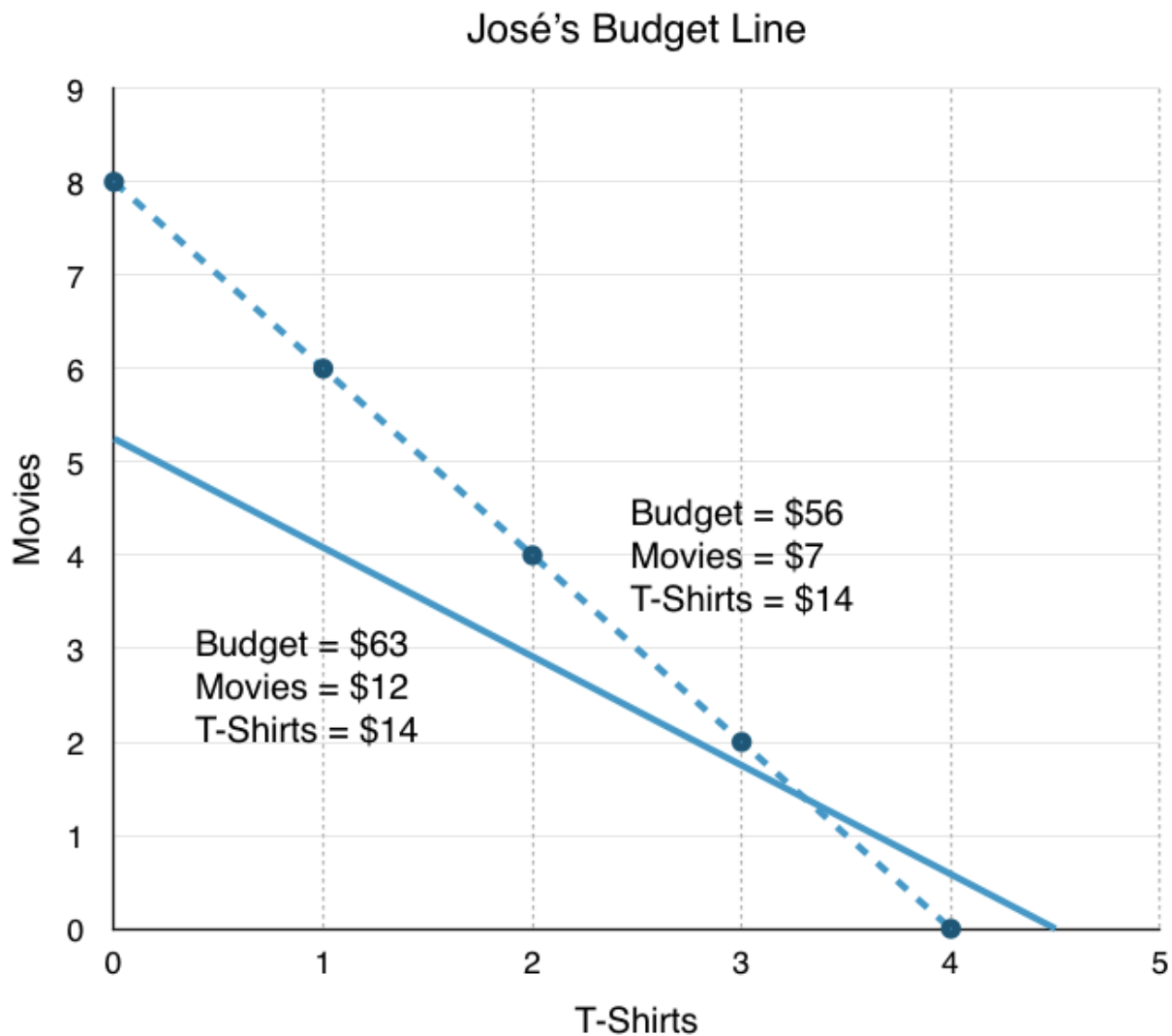


Figure 6.1e

These changes have interesting effects. José now has access to some new consumption opportunities, but many others are now unavailable. While the slope effect has clearly made the relative price of T-shirts lower, the size effect is uncertain. These effects are implicit in the income and substitution effects we will explore shortly.

Conclusion

Though we understand the different ways by which consumers can exhaust their income, we have not yet discussed how to determine which bundles of goods different consumers prefer. To finish our analysis, let's take a look at Indifference Curves.

Glossary

Budget Constraint

all possible combinations of goods and services that can be attained given current prices and limited income

Budget Line

a graphical representation of a consumers budget constraint

Price Ratio

the slope of the budget line, represents the price of x in terms of good y

Size Effect

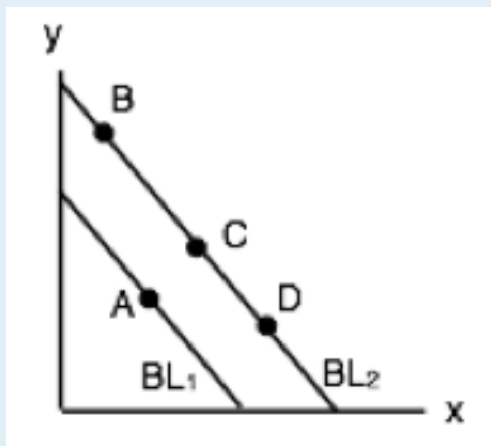
the impact of a price change on the purchasing power of the consumer

Slope Effect

the impact of a price change on the relative prices of good x and y

Exercises 6.1

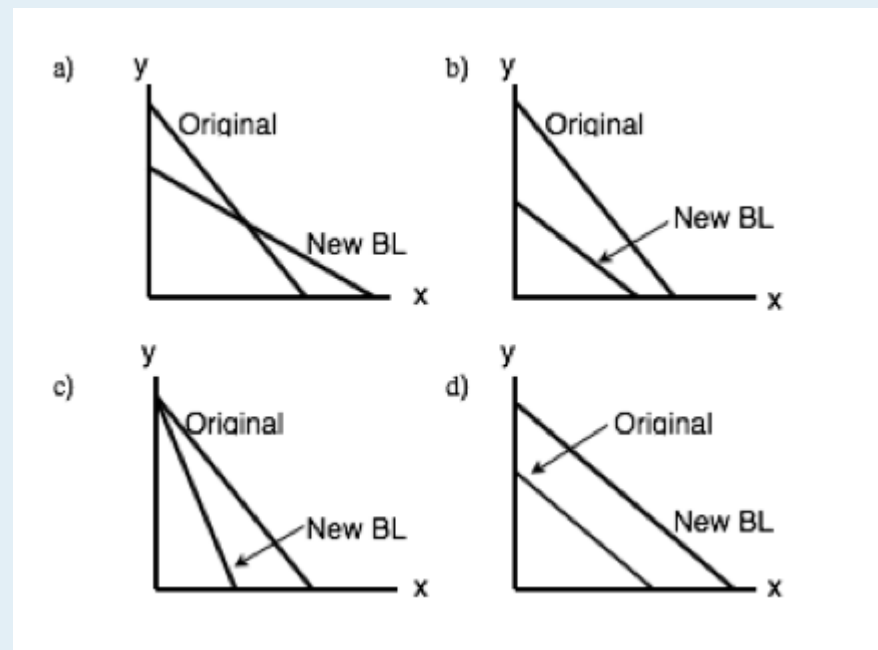
1. In the diagram below, a consumer maximizes utility by choosing point A, given BL₁.



Suppose that both good x is normal and good y is inferior, and the budget line shifts to BL2. Which of the following could be the new optimal consumption choice?

- a) B.
- b) C.
- c) D.
- d) Either B or C or D.

2. Which of the following diagrams could represent the change in a consumer's budget line if (i) the price of good y increases AND (ii) the consumer's income decreases.



6.2 The Indifference Curve

Learning Objectives

By the end of this section, you will be able to:

- Understand the indifference curve
- Explain the marginal rate of substitution
- Represent perfect substitutes, perfect complements, and convex preferences on an indifference curve

Understanding Preferences

Rational consumers will spend all of their income, meaning they will produce somewhere along their budget line. The point they produce ultimately depends on preferences. Consider again the situation of José, who can buy T-shirts or Movies.

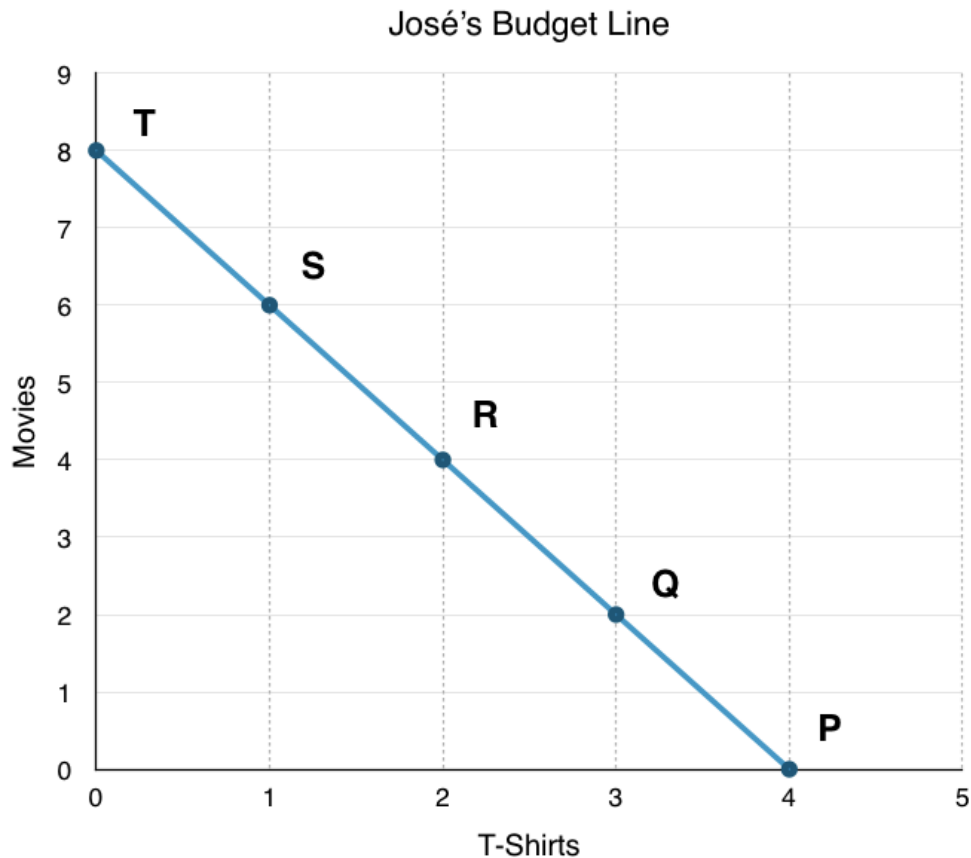


Figure 6.1a – Redisplayed

If José likes T-shirts but hates movies, he will spend all of his money on T-shirts and nothing on movies. In other words, he will select bundle P.

If José likes movies but hates T-shirts, he will spend all of his money on movies and none on T-shirts. In other words, he will select bundle T.

Usually, consumers prefer a mix of both goods. Where they consume depends on the strength of their preferences, measured by a concept known as **utility**. Utility, an economic term that was introduced by Daniel Bernoulli, refers to the total satisfaction received from consuming a good or service. Utility measures our happiness derived from consumption. Using the concept of utility, we can graph our preferences.

Graphing Preferences

In Topic 6.1, we looked at how to represent a consumer's choices graphically with a budget line, with each point showing a different way for the consumer to spend all of their budget. Now, we want to represent their preferences on the same diagram.

An **indifference curve** maps the consumption bundles that the consumer views as equal. The consumer is equally as happy to consume at any point along the indifference curve.

Consider Figure 3.2a, where several possible consumption points are laid out. With the knowledge we have, what can we say about José's consumption choices? Assuming José is at point A, would he prefer another bundle more?

Point C – At point C José consumes more movies and T-shirts. Since more goods make José happier, he is better off at point C.

Point B – At point B, José consumes more movies, but fewer T-shirts. Because we do not know José's preferences, we cannot say whether José is better or worse off.

Point D – At point D, José consumes more T-shirts, but fewer movies. Because we do not know José's preferences, we cannot say whether José is better or worse off.

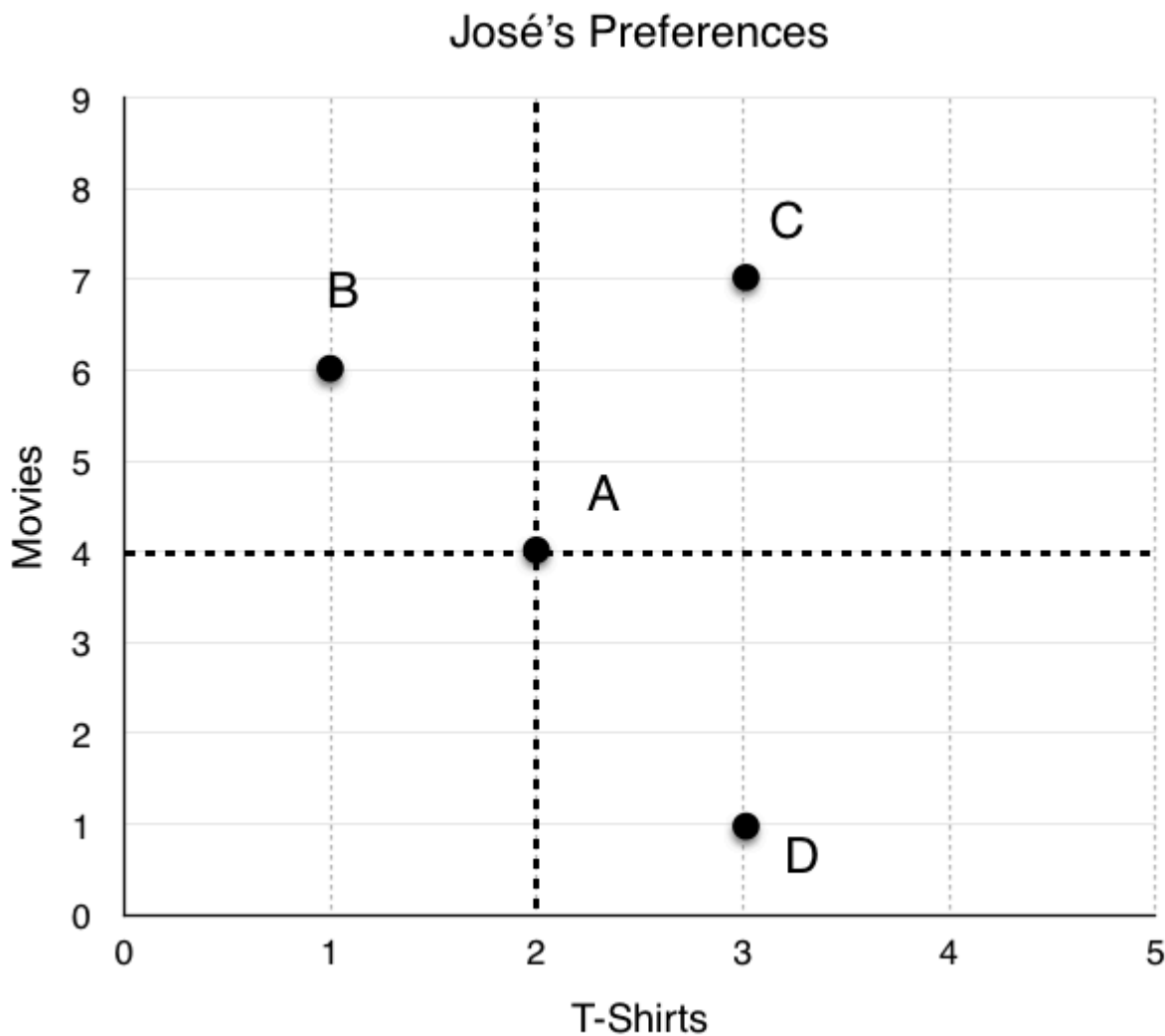


Figure 6.2a

Perfect Substitutes

Let's start with a simple example of José's preferences and assume he views T-shirts and movies as nearly perfect substitutes. If the two goods were perfect substitutes, José would be indifferent between Movies and T-shirts. Let's assume instead that José likes T-shirts twice as much as movies – José is equally as happy with 4 T-shirts as he is with 8 movies.

At point A, to keep utility constant, if José is to lose 1 T-shirt, he has to gain 2 movies to stay on the same indifference curve.

What information does this give us regarding José preferences between A, B, C and D?

Point C – Again, since José has more movies and T-shirts at point C, his utility has increased, and he is on a higher indifference curve.

Point B – At point B, José has one less T-shirt, but 2 more movies. As outlined, this means his utility is unchanged, and he is on the same indifference curve.

Point D – At point D, José has 1 more T-shirt, but 3 fewer movies. Since José only views T-shirts as two times more valuable than movies, his utility has decreased, and he is on a lower indifference curve.

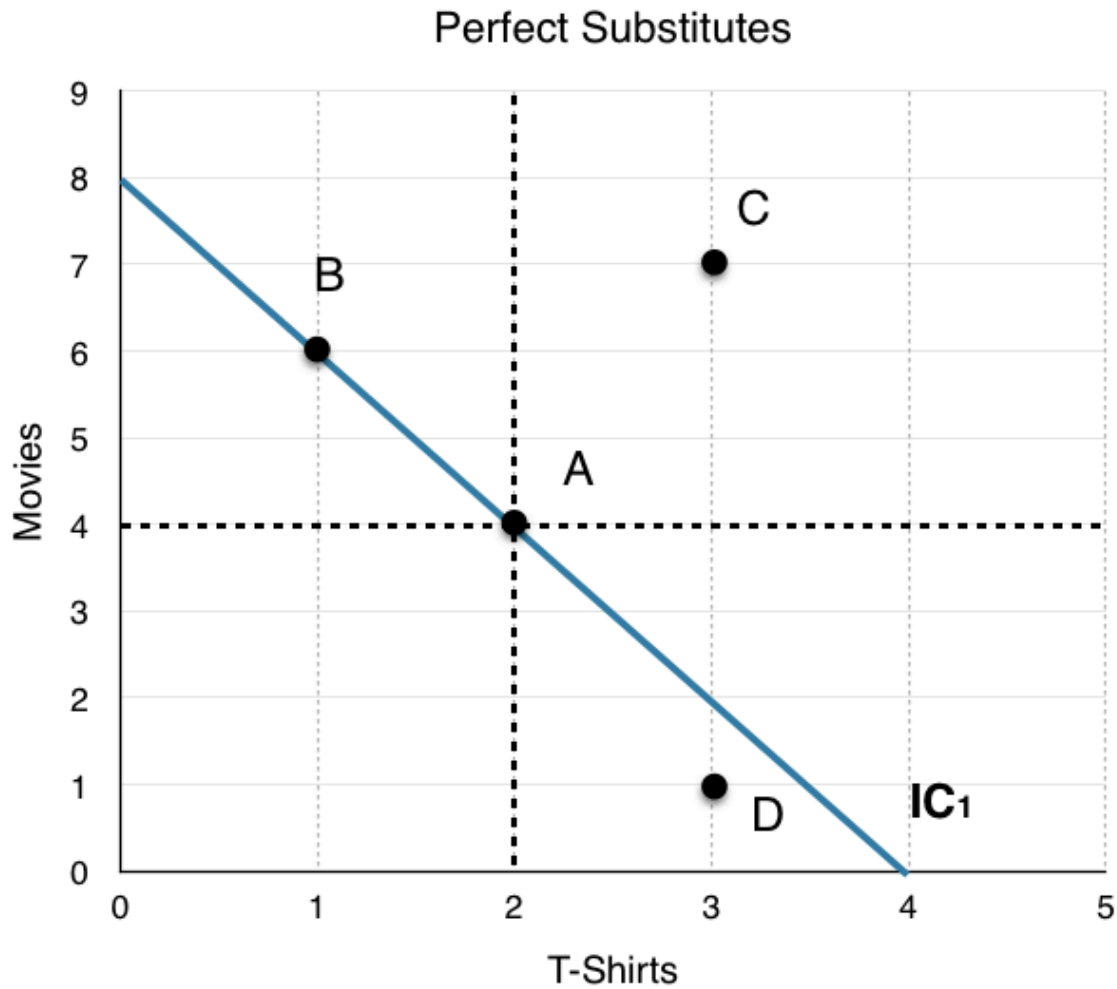


Figure 6.2b

It is important to recognize that there is an infinite amount of indifference curves. We can graph an IC for point D, and an IC for point C.

Since every point on an indifference curve represents equal utility, we can be confident that every point on IC_2 is superior to every point on IC_1 , and every point on IC_1 is superior to every point on IC_0 .

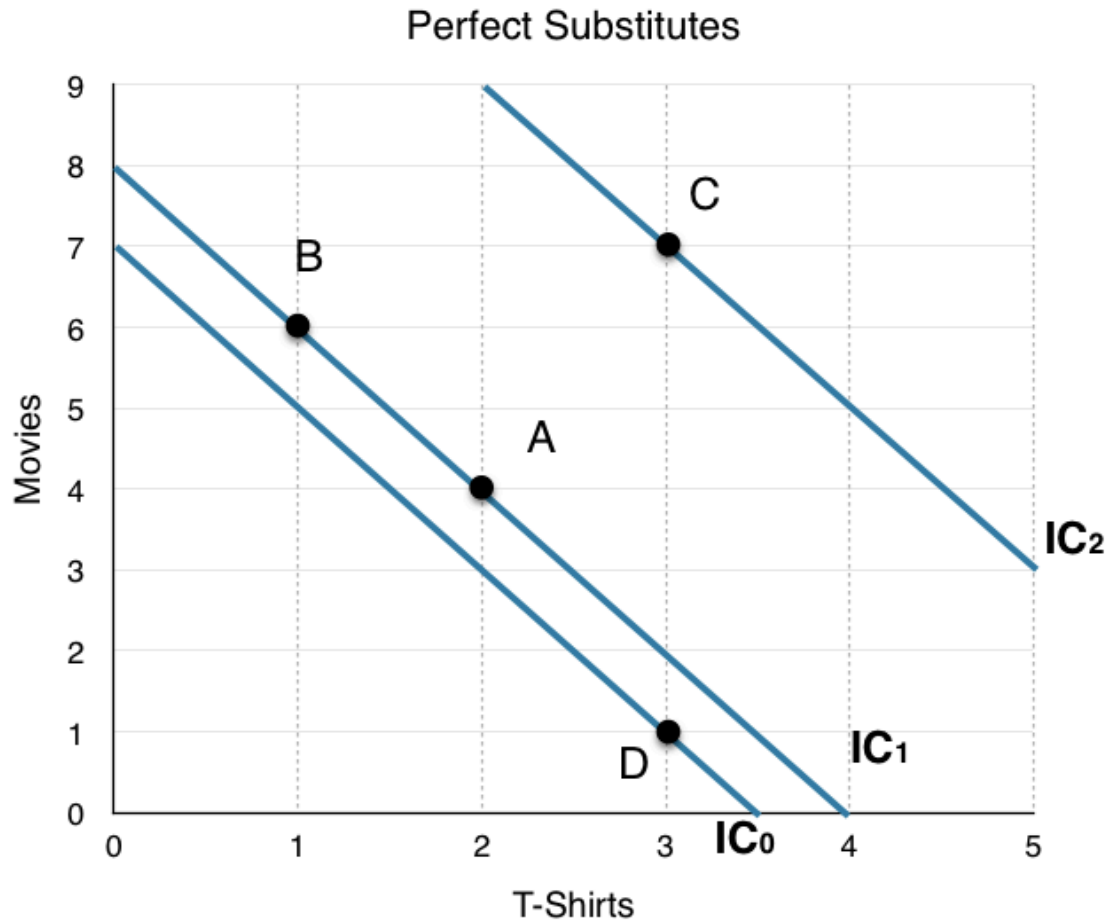


Figure 6.2c

To maximize his utility, José will choose to consume on the highest possible indifference curve that he can afford.

What Does Slope Mean?

The slope of the indifference curve is the **marginal rate of substitution (MRS)**. The MRS is the amount of a good that a consumer is willing to give up for a unit of another good, without any change in utility. In the example above, our MRS is equal to -2. This means that the maximum amount of movies José is willing to give up to get one T-shirt is 2. If he were to give up any more, he would be on a lower indifference curve. Likewise, if he were to give up any less, he would be on a higher indifference curve.

Since indifference curves are downward sloping, they have a negative slope. Because we know the definition of MRS, keeping the negative sign is unnecessary. We can just use the absolute value of the slope to simplify the analysis.

Convex Preferences

Thinking about José's preferences, it may seem odd to simply state that he values T-shirts twice as much as movies. What if José has no T-shirts and 8 movies? In this case, perhaps he would be willing to give up more movies to obtain a T-shirt. This intuition that consumers prefer variety leads us to an indifference curve that is **strictly convex**. At low levels of x , we prefer it more than at high levels of x and vice versa for good y .

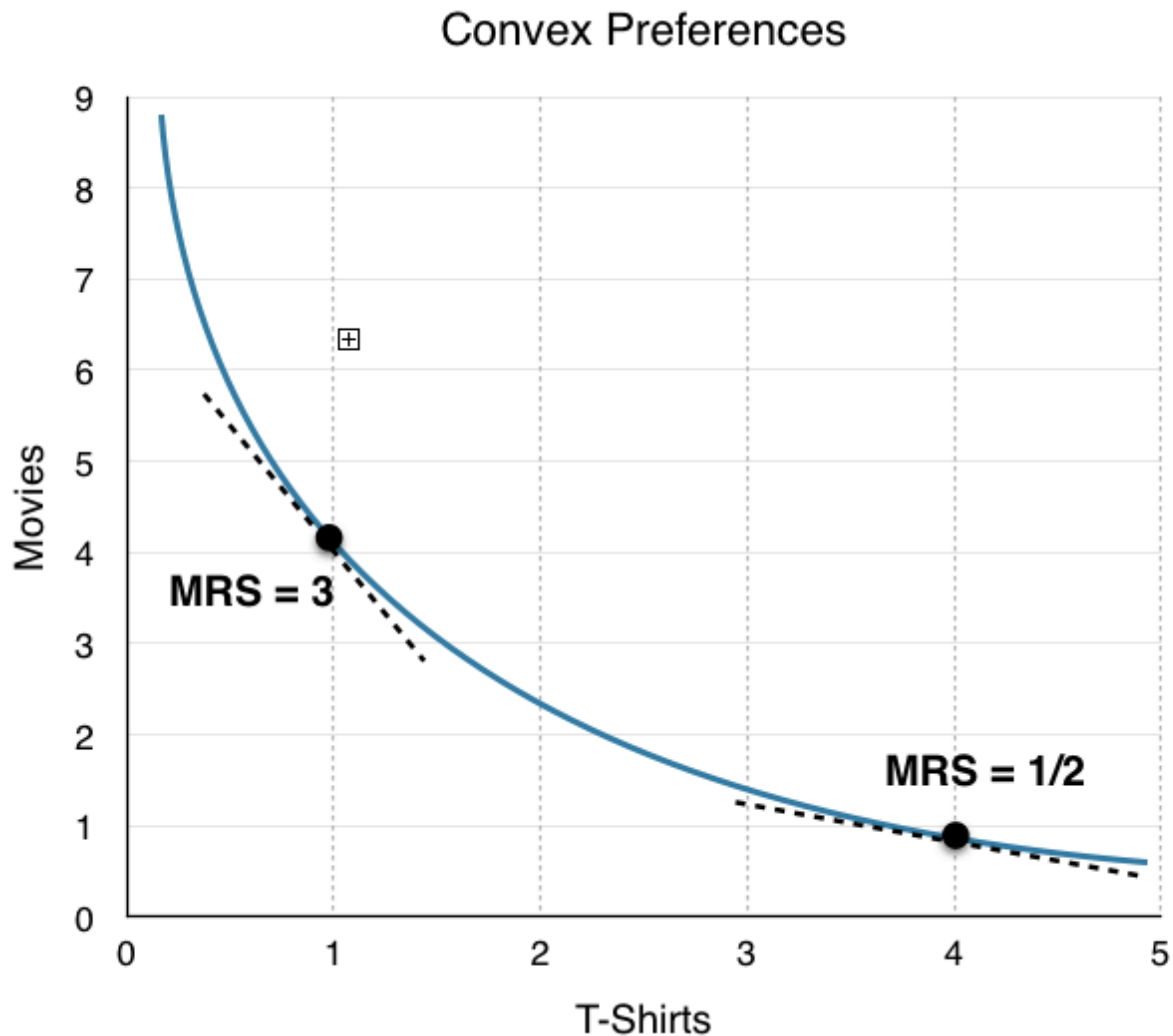


Figure 6.2d

Figure 6.2d shows an example of José's convex preferences. Notice how the MRS changes depending on the consumption. When José has few T-shirts, he is willing to give up more movies in exchange for one more shirt. Conversely, when José has many T-shirts, he is not willing to give up as many movies to obtain one more T-shirt.

Graphically, when José has 1 T-shirt and 4 movies, he is willing to give up to 3 movies in exchange for 1 T-Shirt. ($MRS = 3$)

When José has 4 T-Shirts and 1 Movie he is only willing to give up 1/2 a movie in exchange for 1 T-Shirt. ($MRS = 1/2$)

In this example, José has **diminishing MRS**. In other words, the more of one good he consumes, the smaller the MRS becomes for that good.

Conclusion

We said earlier that José wants to be on the highest indifference curve possible, given his budget. By putting our budget line and indifference curve on the same diagram and maximizing José's utility given his constraints, we can find exactly where he will consume.

Glossary

Diminishing Marginal Rate of Substitution

The more of a good one consumes, the less desirable it becomes. Represented by MRS falling as x increases on an indifference curve.

Indifference Curve

a graph representing all consumption opportunities that a consumer holds as equal value

Marginal Rate of Substitution

the rate at which a consumer is willing to give up one good for another without a change in utility; the slope of the indifference curve

Strictly Convex Preferences

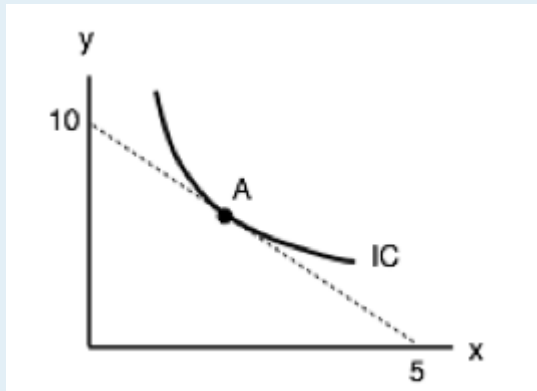
a good becomes less desirable as you acquire more of it, preference for a variety of goods

Utility

economic term referring to the total satisfaction received from consuming a good or service

Exercises 6.2

1. If a consumer (who buys two goods) has strictly convex preferences, then:
 - a) Her indifference curves are relatively steep at low levels of x and relatively flat at high levels of x .
 - b) Her preference is to have some of each of the two goods, rather than all of one and none of the other.
 - c) Her marginal rate of substitution diminishes.
 - d) All of the above are true.
2. The diagram below illustrates the indifference curve of a consumer of goods x and y .



Assuming the current consumption bundle is the point labelled A, which of the following statements is TRUE?

- a) This consumer is just willing to give up 2 units of y for an additional x.
- b) This consumer is just willing to give up 1 unit of y for an additional 2 units of x.
- c) This consumer is just willing to give up $1/2$ a unit of x for an additional y.
- d) Both a) and c) are true.

3. A consumer has \$20 per week to spend on coffee and muffins. The price of a cup of coffee and the price of a muffin both equal \$1 each. If the consumer always likes to consume one muffin for every cup of coffee he drinks, what consumption bundle will maximize his utility?

- a) 20 muffins and no coffee.
- b) 20 coffees and no muffins.
- c) 10 coffees and 10 muffins.
- d) All of the above consumption bundles maximize his utility – he is indifferent among all those options listed.

6.3 Understanding Consumer Theory

Learning Objectives

By the end of this section, you will be able to:

- Understand how the budget line and indifference curve influence a consumers decisions
- Differentiate between the income effect and substitution effect
- Determine whether goods are substitutes/complements and normal/inferior

If we think about the indifference curves in a slightly different way, we see that MRS describes marginal benefit. Since MRS represents the maximum amount of y we are willing to give up in exchange for one unit of x , it also represents how much value our consumer places on x in terms of y .

This means the indifference curve tells us the marginal benefit of good x in terms of good y , and the budget line tells us the marginal cost of good x in terms of good y . As discussed in Topic 1, using marginal analysis, our consumer will continue to purchase more of a good until the marginal benefit is equal to the marginal cost. This means

if $MRS > P_x/P_y$, the consumer will consume more x and less y .

If $MRS < P_x/P_y$, the consumer will consume less x and more y .

If $MRS = P_x/P_y$, the consumer will not change their consumption.

Recall that MRS is the slope of the indifference curve, and P_x/P_y is the slope of the budget line. This means that if the slope of the indifference curve is steeper than that of the budget line, the consumer will consume more x and less y .

Figure 6.3a shows José's budget line and possible indifference curves. As Point A, MRS is greater than P_x/P_y , so José should consume more x and less y to maximize his utility.

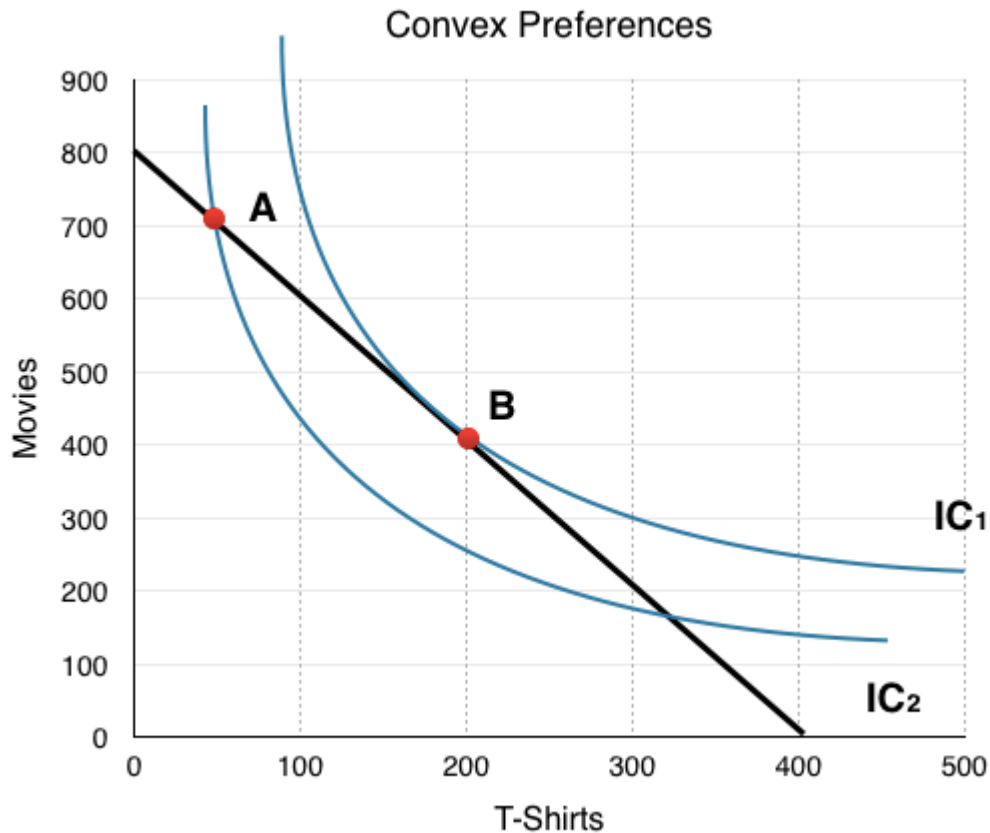


Figure 6.3a

Moving along the budget line (shown in black), we see this action indeed allows José to consume on a higher indifference curve. At point B, $MRS = P_x/P_y$, so this is the utility maximizing point, given José's constraints. Notice that since Point A and Point B are on the same budget line, José could increase utility without a change in expenditures.

In summary, the consumer will consume at the point where the indifference curve and the budget line are **tangent**, meaning the slopes are equal.

When Prices Change

We now have all the pieces to develop our model for consumer theory. In Topic 3, we examined the law of demand, which showed that as the price increased our quantity demanded of the good decreased. Now, let's look at how our consumption choices react to a change in price based on our indifference curve and budget line.

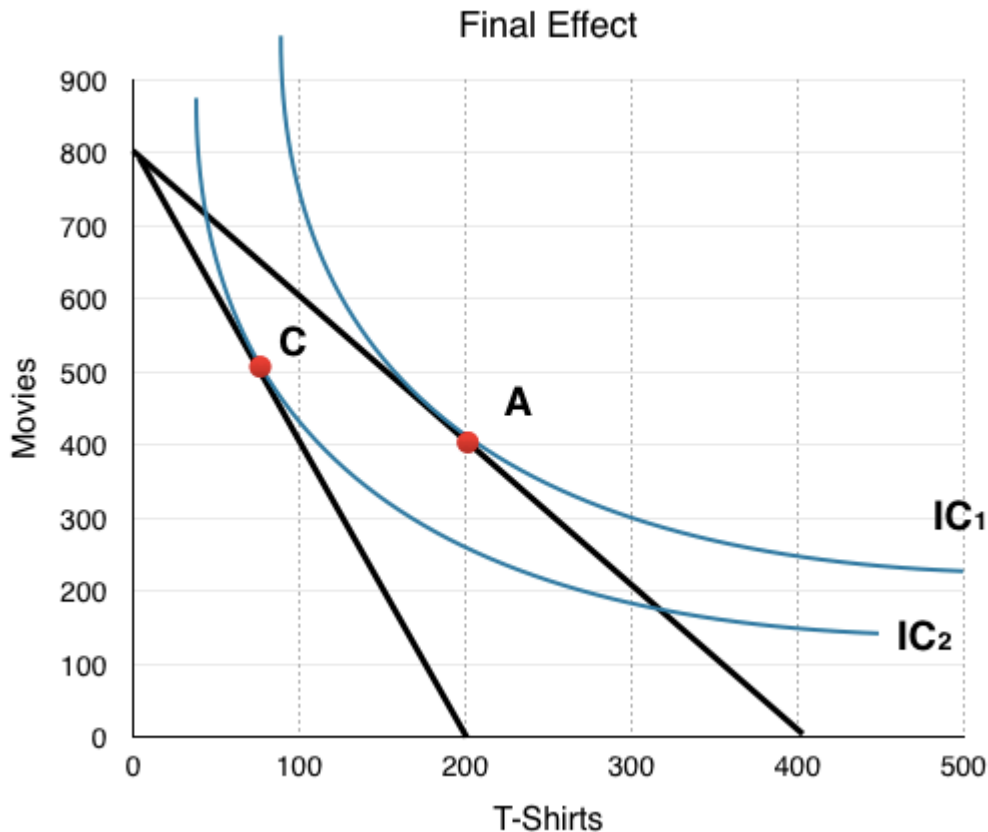


Figure 6.3b

Consider a market with 100 consumers like José, each with budgets of \$56 and preferences as illustrated in Figure 6.3b.

The graph shows the final effect of a price increase on T-shirts. Suppose T-shirts have increased from \$14 to \$28.

The easiest way to graph a price change is to assume José spends all of his money on T-shirts to see how the intercept will change. Following the price increase, he can only purchase 2 T-shirts. (\$56 budget / \$28/T-shirt) Because we are imagining a market with 100 consumers like José, all in all, 200 T-shirts will be bought. The price increase causes the budget line to pivot inwards and changes the price ratio from $P_x/P_y = 2$ to $P_x/P_y = 4$.

Since we know the price of movies has not changed, we know that José can still purchase 8 movies and can show the new graph with our knowledge of these points.

In our example, this causes consumers to change consumption from 200 T-Shirts and 400 Movies (Point A) to around 70 T-Shirts and 500 Movies (Point C). Why is this the case? Can we tell from this graph whether the two goods are compliments or substitutes? Normal or inferior?

To answer these questions, we can decompose the consumer's response into two parts:

1. The substitution effect (SE): isolates the effect of the change in relative prices, by holding well-being constant.

-Draw a BL with the same slope as the new one, but draw it touching the original IC at the point of tangency.

-The movement from the old optimal consumption point to this new tangency point is the SE.

2. The income effect (IE): isolates the effect of the change in purchasing power (well-being), holding prices constant.

-Draw the final BL associated with the price change.

-The movement from the consumption point on the BL drawn in the SE to the optimal point on the final BL is the IE.

Substitution Effect

Breaking up the effects of a price change involves back-tracking from our final effect. To find the substitution effect, we must do a thought experiment and ask “*where would the consumer’s optimal bundle be if they were given back enough money to consume along their original indifference curve?*”

At point C in Figure 6.3b, our current budget of \$56 brought us to a lower IC. To analyze the SE, we must hold well-being constant and return to our original IC. To do so, we must increase each consumers budget by \$23, so we can go back to IC1 at Point B. This is an important step because it shows us how the consumer would respond to the differences in relative prices, holding purchasing power constant. Note the \$23 amount is the exact income increase it would take to bring us back tangent with the original indifference curve.

We stated that the substitution effect is purely due to changes in relative prices. To examine its effect, we must compare the two points along our original IC: our first consumption bundle, Point A, and our new consumption bundle, Point B, which represents how our consumer behaves if they feel no poorer. This means the substitution effect is the change from Point A to Point B.

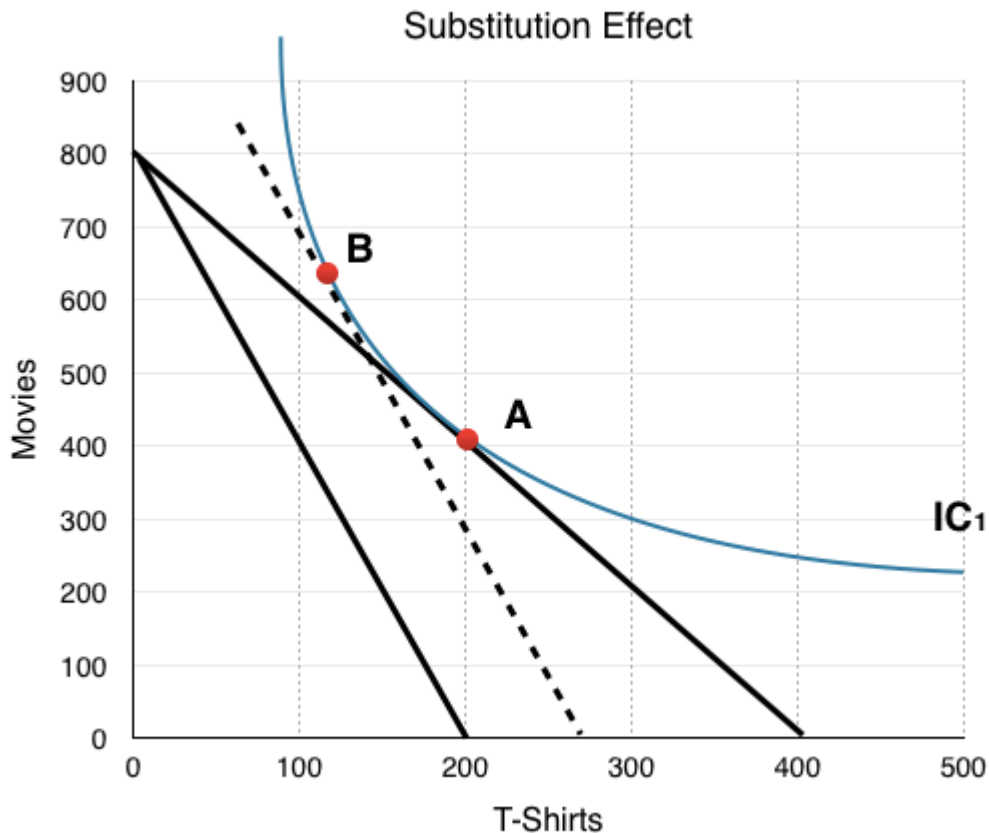


Figure 6.3c

Substitution always has the same effect. People will substitute away from the good which has increased in price because it is relatively more expensive. Since the price ratio is P_x/P_y , when the price of x increases, P_x/P_y will be greater. Whereas before $P_x/P_y = MRS$, now P_x/P_y is $> MRS$. This means the consumer will buy less x and more y until $MRS = P_x/P_y$ again.

Income Effect

To find our SE we had to hypothetically give the consumer some income to bring them back to their original IC. Though this exercise is simply to show the effect of a price change while holding purchasing power constant, in reality, this sometimes actually happens! Take, for example, a government tax rebate. This is often done to ensure that government increasing prices doesn't cause consumers to be any worse off than before.

Price increases reduce a consumer's purchasing power, making them unable to be as happy as they were before. At Point C, although our budget is unchanged at \$56, we are not able to stay on IC_1 without a large increase in income (back to Point B). The income effect is represented as the movement from Point B, where we are able to consume at the same level of utility as before, to Point C, where the decrease in purchasing power is also represented. This isolates the change to a consumer's purchasing power, holding relative prices constant.

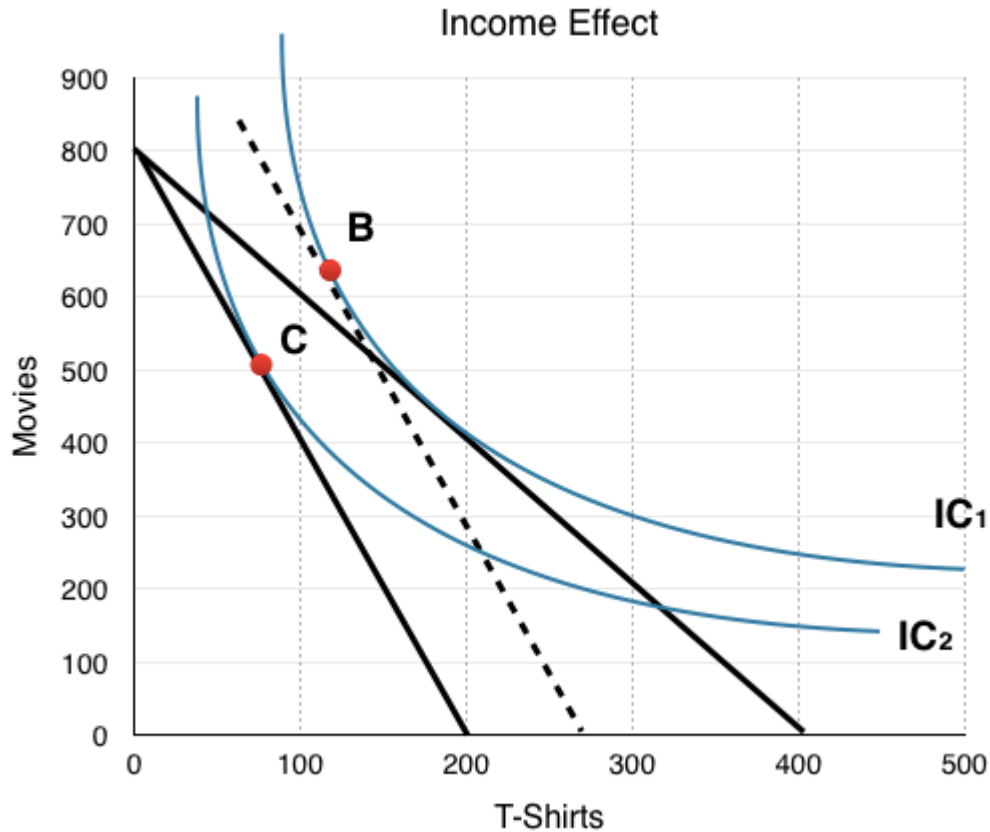


Figure 6.3d

In Figure 6.3d, we see that the individual consumes more T-shirts and movies following an increase in income. In Topic 3, we said that if QD increases when income increases, the good is normal, and if QD decreases when income decreases, it is inferior. This means that both T-shirts and movies are normal goods. This is not always the case. If QD of either good fell after the income increase, it would be inferior.

The Final Effect

To determine the final effect, we need to bring together the income effect and the substitution effect. The SE brought us from Point A to Point B, and the IE from Point B to Point C. We generalize the sum of these effects using X and Y.

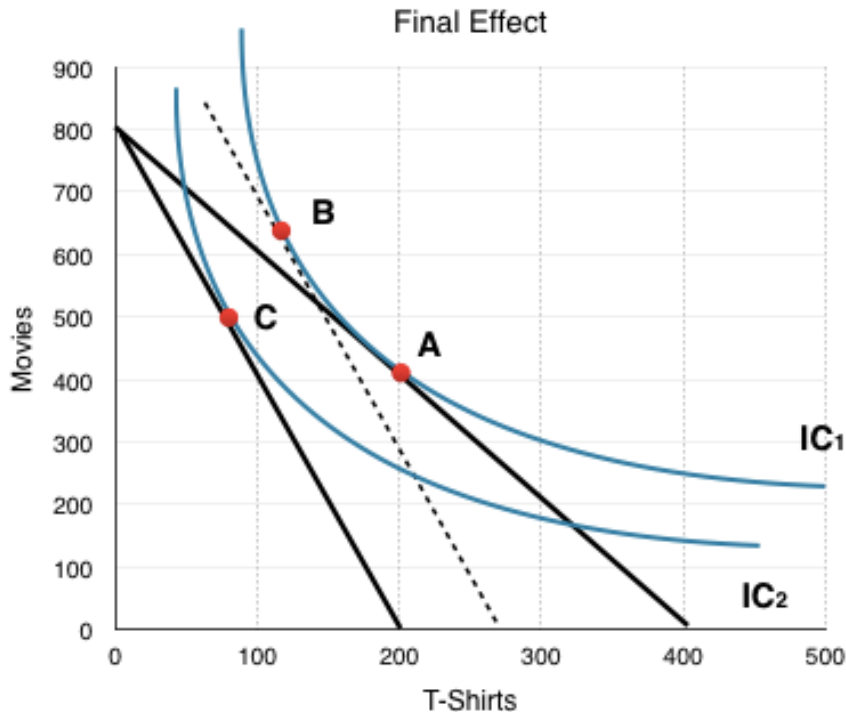


Figure 6.3e

Substitution Effect: x decreases, y increases

Income Effect: x decreases, y decreases

With this information, we know the consumer will consume less x , but we are uncertain whether they will consume more or less y . By looking at the movement from Point A to Point C on the graph, we can see the final effect shows the consumer wanting more y and less x .

This provides us with some useful information. Recall in Topic 3, we determined that if two goods are substitutes, when the price of one increases, the demand for the other will increase; whereas if they are complements, when the price of one increases, demand for the other will decrease. In this case, movies and T-shirts are substitutes.

What We Have Learned

Let's summarize the information we have learned from a simple consumer theory analysis of a price increase. After a price increase in T-shirts from \$14 to \$28:

- Consumers buy more Movies and Less T-Shirts
- Both Movies and T-Shirts are normal goods (income effect)
- Movies and T-Shirts are substitutes (final effect)

We want to be able to determine these three things for every consumer problem you are given.

Substitutes vs Compliments

To determine whether two goods are substitutes or complements, we look at the final effect, not the substitution effect. Why call it the substitution effect then? Because to determine the final effect, we must find whether the income effect or the substitution effect is more powerful.

- When the *substitution effect* overpowers the *income effect*, the goods are **substitutes**. (Figure 6.4f)
- When the *income effect* overpowers the *substitution effect*, the goods are **complements**. (Figure 6.4g)

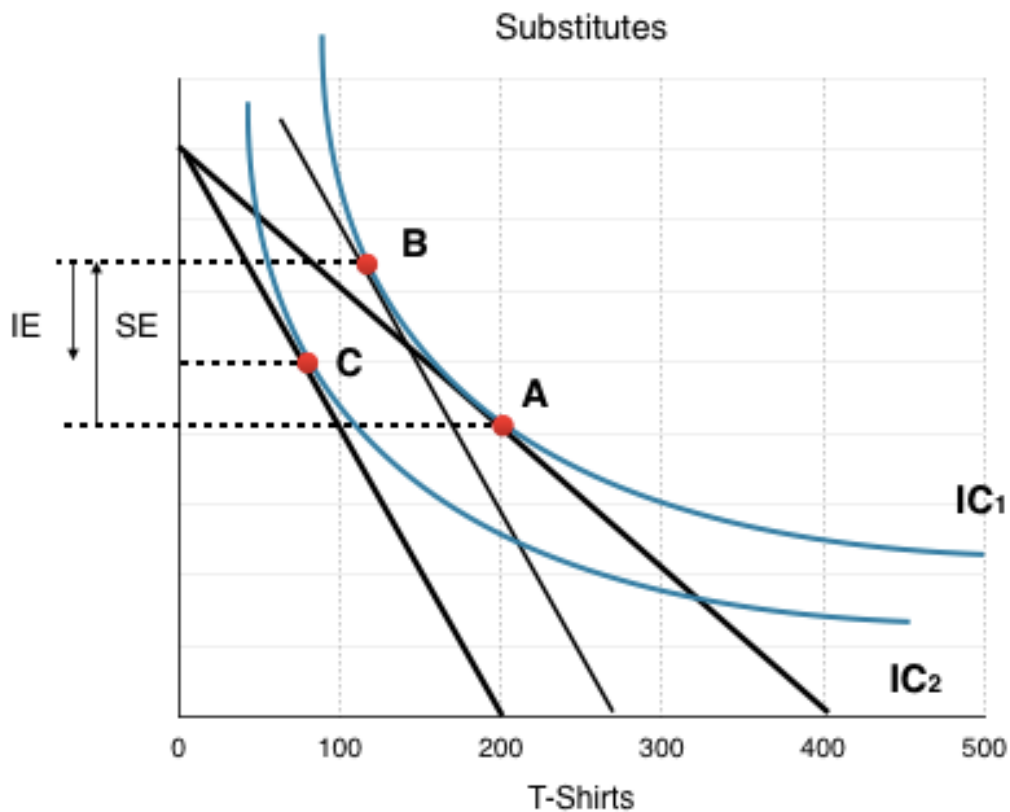


Figure 6.3f

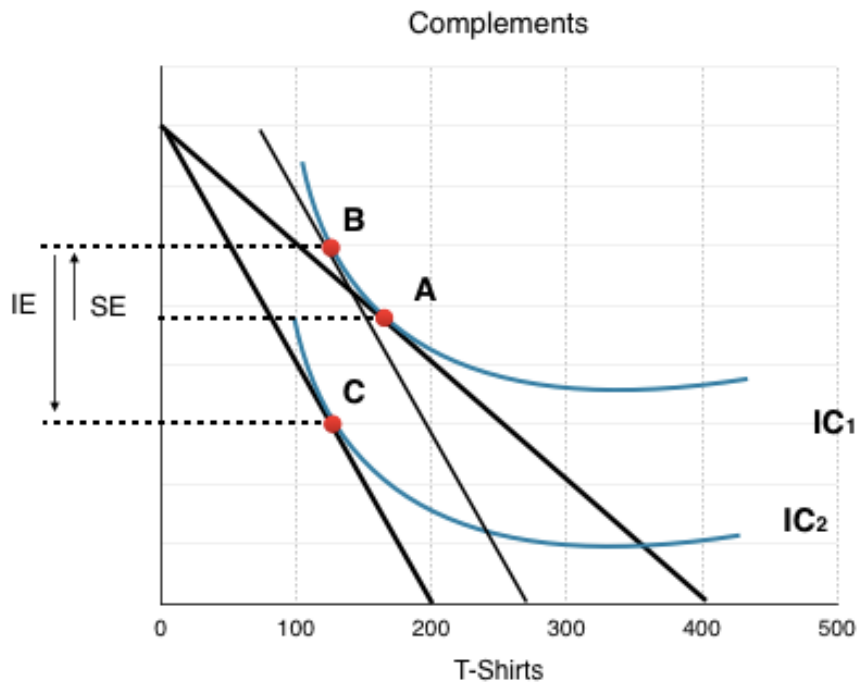


Figure 6.3g

Normal vs Inferior

You should already have a good understanding of how to tell whether a good is normal or inferior based on the income effect. In the example above, we determined that both goods were normal since when we removed the hypothetical income boost, both QD for x and QD for y fell.

Let's look at a case where prices are decreasing. In Figure 6.4h, the IC and BL are shown for a market where the price of x has fallen, pivoting the budget line from BL1 to BL2. In this case, we must take away the hypothetical income to isolate the SE, bringing us from Point A to Point B. The income effect is simply what happens when we reverse our thought experiment, and either remove the hypothetical income, or in this case, give it back.

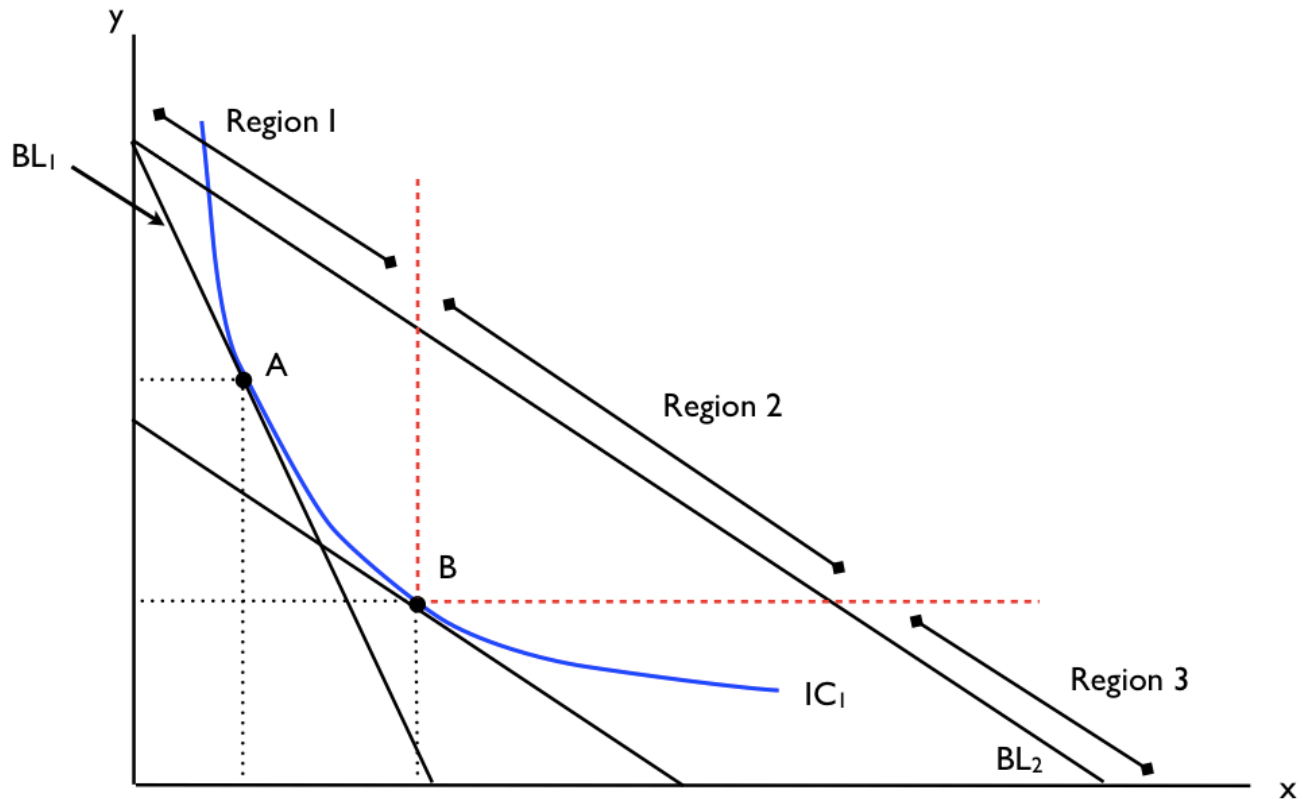


Figure 6.3h

Figure 6.4h presents 3 regions. Whether the goods are inferior or normal will determine where the new IC and Point C end up.

Region 1: Q_D for X decreases, Q_D for Y increases
 Good X is inferior, Good Y is normal

Region 2: Q_D for X increases, Q_D for Y increases
 Good X is normal, Good Y is normal

Region 3: Q_D for X increases, Q_D for Y decreases
 Good X is normal, Good Y is inferior

What if Both Goods Are Inferior?

Both goods cannot be considered inferior in this model, because the model only represents two goods. Whether a good is inferior or normal is relative to other goods. Kraft Dinner is inferior because when I can afford to, I would rather buy Steak. Consider a case where two inferior goods are the only two goods in the market. With your budget, you can either purchase Kraft Dinner or Tomato Soup.

Although both could be considered inferior in the regular market, in our market of two goods, when income increases you will either buy more of both, or more of one – never less of both. Remember that economic models are simplifications of reality, because the more variables you include, the more complicated they become.

Conclusion

Consumer theory helps us see how individual consumers behave in a large market. With the model, we can determine whether goods are substitutes or complements, normal or inferior, and use the final effects to see how consumers respond to price changes. In Topic 3, we showed how movements along the demand curve result from changes in prices. In the next section, we will show how this model can be used to derive demand curves.

Glossary

Income Effect

The effect of a price change on a consumers purchasing powers, impact depends on whether good is normal or inferior

Substitution Effect

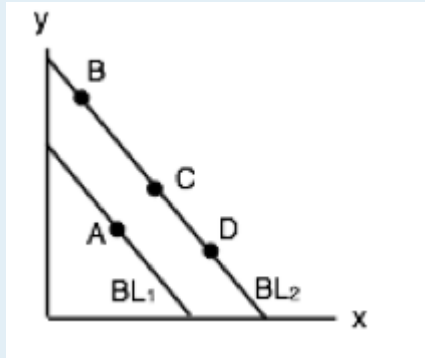
the effect of a price change on the relative price of goods, consumers generally substitute away from goods when prices rise

Tangent

the slope are equal

Exercises 6.3

1. In the diagram below, a consumer maximizes utility by choosing point A, given BL1.



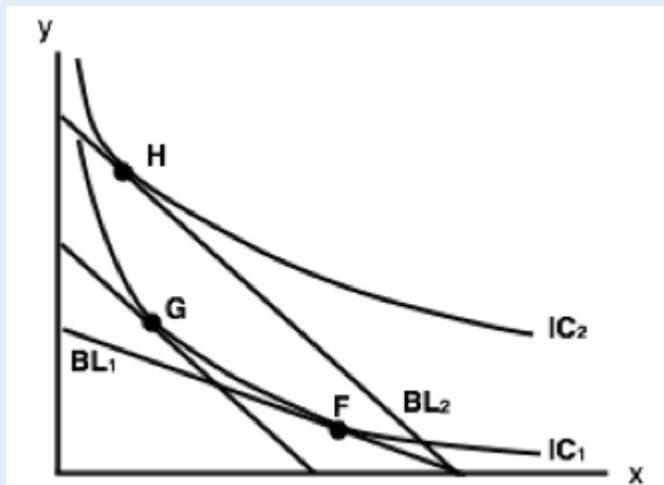
Suppose that both goods x and y are normal and the budget line shifts to BL_2 . Which of the following could be the new optimal consumption choice?

- a) B.
- b) C.
- c) D.
- d) Either B or C or D.

2. Suppose that, given the consumption bundle $x = 10$ and $y = 10$, a consumer's MRS is equal (in absolute value) to 4. The price of x is \$1 and the price of good y is \$0.25, and the bundle $x = 10$ and $y = 10$ uses up all the consumer's income. The consumer's preferences are strictly convex. Which of the following is TRUE?

- a) To maximize utility the consumer should buy more x and less y .
- b) To maximize utility the consumer should buy less x and more y .
- c) The bundle $x = 10$ and $y = 10$ maximizes the consumer's utility.
- d) To maximize utility the consumer should buy more of both x and y .

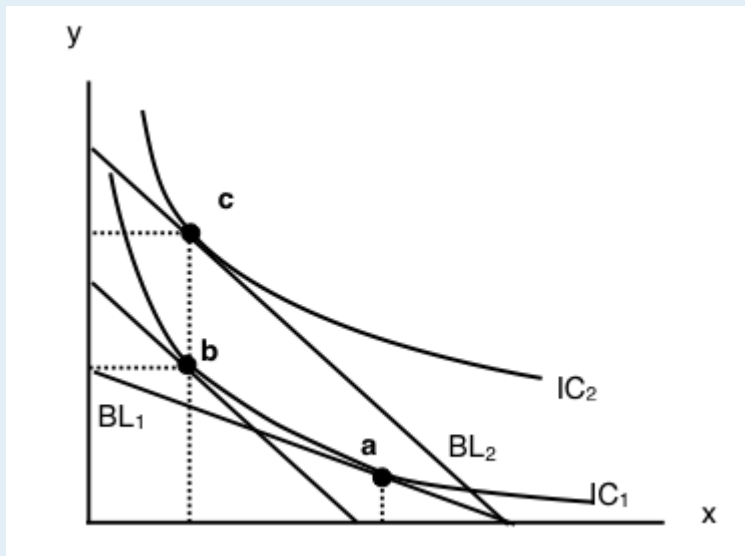
3. The diagram below illustrates the effect of a decrease in the price of good y , for a given consumer.



Which of the following statements is TRUE?

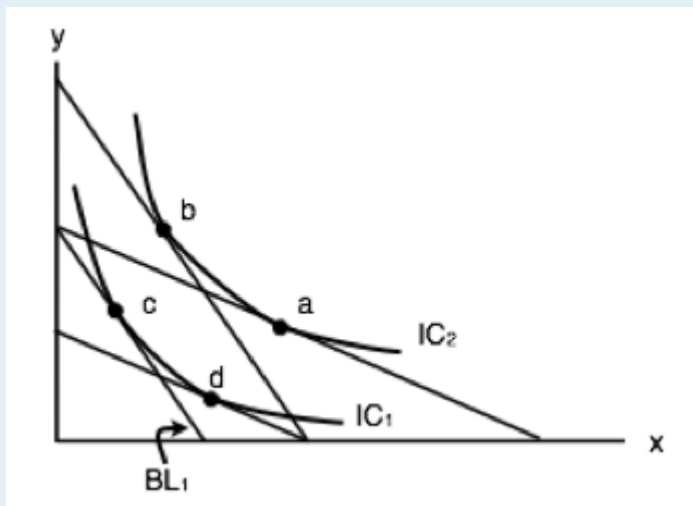
- a) Goods x and y are substitutes.
- b) Goods x and y are complements.
- c) Goods x and y are neither substitutes or complements.
- d) None of the above statements are true.

4. The diagram below illustrates the effect of a decrease in the price of good y, for a given consumer. Which of the following statements is TRUE?



- a) Goods x and y are substitutes.
- b) Goods x and y are complements.
- c) Goods x and y are neither substitutes or complements.
- d) None of the above statements are true.

5. Refer to the indifference curve/budget line diagram below.

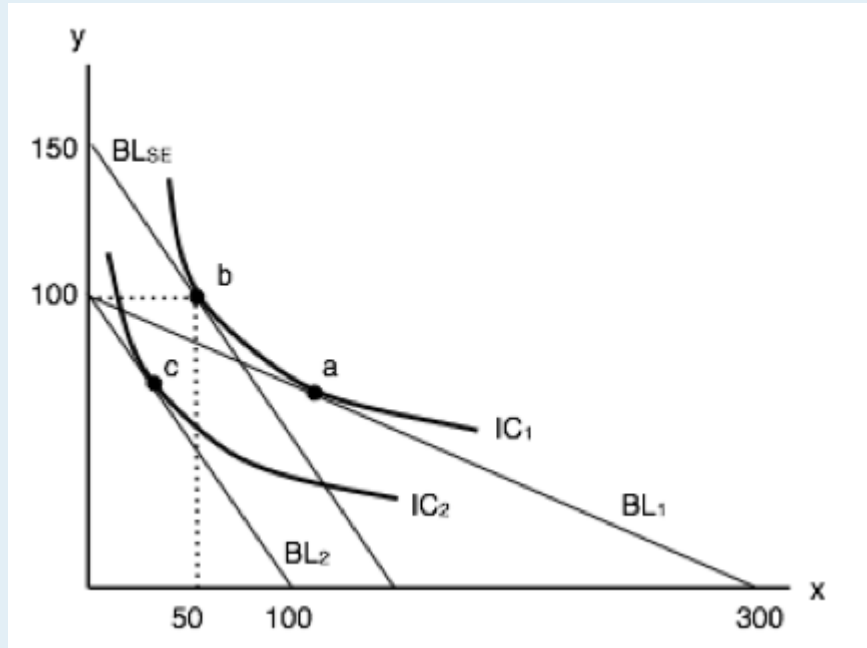


Suppose that a consumer initially faces budget line BL_1 , and thus, by choosing consumption point c, is able to achieve the utility level associated with IC_1 . If p_x decreases, then the substitution effect is the movement from _____ and the income effect is the movement from _____.

- a) a to b; b to c.
- b) b to a; a to d.

- c) c to d; d to a.
- d) d to c; c to b.

6. Refer to the indifference curve/budget line diagram below.

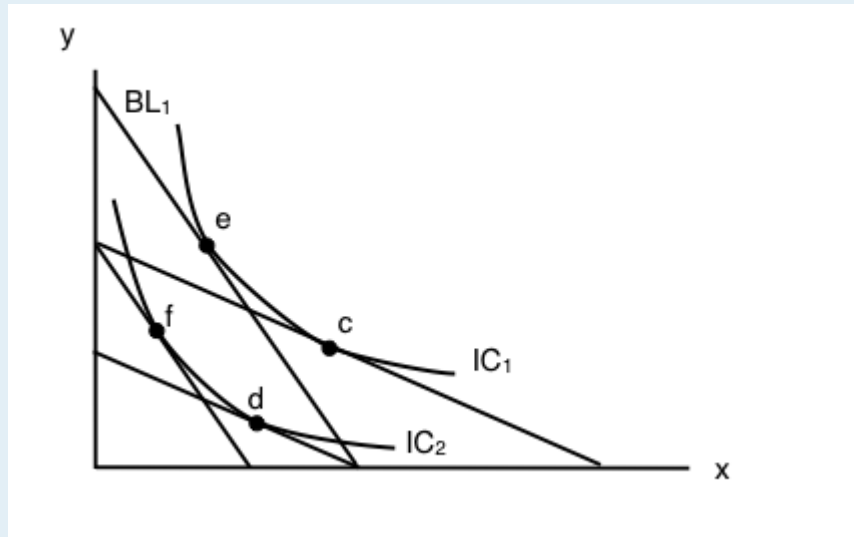


This consumer has \$300 in income and initially faces prices of $p_x = \$1$ and $p_y = \$3$. Given this, she maximized her utility at point a.

If the price of good x rises to \$3, how much additional income would the consumer need, in order to be able to attain her original level of utility given the new prices?

- a) There is insufficient information to determine the additional income needed.
- b) \$450.
- c) \$300.
- d) \$150.

7. Refer to the indifference curve/budget line diagram below.



Suppose that a consumer initially faces budget line BL_1 , and thus is able to achieve the utility level associated with IC_1 . If p_y increases, then the substitution effect is the movement from _____ and the income effect is the movement from _____.

- a) e to d; d to c.
- b) e to c; e to d.
- c) e to c; c to d.
- d) e to f; f to d.

8. Suppose that, given the consumption bundle $x = 10$ and $y = 10$, a consumer's MRS is equal (in absolute value) to 0.4. The price of x is \$0.50 and the price of good y is \$0.75, and the bundle $x = 10$ and $y = 10$ uses up all the consumer's income. The consumer's preferences are strictly convex. Which of the following is TRUE?

- a) To maximize utility the consumer should buy more x and less y .
- b) To maximize utility the consumer should buy less x and more y .
- c) The bundle $x = 10$ and $y = 10$ maximizes the consumer's utility.
- d) There is insufficient information to determine what the consumer should do to maximize utility.

6.4 Building Demand

Learning Objectives

By the end of this section, you will be able to:

- Understand how the demand curve and consumer theory are linked

The Foundations of Demand Curves

Changes in the price of a good cause the budget constraint to shift, and new indifference curves to form. In this way, the logical foundations of demand curves—which show a connection between prices and quantity demanded—are based on the underlying idea of individuals seeking utility. Figure 6.4a shows a budget constraint with a choice between housing and “everything else.” (Putting “everything else” on the vertical axis can be a useful approach in some cases, especially when the focus of the analysis is on one particular good.) The preferred choice on the original budget constraint that provides the highest possible utility is labelled M0. The other three budget constraints represent successively higher prices for housing of P1, P2, and P3. As the budget constraint continues to rotate inwards, the utility-maximizing choices are labelled M1, M2, and M3, and the quantity demanded of housing falls from Q0 to Q1 to Q2 to Q3. Note that indifference curves have not been represented to keep the graph easy to follow. M0, M1, M2, and M3 represent the points where IC0, IC1, IC2, and IC3 are tangent to the changing budget lines.

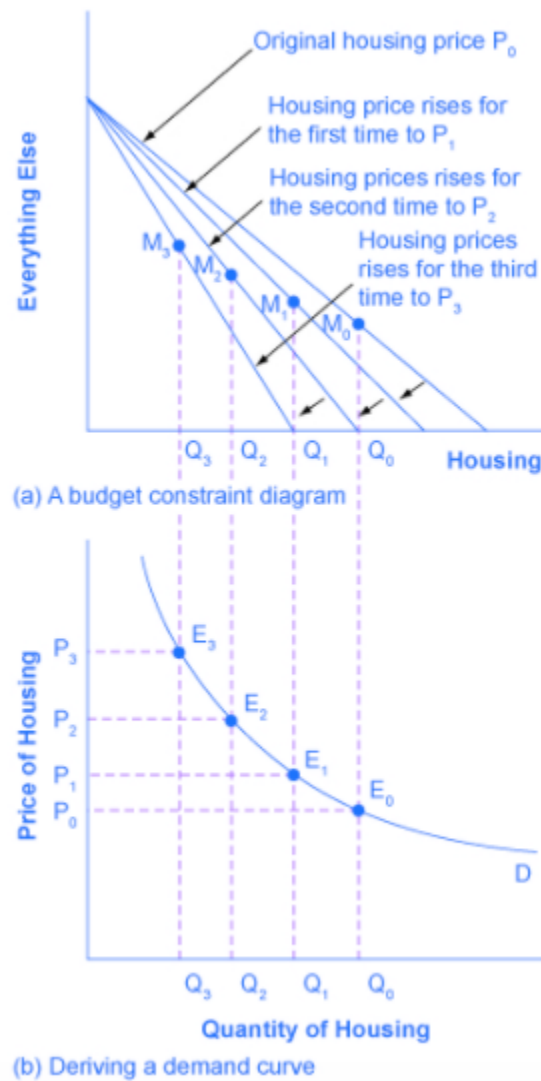


Figure 6.4a

So, as the price of housing rises, the budget constraint shifts to the left, and the quantity consumed of housing falls, *ceteris paribus* (meaning, with all other things being the same). This relationship – the price of housing rising while the quantity of housing demanded falls – is graphed on the demand curve. Indeed, the vertical dashed lines stretching between the top and bottom show that the quantity of housing demanded at each point is the same in both (a) and (b). The shape of a demand curve is ultimately determined by the underlying choices made to maximize utility subject to a budget constraint. While economists may not be able to measure utility, they can certainly measure price and quantity demanded.

Conclusion

In chapter 6, we explored the inner workings of the demand curve and showed how consumers strive to maximize their utility given their budget constraints. This analysis shows us how to determine whether a good is normal or inferior, and whether two goods are substitutes or compliments. Next, we will examine the back-end of the supply curve with an in-depth analysis of producer theory.

Case Study - The Liberal Gas Tax



Canadian Prime Minister Justin Trudeau has announced that a minimum carbon tax will be imposed on the provinces. (Credit: Alex Guibord/ Flickr/ CC BY-ND 2.0)

In October of 2016, Justin Trudeau made an announcement that Saskatchewan Premier Brad Wall called a betrayal. Trudeau told premiers to adopt a carbon tax or cap-and-trade plan or Ottawa will impose its own levy – a minimum of \$50 a tonne by 2022 – and return the revenue the provinces. The problem was not so much the policy, but that it signals Trudeau's determination to impose federal control in jurisdictions previously under the control of the provinces.

Although federal-provincial relations were strained, the policy is moving forward. In this case study, we will explore the impacts of this policy from a consumer theory perspective.

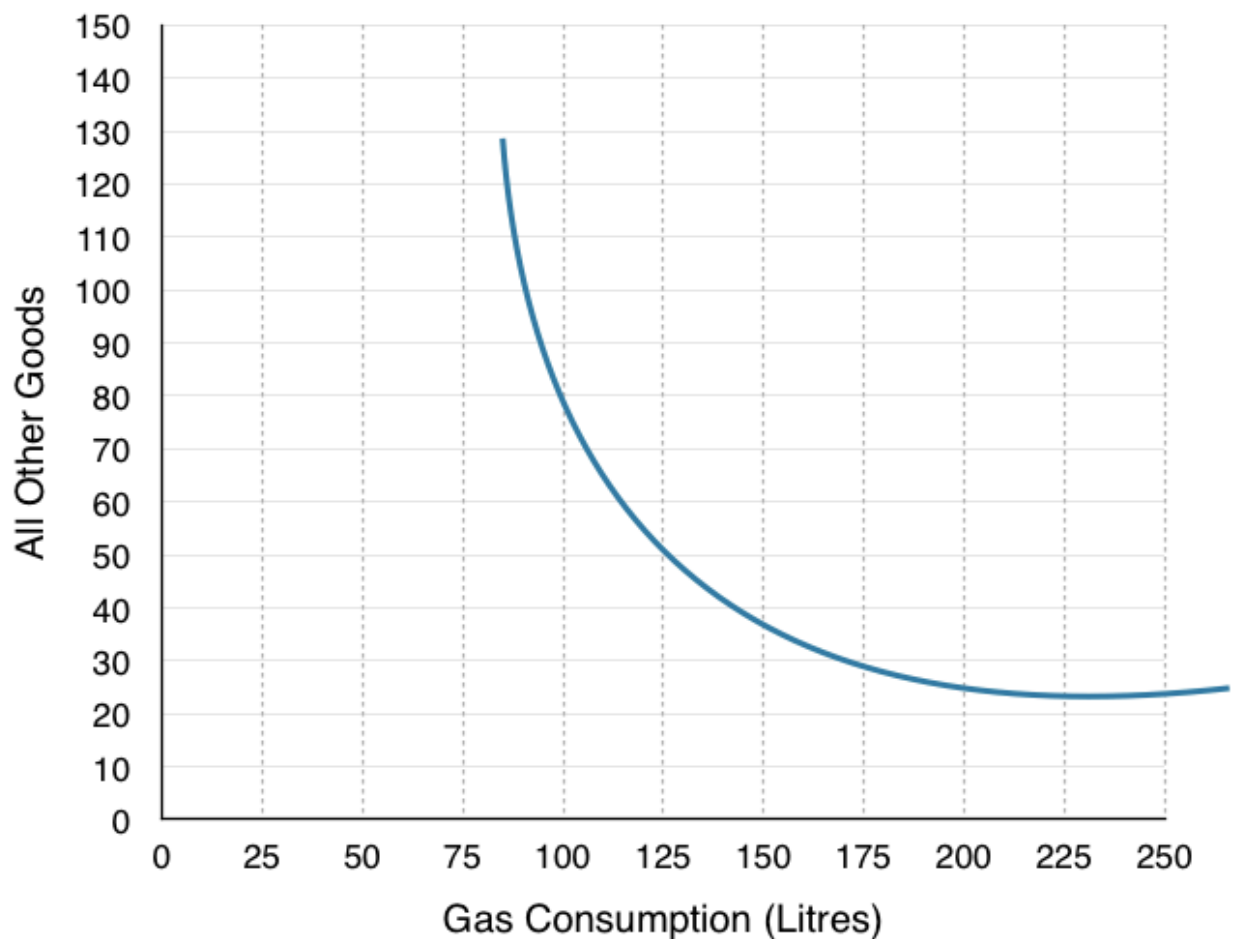
The specific policy that was announced was as follows: the floor price will start at \$10 a tonne in 2018, and go up by \$10 a year for the next four years. Provinces with a pre-existing policy must make up the difference. It is estimated that a \$50 carbon tax would drive up pump prices by 11 cents a litre.



Read more about the Liberal Carbon Tax plan

Assume a household's budget is \$180, that the price of gas is \$0.90 and that the price of all other goods is \$1.38.

1. Draw the household's budget line on the diagram below. If they were to buy only one good or the other, how many total L of gas could they buy? How many of all other goods?

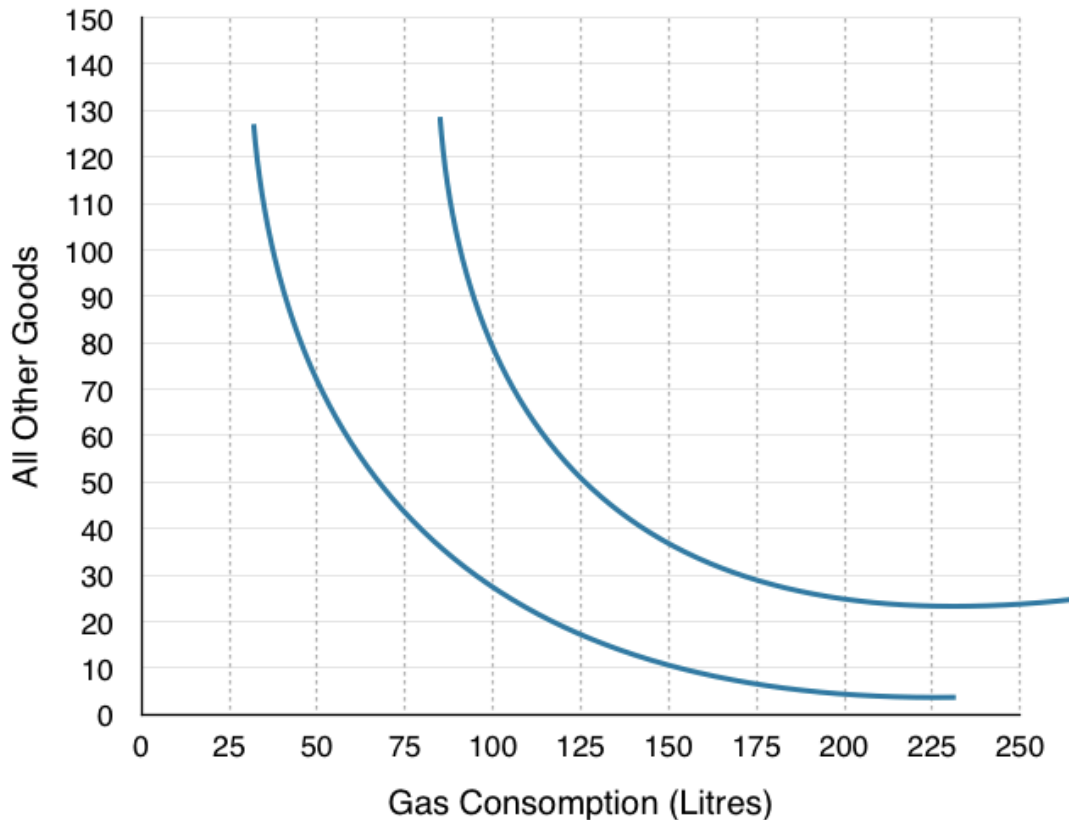


2. Indicate where the household will consume. How many litres of gas? How many of all other goods? Label this Point A.

3. Assume the government was to tax gas consumption by \$0.11, draw the new budget line on the graph above.

You should notice that the \$0.11 increase causes a very minor shift in the budget line, which would make the rest of the problem rather difficult. In order to consider the effects of the tax let's pretend the province has decided to tax carbon by doubling the price.

4. Redraw the households original budget line on the diagram below, and draw a new budget line where the price of gas has doubled.



5. Indicate where the household will consume. How many litres of gas? How many of all other goods? Label this Point B.

6. Is the household better off or worse off as a result of the tax? How do you know?

In Topic 5 we explored how government intervention can be useful to solve externalities, but we also know that a tax does not represent a Pareto improvement for all parties. In this case, many consumers are worse off as the policy brings them to a lower indifference curve. In a potential Pareto improvement, we have the necessary gains to compensate the losers, and in the Liberal policy, they give all the tax revenue back to the provinces to help correct household losses. If the province wanted, they could use that money to compensate the losers.



Not everyone gains from a gas tax. Although it may be a potential parato improvement, the government must consider the losers from the policy. (Credit: qian/ Flickr/ CC BY-NC-SA 2.0)

- 7. How much money does the government collect from each household from the gas tax?**
- 8. If the government compensates each household until they are indifferent to the gas tax, where will the households consume? Label this Point C. Does this still reduce pollution?**
- 9. How much money would the government have to give to each household to make them indifferent about the tax?**
- 10. Indicate the Income Effect, the Substitution Effect and the Final Effect of the tax (without compensation) with reference to the 3 points (A, B & C)**
- 11. How could this policy represent a potential Pareto improvement if the revenue the government receives is not enough to compensate the households?**

Notice that this analysis does not pass judgement on whether the government is doing too much or not enough for the environment. As an economist, you can evaluate policy to determine whether they are the best method to achieving a certain objective, without making comment on the objective.

In this case study we have shown how microeconomic concepts of environmental policy and consumer theory can be used to understand current events in the news. Do you have a story you think would make a good case study? Contact economics103@uvic.ca to propose your story.

Solutions: Case Study - The Liberal Gas Tax

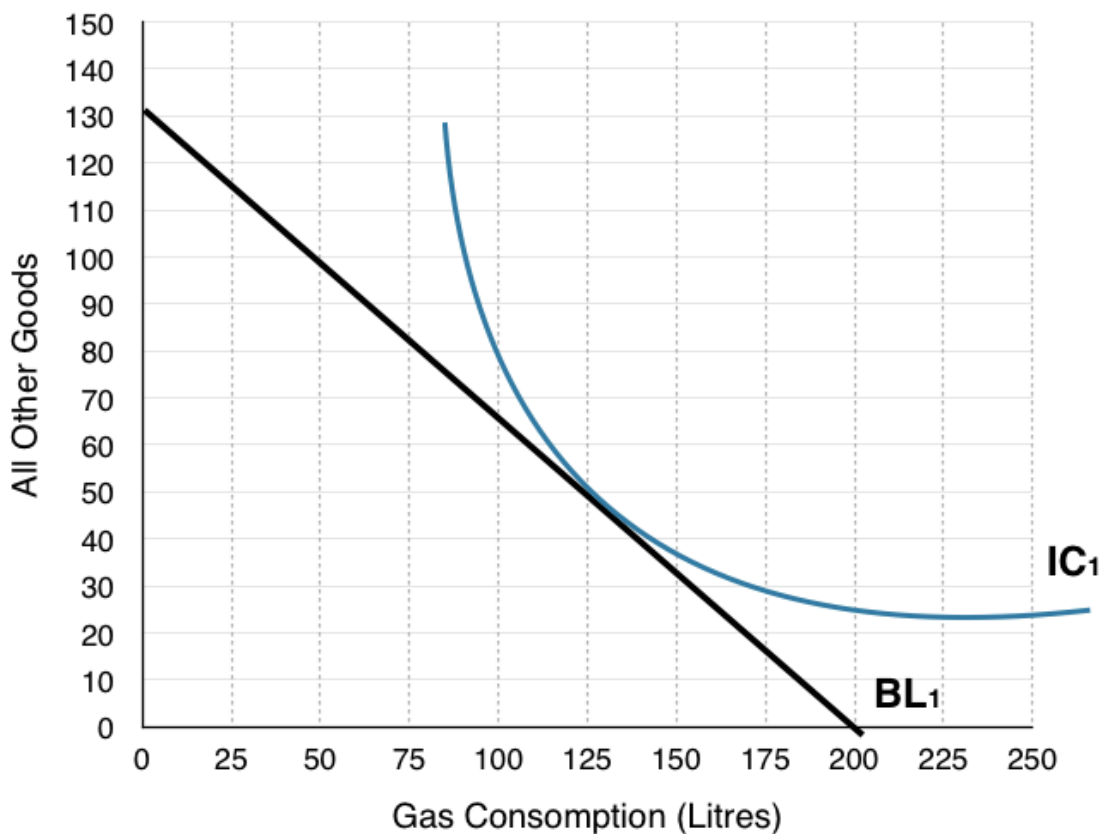
1. Draw the household's budget line on the diagram below. If they were to buy only one good or the other, how many total L of gas could they buy? How many of all other goods?

In order to draw the budget line the best method is to find how many of each good the household could buy if they purchased only one good. In this case the household has a budget of \$180, the price of gas is \$0.90 and the price of all other goods is \$1.38.

Purchase only gas: $\$180/\$0.90 = 200$. This is our X-intercept.

Purchase only other goods: $\$180/\$1.38 = 130$. This is our Y-intercept.

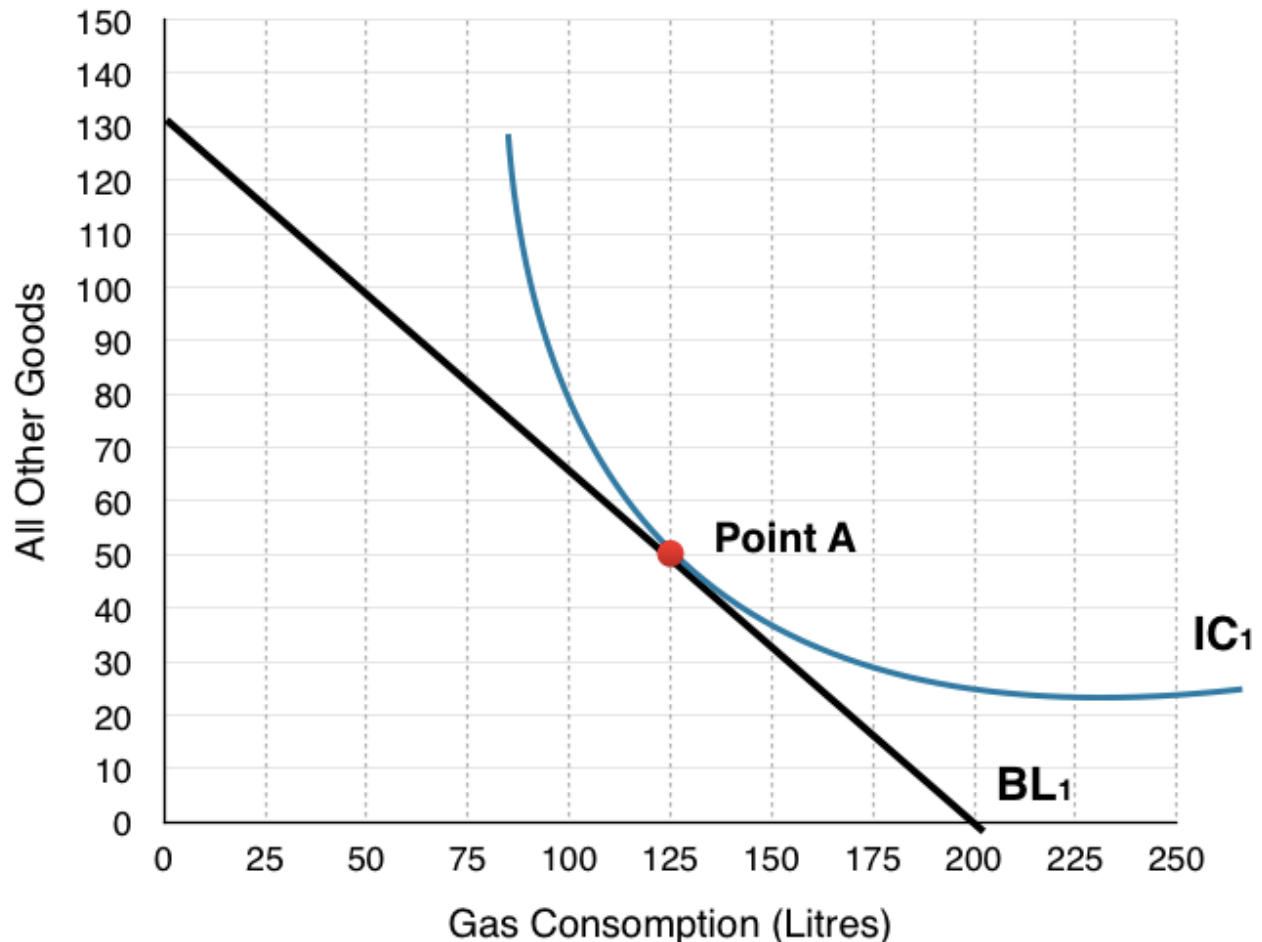
Plotting the intercept and connecting the dots:



2. Indicate where the household will consume. How many litres of gas? How many of all other goods? Label this Point A.

The place where the household will consume is where the IC is tangent to the budget line, or where $MRS = P_x/P_y$. At this point the benefits of an extra litre of gas are equal to the costs, so the household cannot gain from any change in consumption.

On the graph below, we see households consume at Point A, consuming 125L of gas and 50 Other Goods.



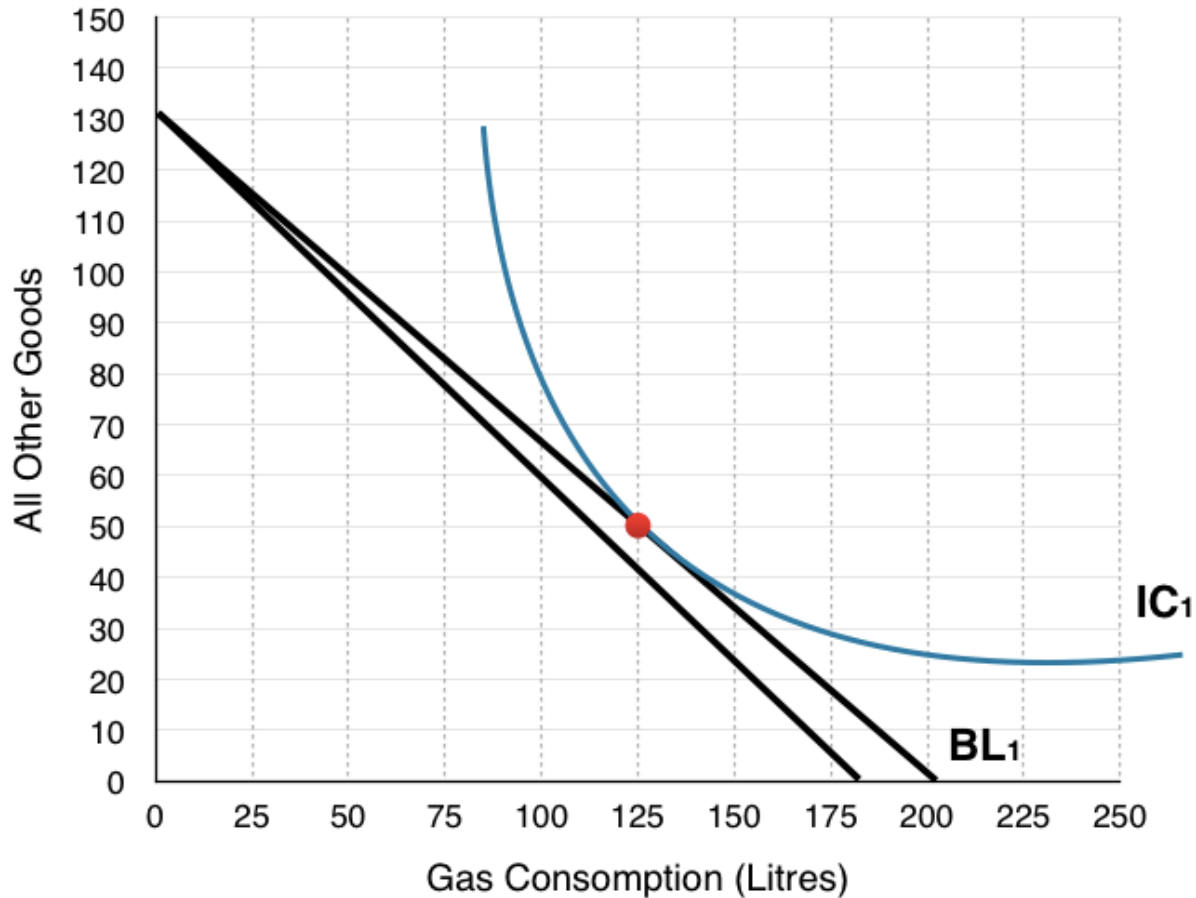
3. Assume the government was to tax gas consumption by \$0.11, draw the new budget line on the graph above.

Again to draw the budget line the best method is to find how many of each good the household could buy if they purchased only one good. In this case the only thing that has changed is our price of gas has increased from \$0.90 to \$1.01.

Purchase only gas: $\$180/\$1.01 = 178$. This is our X-intercept.

Purchase only other goods: $\$180/\$1.38 = 130$. This is our Y-intercept.

Plotting the intercept and connecting the dots:



Notice the new budget line has been left unlabelled as it will not be used for the rest of the analysis. You can see now the reason we move forward with the assumption that price has doubled, as drawing new indifference curves and budget shifts on this diagram becomes very difficult!

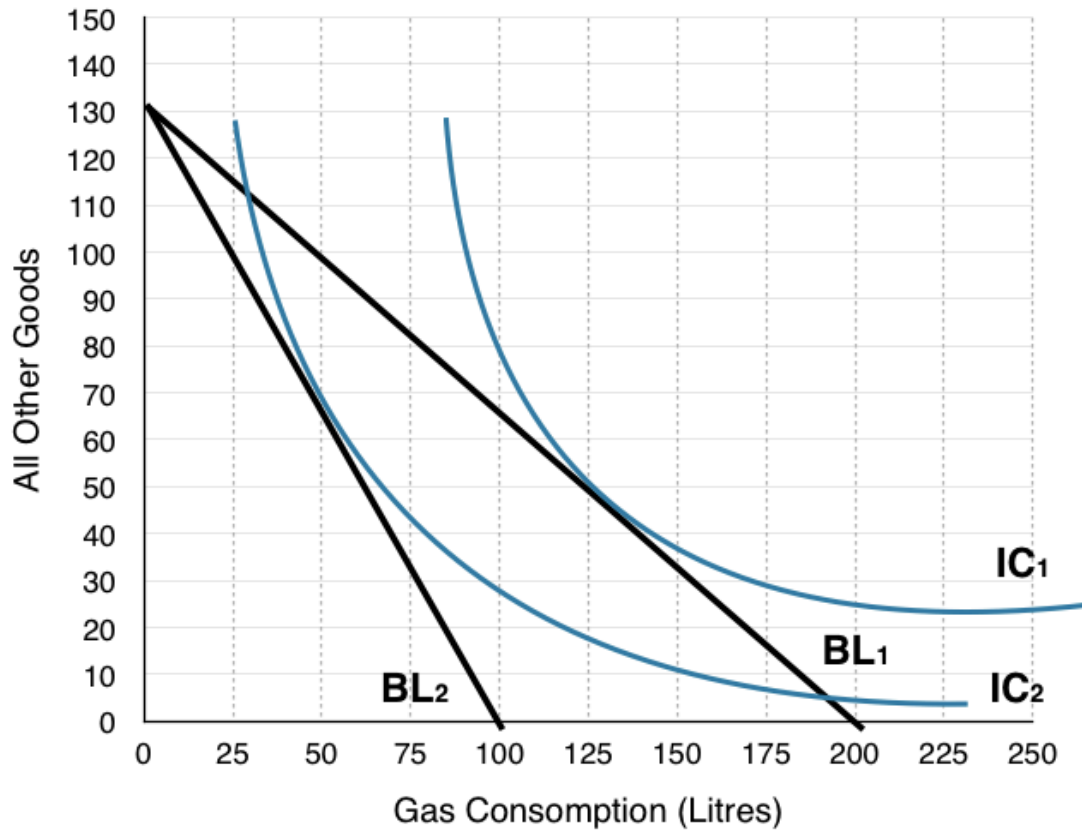
4. Redraw the households original budget line on the diagram below, and draw a new budget line where the price of gas has doubled.

Using the same steps to draw the budget line, except now the price of gas has doubled from \$0.90 to \$1.80.

Purchase only gas: $\$180/\$1.80 = 100$. This is our X-intercept.

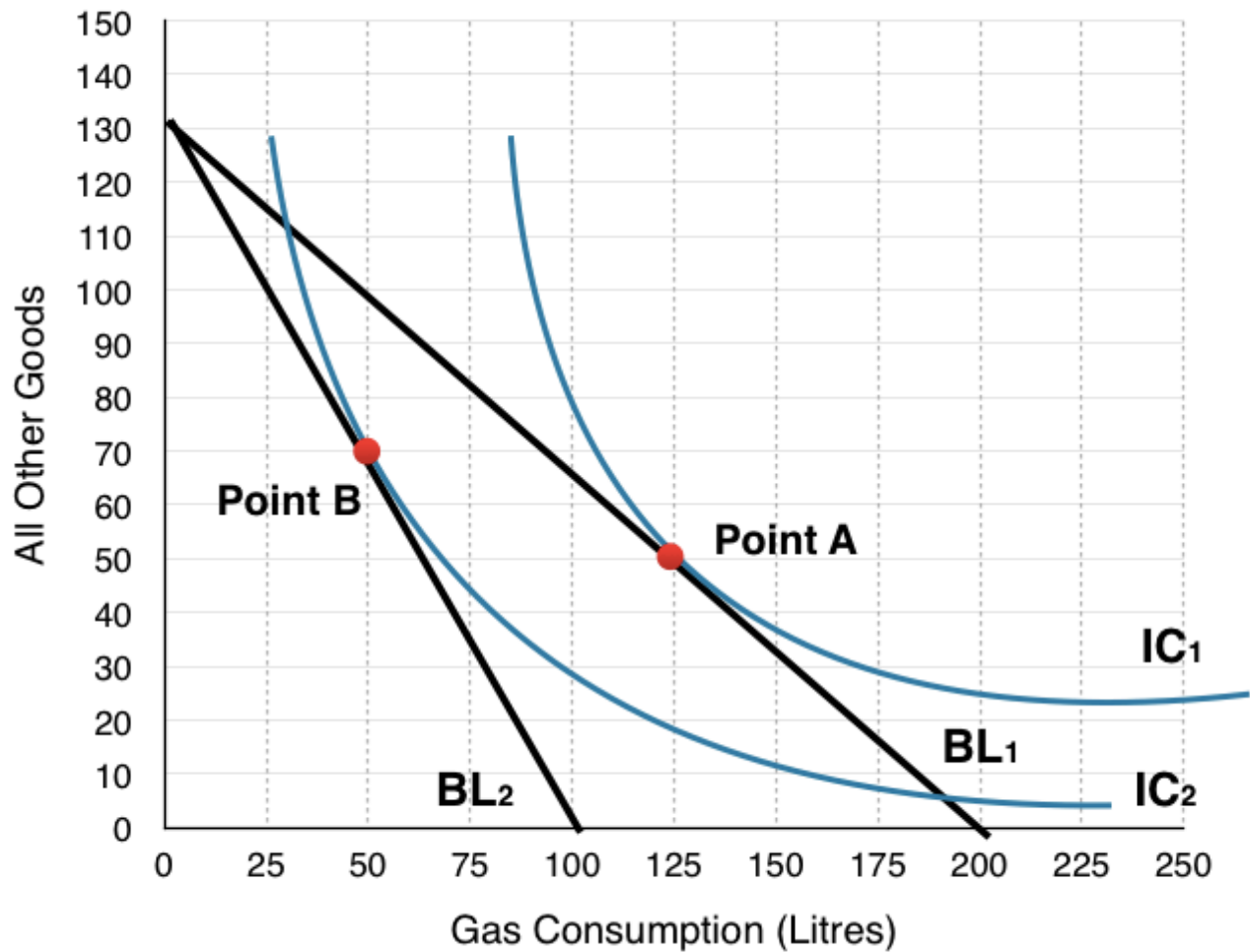
Purchase only other goods: $\$180/\$1.38 = 130$. This is our Y-intercept.

Plotting the intercept and connecting the dots:



5. Indicate where the household will consume. How many litres of gas? How many of all other goods? Label this Point B.

On the graph below, households consume where BL₂ is tangent to IC₂ at Point B, consuming 50L of gas and 70 Other Goods.



6. Is the household better off or worse off as a result of the tax? How do you know?

We can see that the household is worse off as a result of the tax since they are consuming on a lower indifference curve. Remember the household views every point along an indifference curve as equal, so operating at a point on a lower indifference curve means you are worse off.

7. How much money does the government collect from each household from the gas tax?

The government collects \$0.90 for every L of gas that is consumed, in question 5 we identified that households consume 50L after the tax. This means that the government collects $\$0.90 \times 50 = \45 from each household.

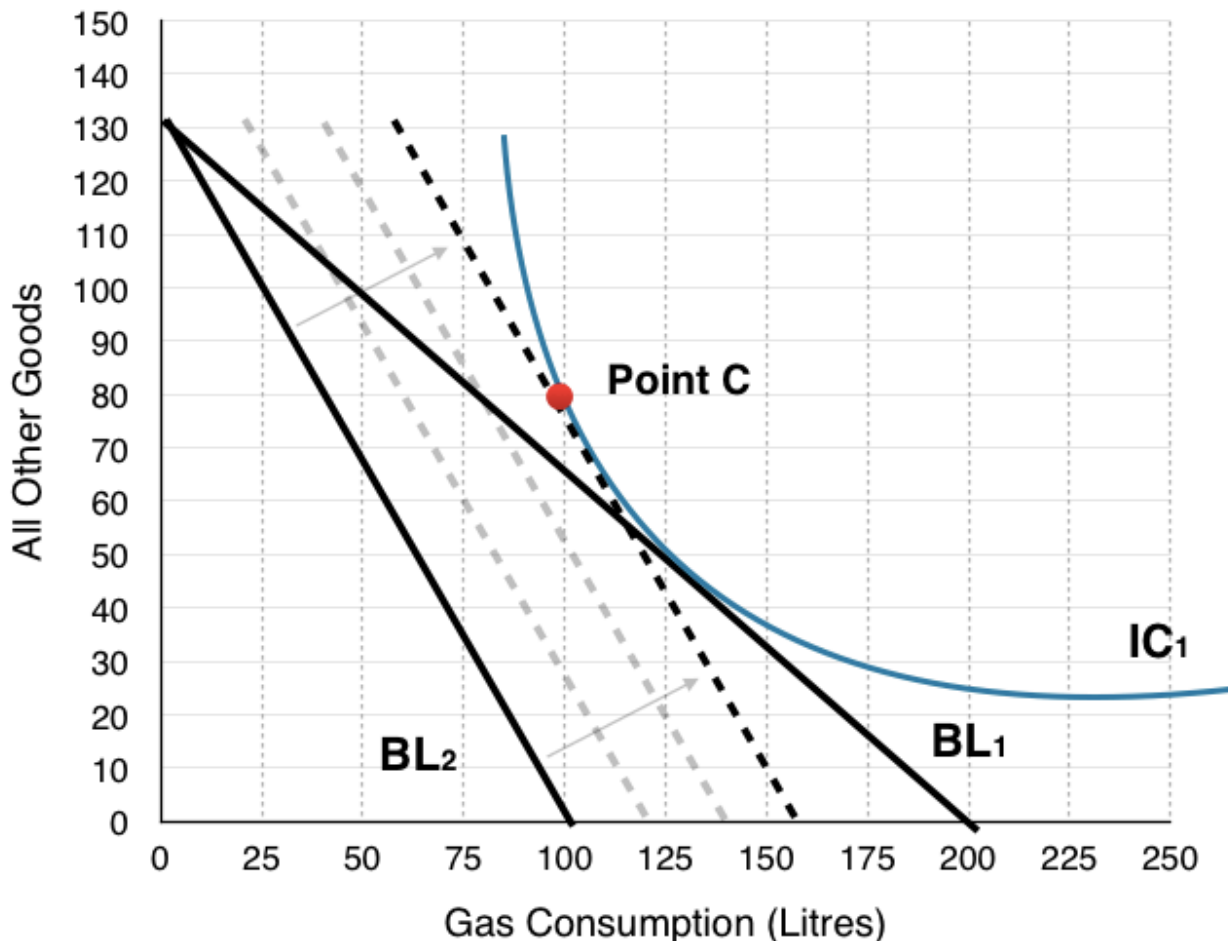
8. If the government compensates each household until they are indifferent to the gas tax, where will the households consume? Label this Point C.

In order to find this information we have to shift the new budget line (BL₂) until it is tangent to the original indifference curve. In question 6 we emphasized that if households are on a lower indifference curve they are worse off, and that the consumer is indifferent between points on its indifference curve. In the figure below we can see BL₂ gradually shift out as the government gives more and more to the

household. This continues until the budget line + compensation is tangent to the original indifference curve at Point C.

At Point C, households consume 100L of gas and 80 Other Goods.

What is very important to note here is that even though the government compensated the households for their losses, they have still reduced consumption of gas by 25L. This shows that the policy can be effective at reducing pollution without making households worse off.



9. How much money would the government have to give to each household to make them indifferent about the tax?

To find out how much the government must give each household, the best method is to find how much money the household needs to afford Point C. If other goods cost \$1.38 and gas costs \$1.80, then we can simply multiply the consumption bundle by the prices

$$1.38 * 80 + 100 * 1.80 = \$290.50.$$

Since the household still only has a budget of \$180, the government must compensate the difference (\$290.50 – \$180). This means that the government must give each household \$110.50 for them to remain indifferent about the gas tax.

10. Indicate the Income Effect, the Substitution Effect and the Final Effect of the tax (without compensation) with reference to the 3 points (A, B & C). What is the final effect of the entire policy (with compensation)?

In Topic 6 we have mentioned numerous times that to isolate the income effect and substitution effect we have to give back the ‘hypothetical’ income to see how a household would behave if they had no reduction in purchasing power. In this exercise (question 9) we calculated how much this income would have to be, so that the government could remove the effects. This means that the final effect of the tax + compensation (Point A to Point C) is just the **substitution effect** and that the government’s compensation is the **income effect**. In summary:

Just Tax

Substitution Effect: Point A to Point C

Income Effect: Point C to Point B

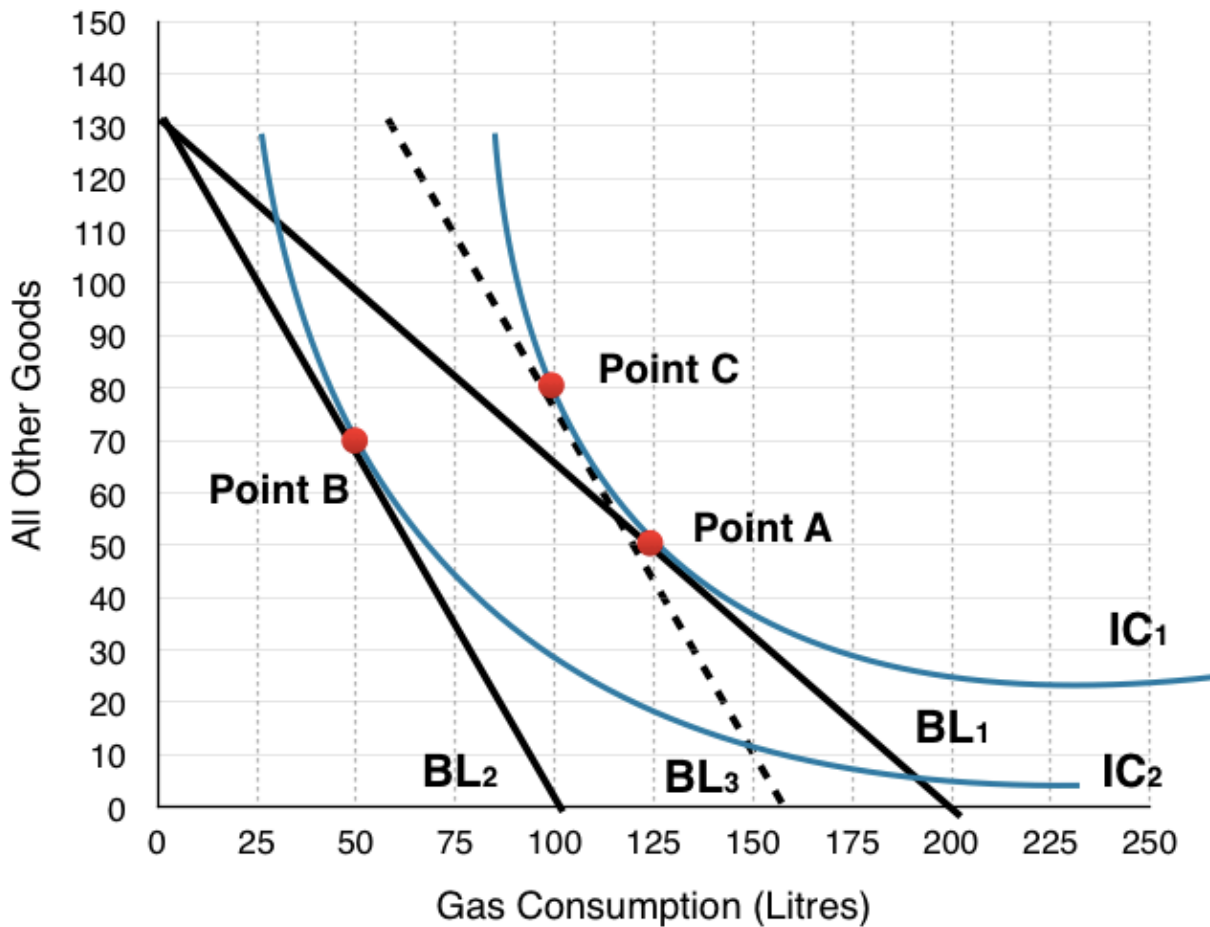
Final Effect: **Point A to Point B**

Tax + Compensation

Substitution Effect: Point A to Point C

Income Effect: N/A

Final Effect: **Point A to Point C**



11. How could this policy represent a potential Pareto improvement if the revenue the government receives is not enough to compensate the households?

We can notice that the government collects \$45 but gives out \$110.50 from this policy, making them lose \$65.60. First off we can recognize that this tax in no way helps the firms, in fact it will make them worse off as less consumers buy gas. How then can this policy ever increase social surplus?

If we remember from Topic 5, households, firms, and government are not the only players we need to consider, but also the marginal external cost of actions. In this case the government may be losing money, but they are reducing the amount of pollution and benefiting the environment. Without information about the value we place on this reduction of pollution, we cannot determine whether this policy is increasing social surplus.

Topic 6 Solutions

Solutions to Exercises 6.1

1. **C**
2. **B**

Solutions to Exercises 6.2

1. **D**
2. **D**
3. **C**

Solutions to Exercises 6.3

1. **B**
2. **C**
3. **A**
4. **A**
5. **C**
6. **D**
7. **C**
8. **B**

Topic 6 References

McCarthy, Shawn and Daniel LeBlanc. The Globe and Mail. “Liberal Government’s Carbon Tax Plan Provokes Anger from Provinces.” October 3, 2016. <http://www.theglobeandmail.com/news/politics/liberals-to-set-carbon-price-at-10-a-tonne-in-2018-rising-to-50-by-2022/article32206937/>

UNESCO Institute for Statistics. “Statistics in Brief / Profiles” Accessed August 2013. http://stats.uis.unesco.org/unesco/TableViewer/document.aspx?ReportId=121&IF_Language=en&BR_Country=5580.

U.S. Bureau of Labor Statistics. 2015. “Consumer Expenditures in 2013.” Accessed March 11, 2015. <http://www.bls.gov/cex/csxann13.pdf>.

Topic 5: Externalities

Introduction to Environmental Protection and Negative Externalities



Figure 1. *Environmental Debate.* Across the country, countless people have protested, even risking arrest, against the Keystone XL Pipeline. (Credit: modification of image by “NoKXL”/Flickr Creative Commons)

Keystone XL

You might have heard about Keystone XL in the news. It is a pipeline system designed to bring oil from Canada to the refineries near the Gulf of Mexico, as well as to boost crude oil production in the United States. While a private company, TransCanada, will own the pipeline, U.S. government approval is required because of its size and location. The pipeline is being built in four phases, with the first two currently in operation, bringing oil from Alberta, Canada, east across Canada, south through the United States into Nebraska and Oklahoma, and northeast again to Illinois. The third and fourth phases of the project, known as Keystone XL, would create a pipeline southeast from Alberta straight to Nebraska, and then from Oklahoma to the Gulf of Mexico.

Sounds like a great idea, right? A pipeline that would move much needed crude oil to the Gulf refineries would increase oil production for manufacturing needs, reduce price pressure at the gas pump, and increase overall economic growth. Supporters argue that the pipeline is one of the safest pipelines built yet, and would reduce America's dependence on politically vulnerable Middle Eastern oil imports.

Not so fast, say its critics. The Keystone XL would be constructed over an enormous aquifer (one of the largest in the world) in the Midwest, and through an environmentally fragile area in Nebraska, causing great concern among environmentalists about possible destruction to the natural surroundings. They argue that leaks could taint valuable water sources and construction of the pipeline could disrupt and even harm indigenous species. Environmentalist groups have fought government approval of the proposed construction of the pipeline, and had stalled the project until the Trump administration approved it in March of 2017.

Of course, environmental concerns matter when discussing issues related to economic growth. But how much should they factor in? In the case of the pipeline, how do we know how much damage it would cause when we do not know how to put a value on the environment? Would the benefits of the pipeline outweigh the opportunity cost? The issue of how to balance economic progress with unintended effects on our planet is the subject of this topic.

Topic Objectives

Topic 5: Externalities

In this topic, you will learn about:

- Marginal external costs, marginal external benefits
- Marginal social costs and benefits v marginal private costs and benefits
- Environmental policy: Pigovian taxes, emissions taxes, emissions standards, cap and trade programs.

In 1969, the Cuyahoga River in Ohio was so polluted that it spontaneously burst into flame. Air pollution was so bad at that time that Chattanooga, Tennessee was a city where, as an article from Sports Illustrated put it: “the death rate from tuberculosis was double that of the rest of Tennessee and triple that of the rest of the United States, a city in which the filth in the air was so bad it melted nylon stockings off women’s legs, in which executives kept supplies of clean white shirts in their offices so they could change when a shirt became too gray to be presentable, in which headlights were turned on at high noon because the sun was eclipsed by the gunk in the sky.”

The problem of pollution arises for every economy in the world, whether high-income or low-income, and whether market-oriented or command-oriented. Every country needs to strike some balance between production and environmental quality. This topic begins by discussing how firms may fail to take certain social costs, like pollution, into their planning if they do not need to pay these costs. Traditionally, policies for environmental protection have focused on governmental limits on how much of each pollutant could be emitted. While this approach has had some success, economists have suggested a range of more flexible, market-oriented policies that reduce pollution at a lower cost.

5.1 Externalities

Learning Objectives

By the end of this section, you will be able to:

- Explain and give examples of positive and negative externalities.
- Identify equilibrium price and quantity.

In Topics 3 and 4 we introduced the concept of a market. In particular, we closely examined perfectly competitive markets. We observed how producers and consumers of a good interacted to reach equilibrium. We also demonstrated that any policy that was introduced (i.e. quota, price control, tax, etc.) moved the market away from the surplus maximizing equilibrium and created a deadweight loss.

Our assumption throughout this analysis, however, was that there was no third party impacted by the interaction of producers and consumers. We can now add the concept of **Externalities** to our supply and demand model to account for the impact of market interactions on external agents. We will find that the equilibrium that is optimal for *consumers and producers* of the good may be sub-optimal for society. We will learn that the all-regulation-is-bad-regulation conclusion from earlier is not always the case – in many situations, we can improve societal outcomes with policy. Before we get to this conclusion, let's first unpack this concept of externalities.

Externalities

To this point, we have modelled **private markets**. Private markets only consider consumers, producers and the government – the impacts on external parties is irrelevant. The perfectly competitive market we modelled offered an efficient way to put buyers and sellers together and determine what goods are produced, how they are produced, and who gets them. The principle that voluntary exchange benefits both buyers and sellers is a fundamental building block of the economic way of thinking. But what happens when a voluntary exchange affects a third party who is neither the buyer nor the seller? As an example, consider a club promoter who wants to build a night club right next to your apartment building. You and your neighbours will be able to hear the music in your apartments late into the night. In this case, the club's owners and attendees may both be quite satisfied with their voluntary exchange, but you have no voice in their market transaction. The effect of a market exchange on a third party who is outside or "external" to the exchange is called an **externality**. Because externalities that occur in market transactions affect other parties beyond those involved, they are sometimes called **spillovers**. Externalities can be negative or positive. The club example from above is that of a **negative externality**. The club imposed a cost on you, an external agent to the market interaction. A **positive externality** occurs when the market interaction of others presents a benefit to non-market participants.

Enriching Our Model

As discussed earlier, we have previously modelled private markets. Thus, the terminology we used in that analysis applies to private markets. The terms consumer surplus, producer surplus, market surplus, and the market equilibrium (note that this will be referred to interchangeably in this chapter as the unregulated market equilibrium) derive their meaning from an analysis of private markets and need to be adapted in a discussion where **external costs** or **external benefits** are present.

For the purpose of this analysis, the following terminology will be used:

- Our topic three demand curve is equivalent to the **marginal private benefit curve**.
- Our topic three supply curve is equivalent to the **marginal private cost curve**.

We now want to develop a model that accounts for positive and negative externalities. To do so, we must consider the external costs and benefits. External costs and benefits occur when producing or consuming a good or service imposes a cost/benefit upon a third party. When we account for external costs and benefits, the following definitions apply:

- When we add external benefits to private benefits, we create a **marginal social benefit curve**. In the presence of a positive externality (with a constant marginal external benefit), this curve lies above the demand curve at all quantities.
- When we add external costs to private costs, we create a **marginal social cost curve**. In the presence of a negative externality (with a constant marginal external cost), this curve lies above the supply curve at all quantities.

When we were considering private markets, our objective was to maximize market surplus or total private benefits minus total private costs. Our new objective considering all impacted agents in society is to maximize social surplus or total social benefits minus total social costs.

Recall that in this course, our diagrams reflect “marginal” quantities. Notice that some of the definitions require you to use “total” quantities. Remember that to derive a “total” from a “marginal,” take the area underneath the marginal up to a quantity of interest. This quantity is often the equilibrium.

A Negative Externality

Much of the work we will do is with negative externalities. As we will see in the next section, pollution is modelled as a negative externality. Economists illustrate the **social costs** of production with a demand and supply diagram. For example, consider Figure 5.1a, which shows a negative externality. Notice that there are external costs but no external benefits. Graphically, this means that the marginal social cost (MSC) curve lies above the marginal private cost (MPC) curve by an amount equal to the marginal

external cost (MEC) and the marginal private benefit (MPB) and marginal social benefit (MSB) are equivalent.

Let's undergo an analysis of this diagram to understand how we need to shift our thinking from Topic 3 and 4 to Topic 5.

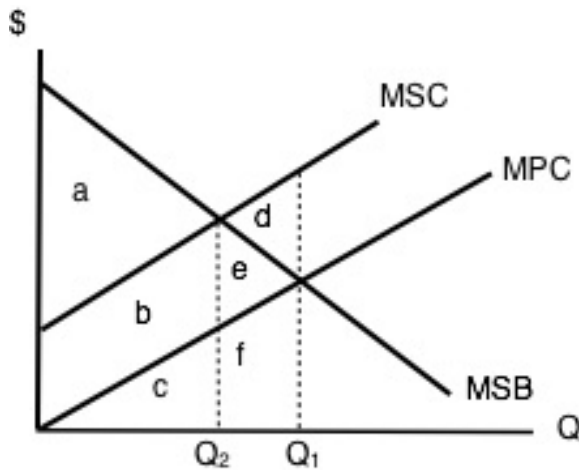


Figure 5.1a

Let's first pretend we know nothing about externalities and ignore MSC. Market equilibrium in this diagram occurs at the intersection of supply and demand, or the intersection of MPC and MSB (which is equivalent to MPB). This occurs at Q_1 . Now we know that total private benefits at the market equilibrium are equal to $a+b+c+e+f$ and we know that total private cost at the market equilibrium equals $c+f$.

The market surplus at Q_1 is equal to (total private benefits – total private costs), in this case, **$a+b+e$** . $[(a+b+c+e+f) - (c+f)]$.

Now, let's introduce some of the concepts we've learned in this section to our analysis. To get a true picture of surplus, we need to account for the external cost of production. Recall that social surplus is the difference between total social benefits and total social cost. Social surplus is sometimes referred to as aggregate net benefits. Since there is no positive externality, social benefit and private benefit are equal. Thus, as before, it is equal to $a+b+c+e+f$.

Total social cost at the market equilibrium is equal to $b+c+d+e+f$, and includes all the areas under our MSC curve up to our quantity. Notice that this is larger than total private cost by $b+e+d$. This should make sense as we are analyzing a negative externality where, by definition, the private cost to producers is smaller than the social cost of their actions. The difference in these two values is equal to the external costs.

The social surplus at Q_1 is equal to total social benefits – total social costs. In this case, **$a-d$** . $[(a+b+c+e+f) - (b+c+d+e+f)]$.

In Topic 3 and 4, we saw that the market equilibrium quantity maximized market surplus and that any move away from this quantity caused a deadweight loss. Let's see if this conclusion holds when we introduce externalities.

Recall that deadweight loss (DWL) is defined at maximized surplus – actual surplus. In Layman's terms, it is where we want to be in a perfect world minus where we are now. In some sense, it is a quantification of inefficiency.

Consider our diagram of a negative externality again. Let's pick an arbitrary value that is less than Q_1 (our optimal market equilibrium). Consider Q_2 .

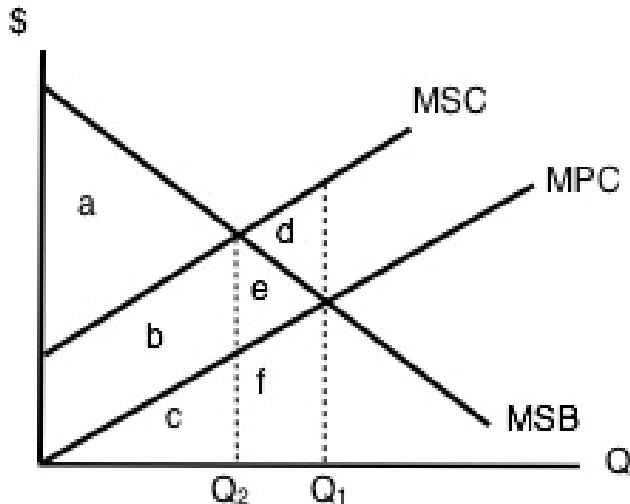


Figure 5.1b

If we were to calculate market surplus, we would find that market surplus is lower at Q_2 than at Q_1 by triangle e .

The market surplus at Q_2 is equal to area **a+b**. $[(a+b+c) - (c)]$.

What about social surplus? Total social benefit at Q_2 is equal to $a+b+c$. Total social cost at Q_2 is equal to $b+c$.

The social surplus at Q_2 is equal to area **a** $[(a+b+c) - (b+c)]$.

This result is interesting. By moving to a quantity lower than our optimal market equilibrium, we *raised* social surplus. Compared to Q_1 we have increased our social surplus by area d . This means that d was a deadweight loss from being at the *optimal market* level of production. That is to say, the optimal market level of production was *inefficient* for society. By leaving the market unregulated and letting the interaction of producers and consumers set quantity and price, society as a whole is worse off than if quantity had been restricted by policy for example. This means that there is an opportunity for government intervention to make society better off.

Why is this the case? Well, at Q_1 , we see that our MSC is greater than our MSB . Using marginal analysis, we know that when $MC > MB$, we need to reduce our quantity to maximize surplus.

How do you know which quantity maximizes surplus?

- When looking for the **market equilibrium** (sometimes called the **unregulated market equilibrium**), we want to select the quantity where demand = supply or where marginal private benefit = marginal private cost. Diagrammatically, this will happen where MPB intersects MPC. The quantity where this occurs will always maximize market surplus.
- When looking for the **social surplus maximizing equilibrium**, we want to select the quantity where marginal social benefit = marginal social cost. Diagrammatically, this will happen where MSB intersects MSC. The quantity where this occurs will always maximize social surplus.

Pareto Improvements and Potential Pareto Improvement

At this point, there may be some confusion around our analysis. The market (or private agents) were worse off in the move from Q_1 to Q_2 , but society was made better off. How is this possible? What criteria are we using to judge if our action to restrict quantity is appropriate? Recall our definition of efficiency from earlier topics. We defined **Pareto-efficiency** as an outcome where no one can be made better off without making someone worse off. As it turns out, we need two additional definitions to fully understand the movement from an inefficient to an efficient allocation.

The first term we need to become familiar with is a **Pareto Improvement**. A Pareto Improvement is a change such that someone is made better off without making anybody worse off. Consider the following example. You only like peanut butter and jelly sandwiches, but your mom has packed you a PB & J and a Nutella sandwich. Your friend has no sandwiches in their lunch bag but loves sandwiches. Since you do not value Nutella sandwiches, if you give your friend your Nutella sandwich, you would make them better off without making yourself worse off (remember, you don't place any value on Nutella sandwiches). This scenario describes a Pareto Improvement.

The second term we need to introduce is a **Potential Pareto Improvement**. The definition of a Potential Pareto Improvement has three parts:

1. As opposed to a Pareto Improvement, a Potential Pareto Improvement *may* have people who gain and people who lose.
2. The individuals who gain from the change gain by enough that *in theory* some of their gains could be taken to compensate those who lose such that we again have a scenario where people are made better off without making anybody worse off.
3. The compensation just needs to be *possible*. It does not have to occur for a change to be a Potential Pareto Improvement.

Note that all Pareto Improvements are necessarily Potential Pareto Improvements but not all Potential Pareto Improvements are necessarily Pareto Improvements.

It should also be noted that if social surplus increased, at the very least Potential Pareto Improvement occurred. Pareto Improvements almost never exists and thus do not form that basis of decision making

in the policy process. More often than not the choices we make are based on Potential Pareto Improvements.

Let's illustrate a Potential Pareto Improvement and compare it to a Pareto improvement with the following illustration.

Pareto Improvement		Potential Pareto Improvement	
Person A before change		Person A before change	
Person B before change		Person B before change	
Person A after change		Person A before change	
Person B after change		Person B before change	

Consider the above scenario where Max (person A) and Catherine (person B) start out with two cookies. Suppose a change occurs as in the left column. After the change, Max remains with two cookies whereas Catherine gains a cookie (shown in red). This is a Pareto Improvement, because Catherine is better off with the extra cookie, while Max is neither better nor worse off. Now, suppose a change occurs as in the right column. After the change, Max loses a cookie while Catherine gains two cookies, shown in red and green. In this scenario, Catherine benefits and Max is negatively impacted, just as the first part of our definition of a Potential Pareto Improvement indicates. Now, to confirm that this is a Potential Pareto Improvement, let's see if we could take some of the gains away from Catherine and give it to Max to ensure he is no worse off. This is possible. We could theoretically take one cookie away from Catherine and give it to Max. If we did, Max would be no worse off – he would still have two cookies – and Catherine would still be better off than she was before the change – she would have three cookies instead of two. Now let's take what we have learned from this and apply it to our example of the negative externality.

Potential Pareto Improvements to Externalities

Consider the diagram of a negative externality again.

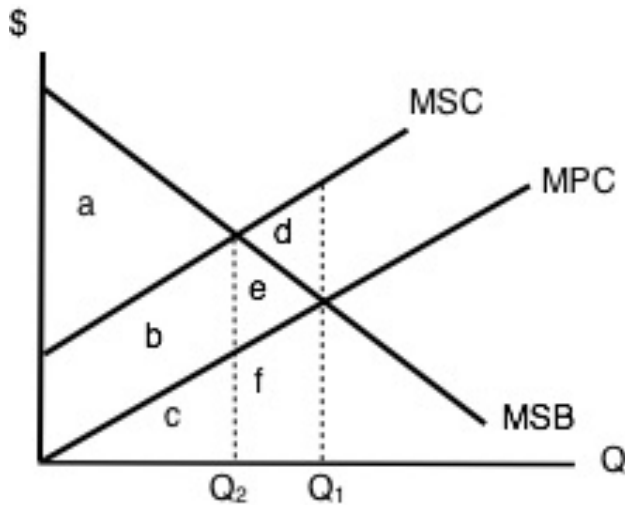


Figure 5.1c

Let's hone in on the *change* in both market and social surplus by changing from quantity Q_1 to Q_2 .

Private Agents

Let's first consider private market participants. In the move from Q_1 to Q_2 , private agents reduce their costs by f (they are producing less so costs should be less; f is the area underneath the marginal private cost curve between Q_2 and Q_1) but also decrease their benefit by $e+f$ (the area under the marginal private benefit curve between the two quantities of interest). On balance, they are worse off by e when they move from Q_1 to Q_2 .

External Agents

In the move from Q_1 to Q_2 , the external cost imposed declines by $d+e$, meaning they are better off by $d+e$. Remember when looking for external costs, we are looking under the MSC curve but above the MPC curve.

To determine whether this is a Potential Pareto Improvement, we need to find out whether the gains from the winners exceed the losses to others. In our example, the gain by external agents is indeed larger than the loss to private agents ($d+e > e$). Therefore, in theory, we could take e from the external agents and give it to the private agents and make them equally as well off as they were at the market equilibrium. External agents would still be better off by d . Thus, a Potential Pareto Improvement has been realized.

This resolves the tension we brought up at the beginning of this section and explains how we can increase social surplus by changing the quantity from the market equilibrium.

Positive Externalities

As we mentioned previously, a positive externality occurs when the market interaction of others presents a benefit to non-market participants. The analysis of positive externalities is almost identical to negative externalities. The difference is that instead of the market equilibrium quantity being too much, the market will generate too little of Q . Let's look at an example. Consider the following diagram of a market where a positive externality is present.

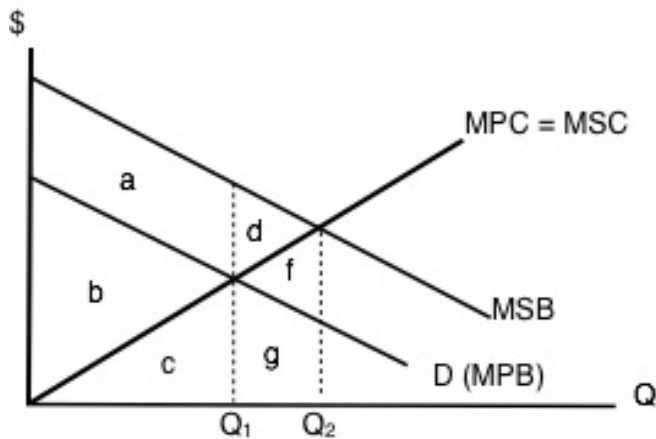


Figure 5.1d

Notice first that MPC curve is the same as MSC curve because there are no external costs. Second, the MSB curve lies above the MPB curve at all quantities because each unit of private consumption generates a spill-over benefit to non-market participants. The area in between MSB and MPB is the external benefit. Remember that $MPB + MEB = MSB$.

Let's briefly explore this diagram as we did for negative externalities. The market equilibrium occurs where $MPB = MPC$. That occurs at Q_1 .

The market surplus at Q_1 is equal to total private benefits – total private costs, in this case **b**. $[(b+c) - (c)]$.

The social surplus at Q_1 is equal to total social benefits – total social costs, in this case **a+b**. $[(a+b+c) - (c)]$.

As before, suppose we increased the quantity in this market to Q_2 .

The market surplus at Q_2 is equal to **b-f**. $[(b+c+g) - (c+f+g)]$.

The social surplus at Q_2 is equal to **a+b+d**. $[(a+b+c+d+f+g) - (c+f+g)]$.

Note that social surplus has increased despite the fact that market participants are worse off. Thus, a Potential Pareto Improvement must have occurred. We can see this is the case by noticing that $d+f$ is the amount that non-market participants gained by the increase in production and that f is the loss to market participants from excess production. In theory, we could take f from the external agents and give it to the market participants so they would be indifferent to the situation before and after the change. Thus, we know that d is the deadweight loss in the presence of a positive externality, due to under production.

Okay, but what's an example of a Positive and a Negative Externality?

As an example of a **Negative Externality**: Suppose a banana farmer uses pesticides on their crop and some of this pesticide runs off into a nearby stream that is the primary water supply of a downstream community.

The farmer and the banana consumers do not account for the negative impact the operations have on the stream. In other words, there is a spillover cost inherent to this market interaction.

As an example of a **Positive Externality**: suppose a bee keeper's hives are located near another farmer's orchard. The bees fly to the orchard and pollinate the crop resulting in a spillover benefit for the orchard farmer.

Key Concepts and Summary

Economic production can cause environmental damage. This trade-off arises for all countries, whether they be high-income or low-income, and whether their economies are market-oriented or command-oriented.

An externality occurs when an exchange between a buyer and seller has an impact on a third party who is not part of the exchange.

An externality can have a negative or positive impact on the third party. If those parties imposing a negative externality on others had to take the broader social cost of their behaviour into account, they would have an incentive to reduce the production of whatever is causing the negative externality.

In the case of a positive externality, the third party is obtaining benefits from the exchange between a buyer and a seller, but they are not paying for these benefits. If this is the case, markets tend to under-produce output because suppliers do not consider the additional benefits to others. If the parties that are creating benefits for others can somehow be compensated for these external benefits, they would have an incentive to increase production.

Glossary

External Benefits

additional benefits reaped by third parties outside the production process when a unit of output is produced

External Cost

additional costs incurred by third parties outside the production process when a unit of output is produced

Externality

a market exchange that affects a third party who is outside or “external” to the exchange; sometimes called a “spillover”

Market Failure

When the market on its own does not allocate resources efficiently in a way that balances social costs and benefits; externalities are one example of a market failure

Negative Externality

a situation where a third party, outside the transaction, suffers from a market transaction by others

Positive Externality

a situation where a third party, outside the transaction, benefits from a market transaction by others

Private Market

a market that only considers consumers, producers and the government, doesn't include external agents

Social Costs

costs that include both the private costs incurred by firms and also additional costs incurred by third parties outside the production process, like costs of pollution

Spillover

see externality

Exercises 5.1

1. Which of the following statements about negative externalities is/are TRUE?

- I. At the social-surplus maximizing level of output, external costs equal zero.
- II. At the unregulated competitive equilibrium, marginal social cost is greater than marginal social benefit.
- III. At any output level, social costs are greater than private (market) costs.

- a) I, II, and III.
- b) II only.
- c) III only.
- d) II and III.

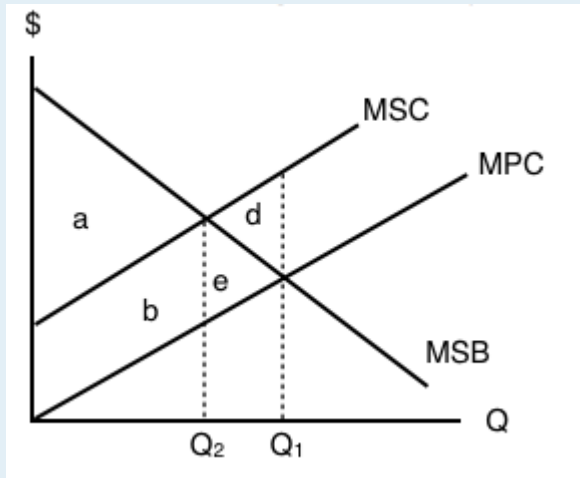
2. Which of the following statements about external costs is TRUE?

- a) Economics uses the term “external cost” to describe a spillover effect from market activity that is too small to matter to society.
- b) Economics ignores the environmental impact of market activities by calling such impact an “external cost.”
- c) Economics does not provide guidance for environmental policy since it treats any environmental cost as an “external cost”.
- d) None of the above statements are true.

3. If a competitive market is characterized by a negative externality, then which of the following statements is true?

- a) Social surplus is greater than market surplus.
- b) Social surplus is less than market surplus.
- c) Social surplus is equal to market surplus.
- d) Social surplus may be greater than or less than market surplus, depending on the size of the externality.

The following TWO questions refer to the diagram below, which illustrates the market for a good whose production results in a negative externality.



4. If there is no regulation in place to correct the externality, which area represents MARKET surplus?

- a) a.
- b) $a - d$.
- c) $a + b$.
- d) $a + b + e$.

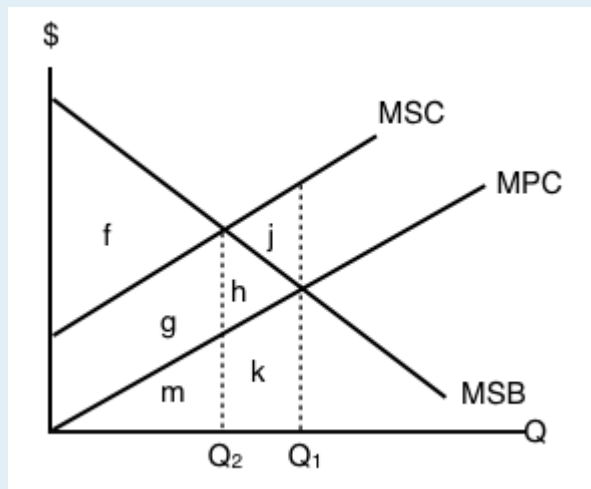
5. If there is no regulation in place to correct the externality, which area represents SOCIAL surplus?

- a) a.
- b) $a - d$.
- c) $a + b$.
- d) $a + b + e$.

6. Suppose that each kilowatt-hour (kwh) of electricity produced using natural gas results in 0.2kgs of carbon dioxide emissions. If each ton of carbon dioxide emissions results in environmental costs of \$360, then the marginal external cost per kwh of electricity produced is equal to (0.2kg is equal to about 0.000220462 tons):

- a) 10 cents.
- b) 8 cents.
- c) 4 cents.
- d) 2 cents.

The following THREE question refer to the diagram below, which illustrates the marginal private cost, marginal social cost, and marginal social benefits for a goods whose production results in a negative externality.



7. Which are represents the deadweight loss due to the externality?

- a) j.
- b) h.
- c) h+j.
- d) There is no deadweight loss.

8. Which are represents external costs at the unregulated competitive equilibrium?

- a) $g + h + j + m + k$.
- b) $g + h + j$.
- c) $g + m$.
- d) g.

9. Which are represents social surplus at the unregulated competitive equilibrium?

- a) $f - j$.
- b) f.
- c) $f + g + h$.
- d) $f + g + h - j$.

Save

Save

5.2 Indirectly Correcting Externalities

Learning Objectives

By the end of this section, you will be able to:

- Explain how policy can improve societal outcomes when markets do not function perfectly.
- Compare and demonstrate how different environmental policies work to reduce pollution.

A Source of Market Failure

Recall from our analysis in Topic 5.1 that reducing the quantity in the market from the optimal market level of production to the socially optimal level of production raised social surplus. In Topic 4, we saw a variety of policies that changed the quantity from the market equilibrium and resulted in a deadweight loss. Why the difference?

In Topic 3 and 4, our supply and demand models relied on the assumption that the market was perfectly competitive and that there were no externalities. With these assumptions, the market would naturally optimize both the market and social surplus because there would be no external costs.

Recognizing that externalities do exist, our market no longer naturally optimizes, since external costs do not impact market participants and thus are not taken into account for their decision.

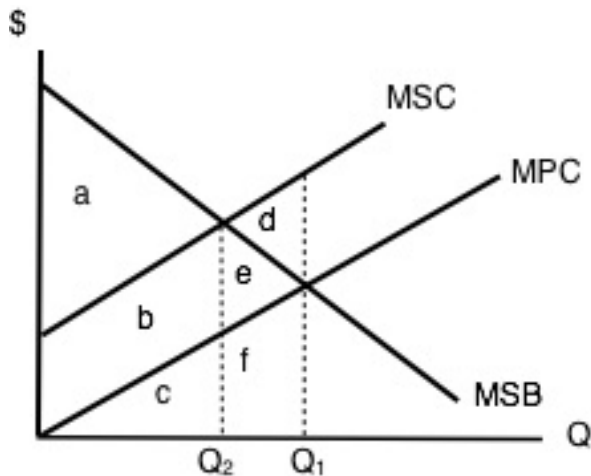


Figure 5.2a

Recall this diagram of a negative externality. We found that social surplus at the optimal market quantity (or competitive equilibrium) was a-d. We then found that at the socially optimal level of production, the social surplus was a. We concluded that d was the deadweight loss from being at the

competitive equilibrium and not addressing the externality. Since the market did not naturally maximize societal welfare, the unaddressed externality results in a market failure. Since our market equilibrium quantity differs from our social equilibrium quantity, we have a deadweight loss. When left unaddressed, externalities cause competitive markets to fail.

Correcting or 'Internalizing' an Externality

Now we know that an externality is a form of market failure that arises because market participants do not account for factors external to the market. This makes the market quantity is too low or too high relative to the socially optimal level of production. Fortunately, in Topic 3 and 4, we learned a variety of policies that influence the number of goods exchanged in a market. We can use these to set quantity where $MSB = MSC$. If we create policy correctly, we can bring the market back to the social surplus maximizing level of output.

We can either set the appropriate quantity directly through a quota, price floor, or price ceiling. More commonly, governments address the externality through a tax or subsidy. In this case, the government introduces a tax that will make market participants act *as if* they care about participants outside the market. In economic jargon, this is called *internalizing* the externality. A tax that addresses a negative externality by taxing the good instead of the actual external cost is called a **Pigouvian Tax**. We work through an example below.

Consider the following diagram of a perfectly competitive market with a negative externality present.

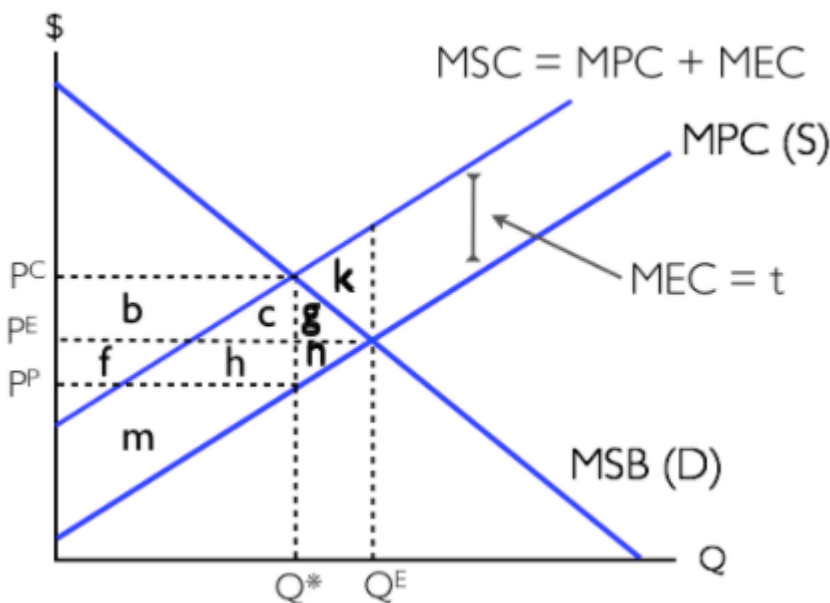


Figure 5.2b

We know that without regulation, the market will naturally tend to Q^E (where $MPC = MPB$) and that this will result in a deadweight loss of area k . Ideally, we want the quantity exchanged to equal Q^* , which is the social surplus optimizing level of production since this level of output is where $MSB = MSC$. How can we force the market here? One way is to introduce a tax equal to the marginal external cost at the efficient quantity Q^* . This makes the producer face a cost curve of $MPC + \text{tax}$, and since the tax is

equal to external costs, this will just cause firms to act as though they recognize the externality. That is easy in this case as we have a constant MEC and we can set the amount of our tax equal to it. Using our knowledge from Topic 4 and the analysis of our previous diagram, we can convince ourselves that this policy brings us to Q^* .

Zero Externality isn't the Answer

Notice in the diagram above that at the socially optimal level of production, external costs do not equal zero. At Q^E , external costs are $m+c+h+k+g+n$. When we introduce a tax that takes us to Q^* , external costs are equal to $m+c+h$. A common misconception is that introducing a tax in this market eliminates external costs. This is incorrect. In some sense, we are aiming for an “optimal” level of external cost. To get a sense for this, consider the manufacturing industry. We could get external costs (like the adverse effects of carbon dioxide emissions) to equal zero if we stopped production entirely, but then we would have a world with little energy.

Secondly, consider a world where the externality is not constant like in the previous example. Perhaps it is increasing in the level of production like the diagram below.

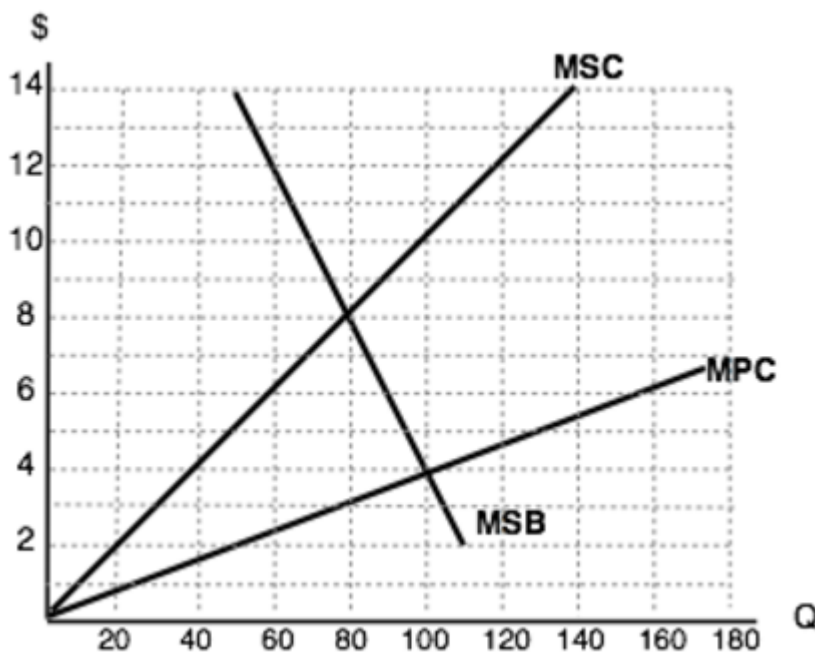


Figure 5.2c

At this point, you should be able to convince yourself that the equilibrium quantity is 100 and the socially efficient level of output is 80. The intuition behind the policy response is the same as before, but we have to be careful about the amount of the tax as the marginal external cost is changing. We want to set the level of the tax equal to the marginal external cost *at the socially efficient level of output*. This value is $8-3$ or \$5. We know that setting a tax equal to \$5 will bring us to 80 units, where social welfare is maximized.

Third, notice that we have been indirectly targeting pollution with the policies we have discussed. We have taxed the *good* to reduce pollution. There is no incentive to innovate our production processes and make them “greener” because no matter how green your good is, you will still have to pay the tax. In the next section, we look at policies that address this and directly target pollution.

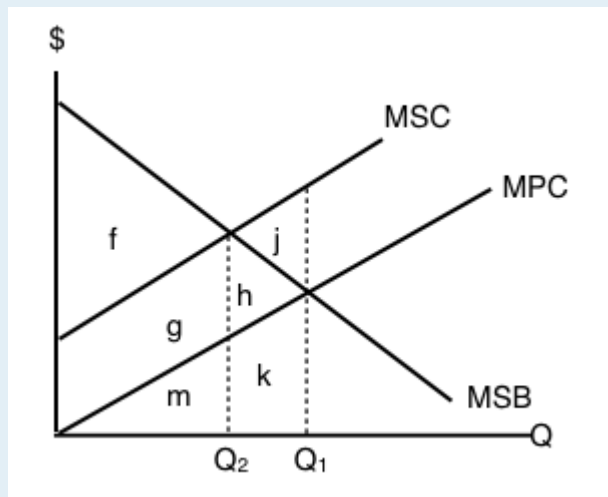
Glossary

Pigouvian Tax

a tax levied on any market activity that generates negative externalities (costs not internalized in the market price)

Exercises 5.2

The following TWO questions refer to the diagram below, which illustrates the marginal private cost, marginal social cost, and marginal social benefits for a goods whose production results in a negative externality.



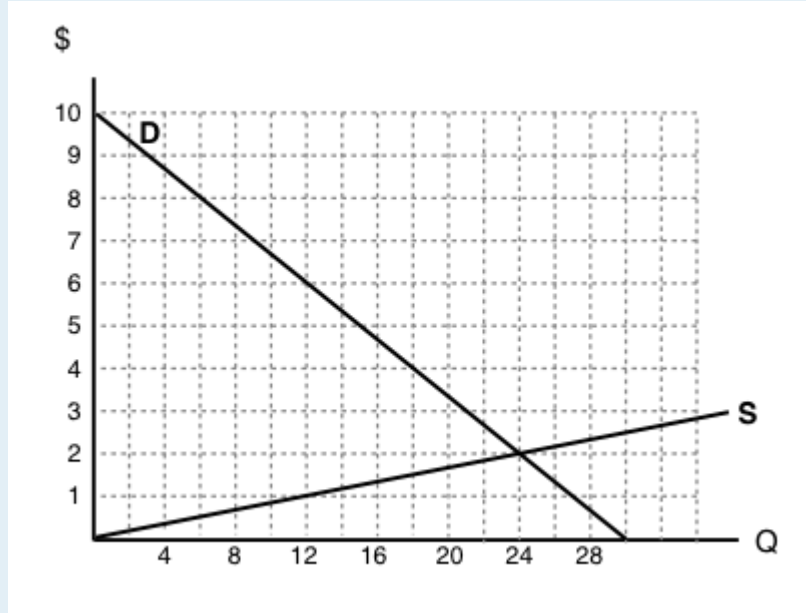
1. If the government introduces a per unit tax equal to the marginal external cost, what area represents the change in social surplus?

- a) j; a decrease.
- b) j; an increase.
- c) h; a decrease.
- d) h; an increase.

2. Which area represents external costs at the social-surplus-maximizing quantity of output?

- a) External costs are zero.
- b) $g + h + j$.
- c) $g + h$.
- d) g .

The following TWO questions refer to the diagram below, which illustrates the supply and demand curves for a perfectly competitive market. Assume that each unit of output results in a marginal external cost of \$5.



3. In the absence of government intervention, what will the deadweight loss equal?

- a) \$0.
- b) \$30.
- c) \$60.
- d) There is insufficient information to determine the size of the deadweight loss.

4. If a tax of \$5 per unit is introduced in the market illustrated above, then the price that consumers pay will be ____ and the price that producer receive (net of the tax) will be ____.

- a) \$9; \$4.
- b) \$8; \$5.
- c) \$7; \$6.
- d) \$6; \$1.

5.3 Directly Targeting Pollution

Learning Objectives

By the end of this section, you will be able to:

- Show how the government can directly target pollution.
- Consider the pros and cons of pollution standards, cap and trade, and pollution tax policies.
- Explain how firms respond to each policy.

In the previous section, we looked at externalities and policies to correct the market failures they cause. In this section, we look at mechanisms to directly target pollution.

Model Background:

Why do firms pollute? The economist's answer is because there is a benefit to pollution – production implies pollution and production allows the firm to generate revenue. In an unregulated world, firms can maximize their profits by using the cheapest production method available. It is not an unreasonable assumption to say that the cheapest method is likely the “dirtiest” method. When producing, firms are weighing the MB of pollution (revenue) against the MC. In an unregulated world, the MC of pollution is zero, so firms will emit the maximum level of pollution that their production method allows for. The problem is that when a firm only looks at *its own* cost and benefits, the societal cost of pollution is ignored. Thus, we have a role for government intervention in addressing this market failure. In analyzing the decisions of firms directly around emission or pollution, we use the abatement model.

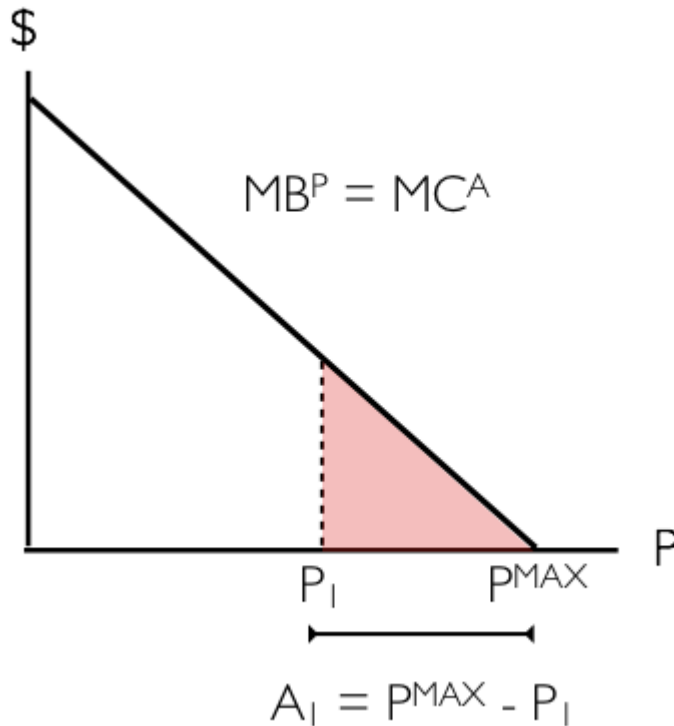


Figure 5.3a

The graph above illustrates the marginal benefit of pollution (MPB), or equivalently, the marginal cost of abatement (MCA) for a firm. **Abatement**, a term describing the reduction of pollution, is almost always costly. On the vertical axis, we have cost and/or benefit in dollar terms. On the horizontal axis, we have pollution. Recall that in the absence of regulation, the firm will emit at P^{MAX} . Assume this firm decides to reduce its emissions to P_1 . In this case, it would need to pay large amounts of money for abatement, since there would be a hefty cost associated with cleaning up its production. The area under the MCA curve between P^{MAX} and P_1 , shown above as the red triangle, represents this cost.

It is important to note something about marginal cost of abatement. As shown in the diagram above, it is likely to be low at relatively high levels of P and high at relatively low levels of P . Consider a coal-fired power plant to understand why this is true. When the firm is making no efforts to reduce pollution, there are relatively cheap things it can do to reduce its pollution, like installing a smokestack scrubber. This concept is commonly referred to as “low-hanging fruit.” When this firm is polluting only a small amount, it is much costlier to reduce pollution by an additional unit. An extreme example is that the coal-fired power plant would need to convert to a wind farm.

In theory, we could map the marginal social cost of pollution onto the above graph, find the intersection and force the firm to reduce its emissions to this optimal level. However, there is a heavy information burden for this to happen. In order for this to occur, we would need to know social cost information and the cost of abatement for the firm. This is at best impractical and at worst impossible. In reality, we estimate the appropriate pollution reduction and create a policy to get us there.

There are three that we will consider: pollution standards, a pollution tax, and a cap-and-trade system.

In creating any policy, we want to consider three criteria:

First, we want to ensure low-cost opportunities for abatement are chosen over high-cost opportunities whenever possible. This will result in pollution reduction at the *least cost*.

Second, ideally, we want a system with a low informational burden. As we have discussed, assigning a cost to environmental impact is very difficult. If we can design a system that does not depend on these imprecise estimates, we can still get to a beneficial outcome.

Lastly, we want to think about distribution: Who is paying the cost for this policy and who is benefiting?

Pollution Standards

The most rudimentary policy available is called a **pollution (or emission) standard**. This policy directly limits the amount of pollution a firm is allowed to emit. In effect, the policymaker tells the firms that they all must restrict their emission to, for example, 350 units. The upside of this policy is that it ensures the government will reach its pollution reduction target. The bad news is that the reduction is unlikely to occur at least cost. Consider the Figure 5.3b, which shows two firms and their associated MCA below.

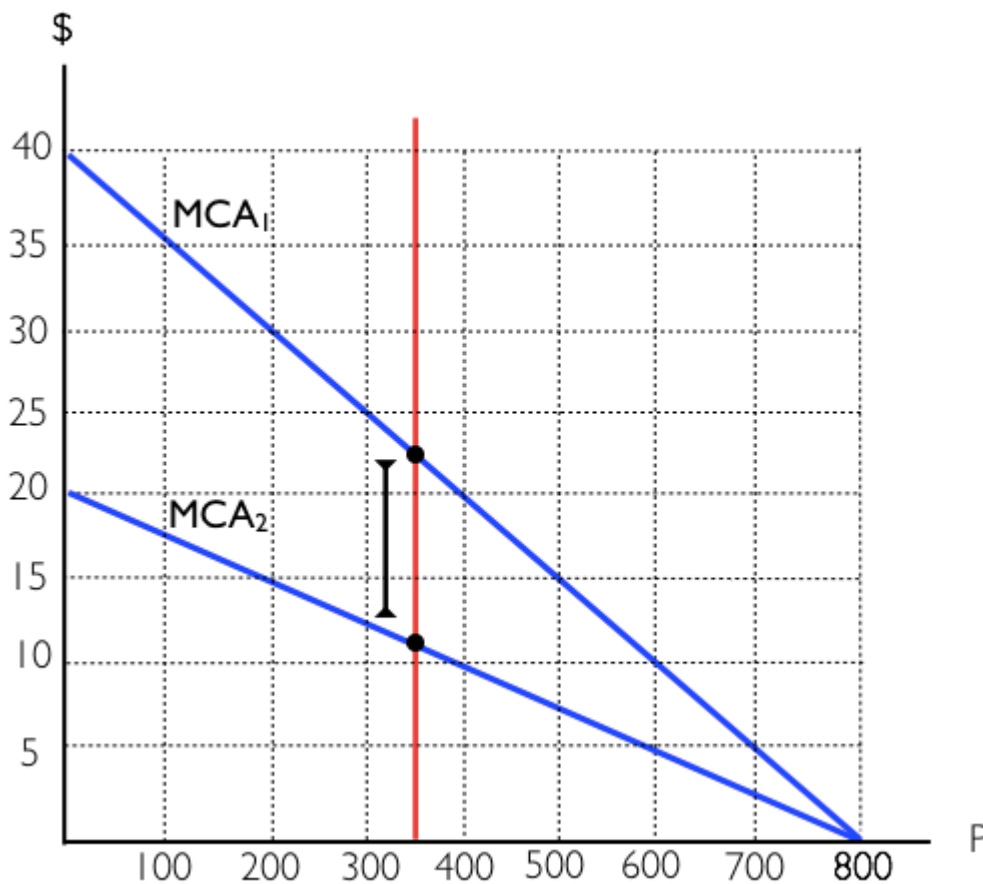


Figure 5.3b

We can see that Firm 1 (with MCA₁) has higher abatement costs over at all levels of P compared to Firm 2 (with MCA₂).

Suppose the government wants to reduce pollution from $P^{\text{MAX}} = 1600$ (800 from each firm) by 900 units. It decides to divide the abatement burden evenly between the two firms (450 each) so a pollution standard is set at 350 units. This means that each firm may only emit 350 units. This is shown on the diagram above.

From this policy, the government gets the desired reduction of emission by 900 units but not at least cost. Observe in the diagram that at a pollution level of 350 units, Firm 1 has a MCA of around \$22 and Firm 2 has a MCA equal to around \$11. This means that Firm 1 is willing to pay up to \$22 for one more unit of pollution, and Firm 2 is willing to accept at least \$11. If there was a way for Firm 1 to pay Firm 2 for some of its pollution allowance, then both parties could gain. This is not possible under the pollution standards regime.

Cap and Trade

A scheme where Firm 1 can buy **pollution allowances** from Firm 2 exists, and is called **Cap and Trade**. Under cap and trade, the government sets a certain pollution level and then provides permits that firms can purchase, sell, and trade. In effect, the government is creating a market for pollution and limiting the available pollution to the number of permits it provides. This allows the market to allocate emissions reduction efficiently.

Suppose the government wants the same 900-unit reduction in emissions and to reduce emissions to 700 units. Its first step is to create 700 permits. The second and more difficult decision is to decide how many permits each firm will get initially. Let's assume each firm is given half the permits.

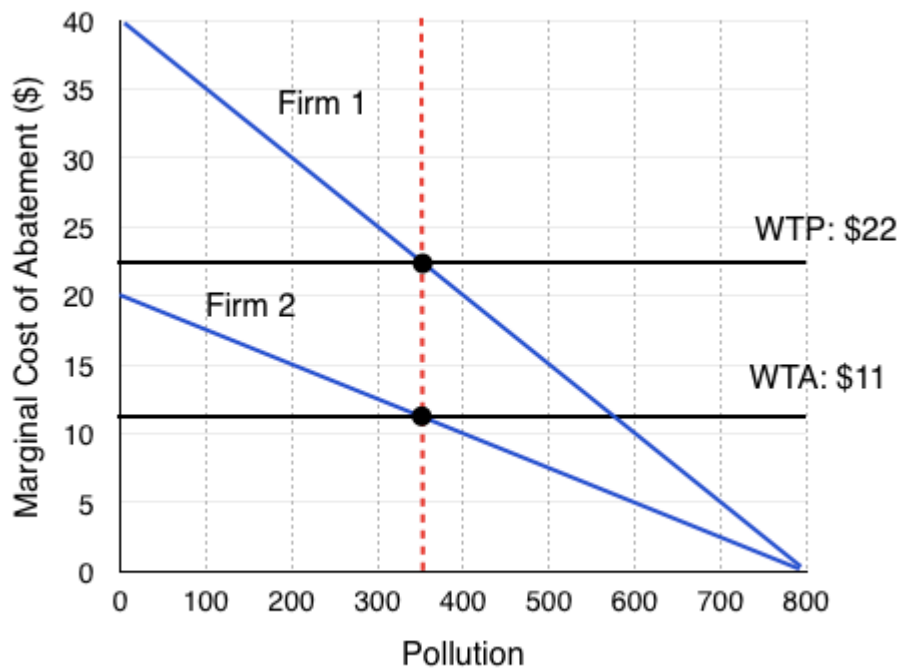


Figure 5.3c

Figure 5.3c is the same diagram we had in our pollution standard scenario. As we noted, the MCA's are not equal, and there is an incentive for Firm 1 to pay Firm 2 for some of its pollution allowance. Specifically, Firm 1 is willing to pay its MCA for an additional unit of pollution (\$22), and Firm 2 is only willing to accept (WTA) more than its MCA (\$11). Clearly, there are beneficial exchanges available.

What happens when a trade occurs? We can see that as pollution level changes, the MCA for each firm will change as well.

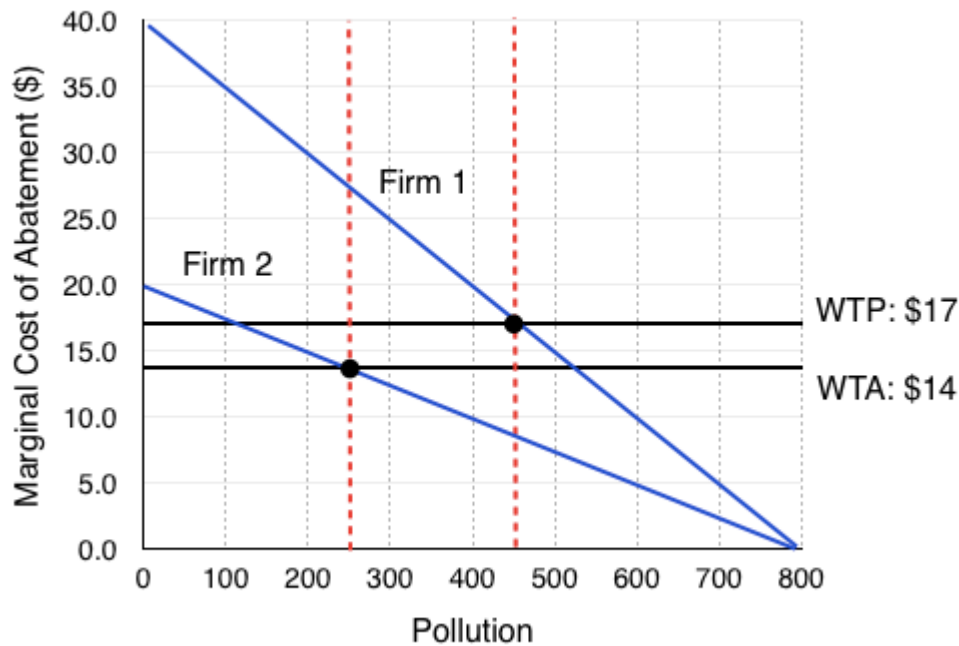
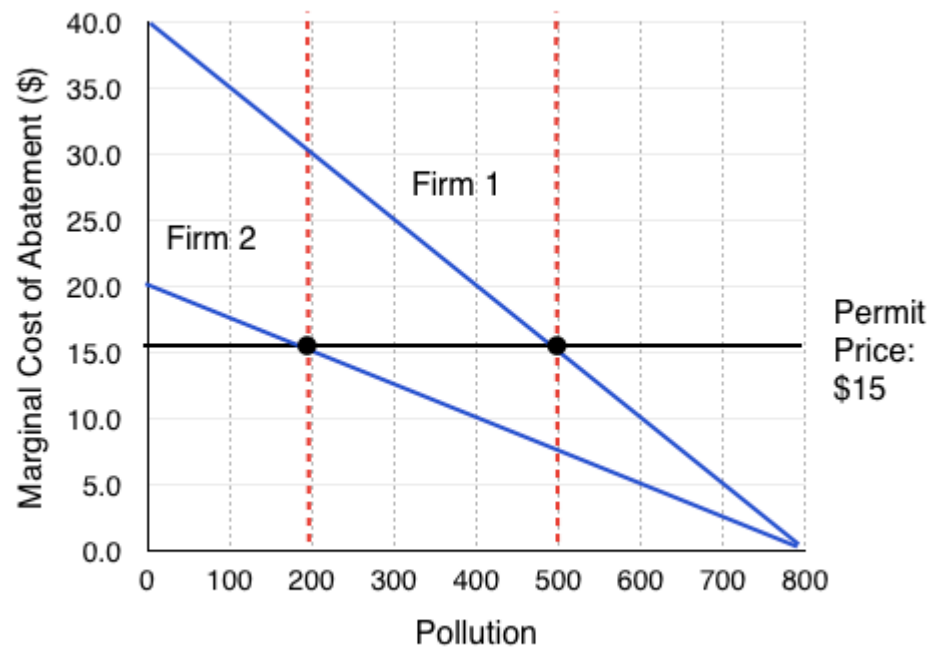


Figure 5.3d

When Firm 1 increases its pollution by 100 units and Firm 2 decreases its pollution by 100 units, the parameters for a beneficial exchange have changed. Now, Firm 1 is only willing to pay up to \$17 to pollute, and Firm 2 must be paid at least \$14.

We can see that transactions will continue to occur until the $WTP = WTA$, or the MCA for each firm is the same. This occurs at \$15.

*Figure 5.3e*

What prices will permits trade at?



If there are a range of prices in which beneficial transactions can occur, for example in Figure 5.3c at any price between \$11 and \$22, what price will the permits trade at? Remember that in a perfectly competitive market, the price is set by the market. This means that the price of permits will equal the MCA at the equilibrium. Why? Our buying firms will be willing to pay somewhere between \$22 and \$15, and our selling firms need to be paid somewhere between \$11 and \$15. If you are a firm looking to sell your permit and you try to sell for more than \$15, the buying firm will look elsewhere, knowing that other firms will sell for \$15. If you are a buying firm and you offer less than \$15, the selling firm will go elsewhere, knowing it can receive at least \$15. Therefore, the equilibrium price of permits is \$15.

The conclusion? We can easily find the permit price by finding the point where the marginal costs of abatement are the same, and the total amount of emissions is equal to the number of permits. By identifying this point, we will also be able to tell who is the buyer and seller of permits in each situation.

How Cap and Trade Minimizes Costs

We can look at how each firm assesses the benefits and costs of selling and buying permits and conclude that the exchange is mutually beneficially and results in a Pareto improvement. Having an open market for trading permits ensures that if one firm is more efficient at reducing emissions, it will sell permits

to a firm that is less efficient. This ensures that pollution reduction is done in the most efficient way possible.

Consider Figure 5.3, which shows the benefits and costs of pollution for Firm 1 compared to the benefits and costs of abatement for Firm 2.

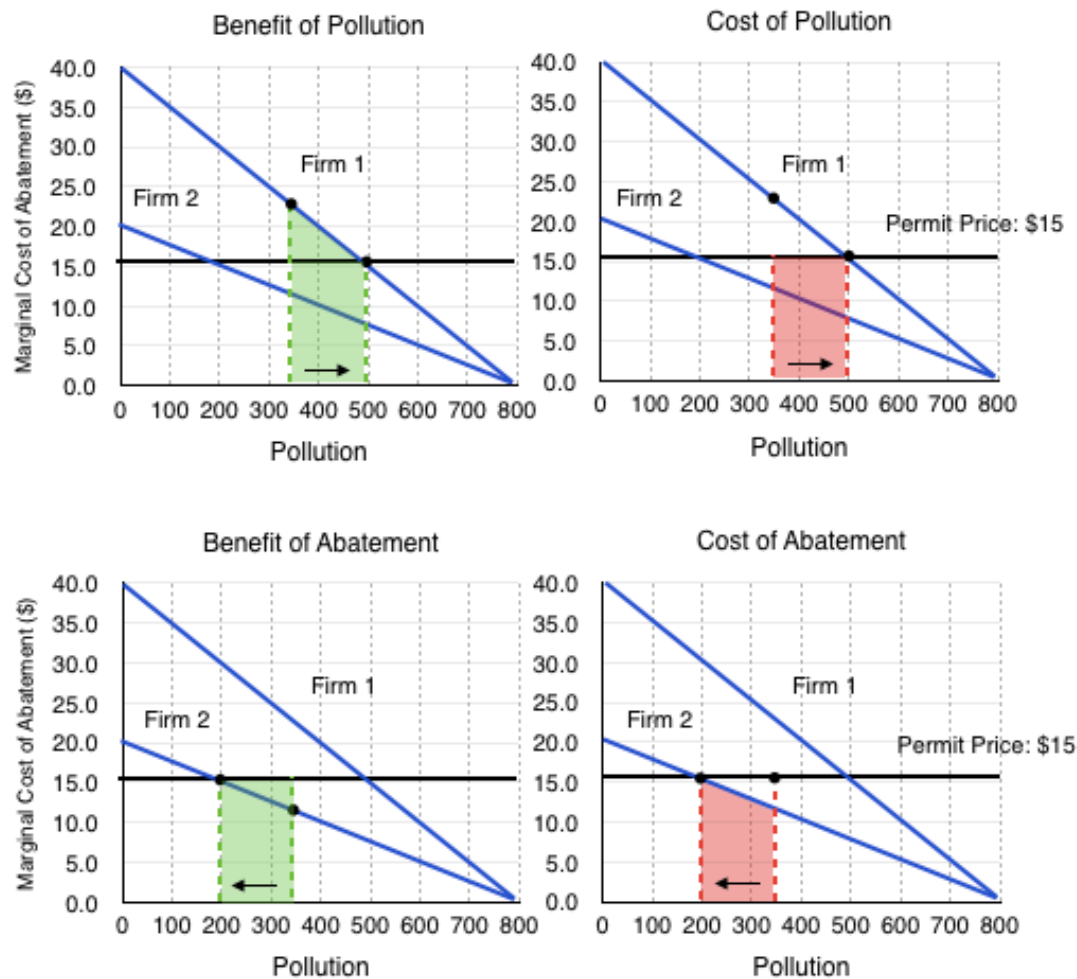


Figure 5.3f

Clearly, issuing permits results in efficient emission reductions. In this policy, the government has to set a quantity, and allows the market to set the price of pollution.

Pollution Tax

There is one more method the government can use to directly curb pollution. Whereas with cap and trade, the government has to set the quantity of emissions, a **pollution tax** allows it to set the price.

Setting the price can be more difficult. If the government wants to reduce emissions to 700 units, it will have to set a tax rate that incentivizes firms to do so. With the diagrams above, this might not seem so difficult, but normally the government will not know the MCA of the firms.

All that considered, if the government has the information, a pollution tax can have much the same effect as cap and trade. If the government sets the pollution tax at \$15, consider how Firm 1 behaves:

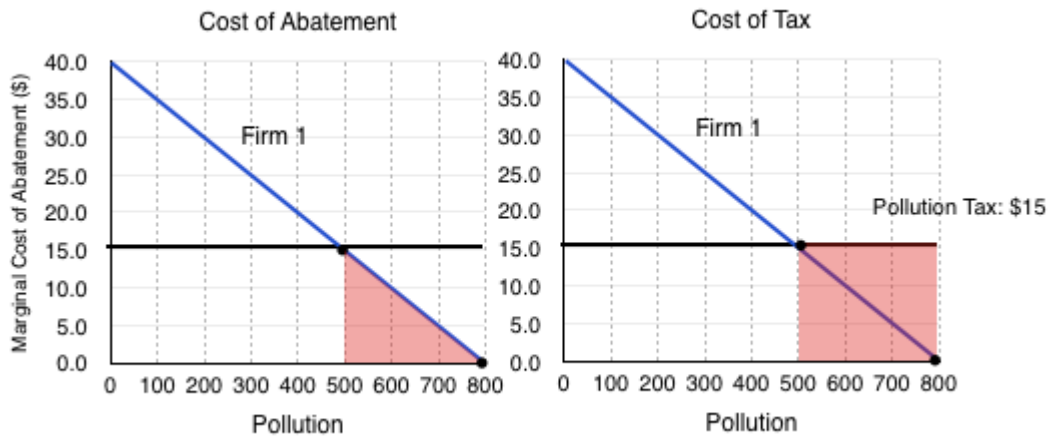


Figure 5.3g

Without the tax, the firms both maximize their pollution. Once the \$15 tax is set, the firms each compare the costs of abatement with the cost of paying the tax. In Figure 5.3d, we can see that it costs Firm 1 more to pay the tax than it does for them to reduce pollution from 800 units to 500 units.

This does not mean it will reduce pollution entirely. Consider Firm 1's decision when it is emitting 500 units of pollution:

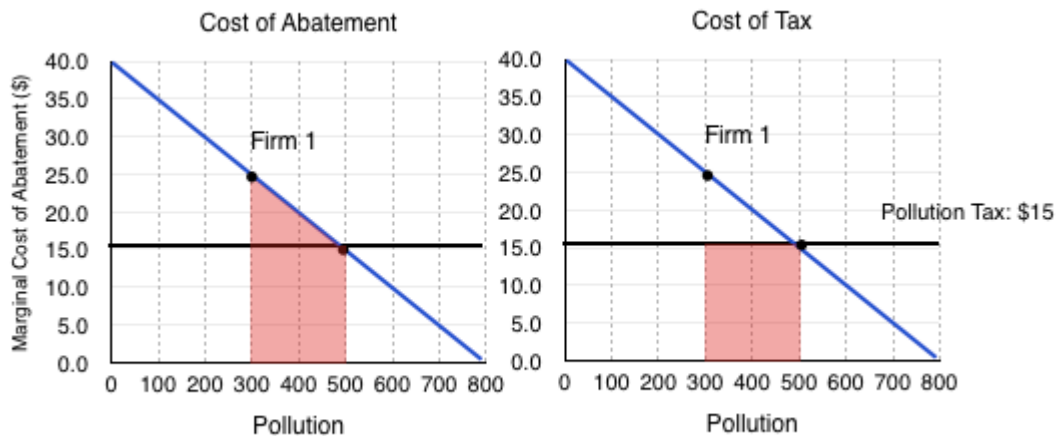


Figure 5.3h

In this case, we see the cost of abatement is higher than the cost of the tax. This means that the firm will pay the tax. Notice that this causes Firm 1 to reduce emissions to the same level as under cap and trade. Doing the same analysis for Firm 2 would lead us to the same conclusion. This means that a pollution tax also causes firms to reduce emissions in the most efficient way possible.

Key Concepts and Summary

Examples of market-oriented environmental policies include taxes, cap and trade, and pollution reduction. These policies ensure those who impose negative externalities face the social cost. Consider the following table which summarizes the 3 policies:

	Is it Efficient?	Who Gains?	What decisions does government make?
Pollution Standards	No	No one	The government has to set the rate of pollution.(<u>quantity decision</u>)
Cap and Trade	Yes	The more efficient firm can earn revenue.	The government has to decide how many permits to allocate.(<u>quantity decision</u>)
Pollution Tax	Yes	The government earns tax revenue.	The government has to decide on the tax rate.(<u>price decision</u>)

Glossary

Abatement

reduction or lessening, in this case the reduction of pollution

Cap and Trade

a government program designed to cap the total level of emissions from firms by creating a market for pollution permits

Pollution Allowance

a permit that allows a firm to emit a certain amount of pollution; firms with more permits than pollution can sell the remaining permits to other firms

Pollution Standard

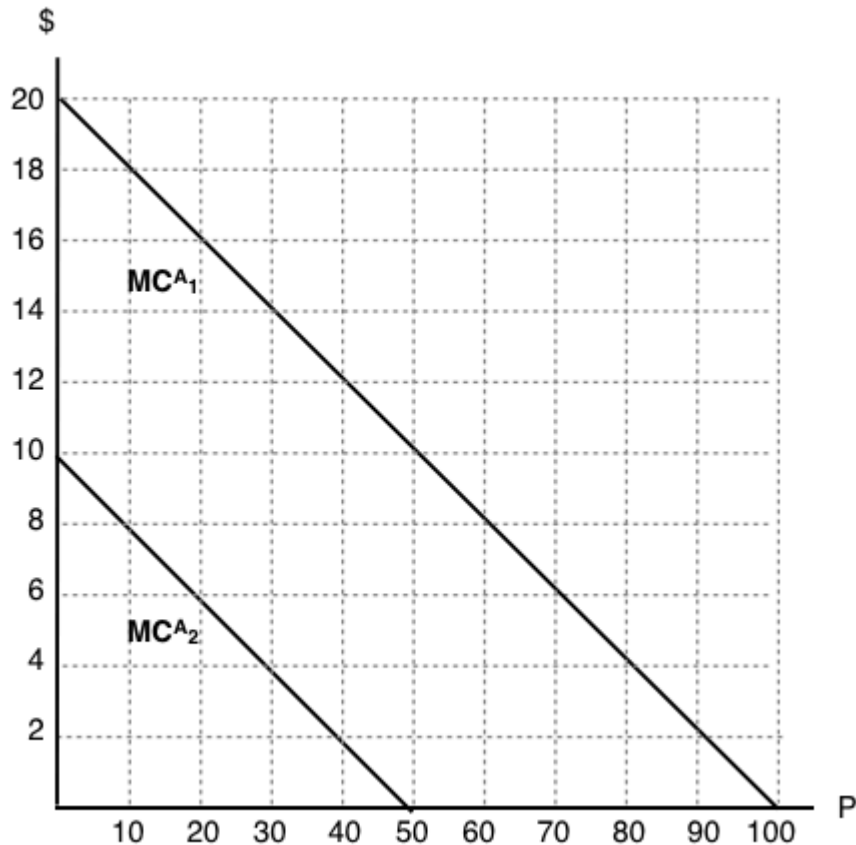
legal requirements that set limits on the permissible amount of pollutants, restrict the quantity of pollution that a firm emits

Pollution Tax

a tax imposed on the quantity of pollution that a firm emits

Exercises 5.3

Use the diagram below to answer the following THREE questions, which illustrates the marginal costs of abatement for two polluting firms.



1. If the marginal private cost of pollution is zero for each firm then, in the absence of regulation, pollution levels will be:

- a) $P_1 = 100, P_2 = 100$.
- b) $P_1 = 50, P_2 = 100$.
- c) $P_1 = 50, P_2 = 50$.
- d) $P_1 = 100, P_2 = 50$.

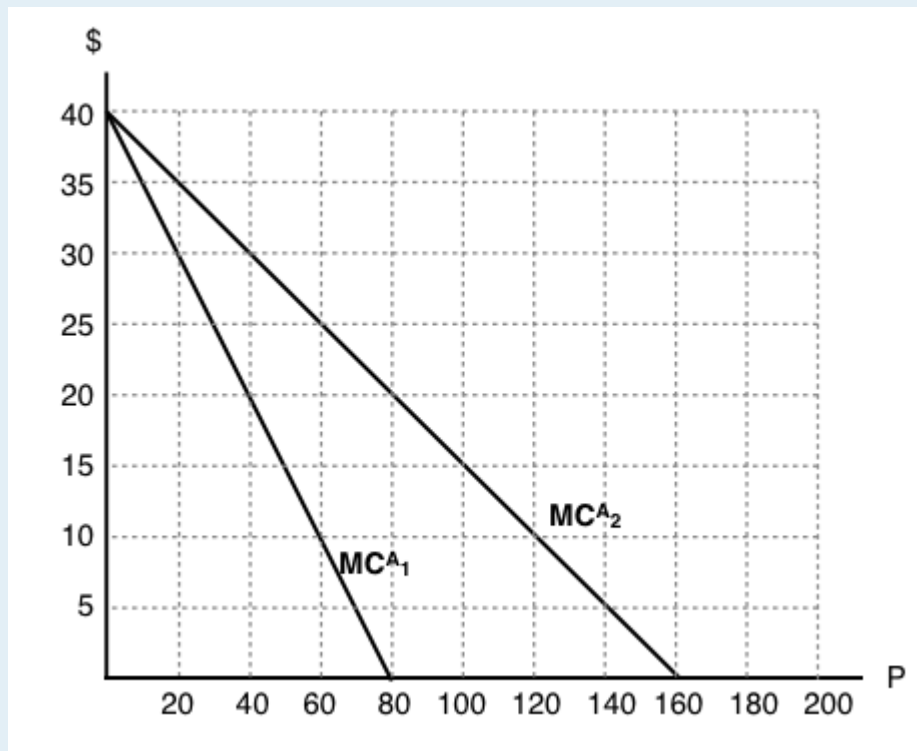
2. If a pollution tax of \$6 per unit is introduced, pollution levels will be:

- a) $P_1 = 60, P_2 = 10$.
- b) $P_1 = 70, P_2 = 20$.
- c) $P_1 = 80, P_2 = 30$.
- d) $P_1 = 90, P_2 = 40$.

3. Suppose a cap and trade program is introduced to reduce aggregate emissions. If each firm receives HALF the permits in the initial allocation, then which firm will sell permits and which firm will buy?

- a) Firm 1 will sell permits and firm 2 will buy permits.
- b) Firm 1 will buy permits and firm 2 will sell permits.
- c) We need to know the number of permits in total, in order to figure out who will sell and who will buy.
- d) We need to know the equilibrium price of permits, in order to figure out who will sell and who will buy.

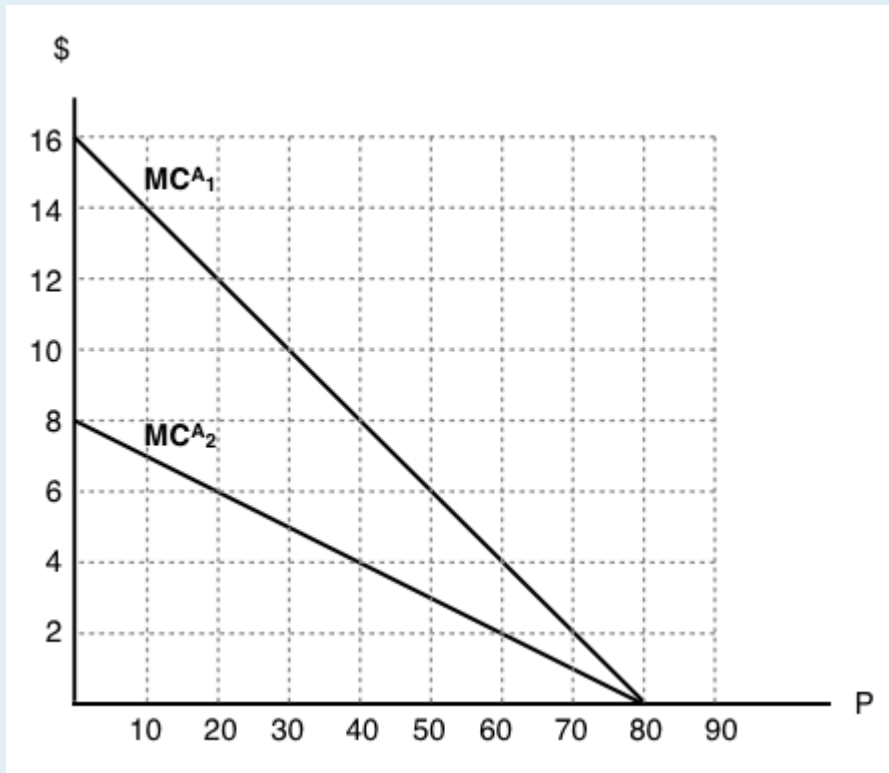
The following THREE questions refer to the diagram below, which illustrates the marginal abatement cost curve for two firms. Assume these are the only two emitters of pollution.



4. If a pollution tax of \$10 per unit is introduced, then how much will each firm emit in the taxed equilibrium?
- Firm 1 will emit 60 units, firm 2 will emit 120 units.
 - Firm 1 will emit 80 units, firm 2 will emit 160 units.
 - Firm 1 will emit 20 units, firm 2 will emit 40 units.
 - Each firm will emit no pollution.
5. If a cap and trade program is introduced in which aggregate emissions are restricted to 120 units, what is the competitive equilibrium price for permits?
- \$10.
 - \$15.
 - \$20.
 - We cannot determine the equilibrium price without knowing the initial distribution of permits.
6. Suppose a cap and trade program is introduced, in which firm 1 receives 100 permits and firm 2 receives 120 permits, in the initial allocation. Which of the following statements is true?
- Given the initial allocation of permits, neither firm will want to buy permits.
 - Given the initial allocation of permits, neither firm will want to sell permits.
 - In equilibrium, firm 1 will buy permits and firm 2 will sell permits.
 - In equilibrium, firm 1 will sell permits and firm 2 will buy permits.
7. Which of the following statements about environmental policy is true?
- A cap and trade policy allows the government to directly control the quantity of pollution, but the price of pollution is determined by private agents.
 - A carbon tax allows the government to directly control the price of pollution, but the quantity of pollution is determined by private agents.
 - Both carbon taxes and cap and trade programs will result in least-cost abatement.

- a) I only.
- b) II only.
- c) I and II only.
- d) I, II, and III.

The following two questions refer to the diagram below, which illustrates the marginal abatement cost curve for two polluting firms. Note that in the absence of regulation, each firm will emit 80 units of the pollutant in question, so that aggregate emissions are 160 units.



8. If a pollution tax of \$8 per unit is introduced, then what is the percentage decrease in aggregate emissions?
- a) 25%.
 - b) 50%.
 - c) 75%.
 - d) 100%.
9. If a cap and trade program is introduced in which aggregate emissions are restricted to 100 units, what be the equilibrium price of permits?
- a) \$2.
 - b) \$4.
 - c) \$6.
 - d) \$8.

Case Study - Sulphur Dioxide



(Credit: United Nations Photo/ Flickr/ CC BY-NC-ND 2.0)

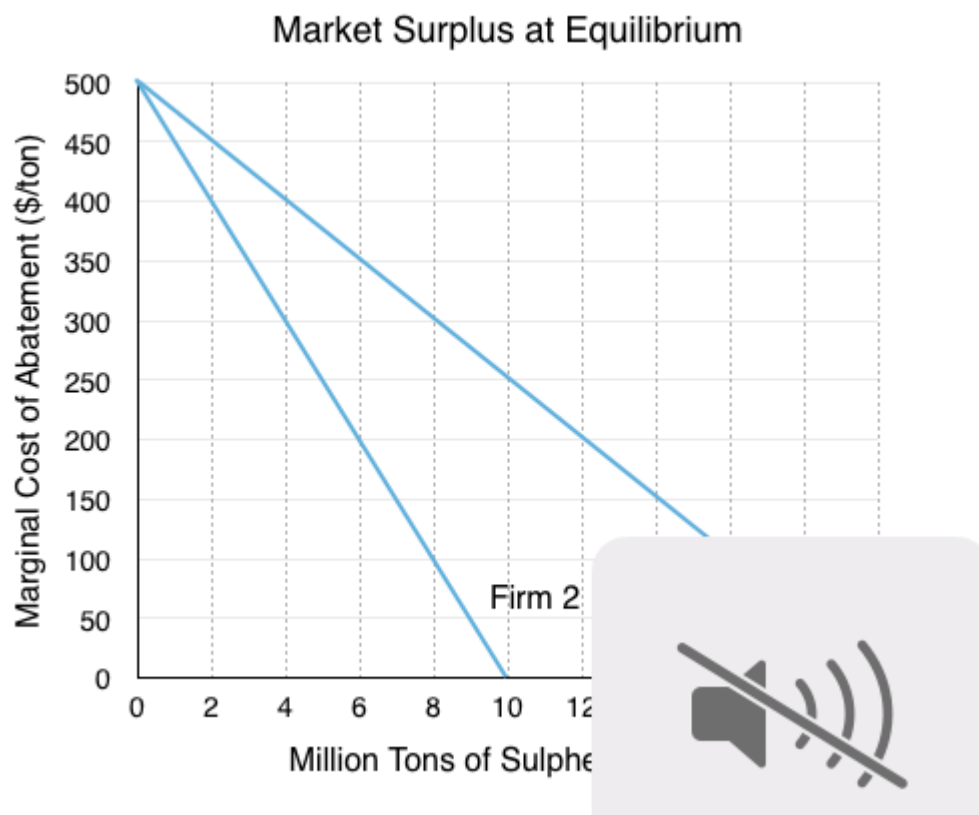
The world's first large scale application of cap and trade to control pollution was approved by the Bush administration in November 1990. Since then, it has been hailed by many as a landmark event in environmental regulation. Introduced under the Clean Air Act Amendments of 1990, the policy was launched to combat the growing threat of acid rain. It has been estimated that using this policy rather than command and control regulations saved the economy \$1 billion a year. A new report from Harvard Environmental Economics Program concludes that the program was a great success by almost all measures. The legislation capped emissions at 8.95 million tons annually, allowing power plants to slash SO₂ in the most efficient way.

At the beginning of the program, the government allocated allowances, denominated in tons of SO₂ emissions, to power plants covered by the law, according to formulas contained in the legislation. If annual emissions at a regulated facility exceeded the allowances allocated to that facility, the facility owner could either buy allowances or reduce emissions, whether by installing pollution controls, changing the mix of fuels used to operate the facility, or by scaling back operations. If emissions at a regulated facility were reduced below its allowance allocation, the facility owner could sell the extra allowances or bank them for future use. These opportunities created incentives to find ways to reduce emissions at the lowest cost.



Read a full report about the full effects of this cap and trade program.

Let's examine this program, and compare it to a program in the EU that was less successful. Assume there are only two firms in the market and Firm 1 and Firm 2 face abatement curves as shown below:



1. How much will the firms pollute before policy intervention?
2. If the government implemented a cap and trade system, distributing a total of 12 million permits, with 6 million to each firm, who would sell and who would buy permits?
3. How much would the seller be willing to accept, and how much will the buyer be willing to pay?
4. What is the equilibrium price of permits, and the equilibrium quantity of Sulphur Dioxide production? After the exchange of permits on the open market, how much does each firm emit?

5. What are the total benefits and total costs to each firm from trading permits? Show that the trade was a Pareto Improvement.

Instead of cap and trade, a common policy is for the government to set a carbon tax. As a reminder, a carbon tax imposes a tax on each unit of emissions and gives firms an incentive to reduce pollution whenever doing so would cost less than paying the tax. As such, the quantity of pollution reduced depends on the chosen level of the tax.

6. What is the correct tax level to receive the same result as in question 2?

7. How much revenue will the government raise from the tax?

8. What assumptions does the government have to make under cap and trade? What about under the carbon tax?

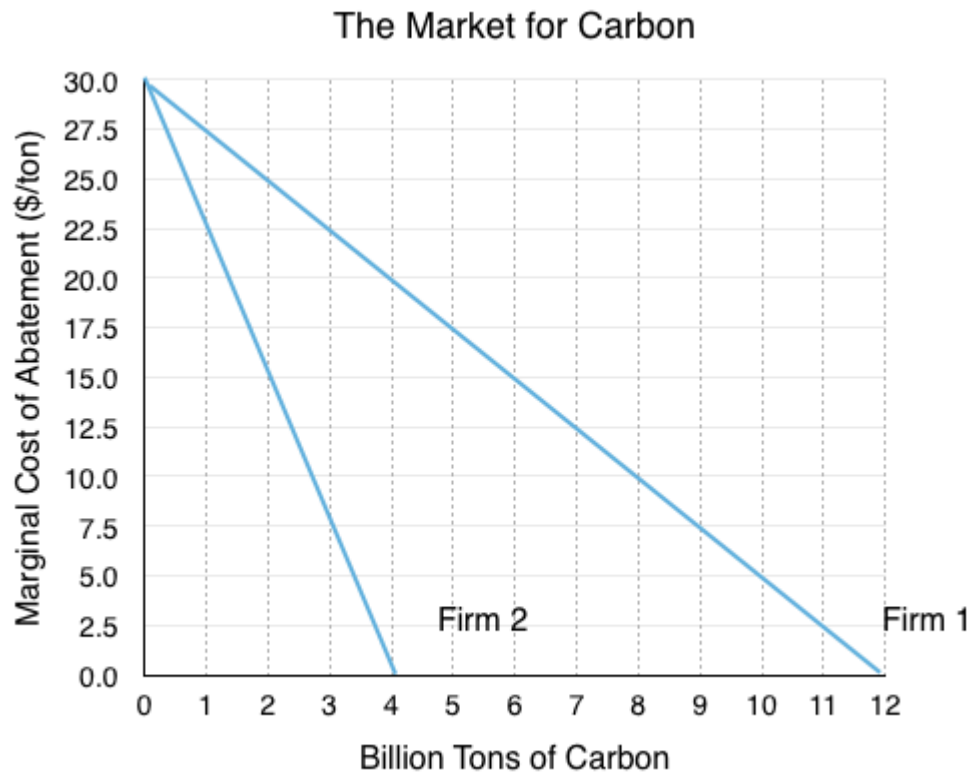
The SO₂ allowance-trading program was highly effective. SO₂ emissions from electric power plants decreased 36 percent (from 15.9 million to 10.2 million tons) between 1990 and 2004. The program's long-term goal of reducing annual nationwide emissions to 8.95 million tons was achieved in 2007.

Not all cap and trade programs have been effective. The EU Emissions Trading System for example has been largely unsuccessful. The cap was set at 16 billion tonnes, or roughly half the European Union's total carbon emissions. Unfortunately the government overestimated the demand for carbon, and to make things worse a recession reduced industrial demand.



Read more about the failure of the EU Emissions Trading Scheme.

Assume Firm 1 and Firm 2 face abatement curves as shown below:



9. If the government implemented a cap and trade system, distributing a total of 16 million permits, how much will emissions be reduced by as a result of this policy?

Once the cap and trade program was implemented, it was hard to adjust it. The EU later attempted to take 900m tonnes of carbon allowances off the market and reintroduce them when it was hoped demand would be stronger, but the attempt failed to pass through European parliament.

Another way to correct the program would be for the government to buy the permits off the firms themselves.

10. If the government wanted to reduce emissions by 50% by purchasing permits, what is the minimum amount they would have to pay?

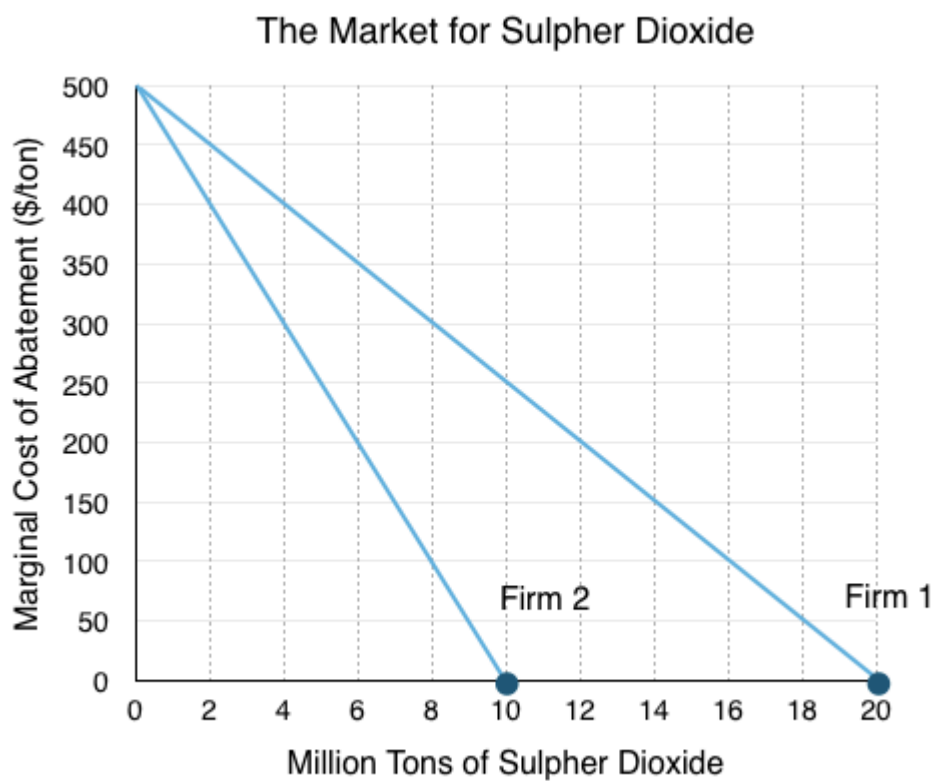
As you can see, while it may seem a cap and trade program would be easy to readjust if quantity assumptions are wrong, in reality implementing a policy and communicating it to the firms can be quite difficult.

In this case study we have shown how microeconomic concepts of abatement and carbon-tax can be used to understand past policy strategies. Do you have an example you think would make a good case study? Contact economics103@uvic.ca to propose your story.

Solutions: Case Study - Sulphur Dioxide

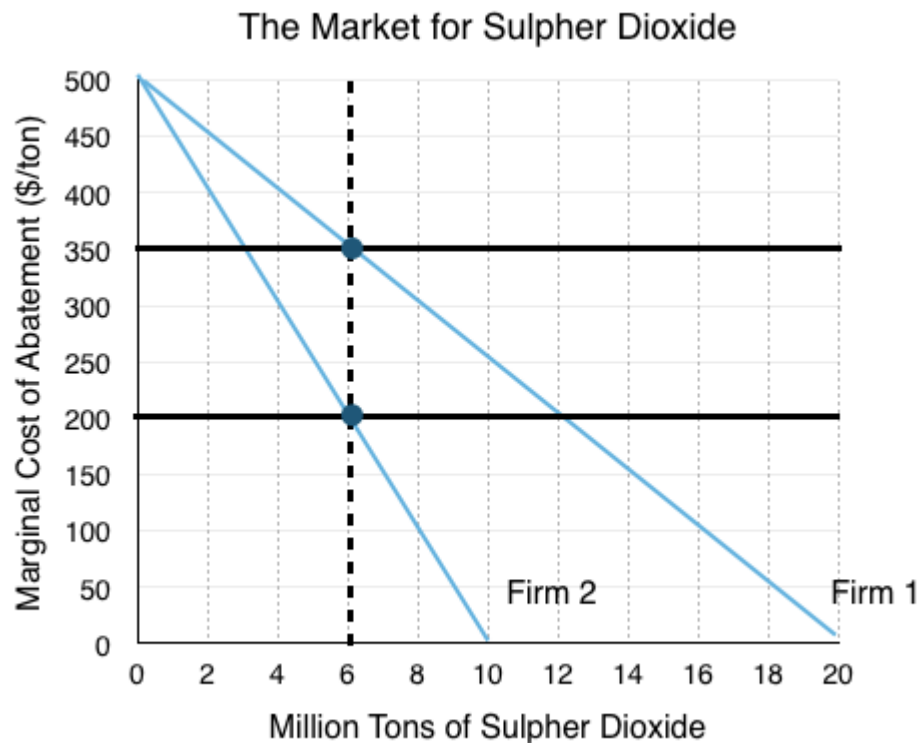
1. How much will the firms pollute before policy intervention?

Without policy intervention, there is no benefit for a firm to decrease its pollution. Even though reducing the first few units costs relatively little, the firm maximizes profits by polluting its full amount of pollution, where the costs of abatement are 0. This results in Firm 1 polluting 10 million tons of Sulphur Dioxide, and Firm 2 polluting 20 million tons, for a total of 30 million tons.



2. If the government implemented a cap and trade system, distributing a total of 12 million permits, with 6 million to each firm, who would sell and who would buy permits?

Since we know that each firm is given 6 million permits, we need to compare the marginal cost of abatement for each firm at that level. Drawing a line up from 6 million we see that for Firm 1, their marginal cost of abatement is \$350, whereas Firm 2 faces a cost of \$200. Since Firm 1 values pollution more than Firm 2, there are mutually beneficial exchanges where Firm 1 buys permits from Firm 2.

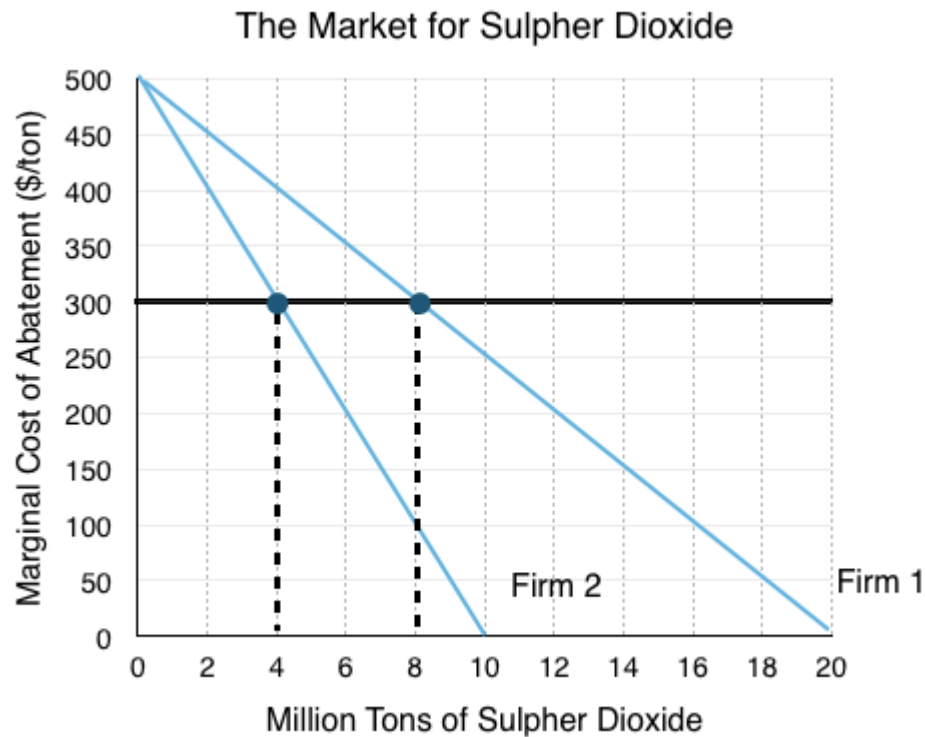


3. How much would the seller be willing to accept, and how much will the buyer be willing to pay?

At 6 million permits, we can see that Firm 1 is willing to pay up to their marginal cost of abatement, or \$350, and Firm 2 is willing to accept at least enough to cover their lost benefit from polluting, or \$200. Notice that after Firm 1 buys a permit from Firm 2, this relationship changes – Firm 1 will be willing to pay slightly less, and Firm 2 will need to be paid slightly more.

4. What is the equilibrium price of permits, and the equilibrium quantity of Sulphur Dioxide production? After the exchange of permits on the open market, how much does each firm emit?

To find the equilibrium price and quantity, we need to find a price level for permits such that the marginal cost of abatement for both firms is equal. By looking at our previous graph, and following what happens each time Firm 1 buys a permit from Firm 2, we see that Firm 1's marginal cost falls and Firm 2's marginal cost rises until they are equal.

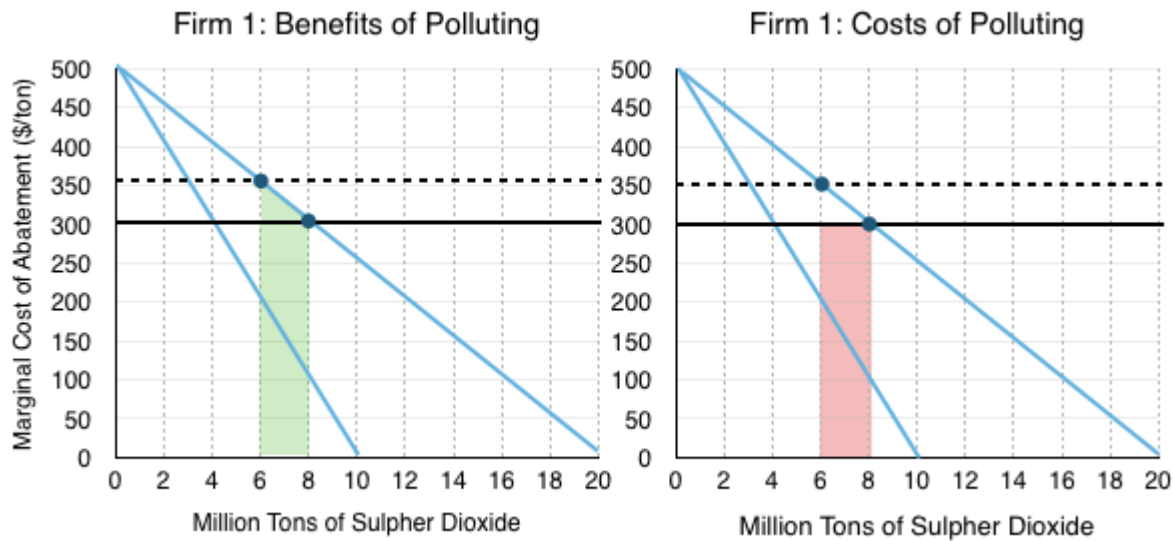


The transactions continue until Firm 1 has 8 million permits and Firm 2 has 4 million units. At this point the marginal costs of abatement are equal so no mutually beneficial transactions exist. Equilibrium quantity is 12 million, as regulated by the government, and the market price for permits is \$300.

5. What are the total benefits and total costs to each firm from trading permits? Show that the trade was a Pareto Improvement

For Firm 1, buying more permits gives them the benefit of polluting more, which is equal to the reduction of the costs of abatement as shown in the green area. The cost is the amount they have to pay Firm 2, which is equal to the market price of the permit (\$300) multiplied by the number they purchase as shown in the red area.

Note that while Firm 1 is technically willing to pay more than \$300, in the perfectly competitive market for permits we usually deal with, if Firm 2 tries to charge any more than \$300, Firm 1 will purchase permits from another firm.



Calculating costs and benefits:

Benefits (green area):

$$[\$300 \times (8-6)] + [(\$350-\$300) \times (8-6)]/2$$

$$=\$650 \text{ million}$$

Costs (red area):

$$[\$300 \times (8-6)]$$

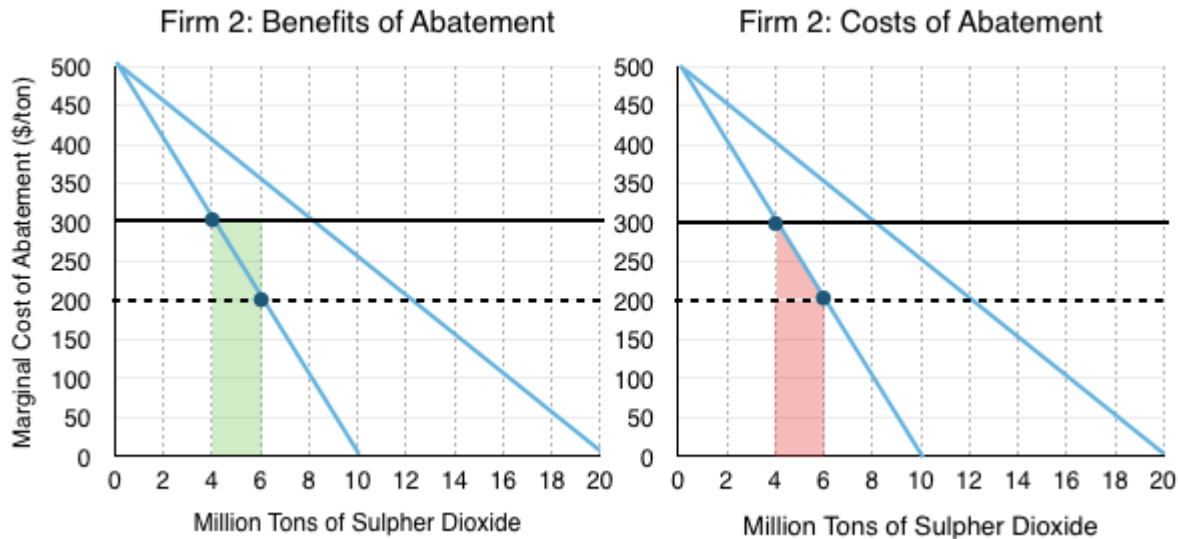
$$=\$600 \text{ million}$$

Surplus:

$$\$650 \text{ million} - \$600 \text{ million}$$

$$=\$50 \text{ million}$$

For Firm 2, selling permits means they will have to pollute less. This cost of abatement is equal to the red area below, and is the down side for selling permits. This cost is outweighed by the benefit of selling permits at the market price of \$300. The revenue Firm 2 receives is depicted in the green area.



Calculating costs and benefits:

Benefits (green area):

$$[\$300 \times (6-4)] + [(\$350-\$300) \times (6-4)]/2$$

$$=\$600 \text{ million}$$

Costs (red area):

$$[\$200 \times (6-4)] + [(\$300-\$200) \times (6-4)]/2$$

$$=\$500 \text{ million}$$

Surplus:

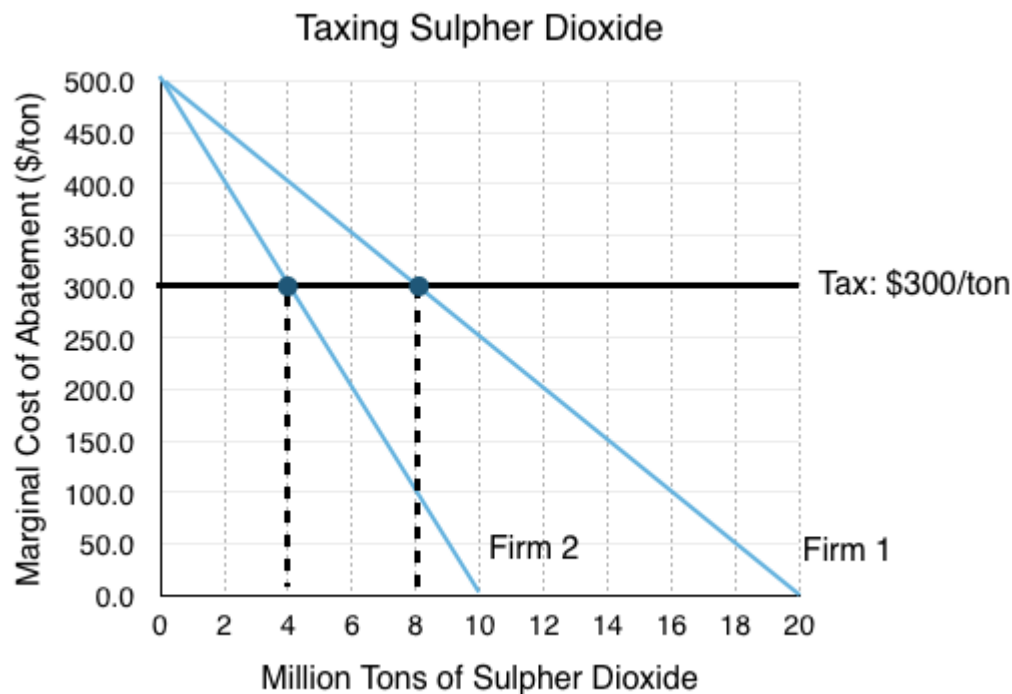
$$\$600 \text{ million} - \$500 \text{ million}$$

$$=\$100 \text{ million}$$

We can see that since both firms benefited from the trade, that this is indeed a Pareto improvement from when they were each emitting 6 million tons of Sulphur Dioxide. The total surplus gain is equal to \$150 million (\$50 million + \$100 million).

6. What is the correct tax level to receive the same result as in question 2?

The tax level to give us the same result as before is equal to the market price of permits. This price incentivises the same action from Firms 1 and 2, but rather than making trades with each other, they are making decisions on whether or not to abate on the margin with consideration of the tax. They will abate as long as their marginal cost of abatement is lower than the tax rate.



7. How much revenue will the government raise from the tax?

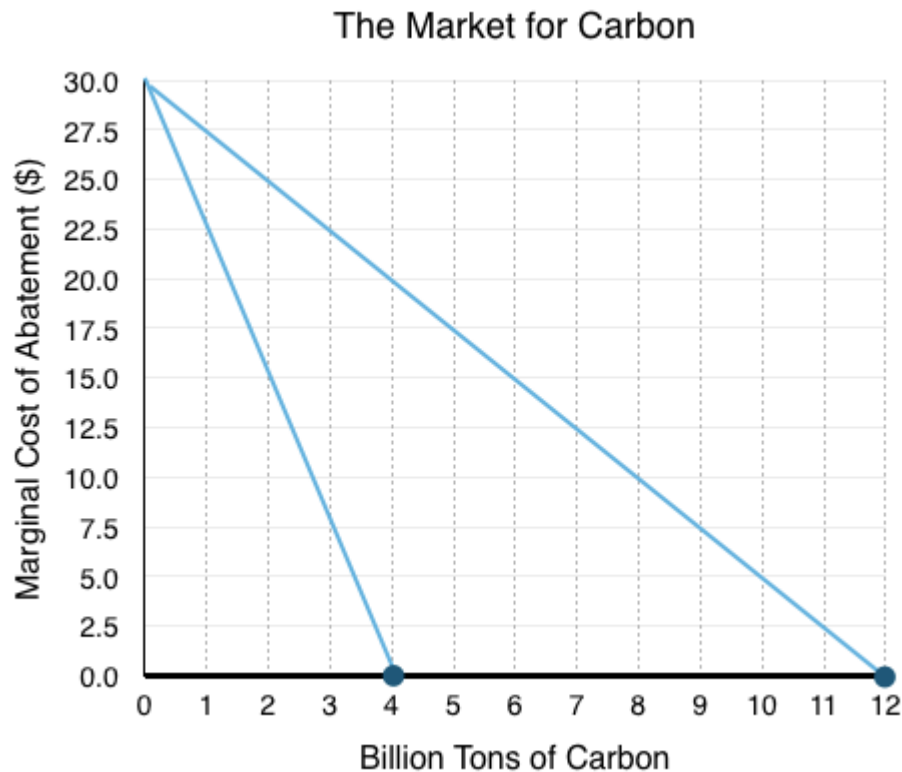
The government earns \$300/ton of Sulphur Dioxide emitted. Since total emissions are 12 million tons, the government will make \$3.6 billion. ($\300×12 million)

8. What assumptions does the government have to make under cap and trade? What about under the carbon tax?

Under cap and trade the government has to make assumptions and decide on the quantity to cap emissions, whereas under a carbon tax, the government has to make assumptions and decide on the price to tax emissions. If the government wants to reduce emissions by 50%, with a carbon tax it would have to know the marginal cost of abatement for each of the firms. With cap and trade, they just need to know how much firms are emitting. Of course, as mentioned in the following explanation of the EU policy, sometimes emissions will change as a result of changing demand, which can make it difficult to set the right quantity under cap and trade.

9. If the government implemented a cap and trade system, distributing a total of 16 billion permits, how much will emissions be reduced by as a result of this policy?

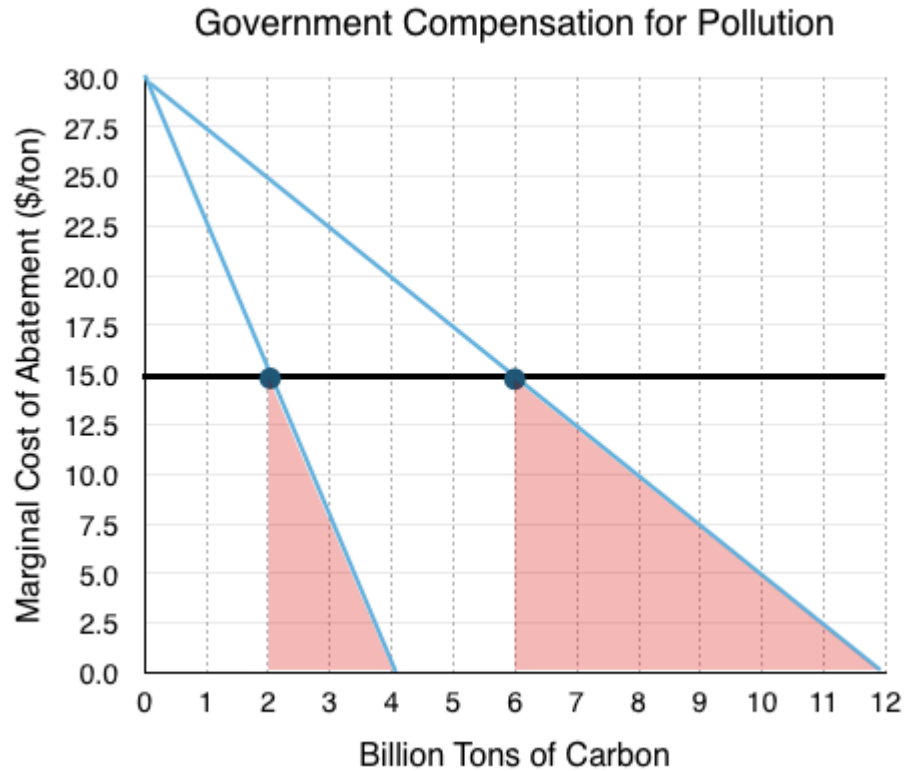
In this case, since we don't know the initial distribution of the permits, we can skip right to the result of the cap and trade. Knowing that firms will trade permits until the marginal cost of abatement is equal, we need to find a horizontal line where the total amount of pollution sums to 16 billion tons of Carbon. As shown in the graph below, this occurs at a price of \$0/permit. This means that the government actually gave out enough permits for the firms to continue to pollute at the levels they had before the cap and trade program, rendering the policy ineffective.



10. If the government wanted to reduce emissions by 50% by purchasing permits, what is the minimum amount they would have to pay?

After trades, we know that Firm 1 will end up with 12 billion permits, and Firm 2 will end up with 4 billion permits. If the government wants to reduce emissions by 50% they will have to purchase 8 billion permits to make the new pollution levels 8 billion. We can quickly identify that the equilibrium price for 8 billion permits is \$15, so one way the government could reduce pollution is offer \$15 to the firms.

Notice however that the government could get away with paying less. As long as they pay the firms for the marginal cost of abating to 8 billion tons of Carbon, the firms will be indifferent to abating or not.



Calculating the total abatement costs:

Firm 1 – Abating from 12 billion to 6 billion (Area A):

$$\$15 \times (12 - 6) = \$90 \text{ billion}$$

Firm 2 – Abating from 4 billion to 2 billion (Area B):

$$\$15 \times (4 - 2) = \$30 \text{ billion}$$

Total Costs to the Government

$$\$90 \text{ billion} + \$30 \text{ billion} = \$120 \text{ billion}$$

As shown, trying to purchase permits out of the market can become quite expensive.

Topic 5 Solutions

Solutions to Exercises 5.1

1. **D**
2. **D**
3. **B**
4. **D**
5. **B**
6. **B**
7. **A**
8. **B**
9. **A**

Solutions to Exercises 5.2

1. **B**
2. **D**
3. **B**
4. **D**

Solutions to Exercises 5.3

1. **D**
2. **B**
3. **B**
4. **A**
5. **C**
6. **D**
7. **D**
8. **C**

9. **B**

Topic 5 References

BBC News. “Keystone XL Pipeline: Why is it So Disputed.” January 24, 2017. <http://www.bbc.com/news/world-us-canada-30103078>

Chan, Gabriel, Robert Stavins, Robert Stowe, and Richard Sweeney. Harvard Environmental Economics Program. *The SO₂ Allowance Trading System and the Clean Air Act Amendments of 1990*. January 2012. https://www.hks.harvard.edu/m-rcbg/heep/papers/SO2-Brief_digital_final.pdf

The Economist. “ETS, RIP.” April 20, 2013. <http://www.economist.com/news/finance-and-economics/21576388-failure-reform-europes-carbon-market-will-reverberate-round-world-ets>

Johnson, Willian Oscar. Sports Illustrated. “Back on Track.” April 30, 1990. <https://www.si.com/vault/1990/04/30/121923/back-on-track-earth-day-success-story-the-chattanooga-choo-choo-no-longer-spews-foul-air>

Topic 4 Part 2: Applications of Supply and Demand

4.4 Introduction to Government Policy



After two years of the first Soviet five year plan, Joseph Stalin announced that the plan would be completed in four years. In response, his propagandist Gumer launched a campaign with a poster reading “2+2=5: Arithmetic of a counter-plan plus the enthusiasm of the workers.”
(Credit: Q5e3t1/ Wikimedia Commons/ CC-BY-SA-4.0)

A Five Year Plan

The Soviet Union began its first 5-year plan in 1928, an economic strategy to launch the country into the industrial revolution. The strategy involved heavily enforced quotas aimed at developing heavy industry and collectivizing agriculture. The five-year plans had mixed results. Although some of the plans were successful at meeting their goals, such as a build-up in military strength, consumer goods were neglected. Collectivism led to famine and the death of millions.

So far, we have looked at our competitive market model with the assumptions of free-market, or no government intervention. Five-year plans do not adhere to these assumptions, resembling a command and control economy where the government takes an active role in managing the market. While we won't go as far as command and control in this topic, we will look at some policies the government might implement and the overall effects they have on the economy.



[Read more about the Soviet Five-Year Plans](#)

Why the Government Intervenes

So far, we have assumed that the only players in the market are the government, consumers, and firms. This means that **market surplus** (consumer surplus + producer surplus + government revenue/expenditure) is our sole measure of efficiency.

We have already learned that competitive markets maximize market surplus. This means that any government intervention that changes our equilibrium will inevitably decrease market surplus, resulting in deadweight loss and an inefficient outcome.

If intervention leads to an inefficient outcome, why would the government intervene? Several reasons are outlined below

1. Government Revenue

The government may decide to implement a policy to generate revenue. When we explore taxes, we will see that policies that generate revenue in inelastic markets are especially appealing.

2. Politics

Not all policy is good for society. Special interest groups will sometimes get what they ask for, even if their demands create inefficiencies. Sometimes politicians care more about what will get them votes, than what is good for society.

3. Equity

The government does not always prioritize efficiency. Policies like price ceilings are often intended to help consumers in low-income brackets. Equity is a topic that is explored in more depth in upper level economics. Efficient outcomes can result in a small group accumulating all the wealth. Often this is not viewed as the best outcome.

4. Externalities

In Topic 5, we will see that not all costs are incorporated in our models. For our gasoline market, why did we not consider pollution? There are many externalities and external costs that are not accounted for by firms and consumers. Once these are incorporated into our model, there are clear arguments to be made for government intervention.

Policy Implements

There are many different policies that governments can use to alter the market. Some are much more complicated than others, but many fall into four broad classes we will explore in detail:

1. **Price Controls**
2. **Quantity Controls**
3. **Taxes and Subsidies**
4. **Tariffs**

4.5 Price Controls

Learning Objectives

By the end of this section, you will be able to:

- Explain price controls, price ceilings, and price floors
- Understand why price controls result in deadweight loss

The first government policy we will explore is price controls. In Topic 3, we examined what will occur if price is below or above equilibrium price, and concluded that market pressures will return the market to equilibrium. But what if the government regulates the market so that it cannot move?

Price Ceiling

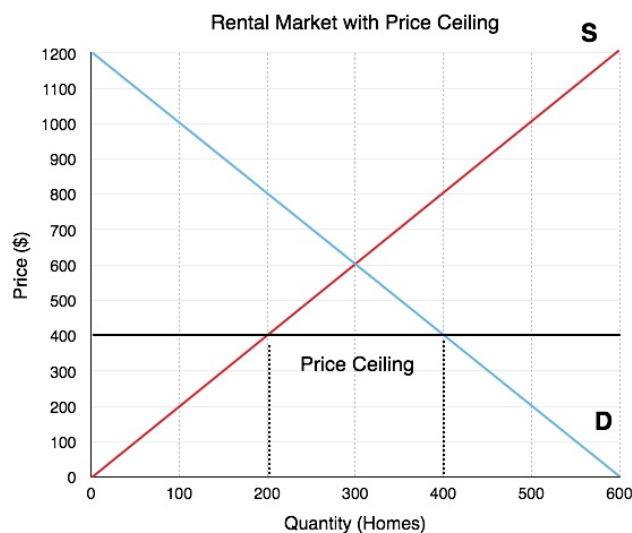


Figure 4.5a

A common example of a price ceiling is the rental market. Consider a rental market with an equilibrium of \$600/month. If the government wishes to decrease this price to make it more affordable for renters, it may place a binding **price ceiling** of \$400/month. This policy means the landlords cannot charge more than \$400 per month. What will this do to our equilibrium? Refer to Figure 4.5a. Whereas before 300 homes were rented, there is now a housing shortage. At the lower price of \$400/month, quantity supplied is only 200 housing units and a quantity demanded is 400 housing units. This means that 200 renters who want to rent can no longer find homes! This is important, because when quantity demanded and quantity

supplied are unequal, the market is restrained by the lower value.

Despite this information, it is not enough to tell us if the market is more or less efficient – our metric for that is market surplus. Even though some renters cannot find homes, the government still successfully lowered the price for some consumers. So how do these effects weigh out?



(Credit: Manoel Lemos/ Flickr/ CC BY-SA 2.0)

Save Us R2-D2, You're Our Only Hope!

If the equilibrium price is \$6 and the government says you cannot charge more than \$8, the government intervention is meaningless or 'non-binding'. Whereas price ceiling aims to lower the price, price floors aim to raise it. Since this seems backwards, it is easy to get confused about when price ceilings and price floors are binding. Rather than memorizing which is which, consider an example from Star Wars to help remember.

In the original Star Wars, Luke, Leia, Han Solo, and Chewbacca are trapped in a garbage disposal that begins to collapse inwards. The room becomes more constrained as the walls come together. If you were in a room, what would cause you to feel constrained? If the ceiling is rising you have more space, so it is not constraining. Similarly, if the floor falls, you have more room. If the ceiling starts falling, or the floor begins to rise then you are constrained. This helps us remember an important principle:

Only a price floor above equilibrium or a price ceiling below equilibrium is binding.

Calculating Market Surplus

To find out the impact of government's price ceiling, we must calculate market surplus before, and after a policy. This method will be an important gauge for all our policy analysis in this topic. Consider Figure 4.5b, where the effects of the Price Ceiling is shown.

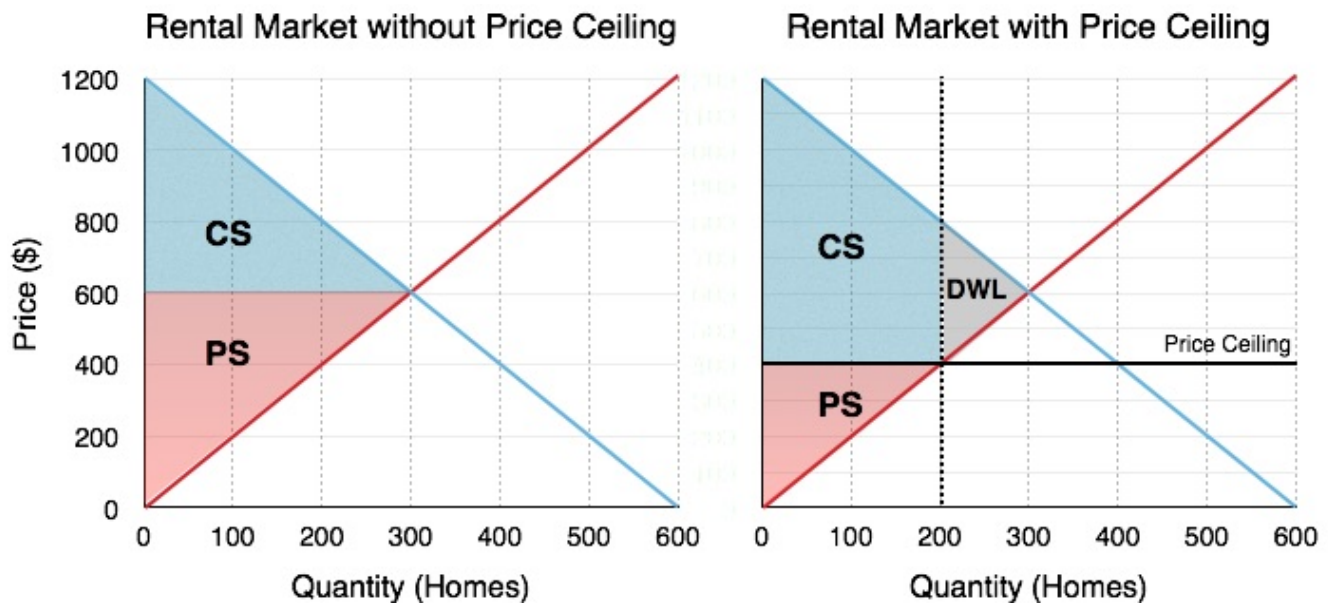


Figure 4.5b

Before

The calculation of market surplus before policy intervention should be straight forward by now. Market surplus is equal to the sum of consumer surplus and producer surplus, calculating from Figure 4.5b:

Consumer Surplus (Blue Area): $[(1200-600) \times 300]/2 = \$90,000$

Producer Surplus (Red Area): $[(600) \times 300]/2 = \$90,000$

Market Surplus: \$180,000

After

The calculation of market surplus after intervention is less obvious. Consumers have lost surplus in some areas, but gained surplus in others (we will look at this closely in the next Figure 4.5c). Producers have lost surplus.

Consumer Surplus (Blue Area): $[(1200-800) \times 200]/2 + (400 \times 200) = \$120,000$

Producer Surplus (Red Area): $[(600) \times 300]/2 = \$40,000$

Market Surplus: \$160,000

Looking before and after we see that producer surplus has decreased and consumer surplus increased – but the decrease in producer surplus outweighed the effects of the increase in consumer surplus, causing deadweight loss. This means that the market is less efficient, because by removing the regulation, the market as a whole is better off.

What About Redistribution?

It's easy to look at the total numbers and show that market surplus has decreased, but how does this change affect individual consumers and firms?

In Figure 4.5c the areas which change as a result of the policy are shown.

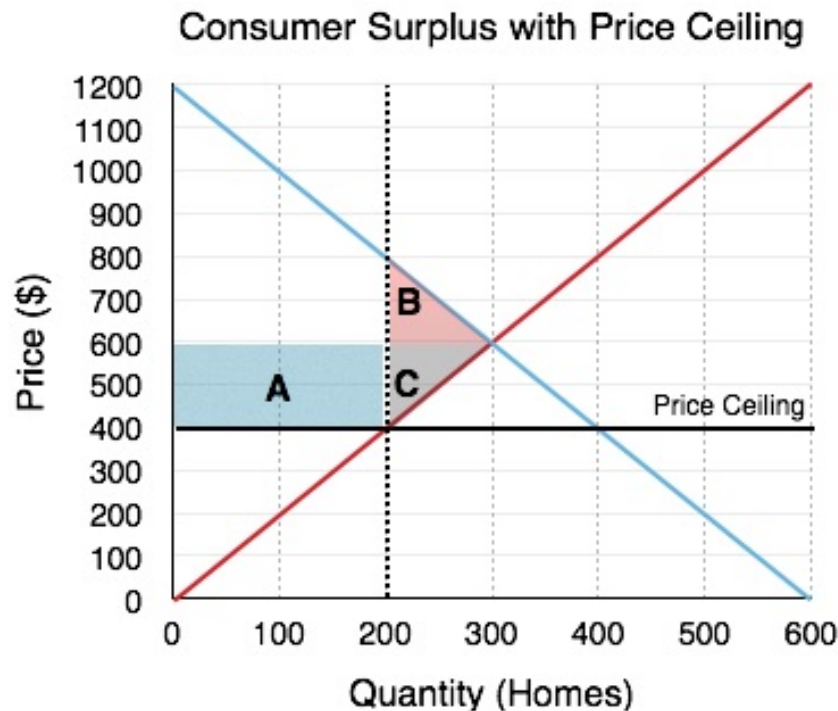


Figure 4.5c

Consumers

Consumers gain an area of A and lose an area of B.

Surplus Decrease – Area B

As mentioned previously, the quantity supplied in the market decreases from 300 rental units to 200. This means that 100 renters can no longer find homes. We can assume that the consumers who are willing to pay most for the homes will end up with the rental units (they will start looking earlier, exploring more options etc.) so consumers on the demand curve WTP between \$800 and \$600 will be cut out of the market. This results in a \$10,000 loss in consumer surplus, shown in Figure 4.5c as area B.

Surplus Increase – Area A

Alternatively, the 200 consumers who are able to find homes now go from paying \$600/month to paying \$400/month, resulting in a \$40,000 increase in consumer surplus. This is shown in Figure 4.5c as area A.

Overall, consumers gain \$30,000, which is consistent with the calculations above.

Producers:

Producers lose areas C and A

Surplus Decrease – Area C

The price ceiling causes the landlords to reconsider staying in the rental market, as fewer landlords can make a profit with the lower price. This causes 100 landlords to leave the market, reducing their producer surplus to nothing. This forgone surplus amounts to \$10,000 and is represented in Figure 4.5c as area C.

Surplus Decrease – Area A

Like consumers, some producers will remain in the market, but these producers now have to face the reality of lower rent revenue. Each of the 200 landlords loses \$200 of revenue. This results in a \$40,000 decrease, represented as area A.

Overall, producers lose \$50,000, which is consistent with the calculations above.

Transfer and Deadweight Loss:

We can summarize the overall effects in the market as two categories: a transfer of surplus and a deadweight loss.

Transfer

Notice that Area A was a transfer from the landlords to the renters who remain in the market. 200 renters now save \$200 each, and 200 landlords now lose \$200 each. It is important to recognize that this transfer is a result of the **price effect** of the policy, meaning it occurred because price differed from equilibrium.

DWL

Alternatively, the deadweight loss results because there are players who are no longer able to be a part of the market. 100 renters and 100 landlords all lose a varied amount based on their willingness to pay and marginal costs. This change is a result of the **quantity effect** on the policy, meaning it occurred because quantity differed from equilibrium.

A change in quantity from the equilibrium value is the only thing that causes a DWL. Changes in price will cause transfers. While the two effects work together, it is important to be able to distinguish between the two.

This was a fairly lengthy explanation of price ceilings, but it is one that will lead into the discussion of all policy. Every policy we will look at in microeconomics has both a quantity effect and a price effect, and it is important to understand how the policy impacts individual market players.

Price Floor

While the price floor has a very similar analysis to the price ceiling, it is important to look at it separately. A common example of a price floor is a minimum wage policy. The labor market is unique in that the workers are the producers of labor and the firms are consumers of labor. Price can be denominated in hourly wage, with the quantity of workers on the x-axis. If the government sets a binding minimum wage (price floor), it must be set above the equilibrium price.

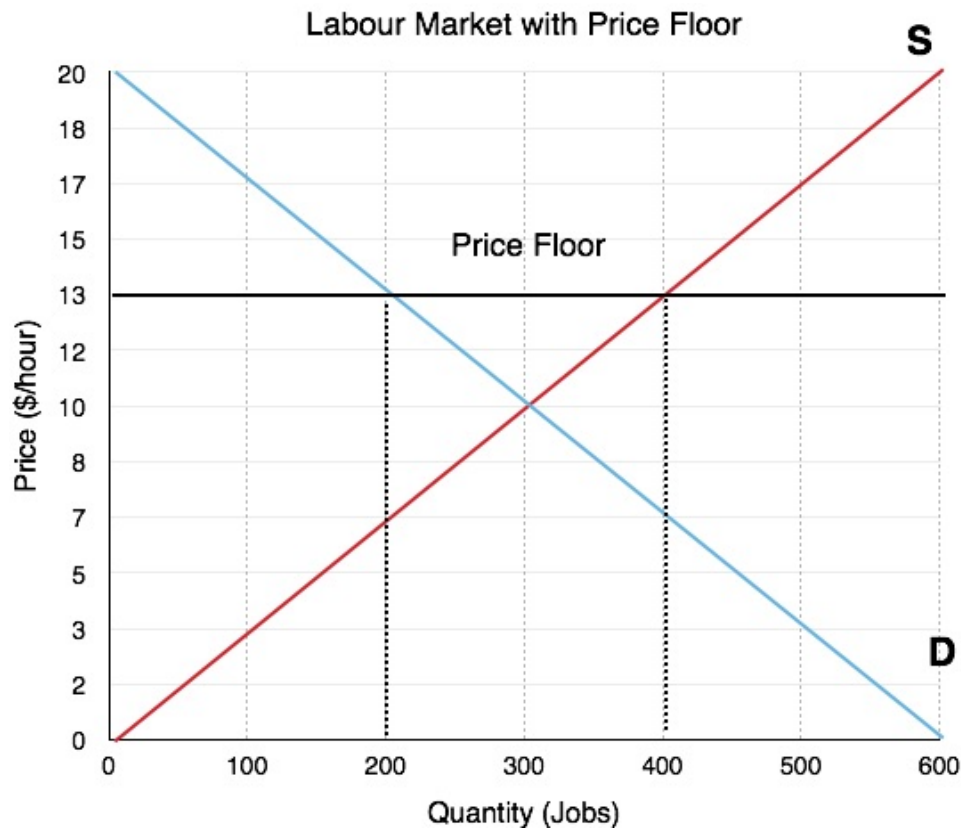


Figure 4.5d

In Figure 4.5d, the equilibrium wage is shown as \$10/hour. This is where the demand for labor is equal to the number of workers who want to find jobs. At this level there is no unemployment. However, if the government sets a minimum wage of \$13/hour, this will change. The Quantity of Labor Supplied (workers looking for jobs) will be 400, but the quantity demanded will be 200. This means that 200 workers will be unemployed! Again, this is not enough information to determine whether the market is inefficient – we have to calculate the change in market surplus!

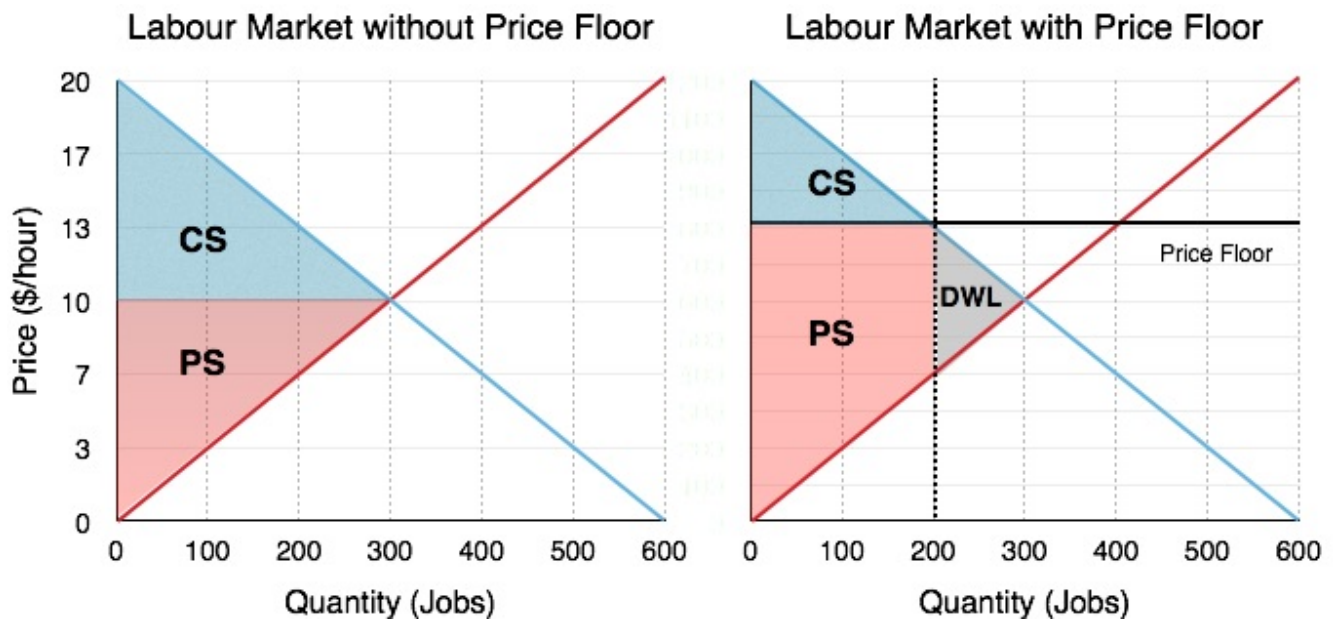


Figure 4.5e

Using the same process as before:

Before

Consumer Surplus (Blue Area): $[(20-10) \times 300]/2 = \1500

Producer Surplus (Red Area): $[(10) \times 300]/2 = \$1500$

Market Surplus: \$3000

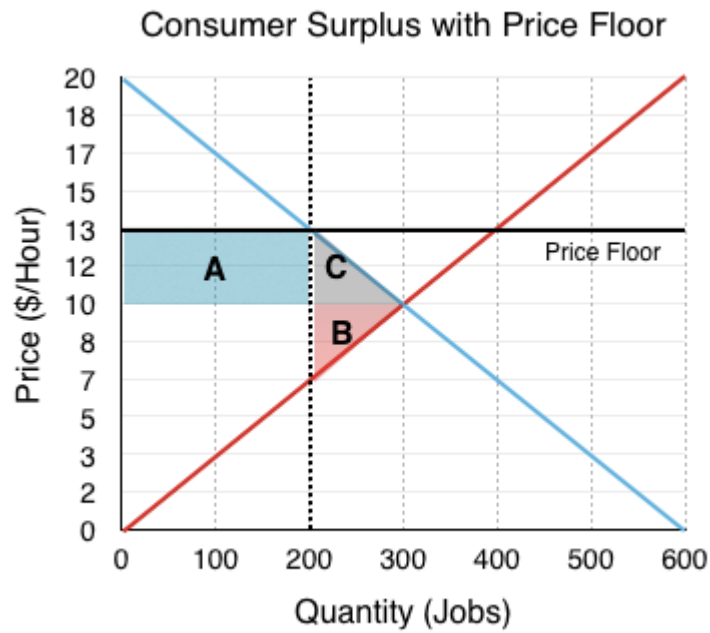
After

Consumer Surplus (Blue Area): $[(20-13) \times 200]/2 = \700

Producer Surplus (Red Area): $[(13-7) \times 200] + (7 \times 200)/2 = \1900

Market Surplus: \$2600

Since the market surplus after the policy is less than the market surplus before, there is a deadweight loss!



Again, the changes in the market can be categorized as a transfer and a deadweight loss. This time, the transfer is from consumers (firms) to producers (workers), since the workers who are able to find work are better off. This causes no change to market surplus in isolation but is coupled with the deadweight loss caused by workers who are no longer able to find jobs as firms leave the market.

Summary

In the absence of externalities, both the price floor and price ceiling cause deadweight loss, since they change the market quantity from what would occur in equilibrium. This is accompanied by a transfer of surplus from one player to another. If the goal of the policy is to reduce quantity to a certain level, both a price ceiling or a price floor could be used to achieve this aim. In this case, both policies would result in the same size DWL. The distribution of surplus will be very different, but the change in quantity away from equilibrium is the only variable that matters when calculating DWL. As we will see, if a tax, quota, or any other policy causes the same change in quantity as another, the deadweight loss will be the same.

Glossary

Price Ceiling

a legal maximum price

Price Control

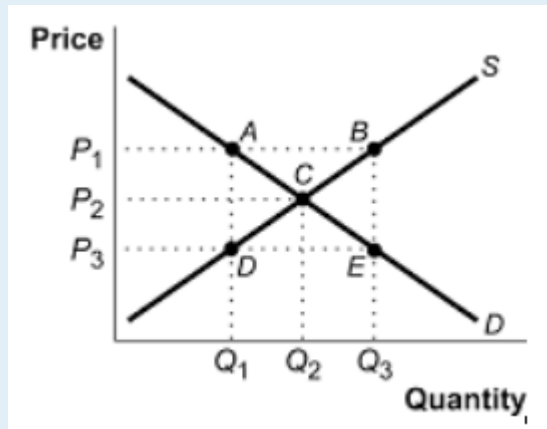
government laws to regulate prices instead of letting market forces determine prices

Price Effect

the impact when price differs from equilibrium, causes a transfer of surplus between parties

Price Floor*a legal minimum price***Quantity Effect***the impact when quantity differs from equilibrium, causes a deadweight loss to society***Exercises 4.5**

The following TWO questions refer to the supply and demand curves illustrated below.



1. A price ceiling of P_3 causes:

- a) A deadweight loss triangle whose corners are ABC.
- b) A deadweight loss triangle whose corners are ACD.
- c) A deadweight loss triangle whose corners are BEC.
- d) A deadweight loss triangle whose corners are CDE.

2. A price floor of P_1 causes:

- a) Excess demand equal to the distance AB.
- b) Excess supply equal to the distance AB.
- c) Excess supply equal to the distance DE.
- d) Excess demand equal to the distance DE.

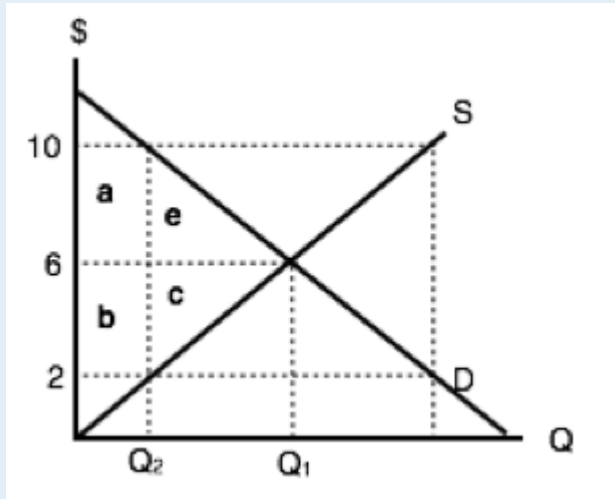
3. Which of the following statements about price ceilings is TRUE? (Assume the price ceiling is set below the unregulated equilibrium price.)

- a) Price ceilings make sellers worse off.
- b) Price ceilings make buyers better off.
- c) Both a) and b) are true.
- d) Neither a) nor b) is true).

4. Which of the following statements about minimum wages is true?

- a) Minimum wage laws may make some workers better off and others worse off.
- b) Minimum wage laws make employers worse off.
- c) Both a) and b) are true.
- d) None of the above are true.

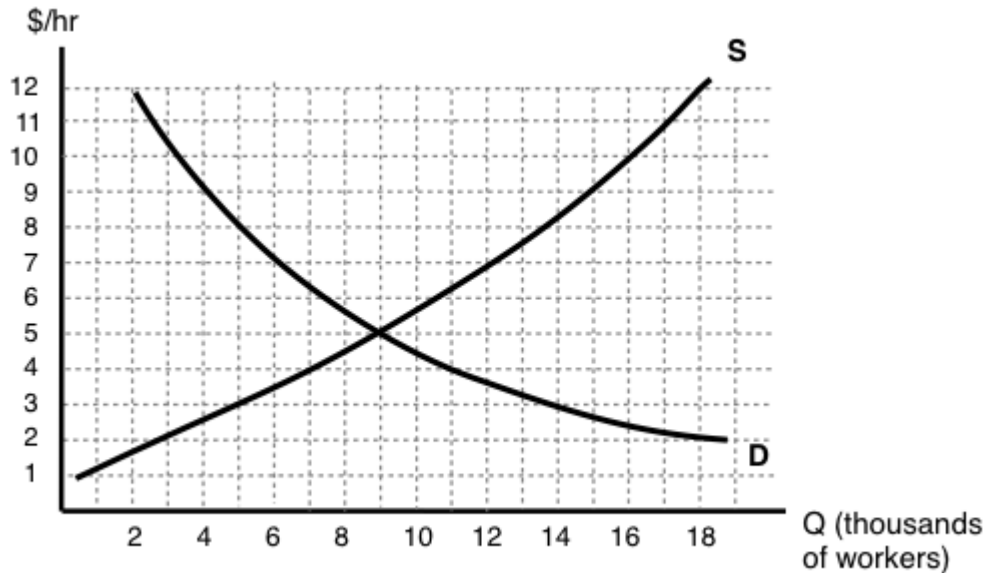
5. Consider diagram below, which illustrates the market for low-skilled labour.



Suppose that the equilibrium quantity is reduced from Q_1 to Q_2 units, through the introduction of a price floor. Which of the following correctly describes the resulting decrease in MARKET surplus?

- a) Market surplus will decrease by $a - c$.
- b) Market surplus will decrease by $e + c$.
- c) Market surplus will decrease by $a + b + e + c$.
- d) Market surplus will decrease by $b - e$.

6. Consider diagram below, which illustrates the market for low-skilled labour.



If the government introduces a minimum wage law set at \$9 per hour, then, in the new equilibrium, which of the following statements is TRUE?

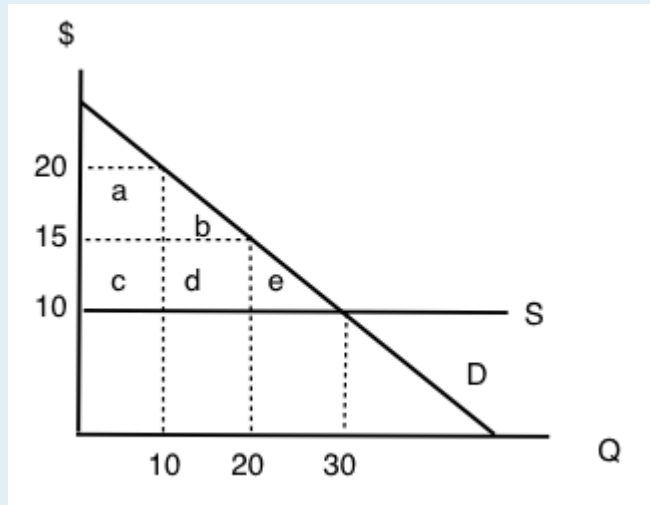
- I. There will be 11,000 workers willing to work who cannot find work, given the wage.
- II. The number of workers employed will decrease by 11,000.
- III. The number of workers that employers are prepared to hire will decrease by 5,000.

- a) I only.
- b) I and II only.
- c) I, II, and III.
- d) I and III only.

7. Suppose that the BC government wishes to reduce the quantity of beer sold in the Province by 20%. It has calculated that this goal can be achieved EITHER through a price floor set at \$2 per six-pack of beer OR a price ceiling of \$20 per six-pack of beer. Assume that the current price of beer is \$10 per six-pack. Which of the following statements about these policies is TRUE?

- a) The deadweight loss from the price floor will be greater than the deadweight loss from the price ceiling.
- b) The deadweight loss from the price ceiling will be greater than the deadweight loss from the price floor.
- c) There is insufficient information to determine which policy will have the large deadweight loss.
- d) None of the above statements is true.

8. Consider the supply and demand diagram below. Assume no externalities.



If a price floor of \$20 is introduced, then which area will represent the deadweight loss?

- a) e.
- b) e + d.
- c) e + b + d.
- d) The deadweight loss will be zero.

9. If a price ceiling (set below the initial equilibrium price) is introduced in a market, then:

- a) Producer surplus definitely decreases.
- b) Consumer surplus definitely increases.
- c) Neither a) nor b) are true.
- d) Both a) and b) are true.

10. In Canada, the prices of most medical services are regulated by the Provinces (that is, they are subject to price ceilings). This type of regulation is likely to result in which of the following (relative to an unregulated market)?

- a) An increase in the quantity of medical services provided.
- b) Consumption of medical services such that the marginal benefit is less than the marginal cost.
- c) Lower incomes for providers of medical services.
- d) Higher tax revenues for Provincial governments.

4.6 Quantity Controls

Learning Objectives

By the end of this section, you will be able to:

- Explain the effects of a quantity control
- Understand why quotas cause a deadweight loss

We looked at an example of the government regulating prices, and concluded that a deviation from the equilibrium quantity is what causes a deadweight loss. What if the government regulates quantity directly? It should be fairly obvious that this will also cause a deadweight loss, but the distribution of surplus will be different.

In Figure 4.6a, we show the market for oil. The equilibrium quantity is 3.5 million barrels of oil. Assume the government, pursuing an environmental strategy, wants to reduce both the level of production and consumption. A policy to reduce quantity is called a **quota**, a government-imposed restriction on the number of goods bought and sold. If the government sets a quota of 2 million barrels, both consumers and producers have to reduce consumption and production to that level.

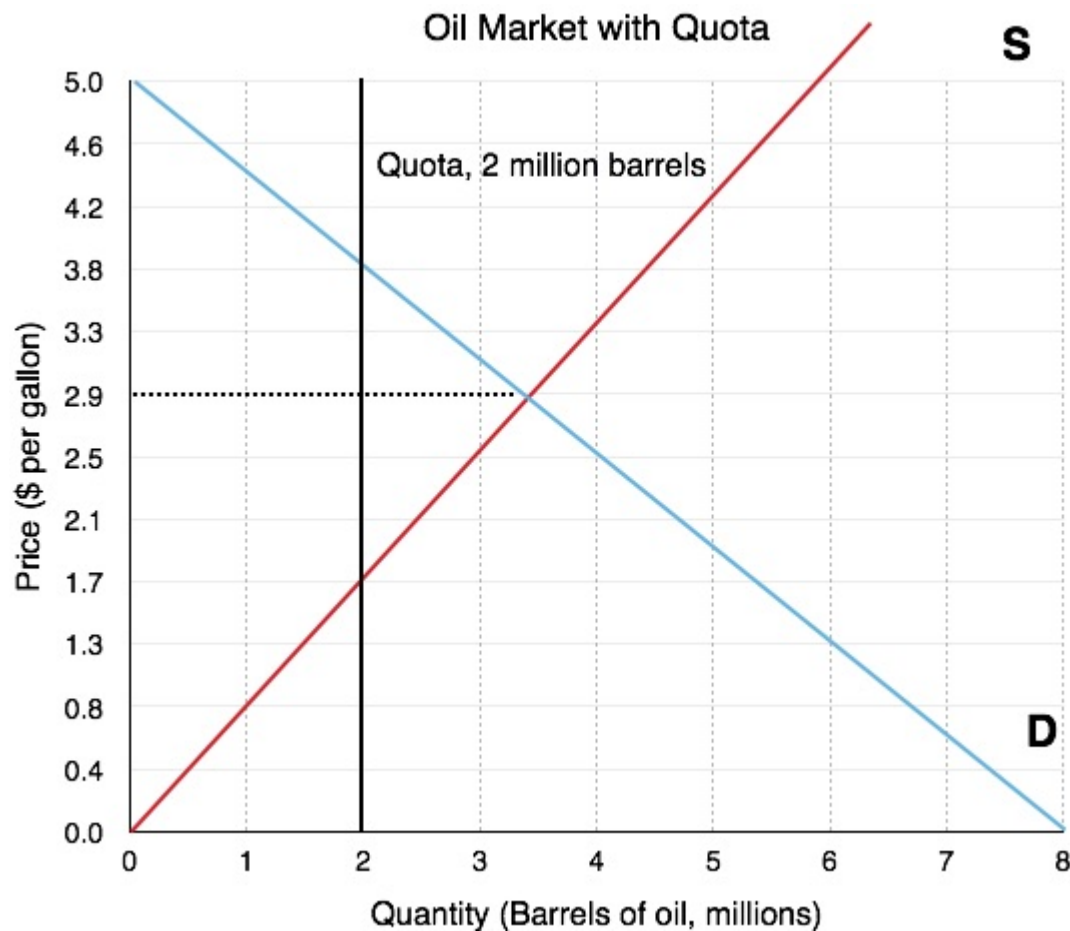


Figure 4.6a

We can see from Figure 4.6b that as a result of the quota, price increases from \$2.9/gallon to \$3.8/gallon. This may seem counter-intuitive. The government set a restriction on quantity, and price changed as well. Notice that at the restricted quantity of 2 million barrels, consumers are willing to pay \$3.8/gallon. The producers, seeing the consumers are willing to pay more than the previous price of \$2.9/gallon, will increase prices to \$3.8/gallon.

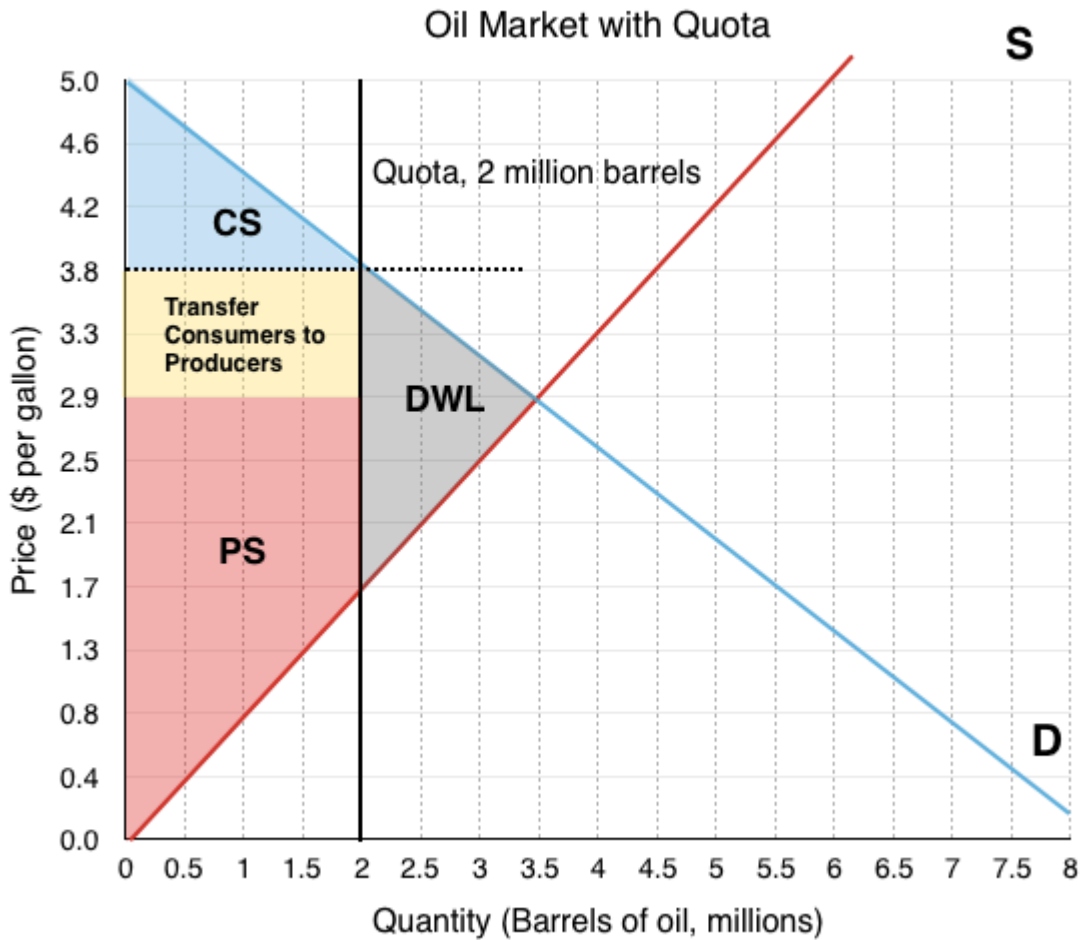


Figure 4.6b

Market Surplus

To examine the effects of this quota on the individual stakeholders, and the market as a whole, we can calculate the change in Consumer Surplus, Producer Surplus, and Market Surplus.

Before

The market surplus before has not been depicted, as the process should be routine. Ensure you understand how to find the following values:

Consumer Surplus = \$3.675 million

Producer Surplus = \$5.075 million

Market Surplus = \$8.75 million

After

The market surplus after the policy can be calculated with:

Consumer Surplus (Blue Area) = \$1.2 million

Producer Surplus (Red Area + Yellow Area) = \$5.9 million

Market Surplus = \$7.1 million

Comparing market surplus before and market surplus after, notice that the effect of a quota is similar to that of a price floor. The main difference is that the government put a restriction on quantity, and price changed as a by-product, whereas with price restrictions the government puts a restriction on price, with quantity changing as a by-product.

Summary

A quota is the simplest of the government policies we will look at. It is a straightforward way for the government to restrict production. We will see later that while this policy decreases market surplus, it can be useful for other reasons.

Glossary

Quota

A government-imposed restriction on the number of goods bought and sold

Exercises 4.6

1. Which of the following CANNOT reduce the equilibrium quantity sold in a market?

- a) A price ceiling.
- b) A price floor.
- c) A quota.
- d) All of the above can decrease equilibrium quantity sold.

4.7 Taxes and Subsidies

Learning Objectives

By the end of this section, you will be able to:

- Distinguish between legal and economic tax incidence
- Know how to represent taxes by shifting the curve and the wedge method
- Understand the quantity and price affect from a tax
- Describe why both taxes and subsidies cause deadweight loss

Taxes are not the most popular policy, but they are often necessary. We will look at two methods to understand how taxes affect the market: by shifting the curve and using the wedge method. First, we must examine the difference between legal tax incidence and economic tax incidence.

Legal versus Economic Tax Incidence

When the government sets a tax, it must decide whether to levy the tax on the producers or the consumers. This is called **legal tax incidence**. The most well-known taxes are ones levied on the consumer, such as Government Sales Tax (GST) and Provincial Sales Tax (PST). The government also sets taxes on producers, such as the gas tax, which cuts into their profits. The legal incidence of the tax is actually irrelevant when determining who is impacted by the tax. When the government levies a gas tax, the producers will pass some of these costs on as an increased price. Likewise, a tax on consumers will ultimately decrease quantity demanded and reduce producer surplus. This is because the **economic tax incidence**, or who actually pays in the new equilibrium for the incidence of the tax, is based on how the market responds to the price change – not on legal incidence.

Tax – Shifting the Curve

In Topic 3, we determined that the supply curve was derived from a firm's Marginal Cost and that shifts in the supply curve were caused by any changes in the market that caused an increase in MC at every quantity level. This is no different for a tax. From the producer's perspective, any tax levied on them is just an increase in the marginal costs per unit. To illustrate the effect of a tax, let's look at the oil market again.

If the government levies a \$3 gas tax on producers (a legal tax incidence on producers), the supply curve will shift up by \$3. As shown in Figure 4.8a below, a new equilibrium is created at $P=\$5$ and $Q=2$ million barrels. Note that producers do not receive \$5, they now only receive \$2, as \$3 has to be sent to the government. From the consumer's perspective, this \$1 increase in price is no different than a price

increase for any other reason, and responds by decreasing the quantity demanded for the higher priced good.

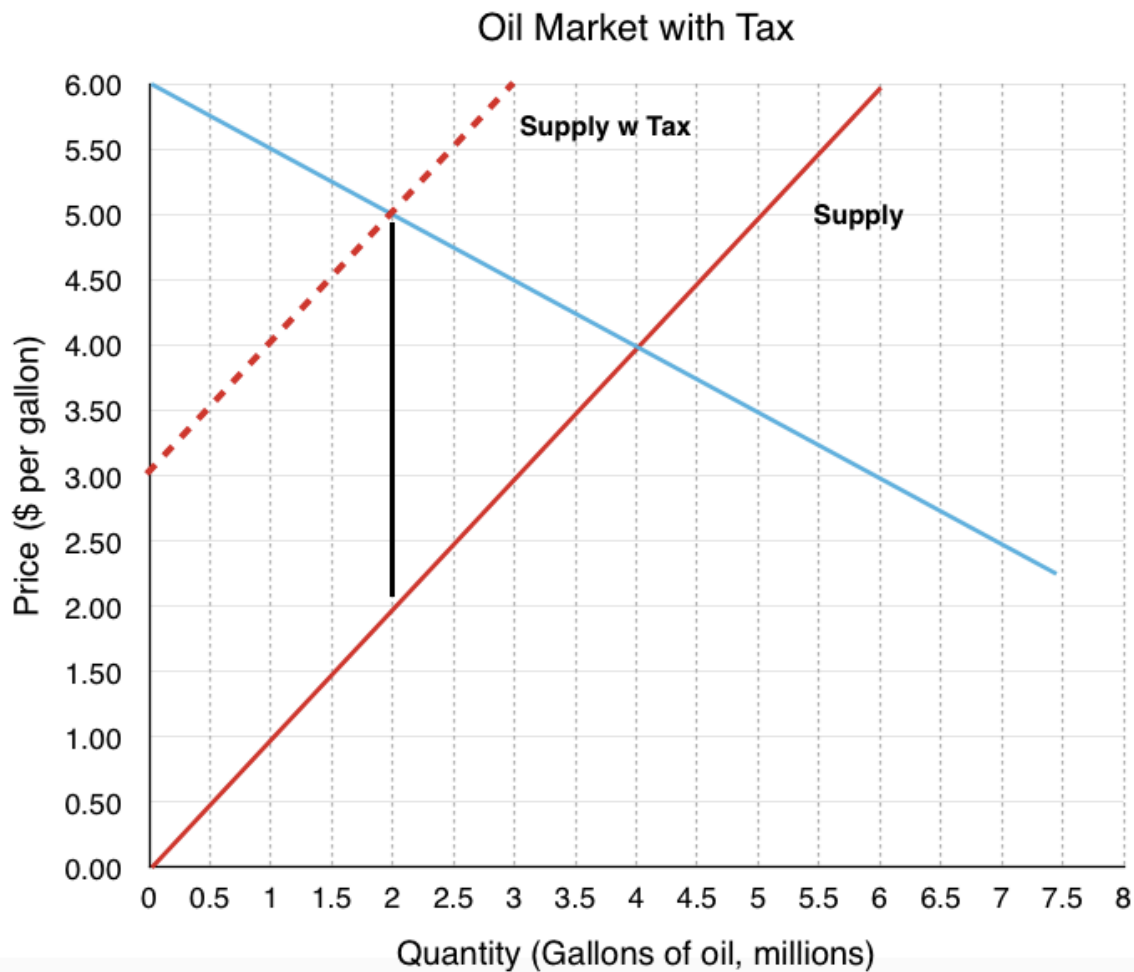


Figure 4.7a

What if the legal incidence of the tax is levied on the consumers? Since the demand curve represents the consumers' willingness to pay, the demand curve will shift down as a result of the tax. If consumers are only willing to pay \$4/gallon for 4 million gallons of oil but know they will face a \$3/gallon tax at the till, they will only purchase 4 million gallons if the ticket price is \$1. This creates a new equilibrium where consumers pay a \$2 ticket price, knowing they will have to pay a \$3 tax for a total of \$5. The producers will receive the \$2 paid before taxes.

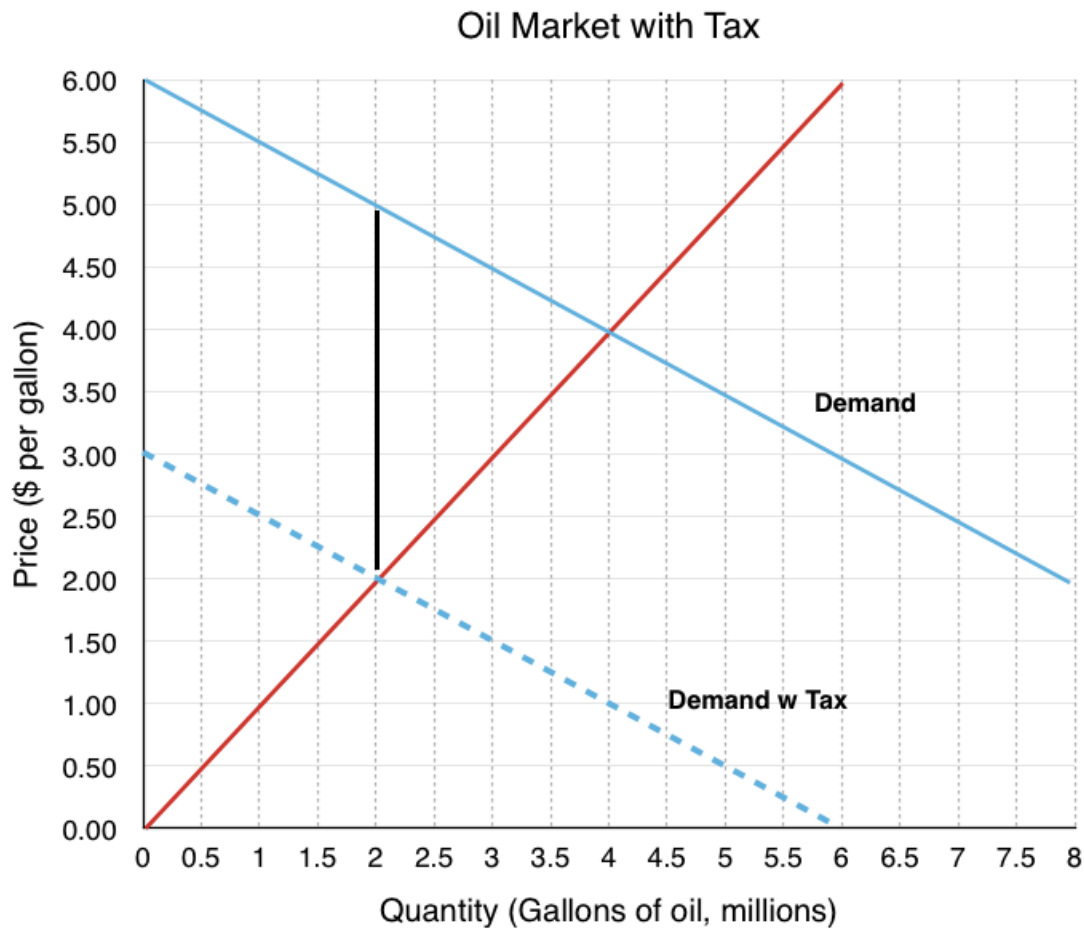


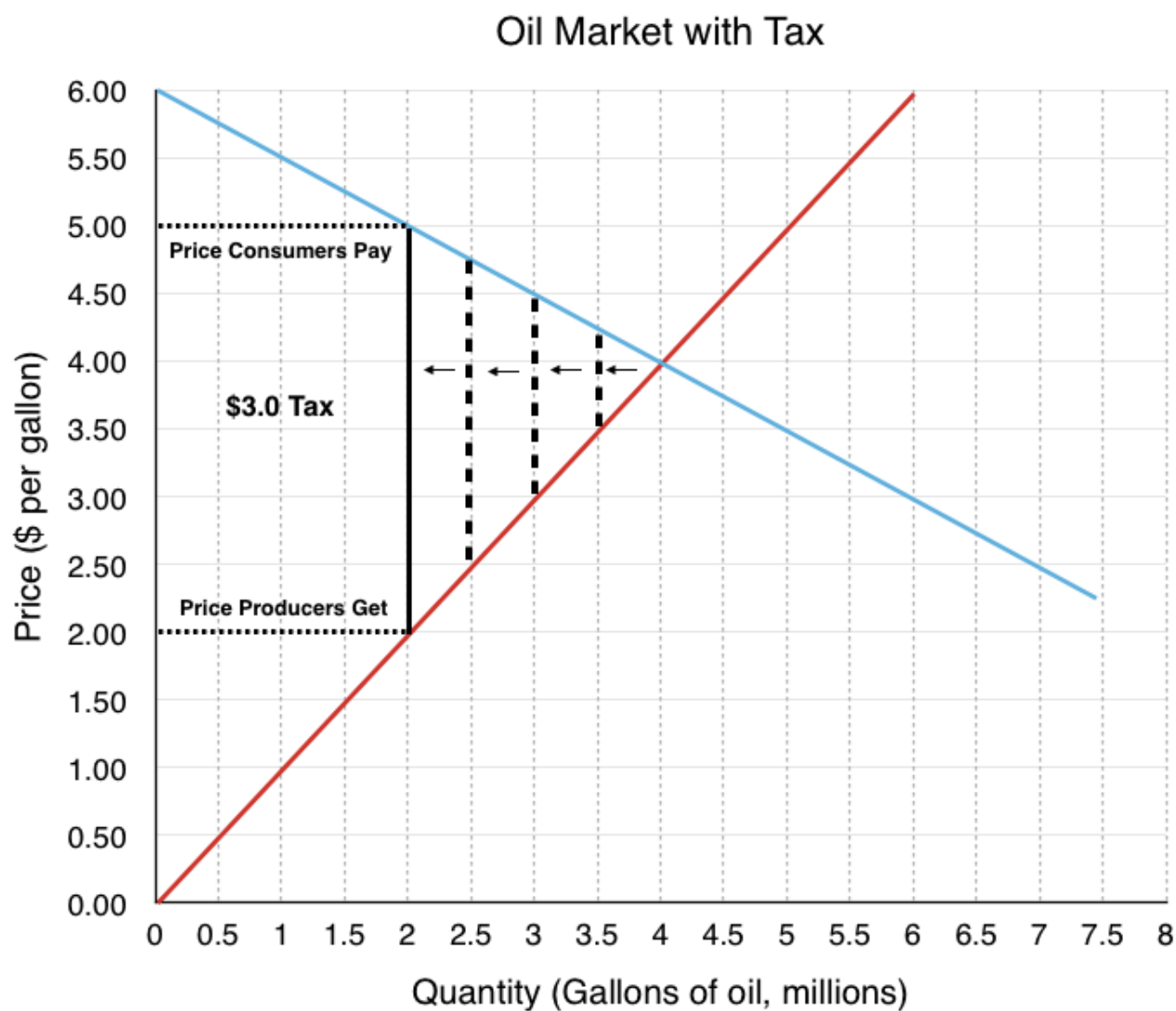
Figure 4.7b

Note that whether the tax is levied on the consumer or producer, the final result is the same, proving the legal incidence of the tax is irrelevant.

Tax – The Wedge Method

Another method to view taxes is through the wedge method. This method recognizes that who pays the tax is ultimately irrelevant. Instead, the wedge method illustrates that a tax drives a wedge between the price consumers pay and the revenue producers receive, equal to the size of the tax levied.

As illustrated below, to find the new equilibrium, one simply needs to find a \$3 wedge between the curves. The first wedge tested is only \$0.7, followed by \$1.5, until the \$3.0 tax is found.

*Figure 4.7c*

Market Surplus

Like with price and quantity controls, one must compare the market surplus before and after a price change to fully understand the effects of a tax policy on surplus.

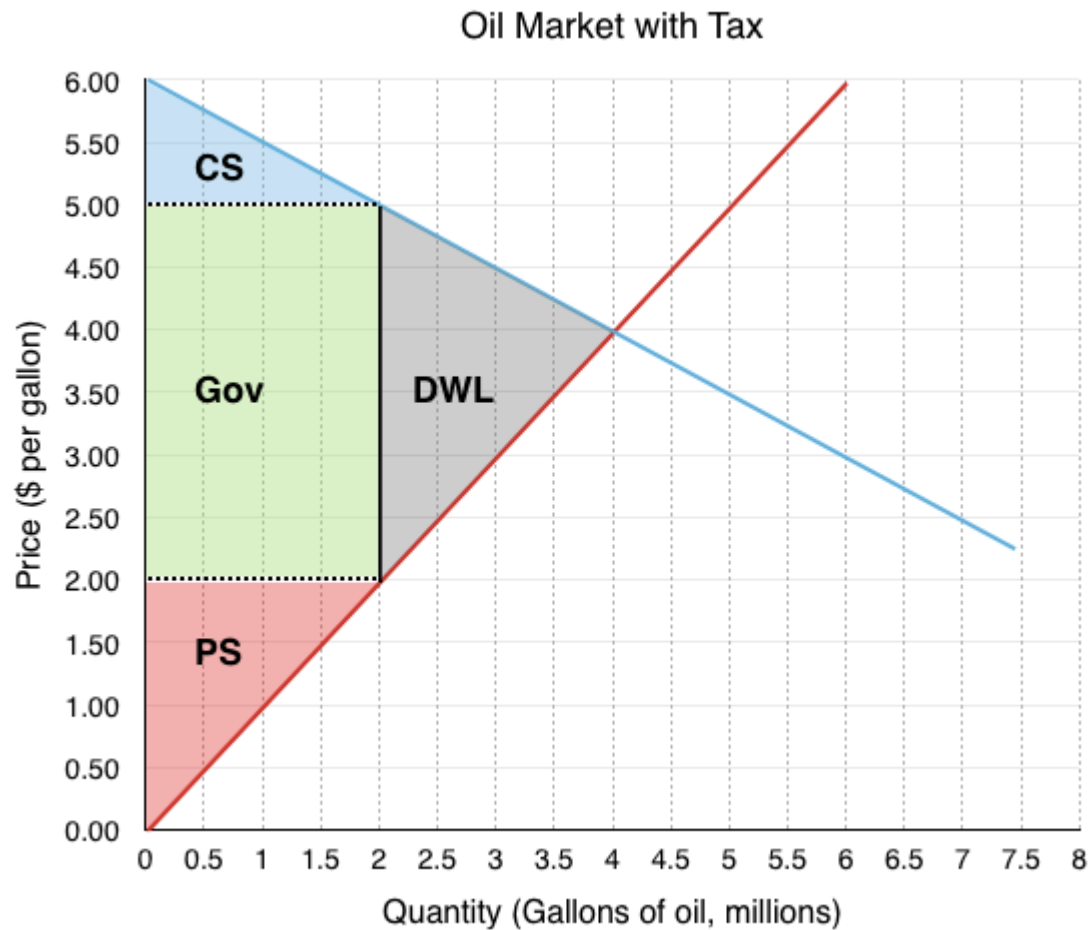


Figure 4.7d

Before

The market surplus before the tax has not been shown, as the process should be routine. Ensure you understand how to get the following values:

Consumer Surplus = \$4 million

Producer Surplus = \$8 million

Market Surplus = \$12 million

After

The market surplus after the policy can be calculated in reference to Figure 4.7d

Consumer Surplus (Blue Area) = \$1 million

Producer Surplus (Red Area) = \$2 million

Government Revenue (Green Area) = \$6 million

Market Surplus = \$9 million

Why is Government Included in Market Surplus

In our previous examples dealing with market surplus, we did not include any discussion of government revenue, since the government was not engaging in our market. Remember that market surplus is our metric for efficiency. If government was not included in this metric, it would not be very useful. In this case a million-dollar loss to government would be considered efficient if it resulted in a \$1 gain to a consumer. To ensure that our metric for efficiency is still useful we must consider government when calculating market surplus.

As with the quota – both consumer and producer surplus decreased because of a reduced quantity. The difference is, since the price is changing, there is redistribution. This time, the redistribution is from consumers and producers to the government. Remember, only a change in quantity causes a deadweight loss. Price changes simply shift surplus around between consumers, producers, and the government.

Transfer and Deadweight Loss

Let's look closely at the tax's impact on quantity and price to see how these components affect the market.

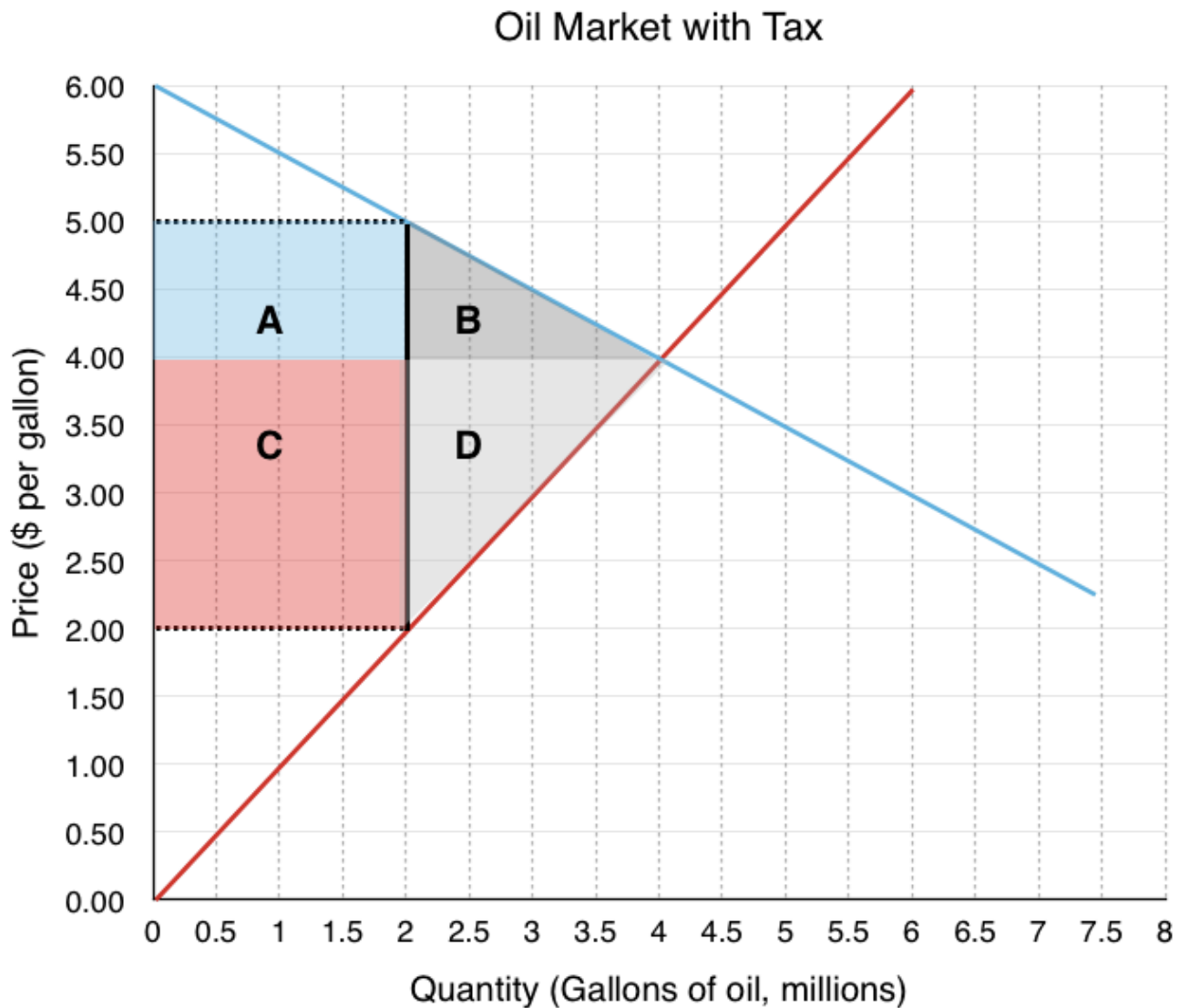


Figure 4.7e

Transfer – The Impact of Price

Due to the tax's effect on price, areas A and C are transferred from consumer and producer surplus to government revenue.

Consumers to Government – Area A

Consumers originally paid \$4/gallon for gas. Now, they are paying \$5/gallon. The \$1 increase in price is the portion of the tax that consumers have to bear. Despite the fact that the tax is levied on producers, the consumers have to bear a share of the price change. The size of this share depends on relative elasticity – a concept we will explore in the next section. This is because a decrease in price to producers means quantity supplied is falling, and in order to maintain equilibrium, quantity demanded must fall by an equal amount. This price change means the government collects $\$1 \times 2$ million gallons or \$2 million in

tax revenue from the consumers. This is a straight transfer from consumers to government and has no effect on market surplus.

Producers to Government – Area C

Originally, producers received revenue of \$4/gallon for gas. Now, they receive \$2/gallon. This \$2 decrease is the portion of the tax that producers have to bear. This means that the government collects $\$2 \times 2$ million gallons or \$4 million in tax revenue from the producers. This is a transfer from producers to the government.

As calculated, the government receives a total of \$6 million in tax revenue, which is taken from consumers and producers. This has no impact on net market surplus.

Deadweight Loss – The Impact of Quantity

If we just considered a transfer of surplus, there would be no deadweight loss. In this case, though, we know that price changes come with a change in quantity. A higher price for consumers will cause a decrease in the quantity demanded, and a lower price for producers will cause a decrease in quantity supplied. This reduction from equilibrium quantity is what causes a deadweight loss in the market since there are consumers and producers who are no longer able to buy and supply the good.

Consumer Surplus Decrease – Area B

Due to the increase in price, many consumers will switch away from oil to alternative options. This decrease in quantity demand of 1.5 million gallons of oil causes a deadweight loss of \$1 million.

Producer Surplus Decrease – Area D

Producers, who now receive only \$2.00/gallon for their production, will also decrease quantity supplied by 1.5 million gallons of oil. It is no coincidence that the size of the decrease is the same. When you create the wedge between consumers and producers, you are finding the quantity where the full amount of the tax is incurred but the market is still at equilibrium. Remember that quantity demanded must equal quantity supplied or the market will not be stable. This mirrored decrease in quantity ensures this is still the case. Notice, however, that the impact of this quantity drop causes a larger decrease in producer surplus than consumer surplus totalling \$2 million. Again, this is due to elasticity, or the relative responsiveness to the price change, which will be explored in more detail shortly.

Together, these decreases cause a \$3 million deadweight loss (the difference between the market surplus before and market surplus after).

Subsidy

While a tax drives a wedge that increases the price consumers have to pay and decreases the price producers receive, a subsidy does the opposite. A **subsidy** is a benefit given by the government to groups or individuals, usually in the form of a cash payment or a tax reduction. A **subsidy** is often given to remove some type of burden, and it is often considered to be in the overall interest of the public. In

economic terms, a subsidy drives a wedge, decreasing the price consumers pay and increasing the price producers receive, with the government incurring an expense.

In Topic 3, we looked at a case study of Victoria's competitive housing market where high demand drove up prices. In response, the government has enacted many policies to allow low-income families to still become homeowners. Let's look at the effects of one possible policy. (Note the following policy is unrealistic but allows for easy comprehension of the effect of subsidies).

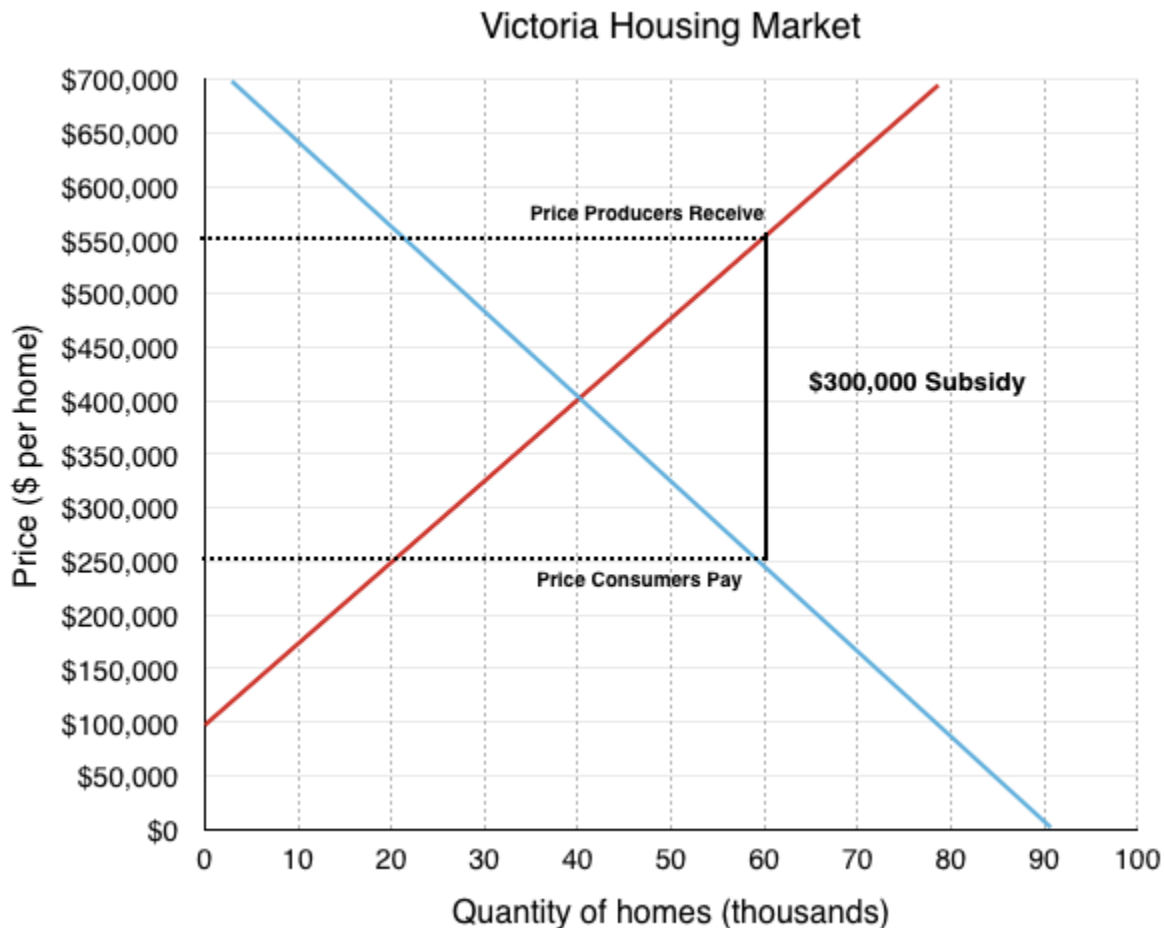


Figure 4.7f

In the market above, our efficient equilibrium begins at a price of \$400,000 per home, with 40,000 homes being purchased. The government wants to substantially increase the number of consumers able to purchase homes, so it issues a \$300,000 subsidy for any consumers purchasing a new home. This drives a wedge between what home buyers pay (\$250,000) and what home builders receive (\$550,000).

With all government policies we have examined so far, we have wanted to determine whether the result of the policy increases or decreases market surplus. With a subsidy, we want to do the same analysis. Unfortunately, because increases in surplus overlap on our diagram, it becomes more complicated. To simplify the analysis, the following diagram separates the changes to producers, consumers, and government onto different graphs.

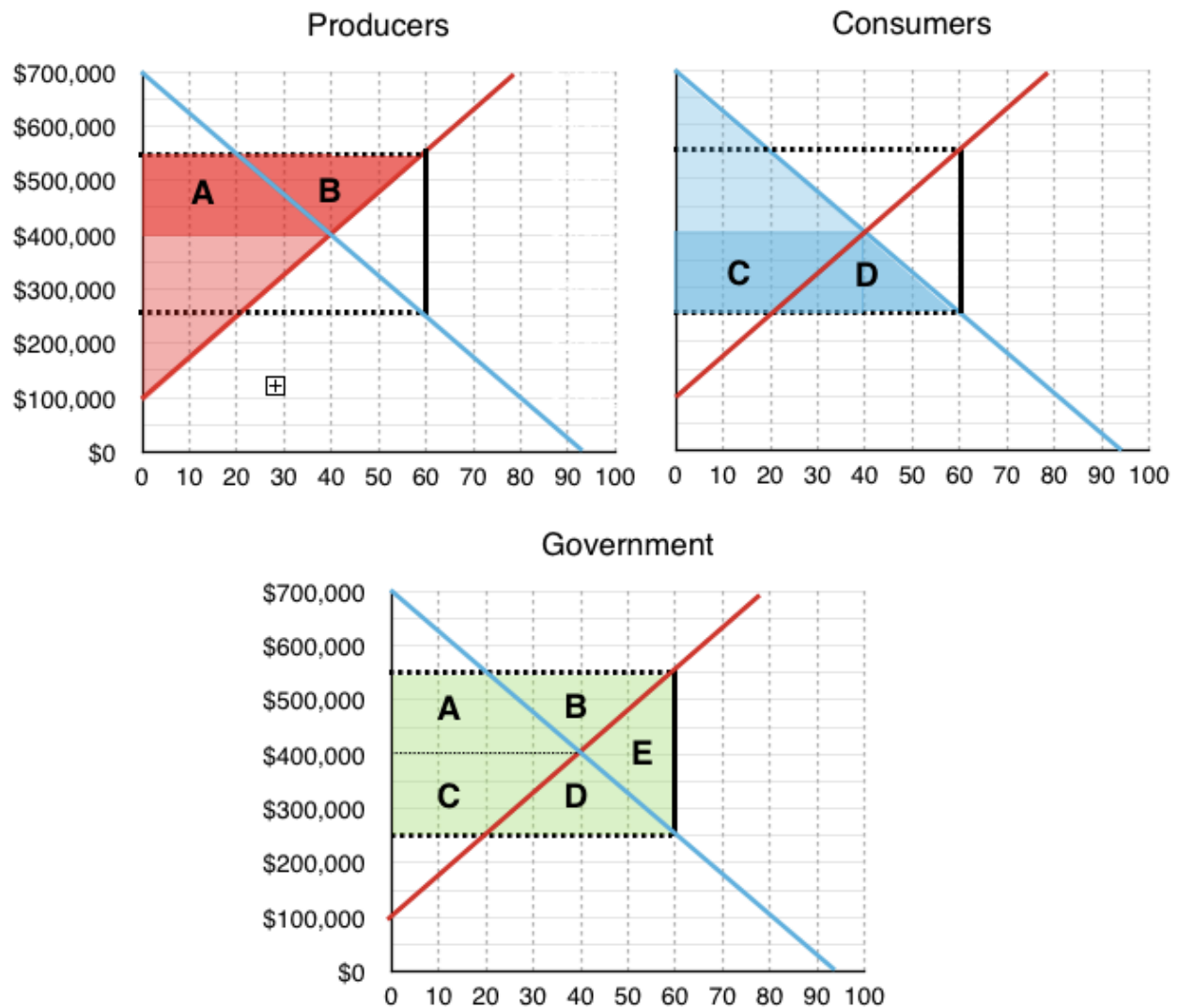


Figure 4.7g

Producers

The producers now receive \$550,000 instead of \$400,000, increasing quantity supplied to 60,000 homes. This increases producer surplus by **areas A and B**.

Consumers

The consumers now pay \$250,000 instead of \$400,000, increasing quantity demanded to 60,000 homes. This increases consumer surplus by **areas C and D**.

Government

The government now has to pay \$300,000 per home to subsidize the 60,000 consumers buying new homes (this policy would cost the government \$18 billion!!) Graphically, this is equal to a decrease in government to **areas A, B, C, D and E**.

Result

Our total gains from the policy (to producers and consumers) are areas **A, B, C and D**, whereas total losses (the cost to the government) are areas **A, B, C, D, and E**. To summarize:

Areas A, B, C and D are transferred from the government to consumers and producers.

Area E is a deadweight loss from the policy.

There are two things to notice about this example. First, the policy was successful at increasing quantity from 40,000 homes to 60,000 homes. Second, it resulted in a deadweight loss because equilibrium quantity was too high. Remember, **anytime quantity is changed from the equilibrium quantity, in the absence of externalities, there is a deadweight loss**. This is true for when quantity is decreased and when it is increased.

<http://www.investopedia.com/terms/s/subsidy.asp>

Summary

Taxes and subsidies are more complicated than a price or quantity control as they involve a third economic player: the government. As we saw, who the tax or subsidy is levied on is irrelevant when looking at how the market ends up. Note that the last three sections have painted a fairly grim picture about policy instruments. This is because our model currently does not include the external costs economic players impose to the macro-environment (pollution, disease, etc.) or attribute any meaning to equity. These concepts will be explored in more detail in later topics.

In our examples above, we see that the legal incidence of the tax does not matter, but what does? To determine which party bears more of the burden, we must apply the concept of relative elasticity to our analysis.

Glossary

Economic Tax Incidence

the distribution of tax based on who bears the burden in the new equilibrium, based on elasticity

Legal Tax Incidence

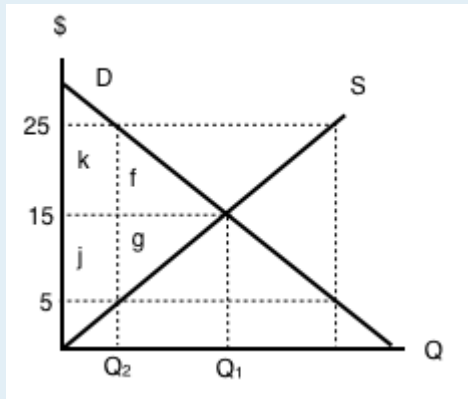
the legal distribution of who pays the tax

Subsidy

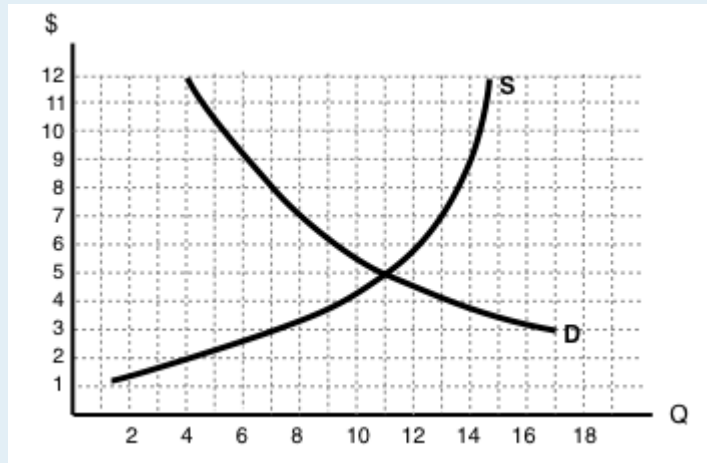
a benefit given by the government to groups or individuals, usually in the form of a cash payment or a tax reduction It is often to remove some type of burden, and it is often considered to be in the overall interest of the public

Exercises 4.7

Refer to the supply and demand curves illustrated below for the following THREE questions. Consider the introduction of a \$20 per unit tax in this market.



- Which areas represent the loss to consumer AND producer surplus as a result of this tax?
 - $k + f$.
 - $j + g$.
 - $k + j$.
 - $k + f + j + g$.
- Which areas represent the gain in government revenue as a result of this tax?
 - $k + f$.
 - $j + g$.
 - $k + j$.
 - $k + f + j + g$.
- Which areas represent the deadweight loss associated with this tax?
 - $f + g$.
 - $k - g$.
 - $j - f$.
 - $k + f + j + g$.
- Assume that the marginal cost of producing socks is constant for all sock producers, and is equal to \$5 per pair. If government introduces a constant per-unit tax on socks, then which of the following statements is FALSE, given the after-tax equilibrium in the sock market? (Assume a downward-sloping demand curve for socks.)
 - Consumers are worse off as a result of the tax.
 - Spending on socks may either increase or decrease as a result of the tax.
 - Producers are worse off as a result of the tax.
 - This tax will result in a deadweight loss.
- Refer to the supply and demand diagram below.



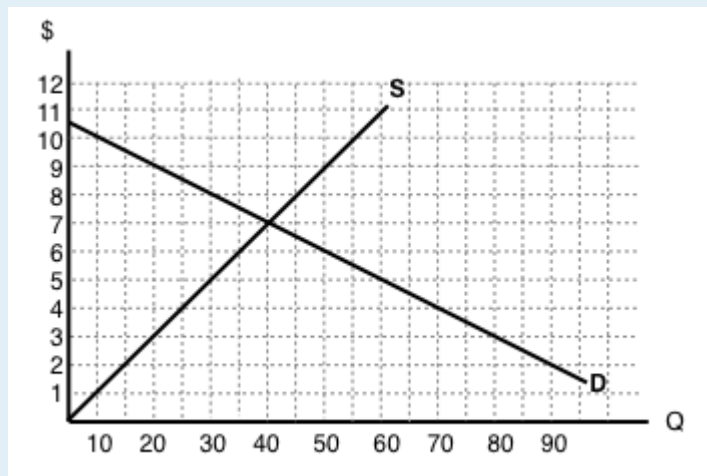
If an subsidy of \$3 per unit is introduced in this market, the price that consumers pay will equal ____ and the price that producers receive net of the subsidy will equal ____.

- a) \$2; \$5.
- b) \$3; \$6.
- c) \$4; \$7.
- d) \$5; \$8.

6. If a subsidy is introduced in a market, then which of the following statement is TRUE? Assume no externalities

- a) Consumer and producer surplus increase but social surplus decreases.
- b) Consumer and producer surplus decrease but social surplus increases.
- c) Consumer surplus, producer surplus, and social surplus all increase.
- d) Consumer surplus, producer surplus, and social surplus all decrease

Use the diagram below to answer the following TWO questions.



7. If a \$6 per unit tax is introduced in this market, then the price that consumers pay will equal ____ and the price that producers receive net of the tax will equal ____.

- a) \$10; \$4.
- b) \$9; \$3.
- c) \$8; \$2.
- d) \$7; \$1.

8. If a \$6 per unit tax is introduced in this market, then the new equilibrium quantity will be:

- a) 20 units.
- b) 40 units.
- c) 60 units.
- d) None of the above.

9. Which of the following statements about the deadweight loss of taxation is TRUE? (Assume no externalities.)

- a) If there is a deadweight loss, then the revenue raised by the tax is greater than the losses to consumer and producers.
- b) If there is no deadweight loss, then revenue raised by the government is exactly equal to the losses to consumers and producers.
- c) Both a) and b).
- d) Neither a) nor b).

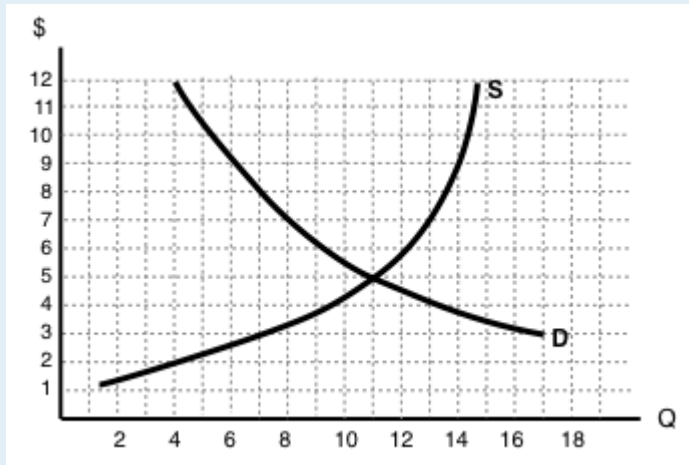
10. Which of the following correctly describes the equilibrium effects of a per-unit tax, in a market with NO externalities?

- a) Consumer and producer surplus increase but social surplus decreases.
- b) Consumer and producer surplus decrease but social surplus increases.
- c) Consumer surplus, producer surplus, and social surplus all increase.
- d) Consumer surplus, producer surplus, and social surplus all decrease.

11. Which of the following correctly describes the equilibrium effects of a per unit subsidy?

- a) Consumer price rises, producer price falls, and quantity increases.
- b) Consumer price falls, producer price falls, and quantity increases.
- c) Consumer price rises, producer price rises, and quantity increases.
- d) Consumer price falls, producer price rises, and quantity increases.

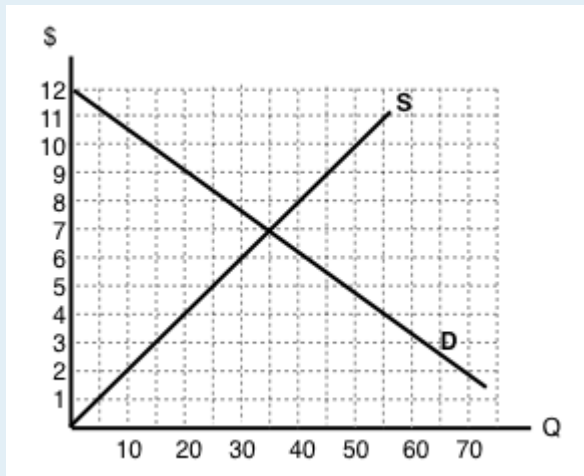
12. Refer to the supply and demand diagram below.



If an output (excise) tax of \$5 per unit is introduced in this market, the price that consumers pay will equal _____ and the price that producers receive net of the tax will equal _____.

- a) \$5; \$10.
- b) \$6; \$11.
- c) \$7; \$12.
- d) \$8; \$3.

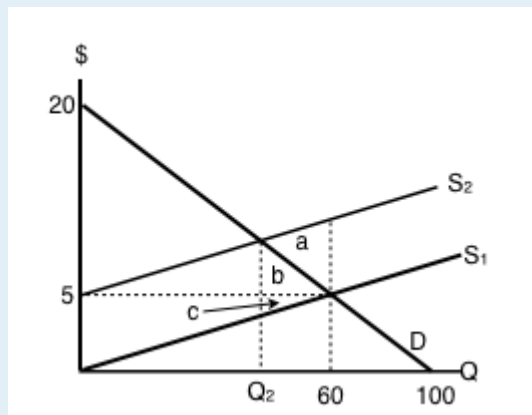
13. Consider the supply and demand diagram below.



If a \$2 per unit subsidy is introduced, what will be the equilibrium quantity?

- a) 40 units.
- b) 45 units.
- c) 50 units.
- d) 55 units.

Consider the supply and demand diagram below. Assume that: (i) there are no externalities; and (ii) in the absence of government regulation the market supply curve is the one labeled S1.



14. If a \$5 per unit tax is introduced in this market, which area represents the deadweight loss?

- a) a.
- b) a + b.
- c) b + c.
- d) a + b + c.

4.8 Elasticity and Policy

Maxwell Nicholson

Learning Objectives

By the end of this section, you will be able to:

- Describe how elasticity impacts deadweight loss
- Predict who will bear a greater burden from a policy based on relative elasticity
- Understand the difference between elasticity and relative elasticity



(Credit: David Masters/ Flickr/ CC BY 2.0)

Buttery Elasticity

For many years the U.S dairy market was inelastic, but times have changed, and dairy demand is not as inelastic as it once was, says Sara Dorland, managing partner with Seattle-based Ceres Dairy Risk Management. Higher prices can have a direct effect on the consumption of dairy products.

“Historically a good amount of our product went to the U.S. government, which kept prices stable, especially for skim products,” says Dorland, who holds an MBA in business and finance. “Therefore, once every few years, butter or cheese would have a run-up and fall back down. As a result, milk and dairy product prices played within a rather tight range, a factor that contributed to our belief that demand was rather inelastic. Today, that is not the case as the government is no longer one of our best customers.”

This means that the quantity demanded in the dairy market is becoming more responsive to changes in price in the U.S. Compare this to the Canadian market and you will see a very different story. Due to a supply management system that is operated by farmer-run provincial marketing boards, the Canadian dairy market remains very inelastic as high tariffs and quota requirements restrict market entry. This limits the number of producers in the market and reduces consumer choice, causing a very inelastic demand curve like we saw with the textbook industry.

Relative elasticity is important when looking at how markets respond to a price change. Two of the policies we looked at, taxes and price controls, caused deadweight loss and redistribution among market players. As we will illustrate in this chapter, the relative elasticity of a market will determine which party bears a greater burden of tax policy.



Read the rest of the story here.

https://www.vice.com/en_ca/article/blame-canadas-dairy-cartel-for-our-expensive-milk-and-cheese-867

<http://www.theglobeandmail.com/news/politics/canadas-dairy-industry-is-a-rich-closed-club/article25124114/>

<http://www.agweb.com/article/why-dairy-demand-has-become-more-elastic-naa-catherine-merlo/>

In Topic 4.3, we discussed some of the many factors that cause supply and demand to be relatively more or less elastic. Now, we will explore the impact that this has on relative policy burden and deadweight loss.

Elasticity and Deadweight Loss

Let's continue to look at the dairy market. How would a \$2.25 per unit tax on the American and Canadian dairy market impact different market players? In our analysis, let's make the assumption that the Canadian and American markets both start with an equilibrium price of \$4/jug and equilibrium quantity of 8 million. This is obviously not realistic, but it allows us to analyze the effects of elasticity holding other factors constant. The only difference in this scenario is the elasticity of the demand curve. Demand in the American market is relatively more elastic than the Canadian market. The tax has been shown on both diagrams and the deadweight loss depicted

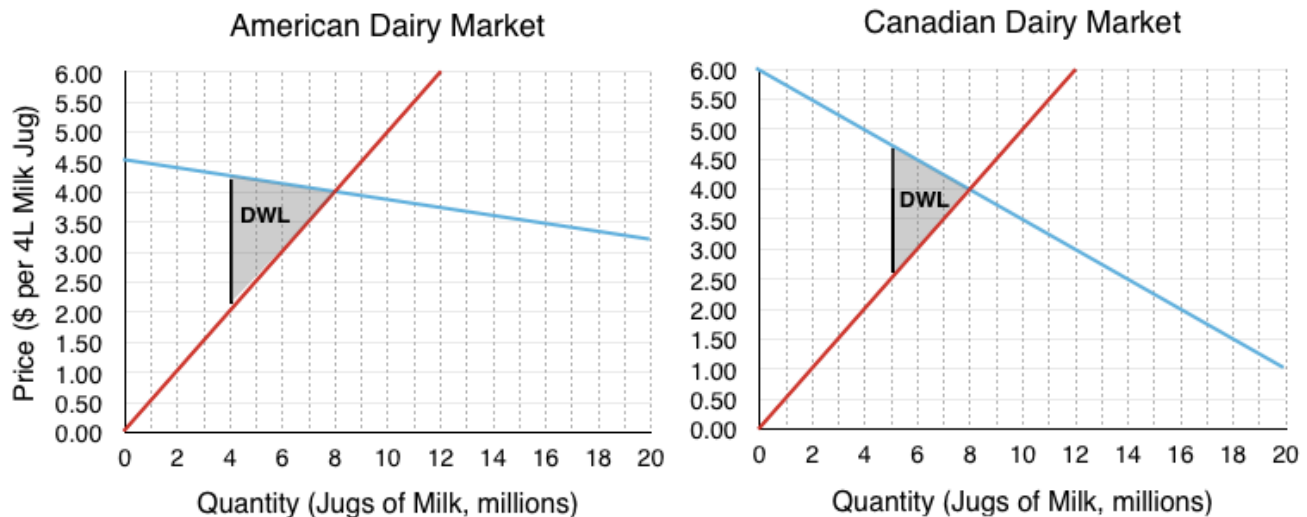


Figure 4.8a

At first glance, it is difficult to determine which deadweight loss is greater. Since deadweight loss is the result of a quantity change, we can ignore the redistributive effects of the tax and look exclusively at the lost surplus to consumers and producers who are no longer buying/selling the good.

Deadweight loss to American – Relatively more Elastic

The \$2.25 tax causes a wedge between what consumers pay (now \$4.25) and what producers receive (now \$2.00). This wedge causes a decrease in equilibrium quantity from 8 million milk jugs to just 4 million. Calculations for deadweight loss are shown below:

$$\frac{(4.25 - 2.00) \cdot (8 - 4)}{2} = \frac{2.25 \cdot 4}{2} = \$4.5 \text{ million}$$

Deadweight loss to Canadian – Relatively more Inelastic

For Canadians, the \$2.25 tax causes a different wedge between what consumers pay and what producers receive. Consumers now pay \$4.75 and producers receive \$2.50. This wedge causes a different decrease in equilibrium quantity from 8 million milk jugs to 5 million. Notice that this decrease in quantity is less than the American market. Calculations for deadweight loss are shown below:

$$\frac{(4.75 - 2.50) \cdot (8 - 5)}{2} = \frac{2.25 \cdot 5}{2} = \$3.375 \text{ million}$$

It should be no surprise that, all else constant, the deadweight loss is greater for the market that experiences the larger decrease in equilibrium quantity. Notice that although the triangles are different shapes, the base of each triangle is the same, and equal to the \$2.25 tax. The only difference is the height, which is equal to the decrease in quantity from equilibrium. This leads us to our first principle of relative elasticity:

For a more elastic market a price change causes a **greater decrease in quantity** therefore a policy in a more elastic market will cause a **greater deadweight loss**.

Policy Burdens and Elasticity

We have determined that the more elastic a market is, all else equal, the market will have a greater deadweight loss. How does relative elasticity affect the share of the burden producers and consumers bear?

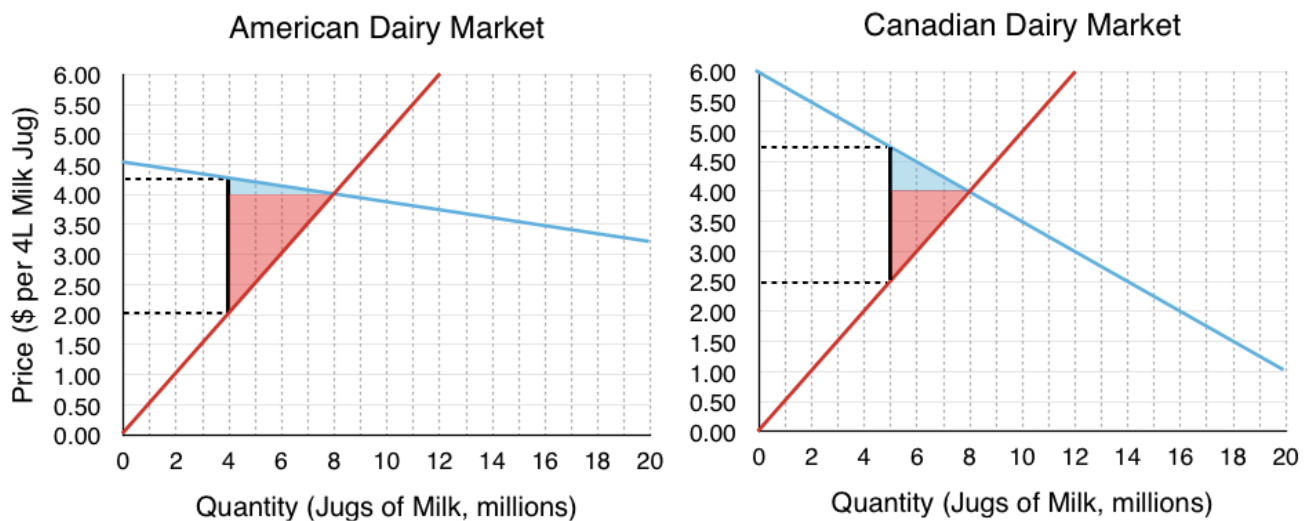


Figure 4.8b

Visually, it seems quite clear that in the American market, where demand is more elastic, consumers bear a smaller burden. Let's test this mathematically.

American Market

Deadweight Loss to Consumers:

$$\frac{(4.25 - 4.00) \cdot (8 - 4)}{2} = \$0.5 \text{ million}$$

Deadweight Loss to Producers:

$$\frac{(4.00 - 2.00) \cdot (8 - 4)}{2} = \$4 \text{ million}$$

Total Deadweight Loss:

\$4.5 million

This means that consumers bear 11.11% of the tax burden and producers bear 88.89%.

Canadian Market

Deadweight Loss to Consumers:

$$\frac{(4.75 - 4.00) \cdot (8 - 5)}{2} = \$1.125 \text{ million}$$

Deadweight Loss to Producers:

$$\frac{(4.00 - 2.50) \cdot (8 - 5)}{2} = \$2.25 \text{ million}$$

Total Deadweight Loss:

\$3.375 million

This means that consumers bear 33.33% of the tax burden and producers bear 66.67%.

As we speculated, consumers bear a smaller burden in the US market, and in both cases a smaller burden than the producers. This leads us to our second principle of relative elasticity.

As supply (demand) grows **relatively more inelastic**, producers (consumers) bear a **greater burden** of the tax.

As supply (demand) grows **relatively more elastic**, producers (consumers) bear a **smaller burden** of the tax.

Recall in Topic 4.7, we examined the difference between legal and economic tax incidence and determined that who the tax was levied on is irrelevant for who bears the burden. Now, we have the tools to determine who will bear the greater burden. Just as we can examine a demand curve being more or less elastic, we can examine the relative elasticity of demand compared to supply. In both instances of this hypothetical this dairy market, producers bear over 50% of the tax, meaning in box cases, supply is relatively more elastic than demand.

Exercises 4.8

1. Suppose a tax is levied in a market in which demand is downward sloping and supply is perfectly elastic. Which of the following statements is/are TRUE? (Assume no externalities.)

- I. Producer surplus decreases.
- II. The deadweight loss is zero.
- III. Consumers bear all the burden of the tax.

- a) II only.
- b) I and II only.
- c) I, II, and III.
- d) III only.

2. Which of the following statements about tax incidence and relative elasticities is TRUE?

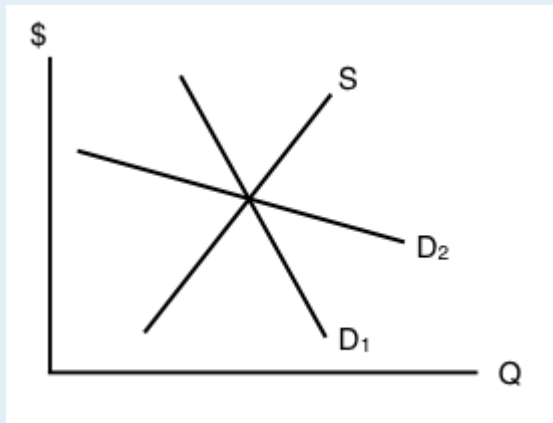
If demand is relatively inelastic and supply is relatively elastic, then consumers bear more of the burden of a tax.

If supply is perfectly inelastic, then producers bear none of the burden of a tax, no matter what the value of own-price elasticity of demand.

If the relative elasticities of demand and supply are the same, the tax burden is shared equally across consumers and producers.

- a) II only.
- b) I and III only.
- c) I, II, and III.
- d) III only.

3. The diagram below illustrates the supply curve for a good, and two possible demand curves for that good.



If a price floor (set above the initial equilibrium price) is introduced in this market then:

- a) The deadweight loss will be smaller, if demand is D1 than if demand is D2.
- b) The decrease in quantity will be smaller, if demand is D1 than if demand is D2.
- c) Neither a) nor b) are true.
- d) Both a) and b) are true.

4. In which of the following cases will the deadweight loss from taxation be zero?

- a) If demand is perfectly elastic.
- b) If demand is unit elastic.

- c) If demand is perfectly inelastic.
 - d) Either a) or c) will result in zero deadweight loss from taxation.
5. Which of the following statements about the economic incidence of taxation is TRUE?
- I. If demand is elastic, producers will bear a greater burden of the tax than consumers.
 - II. If supply is perfectly inelastic, producers will bear all the burden of the tax.
 - III. If the supply curve is perfectly elastic, consumers will bear none of the burden of the tax.
- a) II only.
 - b) I and II only.
 - c) II and III only.
 - d) I, II and III.
6. Which of the following correctly describes the equilibrium effects of a per-unit tax, in a market with NO externalities?
- a) Consumer and producer surplus increase but social surplus decreases.
 - b) Consumer and producer surplus decrease but social surplus increases.
 - c) Consumer surplus, producer surplus, and social surplus all increase.
 - d) Consumer surplus, producer surplus, and social surplus all decrease
7. Suppose that the price of a good increases. The increase in produce surplus will be:
- a) Larger if demand is relatively elastic than if demand is relatively inelastic.
 - b) Smaller if demand is relatively elastic than if demand is relatively inelastic.
 - c) Smaller if supply is relatively elastic than if supply is relatively inelastic.
 - d) Larger if supply is relatively elastic than if supply is relatively inelastic.

4.9 Tariffs

Learning Objectives

By the end of this section, you will be able to:

- Describe how the market changes when it is open to the world market
- Explain the impact of tariffs to domestic consumers, producers, and government
- Understand and show why a tariff causes a deadweight loss



(Credit: jaymethunt/ Pixabay/ CC0 Public Domain)

The Wooden Wall to Exports

Canadian lumber is one of the most well-known Canadian exports next to maple syrup and bacon. This means relations with Canada's biggest trading partner, the United States, can substantially help or harm the industry. An expired deal in 2015, with a one-year grace period, means that renegotiations will impact lumber sales for years to come. The problem – the U.S. may increase its tariff (a common

trade policy) from 15% to up to 25%, in response to what they say are unfair subsidies from the Canadian government.

How would this increase affect consumers? How would it affect American and Canadian producers? We will explore the incidence of trade policy, specifically tariffs, in this section.



Read more about the Canada-US lumber deals.

In Topic 2, we briefly looked at the Production Possibility Frontier, a trade model that looks at the production of two goods. As we know, trade is far more complicated than that. With our supply and demand model and the policy tools we have explored, we can analyze a piece of this complex topic by looking at the impact of trade policy on each domestic.

Trade policy is often motivated by the desire to protect the domestic industry and workers since imports are typically cheaper than domestic counterparts. Imports create unwanted competition for the firms and give domestic jobs to other countries. The preventative policy can take a number of forms, from direct price controls to quotas or taxes on imported goods. In this section, we will focus on one of the more common forms of trade policy: tariffs.

Tariffs

A tariff is defined as a tax on imported goods. The easiest way to show how it works is with an example. Below, we have continued the example from the beginning of this section: the US lumber market. In the domestic market, the **domestic equilibrium price and quantity** are \$1,000/board feet, and 40 million board feet, respectively. This is denoted as $PD = \$1,000$ and $QD = 40$ million. In this case, the **world price**, or PW is substantially lower than the domestic price. While this is not always the case, there is no incentive to import if PW is greater than PD (This model assumes that imports are identical to domestic products in every respect except for price).

With access to imports with prices as low as \$400, American consumers will purchase significantly more lumber. Their quantity demanded will increase to 70 million units (40 million more than the domestic equilibrium). These consumers are significantly better off with the new access to cheap lumber.

Domestic producers, on the other hand, lose a large degree of surplus from the imports. Whereas before they supplied 40 million board feet of lumber at \$1000, now they can only supply 10 million board feet. This is because many domestic firms are no longer able to compete with the foreign production and will either leave the market or decrease production.

With domestic production of 10 million and total production of 70 million, 60 million board feet of lumber are imported from Canada.

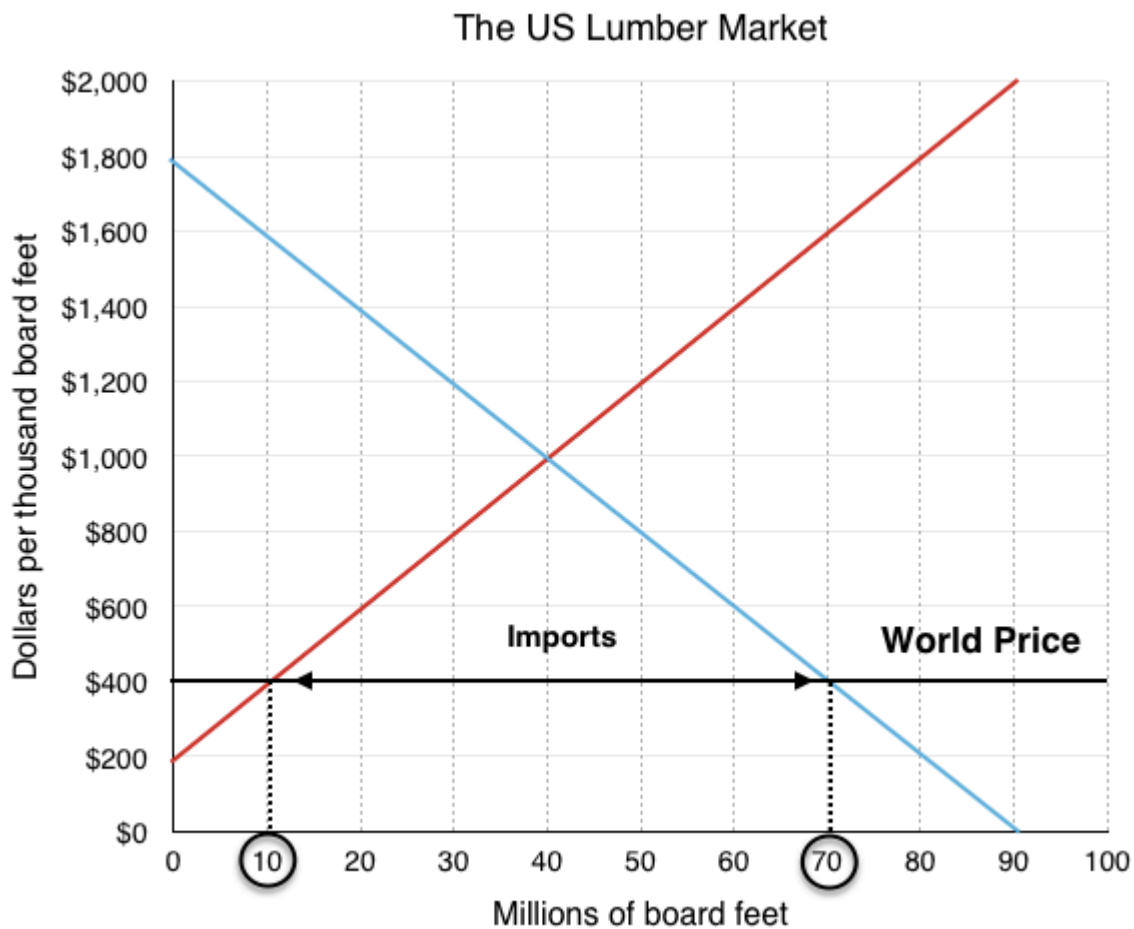


Figure 4.9a

With such a significant portion of lumber production being imported, the government may choose to introduce a protectionist policy to restrict foreign competition, due to severe pressure from domestic producers. One important clarification about our model at this point is that the only surplus America cares about is domestic. Any producer surplus to Canadian firms is irrelevant in American decision making.

Suppose the government enacts a \$400 **tariff** on imports to restrict competition. A tariff is a tax imposed on important goods or services. This creates an equilibrium price equal to \$800 (world price + the \$400 tariff). While this price is still below the domestic equilibrium, more domestic firms are now able

to compete. In the new equilibrium, total quantity is 50 million board feet, 30 million of which are domestic. This means that imports have dropped from 60 million to 20 million board feet.

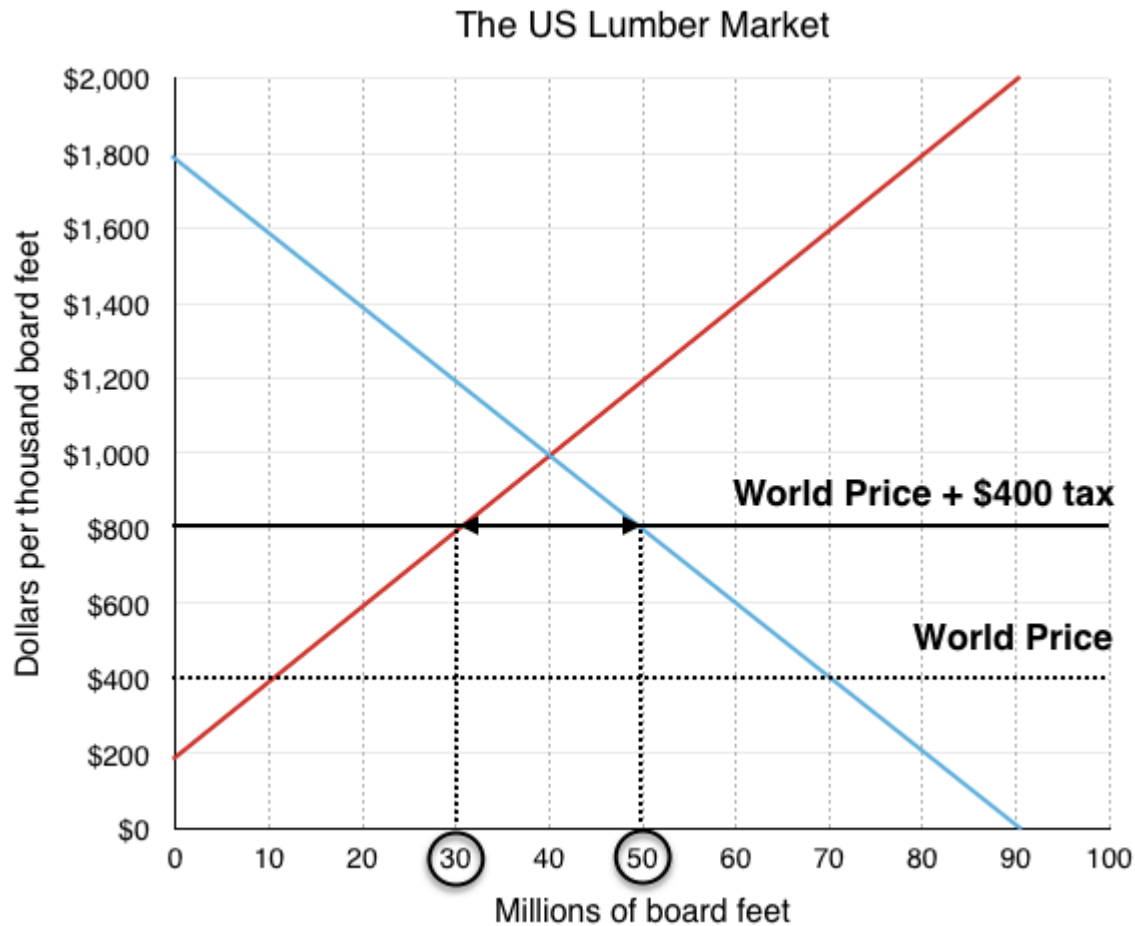


Figure 4.9b

In this situation, domestic producers are better off, as they are now able to sell 20 million more units. Consumers, on the other hand, are worse off, as they face a higher price. The government is better off with revenue collected by the tariff. In Figure 4.10c, we have broken down the effects of the tariff on each of the market players.

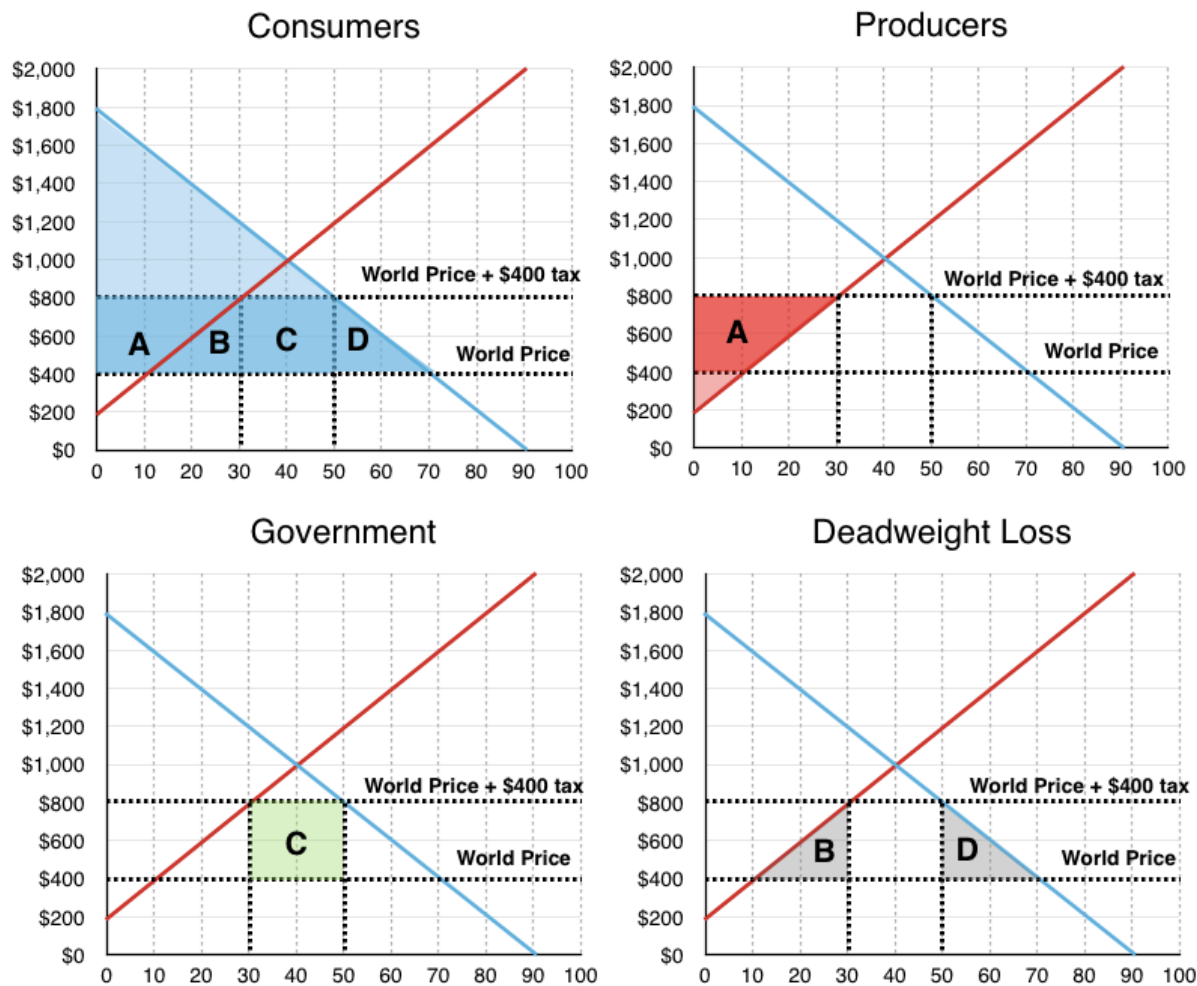


Figure 4.9c

Consumers

Consumers originally purchased 70 million board feet at \$400 each, and now purchase 50 million at \$800 each.

The change in surplus is represented by a **decrease in areas A + B + C + D**

Producers (Domestic)

Domestic producers now sell 20 million more units for \$400 more than previously (note that the tariff only applies to imports, not domestic production).

The change in surplus is represented by an **increase in area A**

Government

The government charges a \$400 tariff on the 20 million remaining imported board feet.

The change in surplus is represented by an **increase in area C**

Net Result

The government and producers gained areas A and C as a result of the tariff, but consumers lost areas A, B, C, and D. Overall, the policy created a **deadweight loss equal to area B and D**.

Conclusion

In chapter 4, we looked at a number of policies that resulted in gains for some market players, but overall deadweight loss for society. We explored price and quantity controls, taxes and subsidies, and trade policy. In all cases except for subsidies, the policies reduced equilibrium quantity to a point where $MB > MC$. This means that although the net marginal benefits from an additional unit were greater than the net marginal costs, the policy was restricting the market from returning to equilibrium

Why would the government implement policies that decrease market surplus? One possible reason we addressed is politics. In our example of trade policy, the domestic producers of lumber pressured the government to increase protection against foreign competition. This protectionist stance is quite common. Though trade is beneficial for society overall, many workers can lose jobs in the short run to foreign competition. In addition, when the people who stand to gain from a policy are concentrated and vocal, the majority is often ignored.

One of the most common reasons for policy, which we will discuss in detail in Topic 5, is that the market does not take into account all the costs it imposes on society. This does not mean the model is flawed, we just need to add another layer: externalities.

Glossary

Domestic Equilibrium

The equilibrium achieved by a market if it is not open to trade

Tariff

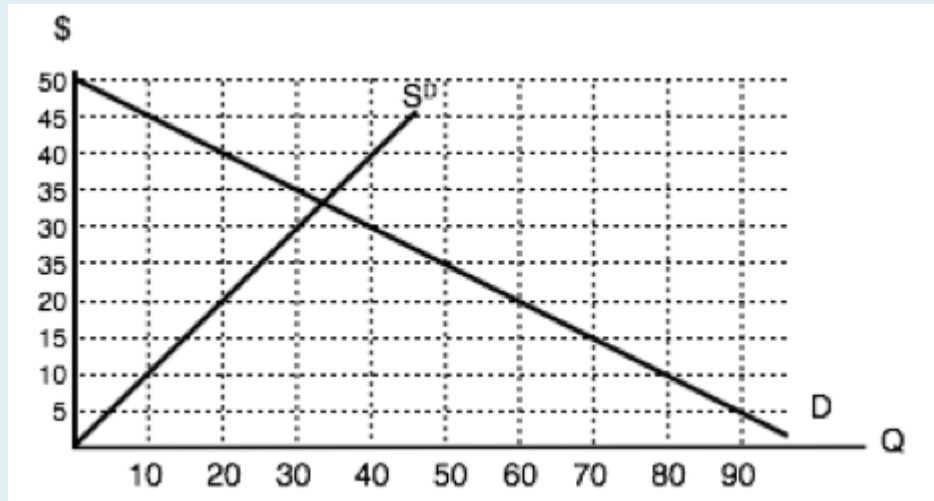
a tax imposed on imported goods or services

World Price

the equilibrium price of the world market

Exercises 4.9

Use the diagram below, illustrates the domestic supply curve (SD) and demand curve for a good, to answer the following THREE questions. Assume that the world price is equal to \$20 per unit, and initially there are no trade restrictions in place.

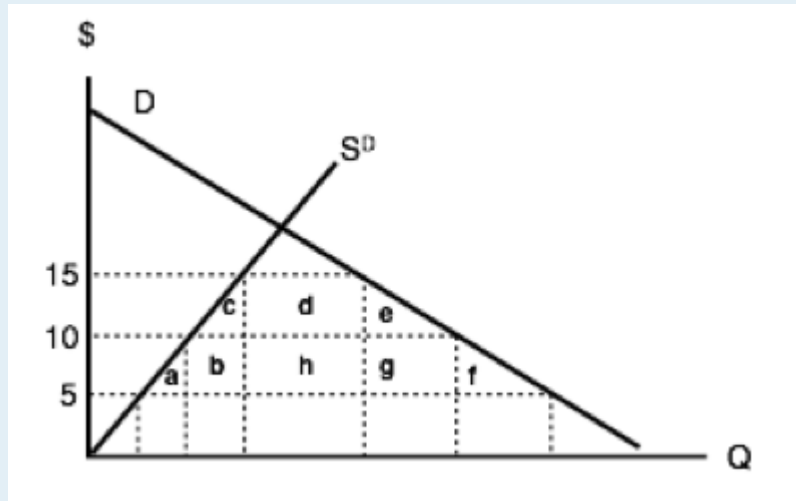


1. If a tariff of \$10 per unit is introduced in the market, then, at the new equilibrium:
 - a) Consumers will pay a price of \$20, quantity sold will be 60 units, of which 40 are imported.
 - b) Consumers will pay a price of \$30, quantity sold will be 40 units, of which 30 are produced domestically.
 - c) Consumers will pay a price of \$20, quantity sold will be 60 units, of which none are produced domestically.
 - d) Consumers will pay a price of \$30, quantity sold will be 40 units, of which none are imported.

2. If a tariff of \$10 per unit is introduced in the market, then the government will raise ____ in tariff revenue.
 - a) \$400.
 - b) \$300.
 - c) \$200.
 - d) \$100.

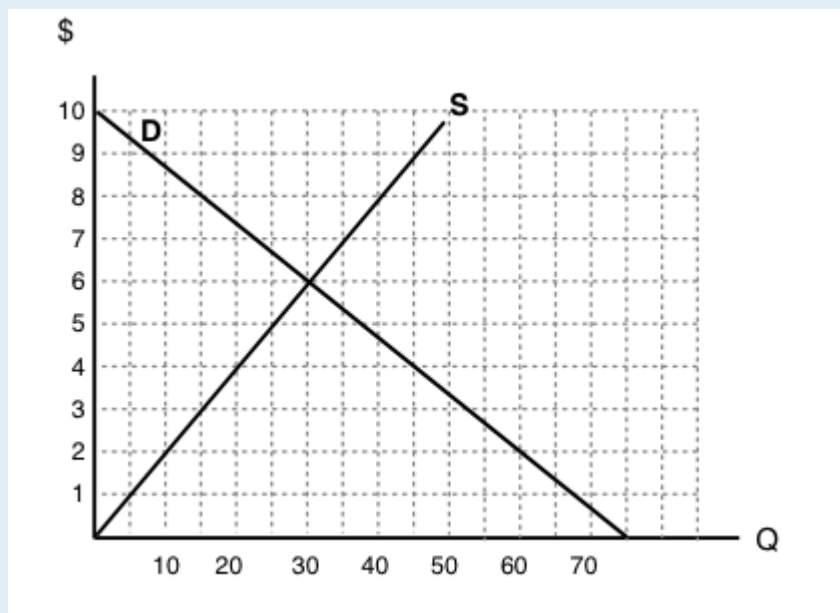
3. If a tariff of \$10 per unit is introduced in the market, then the deadweight loss will equal:
 - a) \$50.
 - b) \$100.
 - c) \$150.
 - d) None of the above.

The following two questions refer to the diagram below, which illustrates the domestic supply curve (SD) and demand curve for a good. Assume that the world price is equal to \$5 per unit, and that initially there are no trade restrictions.



4. If a tariff of \$10 per unit of imports is introduced, which area represents the deadweight loss?
- a + f.
 - c + e.
 - a + b + c + e + f + g.
 - a + b + d + h + g + f.
5. If a tariff of \$10 per unit of imports is introduced, which area represents the tariff revenue raised?
- d.
 - d + h.
 - h.
 - b + h + g.

Use the diagram below – which illustrates the domestic supply and demand curves for a good – to answer the following TWO questions. Assume that the world price is equal to \$2.



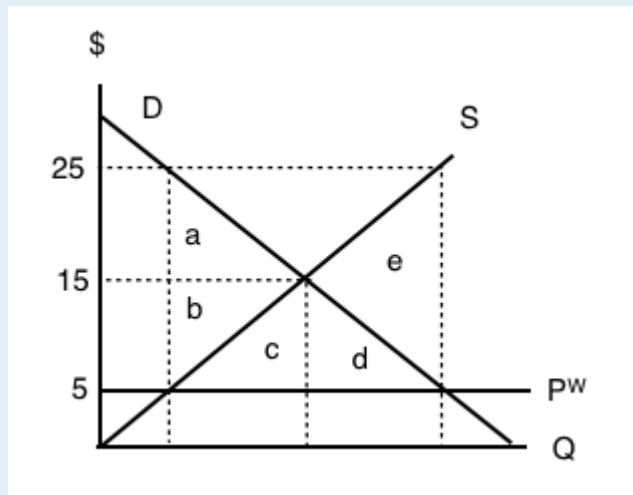
6. If there are no trade restrictions in place, what will be the equilibrium quantity of IMPORTS?

- a) 40.
- b) 50.
- c) 60.
- d) None of the above.

7. If a tariff of \$2 is introduced, then:

- a) Imports will decrease and social surplus will increase.
- b) Imports will decrease and consumer surplus will increase
- c) Imports will decrease and domestic producer surplus will increase.
- d) All of the above will occur.

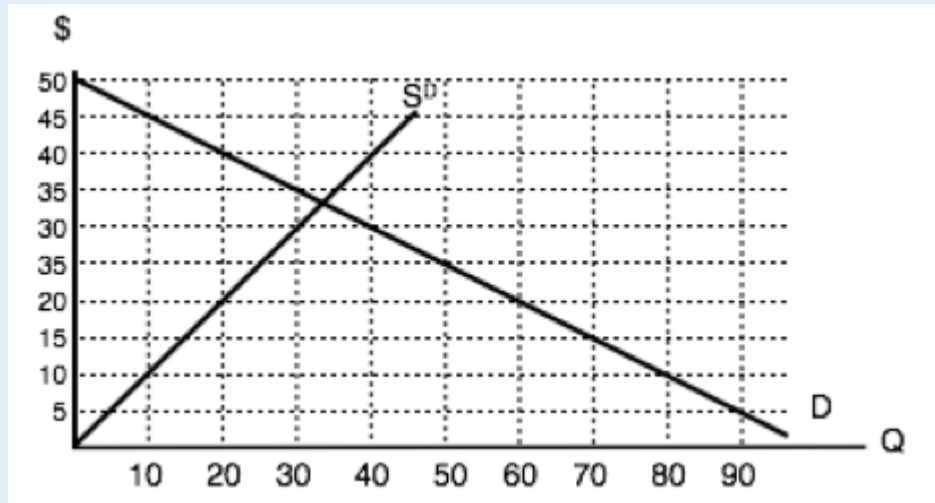
8. The diagram below illustrates the domestic supply curve (SD) and demand curve for a good. Assume that the world price is equal to \$5 per unit.



If imports of this good are banned altogether, which area represents the deadweight loss?

- a) $a + b$.
- b) e .
- c) $c + d$.
- d) $a + b + c + d + e$.

9. The diagram below illustrates the domestic supply curve (SD) and demand curve for a good. Assume that the world price is equal to \$10 per unit, and initially there are no trade restrictions.



If a tariff of \$10 per unit is introduced, by how much do imports decrease?

- a) 10 units.
- b) 20 units.
- c) 30 units.
- d) 40 units.

Case Study - Automation in Fast Food

Note that the Economics 103 Case Studies are meant to supplement the course material by giving you experience applying Economic concepts to real world examples. While they are beyond the level you will be tested on, they are useful for students who want a stronger grasp of the concepts and their applications.



(Credit: Todd Brown/ Pinterest)

Fast food saw an increasing shift to automation in 2016, with McDonalds widely adopting “Create your Taste” electronic kiosks where customers could place their order. Many customers are finding that automation adds consistency, gives greater opportunities for customization, and reduces human error. Publications including Forbes, Business Insider, and more report that the fight for higher minimum wages has expedited this shift. Corporate leaders such as former President and CEO of McDonalds USA argue the success of “The Fight for 15” in states such as California has resulted in the closure of many small businesses, unable to pay the rising costs of labour and lacking the resources to switch to machines.



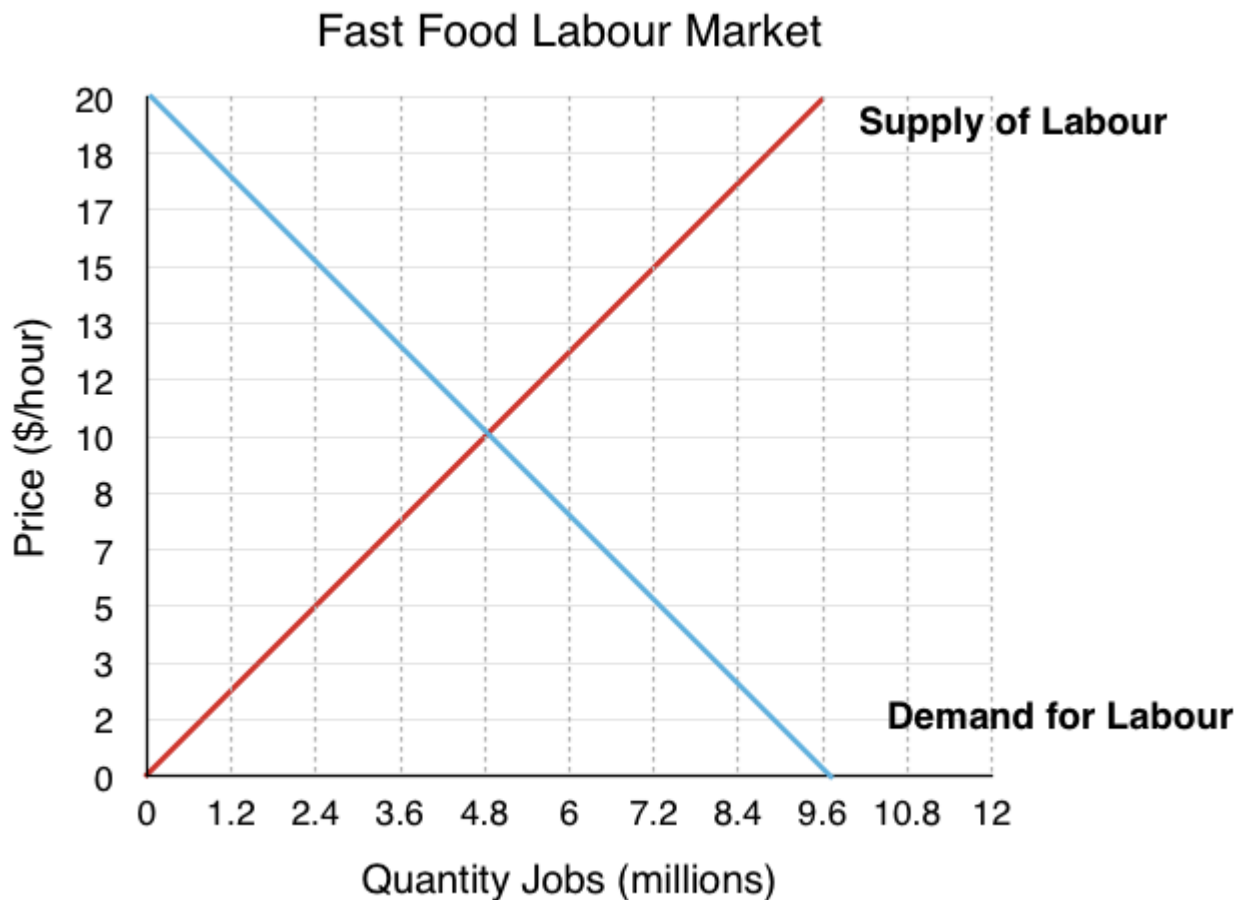
Read former McDonald CEO comment on “The Fight for 15.”



Read more about small businesses impacted by rising minimum wage.

In Topic 3 we explored the impact of government intervention in the market, and showed how policies that change quantity from equilibrium cause deadweight losses. To explore this further, let's consider the labour market for fast food and the possible impact of a minimum wage.

- 1. A supply and demand curve for the fast food labour market is presented below, label the equilibrium price and quantity.**
- 2. What is consumer and producer surplus? Market surplus?**



3. Assume the government passes policy introducing a \$15 minimum wage. Label the new quantity demanded, and quantity supplied. Is there a shortage or a surplus of labour?
4. What are the two effects of the minimum wage on workers? What is the net change in surplus?
5. What is the deadweight loss from this policy?

Remember that positive economics and efficiency is independent of equity. The argument is not that redistributing wealth is unnecessary, but that perhaps a minimum wage policy is not the best mechanism to do it. Even so there is debate about whether minimum wage does cause the inefficiency as suggested above. A series of rigorous studies by the Institute for Research on Labor and Employment at the University of California, Berkeley, comparing neighbouring counties in the U.S. located on different sides of a state border with different minimum wage levels between 1990 and 2006 found no adverse employment effects from higher minimum wages. One key argument is that an increase in minimum wage boosts spending in the economy, which may create jobs.



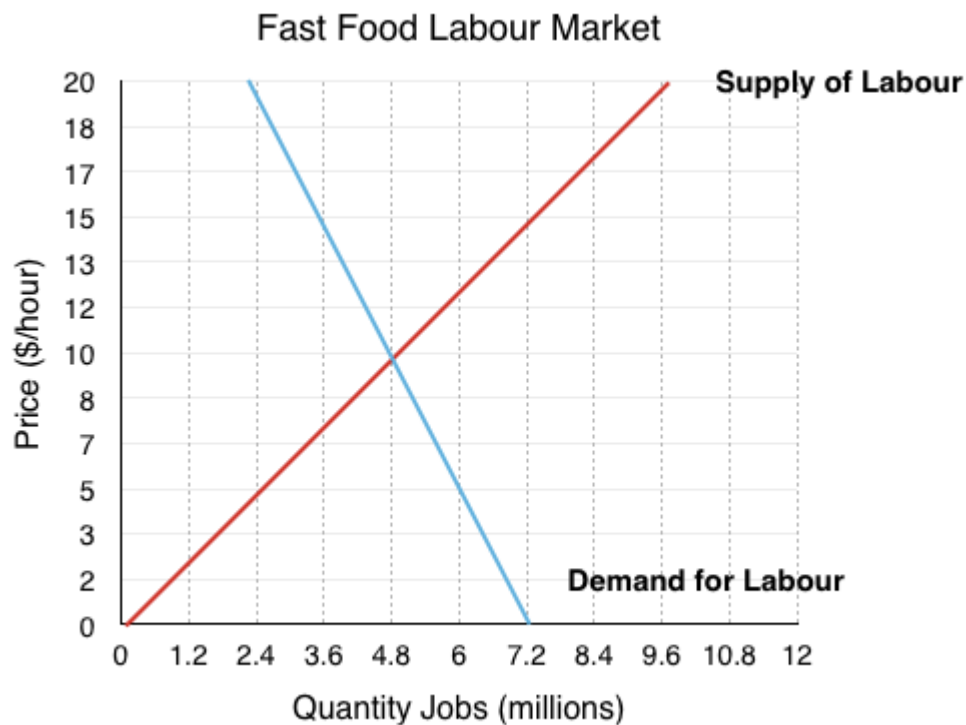
Read more arguments defending minimum wage policy.



(Credit: INeverCry/ Flickr/ CC-BY-SA-2.0)

How can we represent this in our model? Well in the diagram above, we made assumptions about the elasticity of the market, where an increase in the price of labour caused a relatively large drop in the quantity of labour demanded. What if firms were less responsive to such price changes?

6. A new supply and demand curve for the fast food labour market is presented below with a more inelastic supply curve, label the new equilibrium price and quantity.



7. Assume the government again passes policy introducing a \$15 minimum wage. Label the new quantity demanded, quantity supplied. Is there a shortage or a surplus of labour? By how much?

8. What is the deadweight loss from this policy? How does this compare to before?

How does automation impact the elasticity of the firms demand curve? Consider McDonald's USA CEO Ed Rensi's statement:

"I was at the National Restaurant Show yesterday and if you look at the robotic devices that are coming into the restaurant industry — it's cheaper to buy a \$35,000 robotic arm than it is to hire an employee who's inefficient making \$15 an hour bagging French fries — it's nonsense and it's very destructive and it's inflationary and it's going to cause a job loss across this country like you're not going to believe."



Former CEO for the U.S. operations of McDonald's Corporation, Ed Rensi, speaks with Fox Business News on the impact of the \$15 minimum wage.

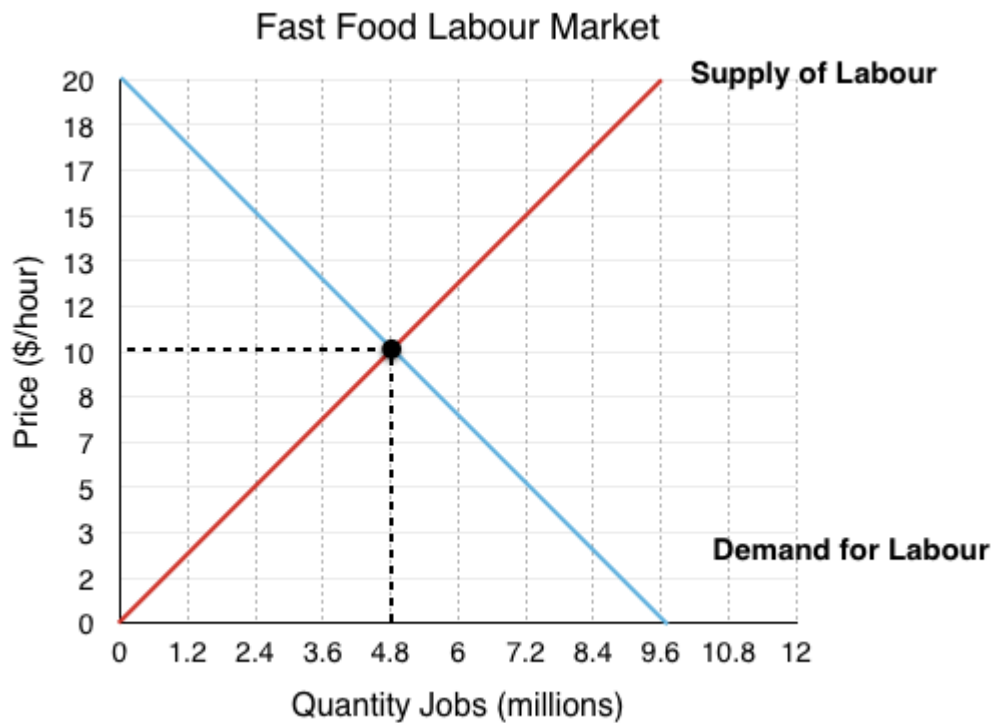
Rensi is adamant that economics happens at the margin; he is not suggesting that a increase in minimum wage will cause everyone to switch to automation, but that it incentives more and more to consider it as a viable alternative.

9. Comment on how automation effects the elasticity of demand for labour. Would easy access to automation make demand relatively more or less elastic?

In this case study we have shown how microeconomic concepts of policy and elasticity can be used to understand current events in the news. Do you have a story you think would make a good case study? Contact economics103@uvic.ca to propose your story.

Solutions: Case Study - Automation in Fast Food

1. A supply and demand curve for the fast food labour market is presented below, label the equilibrium price and quantity.

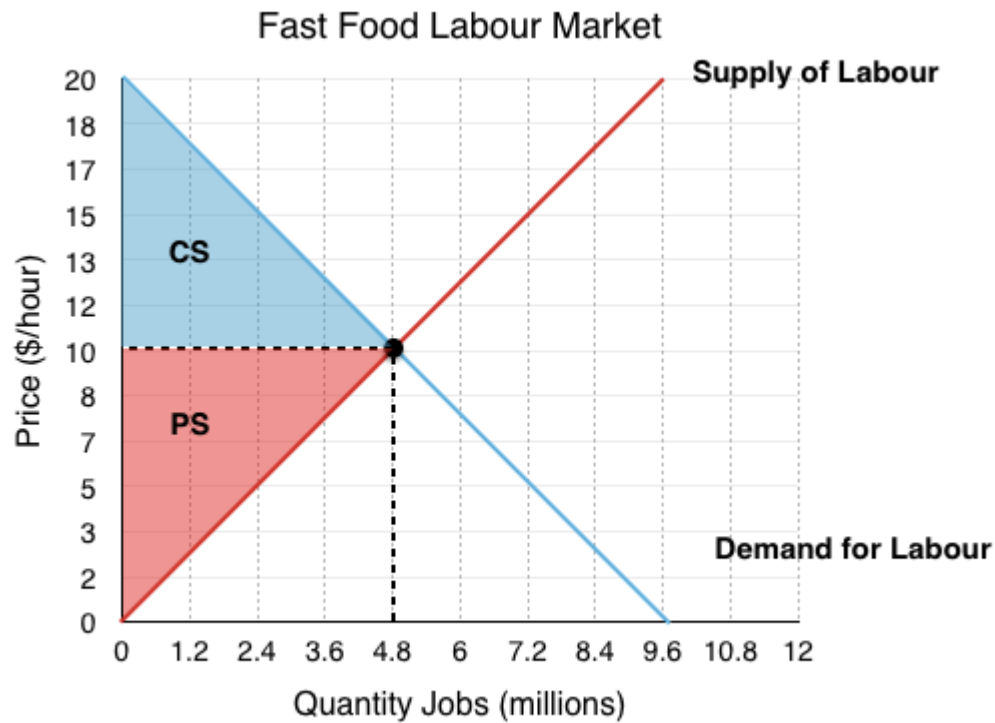


Since **Firms** demand the labour, they represent the **demand side** of the market.

Since **Job Searchers** supply the labour, they represent the supply **side** of the market.

The equilibrium occurs at the intersection of supply and demand, in this case @ $E_P = \$10/\text{hr}$, $E_Q = 4.8$ **million workers employed**.

2. What is consumer and producer surplus? Market surplus?



Consumer Surplus

It is important to understand that firms are the consumers in this situation since they demand and ‘consume’ labour. Recall consumer surplus is the difference between willingness to pay and the wage they pay. This is equal to the area labelled CS represented by the blue triangle in the figure above.

$$\frac{(20 - 10) \times (4.8)}{2} = \$24 \text{ million}$$

Producer Surplus

In this context the producers are the job searchers/workers since they ‘produce’ labour for the firms to buy. Producer surplus is the difference between the marginal cost of labour (commuting, opportunity cost, etc) and the wage.

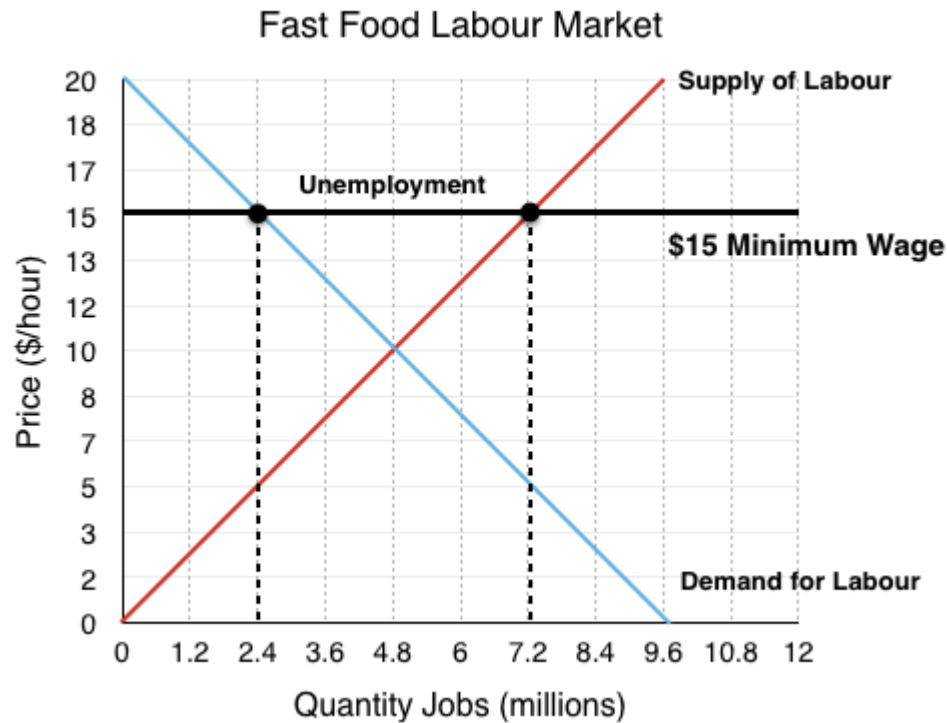
$$\frac{(10 - 0) \times (4.8)}{2} = \$24 \text{ million}$$

Market Surplus

Market surplus is just consumer surplus + producer surplus.

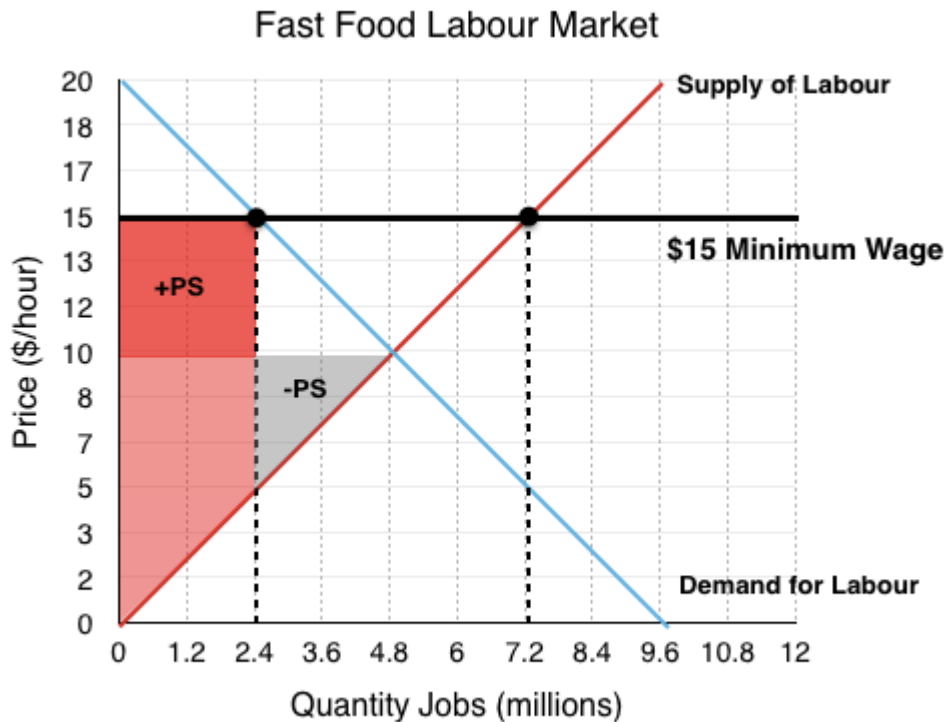
$$\$24 \text{ million} + \$24 \text{ million} = \$48 \text{ million}$$

3. Assume the government passes policy introducing a \$15 minimum wage. Label the new quantity demanded, and quantity supplied. Is there a shortage or a surplus of labour?



A minimum wage is the same as a price floor, a government policy that restricts price from falling below the mandated level. In this case price is wage. At a wage of \$15/hour **quantity of labour demanded** = **2.4 million**, whereas **quantity of labour supplied** = **7.2 million**. The resulting unemployment represents a surplus of workers in the market.

4. What are the two effects of the minimum wage on workers? What is the net change in surplus?



When you have a price change from equilibrium two things happen – a transfer and a deadweight loss. In this example the two mean very different things for consumers.

The transfer

There are clear benefits for the minimum wage if you keep your job. For the 2.4 million workers in this situation who go from receiving a wage of \$10/hour to \$15/hour, their surplus increases. This increase is represented by the highlighted red region labelled +PS.

$$(\$15 - \$10) \times (2.4) = +\$12 \text{ million}$$

The deadweight loss

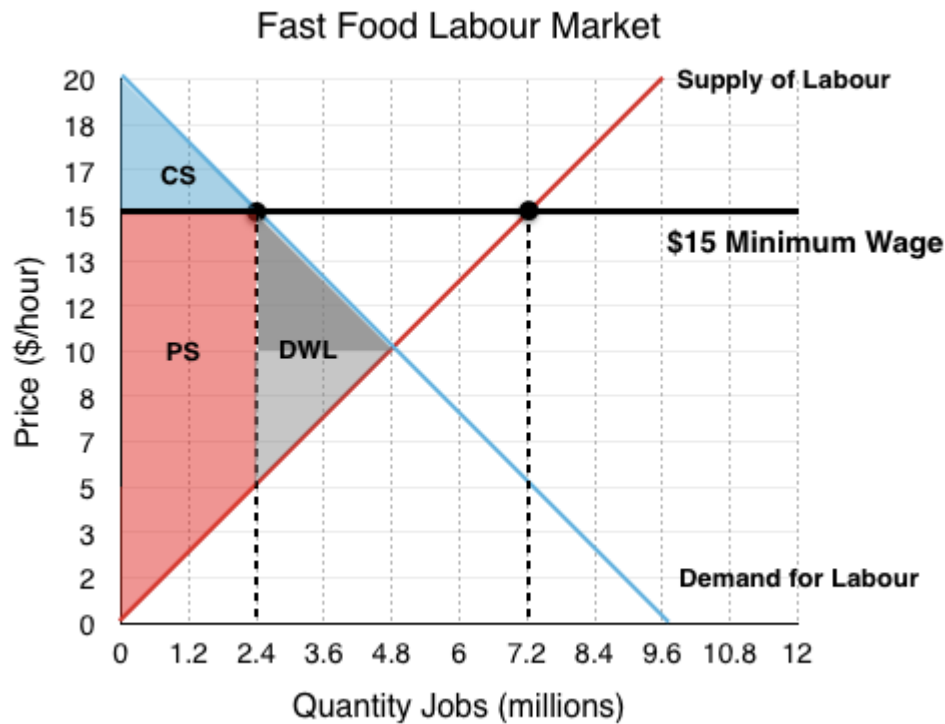
The workers who lose their jobs from the policy are less happy. In this case 2.4 million workers are now unable to find work. Note that these are the workers who faced the highest marginal cost of labour, the decrease in surplus is represented by the grey region labelled -PS.

$$\frac{(10 - 5) \times (2.4)}{2} = -\$6 \text{ million.}$$

The net change in surplus for workers is +\$6 million (\$12 million – \$6 million)

5. What is the deadweight loss from this policy?

Even though workers gain from the policy, we cannot forget about the firms!



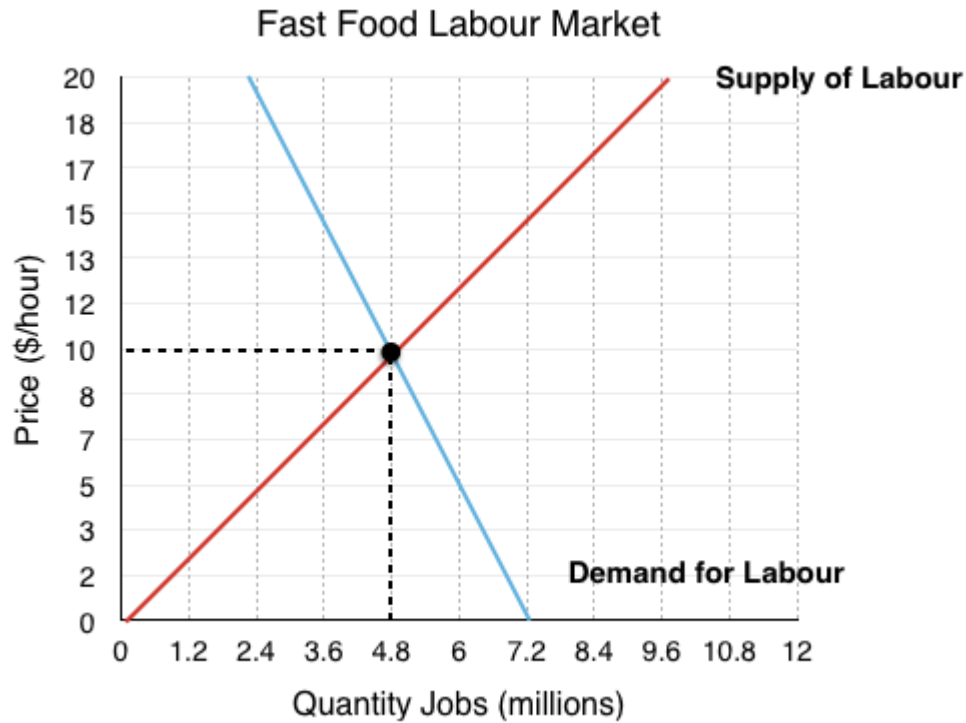
Although the breakdown of the firms is not represented, we know that the ‘transfer’ from question 4 was coming out of the pockets of firms. For deadweight loss, this is irrelevant since it is just a redistribution of surplus.

What we are interested in are the firms who are no longer employing workers, going out of business because workers are too expensive. This is represented by the darker of the two grey regions.

$$\frac{(15 - 10) \times (2.4)}{2} = \$6 \text{ million}$$

Adding the two DWL areas together, we find the minimum wage resulted in inefficiencies of \$12 million (\$6 million + \$6 million)

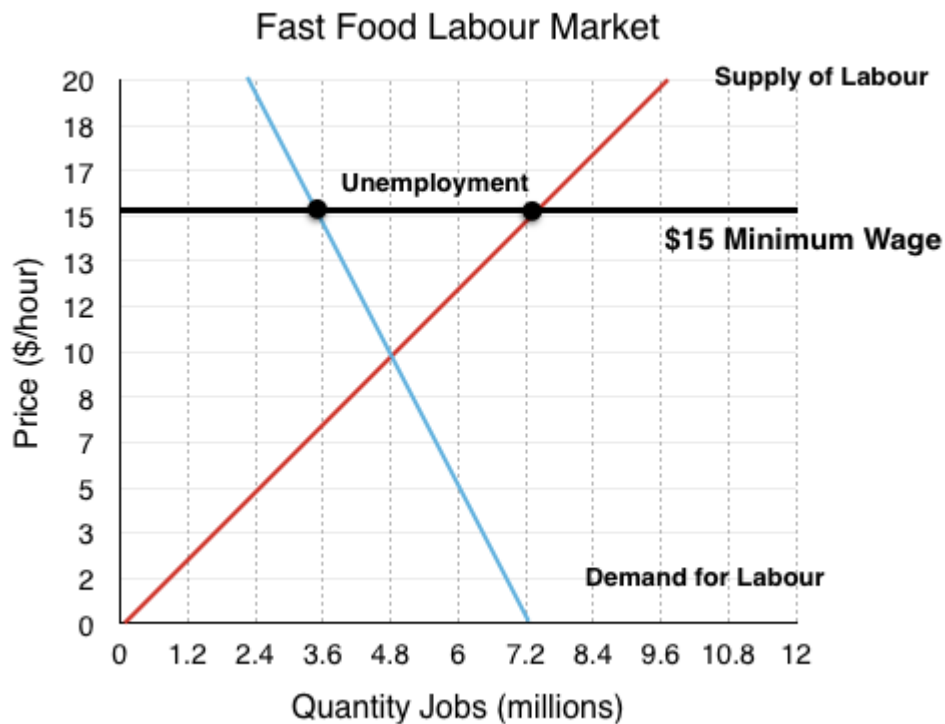
6. A new supply and demand curve for the fast food labour market is presented below with a more inelastic supply curve, label the new equilibrium price and quantity.



The new equilibrium occurs where the supply curve intersects the new demand curve, in this case @ **$E_P = \$10/\text{hr}$, $E_Q = 2.4$ million workers employed.**

Note that the equilibrium is the same, but the slope has changed, meaning the demand curve crosses through different points at every other quantity.

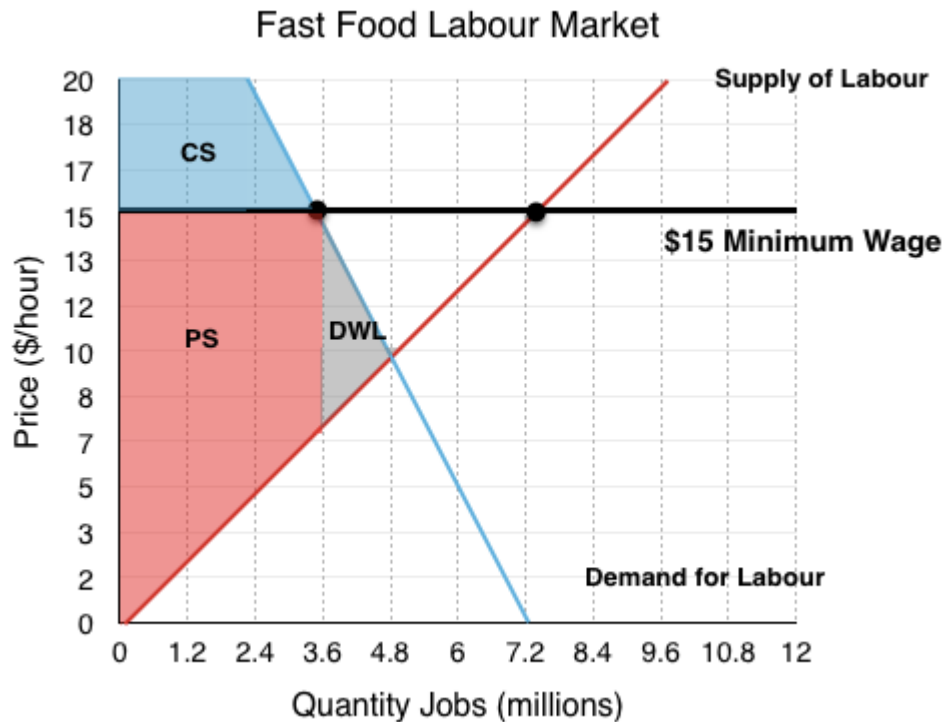
7. Assume the government again passes policy introducing a \$15 minimum wage. Label the new quantity demanded, quantity supplied. Is there a shortage or a surplus of labour? By how much?



At a wage of \$15/hour **quantity of labour demanded = 3.6 million**, whereas **quantity of labour supplied = 7.2 million**. The resulting unemployment represents a surplus of workers in the market.

Note that quantity of labour demanded has not fallen by as much as firms are less responsive to the change in wage.

8. What is the deadweight loss from this policy? How does this compare to before?



Again we see a deadweight loss as workers lose jobs and firms go out of business. This is equal to the area in grey, labelled DWL.

$$\frac{(15 - 7) \times (4.8 - 3.6)}{2} = \$4.8 \text{ million.}$$

By changing our assumptions of elasticity we see our deadweight loss has fallen from \$12 million to \$4.8 million. This demonstrates the importance of the assumptions we make, and ensuring that you reveal your assumptions when conducted economic analysis.

9. Comment on how automation effects the elasticity of demand for labour. Would easy access to automation make demand relatively more or less elastic?

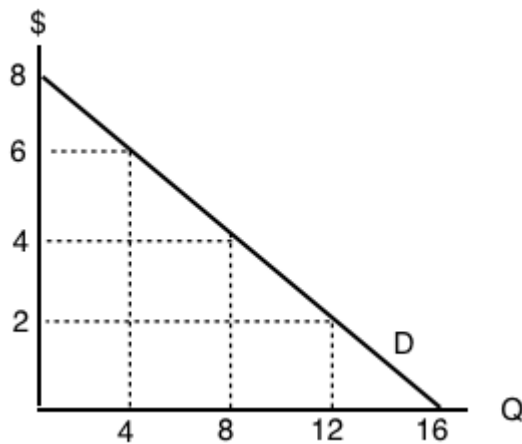
All the rhetoric around the increasing accessibility of automation points to the fact that firms demand curves are becoming relatively more elastic. Whereas before there may have been little choice but to have someone at the till, now they can be fairly easily replaced by a machine. This is important to recognize when considering the impacts of minimum wage policy, as changing technology can change the assumptions on which we base our models.

Topic 4 Multiple Choice Questions

All the following questions are from previous exams for Economics 103. They are duplicates of the questions found in the Topic sub-sections.

Exercises 4.1

1. Use the demand curve diagram below to answer the following question.



What is the own-price elasticity of demand as price increases from \$2 per unit to \$4 per unit? Use the mid-point formula in your calculation.

- a) $1/3$.
- b) $6/10$.
- c) $2/3$.
- d) None of the above.

2. Suppose that a 2% increase in price results in a 6% decrease in quantity demanded. Own-price elasticity of demand is equal to:

- a) $1/3$.
- b) 6.
- c) 2
- d) 3.

3. If own-price elasticity of demand equals 0.3 in absolute value, then what percentage change in price will result in a 6% decrease in quantity demanded?

- a) 3%
- b) 6%
- c) 20%.
- d) 50%.

4. Suppose you are told that the own-price elasticity of supply equal 0.5. Which of the following is the correct interpretation of this number?

- a) A 1% increase in price will result in a 50% increase in quantity supplied.
- b) A 1% increase in price will result in a 5% increase in quantity supplied.
- c) A 1% increase in price will result in a 2% increase in quantity supplied.
- d) A 1% increase in price will result in a 0.5% increase in quantity supplied.

5. Suppose that a 10 increase in price results in a 50 percent decrease in quantity demanded. What does (the absolute value of) own price elasticity of demand equal?

- a) 0.5.
- b) 0.2.
- c) 5.
- d) 10.

6. If goods X and Y are SUBSTITUTES, then which of the following could be the value of the cross price elasticity of demand for good Y?

- a) -1.
- b) -2.
- c) Neither a) nor b).
- d) Both a) and b).

7. If pizza is a normal good, then which of the following could be the value of income elasticity of demand?

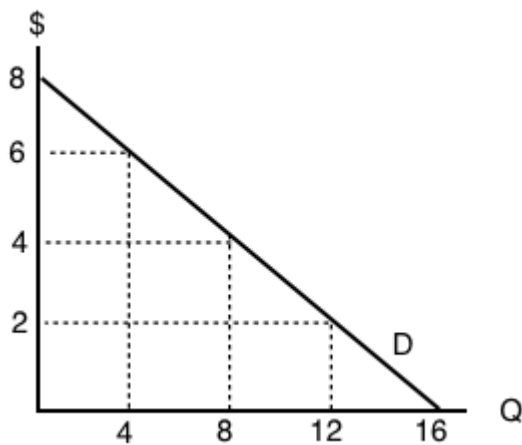
- a) 0.2.
- b) 0.8.
- c) 1.4
- d) All of the above.

8. If goods X and Y are COMPLEMENTS, the which of the following could be the value of cross price elasticity of demand?

- a) 0.
- b) 1.
- c) -1.
- d) All of the above could be the value of cross price elasticity of demand.

Exercises 4.2

Use the demand curve diagram below to answer the following TWO questions.



1. What is the own-price elasticity of demand as price decreases from \$8 per unit to \$6 per unit? Use the mid-point formula in your calculation.

- a) Infinity.
- b) 7.0
- c) 2.0.
- d) 1.75

2. At what point is demand unit-elastic?

- a) $P = \$6$, $Q = 12$.
- b) $P = \$4$, $Q = 8$.
- c) $P = \$2$, $Q = 12$.
- d) None of the above.

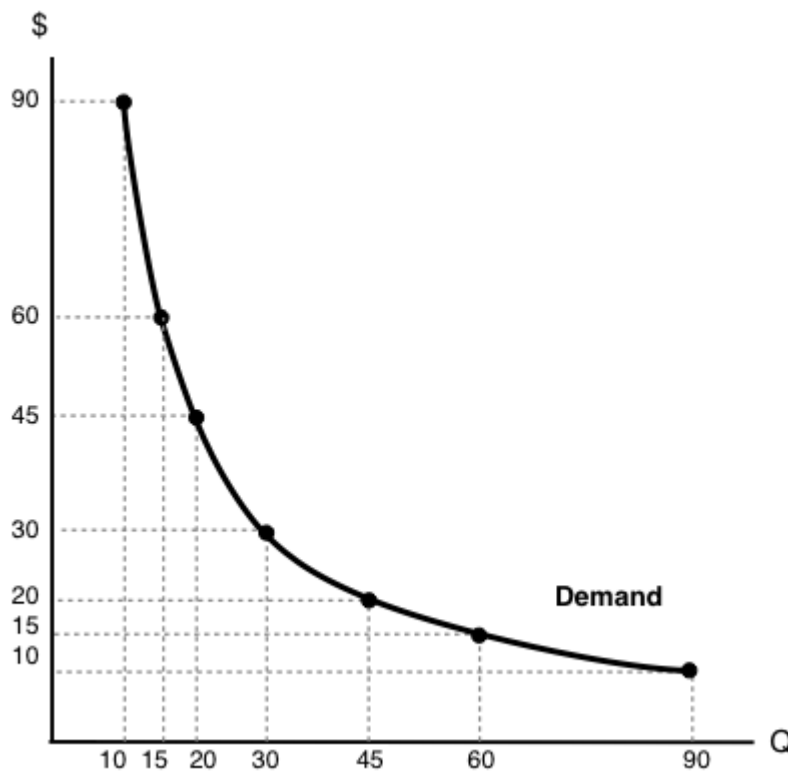
3. Which of the following statements about the relationship between the price elasticity of demand and revenue is TRUE?

- a) If demand is price inelastic, then increasing price will decrease revenue.
- b) If demand is price elastic, then decreasing price will increase revenue.
- c) If demand is perfectly inelastic, then revenue is the same at any price.
- d) Elasticity is constant along a linear demand curve and so too is revenue.

4. Suppose BC Ferries is considering an increase in ferry fares. If doing so results in an increase in revenues raised, which of the following could be the value of the own-price elasticity of demand for ferry rides?

- a) 0.5.
- b) 1.0.
- c) 1.5.
- d) All of the above.

5. Use the demand diagram below to answer this question. Note that $P \times Q$ equals \$900 at every point on this demand curve.



Which of the following statements correctly describes own-price elasticity of demand, for this particular demand curve?

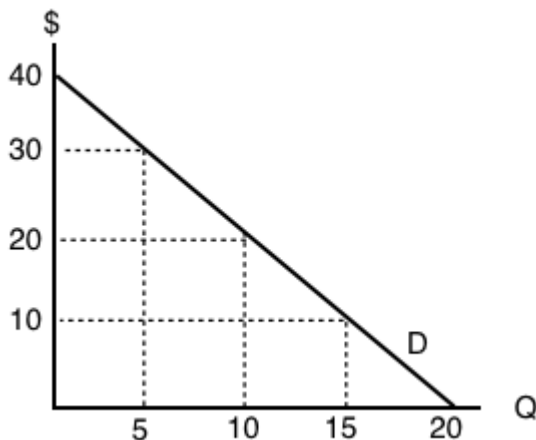
- I. Demand is unit elastic at a price of \$30, and elastic at all prices greater than \$30.
- II. Demand is unit elastic at a price of \$30, and inelastic at all prices less than \$30.
- III. Demand is unit elastic for all prices.

- a) I and II only.
- b) I only.
- c) I, II and III.
- d) III only.

6. Suppose that, if the price of a good falls from \$10 to \$8, total expenditure on the good decreases. Which of the following could be the (absolute) value for the own-price elasticity of demand, in the price range considered?

- a) 1.6.
- b) 2.3.
- c) Both a) and b).
- d) Neither a) or b).

7. Consider the demand curve drawn below.



At which of the following prices and quantities is revenue maximized?

- a) $P = 40$; $Q = 0$.
- b) $P = 30$; $Q = 5$.
- c) $P = 20$; $Q = 10$.
- d) $P = 0$; $Q = 20$.

Exercises 4.3

1. Which of the following does NOT affect the magnitude of own-price elasticity of demand?

- a) The length of the time horizon over which we are looking at the change in consumer behaviour.
- b) The availability (or lack thereof) of close substitutes for the good in question.
- c) The amount by which quantity supplied will change as price changes.
- d) All of the above affect the own-price elasticity of demand.

2. If a demand curve is VERTICAL, then own-price elasticity of demand for this good is equal to:

- a) Infinity.
- b) Zero.
- c) One.
- d) None of the above.

3. If – given consumer preferences – a certain good has many close substitutes available, then:

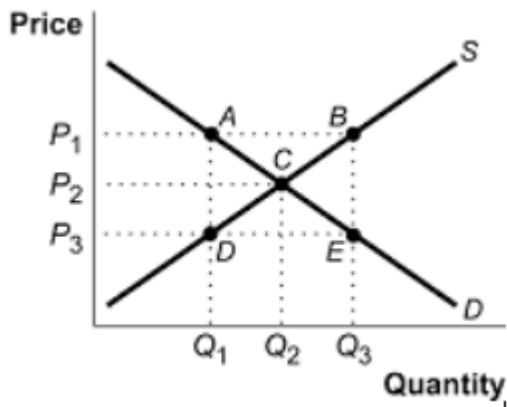
- a) The demand for that good will be relatively inelastic, compared to goods for which there are few close substitutes.
- b) The supply of that good will be relatively inelastic, compared to goods for which there are few close substitutes.
- c) The demand for that good will be relatively elastic, compared to goods for which there are few close substitutes.
- d) The supply of that good will be relatively elastic, compared to goods for which there are few close substitutes.

4. If – given consumer preferences – a certain good has few close substitutes available, then:

- a) The demand for that good will be relatively inelastic, compared to goods for which there are many close substitutes.
- b) The supply of that good will be relatively inelastic, compared to goods for which there are many close substitutes.
- c) The demand for that good will be relatively elastic, compared to goods for which there are many close substitutes.
- d) The supply of that good will be relatively elastic, compared to goods for which there are many close substitutes.

Exercises 4.5

The following TWO questions refer to the supply and demand curves illustrated below.



1. A price ceiling of P_3 causes:

- a) A deadweight loss triangle whose corners are ABC.
- b) A deadweight loss triangle whose corners are ACD.
- c) A deadweight loss triangle whose corners are BEC.
- d) A deadweight loss triangle whose corners are CDE.

2. A price floor of P_1 causes:

- a) Excess demand equal to the distance AB.
- b) Excess supply equal to the distance AB.
- c) Excess supply equal to the distance DE.
- d) Excess demand equal to the distance DE.

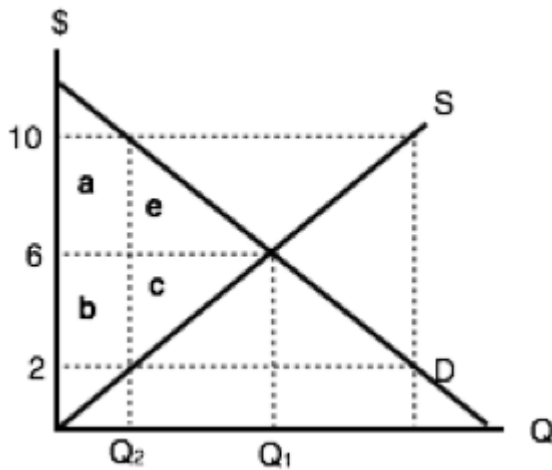
3. Which of the following statements about price ceilings is TRUE? (Assume the price ceiling is set below the unregulated equilibrium price.)

- a) Price ceilings make sellers worse off.
- b) Price ceilings make buyers better off.
- c) Both a) and b) are true.
- d) Neither a) nor b is true).

4. Which of the following statements about minimum wages is true?

- a) Minimum wage laws may make some workers better off and others worse off.
- b) Minimum wage laws make employers worse off.
- c) Both a) and b) are true.
- d) None of the above are true.

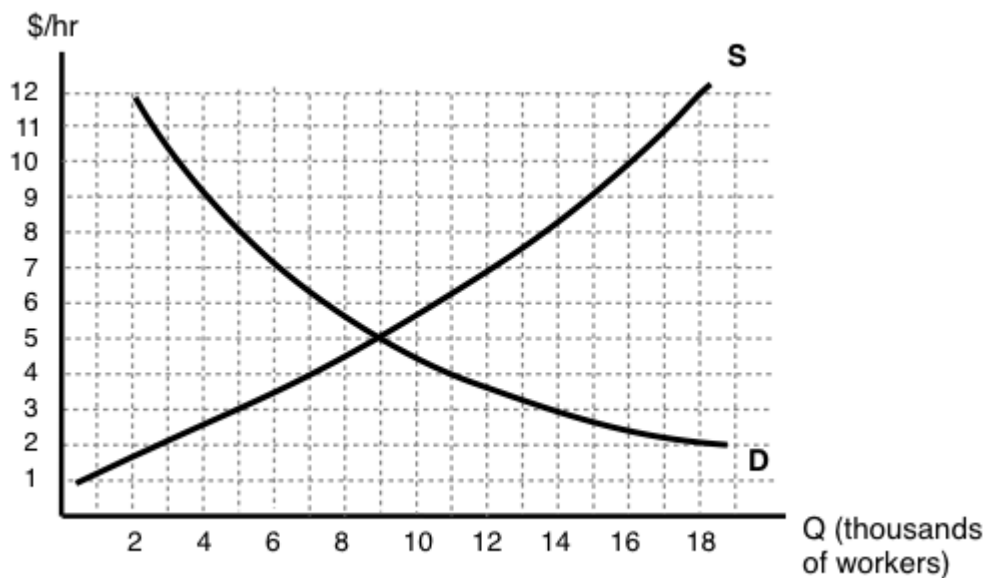
5. Consider diagram below, which illustrates the market for low-skilled labour.



Suppose that the equilibrium quantity is reduced from Q_1 to Q_2 units, through the introduction of a price floor. Which of the following correctly describes the resulting decrease in MARKET surplus?

- a) Market surplus will decrease by $a - c$.
- b) Market surplus will decrease by $e + c$.
- c) Market surplus will decrease by $a + b + e + c$.
- d) Market surplus will decrease by $b - e$.

6. Consider diagram below, which illustrates the market for low-skilled labour.



If the government introduces a minimum wage law set at \$9 per hour, then, in the new equilibrium, which of the following statements is TRUE?

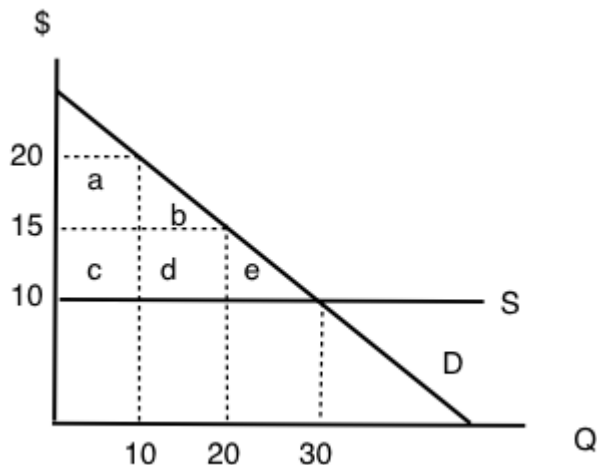
- I. There will be 11,000 workers willing to work who cannot find work, given the wage.
- II. The number of workers employed will decrease by 11,000.
- III. The number of workers that employers are prepared to hire will decrease by 5,000.

- a) I only.
- b) I and II only.
- c) I, II, and III.
- d) I and III only.

7. Suppose that the BC government wishes to reduce the quantity of beer sold in the Province by 20%. It has calculated that this goal can be achieved EITHER through a price floor set at \$2 per six-pack of beer OR a price ceiling of \$20 per six-pack of beer. Assume that the current price of beer is \$10 per six-pack. Which of the following statements about these policies is TRUE?

- a) The deadweight loss from the price floor will be greater than the deadweight loss from the price ceiling.
- b) The deadweight loss from the price ceiling will be greater than the deadweight loss from the price floor.
- c) There is insufficient information to determine which policy will have the large deadweight loss.
- d) None of the above statements is true.

8. Consider the supply and demand diagram below. Assume no externalities.



If a price floor of \$20 is introduced, then which area will represent the deadweight loss?

- a) e.
- b) e + d.
- c) e + b + d.
- d) The deadweight loss will be zero.

9. If a price ceiling (set below the initial equilibrium price) is introduced in a market, then:

- a) Producer surplus definitely decreases.
- b) Consumer surplus definitely increases.
- c) Neither a) nor b) are true.
- d) Both a) and b) are true.

10. In Canada, the prices of most medical services are regulated by the Provinces (that is, they are subject to price ceilings). This type of regulation is likely to result in which of the following (relative to an unregulated market)?

- a) An increase in the quantity of medical services provided.
- b) Consumption of medical services such that the marginal benefit is less than the marginal cost.
- c) Lower incomes for providers of medical services.
- d) Higher tax revenues for Provincial governments.

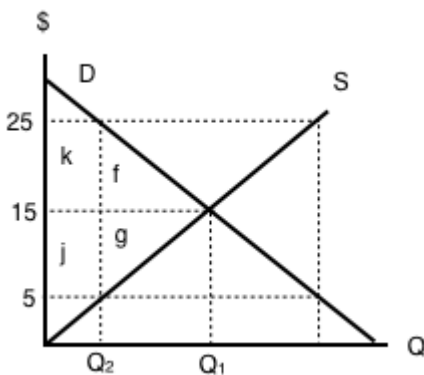
Exercises 4.6

1. Which of the following CANNOT reduce the equilibrium quantity sold in a market?

- a) A price ceiling.
- b) A price floor.
- c) A quota.
- d) All of the above can decrease equilibrium quantity sold.

Exercises 4.7

Refer to the supply and demand curves illustrated below for the following THREE questions. Consider the introduction of a \$20 per unit tax in this market.



1. Which areas represent the loss to consumer AND producer surplus as a result of this tax?

- a) $k + f$.
- b) $j + g$.

- c) $k + j$.
- d) $k + f + j + g$.

2. Which areas represent the gain in government revenue as a result of this tax?

- a) $k + f$.
- b) $j + g$.
- c) $k + j$.
- d) $k + f + j + g$.

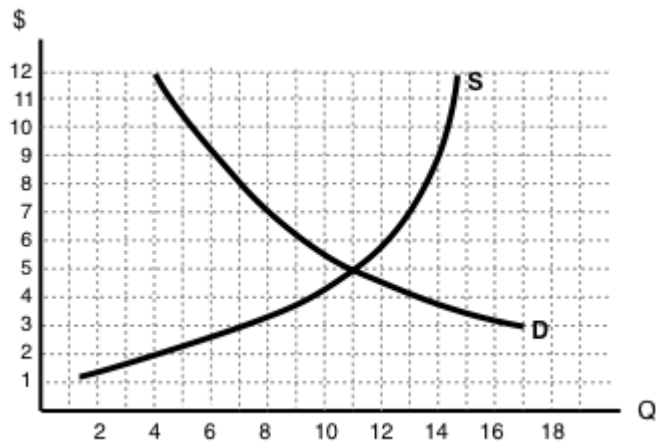
3. Which areas represent the deadweight loss associated with this tax?

- a) $f + g$.
- b) $k - g$.
- c) $j - f$.
- d) $k + f + j + g$.

4. Assume that the marginal cost of producing socks is constant for all sock producers, and is equal to \$5 per pair. If government introduces a constant per-unit tax on socks, then which of the following statements is FALSE, given the after-tax equilibrium in the sock market? (Assume a downward-sloping demand curve for socks.)

- a) Consumers are worse off as a result of the tax.
- b) Spending on socks may either increase or decrease as a result of the tax.
- c) Producers are worse off as a result of the tax.
- d) This tax will result in a deadweight loss.

5. Refer to the supply and demand diagram below.



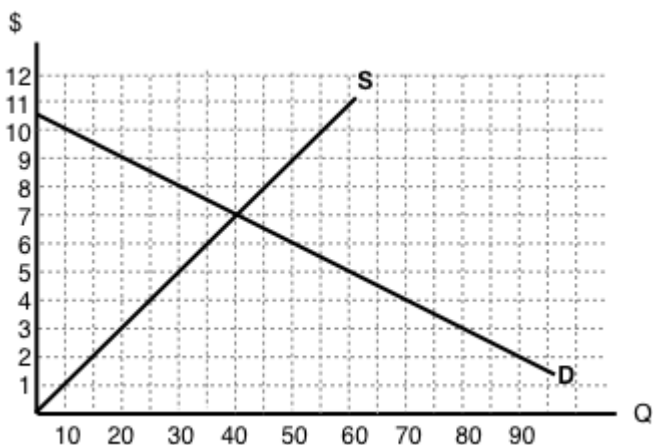
If an subsidy of \$3 per unit is introduced in this market, the price that consumers pay will equal ____ and the price that producers receive net of the subsidy will equal ____.

- a) \$2; \$5.
- b) \$3; \$6.
- c) \$4; \$7.
- d) \$5; \$8.

6. If a subsidy is introduced in a market, then which of the following statement is TRUE? Assume no externalities

- a) Consumer and producer surplus increase but social surplus decreases.
- b) Consumer and producer surplus decrease but social surplus increases.
- c) Consumer surplus, producer surplus, and social surplus all increase.
- d) Consumer surplus, producer surplus, and social surplus all decrease

Use the diagram below to answer the following TWO questions.



7. If a \$6 per unit tax is introduced in this market, then the price that consumers pay will equal ____ and the price that producers receive net of the tax will equal ____.

- a) \$10; \$4.
- b) \$9; \$3.
- c) \$8; \$2.
- d) \$7; \$1.

8. If a \$6 per unit tax is introduced in this market, then the new equilibrium quantity will be:

- a) 20 units.
- b) 40 units.
- c) 60 units.
- d) None of the above.

9. Which of the following statements about the deadweight loss of taxation is TRUE? (Assume no externalities.)

- a) If there is a deadweight loss, then the revenue raised by the tax is greater than the losses to consumer and producers.
- b) If there is no deadweight loss, then revenue raised by the government is exactly equal to the losses to consumers and producers.
- c) Both a) and b).
- d) Neither a) nor b).

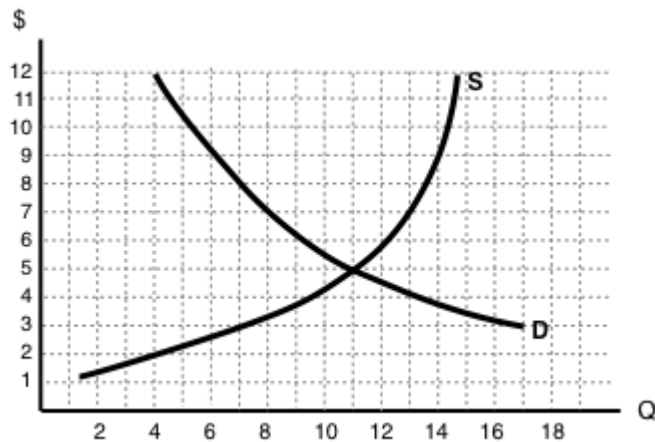
10. Which of the following correctly describes the equilibrium effects of a per-unit tax, in a market with NO externalities?

- a) Consumer and producer surplus increase but social surplus decreases.
- b) Consumer and producer surplus decrease but social surplus increases.
- c) Consumer surplus, producer surplus, and social surplus all increase.
- d) Consumer surplus, producer surplus, and social surplus all decrease.

11. Which of the following correctly describes the equilibrium effects of a per unit subsidy?

- a) Consumer price rises, producer price falls, and quantity increases.
- b) Consumer price falls, producer price falls, and quantity increases.
- c) Consumer price rises, producer price rises, and quantity increases.
- d) Consumer price falls, producer price rises, and quantity increases.

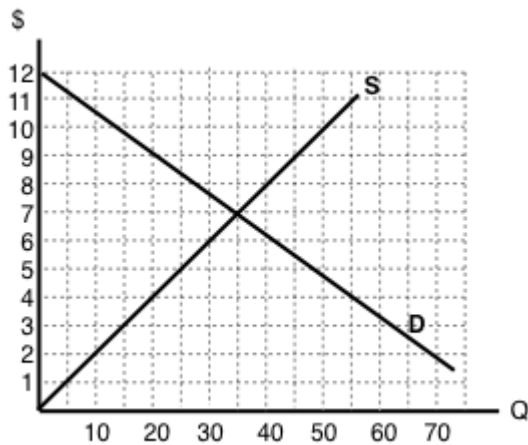
12. Refer to the supply and demand diagram below.



If an output (excise) tax of \$5 per unit is introduced in this market, the price that consumers pay will equal ____ and the price that producers receive net of the tax will equal ____.

- a) \$5; \$10.
- b) \$6; \$11.
- c) \$7; \$12.
- d) \$8; \$3.

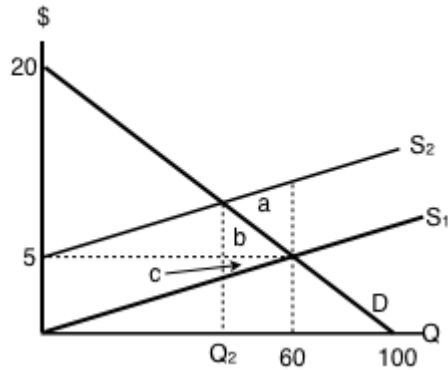
13. Consider the supply and demand diagram below.



If a \$2 per unit subsidy is introduced, what will be the equilibrium quantity?

- a) 40 units.
- b) 45 units.
- c) 50 units.
- d) 55 units.

Consider the supply and demand diagram below. Assume that: (i) there are no externalities; and (ii) in the absence of government regulation the market supply curve is the one labeled S_1 .



14. If a \$5 per unit tax is introduced in this market, which area represents the deadweight loss?

- a) a.
- b) a + b.
- c) b + c.
- d) a + b + c.

Exercises 4.8

1. Suppose a tax is levied in a market in which demand is downward sloping and supply is perfectly elastic. Which of the following statements is/are TRUE? (Assume no externalities.)

- I. Producer surplus decreases.
- II. The deadweight loss is zero.
- III. Consumers bear all the burden of the tax.

- a) II only.
- b) I and II only.
- c) I, II, and III.
- d) III only.

2. Which of the following statements about tax incidence and relative elasticities is TRUE?

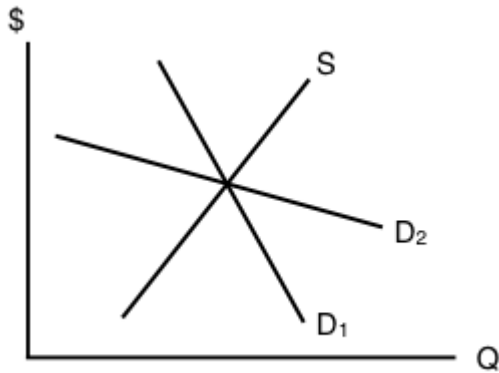
If demand is relatively inelastic and supply is relatively elastic, then consumers bear more of the burden of a tax.

If supply is perfectly inelastic, then producers bear none of the burden of a tax, no matter what the value of own-price elasticity of demand.

If the relative elasticities of demand and supply are the same, the tax burden is shared equally across consumers and producers.

- a) II only.
- b) I and III only.
- c) I, II, and III.
- d) III only.

3. The diagram below illustrates the supply curve for a good, and two possible demand curves for that good.



If a price floor (set above the initial equilibrium price) is introduced in this market then:

- a) The deadweight loss will be smaller, if demand is D1 than if demand is D2.
- b) The decrease in quantity will be smaller, if demand is D1 than if demand is D2.
- c) Neither a) nor b) are true.
- d) Both a) and b) are true.

4. In which of the following cases will the deadweight loss from taxation be zero?

- a) If demand is perfectly elastic.
- b) If demand is unit elastic.
- c) If demand is perfectly inelastic.
- d) Either a) or c) will result in zero deadweight loss from taxation.

5. Which of the following statements about the economic incidence of taxation is TRUE?

- I. If demand is elastic, producers will bear a greater burden of the tax than consumers.
- II. If supply is perfectly inelastic, producers will bear all the burden of the tax.
- III. If the supply curve is perfectly elastic, consumers will bear none of the burden of the tax.

- a) II only.
- b) I and II only.
- c) II and III only.
- d) I, II and III.

6. Which of the following correctly describes the equilibrium effects of a per-unit tax, in a market with NO externalities?

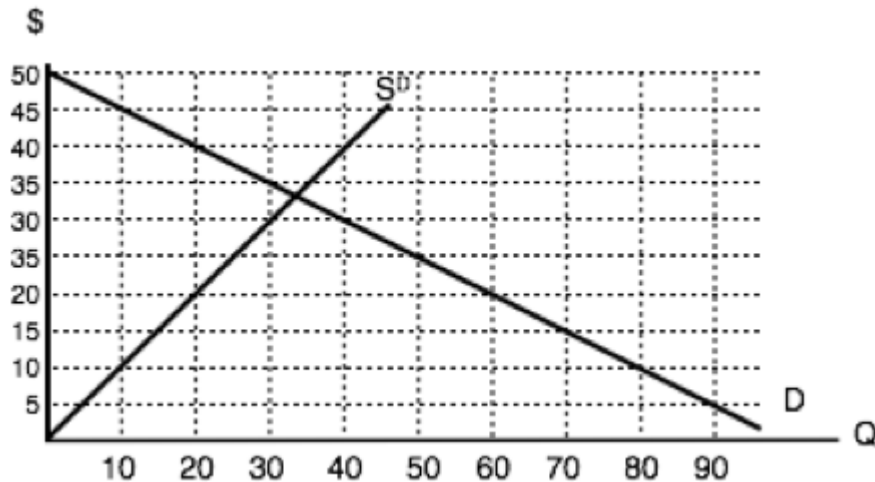
- a) Consumer and producer surplus increase but social surplus decreases.
- b) Consumer and producer surplus decrease but social surplus increases.
- c) Consumer surplus, producer surplus, and social surplus all increase.
- d) Consumer surplus, producer surplus, and social surplus all decrease

7. Suppose that the price of a good increases. The increase in produce surplus will be:

- a) Larger if demand is relatively elastic than if demand is relatively inelastic.
- b) Smaller if demand is relatively elastic than if demand is relatively inelastic.
- c) Smaller if supply is relatively elastic than if supply is relatively inelastic.
- d) Larger if supply is relatively elastic than if supply is relatively inelastic.

Exercises 4.9

Use the diagram below, illustrates the domestic supply curve (SD) and demand curve for a good, to answer the following THREE questions. Assume that the world price is equal to \$20 per unit, and initially there are no trade restrictions in place.



1. If a tariff of \$10 per unit is introduced in the market, then, at the new equilibrium:

- a) Consumers will pay a price of \$20, quantity sold will be 60 units, of which 40 are imported.
- b) Consumers will pay a price of \$30, quantity sold will be 40 units, of which 30 are produced domestically.
- c) Consumers will pay a price of \$20, quantity sold will be 60 units, of which none are produced domestically.
- d) Consumers will pay a price of \$30, quantity sold will be 40 units, of which none are imported.

2. If a tariff of \$10 per unit is introduced in the market, then the government will raise ____ in tariff revenue.

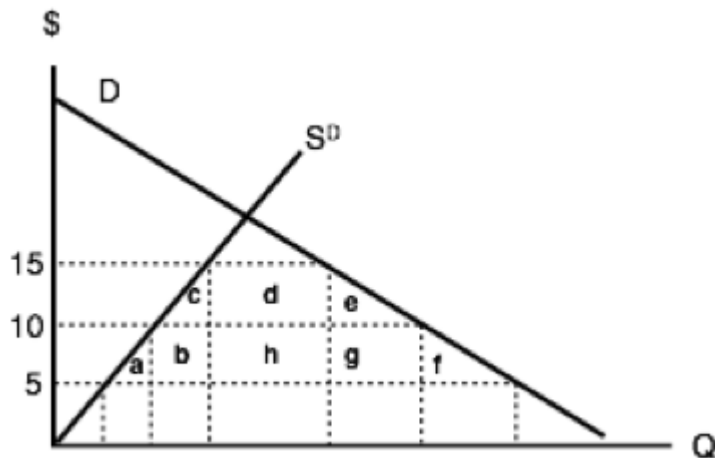
- a) \$400.
- b) \$300.

- c) \$200.
- d) \$100.

3. If a tariff of \$10 per unit is introduced in the market, then the deadweight loss will equal:

- a) \$50.
- b) \$100.
- c) \$150.
- d) None of the above.

The following two questions refer to the diagram below, which illustrates the domestic supply curve (S^D) and demand curve for a good. Assume that the world price is equal to \$5 per unit, and that initially there are no trade restrictions.



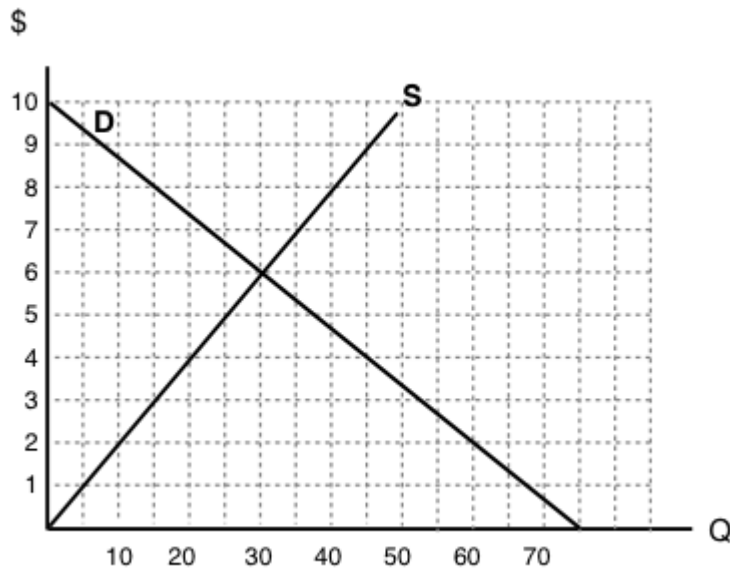
4. If a tariff of \$10 per unit of imports is introduced, which area represents the deadweight loss?

- a) $a + f$.
- b) $c + e$.
- c) $a + b + c + e + f + g$.
- d) $a + b + d + h + g + f$.

5. If a tariff of \$10 per unit of imports is introduced, which area represents the tariff revenue raised?

- a) d .
- b) $d + h$.
- c) h .
- d) $b + h + g$.

Use the diagram below – which illustrates the domestic supply and demand curves for a good – to answer the following TWO questions. Assume that the world price is equal to \$2.



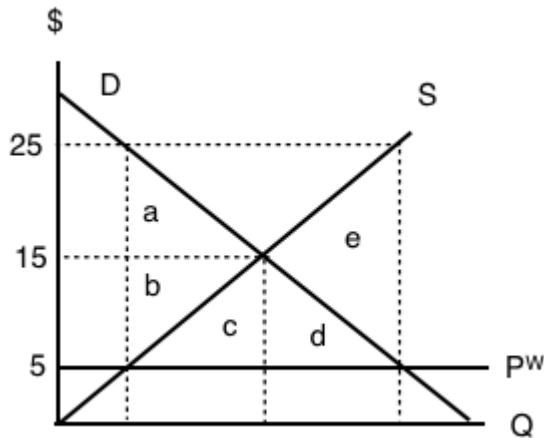
6. If there are no trade restrictions in place, what will be the equilibrium quantity of IMPORTS?

- a) 40.
- b) 50.
- c) 60.
- d) None of the above.

7. If a tariff of \$2 is introduced, then:

- a) Imports will decrease and social surplus will increase.
- b) Imports will decrease and consumer surplus will increase
- c) Imports will decrease and domestic producer surplus will increase.
- d) All of the above will occur.

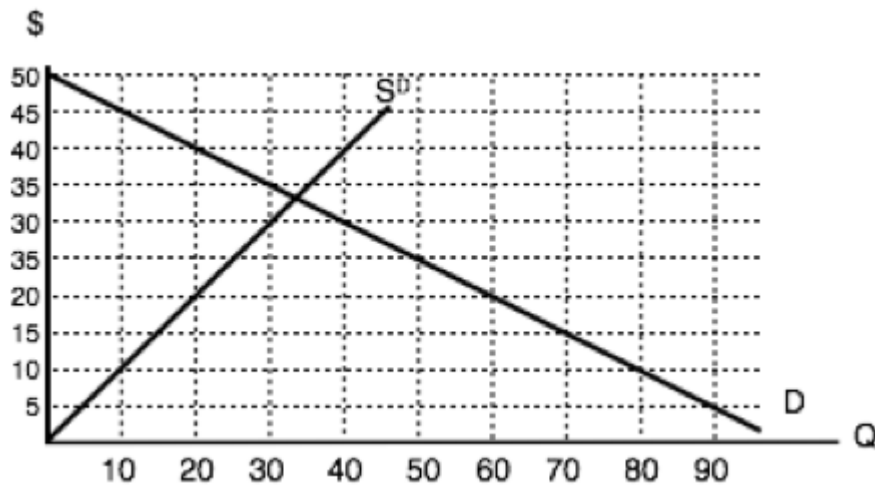
8. The diagram below illustrates the domestic supply curve (SD) and demand curve for a good. Assume that the world price is equal to \$5 per unit.



If imports of this good are banned altogether, which area represents the deadweight loss?

- a) $a + b$.
- b) e .
- c) $c + d$.
- d) $a + b + c + d + e$.

9. The diagram below illustrates the domestic supply curve (SD) and demand curve for a good. Assume that the world price is equal to \$10 per unit, and initially there are no trade restrictions.



If a tariff of \$10 per unit is introduced, by how much do imports decrease?

- a) 10 units.
- b) 20 units.
- c) 30 units.
- d) 40 units.

Topic 4 Solutions

Solutions to Exercises 4.1

1. **B**
2. **D**
3. **C**
4. **D**
5. **C**
6. **C**
7. **D**
8. **C**

Solutions to Exercises 4.2

1. **B**
2. **B**
3. **B**
4. **A**
5. **D**
6. **D**
7. **C**

Solutions to Exercises 4.3

1. **C**
2. **B**
3. **C**
4. **A**

Solutions to Exercises 4.5

1. **B**
2. **B**
3. **A**
4. **C**
5. **B**
6. **D**
7. **D**
8. **C**
9. **A**
10. **C**

Solutions to Exercises 4.6

1. **D**

Solutions to Exercises 4.7

1. **D**
2. **C**
3. **A**
4. **C**
5. **C**
6. **A**
7. **B**
8. **A**
9. **B**
10. **D**
11. **D**
12. **D**
13. **A**

14. **C**

Solutions to Exercises 4.8

1. **D**
2. **B**
3. **D**
4. **C**
5. **A**
6. **D**
7. **D**

Solutions to Exercises 4.9

1. **B**
2. **D**
3. **C**
4. **C**
5. **B**
6. **B**
7. **C**
8. **C**
9. **C**

Topic 4 References

Britten, Liam. The Globe and Mail. "Vancouver Wants Province to Tax Airbnb Rentals Like Hotels." June 27, 2016. <http://www.cbc.ca/news/canada/british-columbia/airbnb-tax-vancouver-1.3655343>

The Economist. "Undoing the Mess." October 10, 2011. <http://www.economist.com/blogs/schumpeter/2011/10/netflix>

Limitone, Julia. FoxBusiness. "Fmr. McDonald's USA CEO: \$35K Robots Cheaper Than Hiring at \$15 Per Hour." May 24, 2016. <http://www.foxbusiness.com/features/2016/05/24/fmr-mcdonalds-usa-ceo-35k-robots-cheaper-than-hiring-at-15-per-hour.html>

Investopedia. "What factors influence a change in demand elasticity?" April 3, 2015. <http://www.investopedia.com/ask/answers/040315/what-factors-influence-change-demand-elasticity.asp?ad=dirN&qo=investopediaSiteSearch&qsrc=0&o=40186>

Investopedia. "What factors influence a change in supply elasticity?" April 3, 2015. <http://www.investopedia.com/ask/answers/040315/what-factors-influence-change-supply-elasticity.asp>

Lobo, Rita. World Finance. "In Defence of... Minimum Wage." February 22, 2013. <http://www.worldfinance.com/contributors/in-defence-of-minimum-wage>

Malmo, Christopher. Vice. "Blame Canada's Dairy Cartel for Our Expensive Milk and Cheese." September 4, 2014. http://www.vice.com/en_ca/article/blame-canadas-dairy-cartel-for-our-expensive-milk-and-cheese-867

McKenna, Barrie. The Globe and Mail. "Canada's Dairy Industry is a Rich, Closed Club." June 25, 2015. <http://www.theglobeandmail.com/news/politics/canadas-dairy-industry-is-a-rich-closed-club/article25124114/>

Merlo, Catherine. AGWeb. "Why Dairy Demand Has Become More Elastic." March 5, 2015. <https://www.agweb.com/article/why-dairy-demand-has-become-more-elastic-naa-catherine-merlo/>

Montgomery, Marc. Radio Canada International. "Canada-US Lumber Deal, Back Again, Still Bad for Canada." September 19, 2016. <http://www.rcinet.ca/en/2016/09/19/canada-us-lumber-deal-back-again-still-bad-for-canada/>

Rensi, Ed. Forbes. "Thanks To 'Fight For \$15' Minimum Wage, McDonald's Unveils Job-Replacing Self-Service Kiosks Nationwide." November 29, 2016. <https://www.forbes.com/sites/realspin/2016/11/29/thanks-to-fight-for-15-minimum-wage-mcdonalds-unveils-job-replacing-self-service-kiosks-nationwide/#104cea084fbc>

Topic 7: Producer Theory

Introduction to Cost and Industry Structure



(Credit: Jim Surkamp/ Flickr/ CC BY-NC 2.0)

The Assembly Line – A Cost Revolution

In 1908, the automobile industry changed forever. The first automobiles date back to the 15th century when Leonardo da Vinci was creating designs and models for transport vehicles. Karl Benz, a German inventor, developed the first gas-powered automobile in 1885 and the first American car

manufacturer opened in 1893. However, until 1908, the automobile was a luxury enjoyed only by the rich. It was not a technological innovation that changed the industry, but rather a revolution on costs.

Henry Ford, an American car manufacturer, developed a method that steadily reduced the cost of the automobile: the assembly line. Rather than having workers involved with each component of the manufacturing of a vehicle, workers specialized in certain areas. This example illustrates the **marginal product of labour**, a concept we will explore in this section. We will see that the MPL will rise as you add more workers, as each new worker helps make the assembly line more efficient than before.

The Model T, known popularly as the “Tin Lizzie” has become an American folkloric symbol, as it was a turning point in allowing the majority of Americans to afford the automobile. By 1927, over 15 million Model-T’s had been produced.

This innovation in production shows that the economics of the firm has an important bearing on the overall market and allows us to understand how costs affect supply.



[Read more about the Model-T](#)

Topic Objectives

Topic 7: Producer Theory

In this Topic, you will learn about:

- Fixed versus variable factors
- The structure of costs in the short run
- The structure of costs in the long run
- Marginal and average productivity of labour
- Marginal costs, average variable costs, average total costs, and average fixed costs
- Producer surplus versus profits
- Short and long run competitive equilibria

In Topic 6, we explored the underlying behaviours of the demand curve, and how consumers make consumption decisions based on preferences and budget constraints. Now, we will examine the underlying behaviours of individual firms in our supply curve.

First, let's review some of the assumptions we have made about supply curves in perfectly competitive markets:

- Producers will increase production if MB (or price) is greater than the MC
- Producers will reduce production if MB (price) is less than MC
- Producers maximize profits where $MB = MC$
- The supply curve represents the aggregate MC of all firms

So far, we have shown the supply, or marginal cost curve, as linear and upward sloping. In this topic, we will give greater consideration to the workings of a firm, and how firms respond to demand/supply shocks.

7.1 Building Producer Theory

Learning Objectives

By the end of this section, you will be able to:

- Understand the relationship between marginal product of labour and marginal cost
- Derive average cost from marginal costs
- Represent a firm's short run costs on a producer theory diagram

Different firms face different kinds of costs. A list of the costs involved in producing cars will look very different from the costs involved in producing fast-food meals. However, the cost structure of all firms can be broken down into some common types.

To start, we want to look at the costs of a single firm in the short run. These costs come from the different inputs required to produce a good, whether that is machines, labour, ingredients, rent, etc. By **short run**, we mean that there is at least one input that cannot be changed. This input (or inputs) is classified as a **fixed cost** since in the short term there is nothing we can do to avoid this cost except quit producing altogether.

When a firm looks at its **total costs** of production in the short run, a useful starting point is to divide total costs into two categories: fixed costs (ones that cannot change) and variable costs (ones that can change).

To guide our understanding of fixed and variable costs, consider Henry Ford once more. When Ford was opening his first factory, he had to consider different categories of costs.

Fixed Costs

Ford's **fixed costs** are his expenditures that do not change regardless of his level of production. Whether he produced a lot or a little, his fixed costs are the same.

The first step for Ford to open his factory is finding the factory space. Ford must find someone who is willing to sell or rent him space. His first offer comes from Tom, who will only rent to Ford if Ford signs a 1-year lease for \$20,000. Ford, with little negotiating power, agrees and signs the lease.

Once Ford signs the lease, the rent for the year costs him \$20,000 regardless of how much he produces. This lease has now become a sunk cost since there is nothing Ford can do to get his money back. Fixed costs can take many other forms: for example, the cost of machinery or equipment to produce the product, research and development costs, even an expense like advertising to popularize a brand name. The level of fixed costs varies according to the specific line of business. For instance, manufacturing computer chips requires an expensive factory, but a local moving and hauling business can get by with

almost no fixed costs at all if it rents trucks by the day when needed. Since Ford's cost is fixed for a whole year, this is the length of his 'short-run.' During that period, since the lease expense is sunk, it should not affect his decision making.

Variable Costs

Ford's **variable costs** are incurred in the act of producing—the more he produces, the greater the variable cost.

After signing the lease for the factory and purchasing machines, Ford now has to buy the raw materials and find workers to produce his cars. The more Ford wants to produce, the more workers and raw materials he will have to buy. For this reason, his variable costs are increasing as his production increases.

Marginal Product of Labour

For now, let's diverge from the Ford example and consider an industry that is more labour intensive: barbershops. In the service industry, one of the most important variable costs is labour. How do we measure the cost of labour? It is not as simple as the hourly wage.

Consider a barbershop called "The Clip Joint." For The Clip Joint, the variable costs include hiring barbers. Assume this cost is \$80 per barber each day. The quantity of haircuts the barbershop can produce will increase as it hires additional barbers. Consider Table 1, which depicts the number of haircuts each new barber can produce. Notice that the first barber can only do 15 haircuts a day, whereas the next can cut 22.

Number of Barbers	Number of Haircuts/New Barber
1	15
2	22
3	25
4	23
5	19
6	13

This represents the **Marginal Product of Labour**, or the change in output that results from employing an extra unit of labour. The table can be depicted on a graph, with MPL on the y-axis and the # of Barbers on the x-axis. On the graph, we notice that at a certain level of barbers, our marginal gains from an extra barber begin to fall.

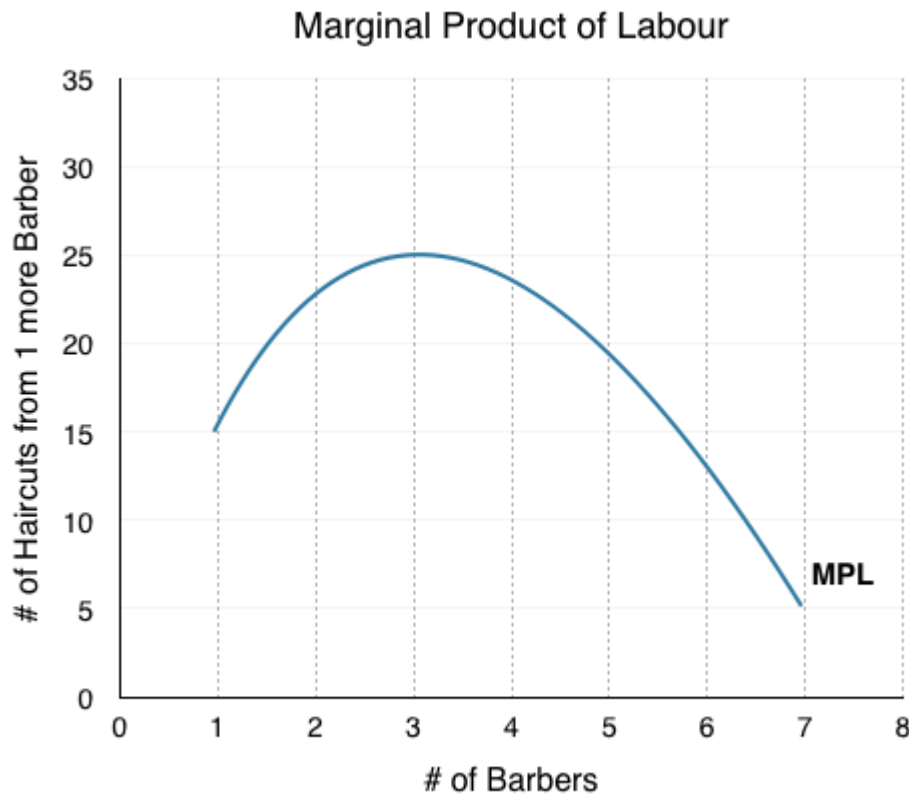


Figure 7.1a

To understand the reason behind this pattern, consider that a one-man barber shop is a very busy operation. The single barber needs to do everything: say hello to people, answer the phone, cut hair, clean up, and run the cash register. A second barber reduces the level of disruption from jumping back and forth between these tasks, and allows a greater division of labor and specialization. The result can be greater increasing marginal returns. However, as other barbers are added, the advantage of each additional barber is less, since the specialization of labor can only go so far. The addition of a sixth or seventh or eighth barber just to greet people at the door will have less impact than the second one did. This is the pattern of diminishing marginal returns. As a result, the total costs of production will begin to rise more rapidly as output increases. At some point, you may even see negative returns as the additional barbers begin bumping elbows and getting in each other's way. In this case, the addition of still more barbers would cause the output to decrease.

This pattern of **diminishing marginal returns** is common in production. As another example, consider the problem of irrigating a crop on a farmer's field. The plot of land is the fixed factor of production, while the water that can be added to the land is the key variable cost. As the farmer adds water to the land, output increases. But adding more and more water brings smaller and smaller increases in output until at some point the water floods the field and reduces output. Diminishing marginal returns occur because we are ultimately constrained by some fixed factor.

Marginal Costs

How do we represent the MPL as a variable cost? Remember that the cost of hiring a barber is equal to \$80/day. We want to find the cost per each additional unit of output. This is quite easy. If the first barber costs \$80 to hire and can do 15 haircuts per day, then the marginal cost per haircut is equal to \$5.33/haircut (Wage/MPL). This can be calculated for every level of output.

Number of Barbers	Number of Haircuts/New Barber (MPL)	Cost/Haircut (\$80/MPL)
1	15	\$5.33
2	22	\$3.64
3	25	\$3.20
4	23	\$3.48
5	19	\$4.21
6	13	\$6.15

From this data, we can graph the marginal cost. Note that the x-axis has changed from ‘Barbers’ to ‘Haircuts.’ This is because whereas productivity is best understood in reference to the number of workers, marginal cost is defined for each level of output. You can see from Figure 7.1b that the marginal cost of the first haircut is \$6. In our table, the cost per haircut of the first barber was only \$5.33. Just as we can tell a story about the productivity increasing as we add more barbers, we can tell a similar story about the productivity increasing as a barber cuts more sets of hair. Our first barber may cut just one, or they may cut 15 heads. The \$5.33/Haircut is the average of those first 15. The resulting cost curve is therefore a loose translation of the above table.

Notice that when marginal cost falls, it is because the inputs of production (in this case labour) are becoming more productive (MPL is increasing). When marginal cost is rising, it is because inputs are becoming less productive.

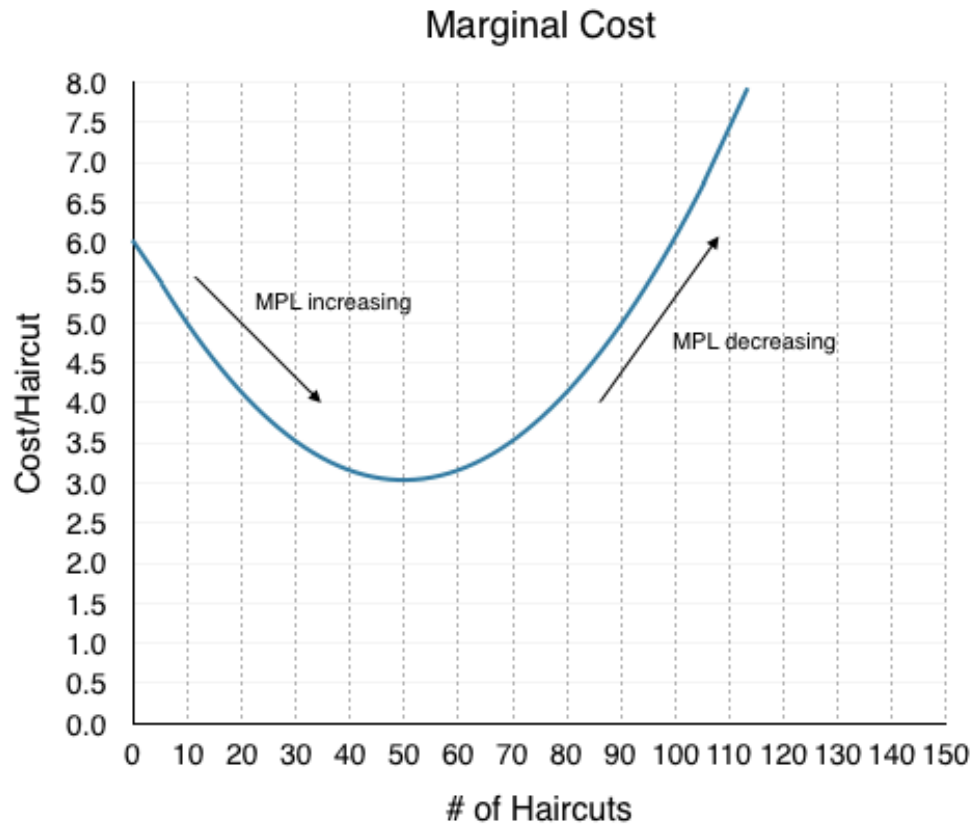


Figure 7.1b

Average Variable Costs

We now have the first piece of producer theory. With information on marginal costs, we can use marginal analysis to determine whether increasing our inputs will be profitable. This is certainly important. In business, however, we often want to be able to answer “how much does a single haircut cost to produce”. Right now, our answer is “it depends” since our costs vary based on the number of barbers. Sometimes, we want to ignore this variation and calculate the **average variable cost**. Average variable cost is calculated by taking the total costs from every barber up to that point and dividing it by the total number of haircuts those barbers cut collectively.

Our average variable cost can be represented on the same graph as our marginal cost curve, helping us build our producer theory diagram even further.

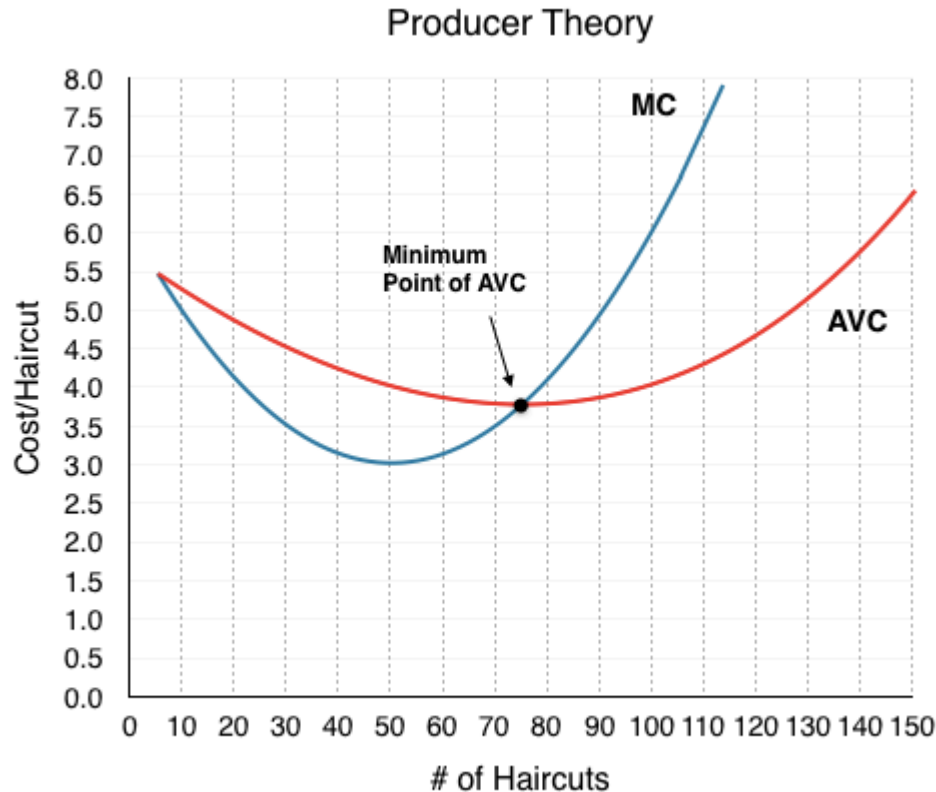


Figure 7.1c

Notice that the marginal cost line intersects the average cost line exactly at the bottom of the average cost curve—this occurs at a cost of \$4.0. The reason why the intersection occurs at this point is built into the economic meaning of marginal and average costs. If the marginal cost of production is below the average cost of producing previous units, as it is for the points to the left of where MC crosses AVC, then producing one additional unit will reduce average costs overall—and the AVC curve will be downward-sloping in this zone. Conversely, if the marginal cost of production for producing an additional unit is above the average cost of producing units, as it is for points to the right of where MC crosses AVC, then producing a marginal unit will increase average costs overall—and the AVC curve must be upward-sloping in this zone. The point of transition, between where MC is pulling AVC down and where it is pulling it up, must occur at the minimum point of the AVC curve.

When MC begins to increase, notice that **AVC does not immediately increase**. As long as marginal cost is below average cost, it causes AVC to decrease. When MC intercepts AVC and begins to rise, it causes AVC to increase. As we will see, AVC_{MIN} is very important in the short run. See the application “Average Can Fall While Marginal Increases: Grades” to solidify this interaction.

Average Can Fall While Marginal Increases: Grades



(Credit: bitjungle/ Flickr/ CC BY-SA 2.0)

This concept can seem confusing at first, but it is in fact quite intuitive. Consider how you calculate your grades. If you are normally an A student and have an 80% average in Microeconomics, you will likely be disappointed if you received a 50% on a Midterm. Say, on the next midterm, you receive 65% – this is better than the 50% from last time but is still bringing you down from the A average you had hoped for. This is similar to the case of MC and AVC. MC is like the midterm grades – even when it is increasing, if it is still below your average, it will continue to bring it down, and when it is greater than average, it will bring it up.

Average Product of Labour

Backtracking slightly, the same analysis can be done for the **Average Product of Labour**, which can also be used to derive the AVC curve. Consider the graph below which represents the interaction between MPL and APL.

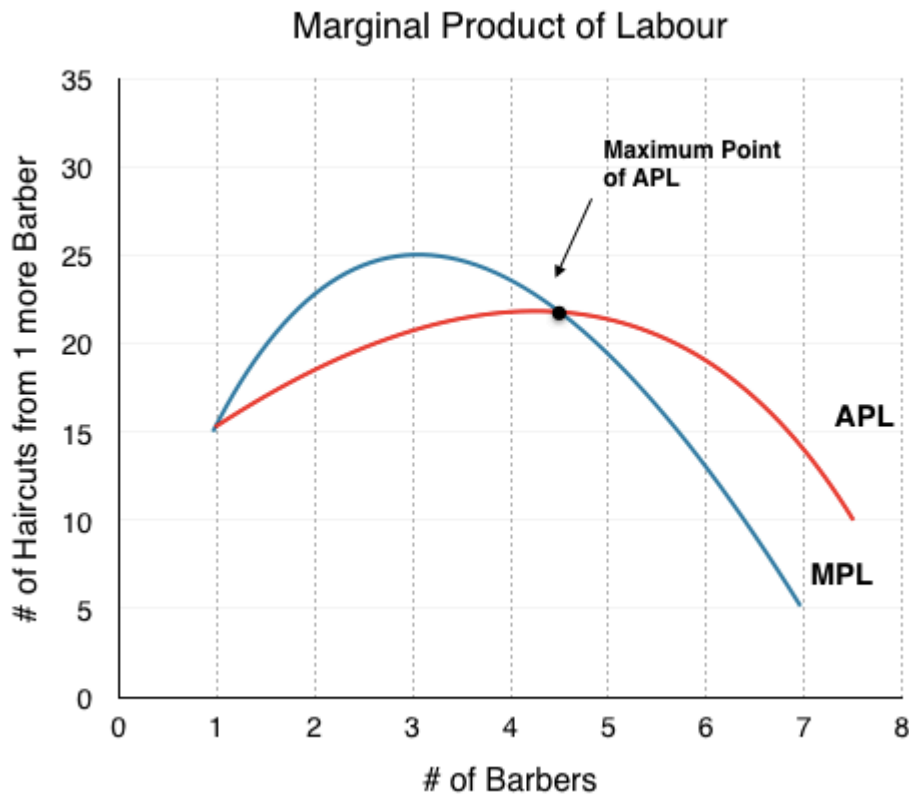


Figure 7.1d

Notice that the maximum point on the APL happens at the same point (4.5 barbers) as the minimum point on AVC in Figure 7.1c. This is because when on average barbers are most productive, costs/haircut are lowest. Comparing the APL/MPL graph to the AVC/MC graph we see that the curves are inversely related.

Average Total Costs

We now have MC and AVC represented in our producer theory model. How do we represent fixed costs? Let's assume the Clip Joint has fixed costs equal to \$150 per day. **average total cost** is an average of our total variable cost and total fixed costs. As such, it can be found by $(\text{total VC} + \text{FC})/Q$. Expanding this equation, we see it is equivalent to $\text{VC}/Q + \text{FC}/Q$ which is $\text{AVC} + \text{AFC}$. Since we already have our AVC, all we have to do is add the FC/Q at each level of production.

Notice that we have changed the units on the x-axis of our producer theory graph from # of Barbers to # of Haircuts. Although in this example MC would be a constant \$5.33 from 0 haircuts to 15 haircuts and constant \$3.64 from 15 haircuts to 37 haircuts, in a larger market, this curve would be smoothed out. The following has been smoothed out to represent a different MC for each haircut.

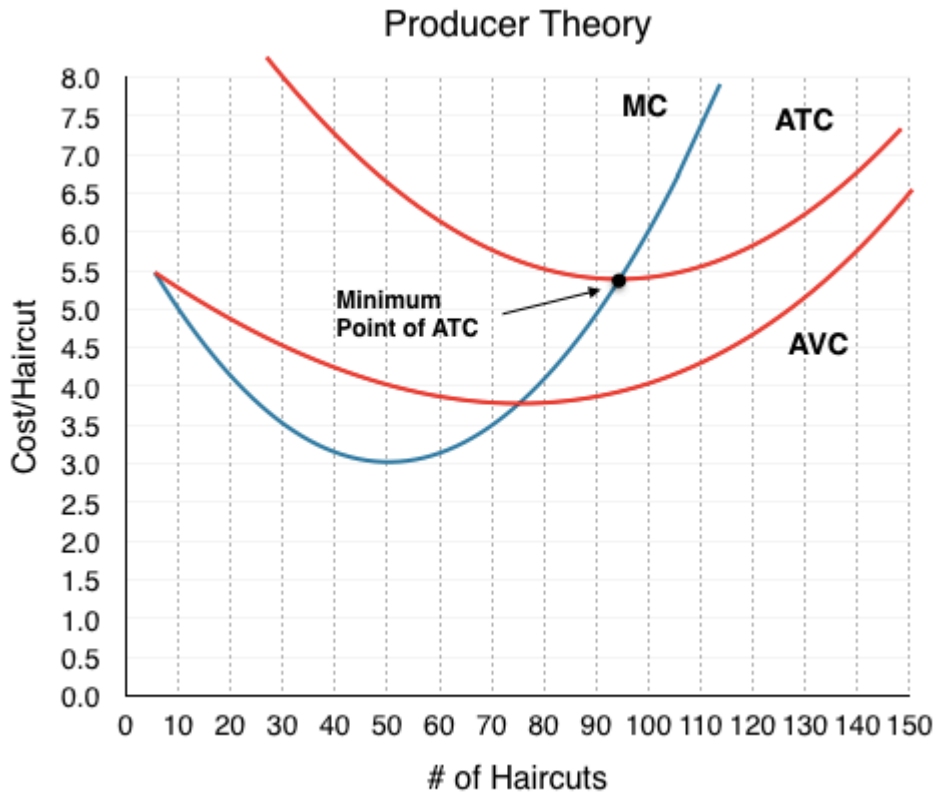


Figure 7.1e

So what is our ATC when we are producing 50 haircuts? Our AVC is \$4.00. Our AFC at this point will be quite high at $\$150/50 = \3 . This means our ATC is $\$4.00 + \$3.00 = \$7.00$. Consider how AFC changes as we increase Q:

$$Q = 10 \rightarrow AFC = \$150/10 = \$15$$

$$Q = 20 \rightarrow AFC = \$150/20 = \$7.5$$

$$Q = 30 \rightarrow AFC = \$150/30 = \$5$$

$$Q = 150 \rightarrow AFC = \$150/150 = \$1$$

Since the only effect of an increase of inputs is spreading FC out amongst more units, AFC is always falling as Q increases.

Since $AVC = ATC - (FC/Q)$, at low levels of Q, FC/Q is high. This means AVC is $<$ ATC by a significant amount.

At high levels of Q, FC/Q is low. This means AVC is $<$ ATC by a small amount.

As Q increases, FC/Q approaches 0 and AVC and AFC converge, as seen on Figure 7.1e

Why are total cost and average cost not on the same graph?

Total cost, fixed cost, and variable cost each reflect different aspects of the cost of production over the entire quantity of output being produced. These costs are measured in dollars. In contrast, marginal cost, average cost, and average variable cost are costs per unit. In the previous example, they are measured as cost per haircut. Thus, it would not make sense to put all of these numbers on the same graph, since they are measured in different units (\$ versus \$ per unit of output).

It would be as if the vertical axis measured two different things. In addition, as a practical matter, if they were on the same graph, the lines for marginal cost, average cost, and average variable cost would appear almost flat against the horizontal axis, compared to the values for total cost, fixed cost, and variable cost. Using the figures from the previous example, the total cost of producing 40 haircuts is \$296, but the average cost is $\$296/40$, or \$7.4. If you graphed both total and average cost on the same axes, the average cost would hardly show.

A Variety of Cost Patterns

The pattern of costs varies among industries and even among firms in the same industry. Some businesses have high fixed costs, but low marginal costs. Consider, for example, an Internet company that provides medical advice to customers. Such a company might be paid by consumers directly, or perhaps hospitals or healthcare practices might subscribe on behalf of their patients. Setting up the website, collecting the information, writing the content, and buying or leasing the computer space to handle the web traffic are all fixed costs that must be undertaken before the site can work. However, when the website is up and running, it can provide a high quantity of service with relatively low variable costs, like the cost of monitoring the system and updating the information. In this case, the total cost curve might start at a high level, because of the high fixed costs, but then might appear close to flat, up to a large quantity of output, reflecting the low variable costs of operation.

For other firms, fixed costs may be relatively low. For example, consider small businesses that rake leaves in the fall or shovel snow off sidewalks and driveways in the winter. For fixed costs, such firms may need little more than a car to transport workers to customer's homes and some rakes and shovels. Still other firms may find that diminishing marginal returns set in quite sharply. If a manufacturing plant tried to run 24 hours per day, seven days a week, little time remains for routine maintenance of the equipment, and marginal costs can increase dramatically as the firm struggles to repair and replace overworked equipment.

Every firm can gain insight into its task of earning profits by dividing its total costs into fixed and variable costs, and then using these calculations as a basis for average total cost, average variable cost, and marginal cost. However, making a final decision about the profit-maximizing quantity to produce and the price to charge will require combining these perspectives on cost with an analysis of sales and revenue, which in turn requires looking at the market structure in which the firm finds itself. Before we turn to the analysis of market structure in other topics, we will analyze how a perfectly competitive firm makes decisions in the short- and long-run

Key Concepts and Summary

In the short-run, a firm's total costs can be divided into fixed costs, which a firm must incur before producing any output, and variable costs, which the firm incurs in the act of producing. Fixed costs are sunk costs; that is, because they are in the past and cannot be altered, they should play no role in economic decisions about future production or pricing until the short run's time horizon is up. Variable costs typically show diminishing marginal returns, so that the marginal cost of producing higher levels of output rises.

Marginal cost is calculated by taking the change in total cost (or the change in variable cost, which will be the same thing) and dividing it by the change in output for each level. Marginal costs are typically rising. A firm can compare marginal cost to the additional revenue it gains from selling another unit to find out whether its marginal unit is adding to its profit.

Average total cost is calculated by taking total cost and dividing by total output at each different level of output. Average costs are typically U-shaped on a graph.

Average variable cost is calculated by taking variable cost and dividing it by the total output at each level of output. Average variable costs are also typically U-shaped.

Glossary

Average Product of Labour

the average amount of output each worker can produce; Total product/Total output

Average Total Cost

total cost divided by the quantity of output

Average Variable Costs

variable cost divided by the quantity of output

Diminishing Marginal Returns

the decrease in the marginal output of a production as input is incrementally increased

Fixed Cost

expenditure that must be made before production starts and that does not change regardless of the level of production

Marginal Product of Labour

the amount of output an additional worker can produce

Short Run

a period of time in which at least one cost factor is fixed

Total Cost

the sum of fixed and variable costs of production

Variable Costs

cost of production that increases with the quantity produced

Exercises 7.1

The following FOUR questions refer to the table below, which shows the relationship between labour and output for a firm.

Quantity of labour	Total output
0	0
1	12
2	25
3	36
4	40
5	43

1. The marginal product of the fourth unit of labour hired is:

- a) 10.
- b) 3.
- c) 4.
- d) 0.

2. If each unit of labour must be paid a wage of \$10, then what do (total) variable costs equal, at an output level of 25 units?

- a) \$250.
- b) \$50.
- c) \$20.
- d) \$2.

3. If three workers are employed, then the average product of labour is:

- a) 12.
- b) 11.
- c) 36.
- d) 40.

4. If each unit of labour must be paid a wage of \$12, then what is the marginal cost of the 43rd unit of output?

- a) \$12.
- b) \$36.
- c) \$3.
- d) \$4.

5. Suppose that the marginal produce of labour is always decreasing in number of workers employed. Which of the following statements about the marginal cost of producing output is true?

Which of the following statements is true?

- a) Marginal cost is constant in output.
- b) Marginal cost is decreasing in output.

- c) Marginal cost is increasing in output.
- d) Marginal cost is decreasing in output at low level of output, and increasing in output at high levels of output.

6. If the marginal cost of producing output is constant and equal to \$5 per unit, and fixed costs are equal to \$600, then average total cost given an output level of 100 is:

- a) \$5.
- b) \$6.
- c) \$11.
- d) \$20.

7.2 Understanding Producer Theory

Learning Objectives

By the end of this section, you will be able to:

- Calculate fixed costs, producer theory, and profits.
- Identify when firms will exit in the short-run.
- Be able to identify break-even and shut-down points.

Now that we have built our model for Producer Theory, we want to use it as a tool to understand how individual firms behave when faced with different prices. First, let's see the different variables we can calculate from our graph.

Fixed Cost

In Topic 7.1, we showed that $ATC = AVC + AFC$. This means that $AFC = ATC - AVC$. Since $FC = (AFC \times Q)$, on our graph, we can find what total fixed costs are by simply multiplying the difference in AVC and ATC by the quantity at that level $[(ATC - AVC) \times (Q)]$.

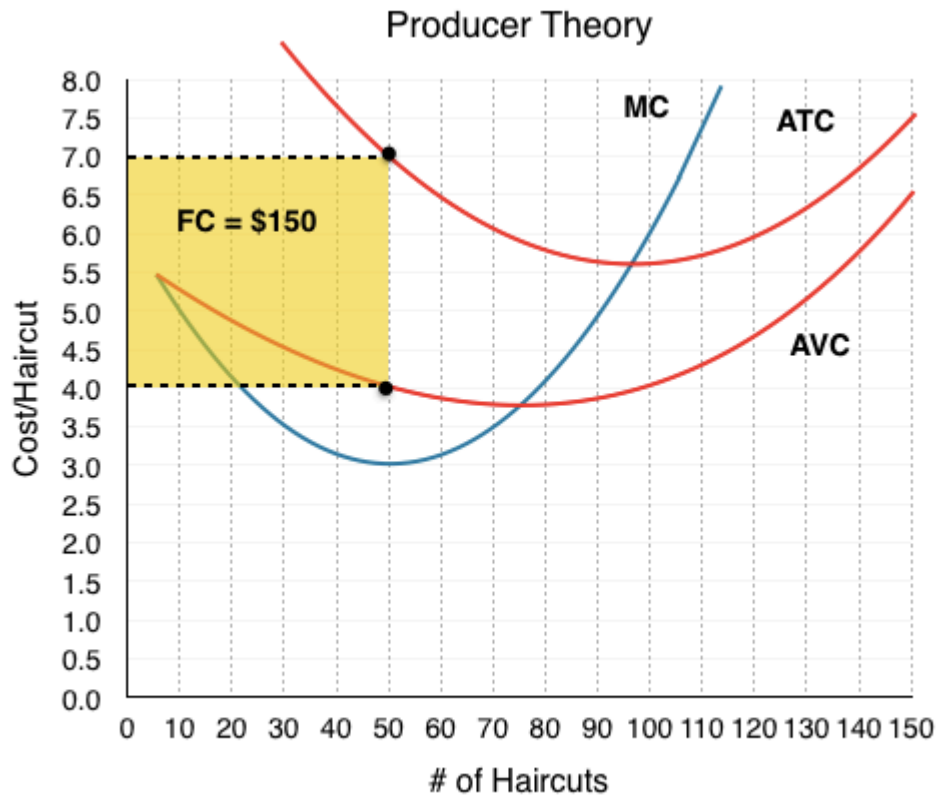


Figure 7.2a

At $Q = 50$, our $ATC = \$7$ and $AVC = \$4$. Calculating fixed cost, we see it equals $\$150 [(7-4) \times (50)]$, as stated in Topic 7.1. Remember that we derived ATC using fixed costs. Now, without knowing fixed cost, we can work backwards from our diagram to calculate total fixed cost at any Q .

Calculating FC at any other point, we will find that it is always equal to $\$150$. At $Q = 150$, $ATC = \$7.5$ and $AVC = \$6.5$. $[(7.5-6.5) \times (150)] = \150 . Remember that fixed cost is always equal to $\$150$ regardless of quantity, but AFC is always decreasing, as this $\$150$ gets spread out across more goods.

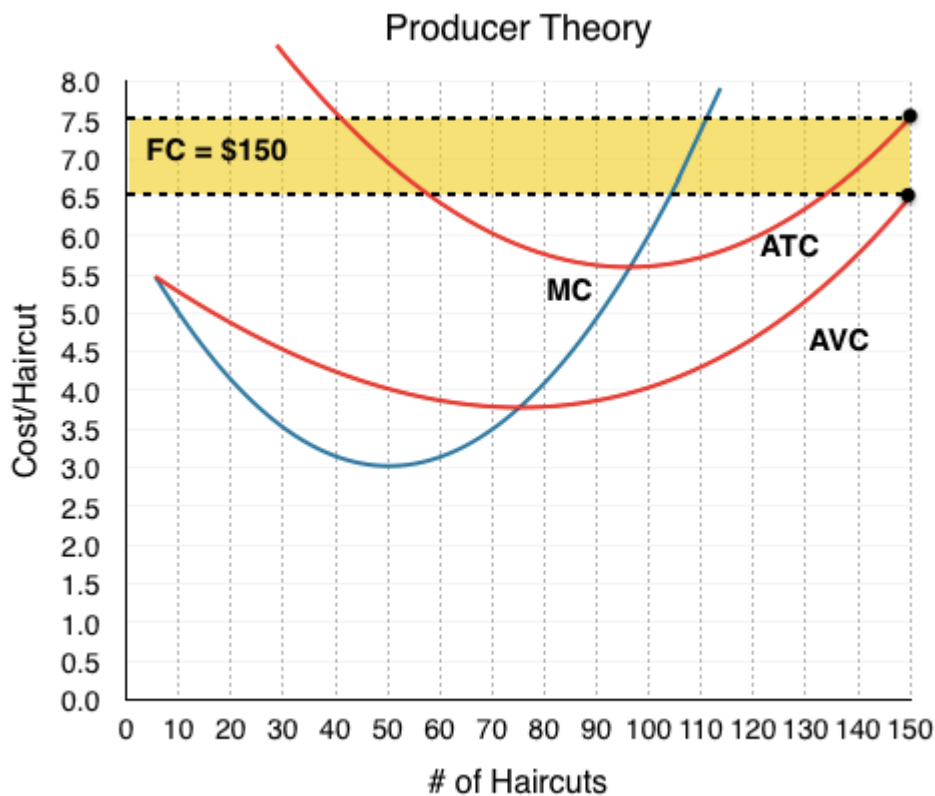


Figure 7.2b

The Competitive Firm

While we will use producer theory for non-competitive markets, for now, we are looking at price-taking firms.

If The Clip Joint is operating in a city with many other identical barber shops, they will lose their ability to set prices. A market price will dictate where they produce. We already know how this takes place. In Topic 1, we learned that economic agents use marginal analysis to make decisions about whether to increase a behaviour. If $MB > MC$, they will increase Q , and stop when $MB = MC$.

In this case, our price is our marginal benefit, since the price the firm receives is equal to the marginal revenue from an action. If price is \$7, then every Q will earn the firm \$7 of revenue. This means that $P = MR = MB$. Knowing that a firm maximizes producer surplus when $MC = MB$, we can now see that for a competitive firm, this occurs when $P = MC$.

When There's Profits

Marginal analysis certainly maximizes producer surplus, but what about profits? Recall that producer surplus does not subtract fixed cost. This means that:

$$PS = TR - VC = (P - AVC) \times Q.$$

$$\Pi = (P - ATC) \times Q.$$

The only difference between PS and profit is fixed cost. Even though profits and producer surplus are not the same, the act of maximizing PS maximizes profits as well. Our marginal analysis tells us to increase production if $\Delta PS > \Delta VC$ ($MB > MC$). Since fixed costs do not change, the $\Delta PS = \Delta \Pi$ and the analysis of $\Delta \Pi > \Delta VC$ will be identical.

Let's bring this understanding to our graph. Consider a market where The Clip Joint faces a price of \$7.5. Using marginal analysis, we will produce until $MC = P$, or where our price line intersects our marginal cost. This occurs at $Q = 110$.

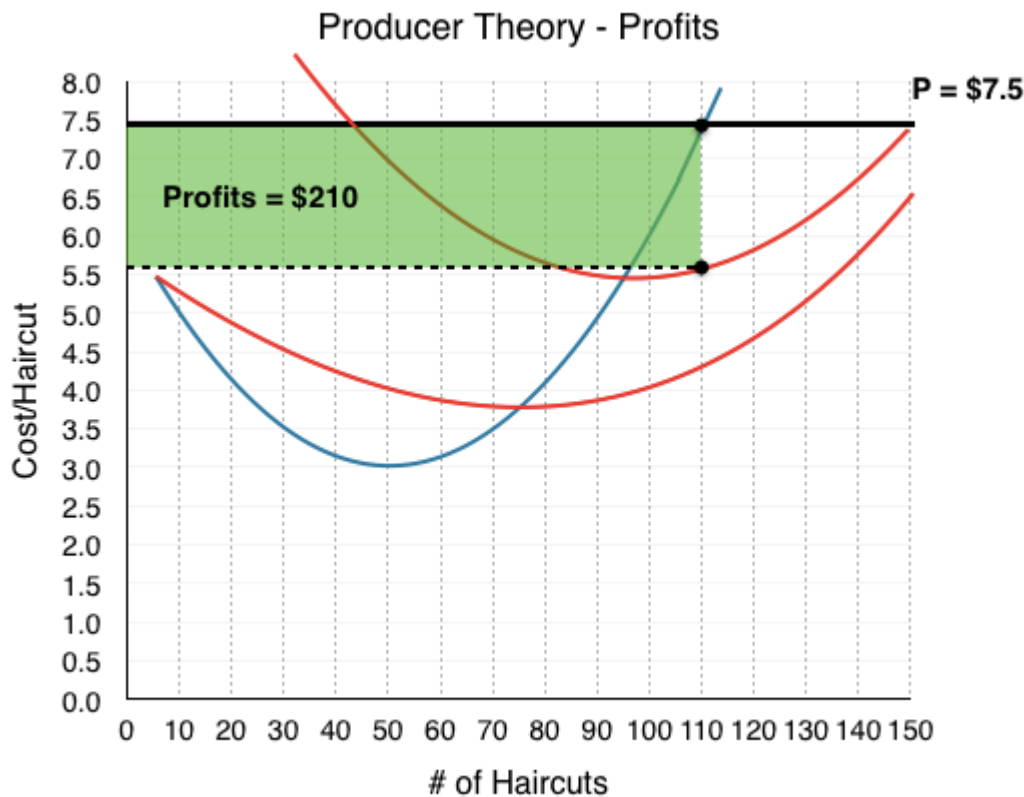


Figure 7.2c

Calculating profits, with $\Pi = (P - ATC) \times Q$, we find $\Pi = (7.5 - 5.59) \times 110 = \210 .

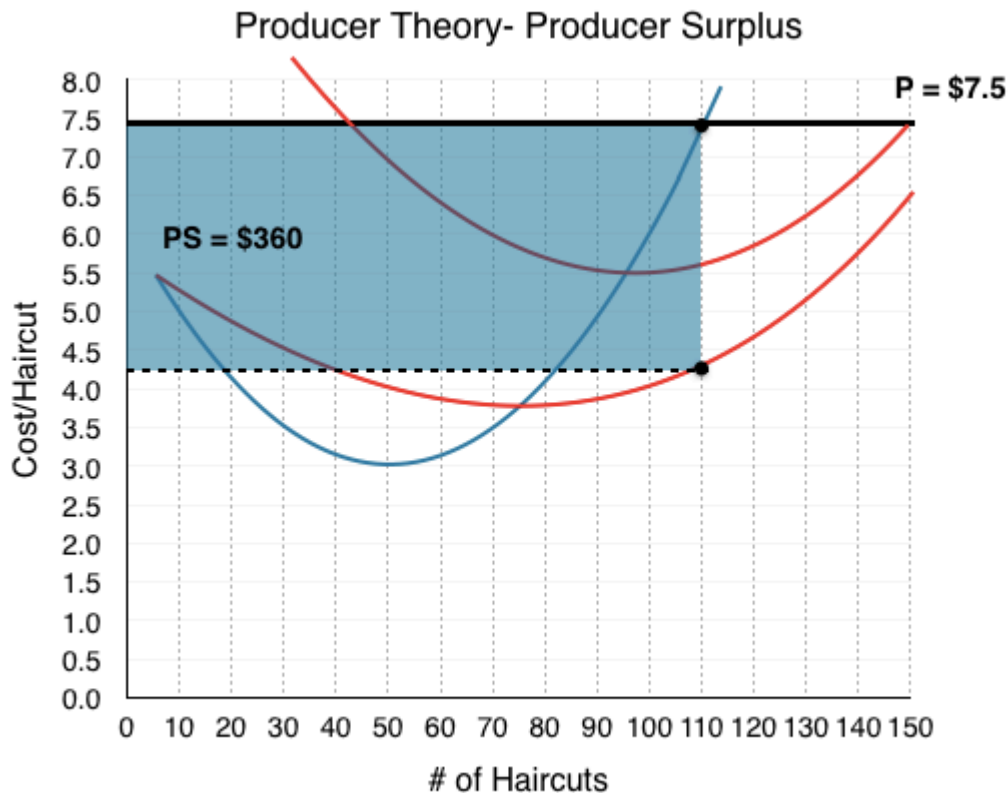


Figure 7.2d

Calculating producer surplus, with $PS = (P - AVC) \times Q$, we find $\Pi = (7.5 - 4.23) \times 110 = \360 .

Note that our AVC and ATC are always calculated from the quantity where $MC = P$, as this is the profit maximizing quantity.

What is the difference between profits and producer surplus? Calculating $\$360 - \210 , we find our fixed cost value of \$150. This is no surprise – producer surplus is just our earnings before we subtract the fixed costs!

When There's Losses

In the last example, The Clip Joint made healthy profits of \$210 per day because $P > ATC$. In the long run, this will not be sustainable. In fact, firms will produce in the short-run even when $P < ATC$ and Π is negative. Consider how The Clip Joint will behave when $P = \$5$.

At $P = \$5$, $MC = MB$ when $Q = 90$. This means $ATC = \$5.5$ and $AVC = \$3.83$.

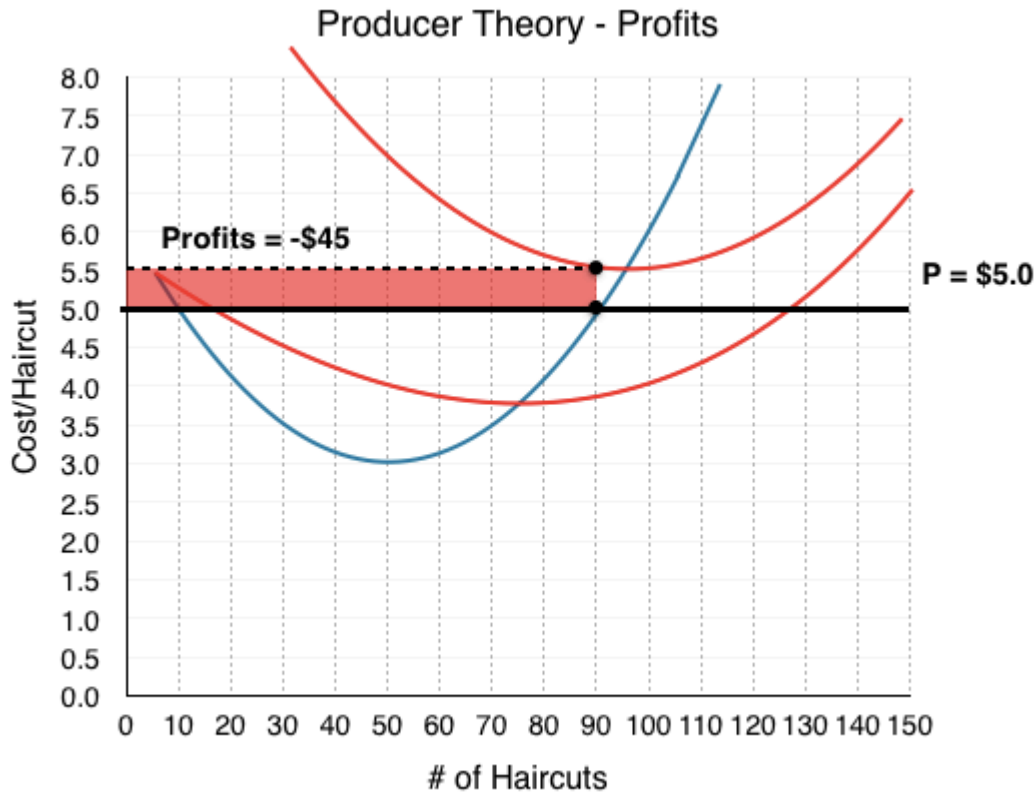


Figure 7.2e

Calculating profits, with $\Pi = (P - ATC) \times Q$, we find $\Pi = (5.0 - 5.5) \times 90 = -\45 .

Why doesn't the firm just shut down if it is losing money? Because it could be losing **more** money. Remember that no matter how much The Clip Joint produces, it still has to pay \$150 in fixed costs. In this case, The Clip Joint will take a loss of \$45 over a loss of \$150.

We can come to the same conclusion by looking at producer surplus.

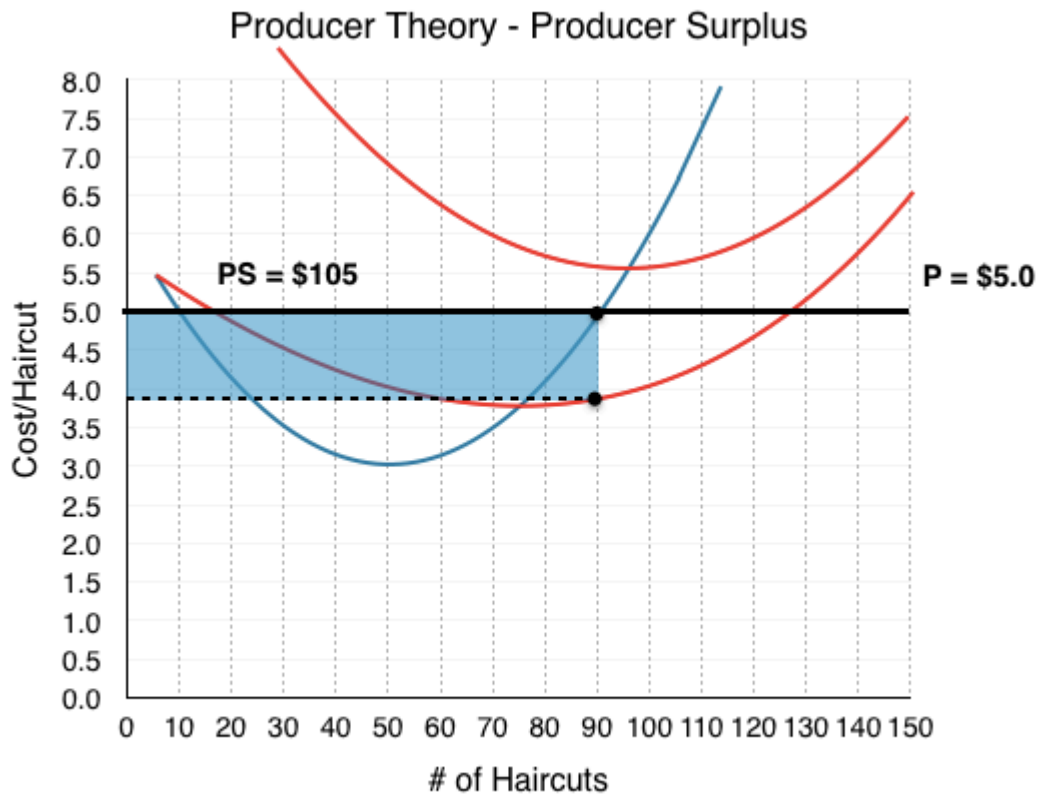


Figure 7.3f

If $PS > 0$, then the firm has enough money to pay for all of its variable costs, plus some money left over to pay for its fixed costs. In this case, after paying VC, The Clip Joint has \$105 left over to pay off a portion of its fixed costs.

This should clear up the relationship between FC, PS, and Profits. Producer Surplus is the amount we have before paying our fixed costs.

Smart-thinking company presidents do not continue to accept losses in the long run – that would be bad business. When the lease comes up for renewal, The Clip Joint will shut down knowing that it loses \$45 from each day of business. Is there any case where it would shut down immediately in the short run? Yes. In this example, our $PS > 0$ since $P > AVC$; this means that even though we are losing money, we are able to pay off some of our FC. What if $P < AVC$? In this case, our firm would not even be able to pay for its workers, let alone rent and other fixed costs. The more the firm produced, the more money it would lose. In this case, our firm will shut down immediately. For this reason, we call the point where $P = AVC_{\text{MIN}}$ the **Shut-Down Point**. If the price falls any lower, the firm will shut down immediately.

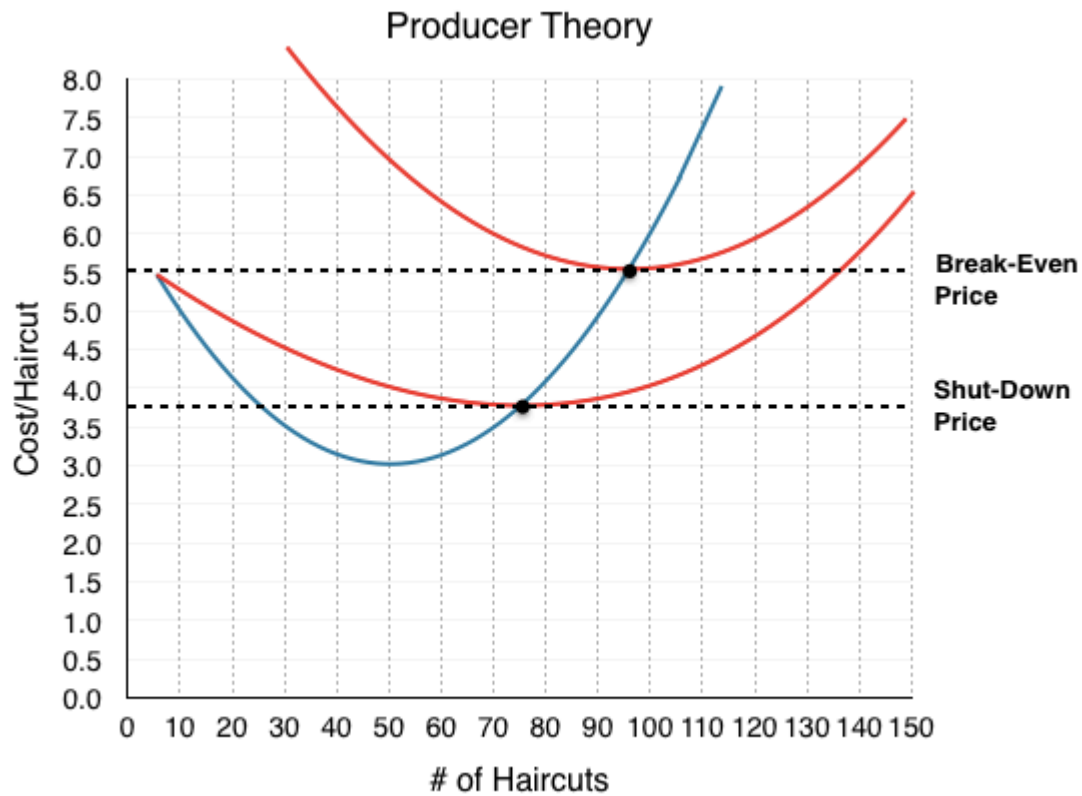


Figure 7.2g

Another important point is the **Break-Even Point** where $P = ATC$. If the price falls below this, we reach a situation like the example above, where the firm makes negative profits but continues to operate in the short-run.

We have now analyzed how an individual firm behaves in the short-run in depth – but what about the long run? What happens when shocks to the economy cause price to change? We will answer these questions in Topic 7.3.

Glossary

Break-Even Point

A point where a firm is making no profits

Shut-Down Point

A point where a firm is only able to cover their variable costs of production

Exercises 7.2

1. Suppose you are given the following information about a competitive firm:

At the current quantity produced, $P = \$10$; $AVC = \$4$; AVC is at its minimum.

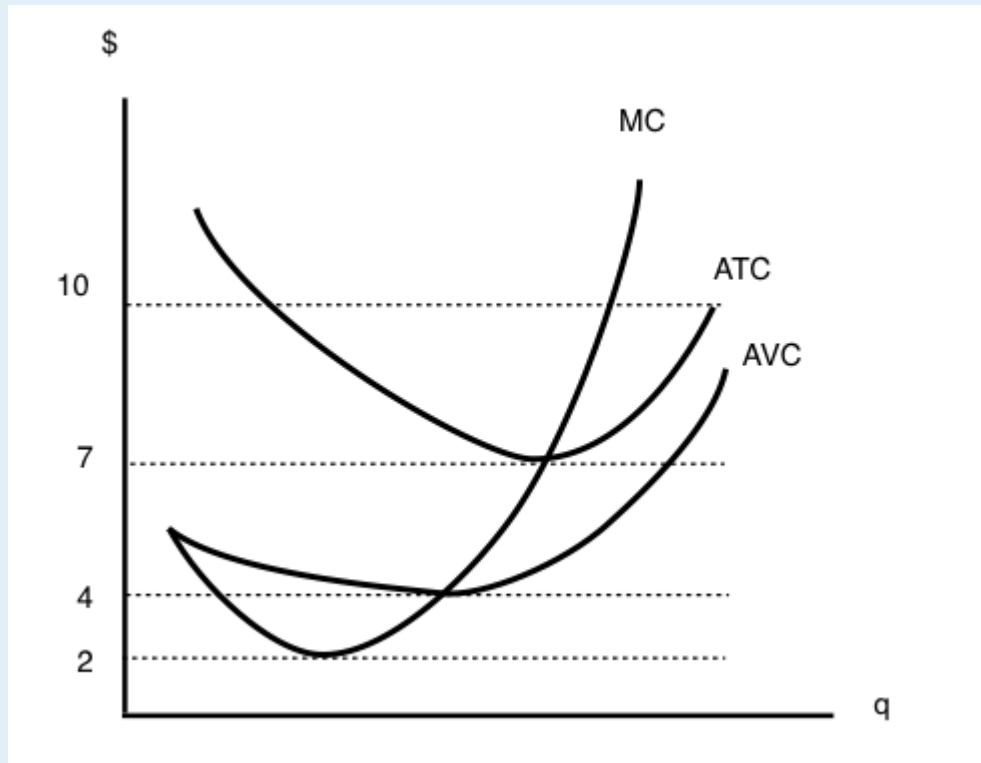
Given this:

- a) The firm should continue to produce its current level of output; this is profit maximizing.
- b) In order to maximize profits, the firm should increase output.
- c) In order to maximize profits, the firm should decrease output.
- d) We do not have enough information to determine what the firm should do to maximize profits.

2. If a firm's profit equals \$600 and its producer surplus equals \$1,000, then its fixed costs:

- a) Equal \$400
- b) Equal \$600.
- c) Equal \$1,600.
- d) Cannot be determined without further information.

The following TWO questions refer to the diagram below. Assume perfect competition.



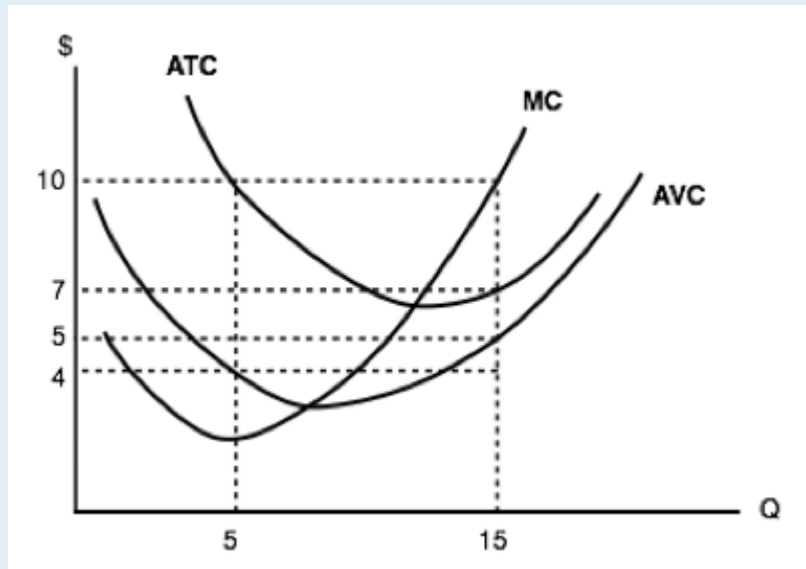
3. The firm's shut-down price is ____.

- a) \$2.
- b) \$4.
- c) \$7.
- d) \$10.

4. (Remember to refer to the diagram on the previous page.) The firm's break-even price is ____.

- a) \$2.
- b) \$4.
- c) \$7.
- d) \$10.

The following THREE questions refer to the diagram below, which illustrates a competitive firm's cost curves.



5. What do this firm's fixed costs equal?

- a) There is insufficient information to calculate the firm's fixed costs.
- b) \$50.
- c) \$30.
- d) \$20.

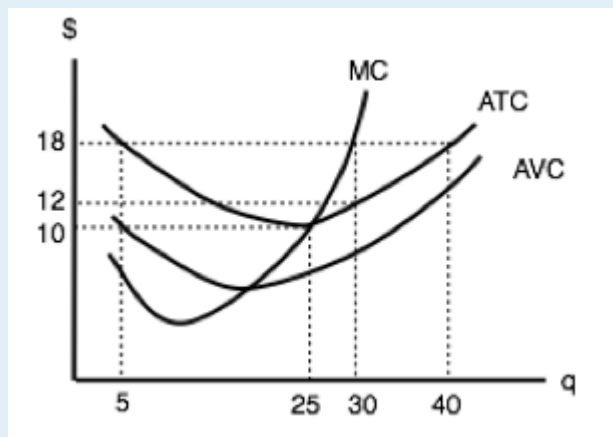
6. (Remember to refer to the diagram on the previous page.) If this firm can sell its output for \$10 per unit, then its maximum profit is equal to:

- a) \$150.
- b) \$75.
- c) \$60.
- d) \$45.

7. (Remember to refer to the diagram on the previous page.) If this firm can sell its output for \$10 per unit, then its maximum producer surplus is equal to:

- a) \$150.
- b) \$75.
- c) \$60.
- d) \$45.

The following THREE questions refer to the diagram below. Assume perfect competition.



8. Given a price of \$18, the profit-maximizing level of output for this firm is:

- a) 5.
- b) 25.
- c) 30.
- d) 40.

9. (Remember to refer to the diagram on the previous page.) Given a price of \$18, the firm's maximum profit is equal to:

- a) \$360.
- b) \$240.
- c) \$180.
- d) \$0.

10. (Remember to refer to the diagram on the previous page.) What do this firm's fixed costs equal?

- a) \$0
- b) \$40.
- c) \$180.
- d) There is insufficient information to calculate fixed costs.

7.3 Producer Theory in the Long Run

Learning Objectives

By the end of this section, you will be able to:

- Understand why positive and negative profits entice entry and exit.
- Differentiate between accounting and economic profits.
- Explain what happens in the long-run after shocks to supply and demand.

So far we have looked at The Clip Joint in the short-run, while eluding to some of the actions The Clip Joint may take in the LR including:

- If the price is below The Clip Joint's break-even price, it will continue to operate in the short-run but exit in the long run.
- If the price is below The Clip Joint's shut-down price, it will shut down in the short-run.

In our example in Topic 7.2, when price was \$7.50, we showed The Clip Joint making positive profits in the short run. To begin our discussion of long-run, we must first remember that The Clip Joint is a price-taker who is receiving price cues from the competitive market. This means that the price that The Clip Joint faces is equal to the equilibrium price in the aggregate market. In Figure 7.3a, the competitive market is shown with an equilibrium price of \$7.5, and an equilibrium quantity of 5,500 haircuts. Assuming every firm is identical to The Clip Joint, we can determine how many firms are in the market by the equation Q/q , dividing the 5,500 haircuts produced in the market, by the 110 haircuts each firm produces at the market price. This shows us that in this market, there are $5,500/110 = 50$ firms.

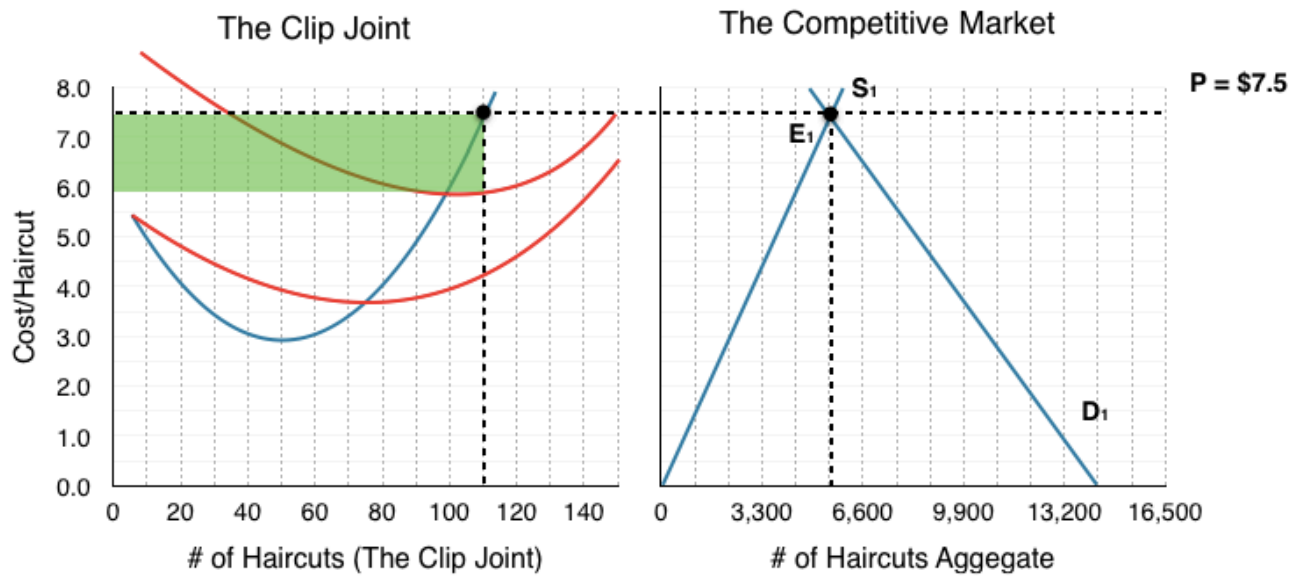


Figure 7.3a

In this situation, cutting hair is an attractive industry. Each firm is able to pay all variable costs (which include opportunity costs) and fixed costs and make \$210 in profit after economic expenses! In the long run, this is unsustainable – other businesses will see the profitable market and decide to join the industry. This activity will cause supply to increase.

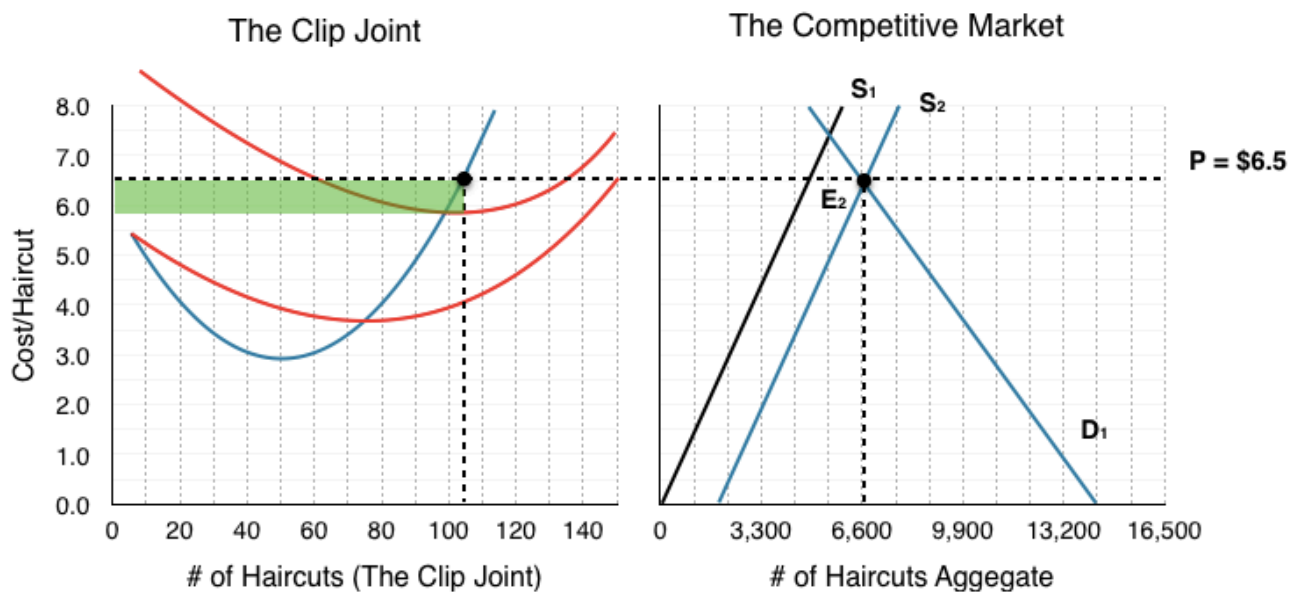


Figure 7.3b

In Figure 7.3b, our supply has increased from S_1 to S_2 , causing price to fall from \$7.5 to \$6.5 and creating a new equilibrium quantity of 6,600. Consider what this has done for The Clip Joint's profits. Now, with the market change, The Clip Joint is making only \$52.50 in profits – a significant decrease from before. Notice that the amount of firms has increased from 50 to $6,600/105 = 63$ firms.

Although the number of firms has increased and the equilibrium price has fallen, there is still incentive in the market for firms to enter. Since profits are positive, supply will continue to increase.

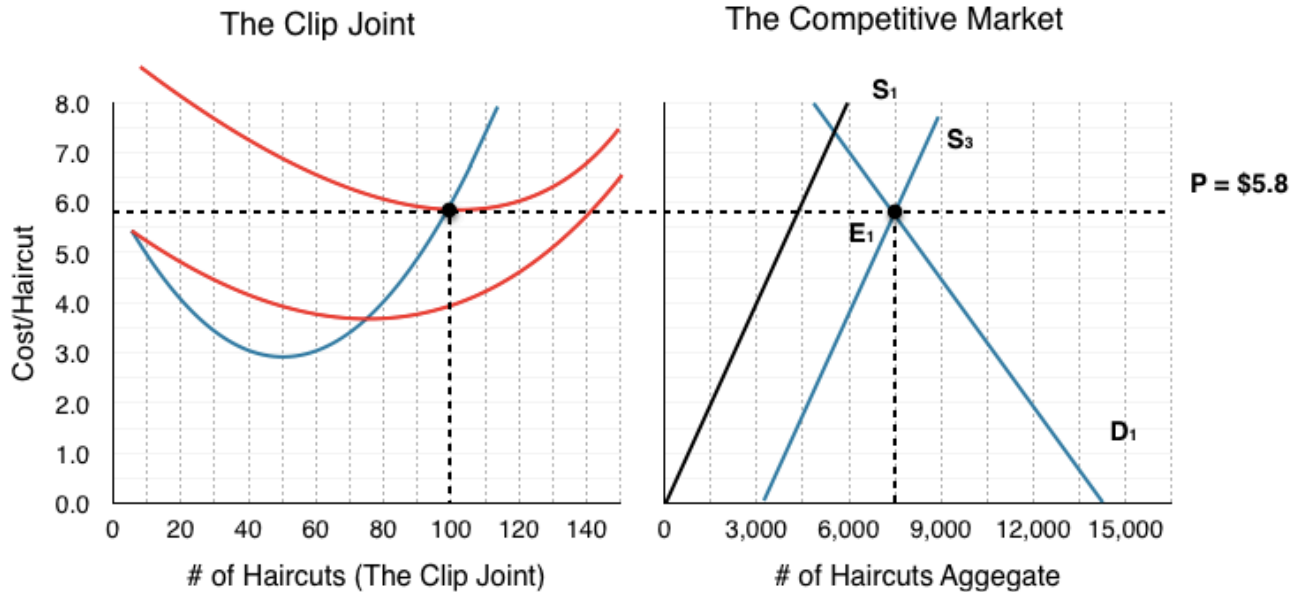


Figure 7.3c

Supply continues to increase until Price = \$5.8, which is the break-even price for the market. At this point, The Clip Joint is making no profits and there is no incentive for other firms to enter.

In this analysis, we have shown that when a firm is making positive profits in the short-run, in the long run, this will cause more firms to enter, decreasing price until it is at the break-even point once more. If price is below break-even, the reverse will occur as firms leave the market to seek opportunities elsewhere. The important take away is:

While firms can make positive or negative profits in the short-run, in the long run, firms will always break-even.

No Economic Profits?

How can it be that in the long-run equilibrium firms make no profits? Are we suggesting that no firms can make any money in the long-run? These questions stem from the difference between **Accounting Profits** and **Economic Profits**.

Accounting profits are what most of us think of when we hear “profits.” This is the bottom line of the income statement equal to our firm’s revenues minus expenses. Economic profit on the other hand includes opportunity costs. This means that our accounting profits could be giving us 6% returns, and our economic profits could be zero if we could be making that same 6% elsewhere.

In conclusion, firms can certainly make accounting profits in the long-run, but their economic profits will always return to 0.

Comparative Statics

You now know all the basic tools for producer theory, with the understanding of how a single firm behaves in a market, and how a market responds when profits are not 0. Let's conclude by applying these concepts to the comparative statics exercises we learned in Topic 3.

In the market for haircuts, consider what would happen if a new peer-reviewed study was released saying that people with hair shorter than 6 inches are 60% more likely to catch the common cold in a given year. Considering what we learned in Topic 3, we know that this would decrease the demand for haircuts, as many consumers would prefer long hair over getting sick.

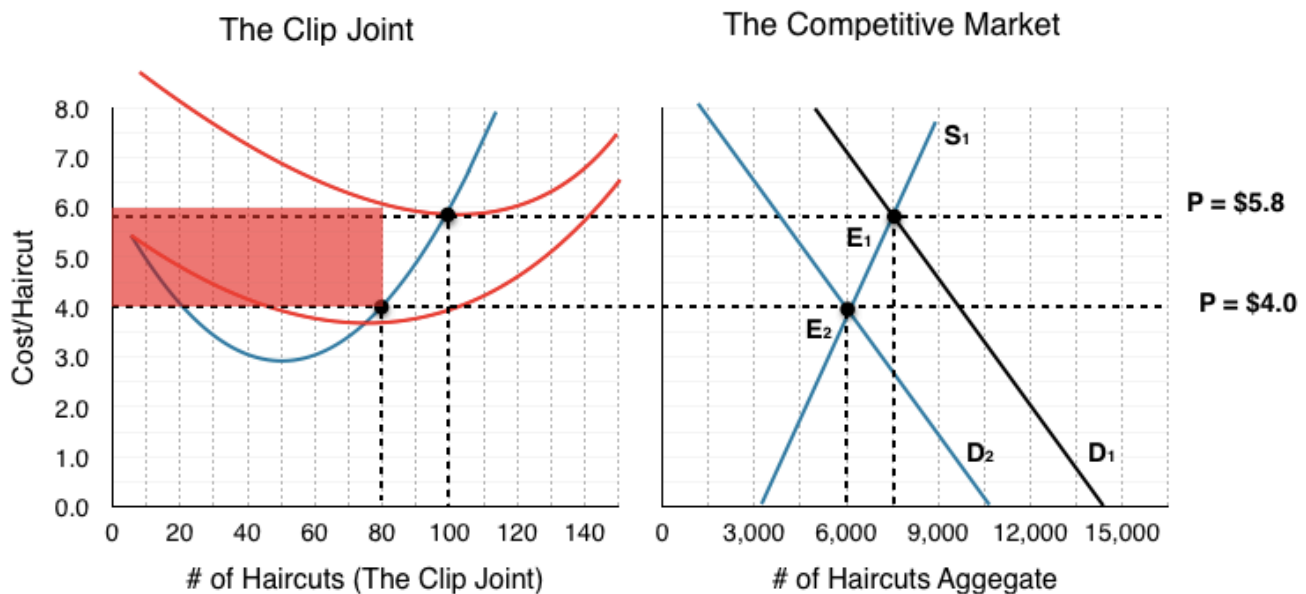


Figure 7.3d

As shown in Figure 7.3d, this causes a decrease in demand, which causes price to fall from \$5.80 to \$4.00 and quantity to drop from 7,500 to 6,000 haircuts moving from E_1 to E_2 . At this price, The Clip Joint will reduce services from 100 to 80 haircuts per day. In addition, with ATC as high as \$6.20, The Clip Joint is losing \$168 per day. Since The Clip Joint is able to cover its variable costs, it will remain in the market in the short-term, but once its lease runs out, The Clip Joint will close down.

Consider the number of firms in the industry. In our previous example, we saw that changes in supply caused the number of firms to fluctuate. Before the demand shock, we had 75 Firms ($7,500/100$) and

after, we still have 75 (6,000/80). Since each firm has reduced its production, all are able to stay in the market in the short-term.

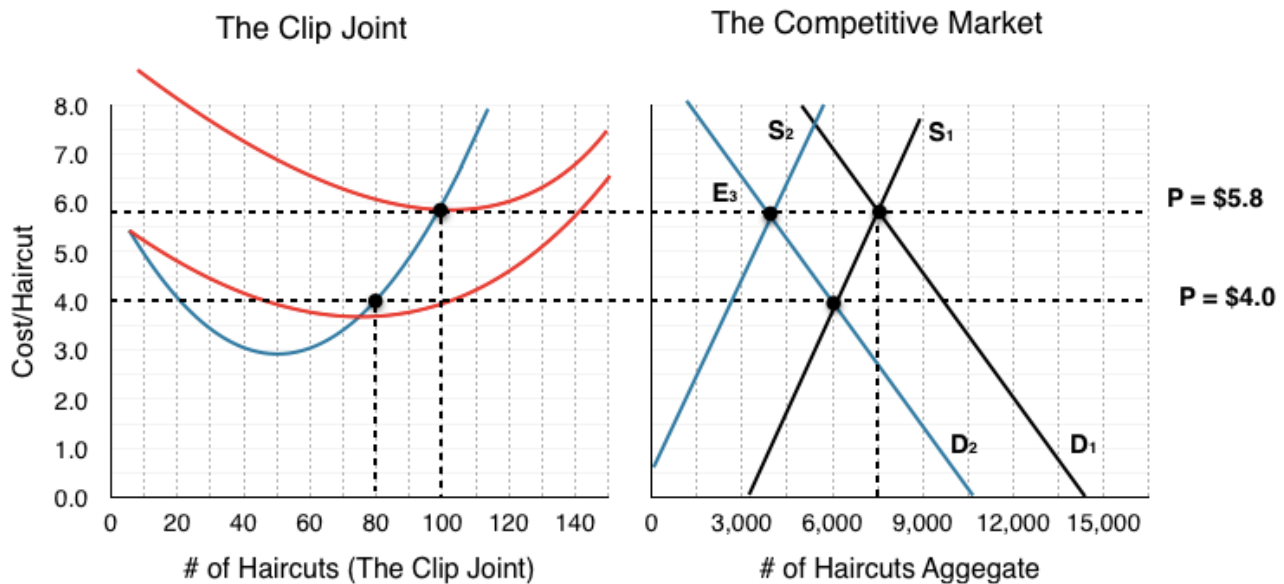


Figure 7.3e

In the long run, The Clip Joint, along with many other barbershops, leave the market. This causes supply to decrease, reducing the aggregate demand and raising the price. This creates a new equilibrium at E_3 , with E_Q of 4,000 and E_P of \$5.80.

Notice the E_P has returned to the level it started at – this is no coincidence.

The competitive market always returns zero profits for its individual firms in the long-run, with entry and exit correcting any short-term deviations.

Since profits were negative, exit caused price to increase again until they were 0. When profits are positive, entry causes price to fall until they are 0. Just as we saw market corrections for shortages and surpluses, the competitive market will always return to an equilibrium where no firm is making positive economic profits.

Glossary

Accounting Profits

total revenues minus explicit costs, including depreciation

Economic Profits

total revenues minus total costs (explicit plus implicit costs)

Entry

when firms enter a market enticed by positive profits, causes prices to fall

Exit

when firms leave a market due to losses, causes prices to rise

Exercises 7.3

1. Suppose that a perfectly competitive firm is currently producing 10 units of output. You also have the following additional information:

$P = \$6$; $MC = \$6$; $AVC = \$3$; $ATC = \$8$.

Given this:

- a) This firm should continue to produce 10 units in the short run, but should exit the industry in the long run, unless price rises.
- b) This firm should shut down in the short run, and exit the industry in the long run, unless price rises.
- c) This firm should increase its price in order to maximize profits.
- d) This firm should increase its output in order to maximize profits.

2. Suppose that a perfectly competitive industry is initially in long run equilibrium.

The government then introduces a \$1,000 annual fee that each firm in the industry must pay, no matter how much output it produces. Which of the following statements is TRUE?

- a) Price will increase in the short run, but return to its initial level in the long run.
- b) Price will not change in the short run, but will increase in the long run.
- c) Price will increase in both the short and the long run, but the increase will be greater in the short run than in the long run.
- d) Price will increase in both the short and the long run, but the increase will be greater in the long run than in the short run.

3. Suppose you are given the following information about a competitive firm:

$P = \$10$; $ATC = \$4$; $MC = \$10$; $q = 20$.

Given this:

- a) The firm should continue to produce 20 units of output; this is profit maximizing.
- b) In order to maximize profits, the firm should produce more than 20 units of output.
- c) In order to maximize profits, the firm should produce fewer than 20 units of output.
- d) The firm should shut down in the short run and exit in the long run.

4. Which of the following statements about competitive firms is FALSE?

- a) A competitive firm maximizes profit by producing the level of output at which price equal marginal cost.
- b) A competitive firm maximizes profit by producing the level of output at which marginal revenue equals marginal cost.
- c) For a competitive firm, marginal revenue is less than price.
- d) For a competitive firm, economic profits equal zero in the long run.

5. Suppose you are given the following information about a competitive firm:

$$P = \$10$$

$$ATC = \$4$$

$$MC = \$6$$

$$q = 20.$$

Which of the following statements is true?

- a) The firm should continue to produce 20 units of output; this is profit maximizing.
- b) In order to maximize profits, the firm should produce more than 20 units of output.
- c) In order to maximize profits, the firm should produce fewer than 20 units of output.
- d) The firm should shut down in the short run and exit in the long run.

6. Suppose that a perfectly competitive firm is currently producing 25 units of output. You also have the following additional information:

$$P = \$12.$$

The firm is operating at the minimum point of AVC

$$AVC = \$4.$$

$$ATC = \$10.$$

The minimum point of ATC is where $ATC = \$8$.

If the firm wishes to maximize profits, which of the following statements is TRUE?

- a) This firm should continue to produce 25 units in the short run, but exit in the long run.
- b) The firm should increase output in the short run, but exit in the long run.
- c) The firm should increase output in the short run, and will remain in the industry in the long run.
- d) None of the above.

7. Which of the following statements about a competitive firm producing positive output is TRUE?

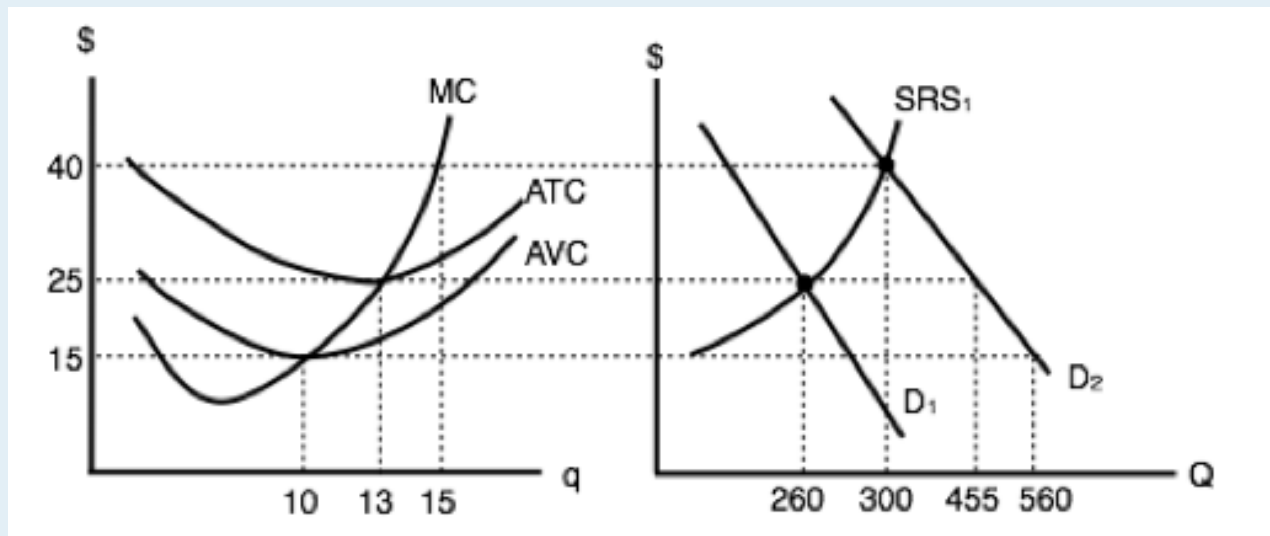
I. Price equals marginal cost in both the short run and the long run.

II. Price can be less than average total cost in the short run, but not in the long run.

III. If price is less than average total cost (so that the firm makes negative economic profits) it will shut down in the short run and exit in the long run.

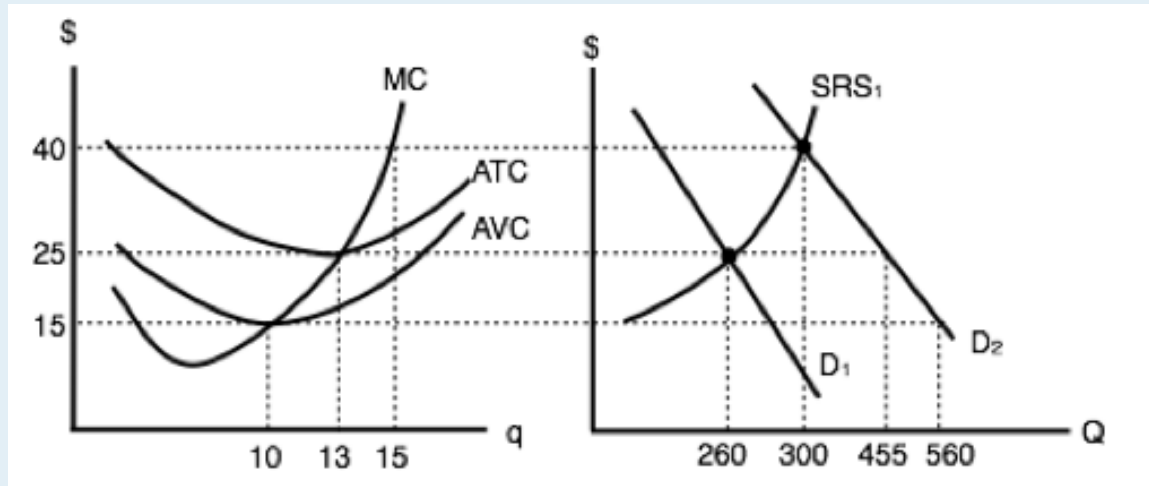
- a) I only.
- b) I and II only.
- c) I and III.
- d) I, II, and III.

The following THREE questions refer to the diagram below, which illustrates a competitive firm's cost curves and the supply and demand diagram for the industry. Assume that all firms in the industry have identical cost curves.



8. If demand is given by D₁, then each firm in the industry will produce _____ units of output.
- 0.
 - 10.
 - 13.
 - 15.
9. If demand is given by D₁, then how many firms operate in this industry?
- There is insufficient information to determine the number of firms in the industry.
 - 10.
 - 20.
 - 30.
10. If demand shifts from D₁ to D₂, then, in the short run:
- Firms will make positive economic profits.
 - New firms will enter the market.
 - The price will remain unchanged at \$25.
 - Some firms will stop producing, since price is below average variable cost.
11. Suppose that the wages competitive firms must pay to their workers increase. Which of the following statements is TRUE?
- The firms' marginal costs will rise.
 - The market supply curve will shift left and price will rise.
 - In the long run firms will be making zero economic profits.
 - All of the above are true.

The following TWO question refers to the diagram below, which illustrates a competitive firm's cost curves, and the supply and demand diagram for the industry. Assume that all firms in the industry have identical cost curves.



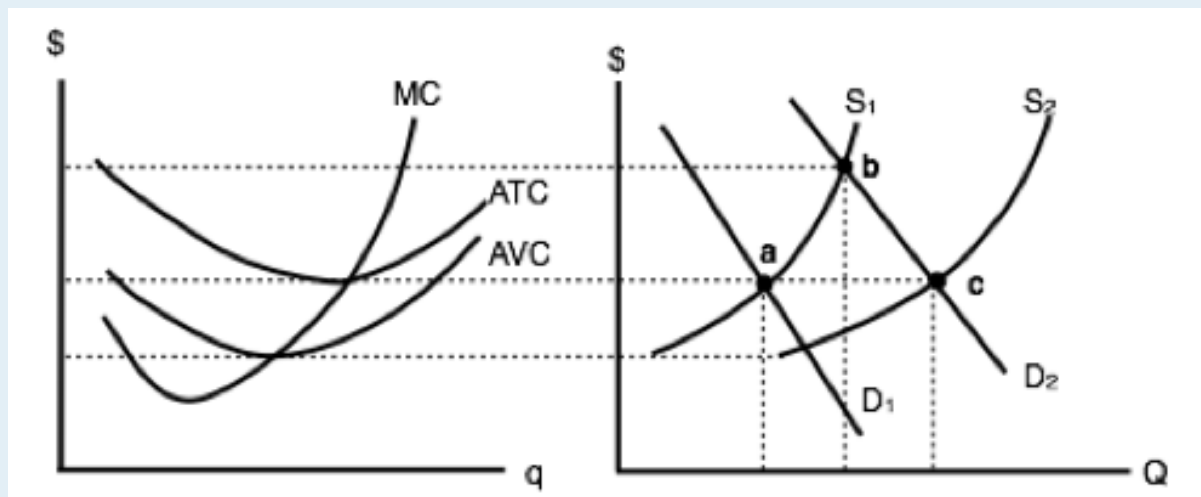
12. If demand increases from D_1 to D_2 , then, in the long run, how many firms will be in this industry?

- a) 20.
- b) 25.
- c) 35.
- d) 40.

13. If demand increases from D_1 to D_2 , then, in the short run price will _____, and in the long run price will _____.

- a) Rise to \$40; remain at \$40.
- b) Rise to \$40; fall to \$25.
- c) Rise to \$40; fall to \$15.
- d) Rise to \$40; either rise or fall, depending on whether firms enter or exit.

14. Refer to the diagram below.



Which of the following labeled points is a long run equilibrium?

- I. Point a.
 - II. Point b.
 - III. Point c.
- a) I only.
 - b) I and II only.
 - c) I and III only.
 - d) I, II, and III.

7.4 The Structure of Costs in the Long Run

Learning Objectives

By the end of this section, you will be able to:

- Calculate total cost
- Identify economies of scale, diseconomies of scale, and constant returns to scale
- Interpret graphs of long-run average cost curves and short-run average cost curves
- Analyze cost and production in the long run and short run

The long run is the period of time when all costs are variable. The long run depends on the specifics of the firm in question—it is not a precise period of time. If you have a one-year lease on your factory, then the long run is any period longer than a year, since after a year you are no longer bound by the lease. No costs are fixed in the long run. A firm can build new factories and purchase new machinery, or it can close existing facilities. In planning for the long run, the firm will compare alternative **production technologies** (or processes).

In this context, technology refers to all alternative methods of combining inputs to produce outputs. It does not refer to a specific new invention like the tablet computer. The firm will search for the production technology that allows it to produce the desired level of output at the lowest cost. After all, lower costs lead to higher profits—at least if total revenues remain unchanged. Moreover, each firm must fear that if it does not seek out the lowest-cost methods of production, then it may lose sales to competitor firms that find a way to produce and sell for less.

Choice of Production Technology

Many tasks can be performed with a range of combinations of labor and physical capital. For example, a firm can have human beings answering phones and taking messages, or it can invest in an automated voicemail system. A firm can hire file clerks and secretaries to manage a system of paper folders and file cabinets, or it can invest in a computerized record-keeping system that will require fewer employees. A firm can hire workers to push supplies around a factory on rolling carts, it can invest in motorized vehicles, or it can invest in robots that carry materials without a driver. Firms often face a choice between buying a many small machines, which need a worker to run each one, or buying one larger and more expensive machine, which requires only one or two workers to operate it. In short, physical capital and labor can often substitute for each other.

Consider the example of a private firm that is hired by local governments to clean up public parks. Three different combinations of labor and physical capital for cleaning up a single average-sized park appear in Table 6. The first production technology is heavy on workers and light on machines, while the next

two technologies substitute machines for workers. Since all three of these production methods produce the same thing—one cleaned-up park—a profit-seeking firm will choose the production technology that is least expensive, given the prices of labor and machines.

Production technology 1 10 workers 2 machines

Production technology 2 7 workers 4 machines

Production technology 3 3 workers 7 machines

Table 6. Three Ways to Clean a Park

Production technology 1 uses the most labor and least machinery, while production technology 3 uses the least labor and the most machinery. Table 7 outlines three examples of how the total cost will change with each production technology as the cost of labor changes. As the cost of labor rises from example A to B to C, the firm will choose to substitute away from labor and use more machinery.

Example A: Workers cost \$40, machines cost \$80

	Labor Cost	Machine Cost	Total Cost
Cost of technology 1	$10 \times \$40 = \400	$2 \times \$80 = \160	\$560
Cost of technology 2	$7 \times \$40 = \280	$4 \times \$80 = \320	\$600
Cost of technology 3	$3 \times \$40 = \120	$7 \times \$80 = \560	\$680

Example B: Workers cost \$55, machines cost \$80

	Labor Cost	Machine Cost	Total Cost
Cost of technology 1	$10 \times \$55 = \550	$2 \times \$80 = \160	\$710
Cost of technology 2	$7 \times \$55 = \385	$4 \times \$80 = \320	\$705
Cost of technology 3	$3 \times \$55 = \165	$7 \times \$80 = \560	\$725

Example C: Workers cost \$90, machines cost \$80

	Labor Cost	Machine Cost	Total Cost
Cost of technology 1	$10 \times \$90 = \900	$2 \times \$80 = \160	\$1,060
Cost of technology 2	$7 \times \$90 = \630	$4 \times \$80 = \320	\$950
Cost of technology 3	$3 \times \$90 = \270	$7 \times \$80 = \560	\$830

Table 7. Total Cost with Rising Labor Costs

Example A shows the firm's cost calculation when wages are \$40 and machines costs are \$80. In this case, technology 1 is the low-cost production technology. In example B, wages rise to \$55, while the cost of machines does not change, in which case technology 2 is the low-cost production technology. If wages keep rising up to \$90, while the cost of machines remains unchanged, then technology 3 clearly becomes the low-cost form of production, as shown in example C.

This example shows that as an input becomes more expensive (in this case, the labor input), firms will attempt to conserve on using that input and will instead shift to other inputs that are relatively less expensive. This pattern helps to explain why the demand curve for labor (or any input) slopes down; that is, as labor becomes relatively more expensive, profit-seeking firms will seek to substitute the use of other inputs. When a multinational employer like Coca-Cola or McDonald's sets up a bottling plant or a restaurant in a high-wage economy like the United States, Canada, Japan, or Western Europe, it is likely to use production technologies that conserve on the number of workers and focuses more on machines. However, that same employer is likely to use production technologies with more workers and less machinery when producing in a lower-wage country like Mexico, China, or South Africa.

Economies of Scale

Once a firm has determined the least costly production technology, it can consider the optimal scale of production, or quantity of output to produce. Many industries experience economies of scale. **Economies of scale** refers to the situation where, as the quantity of output goes up, the cost per unit goes down. This is the idea behind “warehouse stores” like Costco or Walmart. In everyday language: a larger factory can produce at a lower average cost than a smaller factory.

Figure 1 illustrates the idea of economies of scale, showing the average cost of producing an alarm clock falling as the quantity of output rises. For a small-sized factory like S, with an output level of 1,000, the average cost of production is \$12 per alarm clock. For a medium-sized factory like M, with an output level of 2,000, the average cost of production falls to \$8 per alarm clock. For a large factory like L, with an output of 5,000, the average cost of production declines still further to \$4 per alarm clock.

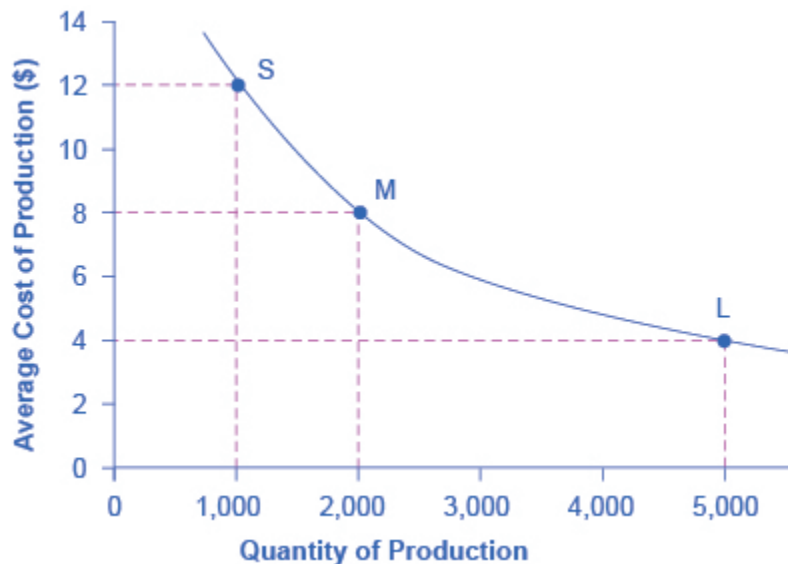


Figure 7.4a: Economies of Scale. A small factory like S produces 1,000 alarm clocks at an average cost of \$12 per clock. A medium factory like M produces 2,000 alarm clocks at a cost of \$8 per clock. A large factory like L produces 5,000 alarm clocks at a cost of \$4 per clock. Economies of scale exist because the larger scale of production leads to lower average costs.

The average cost curve in Figure 1 may appear similar to the average cost curves presented earlier in this chapter, although it is downward-sloping rather than U-shaped. But there is one major difference. The economies of scale curve is a long-run average cost curve, because it allows all factors of production

to change. The short-run average cost curves presented earlier in this chapter assumed the existence of fixed costs, and only variable costs were allowed to change.

One prominent example of economies of scale occurs in the chemical industry. Chemical plants have a lot of pipes. The cost of the materials for producing a pipe is related to the circumference of the pipe and its length. However, the volume of chemicals that can flow through a pipe is determined by the cross-section area of the pipe. The calculations in Table 8 show that a pipe which uses twice as much material to make (as shown by the circumference of the pipe doubling) can actually carry four times the volume of chemicals because the cross-section area of the pipe rises by a factor of four (as shown in the Area column).

	Circumference ($2\pi r$)	Area (πr^2)
4-inch pipe	12.5 inches	12.5 square inches
8-inch pipe	25.1 inches	50.2 square inches
16-inch pipe	50.2 inches	201.1 square inches

Table 8. Comparing Pipes: Economies of Scale in the Chemical Industry

A doubling of the cost of producing the pipe allows the chemical firm to process four times as much material. This pattern is a major reason for economies of scale in chemical production, which uses a large quantity of pipes. Of course, economies of scale in a chemical plant are more complex than this simple calculation suggests. But the chemical engineers who design these plants have long used what they call the “six-tenths rule,” a rule of thumb which holds that increasing the quantity produced in a chemical plant by a certain percentage will increase total cost by only six-tenths as much.

Shapes of Long-Run Average Cost Curves

While in the short run firms are limited to operating on a single average cost curve (corresponding to the level of fixed costs they have chosen), in the long run when all costs are variable, they can choose to operate on any average cost curve. Thus, the **long-run average cost (LRAC) curve** is actually based on a group of **short-run average cost (SRAC) curves**, each of which represents one specific level of fixed costs. More precisely, the long-run average cost curve will be the least expensive average cost curve for any level of output. Figure 2 shows how the long-run average cost curve is built from a group of short-run average cost curves. Five short-run-average cost curves appear on the diagram. Each SRAC curve represents a different level of fixed costs. For example, you can imagine $SRAC_1$ as a small factory, $SRAC_2$ as a medium factory, $SRAC_3$ as a large factory, and $SRAC_4$ and $SRAC_5$ as very large and ultra-large. Although this diagram shows only five SRAC curves, presumably there are an infinite number of other SRAC curves between the ones that are shown. This family of short-run average cost curves can be thought of as representing different choices for a firm that is planning its level of investment in fixed cost physical capital—knowing that different choices about capital investment in the present will cause it to end up with different short-run average cost curves in the future.

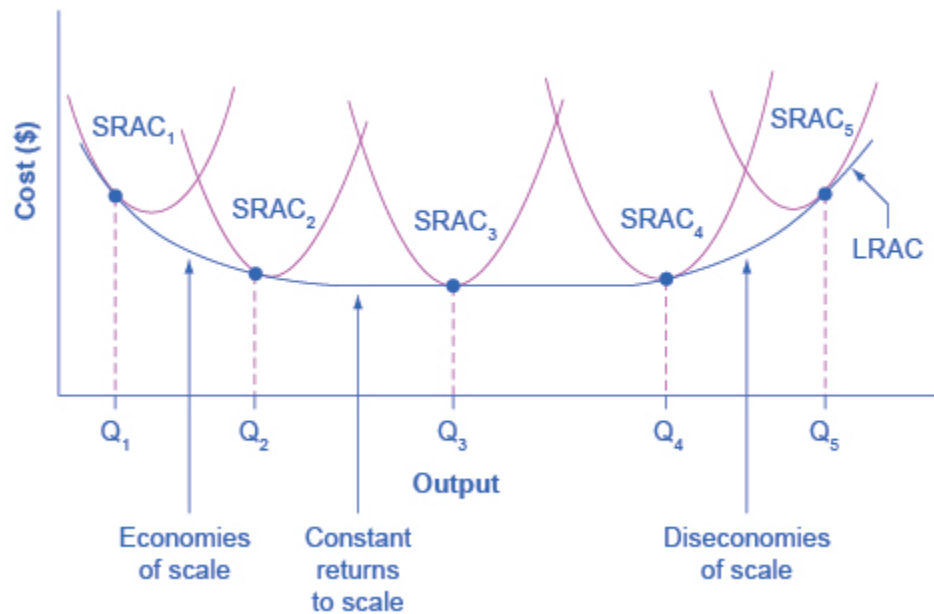


Figure 7.4b From Short-Run Average Cost Curves to Long-Run Average Cost Curves. The five different short-run average cost (SRAC) curves each represents a different level of fixed costs, from the low level of fixed costs at $SRAC_1$ to the high level of fixed costs at $SRAC_5$. Other SRAC curves, not shown in the diagram, lie between the ones that are shown here. The long-run average cost (LRAC) curve shows the lowest cost for producing each quantity of output when fixed costs can vary, and so it is formed by the bottom edge of the family of SRAC curves. If a firm wished to produce quantity Q_3 , it would choose the fixed costs associated with $SRAC_3$.

The long-run average cost curve shows the cost of producing each quantity in the long run, when the firm can choose its level of fixed costs and thus choose which short-run average costs it desires. If the firm plans to produce in the long run at an output of Q_3 , it should make the set of investments that will lead it to locate on $SRAC_3$, which allows producing q_3 at the lowest cost. A firm that intends to produce Q_3 would be foolish to choose the level of fixed costs at $SRAC_2$ or $SRAC_4$. At $SRAC_2$ the level of fixed costs is too low for producing Q_3 at lowest possible cost, and producing q_3 would require adding a very high level of variable costs and make the average cost very high. At $SRAC_4$, the level of fixed costs is too high for producing q_3 at lowest possible cost, and again average costs would be very high as a result.

The shape of the long-run cost curve, as drawn in Figure 7.4b, is fairly common for many industries. The left-hand portion of the long-run average cost curve, where it is downward-sloping from output levels Q_1 to Q_2 to Q_3 , illustrates the case of economies of scale. In this portion of the long-run average cost curve, larger scale leads to lower average costs. This pattern was illustrated earlier in Figure 7.4a.

In the middle portion of the long-run average cost curve, the flat portion of the curve around Q_3 , economies of scale have been exhausted. In this situation, allowing all inputs to expand does not much change the average cost of production, and it is called **constant returns to scale**. In this range of the LRAC curve, the average cost of production does not change much as scale rises or falls. The following Clear it Up feature explains where diminishing marginal returns fit into this analysis.

How do economies of scale compare to diminishing marginal returns?

The concept of economies of scale, where average costs decline as production expands, might seem to conflict with the idea of diminishing marginal returns, where marginal costs rise as production expands. But diminishing marginal returns refers only to the short-run average cost curve, where one variable input (like labor) is increasing, but other inputs (like capital) are fixed. Economies of scale refers to the long-run average cost curve where all inputs are being allowed to increase together. Thus, it is quite possible and common to have an industry that has both diminishing marginal returns when only one input is allowed to change, and at the same time has increasing or constant economies of scale when all inputs change together to produce a larger-scale operation.

Finally, the right-hand portion of the long-run average cost curve, running from output level Q_4 to Q_5 , shows a situation where, as the level of output and the scale rises, average costs rise as well. This situation is called **diseconomies of scale**. A firm or a factory can grow so large that it becomes very difficult to manage, resulting in unnecessarily high costs as many layers of management try to communicate with workers and with each other, and as failures to communicate lead to disruptions in the flow of work and materials. Not many overly large factories exist in the real world, because with their very high production costs, they are unable to compete for long against plants with lower average costs of production. However, in some planned economies, like the economy of the old Soviet Union, plants that were so large as to be grossly inefficient were able to continue operating for a long time because government economic planners protected them from competition and ensured that they would not make losses.

Diseconomies of scale can also be present across an entire firm, not just a large factory. The **leviathan effect** can hit firms that become too large to run efficiently, across the entirety of the enterprise. Firms that shrink their operations are often responding to finding itself in the diseconomies region, thus moving back to a lower average cost at a lower output level.

Visit this website to read an article about the complexity of the belief that banks can be “too-big-to-fail.”



Shifting Patterns of Long-Run Average Cost

New developments in production technology can shift the long-run average cost curve in ways that can alter the size distribution of firms in an industry.

For much of the twentieth century, the most common change has been to see alterations in technology, like the assembly line or the large department store, where large-scale producers seemed to gain an advantage over smaller ones. In the long-run average cost curve, the downward-sloping economies of scale portion of the curve stretched over a larger quantity of output.

However, new production technologies do not inevitably lead to a greater average size for firms. For example, in recent years some new technologies for generating electricity on a smaller scale have appeared. The traditional coal-burning electricity plants needed to produce 300 to 600 megawatts of power to exploit economies of scale fully. However, high-efficiency turbines to produce electricity from burning natural gas can produce electricity at a competitive price while producing a smaller quantity of 100 megawatts or less. These new technologies create the possibility for smaller companies or plants to generate electricity as efficiently as large ones. Another example of a technology-driven shift to smaller plants may be taking place in the tire industry. A traditional mid-size tire plant produces about six million tires per year. However, in 2000, the Italian company Pirelli introduced a new tire factory that uses many robots. The Pirelli tire plant produced only about one million tires per year, but did so at a lower average cost than a traditional mid-sized tire plant.

Controversy has simmered in recent years over whether the new information and communications technologies will lead to a larger or smaller size for firms. On one side, the new technology may make it easier for small firms to reach out beyond their local geographic area and find customers across a state, or the nation, or even across international boundaries. This factor might seem to predict a future with a larger number of small competitors. On the other side, perhaps the new information and communications technology will create “winner-take-all” markets where one large company will tend to command a large share of total sales, as Microsoft has done in the production of software for personal computers or Amazon has done in online bookselling. Moreover, improved information and

communication technologies might make it easier to manage many different plants and operations across the country or around the world, and thus encourage larger firms. This ongoing battle between the forces of smallness and largeness will be of great interest to economists, businesspeople, and policymakers.

Key Concepts and Summary

A production technology refers to a specific combination of labor, physical capital, and technology that makes up a particular method of production.

In the long run, firms can choose their production technology, and so all costs become variable costs. In making this choice, firms will try to substitute relatively inexpensive inputs for relatively expensive inputs where possible, so as to produce at the lowest possible long-run average cost.

Economies of scale refers to a situation where as the level of output increases, the average cost decreases. Constant returns to scale refers to a situation where average cost does not change as output increases. Diseconomies of scale refers to a situation where as output increases, average costs increase also.

The long-run average cost curve shows the lowest possible average cost of production, allowing all the inputs to production to vary so that the firm is choosing its production technology. A downward-sloping LRAC shows economies of scale; a flat LRAC shows constant returns to scale; an upward-sloping LRAC shows diseconomies of scale. If the long-run average cost curve has only one quantity produced that results in the lowest possible average cost, then all of the firms competing in an industry should be the same size. However, if the LRAC has a flat segment at the bottom, so that a range of different quantities can be produced at the lowest average cost, the firms competing in the industry will display a range of sizes. The market demand in conjunction with the long-run average cost curve determines how many firms will exist in a given industry.

If the quantity demanded in the market of a certain product is much greater than the quantity found at the bottom of the long-run average cost curve, where the cost of production is lowest, the market will have many firms competing. If the quantity demanded in the market is less than the quantity at the bottom of the LRAC, there will likely be only one firm.

Glossary

Constant Returns to Scale

expanding all inputs proportionately does not change the average cost of production

Diseconomies of Scale

the long-run average cost of producing each individual unit increases as total output increases

Long-Run Average Cost (LRAC) Curve

shows the lowest possible average cost of production, allowing all the inputs to production to vary so that the firm is choosing its production technology

Production Technologies

alternative methods of combining inputs to produce output

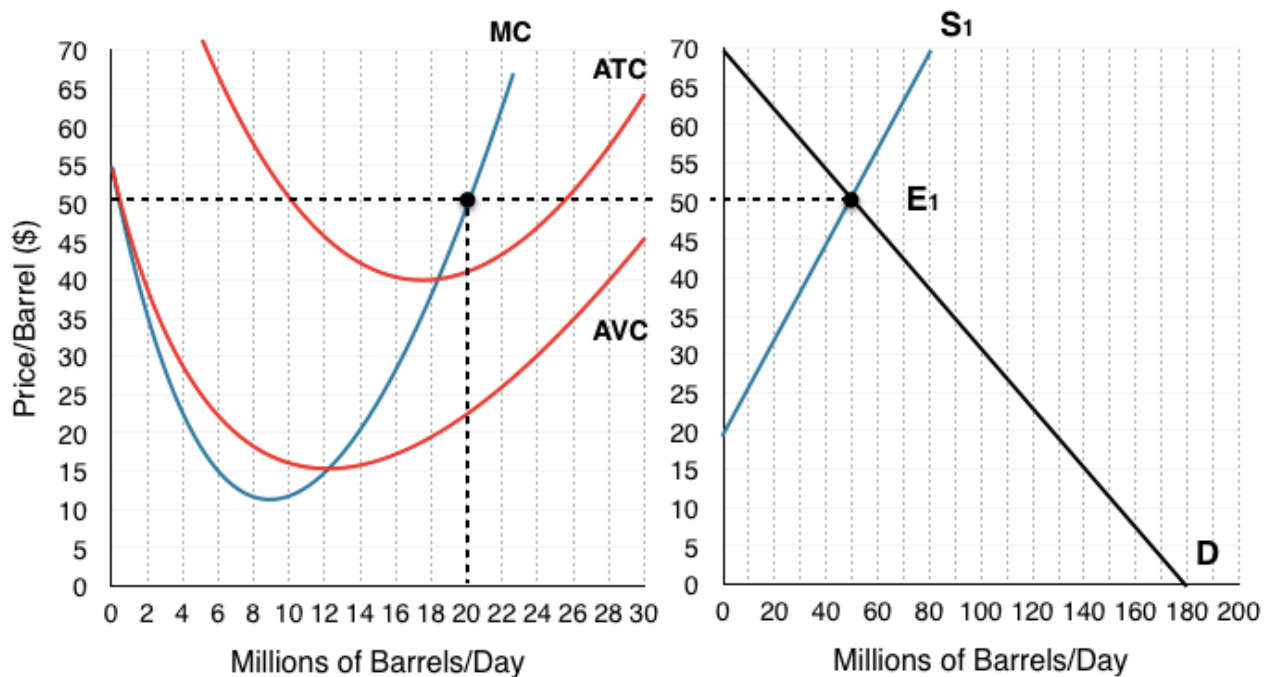
Short-Run Average Cost (SRAC) Curve

the average total cost curve in the short term; shows the total of the average fixed costs and the average variable costs

Solution: Case Study - Oil Markets

1. Consider the following producer theory model for a single firm producing oil, and the aggregate supply and demand. What is the firm's equilibrium price and quantity?

To find price, we look at the aggregate market, where supply = demand. In this case, we find the intersection, labeled E_1 , occurs at a quantity of 50 million barrels/day and a price of \$50/barrel.

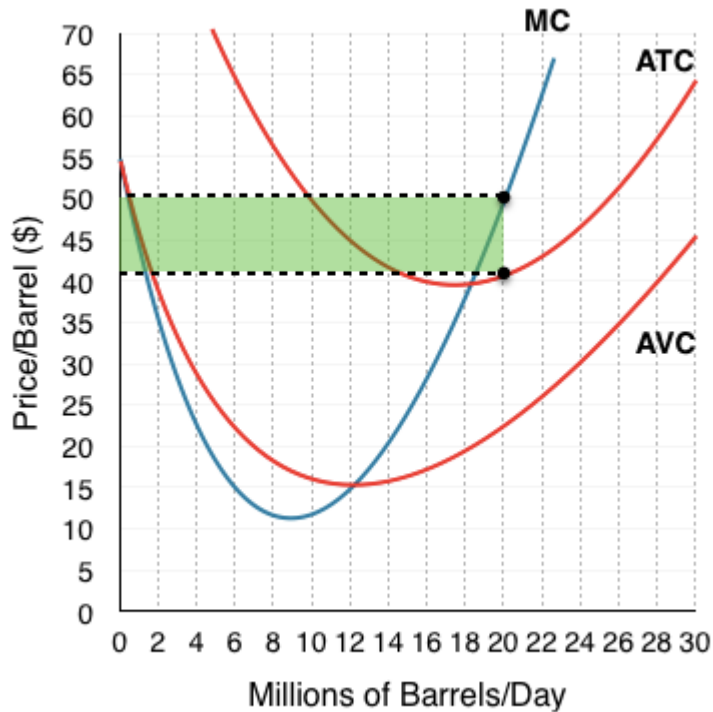


Remember that in order to maximize profits, the firm will produce until $MB = MC$. Since the market is perfectly competitive, $MB = MC$ when $P = MC$. This means we must find where our price of \$50 intersects our marginal cost curve. Looking at our producer theory diagram, we see that $P = MC$ when the individual firm is producing 20 million barrels/day.

This means our equilibrium price is \$50 and our equilibrium quantity is 20 million barrels/day.

2. What is the firm's profit at this level?

To find firms profits, calculate the area between Price and ATC shown in green. Since price is equal to the marginal revenue for the firm, this green area is the difference between TR ($P \cdot Q$) and TC ($ATC \cdot Q$).

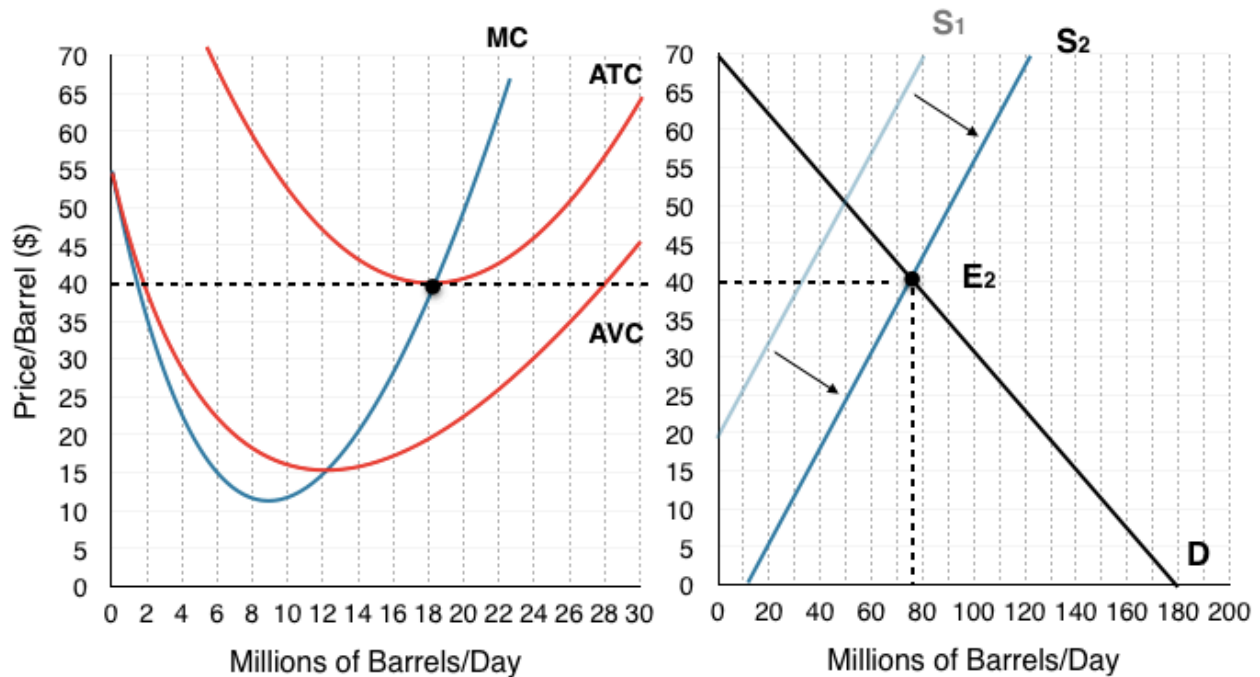


Since MR is \$50 and ATC is \$41, our firm is making \$9 in profit for each barrel of oil. This means that profits are equal to \$9 x 20 million barrels, or \$180 million.

3. What will occur in the long-run for this market? Show this on the new graph below.

The profits that this firm is making are unsustainable in the long-run, \$180 million is attractive to firms in similar industries and will cause entry.

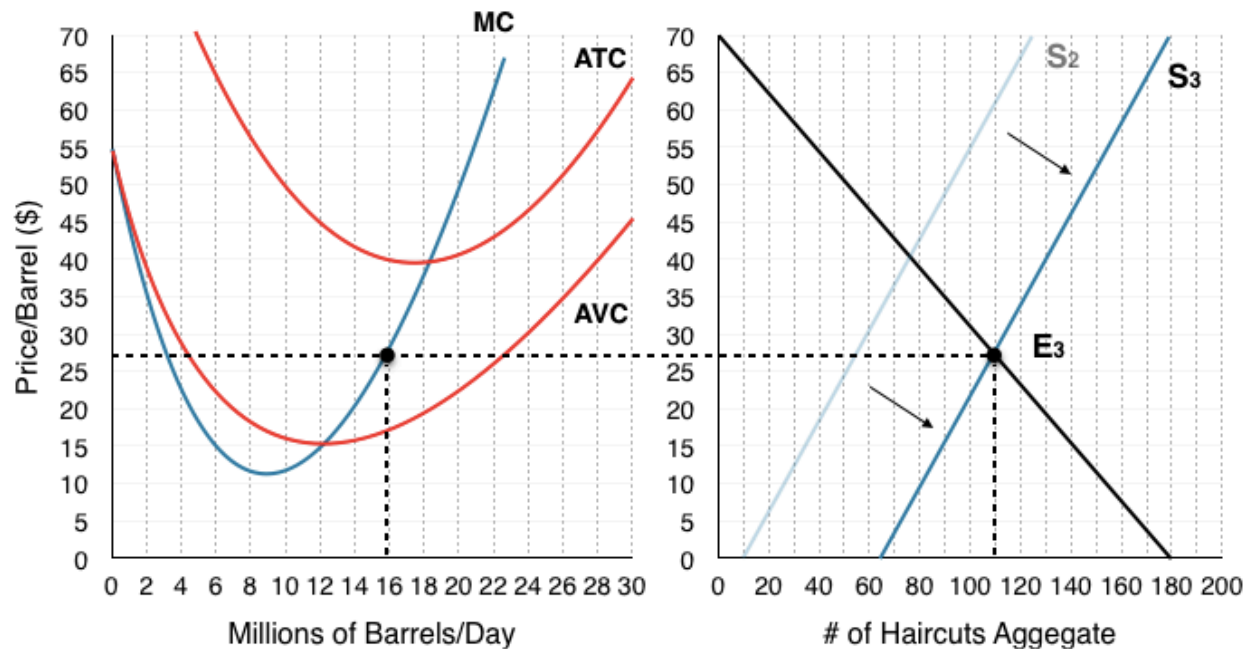
This will cause our supply curve to shift to S2, where price is equal to our firm's ATC. As long as $P > ATC$, our firm is making a profit and entry continues to occur. At the price of \$40, our firm is making 0 profits and the market is in long-run equilibrium.



While price fell for a variety of other reasons, the high price certainly incentivized the firms to expand operations, and as we saw in the article, this increase in the production indeed increases supply.

4. Assume the market is at long-run equilibrium. Use the producer theory model from above to show the impact of Iran's entry, assume this brings the market to a price of \$27. What is the new equilibrium price and quantity for the firm?

Iran's entry will again cause an increase in our supply curve, this time to S₃ where our equilibrium (E₃) occurs with a price of \$27, as specified.

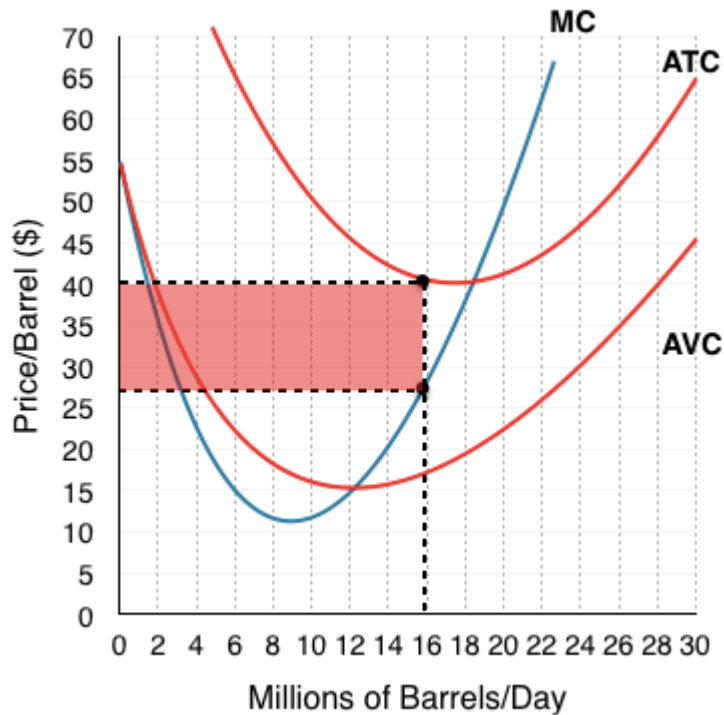


Again, since the market is perfectly competitive, $MB = MC$ when $P = MC$. Looking where \$27 intersects our MC curve, we find that firms will maximize profits by producing 16 million barrels of oil/day.

5. What are the firms profits at this price?

In this case, since $P < ATC$, the firm is making negative profits. In the diagram below, this is indicated by the red area. Since price is equal to the marginal revenue for the firm, this red area is the difference between $TR (P \cdot Q)$ and $TC (ATC \cdot Q)$.

Our total revenue is equal to \$27/barrel \times 16 million barrels, or \$432 million. Total cost is equal to \$40/barrel \times 16 million barrels, or \$640 million. The difference between total revenue and total cost is equal to -\$208 million.



6. What does this excerpt suggest about how firms will behave in the short run?

This excerpt hints that the price of \$27, while causing losses, is still well above the shut-down price of \$15 that would cause firms to shut-down. Since oil production requires considerable capital investment into digging wells, it makes sense that even when in aggregate you are losing money, you will continue to pump oil if you are covering your day-to-day operational costs.

This suggests that the firm will continue to operate in the short-term.

7. Based on the information given about this market, what do you think the time horizon will be for this industries 'long run'? What will happen in the long run?

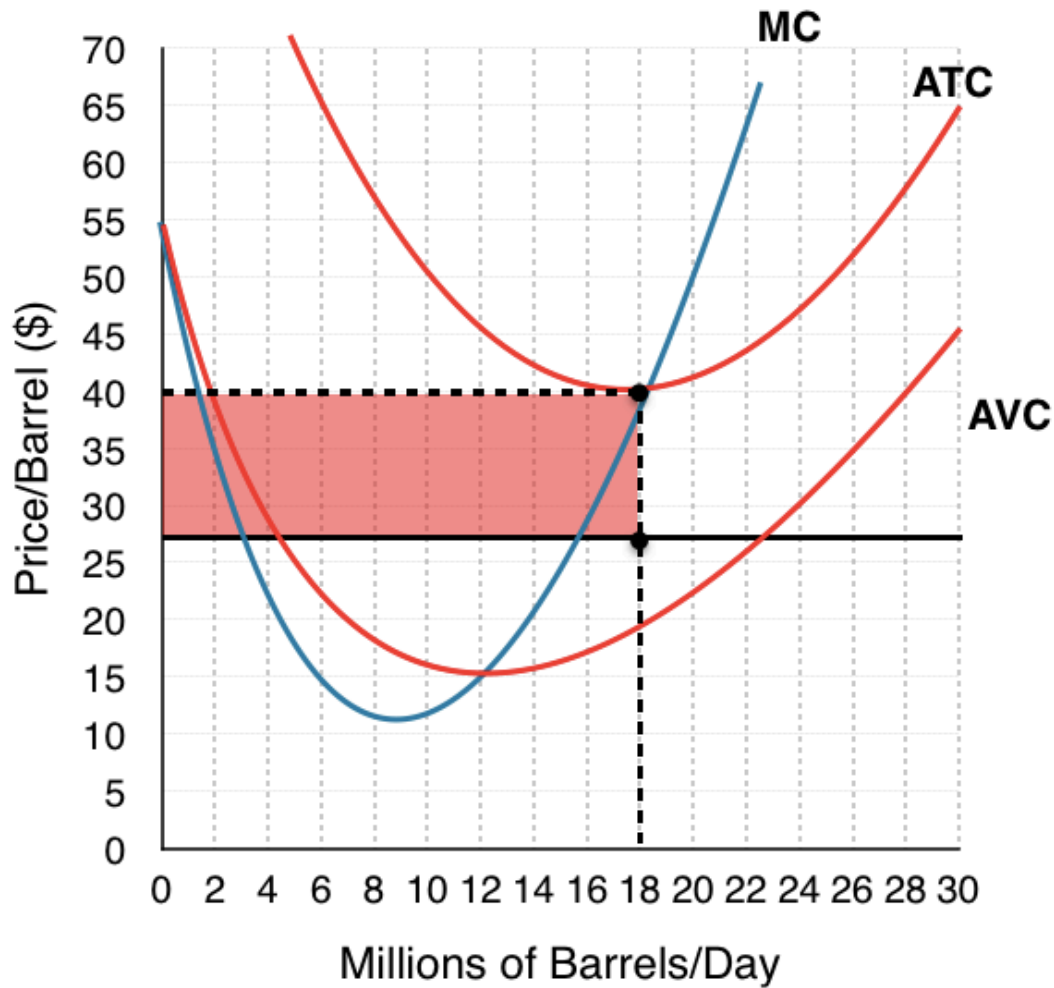
Based on the information about the market, you can make a good assumption that the time horizons for an oil firms fixed factor could be well over a few years. Oil wells are projects that take considerable time and resources to develop, and once built are basically used until they run dry. This means that a firm could continue to pump oil from wells for years after knowing that they will not fully recover their fixed costs.

In our model, this means that our supply curve will be slow to adjust to periods of high or low profits. Eventually, the curve will shift back to S_2 and profits will return to 0.

8. Comment on the effects of OPEC's actions on the market.

Normally when prices fall, firms adjust production in the short-run. Comparing the responses in question 3 and 4 you can see that the firm has decreased production from 18 million barrels/day to

16 million barrels to react to the price decrease, an OPEC pact to keep production high would stop that from happening.



Looking from the firm's perspective, we can calculate their new losses and find $(\$40 - \$27)(18) = \underline{-\$234 \text{ million}}$. The pact causes the firm to lose more money because they are operating where $MC > MR$. While this results in losses, the overproduction can have the effect of keeping out new entrants. In this case, it more likely led to further problems for the industry.

Topic 7 Solutions

Solutions to Exercises 7.1

1. **C**
2. **C**
3. **A**
4. **D**
5. **C**
6. **C**

Solutions to Exercises 7.2

1. **B**
2. **A**
3. **B**
4. **C**
5. **C**
6. **D**
7. **B**
8. **C**
9. **C**
10. **B**

Solutions to Exercises 7.3

1. **A**
2. **B**
3. **A**
4. **C**
5. **B**

- 6. **C**
- 7. **B**
- 8. **C**
- 9. **C**
- 10. **A**
- 11. **D**
- 12. **C**
- 13. **B**
- 14. **C**

Topic 7 References

The Economist. "Why the Oil Price is Falling." December 8, 2014. <http://www.economist.com/blogs/economist-explains/2014/12/economist-explains-4>

The Economist. "The Oil Conundrum." January 23, 2016. <http://www.economist.com/news/briefing/21688919-plunging-prices-have-neither-halted-oil-production-nor-stimulated-surge-global-growth>

History.com. "Model T." 2010. <http://www.history.com/topics/model-t>

Yergin, Daniel. *The Prize: The Epic Quest for Oil, Money & Power*. 1st ed. New York: Free Press, 2014. Print.

Topic 8: Imperfect Competition

Introduction to Imperfect Competition



In the mid-nineteenth century, the United States, specifically the Southern States, nearly had a monopoly in the cotton supplied to Great Britain. These states attempted to leverage this economic power into political power – trying to sway Great Britain to recognize the Confederate States of America. (Credit: AgriLife Today/ Flickr/ CC BY-NC-ND 2.0)

Monopolizing on History

Many of the case studies in this text have focused on current events, but let's step into the past to observe how monopoly, or near monopolies, have helped shape history. In the spring of 1773, the East India Company, a firm that, in its time, was designated “too big to fail,” was experiencing ongoing financial difficulties. To help shore up the failing firm, the British Parliament authorized the Tea Act. The act continued the tax on teas and made the East India Company the sole legal supplier of tea to the American colonies, giving them legal monopoly power. By November, the citizens of Boston had had enough. They refused to permit the tea to be unloaded, citing their main complaint: “No taxation without representation.” Arriving tea-bearing ships were warned via several newspapers, including *The Massachusetts Gazette*, “We are prepared, and shall not fail to pay them an unwelcome visit.”

The result? When the ships arrived, a group called the Sons of Liberty boarded them and threw their chests of tea into the sea. This was the culmination of a resistance movement throughout British America against the Tea Act. Ultimately this escalated to the American Revolutionary War in 1775.

Fast forward in time to 1860—the eve of the American Civil War—to another near-monopoly supplier of historical significance: the U.S. cotton industry. At the time, the Southern States provided the majority of the cotton Britain imported. Wanting to secede from the Union, the South hoped to leverage Britain's high dependency on its cotton into formal diplomatic recognition of the Confederate States of America.

Southern cotton-merchants spontaneously refused to ship out their cotton in early 1861. The strategy, now known as ‘King Cotton’ was relatively unsuccessful. By summer 1861, the Union Navy had blockaded every major Confederate port and shut down over 95% of exports, making it so they couldn't export Cotton if they wanted to. Britain was able to draw on stockpiles of cotton while finding imports from new sources, and the confederacy no longer received much needed gold.

Monopoly sellers often see no threats to their superior marketplace position. In the case of tea, the monopoly market structure was a key reason for social change. With Cotton, its power a military strategy. In this topic we will explore a range of market structures, each with unique attributes.

Topic Objectives

Topic 8: Imperfect Competition

In this Topic, you will learn about:

- How Monopolies form: Barriers to Entry
- How a Profit-Maximizing Monopoly Chooses Output and Price
- Monopolistic Competition

“Monopolizing on History” showed examples of markets that do not behave like perfect competition. Before thinking about different structures, remember our assumptions with perfect competition:

1. Products are Homogeneous

2. Buyers are Price-takers

3. Suppliers are Price takers

Since firms have no influence on the market price in a perfectly competitive market, $\text{price} = \text{marginal revenue}$, which is constant regardless of the production level. This means the firm produces where $\text{price} = \text{marginal cost}$.

In a competitive market, firms are unable to increase their prices above equilibrium without losing at least some customers. In reality, we know that this is often not the case. Clothing brands, for example, can sell items for much higher than what they cost to make, whereas other firms that are selling similar products at a lower price struggle to get by. This is in part due to the number of firms in a market and in a firm’s ability to distinguish its products from its competitors.

In reality, there is a spectrum of different market structures called the **Spectrum of Competition**.



Firms face different competitive situations. At one extreme—perfect competition—many firms are all trying to sell identical products. At the other extreme—monopoly—only one firm is selling the product, and this firm faces no competition. Monopolistic competition and oligopoly fall between the two extremes. Monopolistic competition is a situation with many firms selling similar, but not identical, products. Oligopoly is a situation with few firms that sell identical or similar products.

We analyzed perfect competition in depth in Topic 7. Now, let's view the other extreme and examine a firm's behaviour without competition.

8.1 Monopoly

Learning Objectives

By the end of this section, you will be able to:

- Understand the Marginal Revenue curve and its significance for a monopolist
- Describe how a monopoly chooses price and quantity
- Calculate the profits of a monopolist and explain why profits do not cause entry
- Explain why monopolies cause deadweight loss

Whereas perfect competition is a market where firms have no market power and they simply respond to the market price, a monopolistic market is one with no competition at all, and firms have complete market power. In the case of **monopoly**, one firm produces all of the output in a market. Since a monopoly faces no significant competition, it can charge any price it wishes. While a monopoly, by definition, refers to a single firm, in practice, the term is often used to describe a market in which one firm has a very high market share.

Even though there are very few true monopolies in existence, we deal with some every day, often without realizing it: your electric and garbage collection companies for example. Some new drugs are produced by only one pharmaceutical firm—and no close substitutes for that drug may exist.

While a monopoly must be concerned about whether consumers will purchase its products or spend their money on something altogether different, the monopolist need not worry about the actions of other firms. As a result, a monopoly is not a price taker like a perfectly competitive firm. Rather, it exercises power to choose its market price.

Competitive Market Recap

Below is Figure 7.3a to remind us how the competitive firm operates.

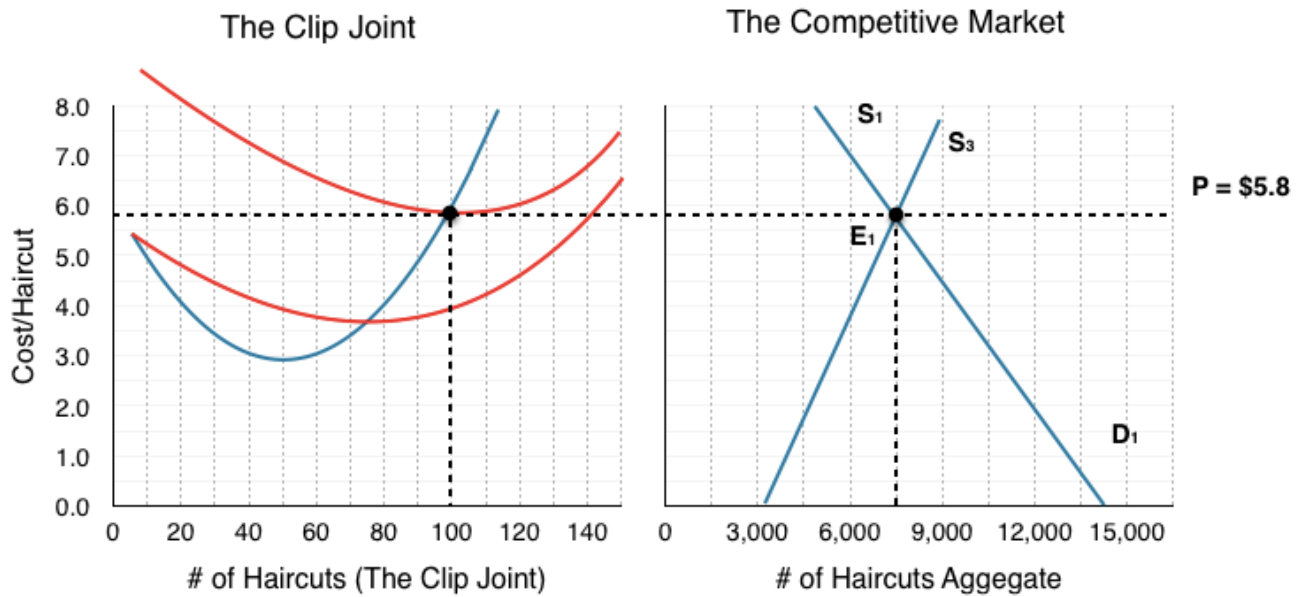


Figure 7.3a Reproduced

Notice in the competitive market, demand is downward sloping, but how does demand behave for the individual firm?

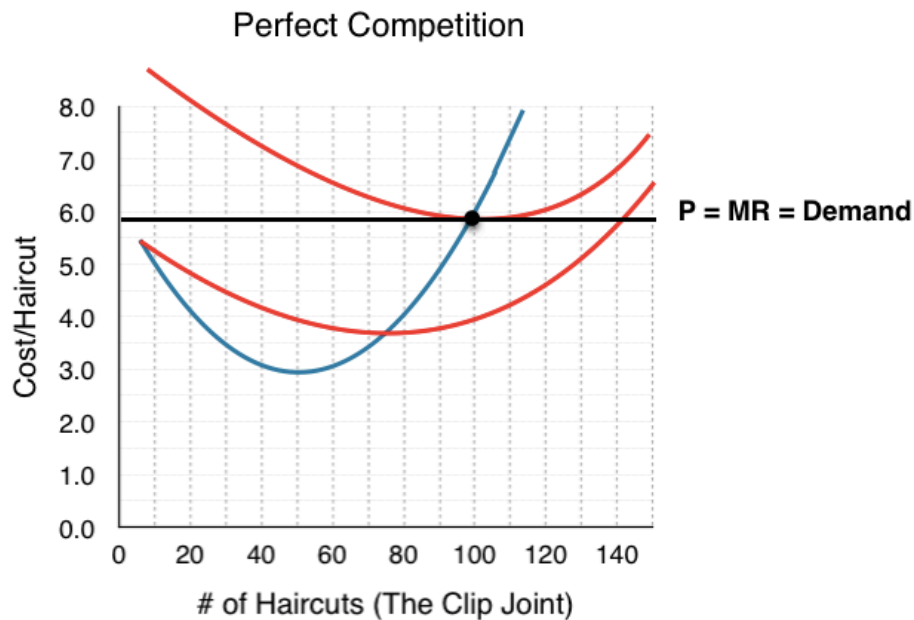


Figure 8.1a

In Figure 8.1a the competitive market for an individual firm is re-created. Since the firm cannot deviate from the market price dictated by aggregate supply and demand, they face an elastic demand curve. If they raise the price, they will sell no units; if they drop the price, they will sell an infinite amount of units. Why don't they drop price and sell more units? Remember that the firm produces where $P = MR$

= MC, so if they sell beyond this point, they are losing money. This brings the market to equilibrium at the break-even point, where ATC is minimized and profit = 0.

Single Price Monopoly

So we know a competitive market faces an elastic demand, what about a **single-priced monopoly**? This is distinct from other monopolies in that the firm must charge the same price to all consumers. In this case, the aggregate demand is the firm's demand! To explore monopoly, consider the sunglasses market. What do Oakley, Ray-Ban and Persol have in common? They are all owned by the same brand. That's right, Luxottica, an Italian based eyewear company, produces about 70% of all name brand eyewear. This is fairly close to a monopoly, as with that high of a market share, Luxottica dominates the market price. Notice that Luxottica is not a single price monopoly, as it practices a form of price discrimination by having multiple brands aimed at different consumers. Let's consider what would happen if Luxottica only sold one kind of sunglasses at the same price to all consumers, and if they owned 100% of the market.

Whereas the competitive firm was a small player in the aggregate market, the monopolist dictates both the final price and the quantity. If Luxottica decides to lower price, it must do so for ALL buyers. Consider what implications this has on revenue.

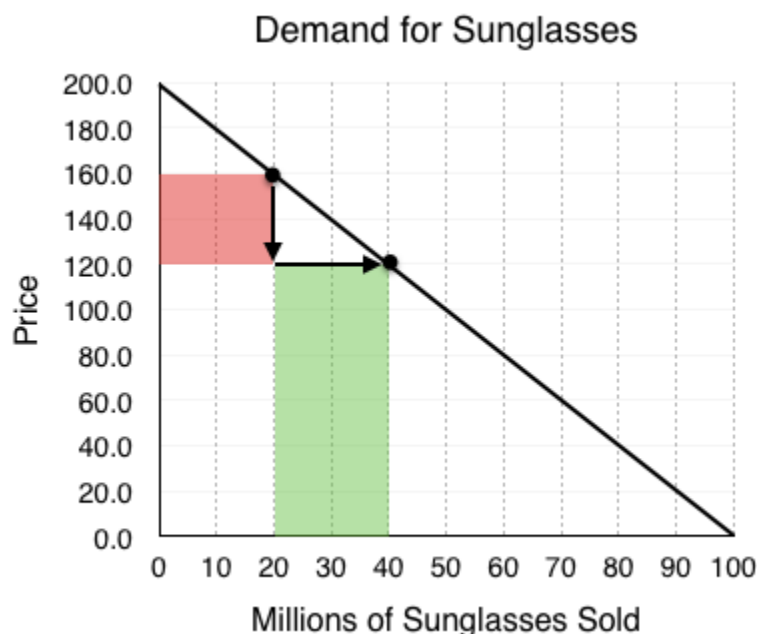


Figure 8.1b

In Figure 8.1b the global demand for sunglasses is shown. According to the law of demand, as price falls, quantity demanded increases. This means that Luxottica can increase revenue by lowering price, as they sell more sunglasses. This is not that happens from a price decrease however, as the firm decreases price it loses some of the revenue on the goods it was previously selling.

At point A, Luxottica is selling 20 million sunglasses at \$160 per pair. When it reduces the price to \$120, two things happen:

1. Luxottica loses \$40 on each of the 20 million sunglasses it was selling before. 20 million consumers were willing to pay the full \$160 for a pair, and now only have to pay \$120. This results in a **loss of \$800 million** for Luxottica. (shown as the red shaded region).
2. Luxottica gains \$120 on each of the 20 million new sunglasses it now sells. 20 million consumers were not willing to pay \$160 for a pair, but are willing to pay \$120. This results in a **gain of \$2.4 billion** for Luxottica (shown as the green shaded region).

These changes collectively represent a **net gain of \$1.6 billion** for Luxottica.

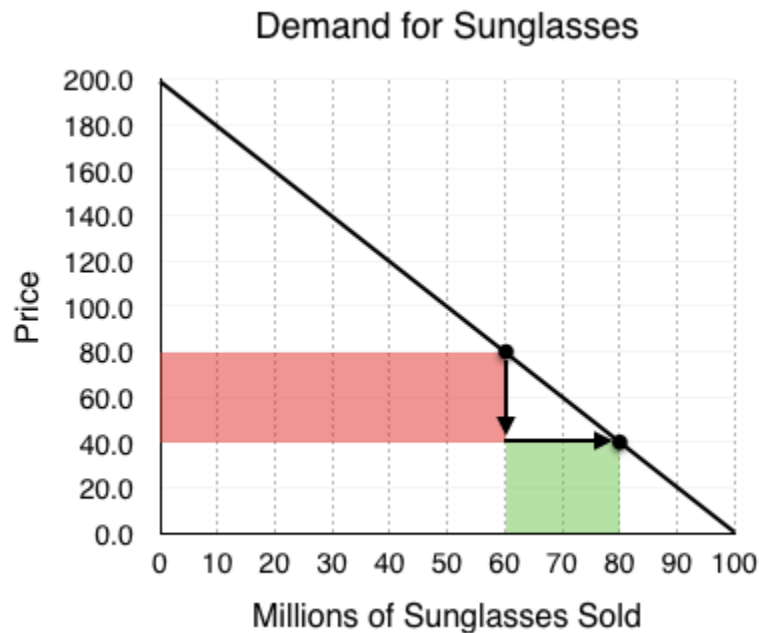


Figure 8.1c

For a monopoly, a price decrease doesn't always result in more revenue. When price is decreased, we have a loss in revenue from existing sales, and an increase in revenue from new sales. The more sales we are making, the greater the loss. Consider what happens when Luxottica drops prices when it is selling 60 million sunglasses.

At point A, Luxottica is selling 60 million sunglasses at \$80 per pair. When it reduces the price to \$40:

1. Luxottica loses \$40 on each of the 60 million sunglasses it was selling before. This results in a **loss of \$2.4 billion** for Luxottica.
2. Luxottica gains \$40 on each of the 20 million new sunglasses it now sells. This results in a **gain of \$80 billion** for Luxottica.

These changes collectively represent a **net loss of \$1.6 billion** for Luxottica.

Representing Revenue

As we can see, finding where price = MC would no longer be a good metric for where we should produce, since we also want to take into account the affect price changes have on revenue. While the above analysis seems rather random, we can systematically represent the changes in revenue from a decrease in price – in fact, we already have! In Topic 4, we explored how the elasticity at different points along a demand curve affected the changes in revenue.

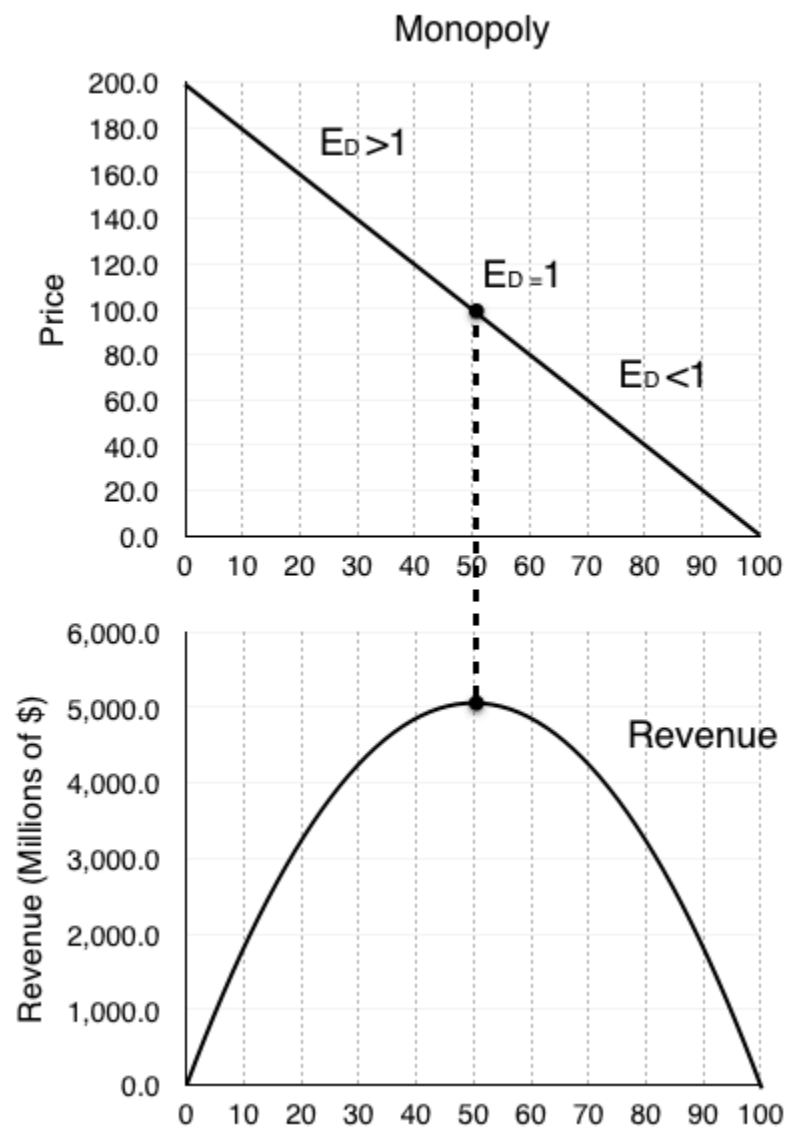


Figure 8.1d

Remember, the equation to calculate elasticity is ($\%$ change in quantity/ $\%$ change in price). Looking at the two changes in revenue from the examples above, we can see that the *decrease* in revenue came from the *price change*, and the *increase* came from the *quantity change*. This means that when $\%$ change in quantity $>$ $\%$ change in price, our revenue increases from a price drop! Put simply, when our $E_D > 1$,

we should continue to decrease price, maximizing our revenue. If $E_D < 1$, we have gone too far and can increase revenue by increasing price!

So, does this mean Luxottica will produce 50 million pairs of sunglasses, charge \$100 per unit and call it a day? Not necessarily. While that would maximize revenue, remember that it doesn't matter if revenue is rising if costs are rising by more. To find where we produce, we must find the point where marginal revenue = marginal cost.

Marginal Revenue

The amount that our revenue changes from an increase in quantity is called **Marginal Revenue** and can be represented alongside our demand curve. When $E_D > 1$, $MR > 0$ since an increase in quantity will increase revenue. Conversely, When $E_D < 1$, $MR < 0$ since an increase in quantity will decrease revenue.

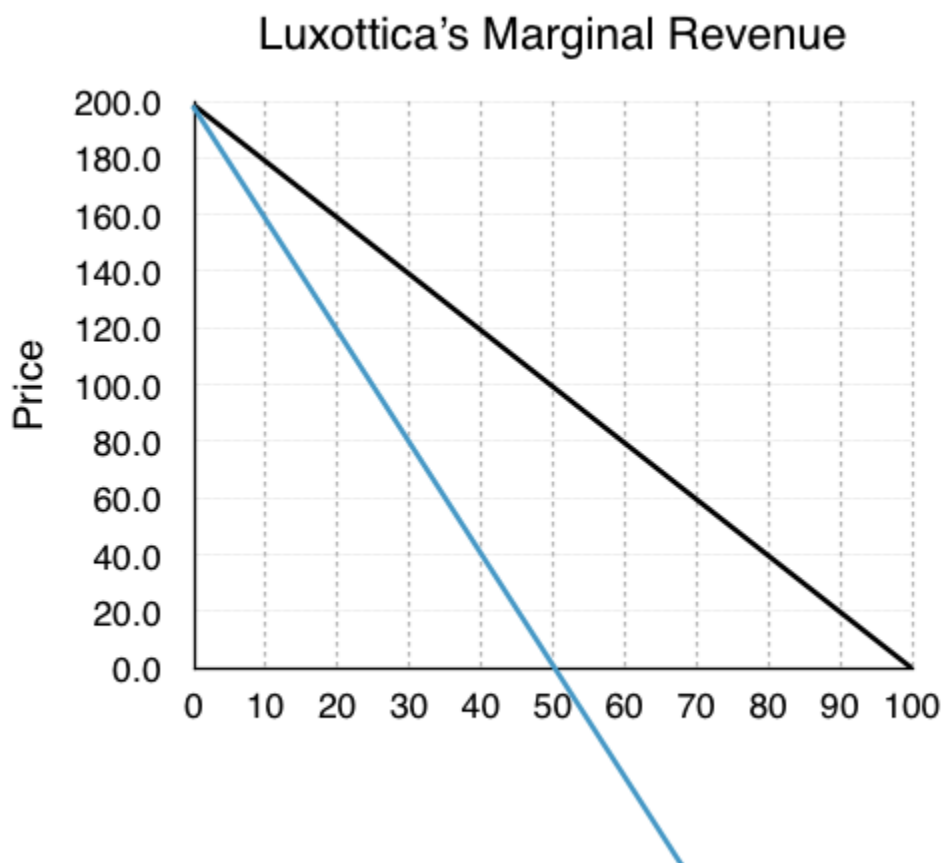


Figure 8.1e

Since $E_D = 1$ at the midpoint of a linear demand function, MR will always intercept the x-axis at $Q_{MAX}/2$, in this case at $x=50$. The key to this analysis is that whereas for the competitive firm $P = MR$, for a monopoly, $P > MR$.

Monopoly Behaviour

So what price will Luxottica charge? Adding its marginal cost to the graph, we can see that $MC = MR$ at 30 million Sunglasses. At any quantity below this, $MR > MC$ meaning Luxottica can increase profits by increasing production.

MR and MC intersect where $P = \$80$, will this be the market price? At 30 million sunglasses sold, consumers are willing to pay \$140 per pair. Luxottica knows this and will charge as high as it can. This means the market price will be \$140.

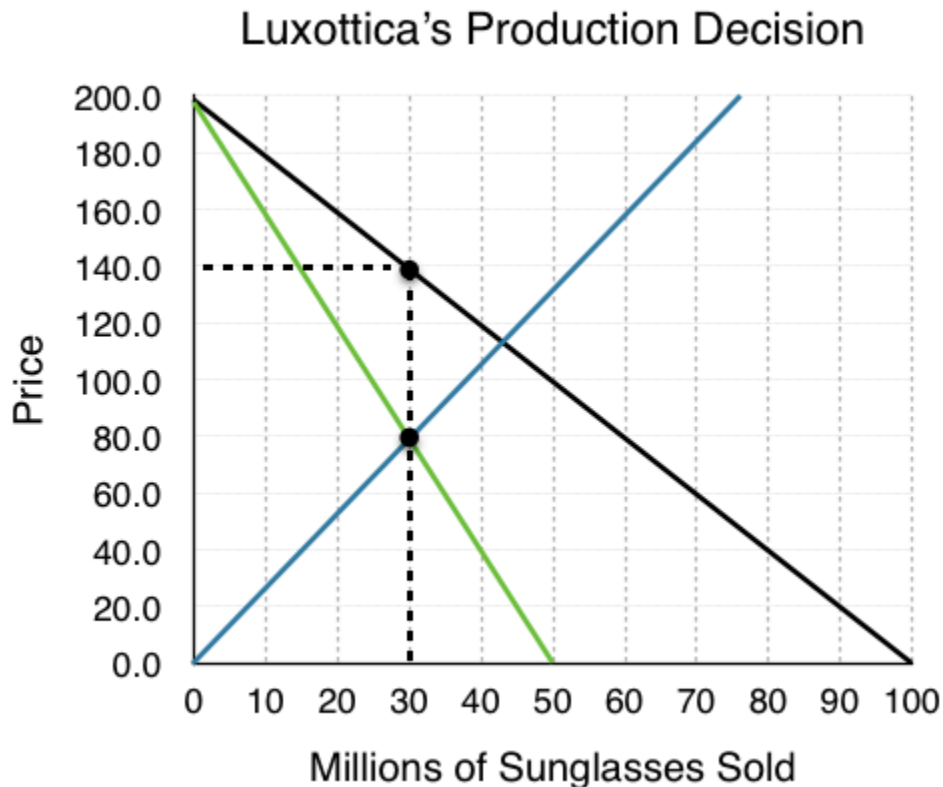


Figure 8.1f

This behaviour is standard for a monopolist. Operate at the quantity where $MC = MR$, and charge a price equal to the consumers willingness to pay.

Market Surplus

In earlier topics, a key metric we analyzed was market/social surplus, which showed how government intervention can cause deadweight loss or correct the loss from externalities, etc. In this case, we want to see if a monopoly is as efficient as perfect competition. Recall our rule that differences in *prices* from equilibrium cause *transfers* and differences in *quantity* from equilibrium cause *deadweight loss*. Make a prediction as to how the monopoly market will affect efficiency.

Competitive Market

As a point of comparison, consider how this market would behave under perfect competition. Our equilibrium would be where MB (demand) = MC (supply). $P_E = \$116$, $Q_E = 42$ million.

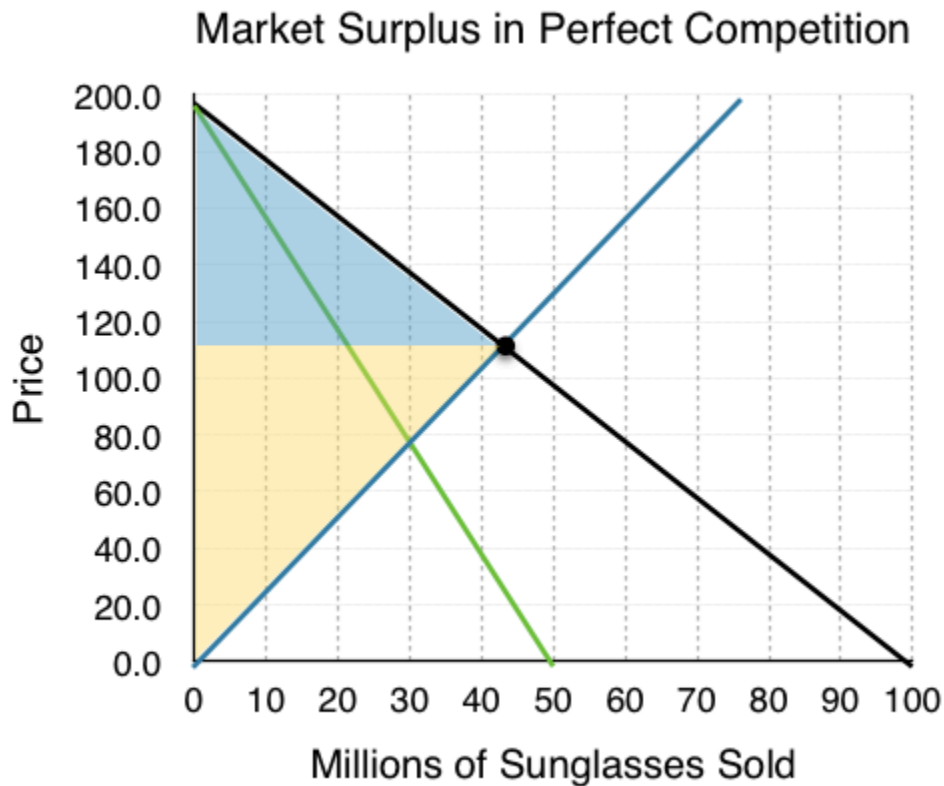


Figure 8.1g

Calculating market surplus:

Consumer Surplus = \$1.764 billion

Blue shaded region.

$$[(\$200 - \$116) \times (42)] / 2 = 1.764 \text{ billion}$$

Producer Surplus = \$2.436 billion

Yellow shaded region.

$$[(\$116) \times (42)] / 2 = 2.436 \text{ billion}$$

Market Surplus = \$4.2 billion

Monopoly Market

In comparison, the monopoly market has $P_E = \$140$ and $Q_E = 30$ million.

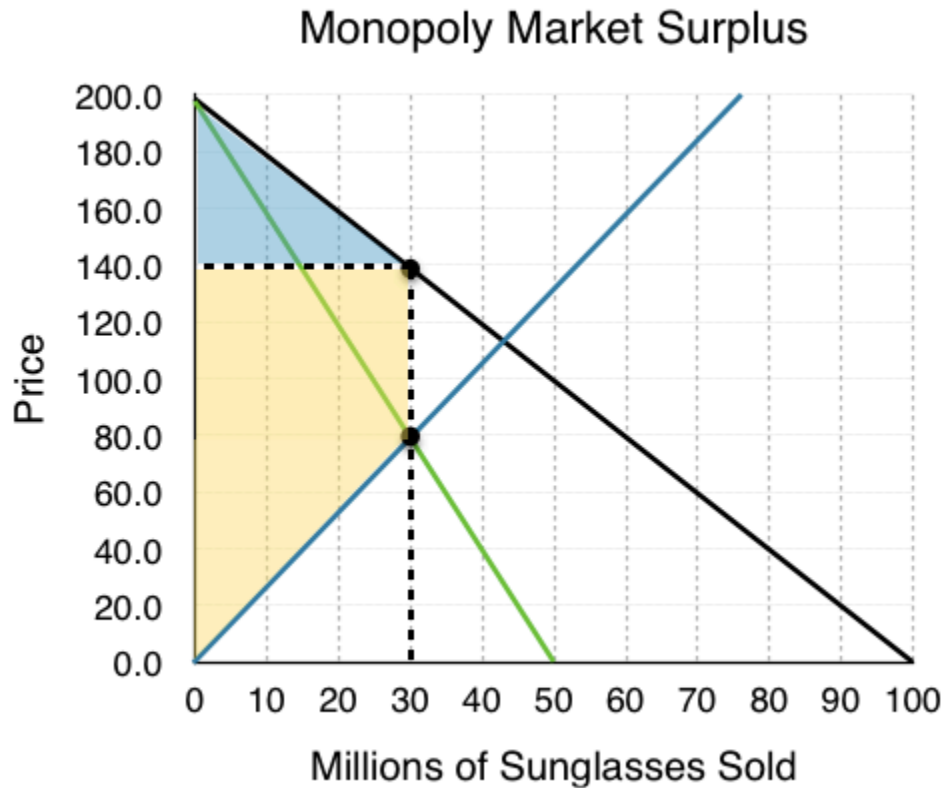


Figure 8.1h

Calculating market surplus:

Consumer Surplus = \$900 million

Blue shaded region.

$$[(\$200 - \$140) \times (30)] / 2 = 900 \text{ million}$$

Notice consumer surplus decreased for two reasons. First, 12 million consumers are no longer willing to pay for the sunglasses (this quantity change will be part of the deadweight loss). Second, the 30 million consumers who still buy sunglasses now have to pay \$60 more (the transfer from consumers to producers).

Producer Surplus = \$3.0 billion

Yellow shaded region.

$$[(\$140 - \$80) \times (30)] + [(\$80) \times (30)] / 2 = 3 \text{ billion}$$

There are two changes to producer surplus with opposite effects. First, since 12 million consumers are no longer willing to buy the goods, Luxottica sells 12 million fewer sunglasses (this loss in surplus is the other piece of the deadweight loss). However, the \$60 increase in price on the 30 million units it still sells more than compensates for the loss.

$$\text{Market Surplus} = \$3.9 \text{ billion}$$

Deadweight Loss from Monopoly

Remember that it is inefficient when there are potential Pareto improvements. In other words, if an action can be taken where the gains outweigh the losses, and by compensating the losers everyone could be made better off, then there is a deadweight loss. When we move from a monopoly market to a competitive one, market surplus increases by \$1.2 billion. This means that the monopoly causes a \$1.2 billion deadweight loss.



Figure 8.1i

Remember that deadweight loss is only a result in deviations from the equilibrium *quantity*. Between 30 million sunglasses and 42 million sunglasses, consumers are willing to pay more than the firm's marginal cost, so $MB > MC$. Since the monopolist is unwilling lower its price to increase output (and lose revenue from its pre-existing sales), the deadweight loss persists.

The red shaded region in Figure 8.1i is a measure of the loss to society from having monopoly rather than competition.

Glossary

Marginal Revenue

The increase in revenue resulting from a marginal increase in quantity

Monopoly

a situation in which one firm produces all of the output in a market

Single-priced Monopoly

a monopolist that can only charge one price

Exercises 8.1

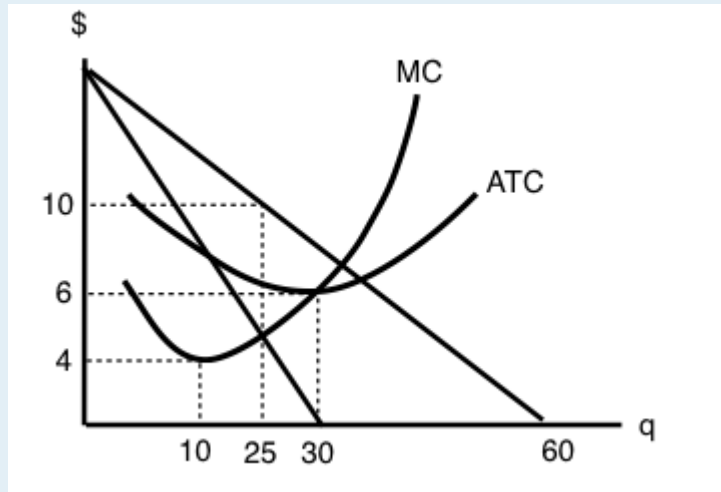
1. Which of the following statements about a single-price monopoly is FALSE?

- a) The monopolist will never charge a price on the inelastic portion of the demand curve.
- b) Marginal revenue equals marginal cost at the profit-maximizing level of output.
- c) Price equals marginal cost at the profit-maximizing level of output.
- d) Marginal revenue is less than price, since the monopolist must lower its price to all consumers to sell an additional unit of output.

2. Suppose that at a monopolist's current output choice, marginal cost equals price. Which of the following statements is TRUE?

- a) The monopolist is currently maximizing profits.
- b) The monopolist should produce more output to maximize profits.
- c) The monopolist should produce less output to maximize profits.
- d) We do not have enough information to know whether or not the monopolist is maximizing profits.

3. Refer to the diagram below, which illustrates the demand, marginal revenue, and marginal cost curves for a single-price monopolist.



The profit-maximizing price and quantity for this monopolist are:

- a) $P = \$4$, $Q = 60$.
- b) $P = \$6$, $Q = 60$.
- c) $P = \$4$, $Q = 30$.
- d) $P = \$10$, $Q = 25$.

8.2 Fixing Monopoly

Learning Objectives

By the end of this section, you will be able to:

- Explain how Price Discrimination can correct market failure
- Suggest government policies to remove the deadweight loss associated with monopoly

In Topic 4, we learned about the different government policies that can change quantity (in those cases resulting in a deadweight loss) and showed how these can be helpful to correct failures due to externalities. Now, we will apply those concepts to see how we can correct monopolies.

Price Discrimination

Before looking at how policy can be used to correct a monopoly, let's first consider a simpler solution. In the last section, we introduced a single price monopoly, saying that the monopolist must charge the same price to all consumers. In reality, monopolists tend to practice **price discrimination** meaning they charge a different price to different consumers, with the aim of charging the maximum of each consumer's willingness to pay.

This is seen in practice in many different ways. The most common is price discrimination based on demographics. Discounts for seniors or children who are willing to pay less for the good allow the monopolist to still capture revenue from these consumers. Companies may also create slightly different offerings or brands to appeal to different crowds. Luxottica, for example, sells higher priced Ray-Bans to cater to a more fashion-conscious crowd, and Oakley caters to consumers who care more about functionality. Let's look at how the different price points affect market surplus.

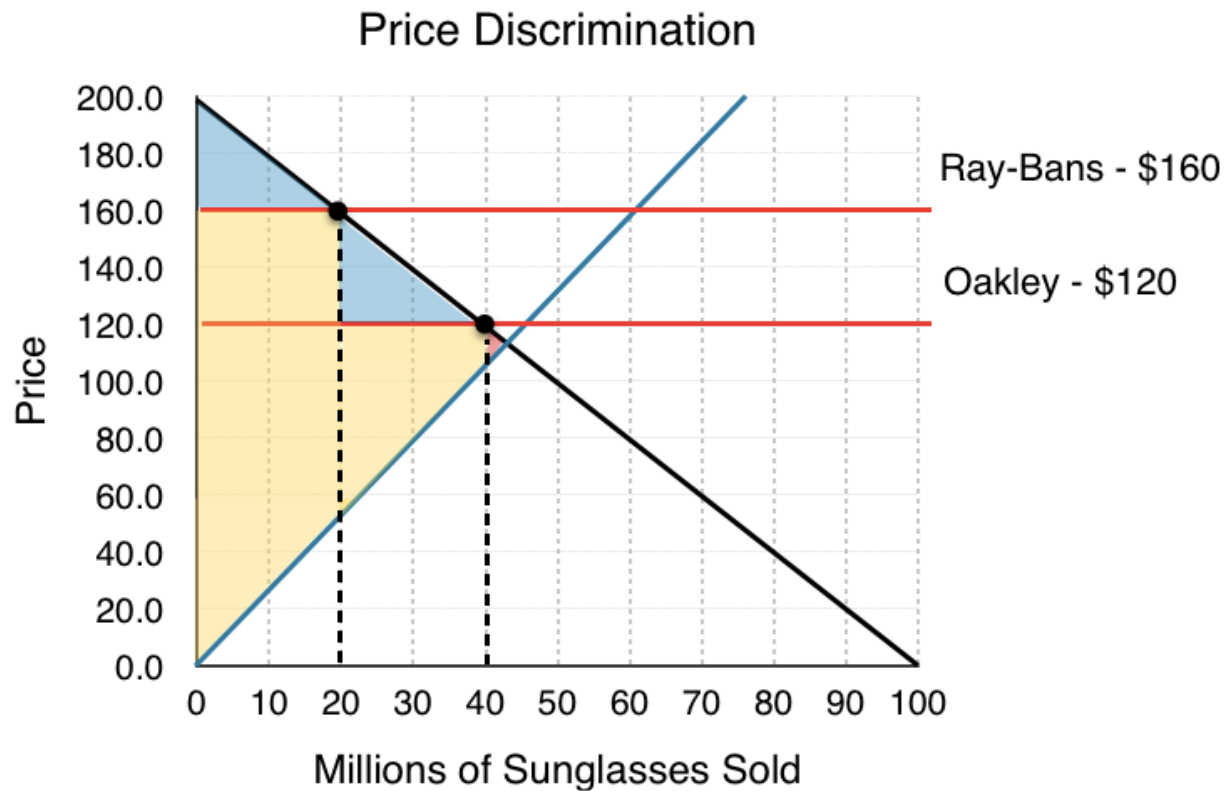


Figure 8.2a

In this situation, Luxottica sells sunglasses at two different prices: Ray-Bans at \$160 and Oakleys at \$120. Notice the effect this has on producer surplus. Whereas at \$140 Luxottica sold 30 million units, at the two prices it can sell 40 million, and the average price of the sunglasses is still \$140 million. This benefits some consumers who can purchase sunglasses at the lower cost but hurts some who now have to pay a higher price. The deadweight loss has shrunk considerably.

Can we ever remove the deadweight loss entirely? For the producer, this would be preferred as the more it can differentiate prices, the more surplus it receives. Consider a case where the producer can charge the exact willingness to pay of each consumer, a **perfect price discrimination**.

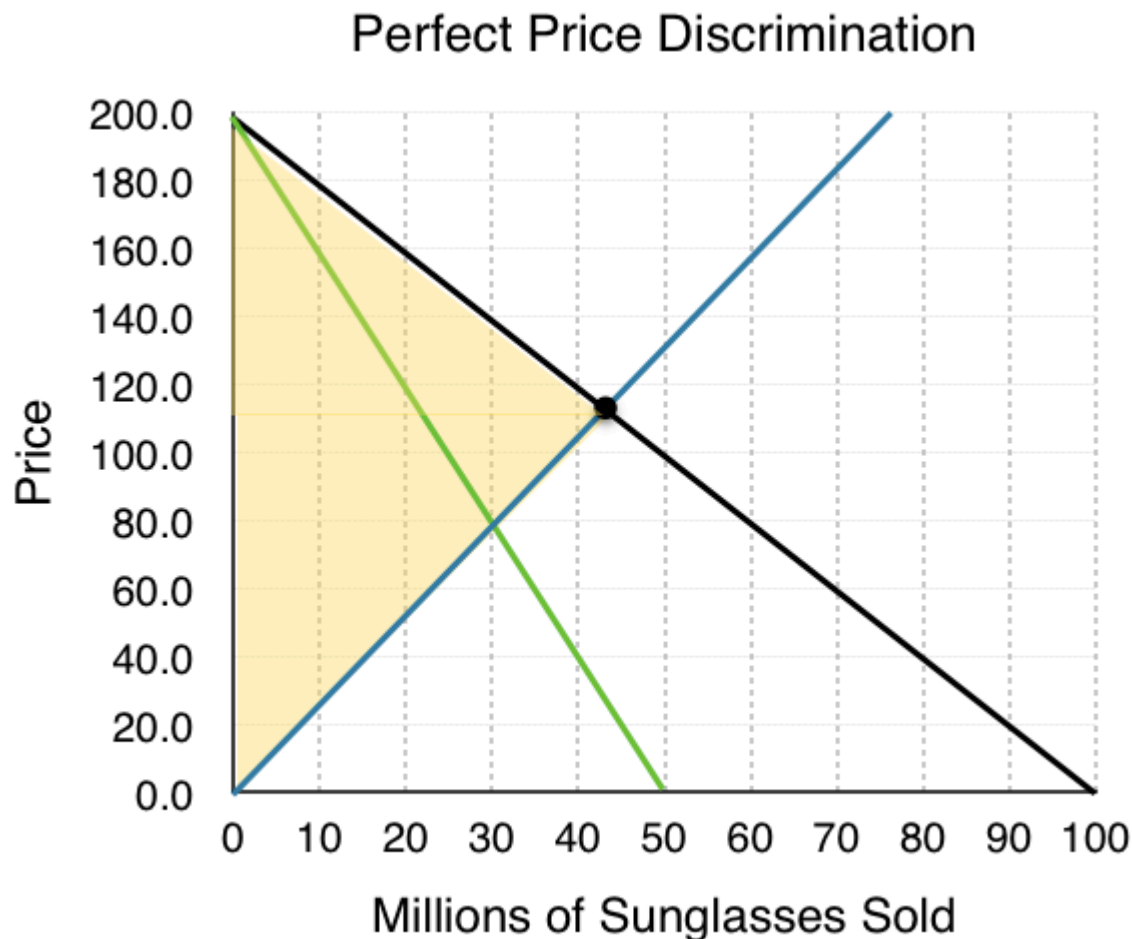


Figure 8.2b

As we can see, the deadweight loss has been completely negated, but so has consumer surplus. The monopolist ultimately aims for this situation but is often prohibited from doing so by the difficulty of breaking consumers into segments, government regulation, and more. For a monopoly, we will assume from now on that monopolists can only charge one price.

Government Policy & Monopoly

How can the government correct a monopoly? Remember that to correct the deadweight loss and return to an efficient outcome, we must return Q_E to 42 million sunglasses. This means that we need a policy that will increase quantity. Taxes and price floors, in this case, would decrease quantity, so they will be ineffective. A subsidy would be difficult to implement. Even though it would increase market surplus, it would have the interesting effect of giving the monopolist, who is already charging consumers more than the competitive equilibrium price, more revenue.

This leaves us with a price ceiling, which can be fairly effective in removing deadweight loss. In the figure below, we have included the ATC to give a more in-depth picture of how the monopolist behaves.

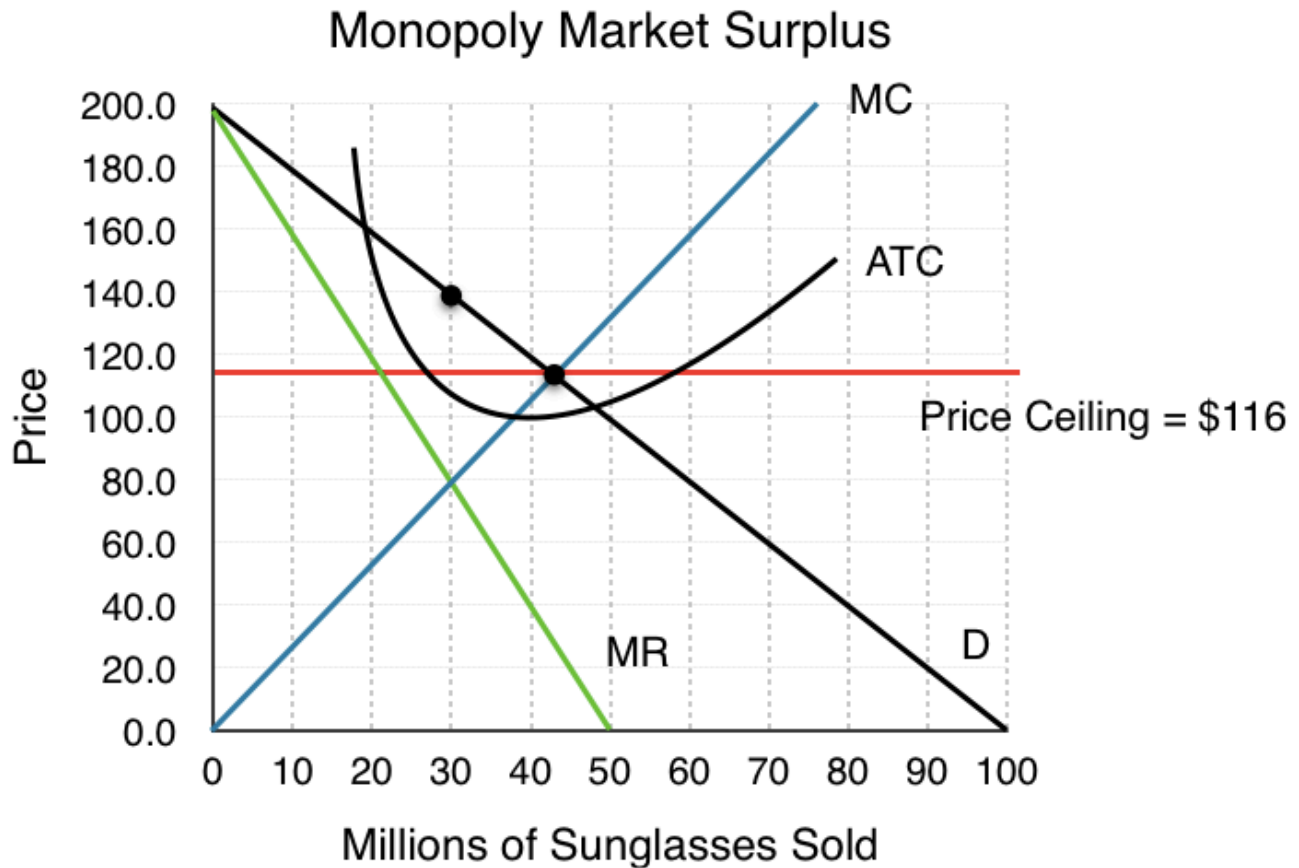


Figure 8.2c

A binding price floor at \$116 would indeed remove the DWL and bring the market almost back to a competitive equilibrium, but with one key difference. In this equilibrium, ATC is not minimized. Why does this matter if there is no DWL? If the market became open to competition, firms entering the market would cause each demand to shift inwards and would cause aggregate MC to fall as firms were able to take advantage of a lower ATC. This would bring the price down and make consumers better off. The result is that even with market correction, the market equilibrium is still too small.

Glossary

Perfect Price Discrimination

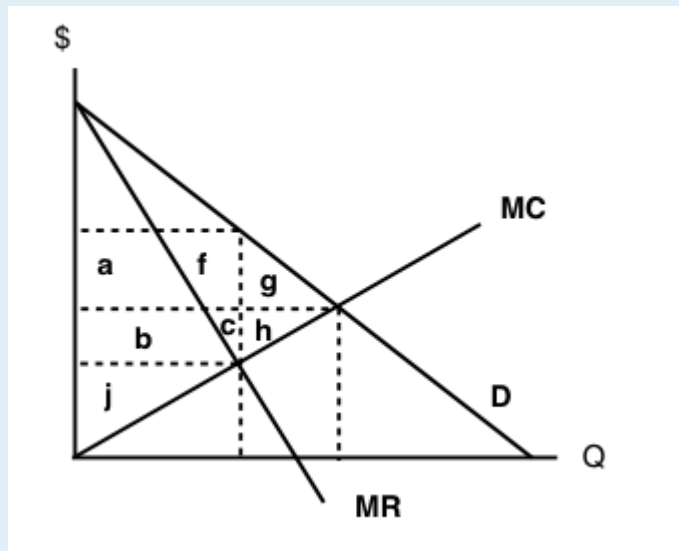
the action of selling the same product at a different price to each consumer, equal to their maximum willingness to pay

Price Discrimination

the action of selling the same product at different price to maximize profits

Exercises 8.2

The following TWO questions refer to the diagram below, which illustrates the demand, marginal revenue, and marginal cost curves for a profit-maximizing single-price monopolist.



1. Which area represents the deadweight loss due to the monopoly?

- a) $g + h$.
- b) $f + g$.
- c) $f + c$.
- d) $f + g + c + h$.

2. Which area represents the monopolist's producer surplus?

- a) $a + b + f$.
- b) $a + b + f + c$.
- c) $a + b + f + c + j$.
- d) $a + b + j$.

8.3 Why Monopolies Persist

Learning Objectives

By the end of this section, you will be able to:

- Distinguish between a natural monopoly and a legal monopoly.
- Explain how economies of scale and the control of natural resources led to the necessary formation of legal monopolies
- Analyze the importance of trademarks and patents in promoting innovation

Because of the lack of competition, monopolies tend to earn significant economic profits. These profits should attract vigorous competition as described in Perfect Competition, and yet, because of one particular characteristic of monopolies, they do not. **Barriers to entry** are the legal, technological, or market forces that discourage or prevent potential competitors from entering a market. Barriers to entry can range from the simple and easily surmountable, such as the cost of renting retail space, to the extremely restrictive. For example, there are a finite number of radio frequencies available for broadcasting. Once the rights to all of them have been purchased, no new competitors can enter the market.

In some cases, barriers to entry may lead to monopoly. In other cases, they may limit competition to a few firms. Barriers may block entry even if the firm or firms currently in the market are earning profits. Thus, in markets with significant barriers to entry, it is *not* true that abnormally high profits will attract new firms, and that this entry of new firms will eventually cause the price to decline so that surviving firms earn only a normal level of profit in the long run.

There are two types of monopoly, based on the types of barriers to entry they exploit. One is a **natural monopoly**, where the barriers to entry are something other than legal prohibition. The other is a **legal monopoly**, where laws prohibit (or severely limit) competition.

Natural Monopoly

Economies of scale can combine with the size of the market to limit competition. Figure 8.3a presents a long-run average cost curve for the airplane manufacturing industry. It shows economies of scale up to an output of 8,000 planes per year and a price of P_0 , then constant returns to scale from 8,000 to 20,000 planes per year, and diseconomies of scale at a quantity of production greater than 20,000 planes per year.

Now consider the market demand curve in the diagram, which intersects the long-run average cost (LRAC) curve at an output level of 6,000 planes per year and at a price P_1 , which is higher than P_0 . In this situation, the market has room for only one producer. If a second firm attempts to enter the market at

a smaller size, say by producing a quantity of 4,000 planes, then its average costs will be higher than the existing firm, and it will be unable to compete. If the second firm attempts to enter the market at a larger size, like 8,000 planes per year, then it could produce at a lower average cost—but it could not sell all 8,000 planes that it produced because of insufficient demand in the market.

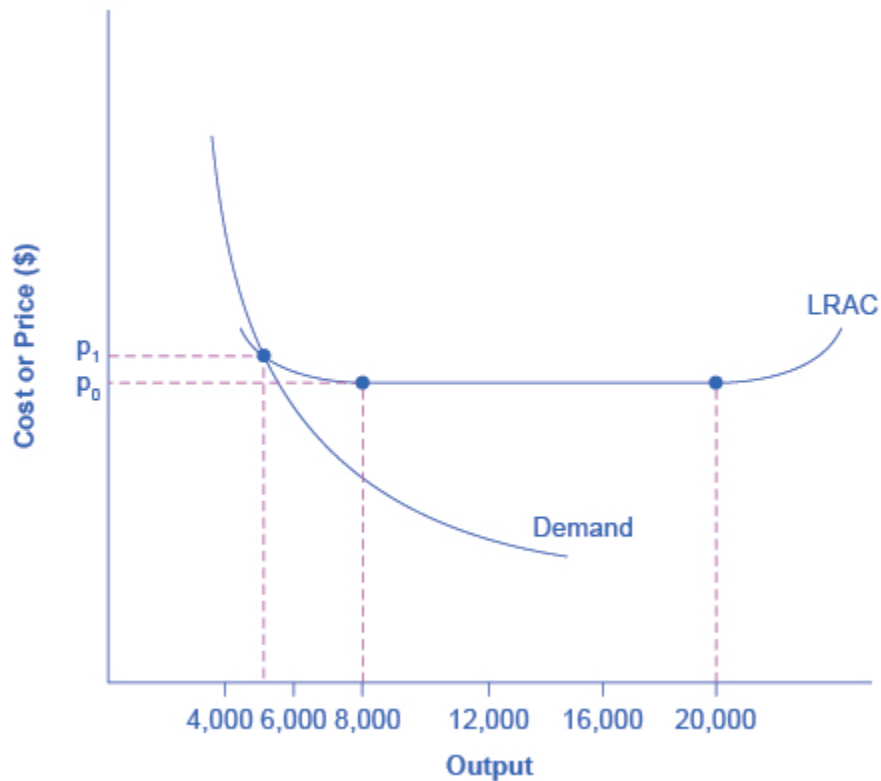


Figure 8.3a. *Economies of Scale and Natural Monopoly.* In this market, the demand curve intersects the long-run average cost (LRAC) curve at its downward-sloping part. A natural monopoly occurs when the quantity demanded is less than the minimum quantity it takes to be at the bottom of the long-run average cost curve.

This situation, when economies of scale are large relative to the quantity demanded in the market, is called a natural monopoly. Natural monopolies often arise in industries where the marginal cost of adding an additional customer is very low, once the fixed costs of the overall system are in place. Once the main water pipes are laid through a neighborhood, the marginal cost of providing water service to another home is fairly low. Once electricity lines are installed through a neighborhood, the marginal cost of providing additional electrical service to one more home is very low. It would be costly and duplicative for a second water company to enter the market and invest in a whole second set of main water pipes, or for a second electricity company to enter the market and invest in a whole new set of electrical wires. These industries offer an example where, because of economies of scale, one producer can serve the entire market more efficiently than a number of smaller producers that would need to make duplicate physical capital investments.

A natural monopoly can also arise in smaller local markets for products that are difficult to transport. For example, cement production exhibits economies of scale, and the quantity of cement demanded in a local area may not be much larger than what a single plant can produce. Moreover, the costs of transporting cement over land are high, and so a cement plant in an area without access to water transportation may be a natural monopoly.

Control of a Physical Resource

Another type of natural monopoly occurs when a company has control of a scarce physical resource. In the U.S., one historical example of this pattern occurred when the Aluminum Company of America (ALCOA) controlled most of the supply of bauxite, a key mineral used in making aluminum. Back in the 1930s, when ALCOA controlled most of the bauxite, other firms were simply unable to produce enough aluminum to compete.

As another example, the majority of global diamond production is controlled by DeBeers, a multinational company that has mining and production operations in South Africa, Botswana, Namibia, and Canada. It also has exploration activities on four continents, while directing a worldwide distribution network of rough cut diamonds. Though in recent years they have experienced growing competition, their impact on the rough diamond market is still considerable.

Legal Monopoly

For some products, the government erects barriers to entry by prohibiting or limiting competition. Under U.S. law, no organization but the U.S. Postal Service is legally allowed to deliver first-class mail. Many states or cities have laws or regulations that allow households a choice of only one electric company, one water company, and one company to pick up their garbage. Most legal monopolies are considered utilities – products necessary for everyday life – that are socially beneficial to have. As a consequence, the government allows producers to become regulated monopolies to ensure that an appropriate amount of these products is provided to consumers. Additionally, legal monopolies are often subject to economies of scale, so it makes sense to allow only one provider.

Promoting Innovation

Innovation takes time and resources to achieve. Suppose a company invests in research and development and finds the cure for the common cold. In this world of near- ubiquitous information, other companies could take the formula, produce the drug, and because they did not incur the costs of research and development (R&D), undercut the price of the company that discovered the drug. Given this possibility, many firms would choose not to invest in R&D, and as a result, the world would have less innovation.

To prevent this from happening, the patent act was created in Canada as a part of the British North America Act in 1869. A **patent** gives the inventor the exclusive legal right to make, use, or sell the invention for a limited time in Canada. The idea is to provide limited monopoly power so that innovative firms can recoup their investment in R&D, but then to allow other firms to produce the product more cheaply once the patent expires.

A **trademark** is an identifying symbol or name for a particular good, like Chevrolet cars, or the Nike “swoosh” that appears on shoes and athletic gear. A firm can renew a trademark over and over again, as long as it remains in active use.

A **copyright**, according to the Canadian Intellectual Property Office, “is the exclusive legal right to produce, reproduce, publish or perform an original literary, artistic, dramatic or musical work. ” No one can reproduce, display, or perform a copyrighted work without permission from the author. Copyright protection generally lasts for the life of the author plus 70 years.

Roughly speaking, the patent law covers inventions and copyright protects books, songs, and art. But in certain areas, like the invention of new software, it has been unclear whether patent or copyright protection should apply. There is also a body of law known as **trade secrets**. Even if a company does not have a patent on an invention, competing firms are not allowed to steal its secrets. One famous trade secret is the formula for Coca-Cola, which is not protected under copyright or patent law, but is simply kept secret by the company.

Taken together, this combination of patents, trademarks, copyrights, and trade secret law is called **intellectual property**, because it implies ownership over an idea, concept, or image, not a physical piece of property like a house or a car. Countries around the world have enacted laws to protect intellectual property, although the time periods and exact provisions of such laws vary across countries.

Visit this website for examples of some pretty bizarre patents.



Intimidating Potential Competition

Businesses have developed a number of schemes for creating barriers to entry by deterring potential competitors from entering the market. One method is known as **predatory pricing**, in which a firm uses the threat of price cuts to discourage competition. Predatory pricing is a violation of antitrust law, but it is difficult to prove.

Consider a large airline that provides most of the flights between two particular cities. A new, small start-up airline decides to offer service between these two cities. The large airline immediately slashes prices on this route so that the new entrant cannot make any money. After the new entrant has gone out of business, the incumbent firm can raise prices again.

After this pattern is repeated once or twice, potential new entrants may decide that it is not wise to try to compete. Small airlines often accuse larger airlines of predatory pricing: in the early 2000s, for example, ValuJet accused Delta of predatory pricing, Frontier accused United, and Reno Air

accused Northwest. In 2015, the Justice Department ruled against American Express and Mastercard for imposing restrictions on retailers who encouraged customers to use lower swipe fees on credit transactions.

In some cases, large advertising budgets can also act as a way of discouraging the competition. If the only way to launch a successful new national cola drink is to spend more than the promotional budgets of Coca-Cola and PepsiCo., not too many companies will try. A firmly established brand name can be difficult to dislodge.

Summing Up Barriers to Entry

Table 8.3a lists the barriers to entry that have been discussed here. This list is not exhaustive since firms have proved to be highly creative in inventing business practices that discourage competition. When barriers to entry exist, perfect competition is no longer a reasonable description of how an industry works. When barriers to entry are high enough, a monopoly can result.

Barrier to Entry	Government Role?	Example
Natural monopoly	Government often responds with regulation (or ownership)	Water and electric companies
Control of a physical resource	No	DeBeers for diamonds
Legal monopoly	Yes	Post office, past regulation of airlines and trucking
Patent, trademark, and copyright	Yes, through protection of intellectual property	New drugs or software
Intimidating potential competitors	Somewhat	Predatory pricing; well-known brand names

Table 8.3a Barriers to Entry

Key Concepts and Summary

Barriers to entry prevent or discourage competitors from entering the market. These barriers include: economies of scale that lead to natural monopoly, control of a physical resource, legal restrictions on competition, patent, trademark and copyright protection, and practices to intimidate the competition like predatory pricing. Intellectual property refers to the legally guaranteed ownership of an idea, rather than a physical item. The laws that protect intellectual property include patents, copyrights, trademarks, and trade secrets. A natural monopoly arises when economies of scale persist over a large enough range of output that if one firm supplies the entire market, no other firm can enter without facing a cost disadvantage.

Glossary

Barriers to Entry

the legal, technological, or market forces that may discourage or prevent potential competitors from entering a market

Copyright

a form of legal protection to prevent copying, for commercial purposes, original works of authorship, including books and music

Deregulation

removing government controls over setting prices and quantities in certain industries

Intellectual Property

the body of law including patents, trademarks, copyrights, and trade secret law that protect the right of inventors to produce and sell their inventions

Legal Monopoly

legal prohibitions against competition, such as regulated monopolies and intellectual property protection

Natural Monopoly

economic conditions in the industry, for example, economies of scale or control of a critical resource, that limit effective competition

Patent

a government rule that gives the inventor the exclusive legal right to make, use, or sell the invention for a limited time

Predatory Pricing

when an existing firm uses sharp but temporary price cuts to discourage new competition

Trade Secrets

methods of production kept secret by the producing firm

Trademark

an identifying symbol or name for a particular good and can only be used by the firm that registered that trademark

8.4 Monopolistic Competition

Learning Objectives

By the end of this section, you will be able to:

- Explain the significance of differentiated products
- Describe how a monopolistic competitor chooses price and quantity
- Discuss entry, exit, and efficiency as they pertain to monopolistic competition
- Analyze how advertising can impact monopolistic competition

We have now explored the two sides of the spectrum. In perfect competition, we assume identical products, and in a monopoly, we assume only one product is available.

Monopolistic competition lies in-between. It involves many firms competing against each other, but selling products that are distinctive in some way. Examples include stores that sell different styles of clothing, restaurants or grocery stores that sell different kinds of food and even products like golf balls or beer that may be at least somewhat similar but differ in public perception because of advertising and brand names. Firms producing such products must also compete with other styles, flavours and brand names. The term “monopolistic competition” captures this mixture of mini-monopoly and tough competition.

Who invented the theory of imperfect competition?

The theory of imperfect competition was developed by two economists independently but simultaneously in 1933. The first was Edward Chamberlin of Harvard University who published *The Economics of Monopolistic Competition*. The second was Joan Robinson of Cambridge University who published *The Economics of Imperfect Competition*. Robinson subsequently became interested in macroeconomics where she became a prominent Keynesian, and later a post-Keynesian economist.

Differentiated Products

A firm can try to make its products different from those of its competitors in several ways: physical aspects of the product, selling location, intangible aspects of the product, and perceptions of the product. Products that are distinctive in one of these four ways are called **differentiated products**.

Physical aspects of a product include all the phrases you hear in advertisements: such as an unbreakable bottle, nonstick surface, freezer-to-microwave, non-shrink, extra spicy, newly redesigned for your comfort. The location of a firm can also create a difference between producers. For example, a gas station located at a busy intersection can probably sell more gas than one located on a small side-road. A supplier to an automobile manufacturer may find that it is advantageous to locate near the car factory.

Intangible aspects can differentiate a product, too. Some intangible aspects may be promises like a guarantee of satisfaction or money back, a reputation for high-quality services like free delivery, or a loan to purchase the product. Finally, **product perception** may occur in the minds of the buyers. For example, many people could not tell the difference in taste between common varieties of beer or cigarettes if they were blindfolded, but because of past habits and advertising, they have strong preferences for certain brands. Advertising can play a role in shaping these intangible preferences.

The concept of differentiated products is closely related to the degree of variety that is available. If everyone in the economy wore only blue jeans, ate only white bread, and drank only tap water, then the markets for clothing, food, and drink would be much closer to perfectly competitive. The

variety of styles, flavors, locations, and characteristics creates product differentiation and monopolistic competition.

Perceived Demand for a Monopolistic Competitor

A monopolistically competitive firm faces a demand for its goods that is between monopoly and perfect competition. Figure 8.4a offers a reminder that the **demand curve** as faced by a perfectly competitive firm is **perfectly elastic** or flat, because the perfectly competitive firm can sell any quantity it wishes at the prevailing **market price**. In contrast, the demand curve, as faced by a monopolist, is the market demand curve, since a monopolist is the only firm in the market, and hence is downward sloping.

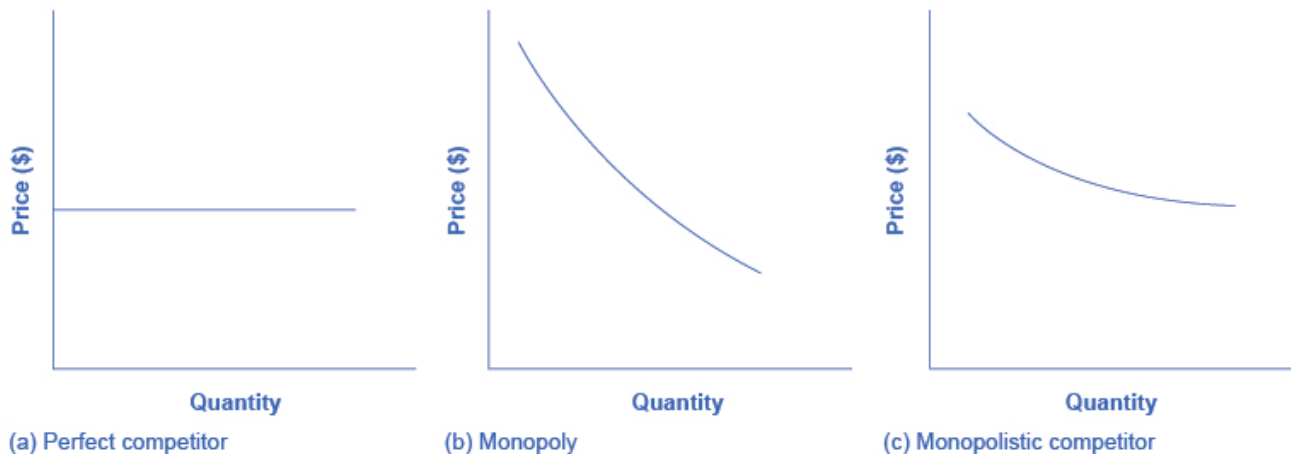


Figure 8.4a. *Perceived Demand for Firms in Different Competitive Settings.* The demand curve faced by a perfectly competitive firm is perfectly elastic, meaning it can sell all the output it wishes at the prevailing market price. The demand curve faced by a monopoly is the market demand. It can sell more output only by decreasing the price it charges. The demand curve faced by a monopolistically competitive firm falls in between.

The demand curve as faced by a monopolistic competitor is not flat, but rather downward-sloping, meaning that the monopolistic competitor, like the monopoly, can raise its price without losing all of its customers or lower its price and gain more customers. Since there are substitutes, the demand curve for a monopolistically competitive firm is relatively more elastic than that of a monopoly, where there are no close substitutes. If a monopolist raises its price, some consumers will choose not to purchase its product—but they will then need to buy a completely different product. However, when a monopolistic competitor raises its price, consumers can choose to buy a similar product from another firm. If a monopolistic competitor raises its price, it will not lose as many customers as would a perfectly competitive firm, but it will lose more customers than a monopoly would.

At a glance, the demand curves faced by a monopoly and monopolistic competitor look similar—that is, they both slope down. Still, the underlying economic meaning of these demand curves is different because a monopolist faces the market demand curve and a monopolistic competitor does not.

Cellular Competition



(Credit: Intel Free Press/ Flickr/ CC BY-SA 2.0)

Recall that monopolistic competition refers to an industry that has more than a few firms that each offer a distinguished product. The Canadian cellular industry is one such market. With a history dating back as far as Alexander Graham Bell's invention of the telephone in 1876, the Canadian cellular industry now has a number of large firms including Rogers, Telus, and Bell. What about Fido, Koodo, and Virgin Mobile? They are owned by Rogers, Telus, and Bell, respectively. While this market has some similarities to an Oligopoly (which we will not explore in this course), it is often classified as a monopolistic competition.

Consider what you would do if your monthly cell phone bill increased by \$2. Would you switch to another company? Likely not. This means that the cellular market is certainly not perfectly competitive as cell phone companies have some ability to change prices. Therefore, the demand faced by each of the cellular companies will be more elastic than market demand, but not perfectly elastic. Let's explore how these monopolistic competitive firms set prices.

How a Monopolistic Competitor Chooses Price and Quantity

To explore monopolistic competition, let's consider Rogers, one of the Cellular companies in the market. Rogers faces a downward sloping demand curve and has ATC and MC curves similar to the ones we have seen before.

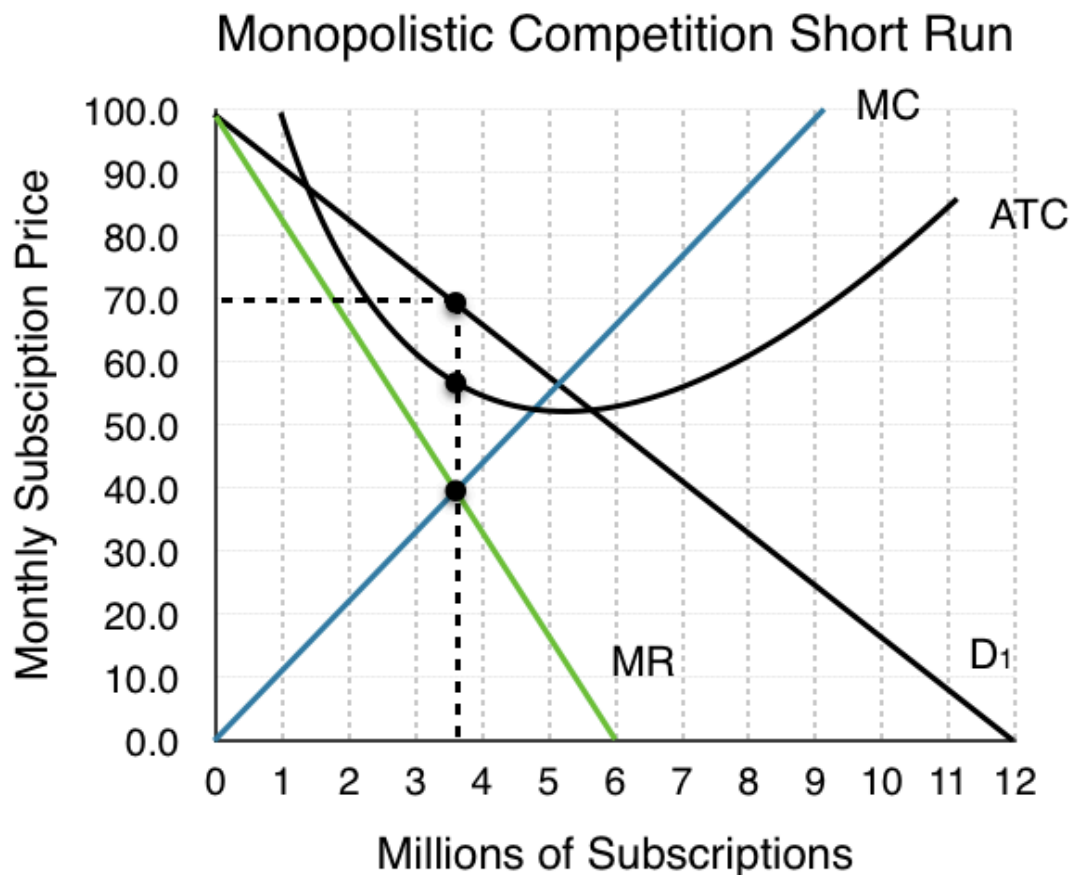


Figure 8.4b.

The monopolistically competitive firm decides on its profit-maximizing quantity and price similar to the way that a monopolist does. Since they face a downward sloping demand curve, the same considerations about how elasticity affects revenue are relevant, and the firm will maximize profits where $MR = MC$ when $P > MR$.

Step 1. Rogers determines its profit-maximizing level of output. This will occur where $MR = MC$. Two situations are possible:

- If the firm is producing at a quantity of output where marginal revenue exceeds marginal cost, then the firm should keep expanding production, because each marginal unit is adding to profit by bringing in more revenue than cost. In this way, the firm will produce up to the quantity where $MR = MC$.
- If the firm is producing at a quantity where marginal costs exceed marginal revenue, then each marginal unit is costing more than the revenue it brings in, and the firm will increase its profits by reducing the quantity of output until $MR = MC$.

In this example, MR and MC intersect when Rogers has 3.6 million subscribers.

Step 2. Rogers decides what price to charge. When the firm has determined its profit-maximizing quantity of output, it will behave like a monopoly and charge the maximum it can at the quantity. On the graph, this process can be shown as a vertical line reaching up through the profit-maximizing quantity until it hits the firm's perceived demand curve. For Rogers, this occurs at a price of \$70/month.

Although the process by which a monopolistic competitor makes decisions about quantity and price is similar to the way in which a monopolist makes such decisions, two differences are worth remembering. First, although both a monopolist and a monopolistic competitor face downward-sloping demand curves, the monopolist's demand curve is the market demand curve, while the perceived **demand curve** for a monopolistic competitor is based on the extent of its product differentiation and how many competitors it faces. Second, a monopolist is surrounded by barriers to entry and need not fear entry, but a monopolistic competitor who earns profits must expect the entry of firms with similar, but differentiated, products.

Monopolistic Competitors and Entry

Consider the profits of Rogers at equilibrium quantity of 3.6 million subscribers:

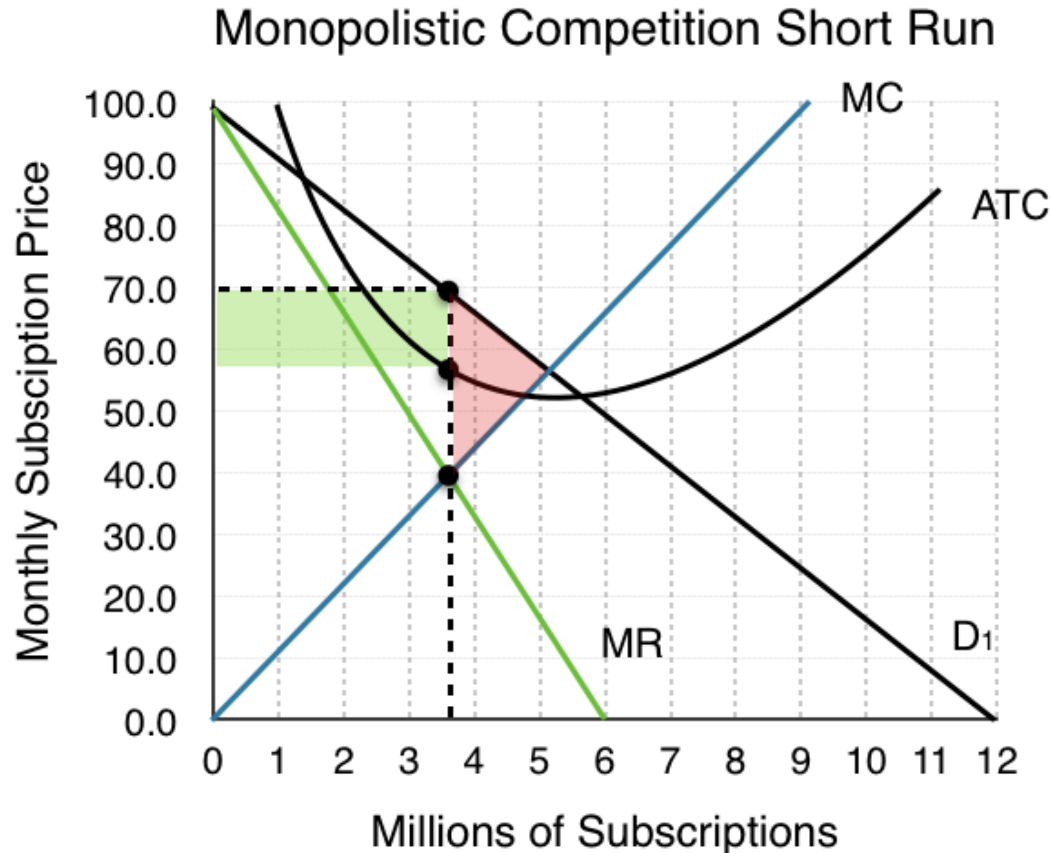


Figure 8.4c.

At a price of \$70/month, ATC is only \$60 and Rogers' profit is \$36 million. (\$10 profit/subscriber) Notice that this market creates a deadweight loss equal to the red area since the equilibrium quantity is less than what would occur in competitive equilibrium (5 million subscriptions).

Remember that in monopolistic competition, there are few barriers to entry. Since Rogers is earning positive economic profits, other firms will be tempted to enter the market.

The entry of other firms into the same general market shifts the demand curve faced by a monopolistically competitive firm. As more firms enter the market, the quantity demanded at a given price for any particular firm will decline, and the firm's perceived demand curve will shift to the left. As a firm's perceived demand curve shifts to the left, its marginal revenue curve will also shift to the left. The shift in marginal revenue will change the profit-maximizing quantity that the firm chooses to produce since marginal revenue will then equal marginal cost at a lower quantity.

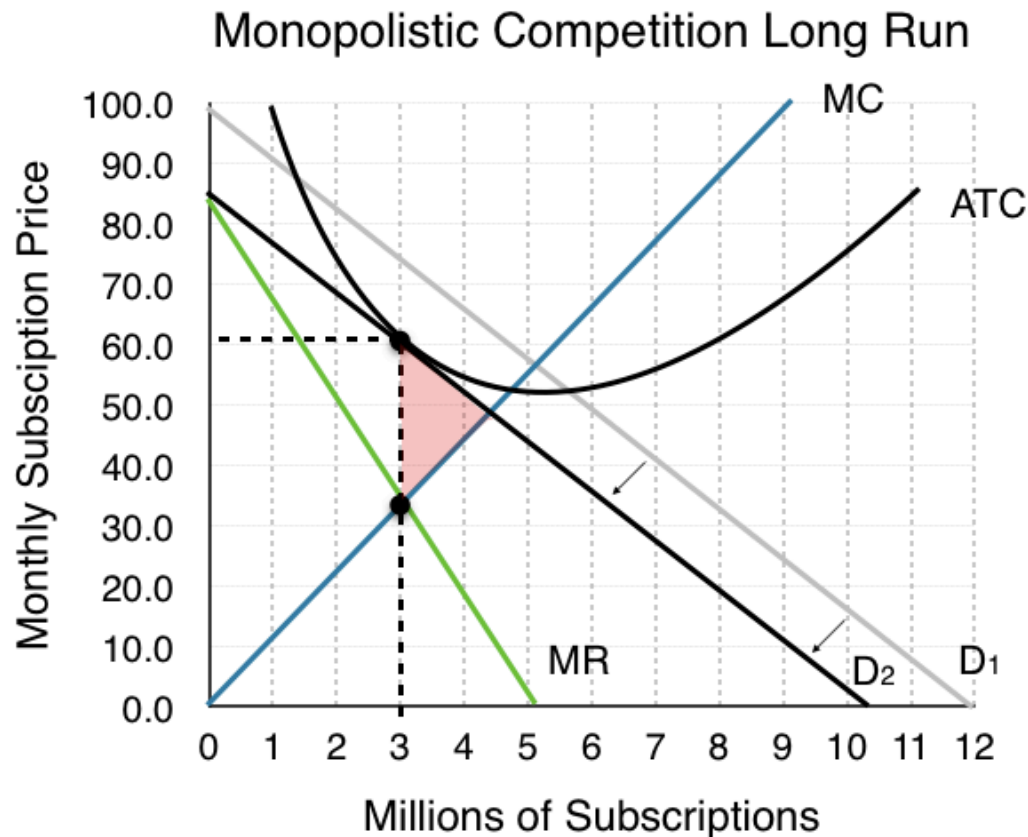


Figure 8.4d.

When will this shifting stop? When profits are 0. As long as $P > ATC$ firms will continue to enter the market, and demand will continue to shift inward. As shown in Figure 8.4d, this occurs when $P = ATC$ and $MR = MC$. This specific point happens when Demand is tangent to ATC, because only when this is true can $P = ATC$, given that ATC is downward sloping (recall that the MC curve passes through ATC at the minimum point of ATC, and note that the minimum point of ATC is at a quantity higher than that produced by the monopolistically competitive firm).

What about the social surplus? Although profits are now 0, a deadweight loss persists. This is because, unlike perfect competition, $P > MR$, which also means that $P > MC$. Since consumers' willingness to pay is greater than the marginal cost of the firm, market failure continues. Remember that a key reason for this is the firms' inability to charge more than one price. Notice also that ATC is not at a minimum. This is the price the market pays for variety since the aggregate market does not ensure the most efficient production when there is slight differentiation in products.

The Benefits of Variety and Product Differentiation

Even though monopolistic competition does not provide efficiency, it does have benefits of its own. Product differentiation is based on variety and innovation. Many people would prefer to live in an economy with many kinds of clothes, foods, and car styles; not in a world of perfect competition where everyone will always wear blue jeans and white shirts, eat only spaghetti with plain red sauce, and drive an identical model of car. Many people would prefer to live in an economy where firms are struggling

to figure out ways of attracting customers by methods like friendlier service, free delivery, guarantees of quality, variations on existing products, and a better shopping experience.

Economists have struggled, with only partial success, to address the question of whether a market-oriented economy produces the optimal amount of variety. Critics of market-oriented economies argue that society does not really need dozens of different athletic shoes or breakfast cereals or automobiles. They argue that much of the cost of creating such a high degree of product differentiation, and then of advertising and marketing this differentiation, is socially wasteful—that is, most people would be just as happy with a smaller range of **differentiated products** produced and sold at a lower price. Defenders of a market-oriented economy respond that if people do not want to buy differentiated products or highly advertised brand names, no one is forcing them to do so. Moreover, they argue that consumers benefit substantially when firms seek short-term profits by providing differentiated products. This controversy may never be fully resolved, in part because deciding on the optimal amount of variety is very difficult, and in part because the two sides often place different values on what variety means for consumers.

How does advertising impact monopolistic competition?



(Credit: Marmoulak/ Wikimedia Commons/ CC BY 2.0)

The Canadian economy spent about \$12.22 billion on advertising in 2016, according to statista.com.

Advertising is all about explaining to people, or making people believe, that the products of one firm are differentiated from the products of another firm. In the framework of monopolistic competition,

there are two ways to conceive how advertising works: either advertising causes a firm's perceived demand curve to become more inelastic (that is, it causes the perceived demand curve to become steeper), or advertising causes demand for the firm's product to increase (that is, it causes the firm's perceived demand curve to shift to the right). In either case, a successful advertising campaign may allow a firm to sell either a greater quantity or to charge a higher price, or both, and thus increase its profits.

However, economists and business owners have also long suspected that much of the advertising may only offset other advertising. Economist A. C. Pigou wrote the following back in 1920 in his book, *The Economics of Welfare*:

It may happen that expenditures on advertisement made by competing monopolists [that is, what we now call monopolistic competitors] will simply neutralise one another, and leave the industrial position exactly as it would have been if neither had expended anything. For, clearly, if each of two rivals makes equal efforts to attract the favour of the public away from the other, the total result is the same as it would have been if neither had made any effort at all.

Summary

Monopolistic competition refers to a market where many firms sell differentiated products. Differentiated products can arise from characteristics of the good or service, location from which the product is sold, intangible aspects of the product, and perceptions of the product.

If the firms in a monopolistically competitive industry are earning economic profits, the industry will attract entry until profits are driven down to zero in the long run. If the firms in a monopolistically competitive industry are suffering economic losses, then the industry will see an exit of firms until economic profits are driven up to zero in the long run.

A monopolistically competitive firm is not efficient because it does not produce at the minimum of its average cost curve or produce where $P = MC$. Thus, a monopolistically competitive firm will tend to produce a lower quantity at a higher cost and charge a higher price than a perfectly competitive firm.

Monopolistically competitive industries do offer benefits to consumers in the form of greater variety and incentives for improved products and services. There is some controversy over whether a market-oriented economy generates too much variety.

The following table summarizes the three types of market structure we have examined. The fourth, oligopoly, is not in the scope of this course.

Market type	Description	MR v P	P v MC	LR Π
Perf. Comp.	Many sellers, identical goods, free entry in LR	$MR = P$	$P = MC$	$\Pi = 0$
Monopoly	Single seller, barriers to entry	$MR < P$	$P > MC$	$\Pi > 0$
Monopolistic Comp.	Many sellers, differentiated products, free entry in LR	$MR < P$	$P > MC$	$\Pi = 0$

Glossary

Differentiated Products

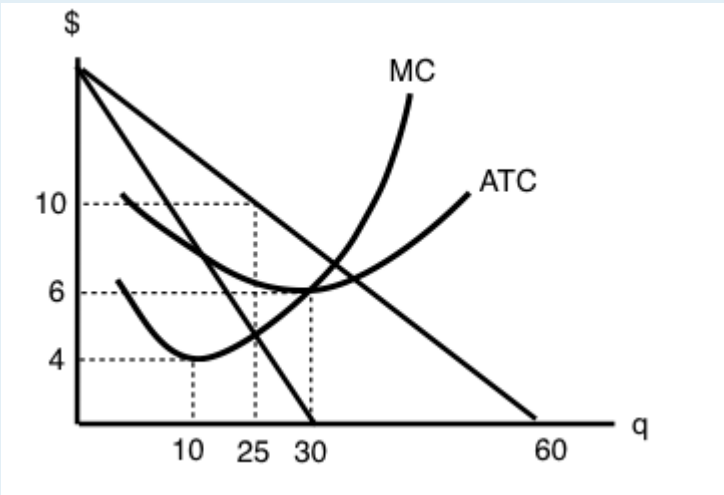
a product that is perceived by consumers as distinctive in some way

Monopolistic Competition

many firms competing to sell similar but differentiated products

Exercises 8.4

The following TWO questions refer to the diagram below, which illustrates the demand, marginal revenue, and relevant cost curves for a monopolistically competitive firm.



1. How many units of output should this firm produce, in order to maximize profits?

- a) 10.
- b) 25.

- c) 30.
- d) 60.

2. In the long run, what price will this firm charge for its output?

- a) \$10.
- b) A price less than \$10 and greater than \$6.
- c) \$6.
- d) A price less than \$6 and greater than \$4.

The following TWO questions refer to the diagram below.

Figure 1

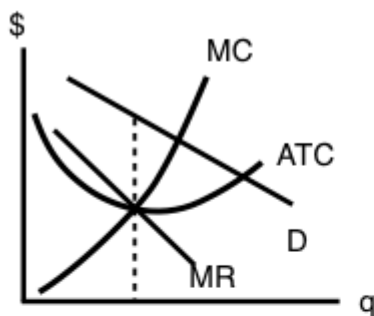


Figure 2

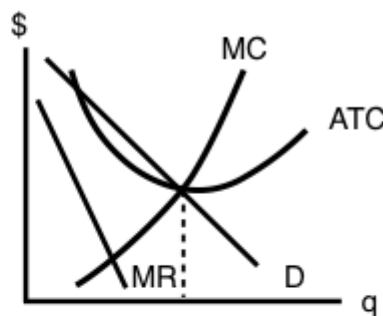


Figure 3

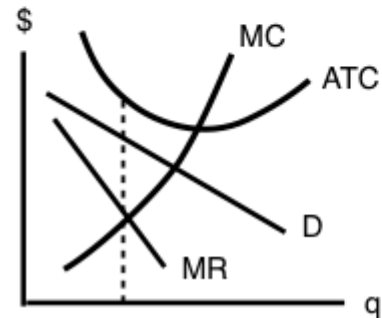
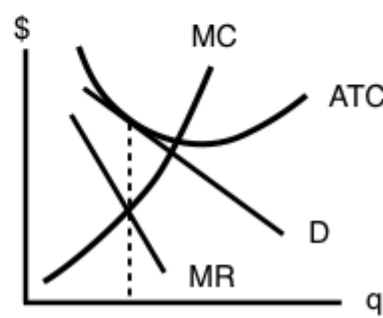


Figure 4



3. Which of the four diagrams illustrates a long run equilibrium for a monopolistically competitive firm?

- a) Figure 1.
- b) Figure 2.
- c) Figure 4.
- d) Figures 2 and 4.

4. Which of the four diagrams illustrates a monopolistically competitive firm able to make positive economic profits in the short run?

- a) Figure 1.
- b) Figure 2.
- c) Figures 1 and 2.
- d) None of the above.

5. Which of the following statements about the comparison between monopolistic competition in the long run and monopoly in the long run is FALSE?

- a) Marginal revenue is less than price for both monopoly and monopolistic competition.
- b) Price is greater than marginal cost for both monopoly and monopolistic competition.
- c) Price is greater than average total cost for both monopoly and monopolistic competition.
- d) Neither monopoly or monopolistic competition produce at the minimum point of the average total cost curve.

6. Which of the following statements about the comparison between perfect competition and monopolistic competition is TRUE?

- I. Both perfectly competitive and monopolistically competitive firms produce where marginal revenue equals marginal cost.
- II. Both perfectly competitive and monopolistically competitive firms produce where price equals marginal cost.
- III. Both perfectly competitive and monopolistically competitive industries are characterized by free entry and zero profits in the long run.

- a) I only.
- b) I and III only.
- c) I and II only.
- d) I, II and III.

Case Study - Diamond's Demise

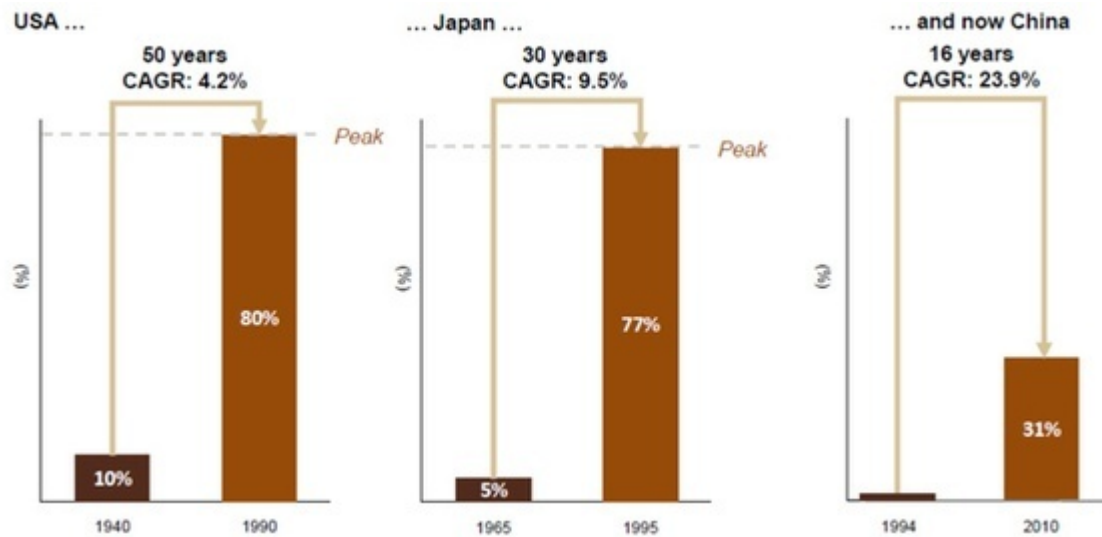


(Credit: bettercopy.org)

How much would you spend on a diamond engagement ring? If you answered around the national average of \$4,000 then you too have fallen victim to one of the most incredible marketing campaigns of all time. A diamond is intrinsically worthless, and against popular belief, they really aren't that rare. Their resale value is next to nothing.

So why are we willing to spend so much on a ring? Well, we can trace that back to the 19th century. Before 1866, diamonds had been rare, but when massive discoveries were found in South Africa, the rock was on the verge of losing its value. That's when Cecil Rhodes stepped in and founded De Beers Corporation – consolidating the mines and restricting supply, maintaining the fiction that diamonds were scarce and had inherent value.

The real change was in 1938, when the company hired N.W. Ayer to increase sales. By tying their product to love, and specifically to a marriage proposal, by the end of the century, over 80% of all brides had received a diamond wedding ring.



(Credit: Citigroup/De Beers)

The ad campaign a 'Diamond is forever' displayed a diamond as a symbol of love, and suggested that a man should spend up to two month salary on the symbol.

Until 1990, DeBeers had a iron-tight grip on the market, at one point accounting for 90% of all sales, but now this grip is loosening. Using our models for monopoly and monopolistic competition, let's examine the effects of this changing market.



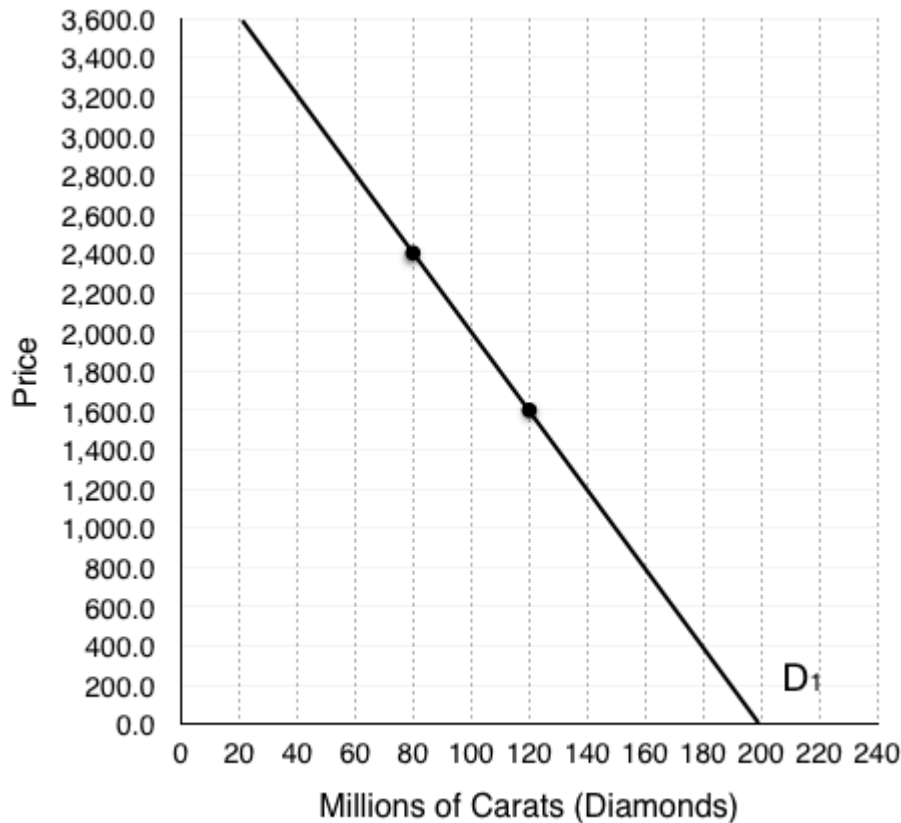
Watch why engagement rings are a scam



Learn more about DeBeers ad Campaign

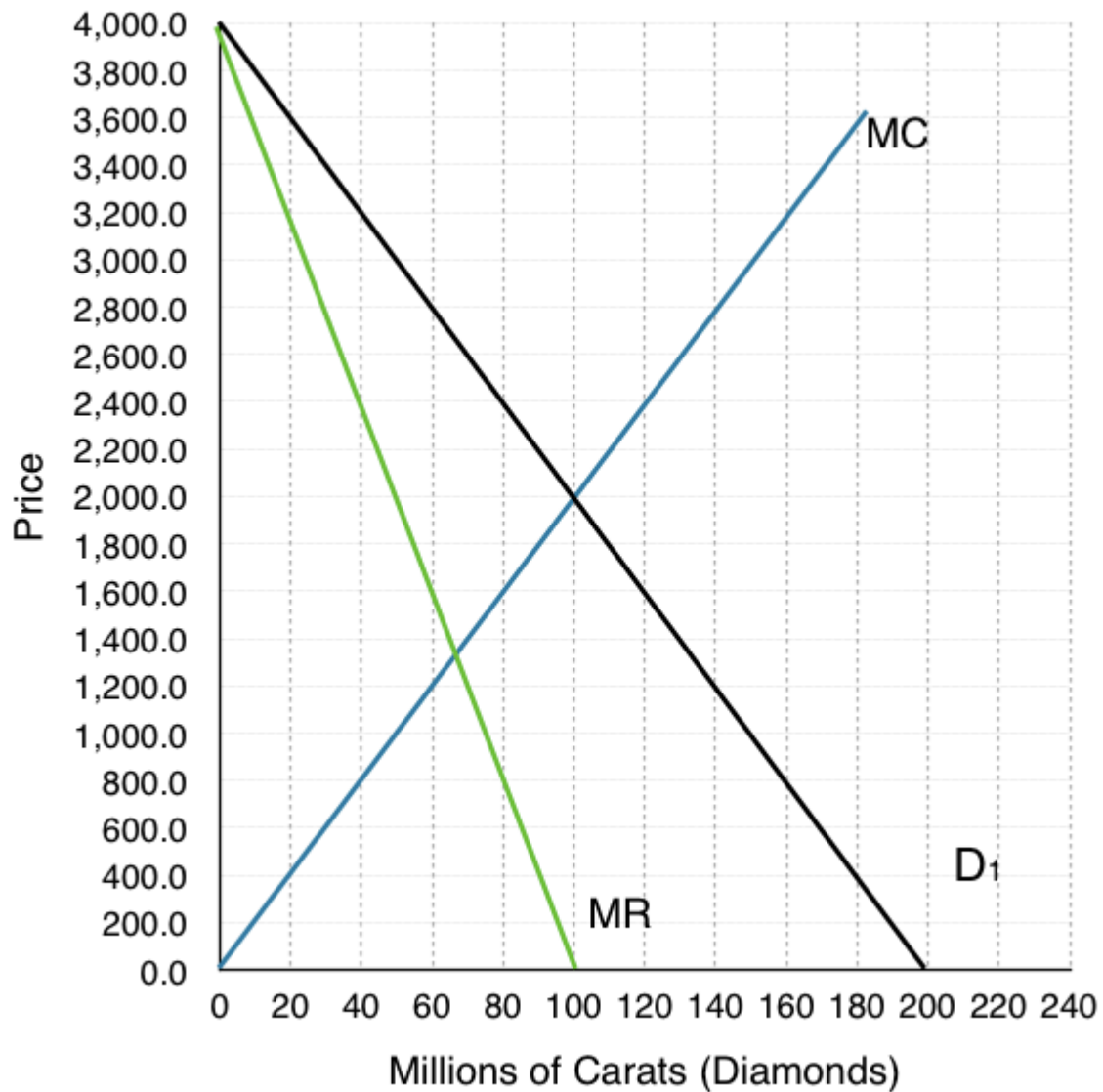
Below is a representation of the demand curve for diamonds. Assume DeBeers is operating as a monopoly.

- 1. As a monopolist, what is the total effect of a price change from \$2,400 to \$1,600 on revenue? Break this change into an increase and a decrease.**



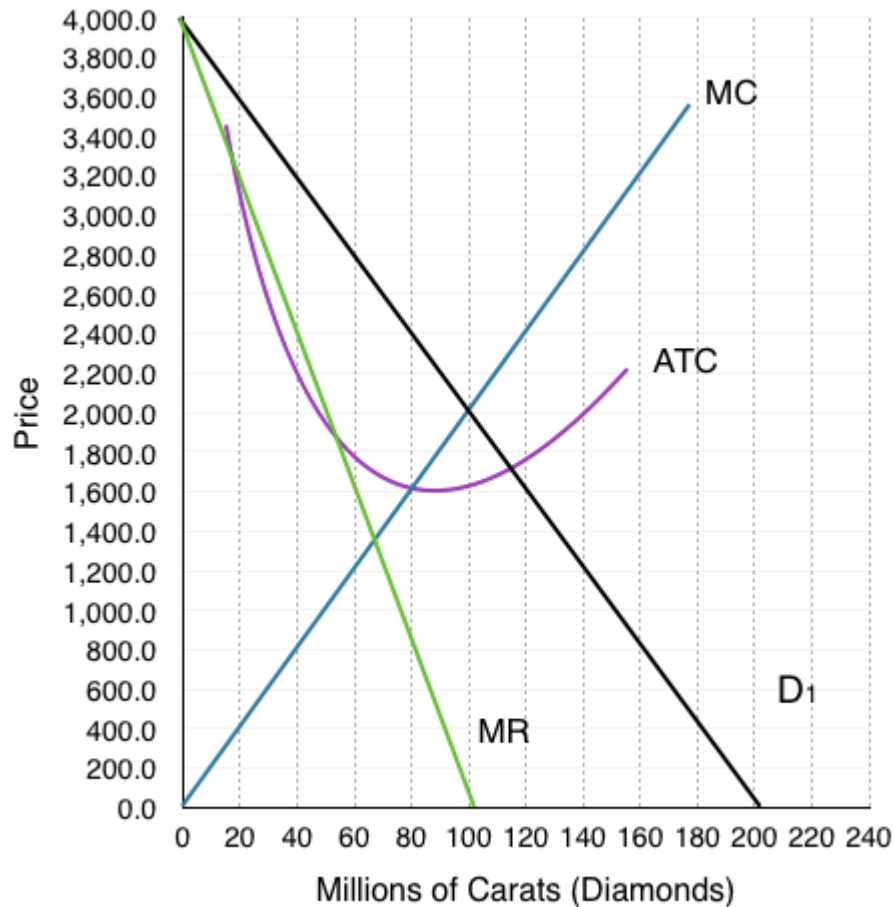
If you were to do exercise 1 in for every marginal change in price, you would find the marginal revenue curve. The marginal revenue diagram has been provided for the next exercises, along with the marginal costs for DeBeers.

- 2. As a monopolist, what quantity does DeBeers produce? What price do they charge?**
- 3. What is Consumer Surplus, Producer Surplus, and Market Surplus?**
- 4. What is the deadweight loss under monopoly?**



An ATC curve has been provided for DeBeers. These costs include marketing, mining exploration, and more.

5. What are DeBeers profits? Why are they able to sustain these in the long-run?



From the 1990's to now, the market has changed considerably, with DeBeer having to adapt to new challenges. The first is the introduction of direct competitors. Russia's state-owned diamond company ALROSA now produces more diamonds than DeBeers itself. Some new firms even bought mines from DeBeers when the company was trying to support their balance sheet.

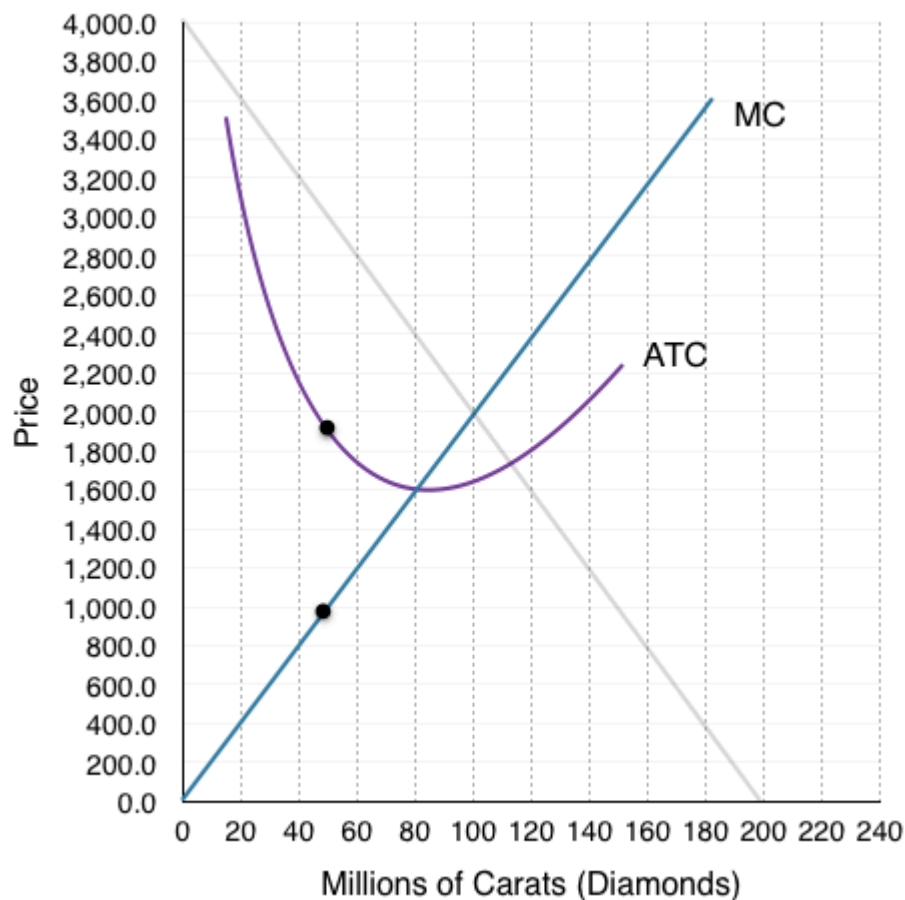
Another change is the introduction of substitutes, with synthetic diamonds becoming more appealing to price-conscious young shoppers. Advances on the production of these products are fairly recent, notably, in 2015 New Diamond Technology displayed the potential of synthetics by creating a ten-carat polished diamond.

This means the market is changing from monopoly to monopolistic competition. We know that entry of other firms will cause the monopolists demand curve to shift.



Read more about how the diamond market is changing

6. Show the effect of the changes on our demand curve. If the new marginal revenue intersects marginal cost at (45, 1,900) draw the new demand curve and new marginal revenue curve.
7. As a monopolistic competitor, what quantity does DeBeers produce? What price do they charge?
8. What are DeBeers profits now?
9. What is the deadweight loss under monopolistic competition?

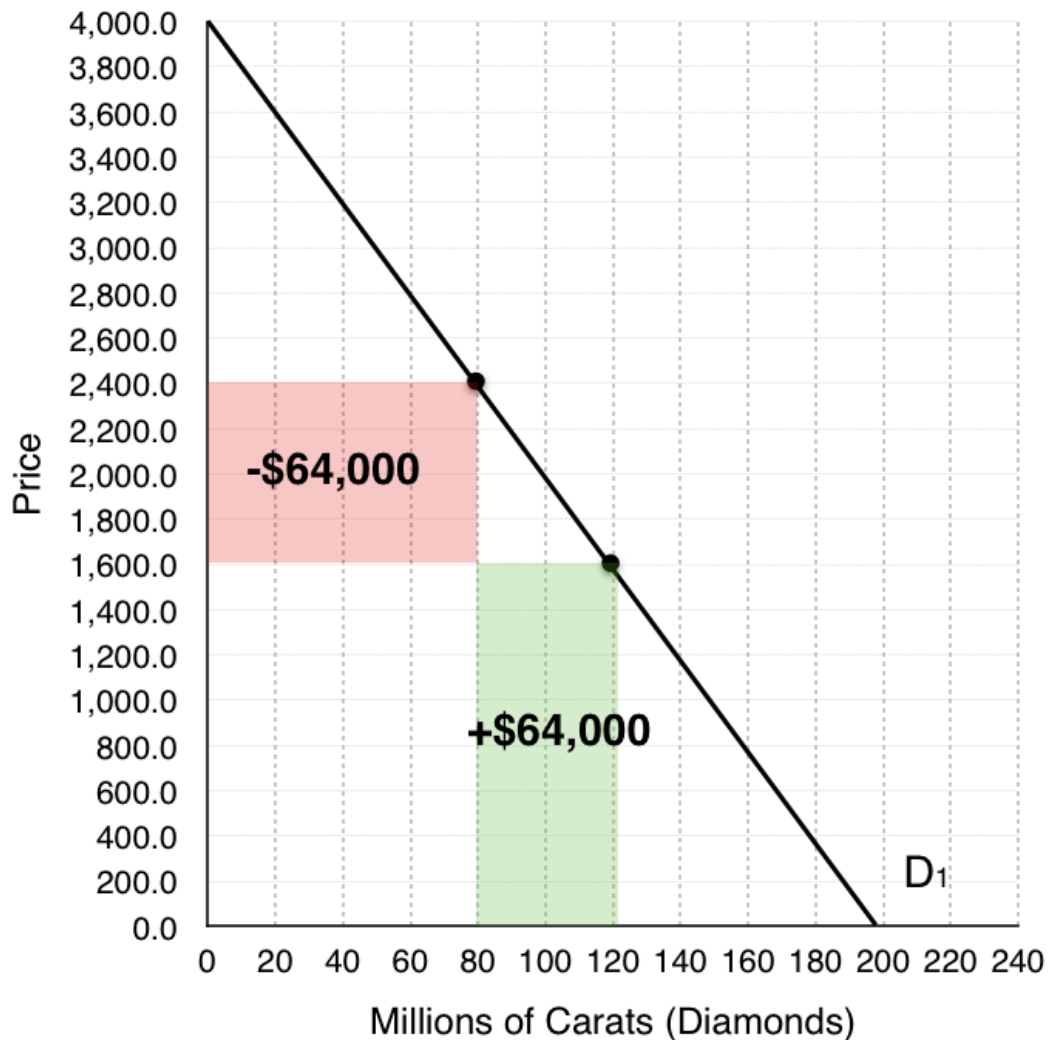


10. Are these market changes good or bad for consumers?

In this case study we have shown how microeconomic concepts of monopoly and monopolistic competition can be used to understand current events in the news. Do you have a story you think would make a good case study? Contact economics103@uvic.ca to propose your own case.

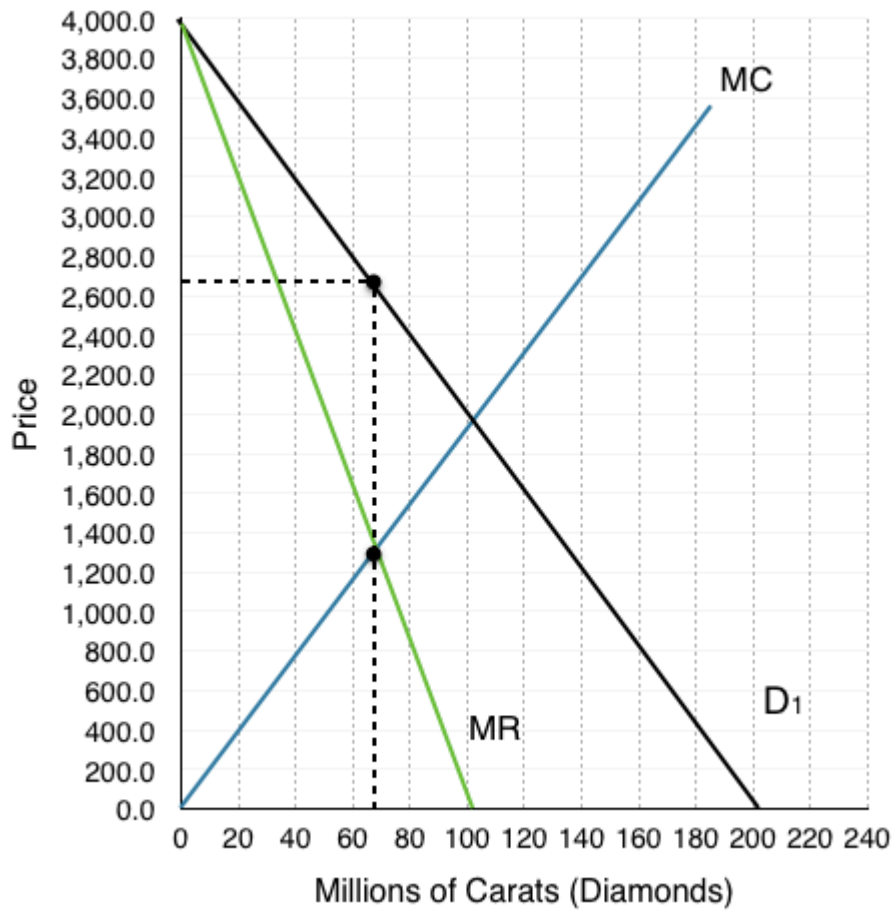
Solutions: Diamond's Demise

1. As a monopolist, what is the total effect of a price change from \$2,400 to \$1,600 on revenue? Break this change into an increase and a decrease.



Based on our demand curve, when DeBeers decreases its prices two things happen – DeBeers loses money on the 80 million Carats of diamonds they were originally selling, but they also gain from 40 million new Carats they are able to sell. Calculating the areas of the increase and the decreases, we find that they are both equal to \$64,000.

2. As a monopolist, what quantity does DeBeers produce? What price do they charge?



A monopolist charges the highest price possible where $MR = MC$. Here, that occurs at a quantity of 65 million Carats and a price of \$2,700.

3. What is Consumer Surplus, Producer Surplus, and Market Surplus?

We can do both number 3 and 4 together on the graph below. Calculating the areas:

Monopoly (graph on right)

Producer Surplus (yellow area):

$$(2,700 - 1,300)(65) + \frac{(1300 - 0)(65)}{2}$$

= \$133.25 billion

Consumer Surplus (blue area):

$$\frac{(4000 - 2700)(65)}{2}$$

= \$42.25 billion

Market Surplus (blue + yellow):

\$133.25 billion + \$42.25 billion

= \$175.5 billion

4. What is the deadweight loss under monopoly?

Remember that social surplus is maximized where $MC = MB$, or where our MC intersects the demand curve. This occurs at a quantity of 100 million carats and a price of \$2,000

Social Surplus Maximizing (graph on left)

Producer Surplus (yellow area):

$$\frac{(2000 - 0)(100)}{2}$$

= \$100 billion

Consumer Surplus (blue area):

$$\frac{(4000 - 2000)(100)}{2}$$

= \$100 billion

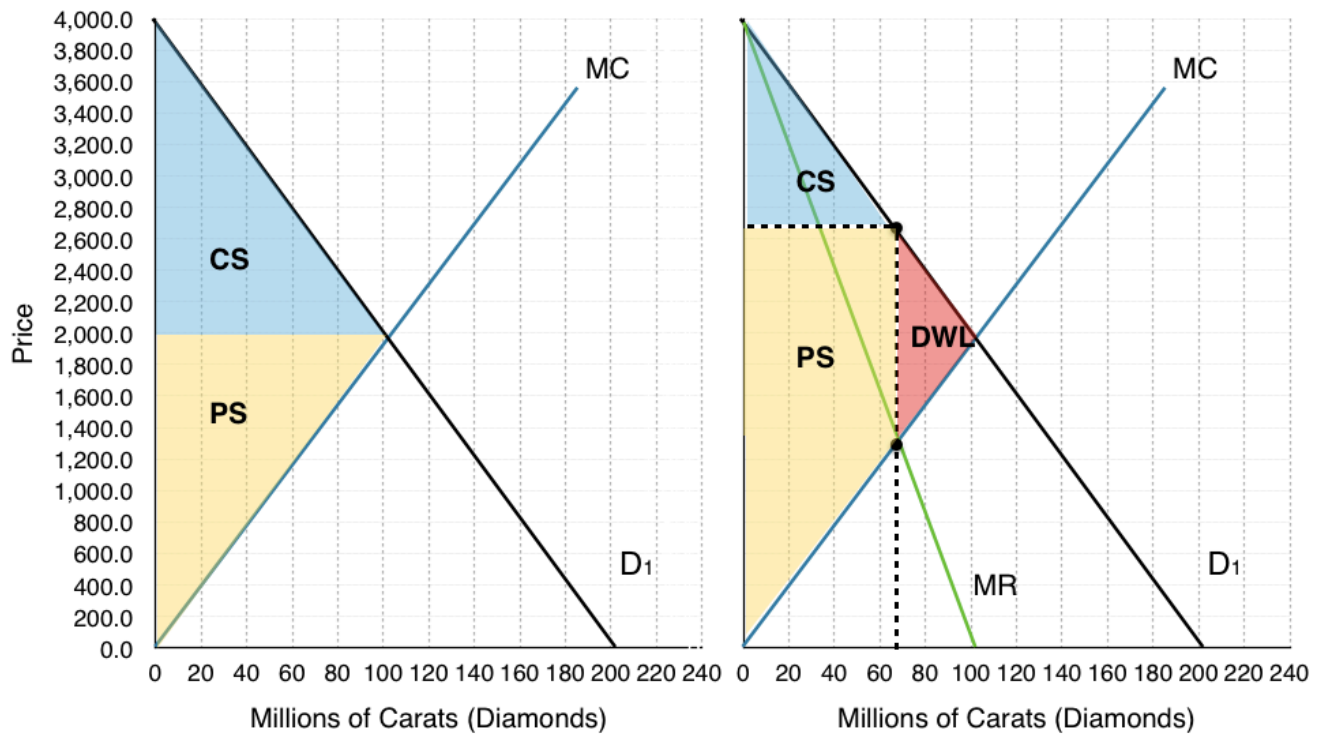
Market Surplus (blue + yellow):

\$100 billion + \$100 billion

= \$200 billion

The difference between the market surplus under monopoly, and the market surplus when the market is maximizing social surplus is equal to the deadweight loss. Note that social surplus could also be maximized under perfect price discrimination.

DWL = \$200 billion - \$175.5 billion = **\$24.5 billion**

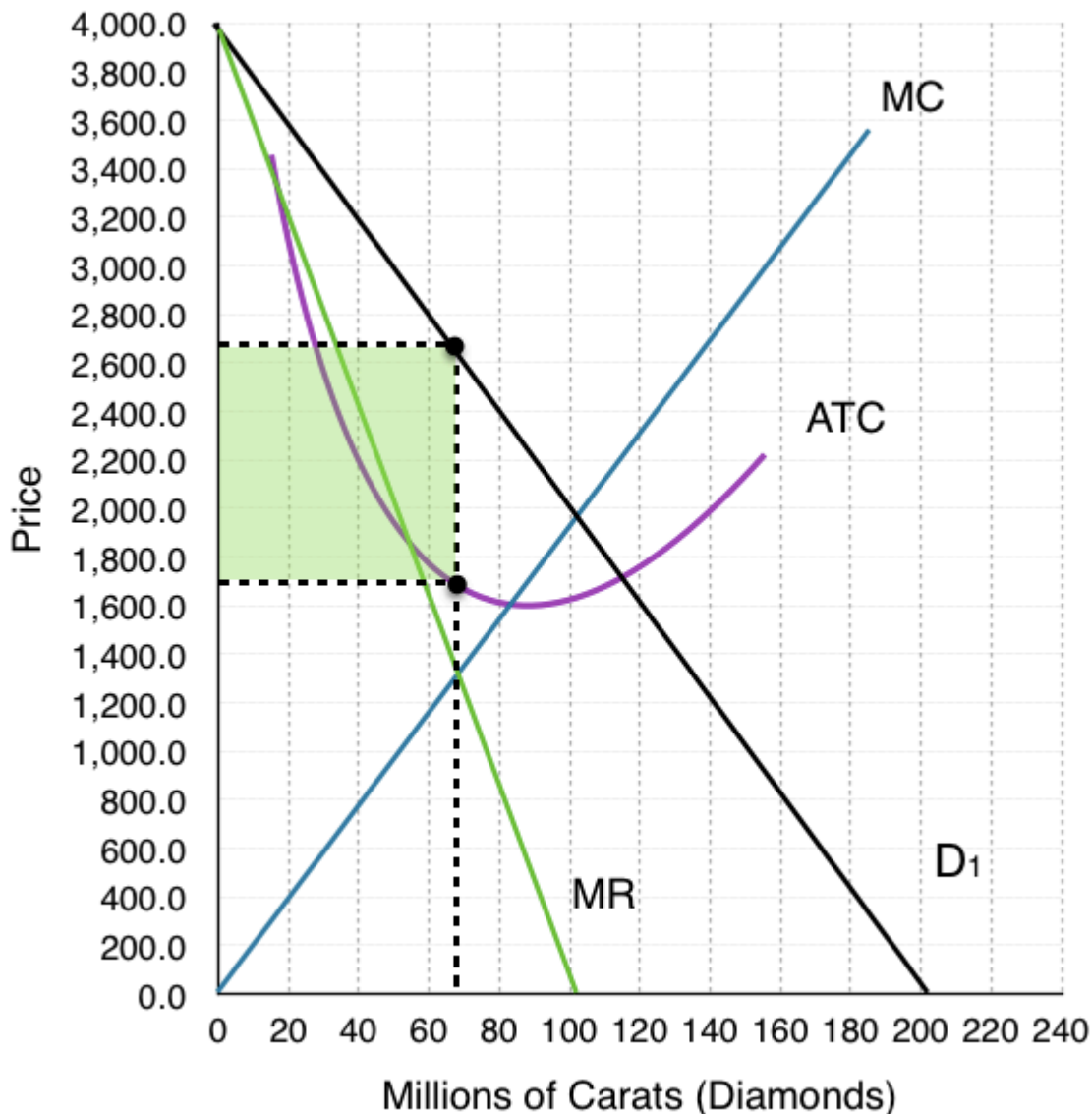


5. What are DeBeers profits? Why are they able to sustain these in the long-run?

To calculate DeBeers profits we must find the ATC @ our given quantity. Since we know that $P - ATC =$ profit per unit, we can calculate the rectangular area between these two points to find profit. At quantity of 65 million Carats of diamonds, our $ATC = \$1,700$.

$$(\$2,700 - \$1,700)(65)$$

=\$65 billion

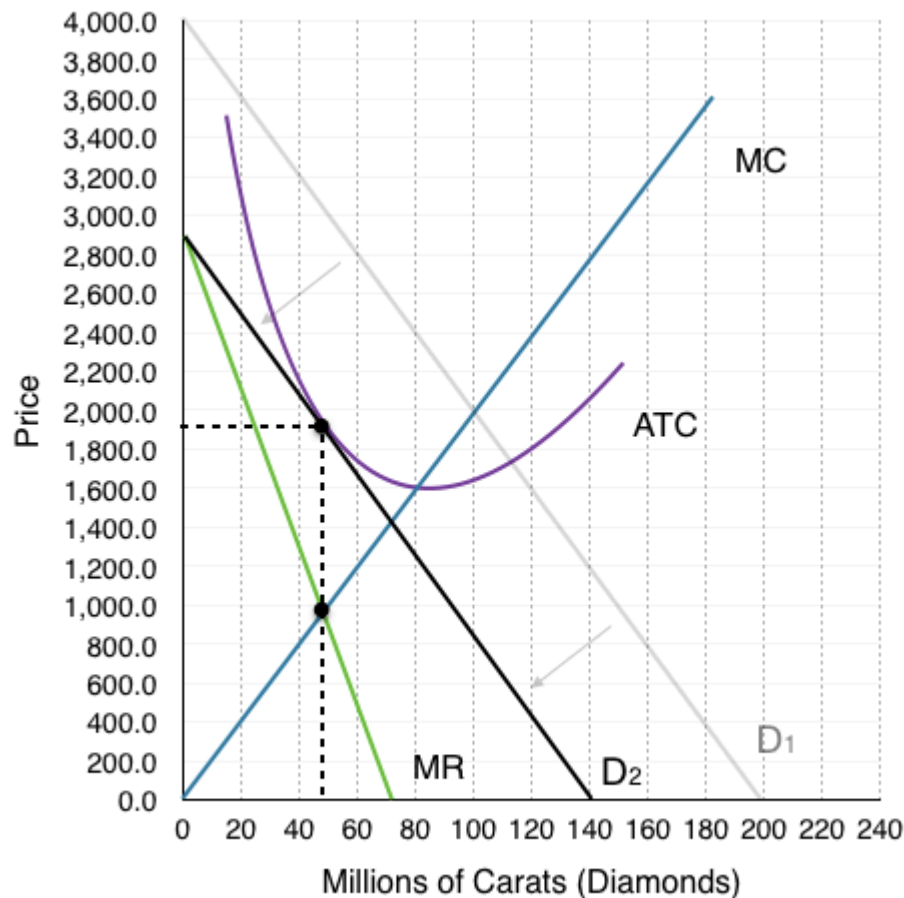


6. Show the effect of the changes on our demand curve in the long run. If the new marginal revenue intersects marginal cost at (45, 1,900) draw the new demand curve and new marginal revenue curve.

As shown in the figure below as more firms enter the market, our demand curve no longer represents the demand curve for the entire market. Some of DeBeer's consumers will go elsewhere, and the demand curve that DeBeer's faces will shift inwards. As long as there are positive profits ($P > ATC$) then this process will continue to occur. As we can see at point (45, \$1900) our demand curve (D_2) is tangent to the ATC curve and $MR = MC$. These are the conditions for a monopolistic competitor.

7. As a monopolistic competitor, what quantity does DeBeers produce? What price do they charge?

Similar to a monopoly, a monopolistic competitor charges the highest price possible where $MR = MC$. Here, that occurs at a quantity of 45 million Carats and a price of \$1,900.



8. What are DeBeers profits now?

Remember that under monopolistic competition, profits are 0 in the long-run. Since the diamond market has reached a state of long-run equilibrium, De Beers profits will be 0. In the diagram above we can see that $P=ATC$, meaning that there are no profits.

9. What is the deadweight loss under monopolistic competition?

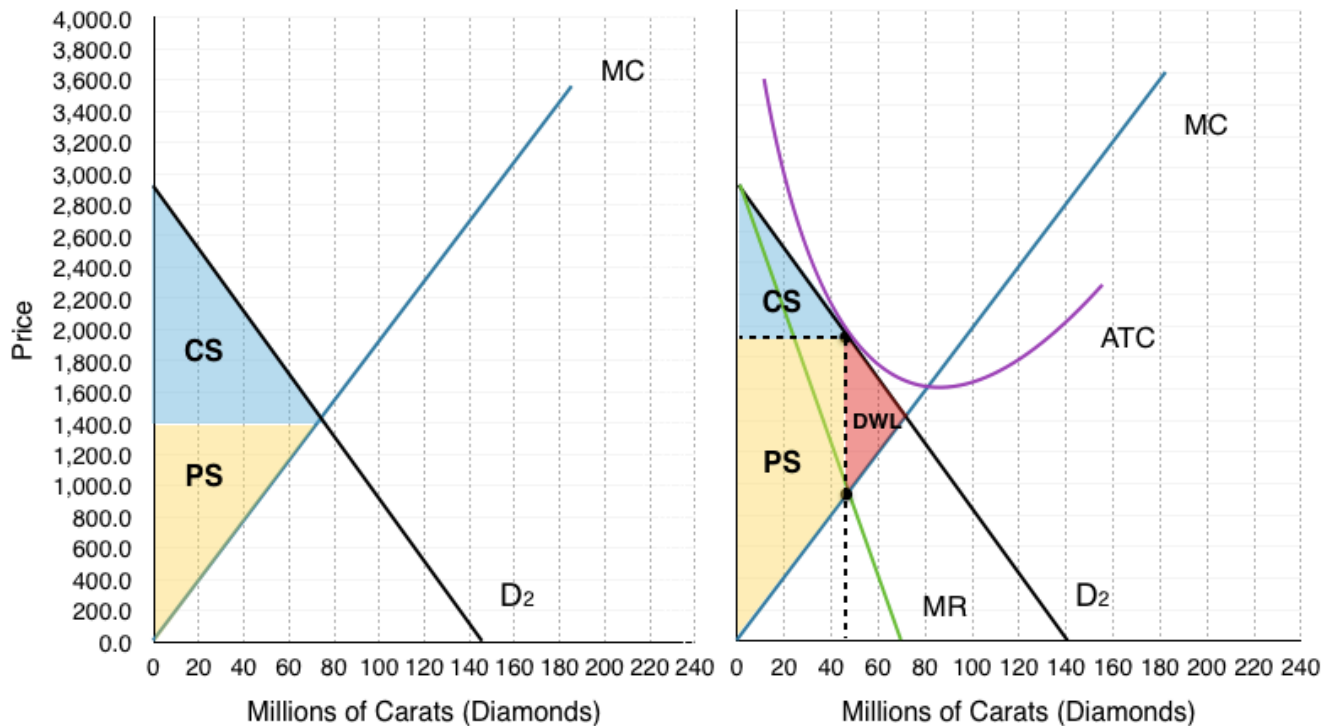
Remember that social surplus is maximized where $MC = MB$, or where our MC intersects the demand curve. This occurs at a quantity of 75 million carats and a price of \$1,400.

We could once again calculate the consumer, and producer surplus, or we could also note on the diagram that the decrease in surplus is equal to the red shaded area.

Calculating the red area:

$$(\$2,000 - \$1,000) (70 - 45) / 2$$

$$=\$17,500$$



10. Are these market changes good or bad for consumers?

We actually can't find directly the changes in consumer surplus by the information we are given, since we cannot compare the deadweight loss from questions 4 and question 9. This is because both of these look at the individual firm, and for monopolistic competition, we know there are other firms in the market. We can notice that our price has decreased, and that our drop quantity demanded will be offset by supply from other firms. We also know that consumers generally prefer variety, and by opening up market more options are available.

Topic 8 Solutions

Solutions to Exercises 8.1

1. **C**
2. **C**
3. **D**

Solutions to Exercises 8.2

1. **A**
2. **C**

Solutions to Exercises 8.4

1. **B**
2. **B**
3. **C**
4. **C**
5. **C**
6. **B**

Topic 8 References

Aboukhadijeh, Feross. "Chapter 20: Girding for War – The North and the South, 1861-1865." *StudyNotes, Inc.* Accessed July 7, 2013. <http://www.apstudynotes.org/us-history/outlines/chapter-20-girding-for-war-the-north-and-the-south-1861-1865/>.

Adam Ruins Everything. CollegeHumour. "Why Engagement Rings Are a Scam." February 13, 2014. <http://www.collegehumor.com/video/6952792/why-engagement-rings-are-a-scam>

British Parliament. "(28 August 1833). Slavery Abolition Act 1833; Section LXIV." Accessed July 2013. http://www.pdavis.nl/Legis_07.htm.

Dattel, E. (nd). "Cotton and the Civil War." *Mississippi Historical Society*. Accessed July 2013. <http://mshistorynow.mdah.state.ms.us/articles/291/cotton-and-the-civil-war>.

The Economist. "The Future of Forever: A Report from DeBeers New Diamond Mine." February 25, 2017. <http://www.economist.com/news/international/21717369-production-worlds-most-valuable-gem-may-be-about-peak-report-de-beerss>

Friedman, Uri. The Atlantic. "How an Ad Campaign Invented the Diamond Engagement Ring." February 13, 2015. <https://www.theatlantic.com/international/archive/2015/02/how-an-ad-campaign-invented-the-diamond-engagement-ring/385376/>

Massachusetts Historical Society. "The Coming of the American Revolution 1764-1776: The Boston Tea Party." Retrieved from <http://www.masshist.org/revolution/teaparty.php>.

Massachusetts Historical Society. "Whereas our Nation." *The Massachusetts Gazette*, p. 2. Accessed July 2013 http://www.masshist.org/revolution/image-viewer.php?old=1&item_id=457&img_step=1&nmask=1&mode=large.

Touryalai, Halah. Forbes. "Ray-Ban, Oakley, Chanel Or Prada Sunglasses? They're All Made By This Obscure \$9B Company." July 2, 2013. <https://www.forbes.com/sites/halahtouryalai/2013/07/02/ray-ban-oakley-chanel-or-prada-sunglasses-theyre-all-made-by-this-obscure-9b-company/#237511b364d6>

Appendix C: Versioning History

This page provides a record of edits and changes made to this book since its initial publication in the B.C. Open Textbook Collection. Whenever edits or updates are made in the text, we provide a record and description of those changes here. If the change is minor, the version number increases by 0.01. If the edits involve substantial updates, the version number increases to the next full number.

The files posted by this book always reflect the most recent version. If you find an error in this book, please fill out the Report an Open Textbook Error form.

Version	Date	Change	Details
1.00	November 16, 2017	Book added to the B.C. Open Textbook Collection	
1.01	January 14, 2020	Figure numbers edited and Versioning History page added to Back Matter.	In-text references to figures in 4.5 Prince Controls were corrected.